

## SSC Multitasking Staff Model Paper

### PART –A GENERAL INTELLIGENCE & REASONING

**Directions:** In question no. 1 and 2,  
Select the related word from the given  
alternatives.

1. Botany: Plants: Anthropology?  
A) Women      B) Man  
C) Animals      D) Insects
2. Push: Pull: Throw?  
A) Jump      B) Collect  
C) Pick      D) Game
3. If  $5 \times 3 \times 6 = 2518$ ;  $3 \times 8 \times 4 = 932$ ,  
then  $4 \times 6 \times 8 = ?$   
A) 3632      B) 1648  
C) 4664      D) 4680

**Directions:** In questions no. 4 to 7, find  
the odd number / word from the given  
alternatives.

4. A) Mars      B) Sun  
C) Saturn      D) Mercury
5. A) 3:9      B) 7:49  
C) 2:8      D) 6:36

6. A) 1236      B) 2346  
C) 4566      D) 5686

7. A) Sweet      B) Salty  
C) Delicious      D) Sour

8. Which set of letters when  
sequentially placed at the gaps in  
the given letter series shall  
complete it?

-- aba- - ba - ab

- A) abbba      B) abbab
- C) baabb      D) bbaba

9. Arrange the following word as per  
the order in dictionary?

- 1) Obscure      2) Objective
- 3) Objection      4) Oblivion
- A) 3, 2, 4, 1      B) 3, 2, 1, 4
- C) 3, 4, 1, 2      D) 2, 1, 3, 4

**Directions:** In each question no. 10 to  
12, a series is given with one term  
missing. Find it.

10. Choose the correct alternative from the given ones that will complete the series.

7, 15, 29, 59, \_\_\_\_\_, 235

- A) 117                      B) 118  
C) 121                      D) 119

11. 17, 19, 15, 23, \_\_\_\_\_, 39

- A) 6                              B) 29  
C) 7                              D) 34

12. 3, 6, 10, \_\_\_\_\_, 21, 28

- A) 19                              B) 15  
C) 17                              D) 13

13. From the given alternative words, select the word which cannot be formed using the letters of the given word "DISINTEGRATION"

- A) INTERROGATE  
B) SIGNATURE  
C) INTERN  
D) SINGER

14. In a certain code language, 'PROBLEM' is written as MPERLOB. How will 'NUMBERS' be written in that code?

- A) SUNREMB    B) SNRUBME  
C) SNRUEMB    D) SNRUMED

15. If + means  $\div$ , X means +, - means X and  $\div$  means -. Then which of the following question is correct?

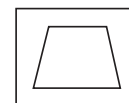
- A)  $36 \div 6 - 3 \times 2 = 20$   
B)  $36 \times 6 \div 3 + 4 = 24$   
C)  $36 + 6 \times 2 - 8 = 64$   
D)  $36 \div 6 + 6 \times 2 = 28$

16. A person walks facing with 10m and then he turn left and walks 5m. He again turns left and walks 10m. How far is he from his original position and towards which direction?

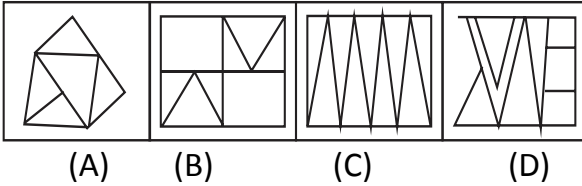
- A) 20m, South    B) 5m, West  
C) 10m, East     D) 15m, West

**Directions:** In each question no.17 to 18 among the four answer figures, find the embedded figure given below in the question figure?

17. Question figure



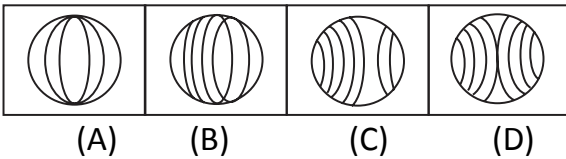
Answer figure



18. Question figure



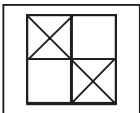
Answer figure



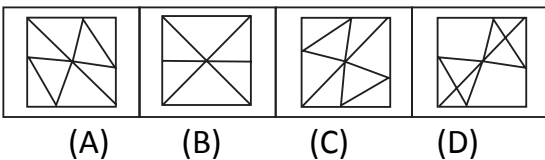
**Direction:** In question no.19 to 20 a mirror is placed on a line MN then which of the following answer figures is the correct image of the given figure?

19. Find out the number of triangle in the given pattern

Question figure



Answer figure



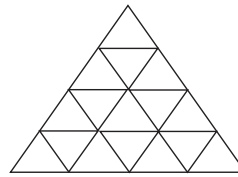
20. Question figure



Answer figure

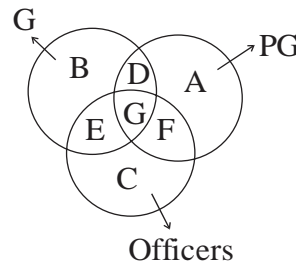


21. Find out the number of triangles in the given pattern.



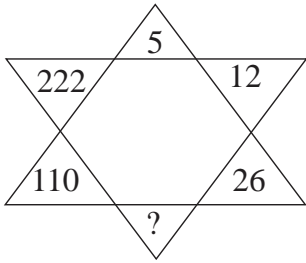
- A) 23
- B) 26
- C) 28
- D) 29

22. Given below are three figures represent graduates, post graduates and officers. Which part represents all the officers who are graduates and post graduates



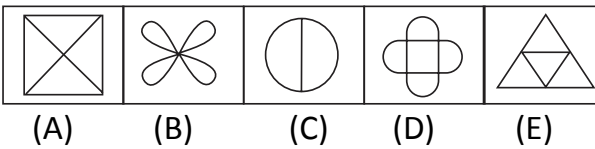
- A) G
- B) D
- C) B
- D) C

23. Select the missing number from the given responses?

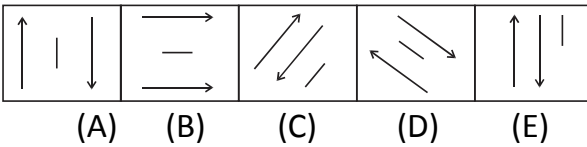


- A) 54                      B) 51  
C) 48                      D) 44

24. Find the odd Man out in the questions below.



25.



**For visually Handicapped candidates only**

**Direction:** In question no. 17 to 20

Find the number from the given

Alternatives

17. A) 12                      B) 13  
C) 15                      D) 18

18. A) 48, 60                      B) 125, 156, 25  
C) 68, 85                      D) 90, 135

19. A) 1056                      B) 2450  
C) 9900                      D) 4432

20. A) 4                      B) 1210  
C) 444                      D) 0

**Directions:** In question no. 21 and 22 a series is given with one term missing. Choose the correct the alternative from the given ones that will complete the series.

21. 12, 36, 18, 54, 27, ?  
A) 81                      B) 54  
C) 162                      D) 48

22. AC ZX DF WU GI T?  
A) Q                      B) R  
C) S                      D) P

23. Which will appear third in the dictionary?  
A) Sheep                      B) Sleep  
C) Scheme                      D) Strong

24. Which one set of letters when sequentially placed at the gaps in the given letters series shall complete?

a \_ \_ ab \_ \_ bcabc \_ \_ c

- A) abcabb      B) bccaab  
C) ababad      D) babbba

25. Find the wrong number in the series?

3, 7, 16, 36, 74

- A) 3              B) 7  
C) 16             D) 36

**PART – B**

**Quantitative Aptitude**

1. Evaluate  $\frac{1}{6} \times \sqrt{41 - \sqrt{21 + \sqrt{19 - \sqrt{9}}}}$

- A) 6                      B) 4  
C) 1                      D) 9

2. If  $(39)^3$  is subtracted from the square of a number, the answer so obtained is 10906 what is the number?

- A) 65025              B) 265  
C) 70225              D) 255

3. The pipes x and y can fill a cistern in 6 and 7 minutes, respectively. Starting with pipe x, both the pipes are opened alternately, each for 1 minute. In what time will they fill the cistern?

- A)  $6\frac{2}{7}$  Minutes      B)  $6\frac{3}{7}$  Minutes  
C)  $6\frac{5}{7}$  Minutes      D)  $6\frac{1}{7}$  Minutes

4. A, B and C can do a piece of work in 18, 24 and 36 days, respectively. They work

alternately, first day C, second day B and third day A, fourth day C and so on. How many days will be needed to complete the work like this way?

- A) 18                      B) 20  
C) 24                      D) 30

5. If the radius of the base of a cylinder is halved, keeping the height same. What is the ratio of the volumes of the reduced cylinder to that of the original cylinder?

- A) 1:4                      B) 4:1  
C) 2:5                      D) 1:5

6. How many bullets can be made out of a lead cylinder 56 cm high having a radius of 6cm. each bullet being 1.5cm in diameter?

- A) 4000                      B) 3584  
C) 3590                      D) 5000

7. On selling an article at Rs. 530, the gain is 20% more than the loss incurred on selling it at Rs. 475. In

order to gain 20% the selling price will be

- A) Rs.900                      B) Rs. 600  
C) Rs.700                      D) Rs.500

8. A trader has some watches in his stock. He marks his watches 20% above the cost price. He sold half the stock at marked price, one quarter at a discount of 20% on the marked price and the rest at a discount of 40% on the marked price what is his gain percent?

- A) 2%                      B) 5%  
C) 3%                      D) 8%

9. A dishonest dealer professes to sell his goods at cost price by he uses a weight of 800 gm for a kg weight find his gain percent

- A) 35%                      B) 56%  
C) 23%                      D) 25%

10. Find the percentage loss when the cost price and selling price of an article are in the ratio of 5:3

- A) 40%                      B) 35%  
C) 45%                      D) 26%

- 11.** Rs. 710 were divided amongst A, B and C in such a way that A had Rs.40 more than B and C had Rs.30 more than A. how much was C's share?  
A) Rs/-270      B) Rs/- 300  
C) Rs/-135      D) Rs/-235
- 12.** Two trains of lengths 50m and 65m are moving in the same direction at 18 m/s and 17 m/s respectively. Find the time taken by the faster train to cross the slower train.  
A) 100s      B) 114s  
C) 95s      D) 115s
- 13.** The average age of A and B is 36 years. The average age of B and C is 35 years and the average age of A and C is 29 years. Find out the age of A, after 10 years from now  
A) 30years      B) 45years  
C) 60years      D) 40years
- 14.** Find out the average of 4, 7, 10, 13.....28, 31.  
A) 17      B) 17.5  
C) 18      D) 18.5
- 15.** P, Q and R started a business, P invests 3 times as much as Q invests and Q invests  $\frac{2}{3}$ rd as much as R invests. Find the ratio of capitals of P, Q and R.  
A) 3:2:6      B) 2:6:3  
C) 6:2:3      D) 5:2:3
- 16.** In what time, does a sum of money become fourfold at the simple interest rate of 10% per annum?  
A) 40 years      B) 30 years  
C) 15 years      D) 25 years
- 17.** A private finance company A claims to be lending money at simple interest, But the company includes the interest every 6 months for calculating principal. If company A is charging an interest of 10%, the effective rate of interest after 1 year becomes.  
A) 10.25 %      B) 12.50 %  
C) 11.25 %      D) 10.75 %

18. A 820m long train is running at 126 km/h. In how much time will it cross a tunnel which is 580m long?

- A) 40s                      B) 25s
- C) 35s                      D) 45s

19. The sum of the four consecutive even numbers is 284. What would be the smallest number?

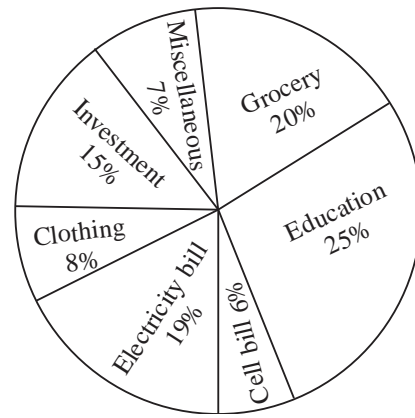
- A) 72                        B) 74
- C) 68                        D) 66

20. A tradesman marks his goods at 30% above the CP and allows purchases a discount of 15% for cash. What profit percent does he make?

- A) 11%                      B) 9.5%
- C) 13%                      D) 10.5%

**Directions (Q 21-25):** Observe the pie Chart given below and answer the Questions

**Budget estimated by a family for their monthly expenses.**



Total salary = Rs.32000 per month

21. What is the budget estimated by the family on clothing and grocery together?

- A) 8850                      B) 8960
- C) 8690                      D) 8550

22. The family actually paid Rs. 4672 on grocery. What is the different in the amount budgeted and spent on grocery?

- A) 1728                      B) 1672
- C) 467                        D) 1038

23. What is the difference in the amount estimated by the family on electricity bill and cell bill?

- A) 1920                      B) 4160
- C) 6080                      D) 8000



24. Due to marriage the family incurs miscellaneous expenditure of 3040 in total. How much is the increase in the amount under this head from that of the budgeted?

- A) 1738            B) 304            C) 800  
D) 224

25. The family saved Rs. 1920 on their electricity bill. As it was less than the estimated budget. What is the percentage of electricity bill amount of the total salary?

- A) 10.5%            B) 12%            C) 14.5%  
D) 13%

**PART –C**

**GENERAL AWARENESS**

1. Synagogue is the place of worship of \_\_\_\_\_  
A) Zoroastrianism    B) Taoism  
C) Judaism            D) Shintoism

2. Which of the following cities in India is considered the greenest?  
A) Delhi  
B) Thiruvananthapuram  
C) Bangalore  
D) Chandigarh

3. Sex hormones are \_\_\_\_\_  
A) Vitamins            B) Alkanes  
C) Carbohydrates    D) Steroids

4. When was a global network of daily temperature records created?  
A) Around 1890    B) Around 1920  
C) Around 1800    D) Around 1850

5. During respiration, energy is derived from  
A) ATP                B) Chlorophyll

C) RNA                      D) DNA

6. The fiber that will yield ammonia when destructively distilled is \_\_\_\_\_

- A) Wool                      B) Cellulose acetate  
C) Cotton                    D) Silk

7. Which of the following pairs is not correctly matched?

- A) Vitamin C - Scurvy  
B) Vitamin K - Clotting of blood  
C) Vitamin A - Night blindness  
D) Vitamin E - Rickets

8. Antiknock agent for petrol is \_\_\_\_\_

- A) Sodium hydroxide  
B) Addition of nitrogen  
C) Sodium benzoate  
D) Lead tetraethyl

9. A reduction reaction involves \_\_\_\_\_

- A) Addition of oxygen  
B) Addition of nitrogen  
C) Addition of hydrogen  
D) None of the above

10. Who among the following has been voted the BBC sports personality of 2013?

- A) Andy Murray  
B) Novak Djokovic  
C) Usain Bolt  
D) Rafael Nadal

11. Bina Refinery, which was dedicated to the nation in 2011, is located in

- A) Madhya Pradesh    B) Gujarat  
C) Orissa                      D) Manipur

12. As per the Boston consulting group's (BCG) 13<sup>th</sup> annual global wealth management report, which country has the highest density of millionaires?

- A) Qatar                      B) U.S.A  
C) England                  D) Singapore

13. The book "Tinderbox: The past And future of Pakistan" is written by-

- A) Jamil                      B) Khatija Akbar  
C) Khurram Iqbal        D) M.J. Akbar

- 14.** The “Sagar thermal power plant” is a proposed power plant coming up in which state?  
A) West Bengal      B) Bihar  
C) Andhra Pradesh    D) Odisha
- 15.** The first Secretary General of the United Nations was \_\_\_\_\_  
A) U Thant  
B) Dr. Kurt Waldheim  
C) Dag Hammarskjold  
D) Washington
- 16.** The Most literate union Territory in India is  
A) Chandigarh    B) Lakshadweep  
C) Delhi            D) Pondicherry
- 17.** Which among the following is not a minority community in India?  
A) Muslim        B) Christians  
C) Jainism        D) Buddhists
- 18.** What is the name of the currency of Bangladesh?  
A) Taka            B) Lek  
C) Dinar           D) Peso
- 19.** The leading Rice producer in the world is?  
A) China            B) India  
C) Indonesia      D) Bangladesh
- 20.** A gram of fertile Agricultural soil may contain bacteria up to  
A) Five million  
B) One billion and above  
C) Fifty thousand  
D) Five Lakhs
- 21.** Which one of these primates is closest to the modern man?  
A) Orangutan      B) Chimpanzee  
C) Gorilla          D) Gibbon
- 22.** The food chain of ecosystem is maintained by the activities of  
A) Decomposers    B) Predators  
C) Producers        D) Consumers
- 23.** The sex of a child is determined  
A) Six to seven weeks after conception  
B) In the third month of pregnancy  
C) At the time of sperm’s entry

- D) At the time of fertilization of ovum
- 24.** The iron and steel plant in Chhattisgarh is at  
A) Burampur      B) Salem  
C) Bilai            D) Bokaro
- 25.** Which country has a high density of population?  
A) India            B) Canada  
C) Sweden        D) Greenland
- 26.** Which year is called as the “Demographic Divide?”  
A) 1941            B) 1921  
C) 1901            D) 1931
- 27.** The land between two rivers is called \_\_\_\_\_  
A) Natural leaves  
B) Alluvial cones  
C) Braided stream  
D) Doab
- 28.** What is the name given to the smallest unit of data space available in a spread sheet
- software?  
A) Row            B) Block  
C) Cell            D) Pixel
- 29.** Who invented the modem?  
A) Apple Computers Inc.  
B) Digital Equipment Corporation  
C) Wang Laboratories Ltd.  
D) AT & T Information systems.
- 30.** What happen to the kinetic energy of gas molecules with rise of temperature?  
A) Remains same    B) Fluctuates  
C) Increases        D) Decreases
- 31.** In a pin whole camera, we usually get  
A) Erect impression  
B) Inverted impression  
C) Erect image  
D) Inverted image.
- 32.** The materials which are strongly attracted by magnet are called  
A) Ferro magnetic substances  
B) Universal substances  
C) Para – magnetic Substances  
D) Dia-magnetic Substance

- 33.** “Dry ICE” is the condensed form of
- A) Sulphur – tri – oxide
  - B) Carbon – dioxide
  - C) Highly cooled water
  - D) Oxygen
- 34.** The best way to maintain a natural equilibrium between the pest and predator is by using
- A) Insecticide
  - B) Biological control
  - C) Pesticides
  - D) Herbicides
- 35.** Violation of Rules of law arises mostly from
- A) Lack of checks and Balances
  - B) Executive Quasi Judicial powers
  - C) Limited franchise
  - D) Delegated legislation
- 36.** Which is the most effective means of executive control of administration?
- A) Financial administration
  - B) Political direction
  - C) Appointment and removal of top officials
  - D) Subordinate legislation
- 37.** The supreme court of India offers advice to the president on matters of legal, public or constitutional importance based on
- A) Article 148    B) Article 129
  - C) Article 147    D) Article 143
- 38.** Which of the following is the feature of monopolistic competition?
- A) Single firm
  - B) Large number of firms
  - C) Group of firms
  - D) None of the above
- 39.** The concept “Duopoly” was introduced by
- A) Sweezy        B) Malthus
  - C) Ricardo        D) Cournot
- 40.** Sick units are referred to
- A) SIA            B) DGTD
  - C) FIPB          D) BIFR

- 41.** The funds raised by the government within the country is known as
- A) Domestic budgetary source
  - B) Domestic banking source
  - C) Domestic saving source
  - D) Domestic monetary Source
- 42.** The BSE Sensex is based on how many stocks?
- A) 80                      B) 100
  - C) 30                      D) 50
- 43.** "Eutrophication" is associated with
- A) Nitrates and phosphates
  - B) Sewage
  - C) Silt load
  - D) Vegetation
- 44.** The surgery that was practiced in ancient India is known from the works of which of the following scholars?
- A) Atreya                  B) Sushruta
  - C) Charaka                D) Vagbhata
- 45.** Name the Mughal prince, who translated Bhagavat Gita into Persian?
- A) Dara Shikoh
  - B) Sulaiman Shikoh
  - C) Khusru
  - D) Murad
- 46.** Where did Buddha deliver his first sermon?
- A) Sarnath                B) Rajagriha
  - C) Kapilavastu        D) Bodhi – Gaya.
- 47.** "Prince of pilgrims" was the name attributed to
- A) Plutarch                B) Hiuen Tsang
  - C) Fa- Hien                D) I – Tsing
- 48.** Who was the founder of the Aligarh movement?
- A) Syed Amir Ali
  - B) Moulvichiragh Ali
  - C) Sir Syed Ahmed Khan
  - D) Abdul Halim Sharar
- 49.** The social contract theory deals with
- A) The purpose of state

- B) The origin of the state
- C) The nature of state
- D) The functions of state

- 50.** Non – Violence as taught and practiced by Mahatma Gandhi is rooted in the India Doctrine of
- A) Swaraj      B) Swadeshi
  - C) Satyagraha   D) Ahimsa

**PART – D**  
**GENERAL ENGLISH**

**Directions:** In Question No. 1 to 5, you have a passage with 5 questions. Read the passage carefully and choose the best answer to each question out of the four alternatives and mark it by blackening the appropriate oval in the answer sheet

**Passage**

That mixture in the English Government that harmony between kings, lords, and commons, did not always subsist England was – enslaved for a long series of years by the Romans, the Saxons, the Denes, and the French successively. William the conqueror particularly, ruled them with a rod of iron, he disposed as absolutely of the lives and fortunes of his conquered subjects as an stern monarch; and forbade, upon pain of death, the English either fire or candle in their house after eight 'o'clock: whether he did this to prevent their nocturnal meetings, or only to try, by

this odd and whimsical prohibition, how far it was possible for one man to extend his power over his fellow-creature. it is true, indeed, that the English had parliaments before and after William the conqueror and they boast of them, as though these assemblies then called parliaments, composed of ecclesiastical tyrants and of plunderers , entitled barons , had been the guardians of the public liberty and happiness.

- 1.** William the conqueror ruled English with a rod of iron means
  - 1) Harmonious for long periods
  - 2) Used rods of iron to rule them
  - 3) Used iron rods to rule lines on English map
  - 4) Ruled carefully and nicely
- 2.** The relationship between the king, lords, and commons has been
  - 1) Harmonious for long periods
  - 2) Never harmonious
  - 3) Rarely harmonious
  - 4) Harmonious for brief intervals.

- 3.** King William did not allow 'fire a candle' to the English people because
  - 1) There was no fire or candles in England then.
  - 2) He wanted to save them expenditure on fire and candles
  - 3) He wanted to test his control on them
  - 4) He wanted to see if they control the desire for fire and candles
- 4.** The word ecclesiastical tyrants. As used in the passage, means.
  - 1) Tyrants who are elastic in nature
  - 2) Tyrants who are religious in nature
  - 3) Tyrants who are priests of the church
  - 4) Tyrants who frighten the priests of the church
- 5.** According to the paragraph the English parliaments
  - 1) Have been guardians of public liberty and happiness



- 2) Have been plunderers of public liberty and happiness
- 3) Have been rightly thought of as guardians of public liberty and happiness
- 4) Have been wrongly thought of as guardian of public liberty and happiness

**Directions:** In question No. 6 to 15, some parts of the sentences have errors and some are correct, find out which part of a sentence has an error and blacken the oval corresponding to the appropriate letter (A, B, C) if a sentence is free from error, blacken the oval corresponding to (D) in the answer sheet.

6. I have been informed that / Mr. Ellenton visits Rajasthan/ Following months / No error  
(A) (B) (C) (D)
7. He claims to be a scientist but in reality he/ Does not know even/ ABC of science /No error  
(A) (B) (C) (D)

8. Parul was also invited / To the lunch hosted by the queen / At her cottage yesterday /No error  
(A) (B) (C) (D)
9. The Panjabi / Is a very sweet language / Of Punjabi /No error  
(A) (B) (C) (D)
10. Sarika helps / Poor and/The sick people happily / No error  
(A) (B) (C) (D)
11. Riya went home/ Very late/last Monday/ No error  
(A) (B) (C) (D)
12. Chinese / Are fond of / Cowman/ No error  
(A) (B) (C) (D)
13. The intelligent / should hell / the duffer/No error  
(A) (B) (C) (D)
14. It is a most/ Beautiful/ Painting of the gallery /No error  
(A) (B) (C) (D)

15. The teacher/ Called a last boy/  
Standing in the queue/No error  
(A) (B) (C) (D)

**Directions:** In question no. 16 to 25. Sentence is given with blanks to be filled in with appropriate words. Four alternative are suggested for each question, choose the correct alternative out of the four and indicate it by blackening the appropriate oval in the answer sheet

16. An employment advertisement should .....the number of vacancies  
1) Provide 2) Declare  
3) Contain 4) Specify
17. The terrorist made a vain attempt to .....the bridge  
1) Blow down 2) Blow up  
3) Blow over 4) Blow out
18. The building was so old and dilapidated that it was not .....  
1) Habitation 2) Habitat  
3) Habitant 4) Habitable

19. All the people involved in that issue feel a great .....to his suggestion  
1) Contradiction 2) Adherence  
3) Repugnant 4) Objection
20. .... You meet my son in the market; ask him to come home at once  
1) Should 2) Would  
3) White 4) Will
21. Please do not .....time on such.....issues  
1) Take, significant  
2) Spend, important  
3) Take, vital  
4) Waste, trivial
22. Every \_\_\_\_\_ person is careful not to lose his \_\_\_\_\_  
1) Quit, power  
2) Cheerful, grief  
3) Balanced, temper  
4) Generous, wealth
23. He looked \_\_\_\_\_, but his dynamism was \_\_\_\_\_

- 1) Handsome, slow
- 2) Youthful, quick
- 3) Fearful, apparent
- 4) Aged, praiseworthy

**24.** It is difficult to cross the

\_\_\_\_\_

- 1) Barrier            2) Berrier
- 3) Brier             4) Barrier

**25.** My friend says that he drinks tea because it is the best

\_\_\_\_\_ in the world

- 1) Fluid             2) Drink
- 3) Beverage       4) Liquid

**Directions:** in the question no. 26 to 28, out of the four alternatives, choose the one which best expresses the meaning of the given word and mark it in the answer sheet.

**26.** Muse

- 1) Pounder        2) Infect
- 3) Appeace        4) Taint

**27.** Officious

- 1) Pushing        2) Modest
- 3) Stubborn       4) Mystic

**28.** in Toto

- 1) In the heart
- 2) In peace
- 3) With in the walls
- 4) Entirely

**Directions:** in question no. 29 to 31, choose the word opposite in meaning to the given word and mark it in the answer sheet.

**29.** REVEAL

- 1) Stop             2) Conceal
- 3) Present         4) Pending

**30.** ELATED

- 1) Afraid            2) Poor
- 3) Happy            4) Depressed

**31.** SURVIVED

- 1) Scratched       2) Died
- 3) Lived             4) Fell

**Directions:** in question no. 32 to 34, four alternatives are given for the idiom/phrase underlined in the sentence. Choose the alternative which best expresses the meaning of

the idiom/ phrase and mark it in answer sheet.

**32.** Sachin is an indifferent student.

He is often all at sea

- 1) In a state of shock
- 2) Very knowledgeable
- 3) In danger
- 4) Completely confused.

**33.** I am tired of the rat race in the corporate sector.

- 1) Corruption
- 2) Misery
- 3) Unpleasant sight
- 4) Fierce competition

**34.** I am waiting for the old man to kick the bucket so that I can get his money

- 1) To conclude      2) To kill
- 3) To die            4) To absolve

**Directions:** In question no. 35 to 40 there are four different words out of which one is **correctly spelt**. Find the **correctly spelt** word and indicate it by blackening the appropriate oval in the answer sheet

- 35.** 1) Pompous      2) Populous
- 3) Prejudiced    4) Pretentious

- 36.** 1) Dispose        2) Depose
- 3) Demote        4) Denote

- 37.** 1) Procession    2) Passion
- 3) Possession    4) Profession

- 38.** 1) Efficient        2) Reticent
- 3) Magnificent    4) Deficient

- 39.** 1) Altogether    2) Alright
- 3) Almighty       4) Allottee

- 30.** 1) Pretense        2) Affiance
- 3) Dense            4) Difference

**Directions:** In question no. 41 to 45 a sentence / part of sentence is underlined. Below are given alternative to the underlined part at 1, 2 and 3 which may improve the sentence. Choose the correct alternative. In case no improvement is needed your answer is 4

- 41.** It has always been advisable to refrain from smoking

- 1) Was always
- 2) Would have always be
- 3) Is always
- 4) No improvement required

**42.** There are many newly emergent fields in information technology and electronics

- 1) New emerging
- 2) Newly emerging
- 3) Newly emergency
- 4) No improvement required

**43.** Income tax is generally associated for one's annual income

- 1) Dependent to one's
- 2) Associated with once
- 3) Related to one's
- 4) No improvement required

**44.** If you are being worried our performance will be hampered

- 1) Are worried
- 2) Have been worried
- 3) Had worries
- 4) No improvement required

**45.** In view of delay in rescue operation, had better we prepared for a long, hard day

- 1) We should be prepared
- 2) We should better be prepared
- 3) We had been better prepared
- 4) No improvement required

**Directions:** in question no. 46 to 50 out of four alternative choose the one which can be substituted for the given words

**46.** Accustom

- 1) Assign
- 2) Abjure
- 3) Necessity
- 4) Towe

**47.** Brutal

- 1) Grapple
- 2) Prokmissed
- 3) Merciful
- 4) Depress

**48.** Garrulous

- 1) Sullen
- 2) Reserved
- 3) Orientation
- 4) Outspokes

**49.** Precarious

- 1) Tranquil
- 2) Safe
- 3) Waterful
- 4) Dangerous

**50.** Unifasten

- 1) Conceal
- 2) Telecast
- 3) Qualm
- 4) None of these