

REGISTRATION NUMBER
EXAM DATE : 7-July-2017
EXAM NAME : SSC Examination
TOTAL MARKS : 200

EXAM START TIME : 10:00:00
EXAM DURATION : 02:00 Hrs
TOTAL NO OF QUESTIONS : 200

QID : 1 - In the following question, select the related word from the given alternatives.

Pen : Write :: ? : ?

निम्नलिखित प्रश्न में दिए गए विकल्पों में से संबंधित शब्द को चुनिए।

कलम : लिखना :: ? : ?

Options:

1) Erase : Rubber

मिटाना : रबर

2) Cup : Liquid

कप : तरल

3) Pencil : Wood

पेंसिल : लकड़ी

4) Knife : Cut

चाकू : काटना

Correct Answer: Knife : Cut

चाकू : काटना

Candidate Answer: Knife : Cut

चाकू : काटना

QID : 2 - In the following question, select the related word from the given alternatives.

Create : Destroy :: ? : ?

निम्नलिखित प्रश्न में दिए गए विकल्पों में से संबंधित शब्द को चुनिए।

बनाना : तोड़ना :: ? : ?

Options:

1) Thin : Small

पतला : छोटा

2) Long : Short

लम्बा : छोटा

3) Fat : Huge

मोटा : बड़ा

4) Long : Topmost

लम्बा : सबसे ऊपर

Correct Answer: Long : Short

लम्बा : छोटा

Candidate Answer: Long : Short

लम्बा : छोटा

QID : 3 - In the following question, select the related letters from the given alternatives.

SNOP : ONSP :: CLAY : ?

निम्नलिखित प्रश्न में दिए गए विकल्पों में से संबंधित अक्षरों को चुनिए।

SNOP : ONSP :: CLAY : ?

Options:

1) ALCY

2) LCYA

3) LYCA

4) ACLY

Correct Answer: ALCY

Candidate Answer: ALCY

01/08/2017

Staff Selection Commission

QID : 4 - In the following question, select the related letters from the given alternatives.

PAN : TDM :: ? : ?

निम्नलिखित प्रश्न में दिए गए विकल्पों में से संबंधित अक्षरों को चुनिए।

PAN : TDM :: ? : ?

Options:

- 1) GIL : KMG
- 2) HOT : KLG
- 3) MAN : PAM
- 4) SIP : WLO

Correct Answer: SIP : WLO

Candidate Answer: SIP : WLO

QID : 5 - In the following question, select the related number from the given alternatives.

23 : 72 :: 38 : ?

निम्नलिखित प्रश्न में दिए गए विकल्पों में से संबंधित संख्या को चुनिए।

23 : 72 :: 38 : ?

Options:

- 1) 110
- 2) 117
- 3) 123
- 4) 112

Correct Answer: 117

Candidate Answer: 117

QID : 6 - In the following question, select the related number from the given alternatives.

62 : 145 :: ? : ?

निम्नलिखित प्रश्न में दिए गए विकल्पों में से संबंधित संख्या को चुनिए।

62 : 145 :: ? : ?

Options:

- 1) 79 : 168
- 2) 119 : 226
- 3) 167 : 291
- 4) 34 : 122

Correct Answer: 119 : 226

Candidate Answer: [NOT ANSWERED]

QID : 7 - In the following question, select the odd word from the given alternatives.

निम्नलिखित प्रश्न में दिए गए विकल्पों में से विषम शब्द को चुनिए।

Options:

- 1) Sea
समुद्र
- 2) River
नदी
- 3) Ocean
महासागर
- 4) Swimming Pool
तरणताल

Correct Answer: Swimming Pool

तरणताल

Candidate Answer: Swimming Pool

तरणताल

QID : 8 - In the following question, select the odd word from the given alternatives.

निम्नलिखित प्रश्न में दिए गए विकल्पों में से विषम शब्द को चुनिए।

Options:

- 1) Red
लाल
- 2) White
सफेद
- 3) Blue
नीला
- 4) Yellow
पीला

Correct Answer: White

सफेद

01/08/2017

Staff Selection Commission

Candidate Answer: White
सफेद

QID : 9 - In the following question, select the odd letters from the given alternatives.

निम्नलिखित प्रश्न में दिए गए विकल्पों में से विषम अक्षरों को चुनिए।

Options:

1) NQTW

2) PSVZ

3) WZCF

4) BEHK

Correct Answer: PSVZ

Candidate Answer: PSVZ

QID : 10 - In the following question, select the odd letters from the given alternatives.

निम्नलिखित प्रश्न में दिए गए विकल्पों में से विषम अक्षरों को चुनिए।

Options:

1) XTCG

2) NJMQ

3) EALZ

4) SOHL

Correct Answer: EAUZ

Candidate Answer: NJMQ

QID : 11 - In the following question, select the odd number from the given alternatives.

निम्नलिखित प्रश्न में दिए गए विकल्पों में से विषम संख्या को चुनिए।

Options:

1) 61

2) 51

3) 97

4) 89

Correct Answer: 51

Candidate Answer: [NOT ANSWERED]

QID : 12 - In the following question, select the odd number pair from the given alternatives.

निम्नलिखित प्रश्न में दिए गए विकल्पों में से विषम संख्या युग्म को चुनिए।

Options:

1) 13 - 2028

2) 11 - 1210

3) 7 - 336

4) 9 - 648

Correct Answer: 7 - 336

Candidate Answer: 13 - 2028

QID : 13 - Arrange the given words in the sequence in which they occur in the dictionary.

1. Mobile
2. Mandate
3. Mandarin
4. Monkey
5. Master

निम्नलिखित शब्दों को शब्दकोश में आने वाले क्रम के अनुसार लिखें।

1. Mobile
2. Mandate
3. Mandarin
4. Monkey
5. Master

Options:

1) 32514

2) 31254

3) 35241

4) 35214

Correct Answer: 32514

Candidate Answer: 32514

01/08/2017

Staff Selection Commission

QID : 14 - Arrange the given words in the sequence in which they occur in the dictionary.

1. Drink
2. Drinking
3. Drive
4. Dictionary
5. Dracula

निम्नलिखित शब्दों को शब्दकोश में आने वाले क्रम के अनुसार लिखें।

1. Drink
2. Drinking
3. Drive
4. Dictionary
5. Dracula

Options:

- 1) 45123
- 2) 41532
- 3) 42513
- 4) 45213

Correct Answer: 45123

Candidate Answer: 45123

QID : 15 - In the following question, which one set of letters when sequentially placed at the gaps in the given letter series shall complete it?

_ ml _ nl _ mlm _ l _ mlmn _

निम्नलिखित प्रश्न में अक्षरों का कौन सा समूह खाली स्थानों पर क्रमवार रखने से दी गई अक्षर श्रृंखला को पूरा करेगा?

_ ml _ nl _ mlm _ l _ mlmn _

Options:

- 1) nrmml
- 2) nmlnml
- 3) mnlm
- 4) nmmml

Correct Answer: nrmml

Candidate Answer: nmmml

QID : 16 - A series is given with one term missing. Select the correct alternative from the given ones that will complete the series.

FGC, HHA, JIY, ?

एक अनुक्रम दिया गया है, जिसमें से एक पद लुप्त है। दिए गए विकल्पों में से वह सही विकल्प चुनिए, जो अनुक्रम को पूरा करे।

FGC, HHA, JIY, ?

Options:

- 1) KKW
- 2) LJW
- 3) LIX
- 4) KIX

Correct Answer: LJW

Candidate Answer: LJW

QID : 17 - In the following question, select the missing number from the given series.

2, 6, 4, 9, 8, 13, 16, 18, 32, ?

निम्नलिखित प्रश्न में दिए गए विकल्पों में से लुप्त अंक जात कीजिए।

2, 6, 4, 9, 8, 13, 16, 18, 32, ?

Options:

- 1) 24
- 2) 26
- 3) 22
- 4) 28

Correct Answer: 24

Candidate Answer: 24

QID : 18 - In the following question, select the missing number from the given series.

534, 543, 559, 584, 620, ?

निम्नलिखित प्रश्न में दिए गए विकल्पों में से लुप्त अंक जात कीजिए।

534, 543, 559, 584, 620, ?

Options:

- 1) 648
- 2) 676
- 3) 669
- 4) 671

01/08/2017

Staff Selection Commission

Correct Answer: 669**Candidate Answer:** 669**QID : 19** - The ratio of present ages of Sumit and Amit is 3 : 4. If the age of Sumit 20 years hence will be 62 years, then what is the present age (in years) of Amit?

सुमित तथा अमित की वर्तमान आयु का अनुपात 3 : 4 है। यदि 20 वर्षों पश्चात सुमित की आयु 62 वर्ष होगी, तो अमित की वर्तमान आयु (वर्षों में) क्या है?

Options:

- 1) 56
- 2) 64
- 3) 60
- 4) 52

Correct Answer: 56**Candidate Answer:** [NOT ANSWERED]**QID : 20** - In a line of boys Aman is 12th from top and Baman is 18th from bottom. If there are 6 boys between Aman and Baman, then how many maximum boys are there in the row?

लड़कों की एक पंक्ति में अमन ऊपर से 12 वें स्थान तथा बमन नीचे से 18 वें स्थान पर है। यदि अमन तथा बमन के मध्य में 6 लड़के हैं, तो पंक्ति में अधिकतम कितने लड़के हैं?

Options:

- 1) 34
- 2) 36
- 3) 35
- 4) 37

Correct Answer: 36**Candidate Answer:** 35**QID : 21** - 6 boys P, Q, R, S, T and U are standing in a row facing north. P and Q cannot be either at 1st or 2nd place. R and S will always be together and R must be at one of the ends. R doesn't have S to his right. Who is standing on the west end?

6 लड़के P, Q, R, S, T तथा U एक पंक्ति में उत्तर की ओर मुख करके खड़े हैं। P तथा Q पहले या दूसरे स्थान पर नहीं हैं। R तथा S हमेशा साथ है तथा R एक छोर पर है। R के दायें S नहीं हैं। पश्चिमी छोर पर कौन खड़ा है?

Options:

- 1) S
- 2) S or U
S या U
- 3) T
- 4) T or U
T या U

Correct Answer: T or U

T या U

Candidate Answer: [NOT ANSWERED]**QID : 22** - In the following question, select the word which cannot be formed using the letters of the given word.**BLENDING**

निम्नलिखित विकल्पों में से वह शब्द चुनिए जो दिए गए शब्द के अक्षरों का प्रयोग करके नहीं बनाया जा सकता।

BLENDING**Options:**

- 1) BLEND
- 2) BALD
- 3) LEND
- 4) BINGE

Correct Answer: BALD**Candidate Answer:** BALD**QID : 23** - In the following question, select the word which cannot be formed using the letters of the given word.**TRADITIONAL**

निम्नलिखित विकल्पों में से वह शब्द चुनिए जो दिए गए शब्द के अक्षरों का प्रयोग करके नहीं बनाया जा सकता।

TRADITIONAL**Options:**

- 1) NATIONAL
- 2) TRAIN
- 3) LAND
- 4) RATION

Correct Answer: NATIONAL**Candidate Answer:** NATIONAL

01/08/2017

Staff Selection Commission

QID : 24 - In a certain code language, "UPDATE" is written as "FRWCRY" and "GREATS" is written as "GTIQRV". How is "BLENDY" written in that code language?

एक विशिष्ट कोड भाषा में, "UPDATE" को "FRWCRY" लिखा जाता है तथा "GREATS" को "GTIQRV" लिखा जाता है। इस कोड भाषा में "BLENDY" को किस प्रकार लिखा जाएगा?

Options:

- 1) DMGWBL
- 2) CJZAFP
- 3) ZJCPFA
- 4) GNDWBL

Correct Answer: GNDWBL

Candidate Answer: [NOT ANSWERED]

QID : 25 - In a certain code language, "FRAME" is written as "OUGVH" and "STONY" is written as "IVUXU". How is "RESTS" written in that code language?

एक विशिष्ट कोड भाषा में, "FRAME" को "OUGVH" लिखा जाता है तथा "STONY" को "IVUXU" लिखा जाता है। इस कोड भाषा में "RESTS" को किस प्रकार लिखा जाएगा?

Options:

- 1) CBYIT
- 2) ABDHS
- 3) EAZHS
- 4) EAZIT

Correct Answer: CBYIT

Candidate Answer: [NOT ANSWERED]

QID : 26 - If "+" denotes "multiplied by", "-" denotes "added to", "x" denotes "divided by" and "÷" denotes "subtracted from", then which of the following equation is true?

यदि "+" का अर्थ "गुणा" है, "-" का अर्थ "जोड़" है, "x" का अर्थ "भाग" है तथा "÷" का अर्थ "घटाव" है, तो निम्नलिखित में से कौन सा समीकरण सही है?

Options:

- 1) $30 \div 8 \times 4 - 6 + 1 = 32$
- 2) $8 + 5 - 20 \times 4 \div 6 = 41$
- 3) $12 - 12 \div 6 \times 6 + 3 = 21$
- 4) $6 + 7 \times 3 - 4 \div 6 = 26$

Correct Answer: $12 - 12 \div 6 \times 6 + 3 = 21$

Candidate Answer: $12 - 12 \div 6 \times 6 + 3 = 21$

QID : 27 - In the following question, by using which mathematical operators will the expression become correct?

$35 ? 5 ? 10 ? 15 ? 4$

निम्नलिखित प्रश्न में, दिए गए विकल्पों में से किन गणितीय संक्रियाओं का प्रयोग करने से दिया गया समीकरण सही हो जाएगा?

$35 ? 5 ? 10 ? 15 ? 4$

Options:

- 1) $\div, +, =$ and \times
 $\div, +, =$ तथा \times
- 2) $\times, \div, >$ and \times
 $\times, \div, >$ तथा \times
- 3) $\div, \times, >$ and \times
 $\div, \times, >$ तथा \times
- 4) $\div, \times, <$ and $+$
 $\div, \times, <$ तथा $+$

Correct Answer: $\div, \times, >$ and \times

$\div, \times, >$ तथा \times

Candidate Answer: [NOT ANSWERED]

QID : 28 - If $34 \times 15 = 495$ and $43 \times 12 = 504$, then $98 \times 17 = ?$

यदि $34 \times 15 = 495$ तथा $43 \times 12 = 504$, तो $98 \times 17 = ?$

Options:

- 1) 1649
- 2) 1683
- 3) 1763
- 4) 1751

Correct Answer: 1649

Candidate Answer: [NOT ANSWERED]

QID : 29 - If 26 (52) 8 and 48 (192) 16, then what is the value of 'A' in A (175) 14?

यदि 26 (52) 8 तथा 48 (192) 16 हो, तो A (175) 14 में, 'A' का मान क्या है?

01/08/2017

Staff Selection Commission

Options:

- 1) 50
- 2) 25
- 3) 35
- 4) 40

Correct Answer: 50**Candidate Answer:** 25**QID : 30 -**

In the following question, select the number which can be placed at the sign of question mark (?) from the given alternatives.

निम्नलिखित प्रश्न में दिए गए विकल्पों में से प्रश्न चिन्ह (?) के स्थान पर आने वाली संख्या को चुनिए।

8	6	12	216
4	22	3	?
7	13	5	191

Options:

- 1) 152
- 2) 184
- 3) 166
- 4) 162

Correct Answer: 166**Candidate Answer:** [NOT ANSWERED]**QID : 31 -**

In the following question, select the number which can be placed at the sign of question mark (?) from the given alternatives.

निम्नलिखित प्रश्न में दिए गए विकल्पों में से प्रश्न चिन्ह (?) के स्थान पर आने वाली संख्या को चुनिए।

4	5	6	125
8	9	7	513
11	?	6	536

Options:

- 1) 7
- 2) 10
- 3) 9
- 4) 8

Correct Answer: 8**Candidate Answer:** [NOT ANSWERED]

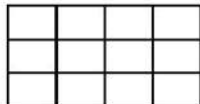
01/08/2017

Staff Selection Commision

QID : 32 -

How many rectangles are there in the given figure?

दी गई आकृति में कितने आयत हैं?



Options:

1) 60

2) 40

3) 80

4) 76

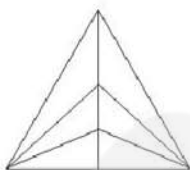
Correct Answer: 60

Candidate Answer: [NOT ANSWERED]

QID : 33 -

How many triangles are there in the given figure?

दी गई आकृति में कितने त्रिभुज हैं?



Options:

1) 13

2) 14

3) 12

4) 15

Correct Answer: 15

Candidate Answer: 14

01/08/2017

Staff Selection Commission

QID : 34 - In each of the following question below are given some statements followed by some conclusions. Taking the given statements to be true even if they seem to be at variance from commonly known facts, read all the conclusions and then decide which of the given conclusion logically follows the given statements.

Statements:

- I. All grapes are green.
II. Some green are hard.

Conclusions:

- I. Some green are grapes.
II. Some hard are grapes.
III. No grape is hard.

नीचे दिए गए प्रत्येक प्रश्न में कुछ कथन और उनके बाद उन कथनों पर आधारित कुछ निष्कर्ष दिए गए हैं, हालांकि उनमें सामान्य ज्ञात तथ्यों से भिन्नता हो सकती है। सभी निष्कर्ष पढ़ें और फिर निर्धारित करें कि दिए गए कौन से निष्कर्ष, दिए गए कथनों के आधार पर युक्तिसंगत हैं।

कथन:

- I. सभी अंगूर हरे हैं।
II. कुछ हरे सख्त हैं।

निष्कर्ष:

- I. कुछ हरे अंगूर हैं।
II. कुछ सख्त अंगूर हैं।
III. कोई अंगूर सख्त नहीं है।

Options:

- 1) Only conclusion (I) follows
केवल निष्कर्ष (I) सही है
2) Only conclusion (I) and (II) follow
केवल निष्कर्ष (I) तथा (II) सही हैं
3) Only conclusion (I) and (III) follow
केवल निष्कर्ष (I) तथा (III) सही हैं
4) All conclusions follow
सभी निष्कर्ष सही हैं

Correct Answer: Only conclusion (I) follows

केवल निष्कर्ष (I) सही है

Candidate Answer: Only conclusion (I) and (II) follow

केवल निष्कर्ष (I) तथा (II) सही हैं

QID : 35 - In each of the following question below are given some statements followed by some conclusions. Taking the given statements to be true even if they seem to be at variance from commonly known facts, read all the conclusions and then decide which of the given conclusion logically follows the given statements.

Statements:

- I. All cars are black
II. No black is shining.

Conclusions:

- I. Some cars are shining.
II. No car is shining.
III. No shining is car.

नीचे दिए गए प्रत्येक प्रश्न में कुछ कथन और उनके बाद उन कथनों पर आधारित कुछ निष्कर्ष दिए गए हैं, हालांकि उनमें सामान्य ज्ञात तथ्यों से भिन्नता हो सकती है। सभी निष्कर्ष पढ़ें और फिर निर्धारित करें कि दिए गए कौन से निष्कर्ष, दिए गए कथनों के आधार पर युक्तिसंगत हैं।

कथन:

- I. सभी गाड़ियाँ काली हैं।
II. कोई काला चमकीला नहीं है।

निष्कर्ष:

- I. कुछ गाड़ियाँ चमकीली हैं।
II. कोई गाड़ी चमकीली नहीं है।
III. कोई चमकीली गाड़ी नहीं है।

Options:

- 1) Only conclusion (I) and (II) follow
केवल निष्कर्ष (I) तथा (II) सही हैं
2) Only conclusion (II) and (III) follow
केवल निष्कर्ष (II) तथा (III) सही हैं
3) Only conclusion (I) and (III) follow
केवल निष्कर्ष (I) तथा (III) सही हैं
4) All conclusions follow
सभी निष्कर्ष सही हैं

Correct Answer: Only conclusion (II) and (III) follow

केवल निष्कर्ष (II) तथा (III) सही हैं

Candidate Answer: Only conclusion (I) and (III) follow

केवल निष्कर्ष (I) तथा (III) सही हैं

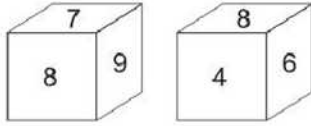
01/08/2017

Staff Selection Commision

QID : 36 -

Two position of a cube are shown below.
What will come opposite to face containing
'9'?

नीचे एक घन की दो अवस्थाएँ दर्शायी गयी हैं।
'9' युक्त फलक के विपरीत क्या आयेगा?



Options:

1) 7

2) 4

3) 6

4) 4 or 6

4 अथवा 6

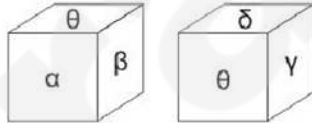
Correct Answer: 4

Candidate Answer: 4

QID : 37 -

Two position of a cube are shown below.
What will come opposite to face containing
' α '?

नीचे एक घन की दो अवस्थाएँ दर्शायी गयी हैं।
' α ' युक्त फलक के विपरीत क्या आयेगा?



Options:

1) γ 2) θ 3) δ 4) γ or δ γ अथवा δ Correct Answer: γ

Candidate Answer: [NOT ANSWERED]

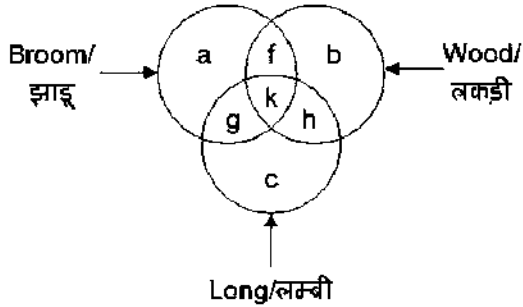
01/08/2017

Staff Selection Commission

QID : 38 -

In the given figure, which letter represents broom, which is wood but not long?

दी गई आकृति में, कौन सा अक्षर झाड़ू, जो लकड़ी है लेकिन लम्बी नहीं है, को दर्शाता है?



Options:

- 1) h
- 2) g
- 3) f
- 4) k

Correct Answer: f

Candidate Answer: f

QID : 39 - Identify the diagram that best represents the relationship among the given classes.

Tree, Branches, Root

वह आरेख चुनिए जो नीचे दिए गए वर्गों के बीच के संबंध का सही निरूपण करता है।

पेड़, शाखाएं, जड़

Options:

- 1)
- 2)
- 3)
- 4)

Correct Answer:



01/08/2017

Staff Selection Commission

Candidate Answer:



QID : 40 - Identify the diagram that best represents the relationship among the given classes.

Shirt, Trouser, Clothes

वह आरेख चुनिए जो नीचे दिए गए वर्गों के बीच के संबंध का सही निरूपण करता है।

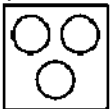
कमीज़, पतलून, कपड़े

Options:

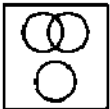
1)



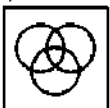
2)



3)



4)



Correct Answer:



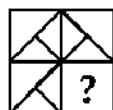
Candidate Answer:



QID : 41 -

Which answer figure will complete the pattern in the question figure?

कौन सी उत्तर आकृति प्रश्न आकृति के प्रतिरूप को पूरा करेगी?

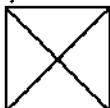


01/08/2017

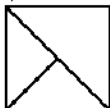
Staff Selection Commision

Options:

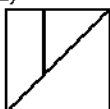
1)



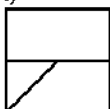
2)



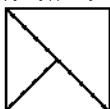
3)



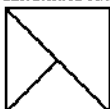
4)



Correct Answer:



Candidate Answer:



QID : 42 -

Which answer figure will complete the pattern in the question figure?

कौन सी उत्तर आकृति प्रश्न आकृति के प्रतिरूप को पूरा करेगी?

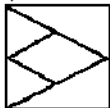


01/08/2017

Staff Selection Commission

Options:

1)



2)



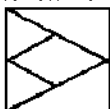
3)



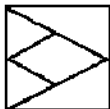
4)



Correct Answer:



Candidate Answer:



QID : 43 -

From the given answer figure, select the one in which the question figure is hidden/embedded.

दी गई उत्तर आकृतियों में से उस उत्तर आकृति को चुनिए जिस में प्रश्न आकृति निहित है।

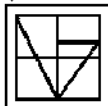


01/08/2017

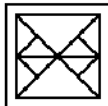
Staff Selection Commission

Options:

1)



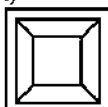
2)



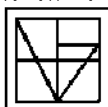
3)



4)



Correct Answer:



Candidate Answer:



QID : 44 -

From the given answer figure, select the one in which the question figure is hidden/embedded.

दी गई उत्तर आकृतियों में से उस उत्तर आकृति को चुनिए जिस में प्रश्न आकृति निहित है।




01/08/2017

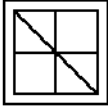
Staff Selection Commission

Options:

1)



2)



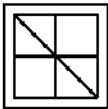
3)



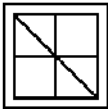
4)



Correct Answer:



Candidate Answer:



Q10 : 45 -

A piece of paper is folded and punched as shown below in the question figures. From the given answer figures, indicate how it will appear when opened?

नीचे के प्रश्न आकृतियों में दिखाए अनुसार कागज को मोड़कर छेदने तथा खोलने के बाद वह किस उत्तर आकृति जैसा दिखाई देगा?




01/08/2017


Staff Selection Commission

Options:

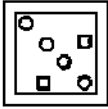
1)




2)




3)




4)



Correct Answer:



Candidate Answer:



QID : 46 -

A piece of paper is folded and punched as shown below in the question figures. From the given answer figures, indicate how it will appear when opened?

नीचे के प्रश्न आकृतियों में दिखाए अनुसार कागज को मोड़कर छेदने तथा खोलने के बाद वह किस उत्तर आकृति जैसा दिखाई देगा?



01/08/2017

Staff Selection Commision

Options:

1)



2)



3)



4)



Correct Answer:



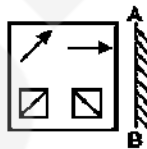
Candidate Answer:



QID : 47 -

If a mirror is placed on the line AB, then which of the answer figures is the right image of the given figure?

यदि एक दर्पण को AB रेखा पर रखा जाए, तो दी गई उत्तर आकृतियों में से कौन सी आकृति प्रश्न आकृति की सही प्रतिबिम्ब होगी?

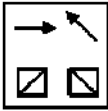


01/08/2017

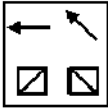
Staff Selection Commision

Options:

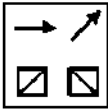
1)



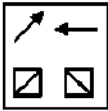
2)



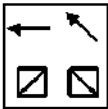
3)



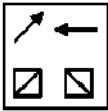
4)



Correct Answer:



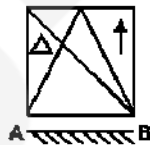
Candidate Answer:



QID : 48 -

If a mirror is placed on the line AB, then which of the answer figures is the right image of the given figure?

यदि एक दर्पण को AB रेखा पर रखा जाए, तो दी गई उत्तर आकृतियों में से कौन सी आकृति प्रश्न आकृति की सही प्रतिबिम्ब होगी?



01/08/2017

Staff Selection Commission

Options:

1)



2)



3)



4)



Correct Answer:



Candidate Answer:



QID : 49 -

A word is represented by only one set of numbers as given in any one of the alternatives. The sets of numbers given in the alternatives are represented by two classes of alphabets as shown in the given two matrices. The columns and rows of **Matrix-I** are numbered from 0 to 4 and that of **Matrix-II** are numbered from 5 to 9. A letter from these matrices can be represented first by its row and next by its column, for example, 'E' can be represented by 10, 22, etc., and 'O' can be represented by 56, 78, etc. Similarly, you have to identify the set for the word "HALT".

एक शब्द केवल एक संख्या-समूह द्वारा दर्शाया गया है, जैसा कि विकल्पों में से किसी एक में दिया गया है। विकल्पों में दिए गए संख्या-समूह अक्षरों के दो वर्गों द्वारा दर्शाए गए हैं, जैसा कि दिए गए दो आव्यूहों में है। आव्यूह-I के स्तम्भ और पंक्ति की संख्या 0 से 4 है और आव्यूह-II की 5 से 9। इन आव्यूहों से एक अक्षर को पहले उसकी पंक्ति और बाद में स्तम्भ संख्या द्वारा दर्शाया जा सकता है। उदाहरण के लिए 'E' को 10, 22, आदि द्वारा दर्शाया जा सकता है तथा 'O' को 56, 78, आदि द्वारा दर्शाया जा सकता है। इसी तरह से आपको प्रश्न में दिए शब्द "HALT" के लिए समूह को पहचानना है।

Matrix-I
आव्यूह-I

	0	1	2	3	4
0	T	E	R	A	H
1	E	R	H	T	A
2	A	H	E	R	T
3	R	T	A	H	E
4	H	A	T	E	R

Matrix-II
आव्यूह-II

	5	6	7	8	9
5	L	O	P	U	E
6	O	P	E	L	U
7	U	E	L	O	P
8	P	L	U	E	O
9	E	U	O	P	L

01/08/2017

Staff Selection Commission

Options:

1) 40, 03, 76, 24

2) 21, 41, 68, 13

3) 12, 14, 69, 00

4) 34, 41, 87, 31

Correct Answer: 21, 41, 68, 13**Candidate Answer:** [NOT ANSWERED]**QID : 50 -**

A word is represented by only one set of numbers as given in any one of the alternatives. The sets of numbers given in the alternatives are represented by two classes of alphabets as shown in the given two matrices. The columns and rows of **Matrix-I** are numbered from 0 to 4 and that of **Matrix-II** are numbered from 5 to 9. A letter from these matrices can be represented first by its row and next by its column, for example, 'V' can be represented by 31, 44, etc., and 'D' can be represented by 67, 86, etc. Similarly, you have to identify the set for the word "GLOW".

एक शब्द केवल एक संख्या-समूह द्वारा दर्शाया गया है, जैसा कि विकल्पों में से किसी एक में दिया गया है। विकल्पों में दिए गए संख्या-समूह अक्षरों के दो वर्गों द्वारा दर्शाए गए हैं, जैसा कि दिए गए दो आव्यूहों में है। आव्यूह-I के स्तम्भ और पंक्ति की संख्या 0 से 4 है और आव्यूह-II की 5 से 9। इन आव्यूहों से एक अक्षर को पहले उसकी पंक्ति और बाद में स्तम्भ संख्या द्वारा दर्शाया जा सकता है। उदाहरण के लिए 'V' को 31, 44, आदि द्वारा दर्शाया जा सकता है तथा 'D' को 67, 86, आदि द्वारा दर्शाया जा सकता है। इसी तरह से आपको प्रश्न में दिए शब्द "GLOW" के लिए समूह को पहचानना है।

Matrix-I आव्यूह-I					Matrix-II आव्यूह-II						
0	1	2	3	4	5	6	7	8	9		
0	O	N	V	S	W	5	A	G	L	I	D
1	V	S	W	O	N	6	L	A	D	G	I
2	W	O	N	V	S	7	D	I	A	L	G
3	N	V	S	W	O	8	I	D	G	A	L
4	S	W	O	N	V	9	G	L	I	D	A

Options:

1) 56, 89, 01, 04

2) 68, 78, 21, 42

3) 87, 65, 22, 41

4) 95, 57, 13, 33

Correct Answer: 95, 57, 13, 33**Candidate Answer:** 95, 57, 13, 33**QID : 51 -** Which among the following comes under tertiary sector of Indian Economy?

निम्नलिखित में से कौन भारतीय अर्थव्यवस्था में तृतीयक क्षेत्र के अंतर्गत आता है?

Options:

1) Cloth Industry

कपड़ा उद्योग

2) Transport of goods

वस्तुओं का परिवहन

3) Dairy

डेयरी

4) Sugar Industry

चीनी उद्योग

Correct Answer: Transport of goods

वस्तुओं का परिवहन

Candidate Answer: Transport of goods

वस्तुओं का परिवहन

QID : 52 - _____ publishes Economic Survey in India.

भारतीय आर्थिक समीक्षा _____ प्रकाशित करता है।

01/08/2017

Staff Selection Commission

Options:

1) Government of India

भारत सरकार

2) Ministry of Finance

वित्त मंत्रालय

3) NTI Aayog

नीति आयोग

4) Prime Minister of India

भारत के प्रधानमंत्री

Correct Answer: Ministry of Finance

वित्त मंत्रालय

Candidate Answer: Ministry of Finance

वित्त मंत्रालय

QID : 53 - In which economic system the government decides what goods are to be produced in accordance with the needs of society?

किस आर्थिक प्रणाली में सरकार यह निर्णय लेती है कि समाज की आवश्यकताओं के अनुसार किन्से वस्तुओं का उत्पादन किया जाए?

Options:

1) Socialist

सामाजवादी

2) Mixed

मिश्रित

3) Capitalist

पूंजीवादी

4) Traditional

पारम्परिक

Correct Answer: Socialist

सामाजवादी

Candidate Answer: [NOT ANSWERED]**QID : 54** - 1 Rupee note bears the signature of whom?

एक रुपये के नोट पर किसके हस्ताक्षर होते हैं?

Options:

1) Government of India

भारत सरकार

2) Chief Justice of India

भारतीय मुख्य न्यायाधीश

3) Finance Secretary of India

भारतीय वित्त सचिव

4) Prime Minister of India

भारत का प्रधानमंत्री

Correct Answer: Finance Secretary of India

भारतीय वित्त सचिव

Candidate Answer: Finance Secretary of India

भारतीय वित्त सचिव

QID : 55 - Which five year plan recognized human development as the core of all developmental efforts?

किस पंचवर्षीय योजना ने मानव विकास को सभी विकास के प्रयास का मूल बताया था?

Options:

1) First Five Year Plan

पहली पंचवर्षीय योजना

2) Second Five Year Plan

दूसरी पंचवर्षीय योजना

3) Eighth Five Year Plan

आठवीं पंचवर्षीय योजना

4) Ninth Five Year Plan

नौवीं पंचवर्षीय योजना

Correct Answer: Eighth Five Year Plan

आठवीं पंचवर्षीय योजना

Candidate Answer: [NOT ANSWERED]**QID : 56** - A system of rules that takes effect when a military authority takes control of the normal administration of justice is called as _____.

सेना द्वारा प्रशासन तथा न्यायपालिका को अपने नियंत्रण में लेने के बाद लागू कायदे कानून को _____ कहते हैं।

01/08/2017

Staff Selection Commission

Options:

- 1) Coup
तख्तापलट
- 2) Strike
हड़ताल
- 3) Martial law
मार्शल लॉ
- 4) Political prisoner
राजनैतिक बंदी

Correct Answer: Martial law

मार्शल लॉ

Candidate Answer: Martial law

मार्शल लॉ

QID : 57 - Who among the following is the most important political institution in a democratic country?

निम्नलिखित में से कौन कौनसी लोकतांत्रिक देश की सबसे महत्वपूर्ण राजनैतिक संस्था है?

Options:

- 1) President
राष्ट्रपति
- 2) Parliament
संसद
- 3) Prime Minister
प्रधानमंत्री
- 4) Cabinet Ministers
मंत्री परिषद्

Correct Answer: Prime Minister

प्रधानमंत्री

Candidate Answer: Parliament

संसद

QID : 58 - Which kind of decisions are usually based on careful calculation of gains and losses?

किस प्रकार के निर्णय आमतौर पर हानि-लाभ का सावधानीपूर्वक हिसाब लगाकर लिये जाते हैं?

Options:

- 1) Moral
नैतिक
- 2) Socialist
समाजवादी
- 3) Prudential
युक्तिपरक
- 4) Ethnic
संजातीय

Correct Answer: Prudential

युक्तिपरक

Candidate Answer: [NOT ANSWERED]**QID : 59** - Emergency provisions in Indian Constitution has been taken from _____.

भारतीय संविधान में आपात उपबंध _____ से लिए गए हैं।

Options:

- 1) British constitution
ब्रिटिश संविधान
- 2) Government of India Act 1935
भारत सरकार अधिनियम 1935
- 3) Irish constitution
आयरिश संविधान
- 4) Japanese constitution
जापानी संविधान

Correct Answer: Government of India Act 1935

भारत सरकार अधिनियम 1935

Candidate Answer: Irish constitution

आयरिश संविधान

01/08/2017

Staff Selection Commission

QID : 60 -

Match the following.

निम्नलिखित का मिलान कीजिए।

Column – I / स्तंभ – I	Column – II / स्तंभ – II
1. Acquisition of Indian citizenship भारतीय नागरिकता को प्राप्त करने का तरीका	a. By Deprivation वंचित करने पर
2. Loss of Indian citizenship भारतीय नागरिकता को अंत करने का तरीका	b. Equality before law and equal protection of laws विधि के तहत समता तथा विधियों के समान संरक्षण
3. Fundamental Right मूल अधिकार	c. By Registration पंजीकरण से

Options:

1) 1-c, 2-a, 3-b

2) 1-b, 2-a, 3-c

3) 1-c, 2-b, 3-a

4) 1-b, 2-c, 3-a

Correct Answer: 1-c, 2-a, 3-b**Candidate Answer:** 1-c, 2-a, 3-b**QID : 61 -** Which of the following can be amended by special majority?

निम्नलिखित में से किसे विशेष बहुमत द्वारा संशोधित किया जा सकता है?

Options:

1) Directive Principles of State Policy

राज्य के नीति निर्देशक तत्व

2) Rules of Procedure in Parliament

संसद को चलाने के नियम

3) Admission of new state

नए राज्य का गठन

4) Use of English language in Parliament

संसद में अंग्रेजी भाषा का प्रयोग

Correct Answer: Directive Principles of State Policy

राज्य के नीति निर्देशक तत्व

Candidate Answer: Admission of new state

नए राज्य का गठन

QID : 62 - For how much time Financial Emergency can be proclaimed?

वित्तीय आपात कितने समय के लिए लागू की जा सकती है?

Options:

1) 6 months

6 महीने

2) 12 months

12 महीने

3) 24 months

24 महीने

4) No maximum period

कोई अधिकतम अवधि नहीं

Correct Answer: No maximum period

कोई अधिकतम अवधि नहीं

Candidate Answer: No maximum period

कोई अधिकतम अवधि नहीं

QID : 63 - Which among the following do not participate in election of the President?

निम्नलिखित में से कौन राष्ट्रपति के चुनाव में हिस्सा नहीं लेते हैं?

01/08/2017

Staff Selection Commission

Options:

- 1) Elected members of both the houses
दोनों सदन के चुने हुए सदस्य
- 2) Elected members of legislative assemblies of states
विधानसभा के चुने हुए सदस्य
- 3) Elected members of legislative assemblies of Delhi and Puducherry
दिल्ली तथा पुदुच्चेरी विधान सभा के चुने हुए सदस्य
- 4) Nominated members of state legislative assemblies
विधानसभा के नामांकित किए गए सदस्य

Correct Answer: Nominated members of state legislative assemblies
विधानसभा के नामांकित किए गए सदस्य

Candidate Answer: Nominated members of state legislative assemblies
विधानसभा के नामांकित किए गए सदस्य

QID : 64 - In which year (in A.D) did Babar invaded India?

बाबर ने भारत पर किस वर्ष (ई. में) आक्रमण किया था?

Options:

- 1) 1530
- 2) 1520
- 3) 1526
- 4) 1550

Correct Answer: 1526

Candidate Answer: [NOT ANSWERED]

QID : 65 - Which among the following metal was not found in Harappan civilization?

निम्नलिखित में से कौन सी धातु हड़प्पन सभ्यता में नहीं पायी गई थी?

Options:

- 1) Gold
सोना
- 2) Copper
ताँबा
- 3) Silver
चंदी
- 4) Iron
लोहा

Correct Answer: Iron

लोहा

Candidate Answer: Copper

ताँबा

QID : 66 - Who built Red Fort?

लाल किले का निर्माण किसने करवाया था?

Options:

- 1) Humayun
हुमायूँ
- 2) Akbar
अकबर
- 3) Shah Jahan
शाहजहाँ
- 4) Aurangzeb
औरंगज़ेब

Correct Answer: Shah Jahan

शाहजहाँ

Candidate Answer: Shah Jahan

शाहजहाँ

QID : 67 - In whose reign Hiuen-Tsang visited India?

किसके शासन काल में ह्वेन-त्सांग भारत आया था?

Options:

- 1) Jalauddin
जलाऊद्दीन
- 2) Harshvardhana
हर्षवर्धन
- 3) Jahangir
जहाँगीर
- 4) Pandayas
पाण्ड्य

01/08/2017

Staff Selection Commission

Correct Answer: Harshvardhana

हर्षवर्धन

Candidate Answer: [NOT ANSWERED]**QID : 68** - Set events in chronological order in which they happened.

1. Sepoy mutiny
2. Vasco da Gama reached India
3. Babur started mughal dynasty

दी गई घटनाओं को उनके कालानुक्रम अनुसार लगाएँ।

1. सिपाही विद्रोह
2. वास्को डी गामा भारत पहुँचा
3. बाबर द्वारा मुगल साम्राज्य की शुरुआत

Options:

1) 1, 3, 2

2) 3, 1, 2

3) 2, 3, 1

4) 3, 2, 1

Correct Answer: 2, 3, 1**Candidate Answer:** 3, 2, 1**QID : 69** - Which of the following planet is farthest from Sun?

निम्नलिखित में से कौन सा ग्रह सूर्य से सबसे दूर है?

Options:

1) Saturn

शनि

2) Jupiter

बृहस्पति

3) Neptune

वरुण

4) Uranus

अरुण

Correct Answer: Neptune

वरुण

Candidate Answer: Uranus

अरुण

QID : 70 - In ocean, where is 'Benthos' found?

महासागर में, 'नितल जीवजात (बैथोस)' कहाँ पाये जाते हैं?

Options:

1) at bottom of ocean

महासागर के तल पर

2) at upper surface of ocean

महासागर के उपरी सतह पर

3) in an enclosed area of ocean

महासागर के सीमित क्षेत्र में

4) along the shore

तटीय स्थान पर

Correct Answer: at bottom of ocean

महासागर के तल पर

Candidate Answer: [NOT ANSWERED]**QID : 71** - In which continent 'Great Dividing Range' is located?

'महान विभाजक श्रेणी' किस महाद्वीप में स्थित है?

Options:

1) North America

उत्तर अमेरिका

2) South America

दक्षिण अमेरिका

3) Asia

एशिया

4) Australia

ऑस्ट्रेलिया

Correct Answer: Australia

ऑस्ट्रेलिया

Candidate Answer: Asia

एशिया

01/08/2017

Staff Selection Commission

QID : 72 - 'Jog falls' is located on which river?

जोग जलप्रपात किस नदी पर स्थित है?

Options:

1) Narmada

नर्मदा

2) Krishna

कृष्णा

3) Godavari

गोदावरी

4) Sharavati

शरावती

Correct Answer: Sharavati

शरावती

Candidate Answer: [NOT ANSWERED]

QID : 73 - For a time difference of two hours, the longitudinal distance will be equal to ____.

दो घंटे के अंतराल के लिए देशांतर दूरी _____ के बराबर होगी।

Options:

1) 15°

2) 30°

3) 45°

4) 60°

Correct Answer: 30°

Candidate Answer: [NOT ANSWERED]

QID : 74 - Where does Amoeba digests its food?

अमीबा अपना भोजन कहाँ पचाता है?

Options:

1) Pseudopodia

पादाङ्ग

2) Nucleus

केंद्रक

3) Food Vacuole

खाद्य धानी

4) Cell membrane

कोशिका झिल्ली

Correct Answer: Food Vacuole

खाद्य धानी

Candidate Answer: Food Vacuole

खाद्य धानी

QID : 75 - What are female gametes called as?

मादा युग्मक को क्या कहते हैं?

Options:

1) Zygote

युग्मनज

2) Ova

अंडाणु

3) Sperms

शुक्राणु

4) Embryo

भ्रूण

Correct Answer: Ova

अंडाणु

Candidate Answer: Sperms

शुक्राणु

QID : 76 - Which of the following cell organelles are present only in plant cell?

निम्नलिखित में से कौन सी कोशिकांग केवल पादप कोशिका में स्थित होता है?

01/08/2017

Staff Selection Commission

Options:

- 1) Lysosomes
लाइसोसोम
- 2) Plastids
प्लास्टिड
- 3) Cell membrane
कोशिका झिल्ली
- 4) Mitochondria
माइटोकॉन्ड्रिया

Correct Answer: Plastids

प्लास्टिड

Candidate Answer: Plastids

प्लास्टिड

QID : 77 - Muscles are connected to bones by connective tissue called as _____.

अस्थियों से मांसपेशियों को जोड़ने वाला संयोजी ऊतक _____ कहलाता है।

Options:

- 1) tendon
कंडरा
- 2) ligament
स्नायु
- 3) neuron
न्यूरॉन
- 4) adipose
वसाभय

Correct Answer: tendon

कंडरा

Candidate Answer: [NOT ANSWERED]**QID : 78** -

Match the following.

निम्नलिखित का मिलान कीजिए।

Modified Stem / संशोधित तना	Example / उदाहरण
1. Rhizome प्रकंद	a. Onion प्याज
2. Bulb बल्ब	b. Banana केला
3. Tuber कंद	c. Potato आलू

Options:

- 1) 1-b, 2-a, 3-c
- 2) 1-a, 2-c, 3-b
- 3) 1-c, 2-a, 3-b
- 4) 1-a, 2-b, 3-c

Correct Answer: 1-b, 2-a, 3-c**Candidate Answer:** 1-a, 2-b, 3-c**QID : 79** - Neurons are part of which system of human body?

तंत्रिका कोशिका मानव शरीर के किस तंत्र का हिस्सा है?

Options:

- 1) Circulatory system
परिसंचरण तंत्र
- 2) Excretory system
उत्सर्जन तंत्र
- 3) Reproductive system
जनन तंत्र
- 4) Nervous system
तंत्रिका तंत्र

Correct Answer: Nervous system

तंत्रिका तंत्र

01/08/2017

Staff Selection Commission

Candidate Answer: Nervous system
तंत्रिका तंत्र

QID : 80 - Which contact force is responsible for changing the state of motion of an object?

कौन से सम्पर्क बल के कारण वस्तुओं की गति की अवस्था में परिवर्तन आता है?

Options:

- 1) Magnetic force
चुम्बकीय बल
- 2) Frictional force
घर्षण बल
- 3) Muscular force
पेशीय बल
- 4) Electrostatic force
स्थिरविद्युत बल

Correct Answer: Frictional force
घर्षण बल

Candidate Answer: Muscular force
पेशीय बल

QID : 81 - According to law of reflection:

परावर्तन के नियम के अनुसार:

Options:

- 1) Angle of incidence is greater than angle of reflection
आपतन कोण परावर्तन कोण से अधिक होता है
- 2) Angle of incidence is smaller than angle of reflection
आपतन कोण परावर्तन कोण से कम होता है
- 3) Angle of incidence is always equal to angle of reflection
आपतन कोण सदैव परावर्तन कोण के बराबर होता है
- 4) Both angles are always unequal
दोनों कोण सदैव असमान होते हैं

Correct Answer: Angle of incidence is always equal to angle of reflection
आपतन कोण सदैव परावर्तन कोण के बराबर होता है

Candidate Answer: Angle of incidence is always equal to angle of reflection
आपतन कोण सदैव परावर्तन कोण के बराबर होता है

QID : 82 - What is the unit of relative density?

आपेक्षिक घनत्व का मात्रक क्या है?

Options:

- 1) kg/m^3
किया./मीटर³
- 2) g/cm^3
ग्रा./सेमी.³
- 3) mg/mm^3
मिलीग्रा./मिलीमी.³
- 4) No unit
कोई मात्रक नहीं है

Correct Answer: No unit
कोई मात्रक नहीं है

Candidate Answer: kg/m^3
किया./मीटर³

QID : 83 - Which law/principle states that when a body is immersed fully or partially in a fluid, it experiences an upward force that is equal to the weight of the fluid displaced by it?

कौन सा नियम/सिद्धांत बताता है कि जब किसी वस्तु को किसी तरल में पूर्ण या आंशिक रूप से डुबाया जाता है, तो वह ऊपर की दिशा में एक बल का अनुभव करती है जो वस्तु द्वारा हटाए तरल के भार के बराबर होता है?

Options:

- 1) Boyle's law
बॉयल के नियम
- 2) Charles law
चार्ल्स के नियम
- 3) Archimedes principle
आर्किमिडीज के सिद्धांत
- 4) Pascal's law
पास्कल के नियम

Correct Answer: Archimedes principle
आर्किमिडीज के सिद्धांत

Candidate Answer: [NOT ANSWERED]

01/08/2017

Staff Selection Commission

QID : 84 - Which among the following is/are not an input devices?

- I. Scanner
- II. Joystick
- III. Plotter

निम्नलिखित में से कौन एक इनपुट डिवाइस नहीं है?

- I. स्कैनर
- II. जॉयस्टिक
- III. प्लॉटर

Options:

- 1) Only I
केवल I
- 2) Only II
केवल II
- 3) Only III
केवल III
- 4) Both I and II
I तथा II दोनों

Correct Answer: Only III
केवल III

Candidate Answer: Both I and II
I तथा II दोनों

QID : 85 - Protocol used for receiving an email is _____.

_____ संदेश का उपयोग ई-मेल प्राप्त करने के लिए किया जाता है।

Options:

- 1) HTTP
एच. टी. टी. पी.
- 2) FTP
एफ. टी. पी.
- 3) POP - 3
पी. ओ. पी. - 3
- 4) SSH
एस. एस. एच.

Correct Answer: POP - 3
पी. ओ. पी. - 3

Candidate Answer: HTTP
एच. टी. टी. पी.

QID : 86 - Tartaric Acid is not found in _____.

टार्टरिक अम्ल _____ में नहीं पाया जाता है।

Options:

- 1) Tamarind
इमली
- 2) Grapes
अंगूर
- 3) Unripe mangoes
कच्चा आम
- 4) Spinach
पालक

Correct Answer: Spinach
पालक

Candidate Answer: Spinach
पालक

QID : 87 - What is the chemical name of quick lime?

बिना बुझा हुआ घूने का रासायनिक नाम क्या है?

Options:

- 1) Calcium carbonate
कैल्सियम कार्बोनेट
- 2) Sodium hydroxide
सोडियम हाइड्रॉक्साइड
- 3) Calcium oxide
कैल्सियम ऑक्साइड
- 4) Calcium sulphate
कैल्सियम सल्फेट

01/08/2017

Staff Selection Commission

Correct Answer: Calcium oxide

कैल्सियम ऑक्साइड

Candidate Answer: [NOT ANSWERED]**QID : 88** - What is the common name of CaOCl_2 ? CaOCl_2 का सामान्य नाम क्या है?**Options:**

- 1) Washing soda
वाशिंग सोडा
- 2) Bleaching powder
ब्लीचिंग पाउडर
- 3) Baking powder
बेकिंग पाउडर
- 4) Baking soda
बेकिंग सोडा

Correct Answer: Bleaching powder

ब्लीचिंग पाउडर

Candidate Answer: Bleaching powder

ब्लीचिंग पाउडर

QID : 89 - In a periodic table, while moving from left to right in a period, number of _____ remains same.

आवर्त सारणी में, एक आवर्ण में बाएँ से दाएँ जाने पर, _____ की संख्या समान होती है।

Options:

- 1) electrons
इलेक्ट्रॉनों
- 2) protons
प्रोटॉनों
- 3) shells
कोशों
- 4) neutrons
न्यूट्रॉनों

Correct Answer: shells

कोशों

Candidate Answer: shells

कोशों

QID : 90 - Which among the following is an Abiotic component of environment?

निम्नलिखित में से कौन सा पर्यावरण का एक अजैव घटक है?

Options:

- 1) Green plants
हरे पौधे
- 2) Non-Green plants
गैर-हरे पौधे
- 3) Water
पानी
- 4) Parasites
परजीवी

Correct Answer: Water

पानी

Candidate Answer: Non-Green plants

गैर-हरे पौधे

QID : 91 - Cellulose fibers are organic pollutant mainly produced by which Industry/Industries?

- I. Mining Industry
- II. Soap and detergent Industry
- III. Paper and Pulp Industry

किस उद्योग से मुख्य तौर पर जैव प्रदूषक सेल्यूलोज रेशों का उत्पादन होता है?

- I. खनन उद्योग
- II. साबुन तथा डिटरजेंट उद्योग
- III. कागज और लुगदी उद्योग

01/08/2017

Staff Selection Commission

Options:

- 1) Only I
केवल I
- 2) Only II
केवल II
- 3) Only III
केवल III
- 4) Both II and III
II तथा III दोनों

Correct Answer: Only III
केवल III

Candidate Answer: Both II and III
II तथा III दोनों

QID : 92 - Which among the following is not a Rabi crop?

निम्नलिखित में से कौन रबी फसल नहीं है?

Options:

- 1) Barley
जौ
- 2) Wheat
गेहूँ
- 3) Groundnut
मूँगफली
- 4) Mustard
सरसों

Correct Answer: Groundnut
मूँगफली

Candidate Answer: [NOT ANSWERED]

QID : 93 - For which disease, Ministry of Health and Family Welfare has launched 'Test and Treat' policy?

किस रोग के लिए स्वास्थ्य एवं परिवार मंत्रालय द्वारा 'टेस्ट एंड ट्रीट' नीति प्रारंभ की है?

Options:

- 1) Chicken pox
चेचक
- 2) HIV
एच. आई. वी.
- 3) Polio
पोलियो
- 4) Tuberculosis
क्षय रोग

Correct Answer: HIV
एच. आई. वी.

Candidate Answer: HIV
एच. आई. वी.

QID : 94 - Laser was invented by _____.

लेजर का आविष्कार _____ ने किया था।

Options:

- 1) A. H. Taylor
ए. एच. टेलर
- 2) T. H. Maiman
टी. एच. मैमन
- 3) Lee De Forest
ली दे फॉरेस्ट
- 4) Thomas Edison
थॉमस एडिसन

Correct Answer: T. H. Maiman
टी. एच. मैमन

Candidate Answer: [NOT ANSWERED]

QID : 95 - Twiddle is associated with _____.

ट्विडल _____ खेल से संबंधित है।

01/08/2017

Staff Selection Commission

Options:

1) Table Tennis

टेबल टेनिस

2) Lawn Tennis

लॉन टेनिस

3) Golf

गोल्फ

4) Swimming

तेराकी

Correct Answer: Table Tennis

टेबल टेनिस

Candidate Answer: Table Tennis

टेबल टेनिस

QID : 96 - 'Madhubani' is a famous folk painting form of which Indian State?

'मधुवनी' भारत के किस राज्य की प्रसिद्ध लोक कलाकृति है?

Options:

1) Madhya Pradesh

मध्य प्रदेश

2) Jharkhand

झारखण्ड

3) Bihar

बिहार

4) Uttar Pradesh

उत्तर प्रदेश

Correct Answer: Bihar

बिहार

Candidate Answer: [NOT ANSWERED]**QID : 97** - Who among the following has been designated as UN messenger of peace?

निम्नलिखित में से किसे संयुक्त राष्ट्र की शांतिदूत के लिए नामांकित किया गया है?

Options:

1) Gururaja Bhat

गुरुराजा भट

2) Shrinivas Kulkarni

श्रीनिवास कुलकर्णी

3) Malala Yousafzai

मलाला यूसुफज़ई

4) Emma Watson

एमा वॉटसन

Correct Answer: Malala Yousafzai

मलाला यूसुफज़ई

Candidate Answer: Malala Yousafzai

मलाला यूसुफज़ई

QID : 98 - 'The Red Sari' is written by _____.

'द रेड साड़ी' _____ के द्वारा लिखी गई है।

Options:

1) Mamta Banerjee

ममता बनर्जी

2) Javier Moro

जेवियर मोरो

3) Malala Yousafzai

मलाला यूसुफज़ई

4) Neel Mukherjee

नील मुखर्जी

Correct Answer: Javier Moro

जेवियर मोरो

Candidate Answer: Malala Yousafzai

मलाला यूसुफज़ई

QID : 99 - Which country will host 9th BRICS summit?

नौवीं BRICS सम्मेलन कि मेजबानी कौन सा देश करेगा?

01/08/2017

Staff Selection Commission

Options:

1) Brazil

ब्राजील

2) China

चीन

3) Russia

रूस

4) India

भारत

Correct Answer: China

चीन

Candidate Answer: Brazil

ब्राजील

QID : 100 - Which of the following is not a member of Indian Ocean Rim Association (IORA)?

निम्नलिखित में से कौन हिंद महासागर तटीय क्षेत्रीय सहयोग संघ (IORA) का सदस्य नहीं है?

Options:

1) Bangladesh

बांग्लादेश

2) Mauritius

मॉरिशस

3) Afghanistan

अफगानिस्तान

4) India

भारत

Correct Answer: Afghanistan

अफगानिस्तान

Candidate Answer: Bangladesh

बांग्लादेश

QID : 101 - How many factors of 108 is/are prime number?

108 के कितने गुणखंड अभाज्य संख्या है/हैं?

Options:

1) 2

2) 3

3) 5

4) 6

Correct Answer: 2**Candidate Answer:** [NOT ANSWERED]**QID : 102** - Which of the following expression(s) is/are true?I. $\sqrt{5} + \sqrt{5} > \sqrt{2} + \sqrt{8}$ II. $\sqrt{3} + \sqrt{7} > \sqrt{2} + \sqrt{8}$ III. $\sqrt{5} + \sqrt{5} > \sqrt{3} + \sqrt{7}$

निम्नलिखित में से कौन सा/कौन से व्यंजक सही है/हैं?

I. $\sqrt{5} + \sqrt{5} > \sqrt{2} + \sqrt{8}$ II. $\sqrt{3} + \sqrt{7} > \sqrt{2} + \sqrt{8}$ III. $\sqrt{5} + \sqrt{5} > \sqrt{3} + \sqrt{7}$ **Options:**

1) Only I

केवल I

2) Only I and III

केवल I तथा III

3) Only II

केवल II

4) All expressions are true

सभी व्यंजक सही हैं

Correct Answer: All expressions are true

सभी व्यंजक सही हैं

Candidate Answer: [NOT ANSWERED]

01/08/2017

Staff Selection Commission

QID : 103 - Which of the following expression(s) is/are true?

- I. 337 is a prime number.
 II. The number 12 has 6 positive factors.
 III. 32724 is completely divisible by 9.

निम्नलिखित में से कौन सा/कौन से व्यंजक सही है/हैं?

- I. 337 एक अभाज्य संख्या है।
 II. संख्या 12 के 6 धनात्मक गुणनखंड हैं।
 III. 32724 पूर्णतः 9 से भाज्य है।

Options:

- 1) Only I
 केवल I
 2) Only I and II
 केवल I तथा II
 3) Only II and III
 केवल II तथा III
 4) All expressions are true
 सभी व्यंजक सही हैं

Correct Answer: All expressions are true

सभी व्यंजक सही हैं

Candidate Answer: [NOT ANSWERED]**QID : 104** -Which value among $\sqrt[3]{8}$, $\sqrt[2]{4}$, $\sqrt[5]{64}$ is greatest? $\sqrt[3]{8}$, $\sqrt[2]{4}$, $\sqrt[5]{64}$ में से सबसे बड़ी संख्या कौन सी है?**Options:**1)
 $\sqrt[3]{8}$ 2)
 $\sqrt[2]{4}$ 3)
 $\sqrt[5]{64}$ 4) All are equal
सभी बराबर हैं**Correct Answer:** All are equal

सभी बराबर हैं

Candidate Answer: All are equal

सभी बराबर हैं

QID : 105 - What is the value of $(1004)^2 - (998)^2$? $(1004)^2 - (998)^2$ का मान क्या है?**Options:**

1) 11012

2) 12012

3) 120012

4) 1212

Correct Answer: 12012**Candidate Answer:** [NOT ANSWERED]**QID : 106** - A and B together can complete a work in 15 days. They started together but after 5 days A left the work. If the remaining work is completed by B in 15 more days, then A alone can complete the entire work in how many days?

A तथा B एक कार्य को मिलकर 15 दिनों में पूरा कर सकते हैं। वे एक साथ कार्य करना प्रारंभ करते हैं परंतु 5 दिनों के बाद A कार्य को छोड़ देता है। यदि शेष कार्य पूरा करने में B को 15 दिन और लगे, तो A अकेला पूरे कार्य को कितने दिनों में पूरा करेगा?

01/08/2017

Staff Selection Commission

Options:

1) 25

2) 50

3) 35

4) 45

Correct Answer: 45**Candidate Answer:** [NOT ANSWERED]**QID : 107** - P is 20% more efficient than Q. If Q alone can finish a work in 10 days, then in how many days P alone will finish the work?

P, Q से 20% अधिक कार्यकुशल है। यदि Q अकेला किसी कार्य को 10 दिनों में पूरा कर सकता है, तो P अकेला उस कार्य को कितने दिनों में पूरा करेगा?

Options:

1)

 $8\frac{1}{3}$

2) 8.5

3) 9

4) 12

Correct Answer: $8\frac{1}{3}$ **Candidate Answer:** [NOT ANSWERED]**QID : 108** - The ratio of marked price and cost price of an article is 6 : 5. If 15% discount is given, then how much is the profit (in percent)?

एक वस्तु के अंकित मूल्य तथा क्रय मूल्य का अनुपात 6 : 5 है। यदि 15 प्रतिशत की छूट दी जाए, तो लाभ (प्रतिशत में) क्या है?

Options:

1) 4

2) 0.2

3) 2

4) 1

Correct Answer: 2**Candidate Answer:** [NOT ANSWERED]**QID : 109** - Out of the following, which is the best discount for a customer?

I. 50% + 50% off

II. 60% + 40% off

III. 70% + 30% off

IV. Buy 1 get 4

निम्नलिखित में से, उपरोक्ता के लिए सबसे अच्छी छूट कौन सी है?

I. 50% + 50% की छूट

II. 60% + 40% की छूट

III. 70% + 30% की छूट

IV. 1 खरीदे 4 पाये

Options:

1) Only I and IV

केवल I तथा IV

2) Only II

केवल II

3) Only I, II and III

केवल I, II तथा III

4) Only III

केवल III

Correct Answer: Only III

केवल III

Candidate Answer: Only III

केवल III

01/08/2017

Staff Selection Commission

QID : 110 -

If $\frac{a}{2} = \frac{b}{3} = \frac{c}{4}$, then what is the value of $\frac{a+b+c}{b}$?

यदि $\frac{a}{2} = \frac{b}{3} = \frac{c}{4}$ हो, तो $\frac{a+b+c}{b}$ का मान क्या है?

Options:

- 1) 3
- 2) 2
- 3) 4/3
- 4) 7/3

Correct Answer: 3**Candidate Answer:** 3

QID : 111 - In a mixture, milk and water are in ratio of 2 : 3. Some milk is added to the mixture because of which ratio of milk and water becomes 2 : 1. How much milk was added as a percentage of initial mixture?

एक मिश्रण में, दूध तथा पानी 2 : 3 के अनुपात में हैं। मिश्रण में कुछ दूध मिलाया गया जिससे दूध तथा पानी का अनुपात 2 : 1 हो गया। आरंभिक मिश्रण के प्रतिशत में कितना दूध मिलाया गया है?

Options:

- 1) 75
- 2) 60
- 3) 80
- 4) 50

Correct Answer: 80**Candidate Answer:** [NOT ANSWERED]

QID : 112 - The average of marks obtained by A and B is 15 less than that of average marks obtained by B and C. If the marks obtained by C is 65, what is the marks obtained by A?

A तथा B द्वारा प्राप्त अंकों का औसत B तथा C द्वारा प्राप्त अंकों के औसत से 15 कम है। यदि C द्वारा प्राप्त अंक 65 है, तो A द्वारा प्राप्त अंक क्या है?

Options:

- 1) 35
- 2) 50
- 3) 65
- 4) 80

Correct Answer: 35**Candidate Answer:** 50

QID : 113 - What is the average of squares of first 10 natural numbers?

प्रथम 10 प्राकृतिक संख्याओं के वर्गों का औसत क्या है?

Options:

- 1) 55.5
- 2) 45.6
- 3) 38.5
- 4) 40.5

Correct Answer: 38.5**Candidate Answer:** [NOT ANSWERED]

QID : 114 - Cost price and selling price of an article are in ratio 13 : 9. If the loss incurred on article is Rs 320, what is the sum (in Rs) of cost and selling prices?

एक वस्तु के क्रय मूल्य तथा विक्रय मूल्य का अनुपात 13 : 9 है। यदि वस्तु पर 320 रु. की हानि होती है, तो क्रय तथा विक्रय मूल्यों का जोड़ (रु. में) कितना है?

Options:

- 1) 1480
- 2) 1620
- 3) 1500
- 4) 1760

Correct Answer: 1760**Candidate Answer:** 1760

01/08/2017

Staff Selection Commission

QID : 115 – By selling 64 apples for Rs 60 a person gains 25%. In order to have 40% loss, how many apples shall he sell for Rs 36?

64 सेबों को 60 रु. पर बेचने पर एक व्यक्ति को 25% का लाभ होता है। 40% की हानि के लिए, उसे 36 रु. में कितने सेब बेचने चाहिए?

Options:

1) 80

2) 70

3) 60

4) 50

Correct Answer: 80

Candidate Answer: 60

QID : 116 – A mixture contains 18% copper by weight. How much mixture (in kg) is required to obtain 81 kg of copper?

एक मिश्रण में भार के अनुसार 18% तॉबा है। 81 कि.ग्रा. तॉबा प्राप्त करने के लिए कितने मिश्रण (कि.ग्रा. में) की आवश्यकता है?

Options:

1) 350

2) 300

3) 450

4) 250

Correct Answer: 450

Candidate Answer: [NOT ANSWERED]

QID : 117 – A person spends 30% of his income on food, 20% on children's education and 60% of remaining on house rent. What percent of income is left with him?

एक व्यक्ति अपनी आय का 30% भोजन पर, 20% बच्चों की शिक्षा पर तथा शेष का 60% घर के किराये पर व्यय करता है। उसके पास आय का कितना प्रतिशत शेष बचा है?

Options:

1) 20

2) 30

3) 35

4) 25

Correct Answer: 20

Candidate Answer: 20

QID : 118 – A man rides his vehicle at the rate of 36 km/hr but stops for 12 minutes, to change parts at the end of every 14th km. What will be the time taken to cover a distance of 90 km?

एक व्यक्ति अपना वाहन 36 कि.मी./घंटा की दर से चलाता है परंतु प्रत्येक 14 कि.मी. पर पुर्जों को बदलने के लिए 12 मिनट के लिए रुकता है। 90 कि.मी. की दूरी को यात्रा करने के लिए कितना समय लगेगा?

Options:

1) 6 hour 12 minutes

6 घंटे 12 मिनट

2) 2 hours 30 minutes

2 घंटे 30 मिनट

3) 3 hours 42 minutes

3 घंटे 42 मिनट

4) 5 hours 32 minutes

5 घंटे 32 मिनट

Correct Answer: 3 hours 42 minutes

3 घंटे 42 मिनट

Candidate Answer: 3 hours 42 minutes

3 घंटे 42 मिनट

QID : 119 – A walks at a uniform speed of 8 km/hr and 8 hours after his start, B starts on his cycle after him at speed of 24 km/hr. How far (in km) from the starting point will B catch A?

A, 8 कि.मी./घंटा की एकसमान गति से चलता है तथा उसके आरंभ होने के 8 घंटे के पश्चात, B अपनी साइकिल से 24 कि.मी./घंटा की गति से उसके पीछे निकलता है। आरंभिक बिन्दु से कितनी दूरी (कि.मी. में) पर B, A को पकड़ेगा?

Options:

1) 72

2) 96

3) 120

4) 144

Correct Answer: 96

Candidate Answer: 96

QID : 120 – What is the rate (in percent) of simple interest at which a sum of money becomes three times of itself in 50 years?

साधारण व्याज की दर (प्रतिशत में) कितनी है जिस पर कोई धनराशि 50 वर्षों में स्वयं की तिगुनी हो जाती है?

01/08/2017

Staff Selection Commission

Options:

- 1) 2
- 2) 4
- 3) 5
- 4) 8

Correct Answer: 4**Candidate Answer:** [NOT ANSWERED]

QID : 121 - A sum of Rs 3100 is lent out at simple interest in two parts. One at 8% per annum and another at 6% per annum. If the total annual interest is Rs 212, then what is the money (in Rs) lent at rate of 8%?

3100 रु. की एक धनराशि दो भागों में साधारण ब्याज पर उधार दी जाती है। एक भाग 8% की दर से तथा अन्य भाग पर 6% की दर से दिया जाता है। यदि कुल वार्षिक ब्याज 212 रु. है, तो 8% की दर पर दी गई धनराशि (रु. में) क्या है?

Options:

- 1) 1000
- 2) 1250
- 3) 1300
- 4) 1400

Correct Answer: 1300**Candidate Answer:** [NOT ANSWERED]**QID : 122** -

The table given below shows the percentage of people reading various newspapers in a society. It also shows the ratio of males and females for each newspaper. Each person reads exactly 1 newspaper. Total number of people in society is 20000.

नीचे दी गई तालिका में एक सोसाइटी में विभिन्न प्रकार के समाचार-पत्र पढ़ने वालों लोगों के प्रतिशत को दर्शाया गया है। यह प्रत्येक समाचार-पत्र के लिए पुरुषों तथा महिलाओं का औसत भी को दर्शाती है। प्रत्येक व्यक्ति वास्तव में एक ही समाचार-पत्र पढ़ता है। सोसाइटी में लोगों की कुल संख्या 20000 है।

Newspaper समाचार-पत्र	Percentage of people लोगों का प्रतिशत	Male : Female पुरुष : महिला
A	30%	3 : 2
B	20%	2 : 3
C	16%	3 : 5
D	12%	1 : 2
E	22%	4 : 7

How many females read newspaper A?

कितनी महिलाएँ समाचार-पत्र A पढ़ती हैं?

Options:

- 1) 3600
- 2) 3200
- 3) 2400
- 4) 2800

Correct Answer: 2400**Candidate Answer:** 2400

01/08/2017

Staff Selection Commission

QID : 123 -

The table given below shows the percentage of people reading various newspapers in a society. It also shows the ratio of males and females for each newspaper. Each person reads exactly 1 newspaper. Total number of people in society is 20000.

नीचे दी गई तालिका में एक सोसाइटी में विभिन्न प्रकार के समाचार-पत्र पढ़ने वालों लोगों के प्रतिशत को दर्शाया गया है। यह प्रत्येक समाचार-पत्र के लिए पुरुषों तथा महिलाओं का औसत भी को दर्शाती है। प्रत्येक व्यक्ति वास्तव में एक ही समाचार-पत्र पढ़ता है। सोसाइटी में लोगों की कुल संख्या 20000 है।

Newspaper समाचार-पत्र	Percentage of people लोगों का प्रतिशत	Male : Female पुरुष : महिला
A	30%	3 : 2
B	20%	2 : 3
C	16%	3 : 5
D	12%	1 : 2
E	22%	4 : 7

What is difference in number of males reading newspaper B and number of males reading newspaper D?

समाचार-पत्र B पढ़ने वाले पुरुषों तथा समाचार-पत्र D पढ़ने वाले पुरुषों की संख्या में कितना अंतर है?

Options:

1) 1600

2) 2000

3) 2400

4) 800

Correct Answer: 800

Candidate Answer: 1600

01/08/2017

Staff Selection Commission

QID : 124 -

The table given below shows the percentage of people reading various newspapers in a society. It also shows the ratio of males and females for each newspaper. Each person reads exactly 1 newspaper. Total number of people in society is 20000.

नीचे दी गई तालिका में एक सोसाइटी में विभिन्न प्रकार के समाचार-पत्र पढ़ने वालों लोगों के प्रतिशत को दर्शाया गया है। यह प्रत्येक समाचार-पत्र के लिए पुरुषों तथा महिलाओं का औसत भी को दर्शाती है। प्रत्येक व्यक्ति वास्तव में एक ही समाचार-पत्र पढ़ता है। सोसाइटी में लोगों की कुल संख्या 20000 है।

Newspaper समाचार-पत्र	Percentage of people लोगों का प्रतिशत	Male : Female पुरुष : महिला
A	30%	3 : 2
B	20%	2 : 3
C	16%	3 : 5
D	12%	1 : 2
E	22%	4 : 7

For which two newspaper the number of females reading them is same?

कौन से दो समाचार-पत्रों को पढ़ने वाली महिलाओं की संख्या समान है?

Options:

1) D and E

D तथा E

2) C and E

C तथा E

3) A and B

A तथा B

4) A and C

A तथा C

Correct Answer: A and B

A तथा B

Candidate Answer: [NOT ANSWERED]

01/08/2017

Staff Selection Commission

QID : 125 -

The table given below shows the percentage of people reading various newspapers in a society. It also shows the ratio of males and females for each newspaper. Each person reads exactly 1 newspaper. Total number of people in society is 20000.

नीचे दी गई तालिका में एक सोसाइटी में विभिन्न प्रकार के समाचार-पत्र पढ़ने वालों लोगों के प्रतिशत को दर्शाया गया है। यह प्रत्येक समाचार-पत्र के लिए पुरुषों तथा महिलाओं का औसत भी को दर्शाती है। प्रत्येक व्यक्ति वास्तव में एक ही समाचार-पत्र पढ़ता है। सोसाइटी में लोगों की कुल संख्या 20000 है।

Newspaper समाचार-पत्र	Percentage of people लोगों का प्रतिशत	Male : Female पुरुष : महिला
A	30%	3 : 2
B	20%	2 : 3
C	16%	3 : 5
D	12%	1 : 2
E	22%	4 : 7

By how much percent females reading newspaper E are more than the males reading newspaper C?

समाचार-पत्र E पढ़ने वाली महिलाएँ, समाचार-पत्र C पढ़ने वाले पुरुषों से कितने प्रतिशत अधिक हैं?

Options:

1) 233.33

2) 133.33

3) 266.66

4) 333.33

Correct Answer: 133.33

Candidate Answer: 233.33

QID : 126 - If length and breadth of a cuboid is increased by 20%, then by how much percent the height should be reduced to keep the volume same?

यदि एक घनाभ की लम्बाई तथा चौड़ाई को 20% बढ़ाया जाए, तो उसकी ऊँचाई को कितना प्रतिशत कम किया जाना चाहिए जिससे कि उसका आयतन अपरिवर्तित रहे?

Options:

1) 40

2) 44

3)

$30\frac{5}{9}$

4)

$33\frac{4}{7}$

Correct Answer:

$30\frac{5}{9}$

Candidate Answer: 44

QID : 127 - The volume of a conical tent is 154 cm^3 and the area of its base is 38.5 cm^2 . What is the length (in cm) of canvas required to build the tent, if the canvas is 2 cm in width?

एक शंक्वाकार टेंट का आयतन 154 से.मी.^3 है तथा उसके आधार का क्षेत्रफल 38.5 से.मी.^2 है। यदि टेंट को बनाने वाले कपड़े की चौड़ाई 2 से.मी. हो, तो टेंट को बनाने के लिए कितने लम्बे (से.मी. में) कपड़े की आवश्यकता है?

01/08/2017

Staff Selection Commission

Options:

- 1) 71.35
- 2) 68.75
- 3) 73.25
- 4) 75.75

Correct Answer: 68.75**Candidate Answer:** [NOT ANSWERED]

QID : 128 - A metallic sphere is melted and moulded to form conical shaped bullets. If radius of the bullet is a twice of its height and radius of bullet is half of the radius of the metallic sphere, then what is the numbers of bullet formed?

एक धात्विक गोले को पिघलाकर एक शंक्वाकार गोलियों में ढाला जाता है। यदि उस गोली की विज्या उनकी ऊँचाई से दोगुनी हो तथा गोली की विज्या धात्विक गोले की विज्या से आधी हो, तो गोलियों की संख्या क्या है?

Options:

- 1) 32
- 2) 16
- 3) 128
- 4) 64

Correct Answer: 64**Candidate Answer:** [NOT ANSWERED]

QID : 129 - A chord of length 24 cm is drawn in a circle of diameter 40 cm. Another chord of length 32 cm is drawn in the same circle parallel to 24 cm long chord. What is the minimum distance (in cm) between them?

एक 40 से.मी. परिधि वाले वृत्त पर 24 से.मी. की एक जीवा खींची जाती है। एक और जीवा जिसकी लम्बाई 32 से.मी. है उसी वृत्त में 24 से.मी. लम्बाई वाली जीवा के समानांतर खींची जाती है। दोनों के बीच की न्यूनतम दूरी (से.मी. में) कितनी होगी?

Options:

- 1) 4
- 2) 2
- 3) 8
- 4) 3

Correct Answer: 4**Candidate Answer:** [NOT ANSWERED]

QID : 130 - If the length of a rectangle is increased by 50%, then by how much percent its breadth should be reduced to keep the area the same?

यदि एक आयत की लम्बाई को 50 प्रतिशत बढ़ाया जाता है, तो उसकी चौड़ाई को कितना कम किया जाना चाहिए जिससे कि उसका क्षेत्रफल अपरिवर्तित रहे?

Options:

- 1) 50
- 2) $33\frac{1}{3}$
- 3) $66\frac{1}{6}$
- 4) $37\frac{1}{6}$

Correct Answer:

$$33\frac{1}{3}$$

Candidate Answer: [NOT ANSWERED]**QID : 131 -**

If $\frac{a}{3} = 1 - \frac{3}{a}$, then what is the value of a^5 ?

यदि $\frac{a}{3} = 1 - \frac{3}{a}$, हो, तो a^5 का मान क्या है?

01/08/2017

Staff Selection Commission

Options:

1) - 81

2) 148

3) - 243

4) 227

Correct Answer: - 243**Candidate Answer:** [NOT ANSWERED]**QID : 132 -**If $a + b = 6x$, then what is the value of

$$\frac{x}{(a-3x)} + \frac{x}{(b-3x)} ?$$

यदि $a + b = 6x$ हो, तो $\frac{x}{(a-3x)} + \frac{x}{(b-3x)}$ का मान

क्या है?

Options:

1) 1

2) 0

3) 2

4) - 1

Correct Answer: 0**Candidate Answer:** [NOT ANSWERED]**QID : 133 -** If $x^3 + 6x^2 + 12x = 19$, then what is the value of x^3 ?यदि $x^3 + 6x^2 + 12x = 19$ हो, तो x^3 का मान क्या है?**Options:**

1) 8

2) 27

3) - 1

4) 1

Correct Answer: 1**Candidate Answer:** 1**QID : 134 -**If $x + \frac{1}{x} = 3$ ($x \neq 0$), then what is the value of $\frac{(x^2 - x + 1)}{5x}$?यदि $x + \frac{1}{x} = 3$ ($x \neq 0$) हो, तो $\frac{(x^2 - x + 1)}{5x}$ का मान क्या है?**Options:**1) $\frac{2}{5}$ 2) $\frac{3}{5}$ 3) $\frac{4}{5}$ 4) $\frac{1}{5}$ **Correct Answer:** $\frac{2}{5}$ **Candidate Answer:** [NOT ANSWERED]**QID : 135 -** If $x^2 + 16 = -4x$, then what is the value of $x^3 - 64$?यदि $x^2 + 16 = -4x$ हो, तो $x^3 - 64$ का मान क्या है?**Options:**

1) 128

2) 0

3) 64

4) 256

Correct Answer: 0

01/08/2017

Staff Selection Commission

Candidate Answer: 0

QID : 136 - PQRS is a rectangle, A, B, C and D are the mid points of sides PQ, QR, RS and PS respectively. If area of ΔPQR is 48 cm^2 , then what is the area (in cm^2) of ABCD?

PQRS एक आयत है, A, B, C तथा D क्रमशः भुजाओं PQ, QR, RS तथा PS के मध्य बिन्दु हैं। यदि ΔPQR का क्षेत्रफल 48 से.मी.^2 है, तो ABCD का क्षेत्रफल (से.मी.² में) क्या है?

Options:

- 1) 24
- 2) 6
- 3) 16
- 4) 12

Correct Answer: 24

Candidate Answer: 12

QID : 137 - If PA is the median of the triangle PQR and G be the centroid, then what is the ratio of $(PA + GA) : (PG - GA)$?

यदि PA, त्रिभुज PQR की माध्यिका तथा G केंद्रक हो, तो $(PA + GA) : (PG - GA)$ का अनुपात क्या है?

Options:

- 1) 4 : 1
- 2) 3 : 1
- 3) 2 : 1
- 4) 3 : 2

Correct Answer: 4 : 1

Candidate Answer: 3 : 2

QID : 138 - In a ΔPQR , PD is the median and G is centroid. If $PG = 24 \text{ cm}$, then what is the length (in cm) of PD?

ΔPQR में, PD एक माध्यिका तथा G केंद्रक है। यदि $PG = 24 \text{ से.मी.}$ हो, तो PD की लम्बाई (से.मी. में) क्या है?

Options:

- 1) 48
- 2) 36
- 3) 60
- 4) 72

Correct Answer: 36

Candidate Answer: [NOT ANSWERED]

QID : 139 - The tangents drawn at the point P and Q of a circle centered at O meet at A. If $\angle POQ = 120^\circ$, then what is the ratio of $\angle PAQ : \angle PAO$?

एक वृत्त जिसका केन्द्र O है की बिन्दु P तथा Q पर एक स्पर्श रेखा खींची जाती है, जो बिन्दु A पर मिलती है। यदि $\angle POQ = 120^\circ$ हो, तो $\angle PAQ : \angle PAO$ का अनुपात क्या है?

Options:

- 1) 2 : 3
- 2) 4 : 1
- 3) 2 : 1
- 4) 5 : 2

Correct Answer: 2 : 1

Candidate Answer: [NOT ANSWERED]

QID : 140 - ABCD is a trapezium, such that $AB = CD$ and $AD \parallel BC$. $AD = 10 \text{ cm}$ and $BC = 18 \text{ cm}$. If the area of ABCD is 70 cm^2 , then what is the value (in cm) of CD?

ABCD एक असमांतरभुज है, जिसमें $AB = CD$ तथा $AD \parallel BC$ है। $AD = 10 \text{ से.मी.}$ तथा $BC = 18 \text{ से.मी.}$ है। यदि ABCD का क्षेत्रफल 70 से.मी.^2 है, तो CD का मान (से.मी. में) क्या है?

Options:

- 1) 5
- 2) $\sqrt{29}$
- 3) $\sqrt{41}$
- 4) 6

Correct Answer: $\sqrt{41}$

Candidate Answer: 5

QID : 141 - What is the value of $\sin(30 + x) - \cos(60 - x)$?

$\sin(30 + x) - \cos(60 - x)$ का मान क्या है?

Options:

- 1) 1
- 2) 2
- 3) 0
- 4) $1/2$

Correct Answer: 0

01/08/2017

Staff Selection Commission

Candidate Answer: [NOT ANSWERED]

QID : 142 - What is the least value of $15 \cos^2 \theta + 17 \sin^2 \theta$?15 $\cos^2 \theta + 17 \sin^2 \theta$ का न्यूनतम मान क्या है?

Options:

- 1) 14
- 2) 15
- 3) 2
- 4) 18

Correct Answer: 15

Candidate Answer: [NOT ANSWERED]

QID : 143 -

If $\cos 37^\circ = \frac{a}{b}$, then what is the value of $\operatorname{cosec} 37^\circ - \cos 53^\circ$?

यदि $\cos 37^\circ = \frac{a}{b}$ हो, तो $\operatorname{cosec} 37^\circ - \cos 53^\circ$ का मान क्या है?

Options:

1)

$$\frac{b^2 - a^2}{ab}$$

2)

$$\frac{a^2}{b\sqrt{a^2 + b^2}}$$

3)

$$\frac{b\sqrt{a^2 + b^2}}{a}$$

4)

$$\frac{a^2}{b\sqrt{b^2 - a^2}}$$

Correct Answer:

$$\frac{a^2}{b\sqrt{b^2 - a^2}}$$

Candidate Answer: [NOT ANSWERED]

QID : 144 -

If $\tan \theta = \frac{5}{9}$, then what is the value of

$$\frac{5 \sin \theta + 9 \cos \theta}{5 \sin \theta - 9 \cos \theta}?$$

यदि $\tan \theta = \frac{5}{9}$ हो, तो $\frac{5 \sin \theta + 9 \cos \theta}{5 \sin \theta - 9 \cos \theta}$ का मान क्या है?

Options:

1) 17/12

2) - 53/28

3) - 27/25

4) 31/23

Correct Answer: - 53/28

Candidate Answer: [NOT ANSWERED]

01/08/2017

Staff Selection Commission

QID : 145 -

What is the value of $\tan y$ if $\frac{\sin y + \cos y}{\sin y - \cos y} = 3$?

यदि $\frac{\sin y + \cos y}{\sin y - \cos y} = 3$ हो, तो $\tan y$ का मान क्या है?

Options:

1) 1

2) $1/\sqrt{3}$ 3) $1/2$

4) 2

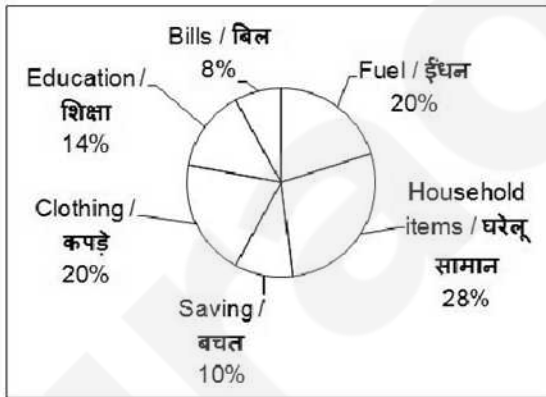
Correct Answer: 2

Candidate Answer: [NOT ANSWERED]

QID : 146 -

The given pie chart shows the monthly expenditure on various items and monthly saving of a household. The same distribution is followed for all the months of the year.

दिए गए वृत्त चित्र में एक गृहिणी के विभिन्न घरेलू सामान पर मासिक व्यय तथा मासिक बचत को दर्शाया गया है। वर्ष के सभी महीनों के लिए समान वितरण लागू होता है।



If monthly income is Rs 50000, then how much is spent (in Rs) on Fuel?

यदि मासिक आय 50000 रु. है, तो ईंधन पर कितना व्यय (रु. में) हुआ है?

Options:

1) 12000

2) 10000

3) 13500

4) 15000

Correct Answer: 10000

Candidate Answer: [NOT ANSWERED]

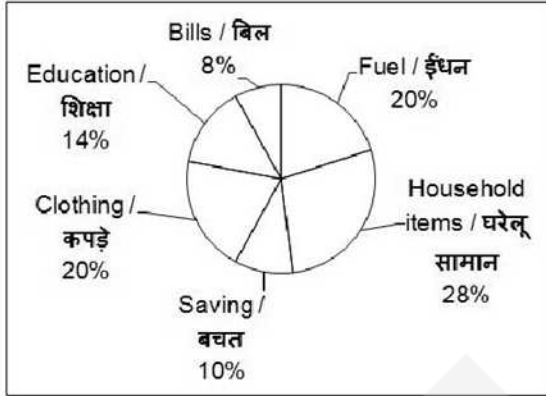
01/08/2017

Staff Selection Commission

QID : 147 -

The given pie chart shows the monthly expenditure on various items and monthly saving of a household. The same distribution is followed for all the months of the year.

दिए गए वृत्त चित्र में एक गृहिणी के विभिन्न घरेलू सामान पर मासिक व्यय तथा मासिक बचत को दर्शाया गया है। वर्ष के सभी महीनों के लिए समान वितरण लागू होता है।



If monthly income is Rs 65000, then what is the difference (in Rs) between expenditure on Household items and Clothing?

यदि मासिक आय 65000 रु. है, तो घरेलू सामान तथा कपड़ों पर होने वाले व्यय (रु. में) मध्य कितना अंतर है?

Options:

- 1) 5200
- 2) 6500
- 3) 7200
- 4) 4500

Correct Answer: 5200

Candidate Answer: [NOT ANSWERED]

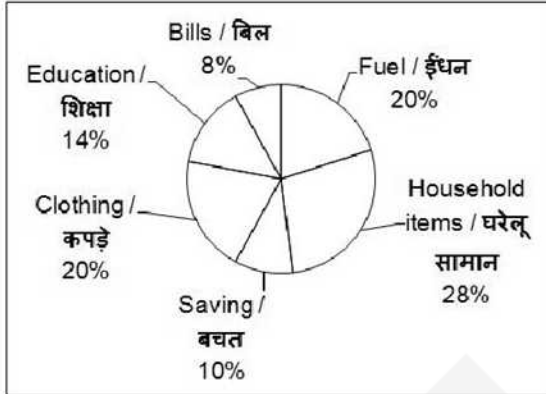
01/08/2017

Staff Selection Commission

QID : 148 -

The given pie chart shows the monthly expenditure on various items and monthly saving of a household. The same distribution is followed for all the months of the year.

दिए गए वृत्त चित्र में एक गृहिणी के विभिन्न घरेलू सामान पर मासिक व्यय तथा मासिक बचत को दर्शाया गया है। वर्ष के सभी महीनों के लिए समान वितरण लागू होता है।



If Rs 2400 are saved per month, then what is the monthly salary (in Rs) of the household?

यदि प्रतिमाह 2400 रु. की बचत की जाती है, तो घर की मासिक आय (रु. में) क्या है?

Options:

- 1) 24000
- 2) 20000
- 3) 30000
- 4) 18000

Correct Answer: 24000

Candidate Answer: [NOT ANSWERED]

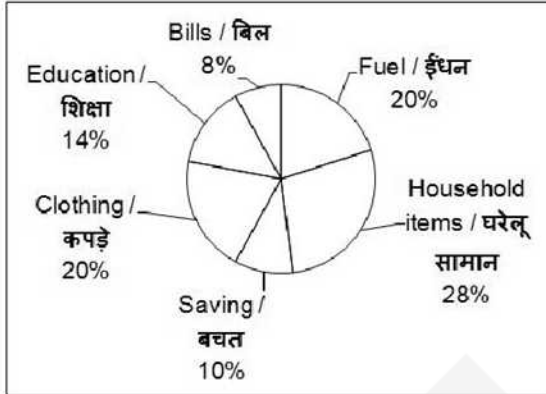
01/08/2017

Staff Selection Commission

QID : 149 -

The given pie chart shows the monthly expenditure on various items and monthly saving of a household. The same distribution is followed for all the months of the year.

दिए गए वृत्त चित्र में एक गृहिणी के विभिन्न घरेलू सामान पर मासिक व्यय तथा मासिक बचत को दर्शाया गया है। वर्ष के सभी महीनों के लिए समान वितरण लागू होता है।



If the difference in monthly expenditure on Fuel and Bills is Rs 4800, then what is the annual income of household?

यदि ईंधन तथा बिल पर होने वाले मासिक व्यय में 4800 रु. का अंतर है, तो घर की वार्षिक आय (रु. में) कितनी है?

Options:

- 1) 660000
- 2) 600000
- 3) 540000
- 4) 480000

Correct Answer: 480000

Candidate Answer: [NOT ANSWERED]

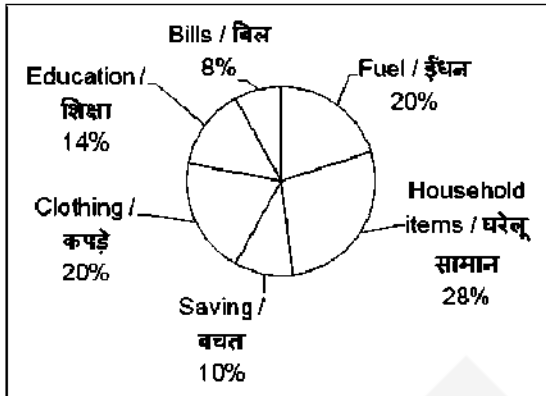
01/08/2017

Staff Selection Commission

QID : 150 -

The given pie chart shows the monthly expenditure on various items and monthly saving of a household. The same distribution is followed for all the months of the year.

दिए गए चूँच चित्र में एक गृहिणी के विभिन्न घरेलू सामान पर मासिक व्यय तथा मासिक बचत को दर्शाया गया है। वर्ष के सभी महीनों के लिए समान वितरण लागू होता है।



If the difference in monthly expenditure on clothing and education is Rs 9000, then what is the difference (in Rs) in yearly saving and yearly expenditure on Bills?

यदि कपड़ों पर होने वाले मासिक व्यय का अंतर 9000 रु. है, तो वार्षिक बचत तथा बिल पर होने वाले वार्षिक व्यय का अंतर (रु. में) क्या है?

Options:

1) 64000

2) 76000

3) 36000

4) 48000

Correct Answer: 36000

Candidate Answer: [NOT ANSWERED]

QID : 151 - In the following question, some part of the sentence may have errors. Find out which part of the sentence has an error and select the appropriate option. If a sentence is free from error, select 'No Error'.

Dr. Ritu was explain the (1)/ benefits of doing yoga at (2)/ least four times a week. (3)/ No Error (4)

Options:

1) 1

2) 2

3) 3

4) 4

Correct Answer: 1

Candidate Answer: 1

QID : 152 - In the following question, some part of the sentence may have errors. Find out which part of the sentence has an error and select the appropriate option. If a sentence is free from error, select 'No Error'.

After 70 years of independence many (1)/ socio-economic problems is still (2)/ remaining to be solved in India. (3)/ No error (4)

Options:

1) 1

2) 2

3) 3

4) 4

Correct Answer: 2

Candidate Answer: 4

QID : 153 - In the following question, some part of the sentence may have errors. Find out which part of the sentence has an error and select the appropriate option. If a sentence is free from error, select 'No Error'.

Gurgaon is full of tall buildings which is (1)/ at once its strength as well as weakness (2)/ depending upon how one looks at it. (3)/ No Error (4)

01/08/2017

Staff Selection Commission

Options:

- 1) 1
- 2) 2
- 3) 3
- 4) 4

Correct Answer: 3**Candidate Answer:** [NOT ANSWERED]

QID : 154 - In the following question, some part of the sentence may have errors. Find out which part of the sentence has an error and select the appropriate option. If a sentence is free from error, select 'No Error'.

Unless you do not (1)/ give up bad habits (2)/ you will suffer. (3)/ No Error (4)

Options:

- 1) 1
- 2) 2
- 3) 3
- 4) 4

Correct Answer: 1**Candidate Answer:** 1

QID : 155 - In the following question, some part of the sentence may have errors. Find out which part of the sentence has an error and select the appropriate option. If a sentence is free from error, select 'No Error'.

Vegetables as well as fruits (1)/ have fallen considerably (2)/ in prices in recent days. (3)/ No Error (4)

Options:

- 1) 1
- 2) 2
- 3) 3
- 4) 4

Correct Answer: 4**Candidate Answer:** [NOT ANSWERED]

QID : 156 - In the following question, the sentence given with blank to be filled in with an appropriate word. Select the correct alternative out of the four and indicate it by selecting the appropriate option.

Everyone was greatly assured _____ Roshni's awkward behaviour during the wedding ceremony.

Options:

- 1) on
- 2) at
- 3) of
- 4) for

Correct Answer: of**Candidate Answer:** [NOT ANSWERED]

QID : 157 - In the following question, the sentence given with blank to be filled in with an appropriate word. Select the correct alternative out of the four and indicate it by selecting the appropriate option.

Deepak agreed _____ all my views but his parents did not.

Options:

- 1) of
- 2) with
- 3) on
- 4) to

Correct Answer: to**Candidate Answer:** to

QID : 158 - In the following question, the sentence given with blank to be filled in with an appropriate word. Select the correct alternative out of the four and indicate it by selecting the appropriate option.

It was very hot, you _____ your jackets.

Options:

- 1) need not bring
- 2) need not have brought
- 3) need not brought
- 4) need not had been brought

Correct Answer: need not have brought**Candidate Answer:** [NOT ANSWERED]

QID : 159 - In the following question, the sentence given with blank to be filled in with an appropriate word. Select the correct alternative out of the four and indicate it by selecting the appropriate option.

I do not know where Akansha lives because I have been _____ of touch for quite sometime.

Options:

- 1) out
- 2) hardly
- 3) scarcely
- 4) her

Correct Answer: out**Candidate Answer:** [NOT ANSWERED]

01/08/2017

Staff Selection Commission

QID : 160 - In the following question, the sentence given with blank to be filled in with an appropriate word. Select the correct alternative out of the four and indicate it by selecting the appropriate option.

Rahul was _____ with a natural talent for painting.

Options:

- 1) given
- 2) entrusted
- 3) showered
- 4) endowed

Correct Answer: endowed

Candidate Answer: [NOT ANSWERED]

QID : 161 - In the following question, out of the four alternatives, select the word similar in meaning to the word given.

Fatuous

Options:

- 1) prudent
- 2) irrational
- 3) senile
- 4) renewal

Correct Answer: irrational

Candidate Answer: [NOT ANSWERED]

QID : 162 - In the following question, out of the four alternatives, select the word similar in meaning to the word given.

Bustle

Options:

- 1) quiet
- 2) fragile
- 3) haste
- 4) gloomy

Correct Answer: haste

Candidate Answer: [NOT ANSWERED]

QID : 163 - In the following question, out of the four alternatives, select the word similar in meaning to the word given.

Sauciness

Options:

- 1) assistance
- 2) impudence
- 3) meekness
- 4) venerate

Correct Answer: impudence

Candidate Answer: [NOT ANSWERED]

QID : 164 -

In the following question, out of the four alternatives, select the word similar in meaning to the word given.

Congruous

Options:

- 1) absurd
- 2) balanced
- 3) hidden
- 4) diligent

Correct Answer: balanced

Candidate Answer: [NOT ANSWERED]

QID : 165 -

In the following question, out of the four alternatives, select the word similar in meaning to the word given.

Contradict

Options:

- 1) sanction
- 2) repose
- 3) despicable
- 4) confront

Correct Answer: confront

Candidate Answer: [NOT ANSWERED]

QID : 166 -

In the following question, out of the four alternatives, select the word opposite in meaning to the word given.

Trivial

01/08/2017

Staff Selection Commission

Options:

- 1) shallow
- 2) profound
- 3) immature
- 4) reckless

Correct Answer: profound**Candidate Answer:** [NOT ANSWERED]**QID : 167 -**

In the following question, out of the four alternatives, select the word opposite in meaning to the word given.

Flagitious**Options:**

- 1) immoral
- 2) virtuous
- 3) profligate
- 4) displease

Correct Answer: virtuous**Candidate Answer:** [NOT ANSWERED]**QID : 168 -**

In the following question, out of the four alternatives, select the word opposite in meaning to the word given.

Abridge**Options:**

- 1) stretch
- 2) curtail
- 3) pacify
- 4) violate

Correct Answer: stretch**Candidate Answer:** [NOT ANSWERED]**QID : 169 -**

In the following question, out of the four alternatives, select the word opposite in meaning to the word given.

Solicit**Options:**

- 1) sanction
- 2) scorn
- 3) prohibit
- 4) disguise

Correct Answer: prohibit**Candidate Answer:** [NOT ANSWERED]**QID : 170 -**

In the following question, out of the four alternatives, select the word opposite in meaning to the word given.

Substantial**Options:**

- 1) doubtful
- 2) reliable
- 3) florid
- 4) enormous

Correct Answer: doubtful**Candidate Answer:** [NOT ANSWERED]**QID : 171 -** In the following question, out of the four alternatives, select the alternative which best expresses the meaning of the idiom/phrase.**a green horn****Options:**

- 1) an inexperienced man
- 2) a dangerous man
- 3) suspicious man
- 4) a wise person

Correct Answer: an inexperienced man**Candidate Answer:** an inexperienced man**QID : 172 -** In the following question, out of the four alternatives, select the alternative which best expresses the meaning of the idiom/phrase.**to paddle one's own canoe**

01/08/2017

Staff Selection Commission

Options:

- 1) thoughtful
- 2) manage independently
- 3) to praise oneself
- 4) working vigorously

Correct Answer: manage independently**Candidate Answer:** [NOT ANSWERED]**QID : 173** - In the following question, out of the four alternatives, select the alternative which best expresses the meaning of the idiom/phrase.**to keep the pot****Options:**

- 1) to sharper my wits
- 2) to be cautious
- 3) to keep controversy alive
- 4) to repent

Correct Answer: to keep controversy alive**Candidate Answer:** [NOT ANSWERED]**QID : 174** - In the following question, out of the four alternatives, select the alternative which best expresses the meaning of the idiom/phrase.**to beat the air****Options:**

- 1) to settle a dispute
- 2) to gamble
- 3) to make efforts that are useless
- 4) to try to do the impossible

Correct Answer: to make efforts that are useless**Candidate Answer:** to try to do the impossible**QID : 175** - In the following question, out of the four alternatives, select the alternative which best expresses the meaning of the idiom/phrase.**throw a spanner****Options:**

- 1) revert
- 2) disinterested
- 3) sabotage
- 4) boasting

Correct Answer: sabotage**Candidate Answer:** [NOT ANSWERED]**QID : 176** - Improve the bracketed part of the sentence.

Sunil didn't pay any heed to his superior's instructions, (I did neither).

Options:

- 1) nor did I
- 2) neither didn't I
- 3) I either did
- 4) No improvement

Correct Answer: nor did I**Candidate Answer:** No improvement**QID : 177** - Improve the bracketed part of the sentence.

The Arabian Nights (have been written) by Edward William Lane.

Options:

- 1) are being written
- 2) has been written
- 3) have written
- 4) No improvement

Correct Answer: has been written**Candidate Answer:** have written**QID : 178** - Improve the bracketed part of the sentence.

Ashina (hesitated to listen to) what her elder sister was saying.

Options:

- 1) hesitating to listen to
- 2) hesitates in listening to
- 3) hesitate listened to
- 4) No improvement

Correct Answer: No improvement**Candidate Answer:** hesitate listened to**QID : 179** - Improve the bracketed part of the sentence.

Nitin assured Ankit that he (would look at) his work while he was on leave.

01/08/2017

Staff Selection Commission

Options:

- 1) would over look
- 2) would look after
- 3) will look
- 4) No improvement

Correct Answer: would look after**Candidate Answer:** [NOT ANSWERED]**QID : 180** - Improve the bracketed part of the sentence.**(When the weather was)** cold, I wear monkey cap.**Options:**

- 1) When weather is
- 2) When the weather is
- 3) While the weather is
- 4) No improvement

Correct Answer: When weather is**Candidate Answer:** When the weather is**QID : 181** - In the following question, out of the four alternatives, select the alternative which is the best substitute of the phrase.**Lifeless objects****Options:**

- 1) amateur
- 2) inanimate
- 3) alien
- 4) amnesty

Correct Answer: inanimate**Candidate Answer:** [NOT ANSWERED]**QID : 182** - In the following question, out of the four alternatives, select the alternative which is the best substitute of the phrase.**A court or open space usually rectangular and enclosed by a building****Options:**

- 1) quadragenarian
- 2) quadrilateral
- 3) quadrangle
- 4) quadruped

Correct Answer: quadrangle**Candidate Answer:** [NOT ANSWERED]**QID : 183** - In the following question, out of the four alternatives, select the alternative which is the best substitute of the phrase.**Bringing about gentle and painless death from incurable disease****Options:**

- 1) euthanasia
- 2) sty
- 3) canicide
- 4) suicide

Correct Answer: euthanasia**Candidate Answer:** [NOT ANSWERED]**QID : 184** - In the following question, out of the four alternatives, select the alternative which is the best substitute of the phrase.**One who lives on fish****Options:**

- 1) carnivorous
- 2) baccivorous
- 3) aurivorous
- 4) piscivorous

Correct Answer: piscivorous**Candidate Answer:** [NOT ANSWERED]**QID : 185** - In the following question, out of the four alternatives, select the alternative which is the best substitute of the phrase.**Line at which the earth or sea and sky seem to meet****Options:**

- 1) nadir
- 2) zenith
- 3) horizon
- 4) trivet

Correct Answer: horizon**Candidate Answer:** [NOT ANSWERED]**QID : 186** - In the following question, four words are given out of which one word is incorrectly spelt. Select the incorrectly spelt word.

01/08/2017

Staff Selection Commission

Options:

- 1) stratagem
- 2) repentance
- 3) corrigendum
- 4) alliteration

Correct Answer: repentance**Candidate Answer:** [NOT ANSWERED]**QID : 187** - In the following question, four words are given out of which one word is incorrectly spelt. Select the incorrectly spelt word.**Options:**

- 1) naphthalene
- 2) impeccable
- 3) stupefy
- 4) psychiatrist

Correct Answer: naphthalene**Candidate Answer:** [NOT ANSWERED]**QID : 188** - In the following question, four words are given out of which one word is incorrectly spelt. Select the incorrectly spelt word.**Options:**

- 1) fulfil
- 2) wilful
- 3) skeful
- 4) shameful

Correct Answer: skeful**Candidate Answer:** [NOT ANSWERED]**QID : 189** - In the following question, four words are given out of which one word is incorrectly spelt. Select the incorrectly spelt word.**Options:**

- 1) sergant
- 2) pedestal
- 3) scavenger
- 4) luminescent

Correct Answer: sergant**Candidate Answer:** [NOT ANSWERED]**QID : 190** - In the following question, four words are given out of which one word is incorrectly spelt. Select the incorrectly spelt word.**Options:**

- 1) melliflucence
- 2) centenarian
- 3) plebisite
- 4) analysable

Correct Answer: plebisite**Candidate Answer:** [NOT ANSWERED]**QID : 191** - In the following passage some of the words have been left out. Read the passage carefully and select the correct answer for the given blank out of the four alternatives.

A _____ is made, not born. The process begins when someone hits upon a bright new way of stating a _____ experience. At that point the remark is an _____. But it is particularly _____ as well as catchy, the saying receives wide circulation as verbal coin. Soon it is likely to be _____ from overwork.

A _____ is made, not born.

Options:

- 1) nuance
- 2) coinage
- 3) cliché
- 4) current

Correct Answer: cliché**Candidate Answer:** [NOT ANSWERED]**QID : 192** - In the following passage some of the words have been left out. Read the passage carefully and select the correct answer for the given blank out of the four alternatives.

A _____ is made, not born. The process begins when someone hits upon a bright new way of stating a _____ experience. At that point the remark is an _____. But it is particularly _____ as well as catchy, the saying receives wide circulation as verbal coin. Soon it is likely to be _____ from overwork.

new way of stating a _____ experience.

Options:

- 1) common
- 2) authentic
- 3) mental
- 4) rational

Correct Answer: common**Candidate Answer:** [NOT ANSWERED]

01/08/2017

Staff Selection Commission

QID : 193 - In the following passage some of the words have been left out. Read the passage carefully and select the correct answer for the given blank out of the four alternatives.

A _____ is made, not born. The process begins when someone hits upon a bright new way of stating a _____ experience. At that point the remark is an _____. But it is particularly _____ as well as catchy, the saying receives wide circulation as verbal coin. Soon it is likely to be _____ from overwork.

the remark is an _____.

Options:

- 1) epigram
- 2) epitaph
- 3) epilogue
- 4) epicenter

Correct Answer: epigram

Candidate Answer: [NOT ANSWERED]

QID : 194 - In the following passage some of the words have been left out. Read the passage carefully and select the correct answer for the given blank out of the four alternatives.

A _____ is made, not born. The process begins when someone hits upon a bright new way of stating a _____ experience. At that point the remark is an _____. But it is particularly _____ as well as catchy, the saying receives wide circulation as verbal coin. Soon it is likely to be _____ from overwork.

it is particularly _____ as well as catchy

Options:

- 1) vague
- 2) apt
- 3) ingenuine
- 4) emotional

Correct Answer: apt

Candidate Answer: [NOT ANSWERED]

QID : 195 - In the following passage some of the words have been left out. Read the passage carefully and select the correct answer for the given blank out of the four alternatives.

A _____ is made, not born. The process begins when someone hits upon a bright new way of stating a _____ experience. At that point the remark is an _____. But it is particularly _____ as well as catchy, the saying receives wide circulation as verbal coin. Soon it is likely to be _____ from overwork.

likely to be _____ from overwork.

Options:

- 1) judged
- 2) suffering
- 3) overlooked
- 4) inducing

Correct Answer: suffering

Candidate Answer: [NOT ANSWERED]

QID : 196 - A passage is given with five questions following it. Read the passage carefully and select the best answer to each question out of the given four alternatives.

The rural economy is an important segment of the ecosystem and accounts for around 70 percent of employment and 50 percent of GDP with agriculture being the main driver followed by services and manufacturing. It is largely unorganized and hence those working in rural India or consuming in this economy are a different category of economic agents driven by different factors. The economy is quite complex in so far as the fact that cash dominates in terms of transactions and while there has been some intrusion of the use of credit (kisan) and debit cards and ATMs, dependence on technology driven payments system is limited. This has hence also become a haven for routing black money both in terms of seeking tax exemptions by channeling funds, to convert to legitimate funds. But a lot of black money gets into land and ' apparent rural activity ' .

Now consider some aspects of this economy and the cash conundrum. Almost all transactions in the mandis (there are above 7,000 organized ones and over double the number that is unorganized), are based on cash as it is easy to use. The farmers prefer to receive cash and while some do take in cheques there is a sense of doubt if the counter party is unknown. Hence one reason why electronic mandis is a good idea is that payments can also be made through the electronic mode as all transactions would be e-enabled. The recent demonetization has caused significant distortions as farmers are unable to sell their goods. This has happened just when we are in middle of the kharif harvest which involves rice, soybean, cotton, maize, sugarcane, bajra, besides fruits and vegetables which are all year through. The second issue for Indian agriculture is the rabi season which has begun where farmers start sowing their seeds. The issue here is less serious as a large part is backed by credit where the prevalent cash crunch may not matter. It would only be at the margin that farmers may be impacted, and hence the pain here would be secondary.

According to the passage, which among the following is the major contributor to India's GDP growth?

Options:

- 1) Services
- 2) Agriculture
- 3) Manufacturing
- 4) FDI's

Correct Answer: Agriculture

Candidate Answer: Agriculture

01/08/2017

Staff Selection Commission

QID : 197 - A passage is given with five questions following it. Read the passage carefully and select the best answer to each question out of the given four alternatives.

The rural economy is an important segment of the ecosystem and accounts for around 70 percent of employment and 50 percent of GDP with agriculture being the main driver followed by services and manufacturing. It is largely unorganized and hence those working in rural India or consuming in this economy are a different category of economic agents driven by different factors. The economy is quite complex in so far as the fact that cash dominates in terms of transactions and while there has been some intrusion of the use of credit (kisan) and debit cards and ATMs, dependence on technology driven payments system is limited. This has hence also become a haven for routing black money both in terms of seeking tax exemptions by channeling funds, to convert to legitimate funds. But a lot of black money gets into land and ' apparent rural activity ' .

. Now consider some aspects of this economy and the cash conundrum. Almost all transactions in the mandis (there are above 7,000 organized ones and over double the number that is unorganized), are based on cash as it is easy to use. The farmers prefer to receive cash and while some do take in cheques there is a sense of doubt if the counter party is unknown. Hence one reason why electronic mandis is a good idea is that payments can also be made through the electronic mode as all transactions would be e-enabled. The recent demonetization has caused significant distortions as farmers are unable to sell their goods. This has happened just when we are in middle of the kharif harvest which involves rice, soybean, cotton, maize, sugarcane, bajra, besides fruits and vegetables which are all year through. The second issue for Indian agriculture is the rabi season which has begun where farmers start sowing their seeds. The issue here is less serious as a large part is backed by credit where the prevalent cash crunch may not matter. It would only be at the margin that farmers may be impacted, and hence the pain here would be secondary.

What has become a haven for routing black money in India?

Options:

- 1) Cash transactions over digital cash transactions
- 2) Intrusion of credit cards
- 3) Prevailing debit cards
- 4) Technology driven payment

Correct Answer: Cash transactions over digital cash transactions

Candidate Answer: Prevailing debit cards

QID : 198 - A passage is given with five questions following it. Read the passage carefully and select the best answer to each question out of the given four alternatives.

The rural economy is an important segment of the ecosystem and accounts for around 70 percent of employment and 50 percent of GDP with agriculture being the main driver followed by services and manufacturing. It is largely unorganized and hence those working in rural India or consuming in this economy are a different category of economic agents driven by different factors. The economy is quite complex in so far as the fact that cash dominates in terms of transactions and while there has been some intrusion of the use of credit (kisan) and debit cards and ATMs, dependence on technology driven payments system is limited. This has hence also become a haven for routing black money both in terms of seeking tax exemptions by channeling funds, to convert to legitimate funds. But a lot of black money gets into land and ' apparent rural activity ' .

. Now consider some aspects of this economy and the cash conundrum. Almost all transactions in the mandis (there are above 7,000 organized ones and over double the number that is unorganized), are based on cash as it is easy to use. The farmers prefer to receive cash and while some do take in cheques there is a sense of doubt if the counter party is unknown. Hence one reason why electronic mandis is a good idea is that payments can also be made through the electronic mode as all transactions would be e-enabled. The recent demonetization has caused significant distortions as farmers are unable to sell their goods. This has happened just when we are in middle of the kharif harvest which involves rice, soybean, cotton, maize, sugarcane, bajra, besides fruits and vegetables which are all year through. The second issue for Indian agriculture is the rabi season which has begun where farmers start sowing their seeds. The issue here is less serious as a large part is backed by credit where the prevalent cash crunch may not matter. It would only be at the margin that farmers may be impacted, and hence the pain here would be secondary.

Which among the following is not a kharif crop?

Options:

- 1) Bajra
- 2) Maize
- 3) Rice
- 4) Wheat

Correct Answer: Wheat

Candidate Answer: Wheat

QID : 199 - A passage is given with five questions following it. Read the passage carefully and select the best answer to each question out of the given four alternatives.

The rural economy is an important segment of the ecosystem and accounts for around 70 percent of employment and 50 percent of GDP with agriculture being the main driver followed by services and manufacturing. It is largely unorganized and hence those working in rural India or consuming in this economy are a different category of economic agents driven by different factors. The economy is quite complex in so far as the fact that cash dominates in terms of transactions and while there has been some intrusion of the use of credit (kisan) and debit cards and ATMs, dependence on technology driven payments system is limited. This has hence also become a haven for routing black money both in terms of seeking tax exemptions by channeling funds, to convert to legitimate funds. But a lot of black money gets into land and ' apparent rural activity ' .

. Now consider some aspects of this economy and the cash conundrum. Almost all transactions in the mandis (there are above 7,000 organized ones and over double the number that is unorganized), are based on cash as it is easy to use. The farmers prefer to receive cash and while some do take in cheques there is a sense of doubt if the counter party is unknown. Hence one reason why electronic mandis is a good idea is that payments can also be made through the electronic mode as all transactions would be e-enabled. The recent demonetization has caused significant distortions as farmers are unable to sell their goods. This has happened just when we are in middle of the kharif harvest which involves rice, soybean, cotton, maize, sugarcane, bajra, besides fruits and vegetables which are all year through. The second issue for Indian agriculture is the rabi season which has begun where farmers start sowing their seeds. The issue here is less serious as a large part is backed by credit where the prevalent cash crunch may not matter. It would only be at the margin that farmers may be impacted, and hence the pain here would be secondary.

Why does demonetisation has lesser impact onto the rabi season?

Options:

- 1) Due to tax exemptions
- 2) Due to digital payments
- 3) Due to credit payments
- 4) Huge margins

Correct Answer: Due to credit payments

Candidate Answer: Due to digital payments

01/08/2017

Staff Selection Commission

QID : 200 - A passage is given with five questions following it. Read the passage carefully and select the best answer to each question out of the given four alternatives.

The rural economy is an important segment of the ecosystem and accounts for around 70 percent of employment and 50 percent of GDP with agriculture being the main driver followed by services and manufacturing. It is largely unorganized and hence those working in rural India or consuming in this economy are a different category of economic agents driven by different factors. The economy is quite complex in so far as the fact that cash dominates in terms of transactions and while there has been some intrusion of the use of credit (kisan) and debit cards and ATMs, dependence on technology driven payments system is limited. This has hence also become a haven for routing black money both in terms of seeking tax exemptions by channeling funds, to convert to legitimate funds. But a lot of black money gets into land and 'apparent rural activity'

- Now consider some aspects of this economy and the cash conundrum. Almost all transactions in the mandis (there are above 7,000 organized ones and over double the number that is unorganized), are based on cash as it is easy to use. The farmers prefer to receive cash and while some do take in cheques there is a sense of doubt if the counter party is unknown. Hence one reason why electronic mandis is a good idea is that payments can also be made through the electronic mode as all transactions would be e-enabled. The recent demonetization has caused significant distortions as farmers are unable to sell their goods. This has happened just when we are in middle of the kharif harvest which involves rice, soybean, cotton, maize, sugarcane, bajra, besides fruits and vegetables which are all year through. The second issue for Indian agriculture is the rabi season which has begun where farmers start sowing their seeds. The issue here is less serious as a large part is backed by credit where the prevalent cash crunch may not matter. It would only be at the margin that farmers may be impacted, and hence the pain here would be secondary.

Which of the following is not true in regards to rural economy?

Options:

- 1) It account for major percent in employingment the people of the country.
- 2) It has a technology driven mandis.
- 3) Major transactions are based on cash.
- 4) Demonetization has caused significant distortions in rural economy especially to farmers.

Correct Answer: It has a technology driven mandis.

Candidate Answer: Demonetization has caused significant distortions in rural economy especially to farmers.