



ALIGARH MUSLIM
UNIVERSITY



ALIGARH COACHING CENTRE PVT. LTD.

WHERE EXPECTATION IS CHANGED INTO REALITY...

IIT-JEE | NEET | FOUNDATION | COMMERCE | MANAGEMENT

PREVIOUS YEAR PAPER

AMU Class IX

2022-2023



Aligarh Coaching Cen...



GET IT ON
Google Play

Open

for more details Visit: www.aligarhcoachingcentre.com

HEAD BRANCH:

Abdullah Women's College
Road, Near Marris Road
Chauraha, Aligarh

BRANCH:

Near Kunjilal, Vidhya
Nagar, Ramghat Road,
Aligarh



8534899823

7417102408

(9 CLASS)

2022-2023

PARTICULARS TO BE FILLED IN BY THE CANDIDATE		Question Booklet Number
Name of the Candidate		8104818
Roll Number		
Application Number		
Name of the Centre		HNNX
Centre Code		
Date of the Test		303
Signature of the Candidate		

Maximum Marks : 85

Test Duration : 02 hours

INSTRUCTIONS

- Complete all entries on the cover page and put your signature in the space provided.
 - Use only Ball Point Pen (black / blue) for making entries in the Question Booklet and the OMR Answer Sheet.
1. The Question Booklet consists of 24 pages (including cover sheet) and contains a total of 85 questions (25 questions in Section-I and 60 questions in Section-II). Count the number of pages and questions before attempting the questions. Discrepancy, if any, must immediately be brought to the notice of the Invigilator.
 2. The Test duration as specified above shall be reckoned from the moment of distribution of the question booklets.
 3. Blank space in the Question Booklet may be used for rough work.
 4. Each question is followed by four alternative answers. Select only one answer, which you consider as the most appropriate. Shade the relevant circle against the corresponding question number on the OMR Answer Sheet. Selecting more than one answer for a question, even if one of the selected answers is correct, would result in its being treated as an incorrect answer.
 5. Answers should ONLY be marked on the OMR Answer Sheet. No answer should be written on the Question Booklet.
 6. The candidate is required to separate the original OMR Answer Sheet and its carbonless copy at the perforation carefully after the Admission Test. He / She shall handover the original OMR Answer Sheet and the Admit Card to the Invigilator before leaving his/her seat and take with him/her the carbonless copy of the OMR Answer Sheet and the Question Booklet.
 7. Failure to handover the original OMR Answer Sheet and the Admit Card will lead to cancellation of the candidature.



Section - I

1. He very little when there are strangers present.

- (a) had always spoken
- (b) was always speaking
- (c) is always speaking
- (d) always speaks

2. Choose the most appropriate article to fill in the blank.

I want to be M.P.

- (a) the
- (b) an
- (c) a
- (d) no article

3. The synonym of the word 'coward' is :

- (a) valiant
- (b) chicken
- (c) stalwart
- (d) hero

4. If he wants to win the race, he'll have to push five people.

- (a) around
- (b) past
- (c) away
- (d) in

22A110P)

5. differences on matters of principles, they all agree on the demand of hike in salary.

- (a) Despite of their
- (b) Despite off their
- (c) Despite for their
- (d) Despite their

6. Which sentence is correct ?

- (a) I haven't read none of the letters.
- (b) I have read any of the letters.
- (c) I don't have read any of the letters.
- (d) I haven't read any of the letters.



7. Change the following sentence into Indirect speech :

The Commander said, "Soldiers cease fire".

- (a) The Commander ordered the soldiers to cease fire.
(b) The Commander pleaded the soldiers to cease fire.
(c) The Commander said that cease fire.
(d) The Commander exclaimed to cease fire.

8. If you had come to the theatre last night you the play.

- (a) will enjoy
(b) had enjoyed
(c) would have enjoyed
(d) must have enjoyed

9. The man as well as his wife and children in the accident.

- (a) were injured
(b) has injured
(c) was injured
(d) is injured

10. ہاکی کے چاروں کھیلوں میں ۱۹۲۹ء..... کو پیدا ہوئے۔

- 1904 (b) 1905 (a)
1903 (d) 1906 (c)

(b) دیوالی کے دیپ بجے
(d) یہ ہے میرا ہندوستان

11. حب الوطنی کا پیغام کس نظم میں دیا گیا ہے؟
(a) ماں کا خواب
(c) فلسفی بچے کے لئے نوری

12. قرآن مجید کی ابتدائی تعلیم کہاں ہوئی؟

- (a) علی گڑھ
(b) دہلی
(c) دہرودن
(d) لاہور

13. رسالہ تہذیب الاخلاق جاری کیا تھا؟

- (a) حالی نے
(b) سرسید نے
(c) شبلی نے
(d) غالب نے

14. میگہ دوت اور نکستلا تصانیف کس کی ہیں:

- (a) کالی داس
(b) کبیر داس
(c) سورا داس
(d) دیو داس

15. "آوارہ گرد کی ڈائری" مرزا نے کس کا لکھا ہوا ہے:

- (a) مرزا فرحت اللہ بیگ
(b) بلا واسطی
(c) غلام عباس
(d) ابن انشاء

16. جس میں برکت اللہ بھوپالی کس اخبار کے ایڈیٹر تھے۔

- (a) الہلال
(b) نذر
(c) الانصاف
(d) اسلاک فریڈنی

17. رفیع احمد قدوائی اعلیٰ تعلیم کے لئے کہاں گئے تھے۔

- (a) دلی
(b) علی گڑھ
(c) انگلستان
(d) امریکہ

18. 'उपानह' शब्द का सही अर्थ क्या होगा ?

- (a) पहनना
(b) हाथ
(c) जूता
(d) उपकार

19. 'पिता के पत्र पुत्री के नाम' पुस्तक के लेखक हैं -

- (a) महात्मा गांधी
(b) राजेन्द्र प्रसाद
(c) कगलेश्वर
(d) पं. जवाहर लाल नेहरू

20. निम्नलिखित पंक्तियाँ किस कवि के द्वारा रचित हैं ?

"मेघ आए बड़े बन-उन के सँवर के ।

आगे-आगे नाचती-गाती बयार चली,

दरवाजे - खिड़कियाँ खुलने लगी गली-गली"

- (a) तुलसीदास
(b) रसखान
(c) सर्वेश्वर दयाल सक्सेना
(d) कबीरदास

21. 'को' से किस कारक चिह्न का बोध होता है ?

- (a) कर्म कारक
(b) करण कारक
(c) सम्प्रदान कारक
(d) अधिकरण कारक

22. "कूलन में केलि में कछरण में कुंजन में क्यारिन में कलित कलीन किलकंत है।" इस काव्य-पंक्ति में कौन-सा अलंकार है ?
- (a) अनुप्रास अलंकार (b) रूपक अलंकार
(c) यमक अलंकार (d) श्लेष अलंकार
23. 'तरंगिणी' का पर्यायवाची कौनसा है ?
- (a) संसार (b) पर्वत
(c) नदी (d) सूर्य
24. 'अंगारे उगलना' मुहावरे का सही अर्थ है -
- (a) मुँह से अंगारे निकालना (b) कठोर वचन कहना
(c) आग का फैल जाना (d) ज्वालामुखी फूट जाना
25. 'आजब्ज' शब्द में कौन-सा समास है ?
- (a) कर्मधारय समास (b) बहुव्रीहि समास
(c) अव्ययी भाव समास (d) तत्पुरुष समास
26. A large number of small objects present between Mars and Jupiter and revolves round the sun :
- (a) Comets (b) Asteroids
(c) Meteors (d) Meteorites
27. Bakelite and Melamine are examples of :
- (a) Thermoplastics (b) Thermosetting plastics
(c) Nylon (d) Rayon
28. Which of the following is known as artificial silk ?
- (a) Nylon (b) Rayon
(c) Polyester (d) Taser Silk
29. Iron objects are Galvanized by coating it with
- (a) Chromium (b) Zinc
(c) Aluminium (d) Magnesium

30. Which part of eye controls the amount of light entering into it ?

- (a) Iris
- (b) Cornea
- (c) Pupil
- (d) Retina

31. Which of the following forces is a contact force ?

- (a) Force of gravity
- (b) Magnetic Force
- (c) Force of friction
- (d) Electrostatic Force

32. Splitting of white into its constituent colours is known as :

- (a) dispersion
- (b) interference
- (c) scattering
- (d) diffraction

33. Chlorofluorocarbons (CFC's) are used in :

- (a) Refrigerators
- (b) Aerosol sprays
- (c) Air conditioners
- (d) All the above

34. Which is not a blended fibre ?

- (a) Polycot
- (b) Cotswool
- (c) Polyester
- (d) Terycot

35. Which poisonous gas is formed as a result of incomplete combustion ?

- (a) Carbon monoxide
- (b) Coal gas
- (c) Carbon dioxide
- (d) Nitrogen oxide

36. The two objects rubbed against each other :

- (a) will lose electrons
- (b) will gain electrons
- (c) one will lose and other will gain electrons
- (d) none of these

37. Which of the following disease is not caused by bacteria ?

- (a) Citrus Canker
- (b) Typhoid
- (c) Measles
- (d) Cholera

38. Which of the following chemicals is used as preservative ?

- (a) Sodium Carbonate (b) Sodium Sulphate
(c) Sodium bicarbonate (d) Sodium Benzoate

39. Unit of inheritance in living organisms is :

- (a) Nucleus (b) Nucleolus
(c) Chromosome (d) Gene

40. Which of the following organism is able to fix atmospheric nitrogen ?

- (a) Lactobacillus (b) Rhizopus
(c) Penicillium (d) Rhizobium

41. A disease which is caused by a protozoan is :

- (a) Malaria (b) Polio
(c) Smallpox (d) Tuberculosis

42. Nuclear membrane is absent in :

- (a) Blue green algae cell (b) Animal cell
(c) Plant cell (d) Human cheek cell

43. An endocrine gland which is attached to the brain is :

- (a) Adrenai (b) Thyroid
(c) Pituitary (d) Pancreas

44. The process of loosening of the soil is called :

- (a) Tilling (b) Harvesting
(c) Spraying (d) Weeding

45. Bacteria are organism.

- (a) Multicellular (b) Tricellular
(c) Bicellular (d) Unicellular

46. The best electrical conductor is :

- (a) Silver (b) Gold
(c) Copper (d) Aluminium

47. The main gas present in LPG is :

- (a) Methane (b) Propane
(c) Hexane (d) Butane

48. The species which are at the verge of extinction :

- (a) Endemic (b) Extinct
(c) Endangered (d) None of these

49. Children gain height during :

- (a) Menarche (b) Puberty
(c) Menopause (d) Adolescence

50. The voice box is also called :

- (a) Larynx (b) Mouth
(c) Stomach (d) Heart

51. The water holding capacity is the highest in :

- (a) Sandy soil (b) Loamy soil
(c) Clayey soil (d) Black soil

52. The force acting on a unit area of a surface is called -

- (a) Pressure (b) Energy
(c) Power (d) Inertia

53. Loudness of sound is determined by -

- (a) time period
(b) frequency of vibrating body
(c) amplitude of the vibrating body
(d) number of vibration per second

54. A prism produces -

- (a) Reflection of light (b) Dispersion of light
(c) Scattering of light (d) Refraction of light

55. When electrolysis of water is carried out, water is decomposed into -
- (a) oxygen gas (b) hydrogen gas
- (c) both hydrogen and oxygen gas (d) oxygen and carbon dioxide gas

56. A line graph which is a whole unbroken line is called a :

- (a) Linear Graph (b) Pie Chart
- (c) Histogram (d) Bar-graph

57. If the cost price of 18 chairs be equal to the selling price of 16 chairs, find the loss or gain per cent.

- (a) Gain 12% (b) Loss 12.5%
- (c) Loss 12% (d) Gain 12.5%

58. In what time will Rs. 4400 become Rs. 4576 at 8% per annum interest compounded half yearly ?

- (a) $\frac{2}{3}$ years (b) $\frac{1}{2}$ years
- (c) 3 years (d) $\frac{1}{3}$ years

59. Two circular cylinders of equal volumes have their height in the ratio 1:2. The ratio of their radii is :

- (a) $\sqrt{2} : 1$ (b) $\sqrt{3} : 1$
- (c) $\sqrt{5} : 1$ (d) $\sqrt{7} : 1$

60. The simple interest on a certain sum for $1\frac{1}{2}$ years at 7% per annum exceeds the simple interest on the same sum for 6 months at 10% per annum by Rs. 38.50. The sum is :

- (a) Rs. 500 (b) Rs. 600
- (c) Rs. 700 (d) Rs. 800

61. If a polyhedron has 6 vertices and 12 edges, what is the number of faces it has ?

- (a) 6 (b) 8
(c) 12 (d) 18

62. A and B working together can do a piece of work in 12 days. B alone can do the same work in 20 days, then A alone can do it in :

- (a) 30 days (b) 25 days
(c) 35 days (d) 20 days

63. A tap fills a tank in 6 hours. Another tap empties the full tank in 9 hours. How long will it take to fill the tank, if the tank is empty and both the taps are open ?

- (a) 12 hours (b) 14 hours
(c) 16 hours (d) 18 hours

64. An item marked at Rs. 840 is sold for Rs. 714. The discount % is :

- (a) 10% (b) 15%
(c) 20% (d) 25%

65. The algebraic expression $3x + 2y + 6$ is a :

- (a) Monomial (b) Binomial
(c) Trinomial (d) None of the above

66. The value of $1 + \frac{1}{1 + \frac{1}{1 + \frac{1}{2}}}$ is

- (a) $\frac{29}{19}$ (b) $\frac{10}{19}$
(c) $\frac{29}{10}$ (d) $\frac{10}{9}$

67. The area of a rhombus whose diagonals are of length 10 cm and 8.2 cm is :

- (a) 820 cm² (b) 82 cm²
(c) 41 cm² (d) 410 cm²

68. Find the smallest number by which the number 392 must be multiplied to obtain a perfect cube :

- (a) 9 (b) 5
(c) 7 (d) 3

69. The sum of $1 + 3 + 5 + 7 + 9 + 11 + 13 + 15 + 17 + 19$ is :

- (a) 11^2 (b) 10^2
(c) 110 (d) 120

$$\begin{array}{r} 25 \\ 25 \\ \hline 625 \end{array}$$

70. How many natural numbers lie between 25^2 and 26^2 ?

- (a) 32 (b) 51
(c) 50 (d) None of these

$$\begin{array}{r} 26 \\ 26 \\ \hline 52 \\ 52 \times \\ \hline 676 \end{array}$$

71. What will be the side of the rhombus whose diagonals are 12 cm and 16 cm long ?

- (a) 15 cm (b) 10 cm
(c) 20 cm (d) 13 cm

$$\begin{array}{r} 12 \\ 16 \\ \hline 72 \\ 12 \times 2 \\ \hline 15 \end{array}$$

72. The solution of $0.25(4f - 3) = 0.05(10f - 9)$ is :

- (a) 0.6 (b) 60
(c) -60 (d) -0.6

$$\frac{1}{2} \times 15^2$$

73. Which of the following statement is true ?

- (a) Natural numbers are closed under division
(b) Integers are closed under division
(c) Whole numbers are not closed under division
(d) Rational numbers are closed under division

74. If Rs. 782 be divided into 3 parts, proportional to $\frac{1}{2}, \frac{2}{3}, \frac{3}{4}$, then the first part is :

- (a) Rs. 182 (b) Rs. 190
(c) Rs. 196 (d) Rs. 204

75. The value of $\left(\frac{3^{-2}}{5^{-1}}\right)^{-2}$:

- (a) $\frac{81}{25}$ (b) $\frac{9}{25}$
(c) $\frac{-25}{81}$ (d) $\frac{-25}{9}$

76. The length of the diagonal of a square is 25 cm. Its area is :

- (a) 625 cm^2 (b) 312.5 cm^2
(c) 652.5 cm^2 (d) 321.5 cm^2

82. The factors of $a^2 - 2ab + b^2 - c^2$:

(a) $(a - b - c)(a + b + c)$

(b) $(a - b + c)(a - b + c)$

(c) $(a - b - c)(a - b + c)$

(d) $(a + b - c)(a - b - c)$

83. $\frac{-7}{5} \times \frac{3}{4} \times \frac{16}{21} \times \left(\frac{-20}{9}\right) = ?$

(a) $\frac{4}{3}$

(b) $\frac{-4}{3}$

(c) $\frac{16}{9}$

(d) $\frac{-16}{9}$

84. The difference of the largest and the smallest observation of any data is called :

(a) Range

(b) Class-size

(c) Mean

(d) Median

85. A cone and a cylinder have same height and same radius of their base. The volume of the cone will be :

(a) One fourth of volume of cylinder

(b) One third of volume of cylinder

(c) Half of volume of cylinder

(d) Equal to the volume of cylinder

**CLASS IX ADMISSION TEST - 2022-23
ANSWER KEY**

Q.No.	Answer
1	D
2	B
3	B
4	B
5	D
6	D
7	A
8	C
9	A
10	A
11	D
12	C
13	B
14	A
15	D
16	C
17	B
18	C
19	D
20	C
21	A
22	A
23	C
24	B
25	C
26	B
27	B
28	B
29	B
30	A
31	C
32	A
33	D
34	C
35	A
36	C
37	C
38	D
39	D
40	D

Q.No.	Answer
41	A
42	A
43	C
44	A
45	D
46	A
47	D
48	C
49	D
50	A
51	C
52	A
53	C
54	B
55	C
56	A
57	D
58	C
59	A
60	C
61	B
62	A
63	D
64	B
65	C
66	A
67	C
68	C
69	B
70	C
71	B
72	A
73	C
74	D
75	A
76	B
77	D
78	D
79	A
80	D

Q.No.	Answer
81	B
82	C
83	C
84	A
85	B



AMU-JAMIA ME ADMISSION CHAHIYE ACC Aaiye



Jamia Millia Islamia

RANKER'S ALWAYS FROM ACC

RANK 2022
1

Md Faizan Alam
CLASS: VI -AMU

RANK 2022
1

Mohd Arif
CLASS: IX -AMU

RANK 2021
1

Zoya
CLASS: IX -JNVST

RANK 2021
1

Mohd Ayaan
CLASS: IX -AMU

RANK 2021
1

Yawer Parvez
CLASS: VI -AMU

RANK 2022
13


Utkarsh Satyam
IX -JMI

RANK 2022
13

Alkama Kunain
VI -AMU

RANK 2022
17

Faijan Ali
IX -AMU

RANK 2022
21

Abdul Wahid
VI -AMU

RANK 2022
25

Md Anas
IX -AMU

150+
Selections

AMU-JMI ENTRANCE 2023
ONLINE & OFFLINE (Both Mode)
Enroll Now

CLASS 6th | 9th



ALIGARH COACHING CENTRE PVT. LTD.

HOSTEL AVAILABLE

WHERE EXPECTATION IS CHANGED INTO REALITY...

IIT-JEE | NEET | FOUNDATIONS | COMMERCE | MANAGEMENT | LAW

HEAD BRANCH:

Abdullah Women's College
Road, Near Marris Road
Chauraha, Aligarh

BRANCH:

Near Kunjilal, Vidhya
Nagar, Ramghat Road,
Aligarh



8534899823

7417102408



ALIGARH COACHING CENTRE PVT. LTD.

Where Expectation is Changed Into Reality.....

The Most Trusted Coaching Institute of Uttar Pradesh, India



- ✓ ENGINEERING
- ✓ MEDICAL
- ✓ FOUNDATION
- ✓ COMMERCE
- ✓ MANAGEMENT
- ✓ LAW
- ✓ CUET | AMU | JMI | BHU



Prospectus

COURSES OFFERED

NEET | IIT-JEE | B.Tech

2 Year Program

For Students moving from X to XI

NEET | IIT-JEE | B.Tech

1 Year Program

For Students moving from XI to XII

NEET | IIT-JEE | B.Tech

1 Year Dropper Program

XII Passed Students

Foundations Program

VI | VII | VIII | IX & X

With Entrance Preparations

BOARDS | NTSE | OLYMPIADS | KVPY

Academics Program

XI & XII

- PCB | PCM
- COMMERCE
- HUMANITIES

Management Programs

CAT | MAT | XAT | CMAT | IIFT

AMU-CAT: MBA | MBA (FM) /MTTM

MBA (Hospital Admin) | MBA (Agribusiness) | MBA-JMI

Entrance Programs

VI, IX, XI (AMU, JMI, BHU, Navodaya)

B.Tech | B.Sc | B.Sc (Nursing)/ Paramedical

B.Ed | B.A | B.Com | BA.LLB /CLAT | AILET

ACC TOP RANKER'S 2022-23: NEET-UG | IIT-JEE | B.Tech | B.Sc AMU

AIR

2

B.Tech
JMI



RUPESH CHAUDHARY
AIR 17443 (IIE-MAIN)

AIR

3

B.Sc Agri.
AMU



HAREEM BAIG

AIR

213

NEET-UG

697
720



ASHWANI KUMAR

UNDER CATEGORY

AIR

220

NEET-UG

687
720



SANJAY BISHNOI

AIR

618

JEE ADVANCE



AJAY SINGH

AIR

831

JEE ADVANCE



PRANJUL MISHRA

AIR

5

B.Sc
AMU



MOHD NAVED
Also Rank 16566
in NEET-UG

AIR

***6**

B.TECH
AMU



MOHD ZAID

AIR

1319

NEET-UG

673
720



ANSHIKA

AIR

1369

JEE ADVANCE



NITIN KUMAR

AIR

1822

NEET-UG

668
720



BHAVYA

Gen-EWS

AIR

2258

NEET-UG

610
720



NITIN MOHAN

XII BOARD 2022



MARYAM 94.6% | UMRA SIDDIQUI 93.6% | MADIHA 91.4% | MEHREEN SHARIF 89% | MD SUHAIB 88.4% | ABDUL HADI 88.2% | FAIZA IQBAL 86.8%

X BOARD 2022




HUMERA NISHAT 97.66% CBSE | RAMSHA SIDDIQUI 96.6% ICSE | TAMKEEN KASHIF 91.4% CBSE | JUWAYRIA AMEER 91% CBSE | MANAAL MASOOD 90% CBSE | MARYAM FATIMA 89.2% CBSE | TUBA KHATOON 88.2% CBSE

ALSO SELECTED IN ENTRANCE EXAMS

ACC TOP RANKERS 2022-2023

AMU | JMI: VI & IX 150+ SELECTIONS



AMU | JMI: XI 244+ SELECTIONS



BA.LLB & B.A TOP RANKER'S 68+ SELECTIONS in BA.LLB & 100+ in BA



Do You Know? BA.LLB: 31 STUDENTS OUT OF TOP 120 ONLY FROM ACC


B.Com ENTRANCE



& many more...

RESULTS 2021-22


VI & IX



XI



BA & BA.LLB



RANKER'S ALWAYS FROM ACC

ACC CAT /XAT /IIFT Toppers



Aditya Goyal
Cat 99.4%
Xat 99.6%
PERCENTILE
IIM LUCKNOW



Shahrukh Khan
CAT 99.07
IIFT 99.20
PERCENTILE
IIM KASHIPUR



Shikhar Pahadia
CAT 96.10
PERCENTILE
IIM LUCKNOW



Rehan Riaz
CAT 95.37
PERCENTILE
IIM LUCKNOW

CLASSES AVAILABLE:
OFFLINE & ONLINE (BOTH MODE)

HOSTEL AVAILABLE

RANK 1 spl. MBA AMU-CAT Prachi Verma	RANK 1 spl. MBA (FM) Nazreen	RANK 1 Spl. Education JMI Nazreen	RANK 1 B.Ed JMI Sadiya Shaheen	RANK 1 B.Ed AMU Neelofar Ghaus	RANK 2 MBA JMI Farhan Ahmad
RANK 4 spl. MBA AMU-CAT M. Mashkoor	RANK 5 B.Ed AMU Rehnuma	RANK 8 spl. MBA AMU-CAT Nijta Jain	RANK 11 B.Ed AMU Nameera	RANK 19 MBA AMU-CAT Nakul Gupta Also in MBA (Agri)	RANK 20 MBA AMU-CAT Mohd Aman

Previous ACC Ranker's

TOP RANKER'S 2021	1 Azra Nazim B.Ed JMI	2 and 9 Mehvish Chaud MBA-AMU	4 and 5 Zahra Fatima MBA-AMU	5 B.Ed Deepanshu Dutt AMU	10 MBA Hospital Adm. Maceen/Mazhar AMU	11 B.Ed Mohd Nadeem AMU	15 MBA Lovkush Gauram AMU
TOP RANKER'S 2020	1 MBA AMU Amit Kr. Singh	4 RANK B.Ed AMU Najjis Zehra	5 RANK MBA AMU Sumaira Shafi	14 RANK MBA (Hosp. Mang.) Albab			
TOP RANKER'S 2019	1 RANK Mohd Emad Khan MBA (AMU)	2 RANK Mohd Faraz MBA (JMI)	3 RANK Mohd Areeb Khan MBA (AMU)	7 RANK Saif Ali MBA (Punjab University)			
TOP RANKER'S 2018	1 RANK MBA (AMU)	9 RANK MBA (AMU)	12 RANK MBA (AMU)	13 RANK MBA (AMU)	14 RANK MBA (AMU)	23 RANK MBA (AMU)	64 RANK MBA (AMU)



Head Branch: Abdullah Women's College Road, Near Marris Road Chauraha, Aligarh
Branch: Near Kunjilal, Vidhya Nagar Colony, Ramghat Road, Aligarh

+91-8534899823 | +91-7417102408
www.aligarhcoachingcentre.com
info@aligarhcoachingcentre.com