


NID PRACTICE TEST- (www.fashionaptitude.com)
UNDERGRADUATE PROGRAMME IN DESIGN


Total Sections: Three
Max. Marks: 100

SECTION-I & II

Q-1 Draw The Signage of a Public Toilet with any 02 pure geometrical form. Marks:10



Signage- 01



Signage- 02

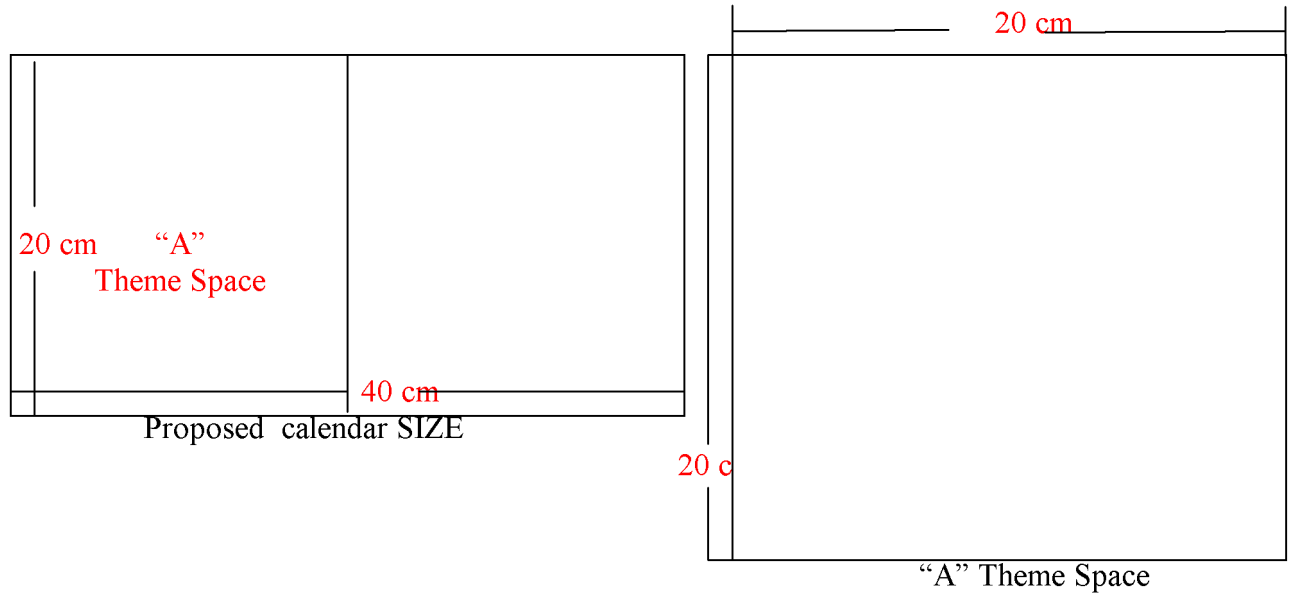
Banner Phrase: _____

Q-2 some words are given below. Using these words/combinations of words write down a Unique story in 10 sentences with TITLE. Marks:10

- a) Shadow b) Kitchen c) Camel d) Circle e) children f) colour


Q-3 A Design Firm is Launching a Calendar for Year 2008. the size of Calendar is L = 20 CM & L = 40 CM. You have to design the Theme for their calendar in 20 CM X 20 CM Space with combination of primary colours. Your Theme must be based on Global warming system

Marks:20



Q-4 select the theme (any 01) given below. Draw & colour the sketch of your composition in human proportion. Marks:10


- 1) Circus 2) a Heart Hospital 3) Pet Clinic 4) Pyramid



Q-5 Write down 10 sentences on your Theme composition against Question No. 4. Marks:5

- 1) _____
- 2) _____
- 3) _____
- 4) _____
- 5) _____
- 6) _____
- 7) _____
- 8) _____
- 9) _____
- 10) _____

Q-6 fill primary & secondary colours in geometry below & explain your colour scheme in 10 sentences: **Marks:10**





EXPLANATION:


- 1) _____
- 2) _____
- 3) _____
- 4) _____
- 5) _____
- 6) _____
- 7) _____
- 8) _____
- 9) _____
- 10) _____

Q-8 sketch out a cathouse, a 03 year kid chair & a dressing table. Explain your each design/Material in 05 sentences. **Marks:15**

(CATHOUSE)



(KID CHAIR)



(DRESSING TABLE)

Explanation: (CAT HOUSE)

Explanation: (KID CHAIR)

Explanation: (DRESSING TABLE)

SECTION III

Marks:5

Q-1 Pure achromatic colors:-

- a) include Black
- b) include white
- c) include all grays
- d) all correct

Q-2 A typical human eye visible spectrum ranges between.

- a) 380 to 750 nm
- b) 350 to 700 nm
- c) 380 to 700 nm
- d) 350 to 750 nm

Q_3 which of the following statement is not true for “Triadic Color Scheme”

- a) it uses three colors equally spaced around the color wheel
- b) The triadic scheme is not as contrasting as the complementary scheme
- c) it looks balanced and harmonious
- d) The triadic scheme is as contrasting as the complementary scheme

Q-4 which of the following statement is false:-

- a) a **shade** is the mixture of a color with black
- b) a **tint** is the mixture of a color with white
- c) a **hue** refers to a *pure* color
- d) all statement are false

Q-5 **Acoustics** science concerned with ?

- a) sound
- b) colour
- c) Light
- d) none