

# COMPUTER SCIENCE & ENGINEERING

## SECTION A

This question consists of TWENTY FIVE sub-questions, 1 to 25, of ONE mark each. For each of the sub-questions, four alternatives, A, B, C, and D are provided. Choose the most appropriate alternative and darken its bubble on the OBJECTIVE RESPONSE SHEET (ORS) against the corresponding sub-question number using a soft HB pencil. Do not darken more than one bubble for any sub-question. Do not use the ORS for any rough work. You may use the Answer Book (last few pages) for any rough work.

1. The rank of the matrix  $\begin{bmatrix} 1 & 1 \\ 0 & 0 \end{bmatrix}$  is
  - a. 4
  - b. 2
  - c. 1
  - d. 0
2. The trapezoidal rule for integration gives exact result when the integrand is a polynomial of degree
  - a. 0 but not 1
  - b. 1 but not 0
  - c. 0 or 1
  - d. 2
3. The solution to the recurrence equation  $T(2^k) = 3T(2^{k-1}) + 1$ ,  $T(1) = 1$  is:
  - a.  $2^k$
  - b.  $(2^{k+1} - 1)/2$
  - c.  $2^{k+1} - k$
  - d.  $2^{\log_2 k}$
4. The minimum number of colours required to colour the vertices of a cycle with  $n$  nodes in such a way that no two adjacent nodes have the same colour is:
  - a. 2
  - b. 3
  - c. 4
  - d.  $n - 2\lfloor n/2 \rfloor + 2$
5. In the worst case, the number of comparisons needed to search a singly linked list of length  $n$  for a given element is
  - a.  $\log_2 n$
  - b.  $n/2$
  - c.  $\log_2 n - 1$
  - d.  $n$
6. Which of the following is true?
  - a. The set of all rational negative numbers forms a group under multiplication.
  - b. The set of all non-singular matrices forms a group under multiplication.
  - c. The set of all matrices forms a group under multiplication.
  - d. Both B and C are true.
7. The language accepted by a Pushdown Automaton in which the stack is limited to 10 items is best described as
  - a. Context Free
  - b. Regular
  - c. Deterministic Context Free
  - d. Recursive
8. "If X then Y unless Z" is represented by which of the following formulas in propositional logic? ("¬" is negation, "∧" is conjunction, and "→" is implication)
  - a.  $(X \wedge \neg Z) \rightarrow Y$
  - b.  $(X \wedge Y) \rightarrow \neg Z$
  - c.  $X \rightarrow (Y \wedge \neg Z)$
  - d.  $(X \rightarrow Y) \wedge \neg Z$
9. A device employing INTR line for device interrupt puts the CALL instruction on the data bus while
  - a.  $\overline{\text{INTA}}$  is active
  - b. HOLD is active
  - c. READY is active
  - d. None of the above

10. In 8085 which of the following modifies the program counter?
- Only PCHL instruction
  - Only ADD instructions
  - Only JMP and CALL instructions
  - All instructions
11. In serial data transmission, every byte of data is padded with a '0' in the beginning and one or two '1's at the end of byte because
- Receiver is to be synchronized for byte reception
  - Receiver recovers lost '0's and '1's from these padded bits
  - Padded bits are useful in parity computation
  - None of the above.
12. Minimum sum of product expression for  $f(w,x,y,z)$  shown in Karnaugh-map below is

wz	00	01	11	10
yz				
00	0	1	1	0
01	x	0	0	1
11	x	0	0	1
10	0	1	1	x

- $xz + y'z$
  - $xz' + zx'$
  - $x'y + zx'$
  - None of the above
13. Which of the following is not a form of memory?
- instruction cache
  - instruction register
  - instruction opcode
  - instruction look aside buffer
14. The decimal value 0.25
- is equivalent to the binary value 0.1
  - is equivalent to the binary value 0.01
  - is equivalent to the binary value 0.00111...
  - cannot be represented precisely in binary
15. The 2's complement representation of the decimal value -15 is

- 1111
- 11111
- 111111
- 10001

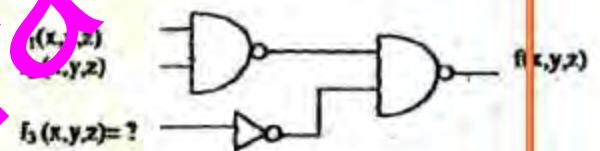
16. Sign extension is a step in
- floating point multiplication
  - signed 16 bit integer addition
  - arithmetic left shift
  - converting a signed integer from one size to another
17. In the C language
- At most one activation record exists between the current activation record and the activation record for the main.
  - The number of activation records between the current activation record and the activation record for the main depends on the actual function calling sequence.
  - The visibility of global variables depends on the actual function calling sequence.
  - Recursion requires the activation record for the recursive function to be saved on a different stack before the recursive function can be called.
18. The results returned by functions under value-result and reference parameter passing conventions
- Do not differ
  - Differ in the presence of loops
  - Differ in all cases
  - May differ in the presence of exceptions
19. Relation R with an associated set of functional dependencies, F, is decomposed into BCNF. The redundancy (arising out of functional dependencies) in the resulting set of relations is
- Zero
  - More than zero but less than that of an equivalent 3NF decomposition
  - Proportional to the size of  $F^+$
  - Indeterminate

20. With regard to the expressive power of the formal relational query languages, which of the following statements is true?
- Relational algebra is more powerful than relational calculus
  - Relational algebra has the same power as relational calculus
  - Relational algebra has the same power as safe relational calculus
  - None of the above
21. In 2's complement addition, overflow
- is flagged whenever there is carry from sign bit addition
  - cannot occur when a positive value is added to a negative value
  - is flagged when the carries from sign bit and previous bit match
  - None of the above
22. Which of the following scheduling algorithms is non-preemptive?
- Round Robin
  - First-In First-Out
  - Multilevel Queue Scheduling
  - Multilevel Queue Scheduling with Feedback
23. The optimal page replacement algorithm will select the page that
- Has not been used for the longest time in the past.
  - Will not be used for the longest time in the future.
  - Has been used least number of times.
  - Has been used most number of times
24. In the absolute addressing mode
- the operand is inside the instruction
  - the address of the operand is inside the instruction
  - the register containing the address of the operand is specified inside the instruction
  - the location of the operand is implicit
25. Maximum number of edges in a  $n$  - node undirected graph without self loops is
- $n^2$

- $n(n-1)/2$
- $n-1$
- $(n+1)(n)/2$

This question consists of TWENTY FIVE sub-questions, 26 to 50, of TWO marks each. For each of the sub-questions, four alternatives A, B, C, and D are provided. Choose the most appropriate alternative and darken its bubble on the OBJECTIVE RESPONSE SHEET (ORS) against the corresponding sub-question number using a soft HB pencil. Do not darken more than one bubble for any sub-question. Do not use the ORS for any rough work. You may use the Answer Book (last few pages) for any rough work.

26. Consider the following logic circuit whose inputs are functions  $f_1, f_2, f_3$ , and output is



Given that

$$f_1(x,y,z) = \sum(0,1,3,5),$$

$$f_2(x,y,z) = \sum(6,7), \text{ and}$$

$$f_3(x,y,z) = \sum(1,4,5),$$

$f_3$  is

- $\sum(1,4,5)$
  - $\sum(6,7)$
  - $\sum(0,1,3,5)$
  - None of the above
27. Consider the following multiplexor where  $I_0, I_1, I_2, I_3$  are four data input lines selected by two address line combinations  $A_1A_0 = 00, 01, 10, 11$  respectively and  $f$  is the output of the multiplexor.  $EN$  is the Enable input.



The function  $f(x,y,z)$  implemented by the above circuit is

- a.  $xyz'$   
 b.  $xy+z$   
 c.  $x+y$   
 d. None of the above
28. Let  $f(A,B) = A' + B$ . Simplified expression for function  $f(f(x+y,y),z)$  is  
 a.  $x'+z$   
 b.  $xyz$   
 c.  $xy'+z$   
 d. None of the above.
29. What are the states of the Auxiliary Carry (AC) and Carry Flag (CY) after executing the following 8085 program?  
 MVI H, 5DH  
 MVI L, 6BH  
 MOV A, H  
 ADD L  
 a. AC=0 and CY=0  
 b. AC=1 and CY=1  
 c. AC=1 and CY=0  
 d. AC=0 and CY=0
30. The Finite state machine described by the following state diagram with A as starting state, where an arc label is x/y and it stands for 1-bit input and y stands for 1-bit output.
- 
- ```

graph LR
  A((A)) -- "0/0" --> A
  A -- "1/0" --> B((B))
  B -- "1/0" --> C((C))
  C -- "1/0" --> C
  C -- "0/1" --> A
  B -- "0/1" --> A
  
```
- a. Outputs the sum of the present and the previous value of the input.  
 b. Outputs 01 whenever the input sequence contains 11  
 c. Outputs 00 whenever the input sequence contains 10  
 d. None of the above
31. The performance of a pipelined processor suffers if  
 a. the pipeline stages have different delays  
 b. consecutive instructions are dependent on each other  
 c. the pipeline stages share hardware resources  
 d. all of the above
32. Horizontal microprogramming  
 a. does not require use of signal decoders  
 b. results in larger sized microinstructions than vertical microprogramming  
 c. uses one bit for each control signal  
 d. all of the above
33. Consider the following declaration of a two-dimensional array in C:  
`char a[100][100];`  
 Assuming that the main memory is byte-addressable and that the array is stored starting from memory address 0, the address of `a[40][50]` is  
 a. 4040  
 b. 4050  
 c. 40400  
 d. 5040
34. The number of leaf nodes in a rooted tree of  $n$  nodes, with each node having 0 or 3 children is:  
 a.  $n/2$   
 b.  $(n-1)/3$   
 c.  $(n-1)/2$   
 d.  $(2n+1)/3$
35. Consider the following algorithm for searching for a given number  $x$  in an unsorted array  $A[1..n]$  having  $n$  distinct values:  
 1. Choose an  $i$  uniformly at random from  $1..n$ ;  
 2. If  $A[i] = x$  then Stop else Goto 1;  
 Assuming that  $x$  is present in  $A$ , what is the expected number of comparisons made by the algorithm before it terminates?  
 a.  $n$   
 b.  $n-1$   
 c.  $2n$   
 d.  $n/2$
36. The running time of the following algorithm  
**Procedure A(n)**  
 If  $n \leq 2$  return(1) else return  $(A(\lfloor \sqrt{n} \rfloor))$ ;  
 is best described by

- a.  $O(n)$   
 b.  $O(\log n)$   
 c.  $O(\log \log n)$   
 d.  $O(1)$
37. A weight-balanced tree is a binary tree in which for each node, the number of nodes in the left subtree is at least half and at most twice the number of nodes in the right subtree. The maximum possible height (number of nodes on the path from the root to the furthest leaf) of such a tree on  $n$  nodes is best described by which of the following?  
 a.  $\log_2 n$   
 b.  $\log_{4/3} n$   
 c.  $\log_3 n$   
 d.  $\log_{3/2} n$
38. The smallest finite automaton which accepts the language  $\{x \mid \text{length of } x \text{ is divisible by } 3\}$  has  
 a. 2 states  
 b. 3 states  
 c. 4 states  
 d. 5 states
39. Which of the following is true?  
 a. The complement of a recursive language is recursive.  
 b. The complement of a recursively enumerable language is recursively enumerable.  
 c. The complement of a recursive language is either recursive or recursively enumerable.  
 d. The complement of a context-free language is context-free
40. The Newton-Raphson iteration  $X_{n+1} = (X_n/2) + 3/(2X_n)$  can be used to solve the equation  
 a.  $X^2 = 3$   
 b.  $X^3 = 3$   
 c.  $X^2 = 2$   
 d.  $X^3 = 2$
41. Four fair coins are tossed simultaneously. The probability that at least one head and one tail turn up is  
 a.  $1/16$   
 b.  $1/8$   
 c.  $7/8$   
 d.  $15/16$
42. The binary relation  $S = \emptyset$  (empty set) on set  $A = \{1,2,3\}$  is  
 a. Neither reflexive nor symmetric  
 b. Symmetric and reflexive  
 c. Transitive and reflexive  
 d. Transitive and symmetric
43. The C language is  
 a. A context free language  
 b. A context sensitive language  
 c. A regular language  
 d. Parseable fully only by a Turing machine
44. To evaluate an expression without any embedded function calls  
 a. One stack is enough  
 b. Two stacks are needed  
 c. As many stacks as the height of the expression tree are needed  
 d. A Turing machine is needed in the general case
45. Dynamic linking can cause security concerns because  
 a. Security is dynamic  
 b. The path for searching dynamic libraries is not known till runtime  
 c. Linking is insecure  
 d. Cryptographic procedures are not available for dynamic linking
46. Which combination of the following features will suffice to characterize an OS as a multiprogrammed OS?  
 (a) More than one program may be loaded into main memory at the same time for execution.  
 (b) If a program waits for certain events such as I/O, another program is immediately scheduled for execution;  
 (c) If the execution of a program terminates, another program is immediately scheduled for execution.

- a. (a)
- b. (a) and (b)
- c. (a) and (c)
- d. (a), (b), and (c)

47. In the index allocation scheme of blocks to a file, the maximum possible size of the file depends on
- a. the size of the blocks, and the size of the address of the blocks.
  - b. the number of blocks used for the index, and the size of the blocks.
  - c. the size of the blocks, the number of blocks used for the index, and the size of the address of the blocks.
  - d. None of the above

48. A B<sup>+</sup>-tree index is to be built on the Name attribute of the relation STUDENT. Assume that all student names are of length 8 bytes, disk blocks are of size 512 bytes, and index pointers are of size 4 bytes. Given this scenario, what would be the best choice of the degree (i.e. the number of pointers per node) of the B<sup>+</sup>-tree?

- a. 16
- b. 42
- c. 43
- d. 44

49. Relation R is decomposed using a set of functional dependencies, F, and relation S is decomposed using another set of functional dependencies, G. One decomposition is definitely BCNF, the other is definitely 3NF, but it is not known which is which. To make a guaranteed identification, which one of the following tests should be used on the decompositions? (Assume that the closures of F and G are available).

- a. Dependency-preservation
- b. Lossless-join
- c. BCNF definition
- d. 3NF definition

50. From the following instance of a relation schema R (A,B,C), we can conclude that:

| A | B | C |
|---|---|---|
| 1 | 1 | 1 |
| 1 | 1 | 0 |
| 2 | 3 | 2 |
| 2 | 3 | 2 |

- a. A functionally determines B and B functionally determines C
- b. A functionally determines B and B does not functionally determine C
- c. B does not functionally determine C
- d. A does not functionally determine B and B does not functionally determine C

### SECTION B

#### FIVE MARK QUESTIONS (51 & 70)

This section consists of TWENTY questions of FIVE marks each. ANY FIFTEEN out of these questions have to be answered on the Answer Book provided.

51. Let A be a set of  $n$  ( $>0$ ) elements. Let  $N_f$  be the number of binary relations on A and let  $N_g$  be the number of functions from A to A.
- a. Give the expression for  $N_f$  in terms of  $n$ .
  - b. Give the expression for  $N_g$  in terms of  $n$ .
  - c. Which is larger for all possible,  $N_f$  or  $N_g$ ?
52. Answer the following :
- a.  $S = \{<1,2>, <2,1>\}$  is a binary relation on set  $A = \{1,2,3\}$ . Is it irreflexive?  
Add the minimum number of ordered pairs to S to make it an equivalence relation. Give the modified S.
  - b. Let  $S = \{a, b\}$  and let  $\square(S)$  be the powerset of S. Consider the binary relation ' $\subseteq$  (set inclusion)' on  $\square(S)$ . Draw the Hasse diagram corresponding to the lattice  $(\square(S), \subseteq)$ .
53. Answer the following :
- a. Obtain the eigenvalues of the matrix

$$A = \begin{bmatrix} 1 & 2 & 34 & 49 \\ 0 & 2 & 43 & 94 \\ 0 & 0 & -2 & 104 \\ 0 & 0 & 0 & -1 \end{bmatrix}$$

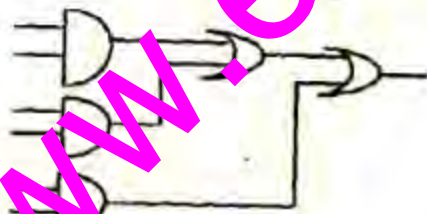
- b. Determine whether each of the following is a tautology, a contradiction, or neither ("∨" is disjunction, "∧" is conjunction, "→" is implication, "¬" is negation, and "↔" is biconditional (if and only if)).

- (i)  $A \leftrightarrow (A \vee A)$   
 (ii)  $(A \vee B) \rightarrow B$   
 (iii)  $A \wedge (\neg(A \vee B))$

54. Draw all binary trees having exactly three nodes labeled A, B, and C on which Preorder traversal gives the sequence C, B, A.

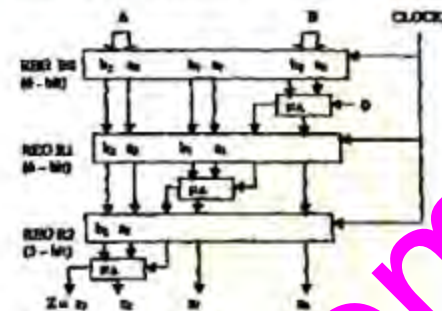
55. Answer the following :

- a. Express the function  $f(x,y,z) = xy' + yz'$  with only one complement operation and one or more AND/OR operations. Draw the logic circuit implementing the expression obtained using a single NOT gate and one more AND/OR gates.
- b. Transform the following logic circuit (without expressing its switching function) into an equivalent logic circuit that employs only 6 NAND gates each with two inputs.



56. Consider the following circuits.  $A = a_2a_1a_0$  and  $B = b_2b_1b_0$  are three bit binary numbers input to the circuit. The output is  $Z = z_2z_1z_0$ .  $R_0$ ,  $R_1$  and  $R_2$  are registers with loading clock shown. The registers are loaded with their input data with the falling edge of a clock pulse (signal CLOCK shown) and appear as shown. The bits of input numbers A, B, and the full adders are as shown in the circuit. Assume

Clock period is greater than the settling time of all circuits.



- a. For 8 clock pulses on the CLOCK terminal and the inputs A, B as shown, obtain the output Z (sequence of 4-bit values of Z). Assume initial contents of  $R_0, R_1$  and  $R_2$  as all zeros.

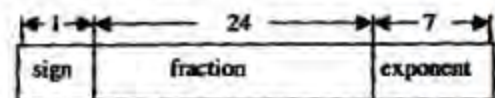
$A = 110\ 011\ 111\ 101\ 000\ 000\ 000\ 000$

$B = 101\ 011\ 011\ 110\ 000\ 000\ 000\ 000$

Clock No 1 2 3 4 5 6 7 8

What does the circuit implement?

57. Consider the following 32 bit floating point representation scheme as shown in the format below. A value is specified by 3 fields, a one bit sign field (with 0 for positive and 1 for negative values), a 24 bit fraction field (with the binary point being at the left end of the fraction bits), and a 7 bit exponent held (in excess-64 signed integer representation, with 16 being the base of exponentiation). The sign bit is the most significant bit.



- a. It is required to represent the decimal value  $-7.5$  as a normalized floating point number in the given format. Derive the values of the various fields. Express your final answer in hexadecimal.
- b. What is the largest value that can be represented using this format? Express your answer as the nearest power of 10.

58. In a C program, an array is declared as `float A[2048]`. Each array element is 4 Bytes in size, and the starting address of the array is `0x00000000`. This program is run on a computer that has a direct mapped

data cache of size  $S$  Kbytes, with block (line) size of 16Bytes.

- Which elements of the array conflict with element  $A[0]$  in the data cache? Justify your answer briefly.
- If the program accesses the elements of this array one by one in reverse order, i.e., starting with the last element and ending with the first element, how many data cache misses would occur? Justify your answer briefly. Assume that the data cache is initially empty and that no other data or instruction accesses are to be considered.

59. The following recursive function in C is a solution to the Towers of Hanoi problem.

```
void move(int n, char A, char B, char C)
{
    if (.....)
        move(.....);
    printf("Move disk %d from pole %s to pole %s\n", n, A, C);
    move(.....);
}

```

Fill in the dotted parts of the solution.

60. Fill in the blanks in the following template of an algorithm to compute all pairs shortest path lengths in a directed graph  $G$  with  $n \times n$  adjacency matrix  $A$ .  $A[i, j]$  equals 1 if there is an edge in  $G$  from  $i$  to  $j$  and 0 otherwise. Your aim in filling in the blanks is to ensure that the algorithm is correct.

```
INITIALIZATION: For  $i = 1 \dots n$ 
    { For  $j = 1 \dots n$ 
        { If  $A[i, j] = 0$  then  $P[i, j] = \dots$ 
        }
    }

ALGORITHM: For  $i = 1 \dots n$ 
    { For  $j = 1 \dots n$ 
        { For  $k = 1 \dots n$ 
            {  $P[i, j] = \dots$ 
            }
        }
    }

```

- Copy the complete line containing the blanks in the Initialization step and fill in the blanks.
  - Copy the complete line containing the blanks in the Algorithm step and fill in the blanks.
- Fill in the blank: The running time of the Algorithm is  $O(\dots)$ .

Answer the following :

- In how many ways can a given positive integer  $n \geq 2$  be expressed as the sum of 2 positive integers (which are not necessarily distinct). For example, for  $n = 3$ , the number of ways is 2, i.e.,

1+2, 2+1. Give only the answer without any explanation.

- In how many ways can a given positive integer  $n \geq 3$  be expressed as the sum of 3 positive integers (which are not necessarily distinct). For example, for  $n = 4$ , the number of ways is 3, i.e., 1+1+2, 1+2+1, 2+1+1. Give only the answer without any explanation.
- In how many ways can a given positive integer  $n \geq k$  be expressed as the sum of  $k$  positive integers (which are not necessarily distinct)? Give only the answer without explanation.

62. The aim of the following question is to prove that the language  $\{M \mid M \text{ is the code of a Turing machine which, irrespective of the input, halts and outputs a 1}\}$ , is undecidable. This is to be done by reduction from the language  $\{M' \mid M' \text{ halts on } x\}$ , which is known to be undecidable. In parts (a) and (b) describe the main steps in the construction of  $M$ . In part (c) describe the key property which relates the behaviour of  $M$  on its input  $w$  to the behaviour of  $M'$  on  $x$ .

- On input  $w$ , what is the first step that  $M$  must make?
- On input  $w$ , based on the outcome of the first step, what is the second step that  $M$  must make?
- What key property relates the behaviour of  $M$  on  $w$  to the behaviour of  $M'$  on  $x$ ?

63. A university placement centre maintains a relational database of companies that interview students on campus and make job offers to those successful in the interview. The schema of the database is given below.

```
COMPANY (cname, clocation)
STUDENT (srollno, sname, sdegree)
INTERVIEW (cname, srollno, idate)
OFFER (cname, srollno, osalary)

```

The COMPANY relation gives the name and location of the company. The STUDENT relation gives the students roll number, name and the degree program for which the student is registered in the university. The INTERVIEW relation



gives the date on which a student is interviewed by a company. The OFFER relation gives the salary offered to a student who is successful in a company's interview. The key for each relation is indicated by the underlined attributes.

a. Write relational algebra expressions (using only the operators  $\sigma$ ,  $\pi$ ,  $\cup$ ,  $-$ ,  $\bowtie$ ) for the following queries:

(i) List the rollnumbers and names of those students who attended at least one interview but did not receive any job offer.

(ii) List the rollnumbers and names of students who went for interviews and received job offers from every company with which they interviewed.

b. Write an SQL query to list, for each degree program in which more than five students were offered jobs, the name of the degree and the average offered salary of students in this degree program.

64. For relation  $K = (L, M, N, O, P)$ , the following dependencies hold:

$M \rightarrow O$   $NO \rightarrow P$   $P \rightarrow L$  and  $L \rightarrow MN$

$R$  is decomposed into  $R_1 = (L, M, N, P)$  and  $R_2 = (M, O)$ .

- Is the above decomposition a lossless join decomposition? Explain.
- Is the above decomposition dependency-preserving? If not, list all the dependencies that are not preserved.
- What is the highest normal form satisfied by the above decomposition?

65. Answer the following:

a. The following table refers to search times for a key in B-trees and B\*-trees.

| B-tree            |                     | B*-tree           |                     |
|-------------------|---------------------|-------------------|---------------------|
| Successful Search | Unsuccessful Search | Successful Search | Unsuccessful Search |
| $X_1$             | $X_2$               | $X_3$             | $X_4$               |

A successful search means that the key exists in the database and unsuccessful means that it is not present in the database. Each of the entries  $X_1$ ,  $X_2$ ,  $X_3$ , and  $X_4$  can have a value of either Constant or Variable: Constant means that the search time is the same, independent of the

specific key value; whereas Variable means that it is dependent on the specific key value chosen for the search.

Give the correct values for the entries  $X_1$ ,  $X_2$ ,  $X_3$ , and  $X_4$  (for example  $X_1 = \text{Constant}$ ,  $X_2 = \text{Constant}$ ,  $X_3 = \text{Constant}$ ,  $X_4 = \text{Constant}$ ).

b. Relation  $R(A,B)$  has the following view defined on it:

```
CREATE VIEW V AS
(SELECT R1.A, R2.B
FROM R AS R1, R AS R2
WHERE R1.B = R2.A)
```

(i) The current contents of relation  $R$  are shown below. What are the contents of the view  $V$ ?

| A | B  |
|---|----|
| 1 | 2  |
| 2 | 3  |
| 3 | 4  |
| 4 | 5  |
| 5 | 6  |
| 6 | 7  |
| 7 | 8  |
| 8 | 9  |
| 9 | 10 |

(ii) The tuples (2,11) and (11,6) are now inserted into  $R$ . What are the additional tuples that are inserted in  $V$ ?

66. Answer the following:

- Draw the process state transition diagram of an OS in which (i) each process is in one of the five states: created, ready, running, blocked (i.e. sleep or wait), or terminated, and (ii) only non-preemptive scheduling is used by the OS. Label the transitions appropriately.
- The functionality of atomic TEST-AND-SET assembly language instruction is given by the following C function.

```
int TEST-AND-SET(int *x)
{
    int y;
    A1: y=*x;
    A2: *x=1;
    A3: return y;
}
```

(i) Complete the following C functions for implementing code for entering and leaving critical sections based on the above TEST-AND-SET instruction.

```

int mutex=0;

void enter_cs()
{
while (.....);
}

void leave_cs()
{
.....;
}

```

(ii) Is the above solution to the critical section problem deadlock-free and starvation-free?

(iii) For the above solution, show by an example that mutual exclusion is not ensured if TEST-AND-SET instruction is not atomic.

67. A computer system uses 32-bit virtual address, and 32-bit physical address. The physical memory is byte addressable, and the page size is 4 kbytes. It is decided to use two level page tables to translate from virtual address to physical address. Equal number of bits should be used for indexing first level and second level page table, and the size of each page table entry is 4 bytes.

- Give a diagram showing how a virtual address would be translated to a physical address.
- What is the number of page table entries that can be contained in each page?
- How many bits are available for storing protection and other information in each page table entry?

68. The following solution to the single producer single consumer problem uses semaphores for synchronization.

```

#define BUFF_SIZE 100
#define BUFF_SIZE2
int first=0;
semaphore b_full=0;
semaphore b_empty=BUFF_SIZE;

void producer()
{
while (1) {
produce an item;
p1: .....;
put the item into buff[first];
first=(first+1)%BUFF_SIZE;
p2: .....;
}
}

```

```

void consumer()
{
while (1) {
c1: .....;
take the item from buff[last];
last=(last+1)%BUFF_SIZE;
c2: .....;
consume the item;
}
}

```

- Complete the dotted part of the above solution.
- Using another semaphore variable, insert one line statement at each immediately after p1, immediately before p2, immediately after c1, and immediately before c2, so that the program works correctly for multiple producers and consumers.

69. We require a four state automaton to recognize the regular expression  $(a|b)^*abb$ .

- Give an NFA for this purpose.
- Give a DFA for this purpose.

70. Answer the following :

- Construct all the parse trees corresponding to  $i + j * k$  for the grammar
 
$$E \rightarrow E + E$$

$$E \rightarrow E * E$$

$$E \rightarrow di$$
- In this grammar, what is the precedence of the two operators  $*$  and  $+$ ?
- If only one parse tree is desired for any string in the same language, what changes are to be made so that the resulting LALR(1) grammar is non-ambiguous?