



Question Paper Preview

Notations :

- Options shown in **green** color and with  icon are correct.
- Options shown in **red** color and with  icon are incorrect.

Question Paper Name:	Multi Tasking Staff Shift 1
Subject Name:	MULTITASKING STAFF MTS
Creation Date:	2016-03-19 18:54:40
Duration:	120
Total Marks:	200
Display Marks:	Yes

Multi Tasking Staff (MTS)

Group Number :	1
Group Id :	73681529
Group Maximum Duration :	0
Group Minimum Duration :	120
Revisit allowed for view? :	No
Revisit allowed for edit? :	No
Break time:	0
Mandatory Break time:	No
Group Marks:	200

Numerical Ability

Section Id :	736815111
Section Number :	1
Section type :	Online
Mandatory or Optional:	Mandatory
Number of Questions:	50
Number of Questions to be attempted:	50
Section Marks:	50
Display Number Panel:	Yes
Group All Questions:	No


Sub-Section Number:	1
Sub-Section Id:	736815167
Question Shuffling Allowed :	Yes

Question Number : 1 Question Id : 7368155657 Question Type : MCQ Option Shuffling : Yes Display Question Number : Yes
Single Line Question Option : No Option Orientation : Vertical

Correct : 1 Wrong : 0.25

Convert 58 into a binary number.

Options :

1.  110000

2. ✓ 111010

3. ✗ 110010

4. ✗ 101011

Question Number : 1 Question Id : 7368155657 Question Type : MCQ Option Shuffling : Yes Display Question Number : Yes
Single Line Question Option : No Option Orientation : Vertical

Correct : 1 Wrong : 0.25

58 को बाइनरी संख्या में परिवर्तित करें।

Options :

1. ✗ 110000

2. ✓ 111010

3. ✗ 110010

4. ✗ 101011

Question Number : 2 Question Id : 7368155658 Question Type : MCQ Option Shuffling : Yes Display Question Number : Yes
Single Line Question Option : No Option Orientation : Vertical

Correct : 1 Wrong : 0.25

The number of prime factors in $(15)^{26} \times (4)^{18} \times (6)^{17}$ is :

Options :

1. ✗ 120

2. ✗ 126

3. ✓ 122

4. ✗ 125

Question Number : 2 Question Id : 7368155658 Question Type : MCQ Option Shuffling : Yes Display Question Number : Yes
Single Line Question Option : No Option Orientation : Vertical

Correct : 1 Wrong : 0.25

$(15)^{26} \times (4)^{18} \times (6)^{17}$ में अभाज्य गुणकों की संख्या है:

Options :

1. ✗ 120

2. ✗ 126

3. ✓ 122

4. ✗ 125

Question Number : 3 Question Id : 7368155659 Question Type : MCQ Option Shuffling : Yes Display Question Number : Yes
Single Line Question Option : No Option Orientation : Vertical

Correct : 1 Wrong : 0.25

What least value must be assigned to * so that the number 4053*45 is divisible by 9?

Options :

1. ✗ 7

2. ✗ 4

3. ✗ 5

4. ✓ 6

Question Number : 3 Question Id : 7368155659 Question Type : MCQ Option Shuffling : Yes Display Question Number : Yes
Single Line Question Option : No Option Orientation : Vertical

Correct : 1 Wrong : 0.25

* को कौन सा न्यूनतम मान दिया जाना चाहिए, ताकि संख्या 4053×45 , 9 से विभाज्य हो?

Options :

- 1. ✖ 7
- 2. ✖ 4
- 3. ✖ 5
- 4. ✔ 6

Question Number : 4 Question Id : 7368155660 Question Type : MCQ Option Shuffling : Yes Display Question Number : Yes
Single Line Question Option : No Option Orientation : Vertical

Correct : 1 Wrong : 0.25

Compute: $1203 \times 99999 + 1203$.

Options :

- 1. ✔ 120300000
- 2. ✖ 130299999
- 3. ✖ 120399999
- 4. ✖ 130200000

Question Number : 4 Question Id : 7368155660 Question Type : MCQ Option Shuffling : Yes Display Question Number : Yes
Single Line Question Option : No Option Orientation : Vertical

Correct : 1 Wrong : 0.25

गणना करें: $1203 \times 99999 + 1203$

Options :

- 1. ✔ 120300000
- 2. ✖ 130299999
- 3. ✖ 120399999
- 4. ✖ 130200000

Question Number : 5 Question Id : 7368155661 Question Type : MCQ Option Shuffling : Yes Display Question Number : Yes
Single Line Question Option : No Option Orientation : Vertical

Correct : 1 Wrong : 0.25

Find the units digit in $(265)^{2013} + (211)^{2013}$

Options :

- 1. ✖ 3
- 2. ✖ 7
- 3. ✖ 5
- 4. ✔ 6

Question Number : 5 Question Id : 7368155661 Question Type : MCQ Option Shuffling : Yes Display Question Number : Yes
Single Line Question Option : No Option Orientation : Vertical

Correct : 1 Wrong : 0.25

$(265)^{2013} + (211)^{2013}$ में इकाइयों के अंक खोजें।

Options :

- 1. ✖ 3
- 2. ✖ 7
- 3. ✖ 5
- 4. ✔ 6

Question Number : 6 Question Id : 7368155662 Question Type : MCQ Option Shuffling : Yes Display Question Number : Yes
Single Line Question Option : No Option Orientation : Vertical

Correct : 1 Wrong : 0.25

Compute: $321 \times 625 + 625$.

Options :

- 1. ✖ 201560
- 2. ✖ 201050
- 3. ✖ 201520
- 4. ✔ 201250

Question Number : 6 Question Id : 7368155662 Question Type : MCQ Option Shuffling : Yes Display Question Number : Yes
Single Line Question Option : No Option Orientation : Vertical

Correct : 1 Wrong : 0.25

गणना करें: $321 \times 625 + 625$

Options :

- 1. ✖ 201560
- 2. ✖ 201050
- 3. ✖ 201520
- 4. ✔ 201250

Question Number : 7 Question Id : 7368155663 Question Type : MCQ Option Shuffling : Yes Display Question Number : Yes
Single Line Question Option : No Option Orientation : Vertical

Correct : 1 Wrong : 0.25

Shankar studies for $7\frac{2}{3}$ hours daily. He devotes $3\frac{1}{4}$ hours of his time for Hindi. How much time does he devote for other subjects?

Options :

- 1. ✔ $3\frac{1}{2} \text{ hrs}$
- 2. ✖ $4\frac{1}{6} \text{ hrs}$
- 3. ✖ $3\frac{7}{10} \text{ hrs}$
- 4. ✖ $3\frac{7}{11} \text{ hrs}$

Note: For this question, discrepancy is found in question/answer. Full Marks is being awarded to all candidates.

Question Number : 7 Question Id : 7368155663 Question Type : MCQ Option Shuffling : Yes Display Question Number : Yes
Single Line Question Option : No Option Orientation : Vertical

Correct : 1 Wrong : 0.25

शंकर प्रतिदिन $7\frac{2}{3}$ घंटों तक अध्ययन करता है। यदि वह अपने समय के $3\frac{1}{4}$ घंटे हिंदी को देता है, तो वह अन्य विषयों को कितना समय देता है?

Options :

1. ☒ $3\frac{1}{2}$ घंटे
2. ☐ $4\frac{1}{6}$ घंटे
3. ☐ $3\frac{7}{10}$ घंटे
4. ☐ $3\frac{7}{11}$ घंटे

Note: For this question, discrepancy is found in question/answer. Full Marks is being awarded to all candidates.

Question Number : 8 Question Id : 7368155664 Question Type : MCQ Option Shuffling : Yes Display Question Number : Yes
Single Line Question Option : No Option Orientation : Vertical

Correct : 1 Wrong : 0.25

Rana and Raghu together bought a water bottle that contained 7 litres of water. Rana consumed $\frac{3}{4}$ of the water. Remaining water was consumed by Raghu. What fraction of the total quantity of water did Raghu drink?

Options :

1. ☐ $1\frac{1}{4}$ litres
2. ☒ $1\frac{3}{4}$ litres
3. ☐ $1\frac{1}{3}$ litres
4. ☐ $1\frac{1}{5}$ litres

Question Number : 8 Question Id : 7368155664 Question Type : MCQ Option Shuffling : Yes Display Question Number : Yes
Single Line Question Option : No Option Orientation : Vertical

Correct : 1 Wrong : 0.25

राणा और रघु ने एक साथ पानी की एक बोतल खरीदी जिसमें 7 लीटर पानी था। राणा ने $\frac{3}{4}$ हिस्सा पानी पिया। बाकी का पानी रघु ने पिया। रघु ने कितना लीटर पानी पिया?

Options :

1. ☐ $1\frac{1}{4}$ लीटर
2. ☒ $1\frac{3}{4}$ लीटर
3. ☐ $1\frac{1}{3}$ लीटर

4. ✖ $1\frac{1}{5}$ लीटर

Question Number : 9 Question Id : 7368155665 Question Type : MCQ Option Shuffling : Yes Display Question Number : Yes
Single Line Question Option : No Option Orientation : Vertical
Correct : 1 Wrong : 0.25

Aruna, Bhagya, Chetan and Deena finished coloring a picture in $\frac{2}{5}$ hour, $\frac{4}{3}$ hour, $\frac{7}{2}$ hour and $\frac{3}{4}$ hour respectively. Who among the following finished their coloring last?

Options :

- 1. ✖ Bhagya
- 2. ✖ Aruna
- 3. ✔ Chetan
- 4. ✖ Deena

Question Number : 9 Question Id : 7368155665 Question Type : MCQ Option Shuffling : Yes Display Question Number : Yes
Single Line Question Option : No Option Orientation : Vertical
Correct : 1 Wrong : 0.25

अरुणा, भाग्या, चेतन और दीना ने क्रमशः $\frac{2}{5}$ घंटे, $\frac{4}{3}$ घंटे, $\frac{7}{2}$ घंटे और $\frac{3}{4}$ घंटे में तस्वीर में रंग भरने के कार्य को समाप्त किया। निम्नलिखित में से किसने आखिर में रंग भरने का कार्य समाप्त किया?

Options :

- 1. ✖ भाग्या
- 2. ✖ अरुणा
- 3. ✔ चेतन
- 4. ✖ दीना

Question Number : 10 Question Id : 7368155666 Question Type : MCQ Option Shuffling : Yes Display Question Number : Yes
Single Line Question Option : No Option Orientation : Vertical
Correct : 1 Wrong : 0.25

Which among the following is the largest?

$\frac{3}{2}$, $\frac{9}{2}$, $\frac{5}{3}$, $\frac{7}{3}$

Options :

- 1. ✔ $\frac{9}{2}$
- 2. ✖ $\frac{3}{2}$
- 3. ✖ $\frac{7}{3}$
- 4. ✖ $\frac{5}{3}$

Question Number : 10 Question Id : 7368155666 Question Type : MCQ Option Shuffling : Yes Display Question Number : Yes
Single Line Question Option : No Option Orientation : Vertical

Correct : 1 Wrong : 0.25

निम्नलिखित में से कौन सी संख्या सबसे बड़ी है?

$$\frac{3}{2}, \frac{9}{2}, \frac{5}{3}, \frac{7}{3}$$

Options :

1. ☒ $\frac{9}{2}$

2. ☐ $\frac{3}{2}$

3. ☐ $\frac{7}{3}$

4. ☐ $\frac{5}{3}$

Question Number : 11 Question Id : 7368155667 Question Type : MCQ Option Shuffling : Yes Display Question Number : Yes
Single Line Question Option : No Option Orientation : Vertical

Correct : 1 Wrong : 0.25

The difference of two numbers is 14 and two-third of their sum is 24. Find the largest number.

Options :

1. ☐ 36

2. ☒ 25

3. ☐ 28

4. ☐ 15

Question Number : 11 Question Id : 7368155667 Question Type : MCQ Option Shuffling : Yes Display Question Number : Yes
Single Line Question Option : No Option Orientation : Vertical

Correct : 1 Wrong : 0.25

दो अंकों का अंतर 14 है और उनके योग का $\frac{2}{3}$ हिस्सा 24 है। सबसे बड़ी संख्या पता करें।

Options :

1. ☐ 36

2. ☒ 25

3. ☐ 28

4. ☐ 15

Question Number : 12 Question Id : 7368155668 Question Type : MCQ Option Shuffling : Yes Display Question Number : Yes
Single Line Question Option : No Option Orientation : Vertical

Correct : 1 Wrong : 0.25

The difference between a number and its one-sixth is 25. What is the number?

Options :

1. ☐ 40

2. ☐ 65

3. ✓ 30

4. ✗ 39

Question Number : 12 Question Id : 7368155668 Question Type : MCQ Option Shuffling : Yes Display Question Number : Yes
Single Line Question Option : No Option Orientation : Vertical

Correct : 1 Wrong : 0.25

एक संख्या और उसके $\frac{1}{6}$ के बीच का अंतर 25 है। वह संख्या क्या है?

Options :

1. ✗ 40

2. ✗ 65

3. ✓ 30

4. ✗ 39

Question Number : 13 Question Id : 7368155669 Question Type : MCQ Option Shuffling : Yes Display Question Number : Yes
Single Line Question Option : No Option Orientation : Vertical

Correct : 1 Wrong : 0.25

Find the value of $(-2)^5 \times (-2)^{-5} \times (2)^5$

Options :

1. ✗ -32

2. ✗ 27

3. ✗ -27

4. ✓ 32

Question Number : 13 Question Id : 7368155669 Question Type : MCQ Option Shuffling : Yes Display Question Number : Yes
Single Line Question Option : No Option Orientation : Vertical

Correct : 1 Wrong : 0.25

$(-2)^5 \times (-2)^{-5} \times (2)^5$ का मान पता करें।

Options :

1. ✗ -32

2. ✗ 27

3. ✗ -27

4. ✓ 32

Question Number : 14 Question Id : 7368155670 Question Type : MCQ Option Shuffling : Yes Display Question Number : Yes
Single Line Question Option : No Option Orientation : Vertical

Correct : 1 Wrong : 0.25

If $78X3-4Y67 = 3456$, then which of the following should come in place of Y?

Options :

1. ✗ 5

2. ✗ 6

3. ✗ 2

4. ✓ 3

Question Number : 14 Question Id : 7368155670 Question Type : MCQ Option Shuffling : Yes Display Question Number : Yes
Single Line Question Option : No Option Orientation : Vertical

Correct : 1 Wrong : 0.25

अगर $78X3-4Y67 = 3456$ है, तो निम्नलिखित में से Y के स्थान पर क्या आना चाहिए?

Options :

1. ✖ 5
2. ✖ 6
3. ✖ 2
4. ✔ 3

Question Number : 15 Question Id : 7368155671 Question Type : MCQ Option Shuffling : Yes Display Question Number : Yes
Single Line Question Option : No Option Orientation : Vertical

Correct : 1 Wrong : 0.25

Solve : $\frac{(756+432)^2 + (756-432)^2}{756 \times 756 + 432 \times 432}$

Options :

1. ✖ 5
2. ✔ 2
3. ✖ 3
4. ✖ 6

Question Number : 15 Question Id : 7368155671 Question Type : MCQ Option Shuffling : Yes Display Question Number : Yes
Single Line Question Option : No Option Orientation : Vertical

Correct : 1 Wrong : 0.25

हल करें: $\frac{(756+432)^2 + (756-432)^2}{756 \times 756 + 432 \times 432}$

Options :

1. ✖ 5
2. ✔ 2
3. ✖ 3
4. ✖ 6

Question Number : 16 Question Id : 7368155672 Question Type : MCQ Option Shuffling : Yes Display Question Number : Yes
Single Line Question Option : No Option Orientation : Vertical

Correct : 1 Wrong : 0.25

The present salary of Rahul is Rs.4800. This will be increased by 7% in the next year.
What will be the increased salary of Rahul?

Options :

1. ✔ Rs.5136
2. ✖ Rs.5050
3. ✖ Rs.5060
4. ✖ Rs.5070

Question Number : 16 Question Id : 7368155672 Question Type : MCQ Option Shuffling : Yes Display Question Number : Yes
Single Line Question Option : No Option Orientation : Vertical

Correct : 1 Wrong : 0.25

राहुल का वर्तमान वेतन 4800 रुपये है। इसमें अगले वर्ष में 7% की वृद्धि की जाएगी। वृद्धि के बाद राहुल का बढ़ा हुआ वेतन कितना होगा?

Options :

1. ☒ रु. 5136
2. ☐ रु. 5050
3. ☐ रु. 5060
4. ☐ रु. 5070

Question Number : 17 Question Id : 7368155673 Question Type : MCQ Option Shuffling : Yes Display Question Number : Yes
Single Line Question Option : No Option Orientation : Vertical

Correct : 1 Wrong : 0.25

In an examination, 93% of the candidates passed and 700 failed. How many candidates appeared for the examination?

Options :

1. ☐ 13500
2. ☒ 10000
3. ☐ 12000
4. ☐ 12500

Question Number : 17 Question Id : 7368155673 Question Type : MCQ Option Shuffling : Yes Display Question Number : Yes
Single Line Question Option : No Option Orientation : Vertical

Correct : 1 Wrong : 0.25

एक परीक्षा में, 93% परीक्षार्थी उत्तीर्ण और 700 अनुत्तीर्ण हुए। परीक्षा में कितने परीक्षार्थी उपस्थित थे?

Options :

1. ☐ 13500
2. ☒ 10000
3. ☐ 12000
4. ☐ 12500

Question Number : 18 Question Id : 7368155674 Question Type : MCQ Option Shuffling : Yes Display Question Number : Yes
Single Line Question Option : No Option Orientation : Vertical

Correct : 1 Wrong : 0.25

What percent of one day is 480 minutes?

Options :

1. ☐ 55%
2. ☐ 5.5%
3. ☒ 33.33%
4. ☐ 2.5%

Question Number : 18 Question Id : 7368155674 Question Type : MCQ Option Shuffling : Yes Display Question Number : Yes
Single Line Question Option : No Option Orientation : Vertical

Correct : 1 Wrong : 0.25

एक दिन का कितना प्रतिशत 480 मिनट होता है?

Options :

- 1. ✗ 55%
- 2. ✗ 5.5%
- 3. ✓ 33.33%
- 4. ✗ 2.5%

Question Number : 19 Question Id : 7368155675 Question Type : MCQ Option Shuffling : Yes Display Question Number : Yes
Single Line Question Option : No Option Orientation : Vertical

Correct : 1 Wrong : 0.25

Express 25 paise: 1 rupee 50 paise, in its simplest form.

Options :

- 1. ✓ 1:6
- 2. ✗ 8:1
- 3. ✗ 4:5
- 4. ✗ 5:4

Question Number : 19 Question Id : 7368155675 Question Type : MCQ Option Shuffling : Yes Display Question Number : Yes
Single Line Question Option : No Option Orientation : Vertical

Correct : 1 Wrong : 0.25

25 पैसे : 1 रु 50 पैसे को इसके सरलतम रूप में दर्शाएँ।

Options :

- 1. ✓ 1:6
- 2. ✗ 8:1
- 3. ✗ 4:5
- 4. ✗ 5:4

Question Number : 20 Question Id : 7368155676 Question Type : MCQ Option Shuffling : Yes Display Question Number : Yes
Single Line Question Option : No Option Orientation : Vertical

Correct : 1 Wrong : 0.25

Two numbers are in ratio 6:5. If 4 is subtracted from each, the ratio becomes 5:4. Find the smallest number.

Options :

- 1. ✓ 20
- 2. ✗ 30
- 3. ✗ 24
- 4. ✗ 25

Question Number : 20 Question Id : 7368155676 Question Type : MCQ Option Shuffling : Yes Display Question Number : Yes
Single Line Question Option : No Option Orientation : Vertical

Correct : 1 Wrong : 0.25

दो अंक 6:5 के अनुपात में हैं। यदि प्रत्येक से 4 घटाया जाता है, तो अनुपात 5:4 हो जाता है। सबसे छोटी संख्या का पता लगाएं।

Options :

1. ☒ 20
2. ☐ 30
3. ☐ 24
4. ☐ 25

Question Number : 21 Question Id : 7368155677 Question Type : MCQ Option Shuffling : Yes Display Question Number : Yes
Single Line Question Option : No Option Orientation : Vertical

Correct : 1 Wrong : 0.25

A bag contains 50 paise, 25 paise and 10 paise coins in the ratio 8:5:4 amounting to Rs.113/-. Find the number of 25 paise coins.

Options :

1. ☒ 100
2. ☐ 175
3. ☐ 150
4. ☐ 200

Question Number : 21 Question Id : 7368155677 Question Type : MCQ Option Shuffling : Yes Display Question Number : Yes
Single Line Question Option : No Option Orientation : Vertical

Correct : 1 Wrong : 0.25

एक थैले में 50 पैसे, 25 पैसे और 10 पैसे की सिक्के क्रमशः 8:5:4 के अनुपात में हैं जिनका कुल मान रु.113 है। 25 पैसे के सिक्कों की संख्या पता करें।

Options :

1. ☒ 100
2. ☐ 175
3. ☐ 150
4. ☐ 200

Question Number : 22 Question Id : 7368155678 Question Type : MCQ Option Shuffling : Yes Display Question Number : Yes
Single Line Question Option : No Option Orientation : Vertical

Correct : 1 Wrong : 0.25

Find the average of 123,341,506,678,452.

Options :

1. ☐ 450
2. ☐ 1225
3. ☐ 1220
4. ☒ 420

Question Number : 22 Question Id : 7368155678 Question Type : MCQ Option Shuffling : Yes Display Question Number : Yes
Single Line Question Option : No Option Orientation : Vertical

Correct : 1 Wrong : 0.25

123, 341, 506, 678, 452 का औसत ज्ञात करें।

Options :

1. ☐ 450
2. ☐ 1225

3. ✖ 1220

4. ✔ 420

Question Number : 23 Question Id : 7368155679 Question Type : MCQ Option Shuffling : Yes Display Question Number : Yes
Single Line Question Option : No Option Orientation : Vertical

Correct : 1 Wrong : 0.25

The average of 7 quantities is 8. The average of five of them is 8. What is the average of remaining quantities?

Options :

1. ✖ 9

2. ✔ 8

3. ✖ 42

4. ✖ 30

Question Number : 23 Question Id : 7368155679 Question Type : MCQ Option Shuffling : Yes Display Question Number : Yes
Single Line Question Option : No Option Orientation : Vertical

Correct : 1 Wrong : 0.25

7 वस्तुओं की औसत मात्रा 8 है। उनमें से पांच की औसत मात्रा 8 है। शेष मात्रा का औसत कितना है?

Options :

1. ✖ 9

2. ✔ 8

3. ✖ 42

4. ✖ 30

Question Number : 24 Question Id : 7368155680 Question Type : MCQ Option Shuffling : Yes Display Question Number : Yes
Single Line Question Option : No Option Orientation : Vertical

Correct : 1 Wrong : 0.25

The average monthly income of P and Q is Rs.6500. The average monthly income of Q and R is Rs.5000 and the average monthly income of P and R is Rs.6000. The monthly income of R is?

Options :

1. ✔ Rs.4500

2. ✖ Rs.3500

3. ✖ Rs.2250

4. ✖ Rs.4800

Question Number : 24 Question Id : 7368155680 Question Type : MCQ Option Shuffling : Yes Display Question Number : Yes
Single Line Question Option : No Option Orientation : Vertical

Correct : 1 Wrong : 0.25

P और Q की औसत मासिक आय रु. 6500 है। Q और R की औसत मासिक आय रु.5000 और P और R की औसत मासिक आय रु.6000 है। R की मासिक आय कितनी है?

Options :

1. ✔ रु.4500

2. ✖ रु.3500

3. ✖ ₹.2250

4. ✖ ₹.4800

Question Number : 25 Question Id : 7368155681 Question Type : MCQ Option Shuffling : Yes Display Question Number : Yes
Single Line Question Option : No Option Orientation : Vertical

Correct : 1 Wrong : 0.25

Find the amount at simple interest on Rs.3200 for 3 years 9 months at 5% per annum.

Options :

1. ✖ Rs.3500

2. ✖ Rs.3600

3. ✔ Rs.3800

4. ✖ Rs.3900

Question Number : 25 Question Id : 7368155681 Question Type : MCQ Option Shuffling : Yes Display Question Number : Yes
Single Line Question Option : No Option Orientation : Vertical

Correct : 1 Wrong : 0.25

3200 रुपये पर प्रति वर्ष 5% साधारण ब्याज की दर से 3 वर्ष 9 महीने के बाद मिलाने वाली राशि ज्ञात करें।

Options :

1. ✖ ₹.3500

2. ✖ ₹.3600

3. ✔ ₹.3800

4. ✖ ₹.3900

Question Number : 26 Question Id : 7368155682 Question Type : MCQ Option Shuffling : Yes Display Question Number : Yes
Single Line Question Option : No Option Orientation : Vertical

Correct : 1 Wrong : 0.25

Simple interest on a certain sum is $\frac{64}{25}$ of the sum. Find the time, if both time and rate percent are numerically equal.

Options :

1. ✖ $1\frac{1}{2}$ years

2. ✖ $1\frac{1}{15}$ years

3. ✖ 2 years

4. ✔ 16 years

Question Number : 26 Question Id : 7368155682 Question Type : MCQ Option Shuffling : Yes Display Question Number : Yes
Single Line Question Option : No Option Orientation : Vertical

Correct : 1 Wrong : 0.25

एक निश्चित राशि पर साधारण ब्याज राशि का $\frac{64}{25}$ है। यदि समय और प्रतिशत दर संख्या के अनुसार एक सामान हैं, तो समय का पता लगाएं।

Options :

1. ✖ $1\frac{1}{2}$ वर्ष
2. ✖ $1\frac{1}{15}$ वर्ष
3. ✖ 2 वर्ष
4. ✔ 16 वर्ष

Question Number : 27 Question Id : 7368155683 Question Type : MCQ Option Shuffling : Yes Display Question Number : Yes
Single Line Question Option : No Option Orientation : Vertical

Correct : 1 Wrong : 0.25

Simple interest for a sum of Rs.3800 for 2 years is Rs.45 more than the simple interest for Rs.3300 for the same duration. Find the rate of interest.

Options :

1. ✔ 4.5%
2. ✖ 5.5%
3. ✖ 4%
4. ✖ 3%

Question Number : 27 Question Id : 7368155683 Question Type : MCQ Option Shuffling : Yes Display Question Number : Yes
Single Line Question Option : No Option Orientation : Vertical

Correct : 1 Wrong : 0.25

2 वर्ष के लिए 3800 रुपये की राशि पर मिलने वाला साधारण ब्याज 3300 रुपये पर इसी अवधि के लिए मिलने वाले साधारण ब्याज की तुलना में रु.45 से अधिक है। ब्याज की दर ज्ञात करें।

Options :

1. ✔ 4.5%
2. ✖ 5.5%
3. ✖ 4%
4. ✖ 3%

Question Number : 28 Question Id : 7368155684 Question Type : MCQ Option Shuffling : Yes Display Question Number : Yes
Single Line Question Option : No Option Orientation : Vertical

Correct : 1 Wrong : 0.25

A watch costing Rs.1000 has been sold for Rs.1450. The percentage of profit was?

Options :

1. ✖ 24%
2. ✔ 45%
3. ✖ 21%
4. ✖ 40%

Question Number : 28 Question Id : 7368155684 Question Type : MCQ Option Shuffling : Yes Display Question Number : Yes
Single Line Question Option : No Option Orientation : Vertical

Correct : 1 Wrong : 0.25

1000 रुपये की लागत मूल्य वाली घड़ी को 1450 रुपये में बेचा गया। लाभ का प्रतिशत कितना है?

Options :

1. ✖ 24%
2. ✔ 45%
3. ✖ 21%
4. ✖ 40%

Question Number : 29 Question Id : 7368155685 Question Type : MCQ Option Shuffling : Yes Display Question Number : Yes
Single Line Question Option : No Option Orientation : Vertical

Correct : 1 Wrong : 0.25

Swetha sells a washing machine for Rs.8000. She loses 55% in the bargain. What was the price at which she bought it?

Options :

1. ✖ Rs.12000
2. ✔ Rs.17777.77
3. ✖ Rs.15000
4. ✖ Rs.17500.55

Question Number : 29 Question Id : 7368155685 Question Type : MCQ Option Shuffling : Yes Display Question Number : Yes
Single Line Question Option : No Option Orientation : Vertical

Correct : 1 Wrong : 0.25

स्वेता रु.8000 में वाशिंग मशीन बेचती है। उसे सौदेबाजी में 55% का नुकसान होता है। उसने वह वाशिंग मशीन किस कीमत पर खरीदी थी?

Options :

1. ✖ रु.12000
2. ✔ रु.17777.77
3. ✖ रु.15000
4. ✖ रु.17500.55

Question Number : 30 Question Id : 7368155686 Question Type : MCQ Option Shuffling : Yes Display Question Number : Yes
Single Line Question Option : No Option Orientation : Vertical

Correct : 1 Wrong : 0.25

Lahari bought an article for Rs.3844. Due to some defects in it, she had pay Rs.156 to the mechanic for its repair. Then, she sold it for Rs.3700. Find her loss percent.

Options :

1. ✔ 7.5%
2. ✖ 2.46%
3. ✖ 5%
4. ✖ 2.5%

Question Number : 30 Question Id : 7368155686 Question Type : MCQ Option Shuffling : Yes Display Question Number : Yes
Single Line Question Option : No Option Orientation : Vertical

Correct : 1 Wrong : 0.25

लहरी ने रु.3844 में एक वस्तु खरीदी है। इसमें कुछ खराबी होने के कारण, उसने इसकी मरम्मत के लिए मैकेनिक को रु.156 दिए। फिर उसने इसे रु.3700 में बेच दिया। उसे कितना प्रतिशत नुकसान हुआ?

Options :

- 1. ✓ 7.5%
- 2. ✗ 2.46%
- 3. ✗ 5%
- 4. ✗ 2.5%

Question Number : 31 Question Id : 7368155687 Question Type : MCQ Option Shuffling : Yes Display Question Number : Yes
Single Line Question Option : No Option Orientation : Vertical

Correct : 1 Wrong : 0.25

An item is sold at Rs.415 by allowing a discount of 17% on its marked price. The marked price of the item is?

Options :

- 1. ✗ Rs.700
- 2. ✓ Rs.500
- 3. ✗ Rs.600
- 4. ✗ Rs.650

Question Number : 31 Question Id : 7368155687 Question Type : MCQ Option Shuffling : Yes Display Question Number : Yes
Single Line Question Option : No Option Orientation : Vertical

Correct : 1 Wrong : 0.25

एक वस्तु को उसकी अंकित कीमत पर 17% की छूट देकर रु.415 पर बेचा जाता है। वस्तु पर अंकित कीमत कितनी थी?

Options :

- 1. ✗ रु.700
- 2. ✓ रु.500
- 3. ✗ रु.600
- 4. ✗ रु.650

Question Number : 32 Question Id : 7368155688 Question Type : MCQ Option Shuffling : Yes Display Question Number : Yes
Single Line Question Option : No Option Orientation : Vertical

Correct : 1 Wrong : 0.25

What is a single discount equivalent to a discount series of 12% and 15%?

Options :

- 1. ✗ 24.5%
- 2. ✗ 23.44%
- 3. ✗ 25%
- 4. ✓ 25.2%

Question Number : 32 Question Id : 7368155688 Question Type : MCQ Option Shuffling : Yes Display Question Number : Yes
Single Line Question Option : No Option Orientation : Vertical

Correct : 1 Wrong : 0.25

12% और 15% की छूट श्रृंखला के बराबर एकल छूट कितनी है?

Options :

1. ✖ 24.5%
2. ✖ 23.44%
3. ✖ 25%
4. ✔ 25.2%

Question Number : 33 Question Id : 7368155689 Question Type : MCQ Option Shuffling : Yes Display Question Number : Yes
Single Line Question Option : No Option Orientation : Vertical

Correct : 1 Wrong : 0.25

The marked price of a bicycle is Rs.6900. A shopkeeper allows a discount of 15% and gets a profit of 15%. Find the cost price of the bicycle.

Options :

1. ✖ Rs.4850
2. ✖ Rs.4900
3. ✔ Rs.5100
4. ✖ Rs.4950

Question Number : 33 Question Id : 7368155689 Question Type : MCQ Option Shuffling : Yes Display Question Number : Yes
Single Line Question Option : No Option Orientation : Vertical

Correct : 1 Wrong : 0.25

एक साइकिल की अंकित कीमत रु.6900 है। एक दुकानदार 15% छूट की अनुमति देता है और उसे 15% का लाभ मिलता है। साइकिल का कुल मूल्य ज्ञात करें।

Options :

1. ✖ रु.4850
2. ✖ रु.4900
3. ✔ रु.5100
4. ✖ रु.4950

Question Number : 34 Question Id : 7368155690 Question Type : MCQ Option Shuffling : Yes Display Question Number : Yes
Single Line Question Option : No Option Orientation : Vertical

Correct : 1 Wrong : 0.25

Study the following table carefully and answer the question that follows.

YEAR WISE VILLAGE ELECTRIFICATION

YEAR	NUMBER OF VILLAGES ELECTRIFIED
1997-98	3207
1998-99	2780
1999-00	2013
2000-01	1218
2001-02	4118
2002-03	2625
2003-04	3352

In which year, 1218 number of villages were electrified?

Options :

1. ✖ 1997-98
2. ✖ 1999-00
3. ✖ 2002-03
4. ✔ 2000-01

Question Number : 34 Question Id : 7368155690 Question Type : MCQ Option Shuffling : Yes Display Question Number : Yes
Single Line Question Option : No Option Orientation : Vertical

Correct : 1 Wrong : 0.25

नीचे दी गई तालिका का ध्यान से अध्ययन करें और निम्नलिखित सवालों का जवाब दें।

वर्षवार ग्रामीण विद्युतीकरण

वर्ष	विद्युतीकृत किए गए गांवों की संख्या
1997-98	3207
1998-99	2780
1999-00	2013
2000-01	1218
2001-02	4118
2002-03	2625
2003-04	3352

किस वर्ष में, 1218 गांवों का विद्युतीकरण किया गया था?

Options :

1. ✖ 1997-98
2. ✖ 1999-00
3. ✖ 2002-03
4. ✔ 2000-01

Question Number : 35 Question Id : 7368155691 Question Type : MCQ Option Shuffling : Yes Display Question Number : Yes
Single Line Question Option : No Option Orientation : Vertical

Correct : 1 Wrong : 0.25

Study the following table carefully and answer the question that follows.

YEAR WISE VILLAGE ELECTRIFICATION

YEAR	NUMBER OF VILLAGES ELECTRIFIED
1997-98	3207
1998-99	2780
1999-00	2013
2000-01	1218
2001-02	4118
2002-03	2625
2003-04	3352

The total number of villages electrified from 1997 to 2004 was

Options :

1. ✖ 19212
2. ✔ 19313
3. ✖ 19414
4. ✖ 19515

Question Number : 35 Question Id : 7368155691 Question Type : MCQ Option Shuffling : Yes Display Question Number : Yes
Single Line Question Option : No Option Orientation : Vertical

Correct : 1 Wrong : 0.25

निम्नलिखित तालिका का ध्यान से अध्ययन करें और निम्नलिखित सवालों का जवाब दें।

वर्षवार ग्रामीण विद्युतीकरण

वर्ष	विद्युतीकृत किए गए गांवों की संख्या
1997-98	3207
1998-99	2780
1999-00	2013
2000-01	1218
2001-02	4118
2002-03	2625
2003-04	3352

1997 से 2004 तक कुल कितने गांवों का विद्युतीकृत किया गया था?

Options :

1. ✖ 19212
2. ✔ 19313
3. ✖ 19414
4. ✖ 19515

Question Number : 36 Question Id : 7368155692 Question Type : MCQ Option Shuffling : Yes Display Question Number : Yes
Single Line Question Option : No Option Orientation : Vertical

Correct : 1 Wrong : 0.25

Study the following table carefully and answer the question that follows.

YEAR WISE VILLAGE ELECTRIFICATION

YEAR	NUMBER OF VILLAGES ELECTRIFIED
1997-98	3207
1998-99	2780
1999-00	2013
2000-01	1218
2001-02	4118
2002-03	2625
2003-04	3352

In which year, more number of villages were electrified?

Options :

1. ✔ 2001-02

2. ✖ 2002-03

3. ✖ 2003-04

4. ✖ 2000-01

Question Number : 36 Question Id : 7368155692 Question Type : MCQ Option Shuffling : Yes Display Question Number : Yes
Single Line Question Option : No Option Orientation : Vertical

Correct : 1 Wrong : 0.25

निम्नलिखित तालिका का ध्यान से अध्ययन करें और निम्नलिखित सवालों का जवाब दें।

वर्षवार ग्रामीण विद्युतीकरण

वर्ष	विद्युतीकृत किए गए गांवों की संख्या
1997-98	3207
1998-99	2780
1999-00	2013
2000-01	1218
2001-02	4118
2002-03	2625
2003-04	3352

किस वर्ष में ज्यादा गांवों को विद्युतीकृत किया गया था?

Options :

1. ✔ 2001-02

2. ✖ 2002-03

3. ✖ 2003-04

4. ✖ 2000-01

Question Number : 37 Question Id : 7368155693 Question Type : MCQ Option Shuffling : Yes Display Question Number : Yes
Single Line Question Option : No Option Orientation : Vertical

Correct : 1 Wrong : 0.25

Study the following table carefully and answer the question that follows.

YEAR WISE VILLAGE ELECTRIFICATION

YEAR	NUMBER OF VILLAGES ELECTRIFIED
1997-98	3207
1998-99	2780
1999-00	2013
2000-01	1218
2001-02	4118
2002-03	2625
2003-04	3352

In which year, 2013 number of villages were electrified?

Options :

1. ✖ 1997-98

2. ✖ 1998-99

3. ✖ 2003-04

4. ✔ 1999-00

Question Number : 37 Question Id : 7368155693 Question Type : MCQ Option Shuffling : Yes Display Question Number : Yes
Single Line Question Option : No Option Orientation : Vertical

Correct : 1 Wrong : 0.25

निम्नलिखित तालिका का ध्यान से अध्ययन करें और निम्नलिखित सवालों का जवाब दें।

वर्षवार ग्रामीण विद्युतीकरण

वर्ष	विद्युतीकृत किए गए गांवों की संख्या
1997-98	3207
1998-99	2780
1999-00	2013
2000-01	1218
2001-02	4118
2002-03	2625
2003-04	3352

किस वर्ष में, 2013 गांवों का विद्युतीकरण किया गया था?

Options :

1. ✖ 1997-98

2. ✖ 1998-99

3. ✖ 2003-04

4. ✔ 1999-00

Question Number : 38 Question Id : 7368155694 Question Type : MCQ Option Shuffling : Yes Display Question Number : Yes
Single Line Question Option : No Option Orientation : Vertical

Correct : 1 Wrong : 0.25

Study the following table carefully and answer the question that follows.

YEAR WISE VILLAGE ELECTRIFICATION

YEAR	NUMBER OF VILLAGES ELECTRIFIED
1997-98	3207
1998-99	2780
1999-00	2013
2000-01	1218
2001-02	4118
2002-03	2625
2003-04	3352

In which year, less number of villages were electrified?

Options :

1. ✔ 2000-01

2. ✖ 2001-02

3. ✖ 1997-98

4. ✖ 1998-99

Question Number : 38 Question Id : 7368155694 Question Type : MCQ Option Shuffling : Yes Display Question Number : Yes
Single Line Question Option : No Option Orientation : Vertical

Correct : 1 Wrong : 0.25

निम्नलिखित तालिका का ध्यान से अध्ययन करें और निम्नलिखित सवालों का जवाब दें।

वर्षवार ग्रामीण विद्युतीकरण

वर्ष	विद्युतीकृत किए गए गांवों की संख्या
1997-98	3207
1998-99	2780
1999-00	2013
2000-01	1218
2001-02	4118
2002-03	2625
2003-04	3352

किस वर्ष में, सबसे कम गांवों का विद्युतीकरण किया गया था?

Options :

1. ✔ 2000-01

2. ✖ 2001-02

3. ✖ 1997-98

4. ✖ 1998-99

Question Number : 39 Question Id : 7368155695 Question Type : MCQ Option Shuffling : Yes Display Question Number : Yes
Single Line Question Option : No Option Orientation : Vertical

Correct : 1 Wrong : 0.25

The area of a square field is $\frac{3}{2}$ hectare. Find the length of its diagonal in metres.

Options :

1. ✖ 50 mts

2. ✖ $50\sqrt{2}$ mts

3. ✖ 40 mts

4. ✔ $100\sqrt{3}$ mts

Question Number : 39 Question Id : 7368155695 Question Type : MCQ Option Shuffling : Yes Display Question Number : Yes
Single Line Question Option : No Option Orientation : Vertical

Correct : 1 Wrong : 0.25

एक वर्ग क्षेत्र का क्षेत्रफल $\frac{3}{2}$ हेक्टेयर है। इसके विकर्ण की लंबाई का मीटर में पता करें।

Options :

1. ✖ 50 मीटर

2. ✖ $50\sqrt{2}$ मीटर
3. ✖ 40 मीटर
4. ✔ $100\sqrt{3}$ मीटर

Question Number : 40 Question Id : 7368155696 Question Type : MCQ Option Shuffling : Yes Display Question Number : Yes
Single Line Question Option : No Option Orientation : Vertical

Correct : 1 Wrong : 0.25

The area of an equilateral triangle is $20\sqrt{3}cm^2$. Find the length of its side.

Options :

1. ✖ 4cm
2. ✖ 4.5cm
3. ✔ $4\sqrt{5}cm$
4. ✖ 4.25cm

Question Number : 40 Question Id : 7368155696 Question Type : MCQ Option Shuffling : Yes Display Question Number : Yes
Single Line Question Option : No Option Orientation : Vertical

Correct : 1 Wrong : 0.25

एक समभुज त्रिकोण का क्षेत्रफल $20\sqrt{3}$ सेमी² है। इसकी क्षेत्र की लंबाई का पता लगाए।

Options :

1. ✖ 4 सेमी
2. ✖ 4.5 सेमी
3. ✔ $4\sqrt{5}$ सेमी
4. ✖ 4.25 सेमी

Question Number : 41 Question Id : 7368155697 Question Type : MCQ Option Shuffling : Yes Display Question Number : Yes
Single Line Question Option : No Option Orientation : Vertical

Correct : 1 Wrong : 0.25

The diameter of the wheel of a car is 28 cm. How many revolutions will it make to travel 4.4 km?

Options :

1. ✖ 4000
2. ✔ 5000
3. ✖ 6500
4. ✖ 4500

Question Number : 41 Question Id : 7368155697 Question Type : MCQ Option Shuffling : Yes Display Question Number : Yes
Single Line Question Option : No Option Orientation : Vertical

Correct : 1 Wrong : 0.25

एक कार के पहिये का व्यास 28 सेमी है। 4.4 किलोमीटर की यात्रा पूरी करने के लिए इसे कितने चक्कर घूमने पड़ेंगे?

Options :

1. ✖ 4000

2. ✓ 5000

3. ✗ 6500

4. ✗ 4500

Question Number : 42 Question Id : 7368155698 Question Type : MCQ Option Shuffling : Yes Display Question Number : Yes
Single Line Question Option : No Option Orientation : Vertical

Correct : 1 Wrong : 0.25

A car travels 650 km in 12 hours and another 850 km in 8 hours. Find the average speed of the car.

Options :

1. ✗ 52 km/h

2. ✓ 75 km/h

3. ✗ 72 km/h

4. ✗ 70 km/h

Question Number : 42 Question Id : 7368155698 Question Type : MCQ Option Shuffling : Yes Display Question Number : Yes
Single Line Question Option : No Option Orientation : Vertical

Correct : 1 Wrong : 0.25

एक कार 12 घंटे में 650 किलोमीटर और 8 घंटे में अन्य 850 किलोमीटर यात्रा करती है। कार की औसत गति ज्ञात करें।

Options :

1. ✗ 52 कि.मी./घंटा

2. ✓ 75 कि.मी./घंटा

3. ✗ 72 कि.मी./घंटा

4. ✗ 70 कि.मी./घंटा

Question Number : 43 Question Id : 7368155699 Question Type : MCQ Option Shuffling : Yes Display Question Number : Yes
Single Line Question Option : No Option Orientation : Vertical

Correct : 1 Wrong : 0.25

A vehicle travels at 40 km/h. How many meters will it travel in 15 minutes?

Options :

1. ✗ 20000 mts

2. ✗ 15000 mts

3. ✓ 10000 mts

4. ✗ 12000 mts

Question Number : 43 Question Id : 7368155699 Question Type : MCQ Option Shuffling : Yes Display Question Number : Yes
Single Line Question Option : No Option Orientation : Vertical

Correct : 1 Wrong : 0.25

एक वाहन 40 कि.मी/घंटा की गति से यात्रा करती है। यह 15 मिनट में कितने मीटर की दूरी तय करेगा?

Options :

1. ✗ 20000 मीटर

2. ✖ 15000 मीटर
3. ✔ 10000 मीटर
4. ✖ 12000 मीटर

Question Number : 44 Question Id : 7368155700 Question Type : MCQ Option Shuffling : Yes Display Question Number : Yes
Single Line Question Option : No Option Orientation : Vertical

Correct : 1 Wrong : 0.25

Anand can cover a certain distance in 2 hour 45 min by covering two-third of the distance at 4 kmph and the rest at 5 kmph. Find the total distance.

Options :

1. ✔ 11.78 km
2. ✖ 11.8 km
3. ✖ 11.5 km
4. ✖ 11.2 km

Question Number : 44 Question Id : 7368155700 Question Type : MCQ Option Shuffling : Yes Display Question Number : Yes
Single Line Question Option : No Option Orientation : Vertical

Correct : 1 Wrong : 0.25

आनंद 2 घंटे 45 मिनट में एक निश्चित दूरी पूरी कर सकता है, जिसमें से दो-तिहाई 4 किमी/घंटा गति से और शेष 5 किमी/घंटा द्वारा तय कर सकता है। कुल दूरी ज्ञात करें।

Options :

1. ✔ 11.78 किलोमीटर
2. ✖ 11.8 किलोमीटर
3. ✖ 11.5 किलोमीटर
4. ✖ 11.2 किलोमीटर

Question Number : 45 Question Id : 7368155701 Question Type : MCQ Option Shuffling : Yes Display Question Number : Yes
Single Line Question Option : No Option Orientation : Vertical

Correct : 1 Wrong : 0.25

Rama takes 49minutes to reach school from home. Prema takes 35minutes to cover the same distance. Find the ratio of time taken by Rama to the time taken by Prema.

Options :

1. ✖ 3:5
2. ✔ 7:5
3. ✖ 7:3
4. ✖ 5:3

Question Number : 45 Question Id : 7368155701 Question Type : MCQ Option Shuffling : Yes Display Question Number : Yes
Single Line Question Option : No Option Orientation : Vertical

Correct : 1 Wrong : 0.25

रमा घर से स्कूल तक पहुंचने के लिए 49 मिनट लेती है। प्रेमा इतनी ही दूरी को पूरा करने के लिए 35 मिनट लेती है। रमा द्वारा और प्रेमा द्वारा लिए गए समय के अनुपात का पता लगाएं।

Options :

1. ✖ 3:5
2. ✔ 7:5
3. ✖ 7:3
4. ✖ 5:3

Question Number : 46 Question Id : 7368155702 Question Type : MCQ Option Shuffling : Yes Display Question Number : Yes
Single Line Question Option : No Option Orientation : Vertical

Correct : 1 Wrong : 0.25

Spruha works in office for 2hours 40minutes and Spoorthi works for 7hours in her office.
Find the ratio of their working hours.

Options :

1. ✖ 21:8
2. ✖ 22:51
3. ✖ 51:22
4. ✔ 8:21

Question Number : 46 Question Id : 7368155702 Question Type : MCQ Option Shuffling : Yes Display Question Number : Yes
Single Line Question Option : No Option Orientation : Vertical

Correct : 1 Wrong : 0.25

स्पृहा कार्यालय में 2 घंटे 40 मिनट काम करती है, और स्पूति अपने कार्यालय में 7 घंटे काम करती है।
उनके काम करने के घंटे के अनुपात का पता लगाएं।

Options :

1. ✖ 21:8
2. ✖ 22:51
3. ✖ 51:22
4. ✔ 8:21

Question Number : 47 Question Id : 7368155703 Question Type : MCQ Option Shuffling : Yes Display Question Number : Yes
Single Line Question Option : No Option Orientation : Vertical

Correct : 1 Wrong : 0.25

The ratio of times taken by A and B to finish a piece of work is 1:4. If A completes the work in 13 days, then find the time taken by B to complete the work.

Options :

1. ✖ 15 days
2. ✔ 52 days
3. ✖ 20 days
4. ✖ 28 days

Question Number : 47 Question Id : 7368155703 Question Type : MCQ Option Shuffling : Yes Display Question Number : Yes
Single Line Question Option : No Option Orientation : Vertical

Correct : 1 Wrong : 0.25

A और B द्वारा एक काम को खत्म करने के लिए, दिए गए समय का अनुपात 1:4 है। यदि A काम को 13 दिन में पूरा करता है, तो B द्वारा काम पूरा करने में कितना समय लगेगा?

Options :

1. ✖ 15 दिन
2. ✔ 52 दिन
3. ✖ 20 दिन
4. ✖ 28 दिन

Question Number : 48 Question Id : 7368155704 Question Type : MCQ Option Shuffling : Yes Display Question Number : Yes
Single Line Question Option : No Option Orientation : Vertical

Correct : 1 Wrong : 0.25

Priya can do a work in 3 days and Preethi is 20% more expert than Priya to complete the same work, then find the total time taken to complete the work by Preethi.

Options :

1. ✖ $5\frac{1}{2}$ days
2. ✖ $4\frac{1}{2}$ days
3. ✔ $2\frac{1}{2}$ days
4. ✖ 6 days

Question Number : 48 Question Id : 7368155704 Question Type : MCQ Option Shuffling : Yes Display Question Number : Yes
Single Line Question Option : No Option Orientation : Vertical

Correct : 1 Wrong : 0.25

प्रिया 3 दिन में एक काम कर सकती है, और प्रीति उसी काम को प्रिया की तुलना में 20% अधिक अच्छे तरीके से कर सकती है। तो काम को पूरा करने के लिए प्रीति द्वारा लिये गए कुल समय का पता लगाएं।

Options :

1. ✖ $5\frac{1}{2}$ दिन
2. ✖ $4\frac{1}{2}$ दिन
3. ✔ $2\frac{1}{2}$ दिन
4. ✖ 6 दिन

Question Number : 49 Question Id : 7368155705 Question Type : MCQ Option Shuffling : Yes Display Question Number : Yes
Single Line Question Option : No Option Orientation : Vertical

Correct : 1 Wrong : 0.25

If A can do a piece of work in 3 days, B can do the same in 6 days and C can do the same work in 9 days, then working together, how many days will they take to complete the work?

Options :

1. ✖ $2\frac{2}{11}$ days
2. ✖ 9 days

3. ✓ $1\frac{7}{11}$ days

4. ✗ 24 days

Question Number : 49 Question Id : 7368155705 Question Type : MCQ Option Shuffling : Yes Display Question Number : Yes
Single Line Question Option : No Option Orientation : Vertical

Correct : 1 Wrong : 0.25

यदि A 3 दिन में एक काम कर सकता है, B वही काम 6 दिन में और C वही काम 9 दिन में कर सकता है, तो एक साथ काम को पूरा करने के लिए उन्हें कितने दिन लगेंगे?

Options :

1. ✗ $2\frac{2}{11}$ दिन

2. ✗ 9 दिन

3. ✓ $1\frac{7}{11}$ दिन

4. ✗ 24 दिन

Question Number : 50 Question Id : 7368155706 Question Type : MCQ Option Shuffling : Yes Display Question Number : Yes
Single Line Question Option : No Option Orientation : Vertical

Correct : 1 Wrong : 0.25

20 men can complete a work in 21 days. 7 days after they started working, 14 more men joined them. How many days will they now take to complete the remaining work?

Options :

1. ✗ $6\frac{2}{3}$ days

2. ✓ $8\frac{4}{17}$ days

3. ✗ $7\frac{2}{3}$ days

4. ✗ $8\frac{1}{4}$ days

Question Number : 50 Question Id : 7368155706 Question Type : MCQ Option Shuffling : Yes Display Question Number : Yes
Single Line Question Option : No Option Orientation : Vertical

Correct : 1 Wrong : 0.25

20 पुरुष 21 दिनों में एक काम को पूरा कर सकते हैं। काम शुरू करने के 7 दिन बाद, 14 और पुरुष उनमें शामिल हो गए। अब बाकी के काम को पूरा करने के लिए उन्हें कितने दिन लगेंगे?

Options :

1. ✗ $6\frac{2}{3}$ दिन

2. ✓ $8\frac{4}{17}$ दिन

3. ✗ $7\frac{2}{3}$ दिन

4. ✗ $8\frac{1}{4}$ दिन

English Language

Section Id :	736815112
Section Number :	2
Section type :	Online
Mandatory or Optional:	Mandatory
Number of Questions:	32
Number of Questions to be attempted:	32
Section Marks:	50
Display Number Panel:	Yes
Group All Questions:	No

Sub-Section Number:	1
Sub-Section Id:	736815168
Question Shuffling Allowed :	No

Question Id : 7368155707 Question Type : COMPREHENSION Sub Question Shuffling Allowed : No Group Comprehension Questions : No

Question Numbers : (51 to 60)

Question Label : Comprehension

Answer the questions given under the passage by choosing the best option for each:

Electronic media is speeding things up and intensifying the complexity of our culture. This phenomenon, dubbed hyperculture, has trickled down to alter the nature of day-to-day interactions, with negative consequences for the shy. Those who are not quick and intense get passed by. The shy are bellwethers of this change. And so it's not surprising that hyperculture is actually exacerbating shyness, in both incidence and degree. It now takes an increasingly powerful personality to be recognized. People have to call attention to themselves in ways that are more and more extreme just to be noticed at all. The shy are put at a further disadvantage.

Hyperculture brings about "interpersonal disenfranchisement." Simply put, we are disconnecting from one another. As other people become just e-mail addresses or faceless voices at the other end of electronic transactions, it becomes easier and easier to mistreat and disrespect them. The cost of such disconnection is a day-to-day loss of civility and an increase in rudeness. And the shy are the first to be excluded, bullied or treated in a hostile manner.

Reaching the limits of our ability to deal with the complexities of our lives, we ourselves have begun to experience a state of anxiety. We either approach or avoid. And, indeed, we are seeing both phenomena -- a polarization of behavior in which we see increases in both aggression, marked by a general loss of manners that has been widely observed, and in withdrawal, one form of which is shyness. Surveys show that the incidence of shyness has risen from 40% to 48%.

Sub questions

Question Number : 51 Question Id : 7368155708 Question Type : MCQ Option Shuffling : Yes Display Question Number : Yes Single Line Question Option : No Option Orientation : Vertical

Correct : 1 Wrong : 0.25

A title that will reflect the content and message of this write-up would be

Options :

1. ✖ Cursed are the Shy for the Hyperculture World is not theirs
2. ✖ The widening gap between the bully and the shy in hyperculture
3. ✔ The shy are marginalized in hyperculture, but we will join them soon
4. ✖ The Shrinking Space for the Shy Means Their Tribe will increase

Question Number : 52 Question Id : 7368155709 Question Type : MCQ Option Shuffling : Yes Display Question Number : Yes
Single Line Question Option : No Option Orientation : Vertical

Correct : 1 Wrong : 0.25

The shy suffer in the present-day dominating hyperculture as they are

Options :

1. ✖ aggressive, but slow, and excluded in groups
2. ✔ slow, defacing, and easy to bully
3. ✖ conscious of how the others treat them
4. ✖ more number of people are being pushed into shyness

Question Number : 53 Question Id : 7368155710 Question Type : MCQ Option Shuffling : Yes Display Question Number : Yes
Single Line Question Option : No Option Orientation : Vertical

Correct : 1 Wrong : 0.25

When the writer says, 'We either approach or avoid,' he is

Options :

1. ✖ He is making a generalization, without establishing which, he goes on to predict that we might also get into 'withdrawal' and join the shy.
2. ✖ He is hinting at the middle stages of our transformation in hyperculture, from where we might also get into 'withdrawal' and join the shy.
3. ✔ He is describing how anxiety caused by hyperculture has pushed into push or be pushed mode of behavior, which might compel us to 'withdraw' and join the shy.
4. ✖ He is predicting how humanity in general would be divided into two groups and how the tribe of shy might increase.

Question Number : 54 Question Id : 7368155711 Question Type : MCQ Option Shuffling : Yes Display Question Number : Yes
Single Line Question Option : No Option Orientation : Vertical

Correct : 1 Wrong : 0.25

The expression 'bellwether' means 'someone or something that leads others or shows what will happen in the future.' The shy are bellwethers as

Options :

1. ✖ willingly let changes in culture affect them, so that they can show others their future.
2. ✖ society makes the slow and the withdrawn play the role
3. ✔ they are the immediate victims of the speedy, the loud and the self-centred and so act as bellwethers
4. ✖ they are slow, less intense and non-aggressive, which are what bellwethers are

Question Number : 55 Question Id : 7368155712 Question Type : MCQ Option Shuffling : Yes Display Question Number : Yes
Single Line Question Option : No Option Orientation : Vertical

Correct : 1 Wrong : 0.25

It has become easier to mistreat and disrespect others as

Options :

- there is no interpersonal bond between those who prefer the electronic media for communication
1. ✖
 2. ✖
 3. ✔ the people we deal with through electronic media are not people but disembodied voices
the lack of concern for any personal information about the others has made them into 'objects'
 4. ✖ if we do not do so, others will mistreat and disrespect us

Question Number : 56 Question Id : 7368155713 Question Type : MCQ Option Shuffling : Yes Display Question Number : Yes
Single Line Question Option : No Option Orientation : Vertical

Correct : 1 Wrong : 0.25

'incidence and degree' means

Options :

1. ✔ in number and intensity
2. ✖ events and reactions
3. ✖ events and their nature
4. ✖ in number and nature

Question Number : 57 Question Id : 7368155714 Question Type : MCQ Option Shuffling : Yes Display Question Number : Yes
Single Line Question Option : No Option Orientation : Vertical

Correct : 1 Wrong : 0.25

The writer uses both civility [loss of] and rudeness [increasing]. Civility and rudeness differ in meaning as

Options :

- civility refers to gentle, formal, respectful treatment of others and rudeness refers to deliberate discourtesy
1. ✖
 2. ✖ civility is related to social behaviour and 'rudeness' refers to our personal actions
civility is related to social approach and attitude, while rudeness is related to personality and action
 3. ✔
 4. ✖ the writer uses both in the same phrase

Question Number : 58 Question Id : 7368155715 Question Type : MCQ Option Shuffling : Yes Display Question Number : Yes
Single Line Question Option : No Option Orientation : Vertical

Correct : 1 Wrong : 0.25

Polarization means

Options :

1. ✖ a complete separation
2. ✖ division into positive and negative poles
3. ✔ a sharp division resulting in two opposing groups
4. ✖ one going northwards and the other going southwards

Question Number : 59 Question Id : 7368155716 Question Type : MCQ Option Shuffling : Yes Display Question Number : Yes
Single Line Question Option : No Option Orientation : Vertical

Correct : 1 Wrong : 0.25

The opposite of shy when used normally is

Options :

1. ✓ confident
2. ✗ fast
3. ✗ outgoing
4. ✗ aggressive

Question Number : 60 Question Id : 7368155717 Question Type : MCQ Option Shuffling : Yes Display Question Number : Yes
Single Line Question Option : No Option Orientation : Vertical

Correct : 1 Wrong : 0.25

To mistreat is to

Options :

1. ✗ treat badly
2. ✓ treat wrongly
3. ✗ treat disrespectfully
4. ✗ treat properly

Question Id : 7368155707 Question Type : COMPREHENSION Sub Question Shuffling Allowed : No Group Comprehension
Questions : No

Question Numbers : (51 to 60)

Question Label : Comprehension

Answer the questions given under the passage by choosing the best option for each:

Electronic media is speeding things up and intensifying the complexity of our culture. This phenomenon, dubbed hyperculture, has trickled down to alter the nature of day-to-day interactions, with negative consequences for the shy. Those who are not quick and intense get passed by. The shy are bellwethers of this change. And so it's not surprising that hyperculture is actually exacerbating shyness, in both incidence and degree. It now takes an increasingly powerful personality to be recognized. People have to call attention to themselves in ways that are more and more extreme just to be noticed at all. The shy are put at a further disadvantage.

Hyperculture brings about "interpersonal disenfranchisement." Simply put, we are disconnecting from one another. As other people become just e-mail addresses or faceless voices at the other end of electronic transactions, it becomes easier and easier to mistreat and disrespect them. The cost of such disconnection is a day-to-day loss of civility and an increase in rudeness. And the shy are the first to be excluded, bullied or treated in a hostile manner.

Reaching the limits of our ability to deal with the complexities of our lives, we ourselves have begun to experience a state of anxiety. We either approach or avoid. And, indeed, we are seeing both phenomena -- a polarization of behavior in which we see increases in both aggression, marked by a general loss of manners that has been widely observed, and in withdrawal, one form of which is shyness. Surveys show that the incidence of shyness has risen from 40% to 48%.

Sub questions

Question Number : 51 Question Id : 7368155708 Question Type : MCQ Option Shuffling : Yes Display Question Number : Yes
Single Line Question Option : No Option Orientation : Vertical

Correct : 1 Wrong : 0.25

A title that will reflect the content and message of this write-up would be

Options :

1. ✗ Cursed are the Shy for the Hyperculture World is not theirs
2. ✗ The widening gap between the bully and the shy in hyperculture
3. ✓ The shy are marginalized in hyperculture, but we will join them soon
4. ✗ The Shrinking Space for the Shy Means Their Tribe will increase

Question Number : 52 Question Id : 7368155709 Question Type : MCQ Option Shuffling : Yes Display Question Number : Yes
Single Line Question Option : No Option Orientation : Vertical

Correct : 1 Wrong : 0.25

The shy suffer in the present-day dominating hyperculture as they are

Options :

1. ✗ aggressive, but slow, and excluded in groups
2. ✓ slow, defacing, and easy to bully
3. ✗ conscious of how the others treat them
4. ✗ more number of people are being pushed into shyness

Question Number : 53 Question Id : 7368155710 Question Type : MCQ Option Shuffling : Yes Display Question Number : Yes
Single Line Question Option : No Option Orientation : Vertical

Correct : 1 Wrong : 0.25

When the writer says, 'We either approach or avoid,' he is

Options :

1. ✗ He is making a generalization, without establishing which, he goes on to predict that we might also get into 'withdrawal' and join the shy.
2. ✗ He is hinting at the middle stages of our transformation in hyperculture, from where we might also get into 'withdrawal' and join the shy.
3. ✓ He is describing how anxiety caused by hyperculture has pushed into push or be pushed mode of behavior, which might compel us to 'withdraw' and join the shy.
4. ✗ He is predicting how humanity in general would be divided into two groups and how the tribe of shy might increase.

Question Number : 54 Question Id : 7368155711 Question Type : MCQ Option Shuffling : Yes Display Question Number : Yes
Single Line Question Option : No Option Orientation : Vertical

Correct : 1 Wrong : 0.25

The expression 'bellwether' means 'someone or something that leads others or shows what will happen in the future.' The shy are bellwethers as

Options :

1. ✗ willingly let changes in culture affect them, so that they can show others their future.
2. ✗ society makes the slow and the withdrawn play the role they are the immediate victims of the speedy, the loud and the self-centred and so
3. ✓ act as bellwethers

4. ✖ they are slow, less intense and non-aggressive, which are what bellwethers are

Question Number : 55 Question Id : 7368155712 Question Type : MCQ Option Shuffling : Yes Display Question Number : Yes
Single Line Question Option : No Option Orientation : Vertical

Correct : 1 Wrong : 0.25

It has become easier to mistreat and disrespect others as

Options :

- there is no interpersonal bond between those who prefer the electronic media for
1. ✖ communication
 - the people we deal with through electronic media are not people but disembodied
 2. ✖ voices
 - the lack of concern for any personal information about the others has made them into
 3. ✔ 'objects'
 4. ✖ if we do not do so, others will mistreat and disrespect us

Question Number : 56 Question Id : 7368155713 Question Type : MCQ Option Shuffling : Yes Display Question Number : Yes
Single Line Question Option : No Option Orientation : Vertical

Correct : 1 Wrong : 0.25

'incidence and degree' means

Options :

1. ✔ in number and intensity
2. ✖ events and reactions
3. ✖ events and their nature
4. ✖ in number and nature

Question Number : 57 Question Id : 7368155714 Question Type : MCQ Option Shuffling : Yes Display Question Number : Yes
Single Line Question Option : No Option Orientation : Vertical

Correct : 1 Wrong : 0.25

The writer uses both civility [loss of] and rudeness [increasing]. Civility and rudeness differ in meaning as

Options :

- civility refers to gentle, formal, respectful treatment of others and rudeness refers to
1. ✖ deliberate discourtesy
 2. ✖ civility is related to social behaviour and 'rudeness' refers to our personal actions
 - civility is related to social approach and attitude, while rudeness is related to
 3. ✔ personality and action
 4. ✖ the writer uses both in the same phrase

Question Number : 58 Question Id : 7368155715 Question Type : MCQ Option Shuffling : Yes Display Question Number : Yes
Single Line Question Option : No Option Orientation : Vertical

Correct : 1 Wrong : 0.25

Polarization means

Options :

1. ✖ a complete separation
2. ✖ division into positive and negative poles
3. ✔ a sharp division resulting in two opposing groups

4. ✖ one going northwards and the other going southwards

Question Number : 59 Question Id : 7368155716 Question Type : MCQ Option Shuffling : Yes Display Question Number : Yes
Single Line Question Option : No Option Orientation : Vertical

Correct : 1 Wrong : 0.25

The opposite of shy when used normally is

Options :

1. ✔ confident

2. ✖ fast

3. ✖ outgoing

4. ✖ aggressive

Question Number : 60 Question Id : 7368155717 Question Type : MCQ Option Shuffling : Yes Display Question Number : Yes
Single Line Question Option : No Option Orientation : Vertical

Correct : 1 Wrong : 0.25

To mistreat is to

Options :

1. ✖ treat badly

2. ✔ treat wrongly

3. ✖ treat disrespectfully

4. ✖ treat properly

Sub-Section Number:	2
Sub-Section Id:	736815169
Question Shuffling Allowed :	No

Question Id : 7368155718 Question Type : COMPREHENSION Sub Question Shuffling Allowed : No Group Comprehension
Questions : No

Question Numbers : (61 to 70)

Question Label : Comprehension

Given below is a passage with ten blanks, numbered from 11 to 20. Fill in the blanks by choosing the correct option given against the corresponding question number:

The valuation of a particularist epistemology is coupled with the claim to possess the authority to speak on a particular culture's behalf. In practice that means that only members of a particular culture can speak on its behalf. As a _____ (11), it was claimed that only feminist theoreticians had the epistemological authority to write about _____ (12). Similarly, it was suggested that only black _____ (13) had the right to write about black _____ (14) and that only Native Americans could tell the _____ (15) of their people. This insistence that there is _____ (16) difference in experience and understanding between different _____ (17) of people served to legitimise and entrench _____. (18) Culture itself, which enlightened thinkers perceived as a _____ (19) and constantly interacting and changing phenomenon, was now rendered _____ (20) and fossilised. It was in the context of the fossilisation of cultural identity that the issue of cultural appropriation became politicised.

Sub questions

Question Number : 61 Question Id : 7368155719 Question Type : MCQ Option Shuffling : Yes Display Question Number : Yes
Single Line Question Option : No Option Orientation : Vertical

Correct : 1 Wrong : 0.25

Fill in the blanks by choosing the correct option given against the corresponding Question number:

Options :

1. ✖ effect
2. ✖ rule
3. ✔ result
4. ✖ law

Question Number : 62 Question Id : 7368155720 Question Type : MCQ Option Shuffling : Yes Display Question Number : Yes
Single Line Question Option : No Option Orientation : Vertical

Correct : 1 Wrong : 0.25

Fill in the blanks by choosing the correct option given against the corresponding Question number:

Options :

1. ✖ girls
2. ✔ women
3. ✖ ladies
4. ✖ maids

Question Number : 63 Question Id : 7368155721 Question Type : MCQ Option Shuffling : Yes Display Question Number : Yes
Single Line Question Option : No Option Orientation : Vertical

Correct : 1 Wrong : 0.25

Fill in the blanks by choosing the correct option given against the corresponding Question number:

Options :

1. ✖ men
2. ✖ women
3. ✖ priests
4. ✔ people

Question Number : 64 Question Id : 7368155722 Question Type : MCQ Option Shuffling : Yes Display Question Number : Yes
Single Line Question Option : No Option Orientation : Vertical

Correct : 1 Wrong : 0.25

Fill in the blanks by choosing the correct option given against the corresponding Question number:

Options :

1. ✔ history
2. ✖ geography
3. ✖ literature
4. ✖ economics

Question Number : 65 Question Id : 7368155723 Question Type : MCQ Option Shuffling : Yes Display Question Number : Yes
Single Line Question Option : No Option Orientation : Vertical

Correct : 1 Wrong : 0.25

Fill in the blanks by choosing the correct option given against the corresponding Question number:

Options :

1. ✖ people
2. ✖ life
3. ✔ stories
4. ✖ films

Question Number : 66 Question Id : 7368155724 Question Type : MCQ Option Shuffling : Yes Display Question Number : Yes
Single Line Question Option : No Option Orientation : Vertical

Correct : 1 Wrong : 0.25

Fill in the blanks by choosing the correct option given against the corresponding Question number:

Options :

1. ✖ unfathomable
2. ✖ uncountable
3. ✖ unmanageable
4. ✔ unbridgeable

Question Number : 67 Question Id : 7368155725 Question Type : MCQ Option Shuffling : Yes Display Question Number : Yes
Single Line Question Option : No Option Orientation : Vertical

Correct : 1 Wrong : 0.25

Fill in the blanks by choosing the correct option given against the corresponding Question number:

Options :

1. ✔ groups
2. ✖ herds
3. ✖ castes
4. ✖ tribes

Question Number : 68 Question Id : 7368155726 Question Type : MCQ Option Shuffling : Yes Display Question Number : Yes
Single Line Question Option : No Option Orientation : Vertical

Correct : 1 Wrong : 0.25

Fill in the blanks by choosing the correct option given against the corresponding Question number:

Options :

1. ✖ partitions
2. ✔ divisions
3. ✖ separations
4. ✖ multiplications

Question Number : 69 Question Id : 7368155727 Question Type : MCQ Option Shuffling : Yes Display Question Number : Yes
Single Line Question Option : No Option Orientation : Vertical

Correct : 1 Wrong : 0.25

Fill in the blanks by choosing the correct option given against the corresponding Question number:

Options :

1. ✔ fluid
2. ✖ fixed

3. ✖ flowing

4. ✖ solid

Question Number : 70 Question Id : 7368155728 Question Type : MCQ Option Shuffling : Yes Display Question Number : Yes
Single Line Question Option : No Option Orientation : Vertical

Correct : 1 Wrong : 0.25

Fill in the blanks by choosing the correct option given against the corresponding Question number:

Options :

1. ✖ frigid

2. ✖ rigged

3. ✖ upright

4. ✔ rigid

Question Id : 7368155718 Question Type : COMPREHENSION Sub Question Shuffling Allowed : No Group Comprehension Questions : No

Question Numbers : (61 to 70)

Question Label : Comprehension

Given below is a passage with ten blanks, numbered from 11 to 20. Fill in the blanks by choosing the correct option given against the corresponding question number:

The valuation of a particularist epistemology is coupled with the claim to possess the authority to speak on a particular culture's behalf. In practice that means that only members of a particular culture can speak on its behalf. As a _____ (11), it was claimed that only feminist theoreticians had the epistemological authority to write about _____ (12). Similarly, it was suggested that only black _____ (13) had the right to write about black _____ (14) and that only Native Americans could tell the _____ (15) of their people. This insistence that there is _____ (16) difference in experience and understanding between different _____ (17) of people served to legitimise and entrench _____. (18) Culture itself, which enlightened thinkers perceived as a _____ (19) and constantly interacting and changing phenomenon, was now rendered _____ (20) and fossilised. It was in the context of the fossilisation of cultural identity that the issue of cultural appropriation became politicised.

Sub questions

Question Number : 61 Question Id : 7368155719 Question Type : MCQ Option Shuffling : Yes Display Question Number : Yes
Single Line Question Option : No Option Orientation : Vertical

Correct : 1 Wrong : 0.25

Fill in the blanks by choosing the correct option given against the corresponding Question number:

Options :

1. ✖ effect

2. ✖ rule

3. ✔ result

4. ✖ law

Question Number : 62 Question Id : 7368155720 Question Type : MCQ Option Shuffling : Yes Display Question Number : Yes
Single Line Question Option : No Option Orientation : Vertical

Correct : 1 Wrong : 0.25

Fill in the blanks by choosing the correct option given against the corresponding

Question number:

Options :

1. ✖ girls
2. ✔ women
3. ✖ ladies
4. ✖ maids

Question Number : 63 Question Id : 7368155721 Question Type : MCQ Option Shuffling : Yes Display Question Number : Yes
Single Line Question Option : No Option Orientation : Vertical

Correct : 1 Wrong : 0.25

Fill in the blanks by choosing the correct option given against the corresponding

Question number:

Options :

1. ✖ men
2. ✖ women
3. ✖ priests
4. ✔ people

Question Number : 64 Question Id : 7368155722 Question Type : MCQ Option Shuffling : Yes Display Question Number : Yes
Single Line Question Option : No Option Orientation : Vertical

Correct : 1 Wrong : 0.25

Fill in the blanks by choosing the correct option given against the corresponding

Question number:

Options :

1. ✔ history
2. ✖ geography
3. ✖ literature
4. ✖ economics

Question Number : 65 Question Id : 7368155723 Question Type : MCQ Option Shuffling : Yes Display Question Number : Yes
Single Line Question Option : No Option Orientation : Vertical

Correct : 1 Wrong : 0.25

Fill in the blanks by choosing the correct option given against the corresponding

Question number:

Options :

1. ✖ people
2. ✖ life
3. ✔ stories
4. ✖ films

Question Number : 66 Question Id : 7368155724 Question Type : MCQ Option Shuffling : Yes Display Question Number : Yes
Single Line Question Option : No Option Orientation : Vertical

Correct : 1 Wrong : 0.25

Fill in the blanks by choosing the correct option given against the corresponding

Question number:

Options :

1. ✖ unfathomable
2. ✖ uncountable
3. ✖ unmanageable
4. ✔ unbridgeable

Question Number : 67 Question Id : 7368155725 Question Type : MCQ Option Shuffling : Yes Display Question Number : Yes
Single Line Question Option : No Option Orientation : Vertical

Correct : 1 Wrong : 0.25

Fill in the blanks by choosing the correct option given against the corresponding

Question number:

Options :

1. ✔ groups
2. ✖ herds
3. ✖ castes
4. ✖ tribes

Question Number : 68 Question Id : 7368155726 Question Type : MCQ Option Shuffling : Yes Display Question Number : Yes
Single Line Question Option : No Option Orientation : Vertical

Correct : 1 Wrong : 0.25

Fill in the blanks by choosing the correct option given against the corresponding

Question number:

Options :

1. ✖ partitions
2. ✔ divisions
3. ✖ separations
4. ✖ multiplications

Question Number : 69 Question Id : 7368155727 Question Type : MCQ Option Shuffling : Yes Display Question Number : Yes
Single Line Question Option : No Option Orientation : Vertical

Correct : 1 Wrong : 0.25

Fill in the blanks by choosing the correct option given against the corresponding

Question number:

Options :

1. ✔ fluid
2. ✖ fixed
3. ✖ flowing
4. ✖ solid

Question Number : 70 Question Id : 7368155728 Question Type : MCQ Option Shuffling : Yes Display Question Number : Yes
Single Line Question Option : No Option Orientation : Vertical

Correct : 1 Wrong : 0.25

Fill in the blanks by choosing the correct option given against the corresponding

Question number:

Options :

1. ✖ frigid
2. ✖ rigged

3. ✖ upright

4. ✔ rigid

Sub-Section Number: 3
Sub-Section Id: 736815170
Question Shuffling Allowed : Yes

Question Number : 71 Question Id : 7368155729 Question Type : MCQ Option Shuffling : Yes Display Question Number : Yes
Single Line Question Option : No Option Orientation : Vertical

Correct : 1 Wrong : 0.25

Given below is a set of five sentences, numbered 1 to 5, which are not in a meaningful order. Choose from the options given, the order which will be acceptable and meaningful:

1. In fact, the word lyric is also used in music and cinema to denote “lines of a song”.
2. The lyric was called so as this kind of poem, mostly on love and death, was to be set to music then by lyre.
3. A lyric is a fairly short poem which is the expression of strong feelings of thoughts or perceptions of a single speaker in a meditative manner.
4. Most lyrics are meditation on loneliness by the poet, but lyric can also be dramatic if it is addressed to a specific person.
5. Though the lyric is spoken by an “I”, it need not be the poet himself and the lyric must be understood in terms of an imaginary speaker or character.

Options :

1. ✔ 3,2,1,5,4

2. ✖ 5,4,3,2,1

3. ✖ 1,2,3,4,5

4. ✖ 3,2,1,4,5

Question Number : 71 Question Id : 7368155729 Question Type : MCQ Option Shuffling : Yes Display Question Number : Yes
Single Line Question Option : No Option Orientation : Vertical

Correct : 1 Wrong : 0.25

Given below is a set of five sentences, numbered 1 to 5, which are not in a meaningful order. Choose from the options given, the order which will be acceptable and meaningful:

1. In fact, the word lyric is also used in music and cinema to denote "lines of a song".
2. The lyric was called so as this kind of poem, mostly on love and death, was to be set to music then by lyre.
3. A lyric is a fairly short poem which is the expression of strong feelings of thoughts or perceptions of a single speaker in a meditative manner.
4. Most lyrics are meditation on loneliness by the poet, but lyric can also be dramatic if it is addressed to a specific person.
5. Though the lyric is spoken by an "I", it need not be the poet himself and the lyric must be understood in terms of an imaginary speaker or character.

Options :

1. ✓ 3,2,1,5,4
2. ✗ 5,4,3,2,1
3. ✗ 1,2,3,4,5
4. ✗ 3,2,1,4,5

Question Number : 72 Question Id : 7368155730 Question Type : MCQ Option Shuffling : Yes Display Question Number : Yes
Single Line Question Option : No Option Orientation : Vertical

Correct : 1 Wrong : 0.25

Given below is a set of five sentences, numbered 1 to 5, which are not in a meaningful order. Choose from the options given, the order which will be acceptable and meaningful:

1. One day she came into his father's office and put her hands on the door of a locked safe.
2. Those who have extraordinary abilities have always attracted people's attention, Petrova being one of them.
3. She has the unique ability to perceive things with different parts of her skin, and through solid walls.
4. Later, when given a series of tests by a special commission, she demonstrated her unique talent.
5. Suddenly she asked her father why he kept so many old newspapers locked away there.

Options :

1. ✗ 4,3,1,5,2
2. ✓ 2,1,5,4,3
3. ✗ 1,2,3,4,5
4. ✗ 2,4,5,1,3

Correct : 1 Wrong : 0.25

Given below is a set of five sentences, numbered 1 to 5, which are not in a meaningful order. Choose from the options given, the order which will be acceptable and meaningful:

1. One day she came into his father's office and put her hands on the door of a locked safe.
2. Those who have extraordinary abilities have always attracted people's attention, Petrova being one of them.
3. She has the unique ability to perceive things with different parts of her skin, and through solid walls.
4. Later, when given a series of tests by a special commission, she demonstrated her unique talent.
5. Suddenly she asked her father why he kept so many old newspapers locked away there.

Options :

1. ✖ 4,3,1,5,2
2. ✔ 2,1,5,4,3
3. ✖ 1,2,3,4,5
4. ✖ 2,4,5,1,3

Correct : 1 Wrong : 0.25

Given below is a set of five sentences, numbered 1 to 5, which are not in a meaningful order. Choose from the options given, the order which will be acceptable and meaningful:

1. Infrared images detect heat patterns in the clouds and on the ground.
2. A satellite image is an image of the whole or part of the earth taken using artificial satellites, which are used in cartography, military intelligence and meteorology.
3. Visible light satellite images are photos of what the sky and the ground look like from space at any given time.
4. Satellite images can either be visible light images, water vapor images or infrared images.
5. Water vapor images show moisture in the atmosphere, often in the form of clouds.

Options :

1. ✖ 2,1,5,4,3
2. ✔ 2,4,3,5,1
3. ✖ 2,4,5,3,1
4. ✖ 2,4,1,3,5

Correct : 1 Wrong : 0.25

Given below is a set of five sentences, numbered 1 to 5, which are not in a meaningful order. Choose from the options given, the order which will be acceptable and meaningful:

1. Infrared images detect heat patterns in the clouds and on the ground.
2. A satellite image is an image of the whole or part of the earth taken using artificial satellites, which are used in cartography, military intelligence and meteorology.
3. Visible light satellite images are photos of what the sky and the ground look like from space at any given time.
4. Satellite images can either be visible light images, water vapor images or infrared images.
5. Water vapor images show moisture in the atmosphere, often in the form of clouds.

Options :

1. ✖ 2,1,5,4,3
2. ✔ 2,4,3,5,1
3. ✖ 2,,4,5,3,1
4. ✖ 2,4,1,3,5

Correct : 1 Wrong : 0.25

Given below is a sentence/famous saying, the words/segments of which have been jumbled up and numbered. Choose the right order of the words/segments from the given options:

dies for /because /a thing / a man/it /is not necessarily true

1 2 3 4 5 6

Options :

1. ✖ 3,6,2,4,5,1
2. ✔ 3,6,2,4,1,5
3. ✖ 3,2,6,4,1,5
4. ✖ 3,4,5,6,1,2

Correct : 1 Wrong : 0.25

Given below is a sentence/famous saying, the words/segments of which have been jumbled up and numbered. Choose the right order of the words/segments from the given options:

dies for /because /a thing / a man / it /is not necessarily true

1 2 3 4 5 6

Options :

- 1. ✖ 3,6,2,4,5,1
- 2. ✔ 3,6,2,4,1,5
- 3. ✖ 3,2,6,4,1,5
- 4. ✖ 3,4,5,6,1,2

Question Number : 75 Question Id : 7368155733 Question Type : MCQ Option Shuffling : Yes Display Question Number : Yes
Single Line Question Option : No Option Orientation : Vertical

Correct : 1 Wrong : 0.25

Given below is a sentence/famous saying, the words/segments of which have been jumbled up and numbered. Choose the right order of the words/segments from the given options:

you don't have to/ tell the truth, / anything/ remember/ if you

1 2 3 4 5

Options :

- 1. ✖ 5,3,4,2,1
- 2. ✖ 5,1,2,4,3
- 3. ✔ 5,2,1,4,3
- 4. ✖ 1,3,5,4,2

Question Number : 75 Question Id : 7368155733 Question Type : MCQ Option Shuffling : Yes Display Question Number : Yes
Single Line Question Option : No Option Orientation : Vertical

Correct : 1 Wrong : 0.25

Given below is a sentence/famous saying, the words/segments of which have been jumbled up and numbered. Choose the right order of the words/segments from the given options:

you don't have to/ tell the truth, / anything/ remember/ if you

1 2 3 4 5

Options :

- 1. ✖ 5,3,4,2,1
- 2. ✖ 5,1,2,4,3
- 3. ✔ 5,2,1,4,3
- 4. ✖ 1,3,5,4,2

Question Number : 76 Question Id : 7368155734 Question Type : MCQ Option Shuffling : Yes Display Question Number : Yes
Single Line Question Option : No Option Orientation : Vertical

Correct : 1 Wrong : 0.25

Given below is an ungrammatical, defective, sentence and there are 4 options given. One of them is the correct and improved form of the sentence. Choose the one which improves the given sentence:

Men must be stronger, but its woman who endure.

Options :

1. ✓ Men may be stronger, but it is women who endure.
2. ✗ Men may be stronger, but it is woman who endure.
3. ✗ Men must be stronger, but it is women who endure.
4. ✗ Men may be stronger, but its women who endure.

Question Number : 76 Question Id : 7368155734 Question Type : MCQ Option Shuffling : Yes Display Question Number : Yes
Single Line Question Option : No Option Orientation : Vertical

Correct : 1 Wrong : 0.25

Given below is an ungrammatical, defective, sentence and there are 4 options given. One of them is the correct and improved form of the sentence. Choose the one which improves the given sentence:

Men must be stronger, but its woman who endure.

Options :

1. ✓ Men may be stronger, but it is women who endure.
2. ✗ Men may be stronger, but it is woman who endure.
3. ✗ Men must be stronger, but it is women who endure.
4. ✗ Men may be stronger, but its women who endure.

Question Number : 77 Question Id : 7368155735 Question Type : MCQ Option Shuffling : Yes Display Question Number : Yes
Single Line Question Option : No Option Orientation : Vertical

Correct : 1 Wrong : 0.25

Given below is an ungrammatical, defective, sentence and there are 4 options given. One of them is the correct and improved form of the sentence. Choose the one which improves the given sentence:

Infliction of cruelty in a good conscience is delight for moralists.

Options :

1. ✗ The infliction of cruelty in a good conscience is a delight to moralists.
2. ✓ The infliction of cruelty with a good conscience is a delight to moralists.
3. ✗ The infliction of cruelty in a good conscience is delight to moralists.
4. ✗ The infliction of cruelty with a good conscience is a delight for moralists.

Question Number : 77 Question Id : 7368155735 Question Type : MCQ Option Shuffling : Yes Display Question Number : Yes
Single Line Question Option : No Option Orientation : Vertical

Correct : 1 Wrong : 0.25

Given below is an ungrammatical, defective, sentence and there are 4 options given. One of them is the correct and improved form of the sentence. Choose the one which improves the given sentence:

Infliction of cruelty in a good conscience is delight for moralists.

Options :

1. ✖ The infliction of cruelty in a good conscience is a delight to moralists.
2. ✔ The infliction of cruelty with a good conscience is a delight to moralists.
3. ✖ The infliction of cruelty in a good conscience is delight to moralists.
4. ✖ The infliction of cruelty with a good conscience is a delight for moralists.

Question Number : 78 Question Id : 7368155736 Question Type : MCQ Option Shuffling : Yes Display Question Number : Yes
Single Line Question Option : No Option Orientation : Vertical

Correct : 1 Wrong : 0.25

Given below is an ungrammatical, defective, sentence and there are 4 options given. One of them is the correct and improved form of the sentence. Choose the one which improves the given sentence:

You can't wait with inspiration but have to go before it with a club.

Options :

1. ✖ You can't wait for inspiration but have to go before it with a club.
2. ✔ You can't wait for inspiration but have to go after it with a club.
3. ✖ You can't wait with inspiration but have to go after it with a club.
4. ✖ You can't for inspiration but have to go above it with a club.

Question Number : 78 Question Id : 7368155736 Question Type : MCQ Option Shuffling : Yes Display Question Number : Yes
Single Line Question Option : No Option Orientation : Vertical

Correct : 1 Wrong : 0.25

Given below is an ungrammatical, defective, sentence and there are 4 options given. One of them is the correct and improved form of the sentence. Choose the one which improves the given sentence:

You can't wait with inspiration but have to go before it with a club.

Options :

1. ✖ You can't wait for inspiration but have to go before it with a club.
2. ✔ You can't wait for inspiration but have to go after it with a club.
3. ✖ You can't wait with inspiration but have to go after it with a club.
4. ✖ You can't for inspiration but have to go above it with a club.

Question Number : 79 Question Id : 7368155737 Question Type : MCQ Option Shuffling : Yes Display Question Number : Yes
Single Line Question Option : No Option Orientation : Vertical

Correct : 1 Wrong : 0.25

Given below is an ungrammatical, defective, sentence and there are 4 options given. One of them is the correct and improved form of the sentence. Choose the one which improves the given sentence:

Spoon feeding on the long run teaches we nothing but shape of the spoon.

Options :

1. ✖ Spoon feeding on the long run teaches us nothing but shape of the spoon.
2. ✖ Spoon feeding in the long run teaches us nothing but shape of the spoon.
3. ✔ Spoon feeding in the long run teaches us nothing but the shape of the spoon.
4. ✖ Spoon feeding on the long run teaches us nothing but the shape of the spoon.

Question Number : 79 Question Id : 7368155737 Question Type : MCQ Option Shuffling : Yes Display Question Number : Yes
Single Line Question Option : No Option Orientation : Vertical

Correct : 1 Wrong : 0.25

Given below is an ungrammatical, defective, sentence and there are 4 options given. One of them is the correct and improved form of the sentence. Choose the one which improves the given sentence:

Spoon feeding on the long run teaches we nothing but shape of the spoon.

Options :

1. ✖ Spoon feeding on the long run teaches us nothing but shape of the spoon.
2. ✖ Spoon feeding in the long run teaches us nothing but shape of the spoon.
3. ✔ Spoon feeding in the long run teaches us nothing but the shape of the spoon.
4. ✖ Spoon feeding on the long run teaches us nothing but the shape of the spoon.

Question Number : 80 Question Id : 7368155738 Question Type : MCQ Option Shuffling : Yes Display Question Number : Yes
Single Line Question Option : No Option Orientation : Vertical

Correct : 1 Wrong : 0.25

Given below is an ungrammatical, defective, sentence and there are 4 options given. One of them is the correct and improved form of the sentence. Choose the one which improves the given sentence:

You must cut all flowers but you cannot kept Spring from coming.

Options :

1. ✖ You may cut all the flowers but you cannot keep Spring from coming.
2. ✖ You have to cut all flowers but you cannot keep Spring from coming.
3. ✔ You can cut all the flowers but you cannot keep Spring from coming.
4. ✖ You can cut all flowers but you cannot kept Spring from coming.

Question Number : 80 Question Id : 7368155738 Question Type : MCQ Option Shuffling : Yes Display Question Number : Yes
Single Line Question Option : No Option Orientation : Vertical

Correct : 1 Wrong : 0.25

Given below is an ungrammatical, defective, sentence and there are 4 options given. One of them is the correct and improved form of the sentence. Choose the one which improves the given sentence:

You must cut all flowers but you cannot kept Spring from coming.

Options :

1. ✖ You may cut all the flowers but you cannot keep Spring from coming.
2. ✖ You have to cut all flowers but you cannot keep Spring from coming.
3. ✔ You can cut all the flowers but you cannot keep Spring from coming.
4. ✖ You can cut all flowers but you cannot kept Spring from coming.

Question Number : 81 Question Id : 7368155739 Question Type : MCQ Option Shuffling : Yes Display Question Number : Yes
Single Line Question Option : No Option Orientation : Vertical

Correct : 1 Wrong : 0.25

Given below is a sentence which is to be transformed and rewritten as indicated in brackets and there are four options given. Choose the one which 'correctly' transforms the given sentence :

Many words having been spoken, peace was still unaccomplished.
{into active voice}

Options :

1. ✖ [They} spoke many words but did not accomplish peace.
2. ✔ [They] have spoken many words but still did not accomplish peace.
3. ✖ [They] had spoken many words but still did not accomplish peace.
4. ✖ [They] speak many words, but fail still to accomplish peace.

Question Number : 81 Question Id : 7368155739 Question Type : MCQ Option Shuffling : Yes Display Question Number : Yes
Single Line Question Option : No Option Orientation : Vertical

Correct : 1 Wrong : 0.25

Given below is a sentence which is to be transformed and rewritten as indicated in brackets and there are four options given. Choose the one which 'correctly' transforms the given sentence :

Many words having been spoken, peace was still unaccomplished.
{into active voice}

Options :

1. ✖ [They} spoke many words but did not accomplish peace.
2. ✔ [They] have spoken many words but still did not accomplish peace.
3. ✖ [They] had spoken many words but still did not accomplish peace.
4. ✖ [They] speak many words, but fail still to accomplish peace.

Question Number : 82 Question Id : 7368155740 Question Type : MCQ Option Shuffling : Yes Display Question Number : Yes
Single Line Question Option : No Option Orientation : Vertical

Correct : 1 Wrong : 0.25

Given below is a sentence which is to be transformed and rewritten as indicated in brackets and there are four options given. Choose the one which 'correctly' transforms the given sentence :

"Hi there, wait! I've been chasing you," said a stranger to me. {Report this}

Options :

1. ✖ Beckoning me, asking me to wait a stranger declared that he had been chasing me,
2. ✖ A stranger wished me, held me back and announced that he was chasing me.
3. ✖ A stranger spoke to me and halting me said that he has been chasing me.
4. ✔ Beckoning me uncivilly, and holding me back, a stranger audaciously Declared that he had been chasing me

Question Number : 82 Question Id : 7368155740 Question Type : MCQ Option Shuffling : Yes Display Question Number : Yes
Single Line Question Option : No Option Orientation : Vertical

Correct : 1 Wrong : 0.25

Given below is a sentence which is to be transformed and rewritten as indicated in brackets and there are four options given. Choose the one which 'correctly' transforms the given sentence :

"Hi there, wait! I've been chasing you," said a stranger to me. {Report this}

Options :

1. ✖ Beckoning me, asking me to wait a stranger declared that he had been chasing me,
2. ✖ A stranger wished me, held me back and announced that he was chasing me.
3. ✖ A stranger spoke to me and halting me said that he has been chasing me.
4. ✔ Beckoning me uncivilly, and holding me back, a stranger audaciously Declared that he had been chasing me

Question Number : 83 Question Id : 7368155741 Question Type : MCQ Option Shuffling : Yes Display Question Number : Yes
Single Line Question Option : No Option Orientation : Vertical

Correct : 1 Wrong : 0.25

Given below is a sentence which is to be transformed and rewritten as indicated in brackets and there are four options given. Choose the one which 'correctly' transforms the given sentence :

Pranab turned down the offer {of Chief of Government}. He wanted to help the tribe of war widows. {into a rejected conditional}

Options :

1. ✔ Had Pranab not turned down the offer, he would have been able to help the war widows.
2. ✖ Had Pranab not turned down the offer, he would have helped the war widows.
3. ✖ Has Pranab not turned down the offer, he would have helped the war widows.
4. ✖ Has Pranab not turned down the offer, he would have been able to help the war widows

Question Number : 83 Question Id : 7368155741 Question Type : MCQ Option Shuffling : Yes Display Question Number : Yes
Single Line Question Option : No Option Orientation : Vertical

Correct : 1 Wrong : 0.25

Given below is a sentence which is to be transformed and rewritten as indicated in brackets and there are four options given. Choose the one which 'correctly' transforms the given sentence :

Pranab turned down the offer {of Chief of Government}. He wanted to help the tribe of war widows. {into a rejected conditional}

Options :

- Had Pranab not turned down the offer, he would have been able to help the war
1. ✓ widows.
 2. ✗ Had Pranab not turned down the offer, he would have helped the war widows.
 3. ✗ Has Pranab not turned down the offer, he would have helped the war widows.
 - Has Pranab not turned down the offer, he would have been able to help the war
 4. ✗ widows

Question Number : 84 Question Id : 7368155742 Question Type : MCQ Option Shuffling : Yes Display Question Number : Yes
Single Line Question Option : No Option Orientation : Vertical

Correct : 1 Wrong : 0.25

Read the sentence given below. Pay attention to the words/phrases/segments in *italics*.
Choose the appropriate ONE WORD substitutes for the phrases and clauses *italicized*:

It's time to *do away with* all of these old tax records and *clean up* your bedroom.

Options :

1. ✗ It's time to discard all of these old tax records and sweep your bedroom.
2. ✓ It's time to discard all of these old tax records and tidy up your bedroom.
3. ✗ It's time to reject all of these old tax records and straighten your bedroom.
4. ✗ It's time to dismiss all of these old tax records and empty your bedroom

Question Number : 84 Question Id : 7368155742 Question Type : MCQ Option Shuffling : Yes Display Question Number : Yes
Single Line Question Option : No Option Orientation : Vertical

Correct : 1 Wrong : 0.25

Read the sentence given below. Pay attention to the words/phrases/segments in *italics*.
Choose the appropriate ONE WORD substitutes for the phrases and clauses *italicized*:

It's time to *do away with* all of these old tax records and *clean up* your bedroom.

Options :

1. ✗ It's time to discard all of these old tax records and sweep your bedroom.
2. ✓ It's time to discard all of these old tax records and tidy up your bedroom.
3. ✗ It's time to reject all of these old tax records and straighten your bedroom.
4. ✗ It's time to dismiss all of these old tax records and empty your bedroom

Correct : 1 Wrong : 0.25

Read the sentence given below. Pay attention to the words/phrases/segments in *italics*.
Choose the appropriate ONE WORD substitutes for the phrases and clauses *italicized*:

My new dress *fell apart* in the washing machine and I *called off* the rest of my orders placed online

Options :

1. ☒ My new dress disintegrated in the washing machine and I cancelled the rest of my orders placed online.
2. ☐ My new dress collapsed the washing machine and I cancelled the rest of my orders placed online.
3. ☐ My new dress vanished in the washing machine and I cancelled the rest of my orders placed online.
4. ☐ My new dress got stuck in the washing machine and I cancelled the rest of my orders placed online.

Correct : 1 Wrong : 0.25

Read the sentence given below. Pay attention to the words/phrases/segments in *italics*.
Choose the appropriate ONE WORD substitutes for the phrases and clauses *italicized*:

My new dress *fell apart* in the washing machine and I *called off* the rest of my orders placed online

Options :

1. ☒ My new dress disintegrated in the washing machine and I cancelled the rest of my orders placed online.
2. ☐ My new dress collapsed the washing machine and I cancelled the rest of my orders placed online.
3. ☐ My new dress vanished in the washing machine and I cancelled the rest of my orders placed online.
4. ☐ My new dress got stuck in the washing machine and I cancelled the rest of my orders placed online.

Correct : 1 Wrong : 0.25

Given below is a sentence which divided into four parts labelled a, b, c, and d. One of these parts contains an error. Choose the part that has the error:

If lending money / up interest is a sin, / isn't borrowing too/ one?

A

B

C

D

Options :

1. ✖ A
2. ✔ B
3. ✖ C
4. ✖ D

Question Number : 86 Question Id : 7368155744 Question Type : MCQ Option Shuffling : Yes Display Question Number : Yes
Single Line Question Option : No Option Orientation : Vertical

Correct : 1 Wrong : 0.25

Given below is a sentence which divided into four parts labelled a, b, c, and d. One of these parts contains an error. Choose the part that has the error:

If lending money / up interest is a sin, / isn't borrowing too/ one?

A B C D

Options :

1. ✖ A
2. ✔ B
3. ✖ C
4. ✖ D

Question Number : 87 Question Id : 7368155745 Question Type : MCQ Option Shuffling : Yes Display Question Number : Yes
Single Line Question Option : No Option Orientation : Vertical

Correct : 1 Wrong : 0.25

Given below is a sentence which divided into four parts labelled a, b, c, and d. One of these parts contains an error. Choose the part that has the error:

One can / question a judgement, / but nor a judge, / at least in public.

A B C D

Options :

1. ✖ A
2. ✖ B
3. ✔ C
4. ✖ D

Question Number : 87 Question Id : 7368155745 Question Type : MCQ Option Shuffling : Yes Display Question Number : Yes
Single Line Question Option : No Option Orientation : Vertical

Correct : 1 Wrong : 0.25

Given below is a sentence which divided into four parts labelled a, b, c, and d. One of these parts contains an error. Choose the part that has the error:

One can / question a judgement, / but nor a judge, / at least in public.

A B C D

Options :

1. ✖ A
2. ✖ B

3. ✓ C

4. ✗ D

Question Number : 88 Question Id : 7368155746 Question Type : MCQ Option Shuffling : Yes Display Question Number : Yes
Single Line Question Option : No Option Orientation : Vertical

Correct : 1 Wrong : 0.25

Given below is a sentence which divided into four parts labelled a, b, c, and d. One of these parts contains an error. Choose the part that has the error:

“Many / can be said / on both sides,”/is a famous quotation from literature.

A

B

C

D

Options :

1. ✓ A

2. ✗ B

3. ✗ C

4. ✗ D

Question Number : 88 Question Id : 7368155746 Question Type : MCQ Option Shuffling : Yes Display Question Number : Yes
Single Line Question Option : No Option Orientation : Vertical

Correct : 1 Wrong : 0.25

Given below is a sentence which divided into four parts labelled a, b, c, and d. One of these parts contains an error. Choose the part that has the error:

“Many / can be said / on both sides,”/is a famous quotation from literature.

A

B

C

D

Options :

1. ✓ A

2. ✗ B

3. ✗ C

4. ✗ D

Question Number : 89 Question Id : 7368155747 Question Type : MCQ Option Shuffling : Yes Display Question Number : Yes
Single Line Question Option : No Option Orientation : Vertical

Correct : 1 Wrong : 0.25

Fill in the blanks with the correct form of idioms /proverbs by choosing the correct option given.

It is _____ to help than offer pity; after all, actions speak _____ than words.

Options :

1. ✗ good; good

2. ✗ worse; worse

3. ✗ better; good

4. ✓ better; better

Question Number : 89 Question Id : 7368155747 Question Type : MCQ Option Shuffling : Yes Display Question Number : Yes
Single Line Question Option : No Option Orientation : Vertical

Correct : 1 Wrong : 0.25

Fill in the blanks with the correct form of idioms /proverbs by choosing the correct option given.

It is _____ to help than offer pity; after all, actions speak _____ than words.

Options :

1. ✗ good; good
2. ✗ worse; worse
3. ✗ better; good
4. ✓ better; better

Question Number : 90 Question Id : 7368155748 Question Type : MCQ Option Shuffling : Yes Display Question Number : Yes
Single Line Question Option : No Option Orientation : Vertical

Correct : 1 Wrong : 0.25

Fill in the blanks with the correct form of idioms /proverbs by choosing the correct option given.

Don't _____ a _____ by its cover.

Options :

1. ✗ buy; policy
2. ✗ choose; dress
3. ✗ gauge; magazine
4. ✓ judge; book

Question Number : 90 Question Id : 7368155748 Question Type : MCQ Option Shuffling : Yes Display Question Number : Yes
Single Line Question Option : No Option Orientation : Vertical

Correct : 1 Wrong : 0.25

Fill in the blanks with the correct form of idioms /proverbs by choosing the correct option given.

Don't _____ a _____ by its cover.

Options :

1. ✗ buy; policy
2. ✗ choose; dress
3. ✗ gauge; magazine
4. ✓ judge; book

Question Number : 91 Question Id : 7368155749 Question Type : MCQ Option Shuffling : Yes Display Question Number : Yes
Single Line Question Option : No Option Orientation : Vertical

Correct : 1 Wrong : 0.25

Complete the sentence below by choosing one related pair of words that will fill in the blanks:

A friend's _____ is better than a fool's _____.

Options :

1. ✖ tears; happiness
2. ✔ frown; smile
3. ✖ insult; tribute
4. ✖ no; yes

Question Number : 91 Question Id : 7368155749 Question Type : MCQ Option Shuffling : Yes Display Question Number : Yes
Single Line Question Option : No Option Orientation : Vertical

Correct : 1 Wrong : 0.25

Complete the sentence below by choosing one related pair of words that will fill in the blanks:

A friend's _____ is better than a fool's _____.

Options :

1. ✖ tears; happiness
2. ✔ frown; smile
3. ✖ insult; tribute
4. ✖ no; yes

Question Number : 92 Question Id : 7368155750 Question Type : MCQ Option Shuffling : Yes Display Question Number : Yes
Single Line Question Option : No Option Orientation : Vertical

Correct : 1 Wrong : 0.25

Complete the sentence below by choosing one related pair of words that will fill in the blanks:

An injury is _____ better than an injury _____

Options :

1. ✔ forgiven; revenged
2. ✖ received; given
3. ✖ given; tolerated
4. ✖ sold; bought

Question Number : 92 Question Id : 7368155750 Question Type : MCQ Option Shuffling : Yes Display Question Number : Yes
Single Line Question Option : No Option Orientation : Vertical

Correct : 1 Wrong : 0.25

Complete the sentence below by choosing one related pair of words that will fill in the blanks:

An injury is _____ better than an injury _____

Options :

1. ☒ forgiven; revenged
2. ☐ received; given
3. ☐ given; tolerated
4. ☐ sold; bought

Question Number : 93 Question Id : 7368155751 Question Type : MCQ Option Shuffling : Yes Display Question Number : Yes
Single Line Question Option : No Option Orientation : Vertical

Correct : 1 Wrong : 0.25

A key word is given below. Choose the word closest to it in its meaning {synonym}. Pay attention to how the word would be used to, if required:

Aptitude

Options :

1. ☐ Expertise
2. ☐ Power
3. ☒ Inclination
4. ☐ Attraction

Question Number : 93 Question Id : 7368155751 Question Type : MCQ Option Shuffling : Yes Display Question Number : Yes
Single Line Question Option : No Option Orientation : Vertical

Correct : 1 Wrong : 0.25

A key word is given below. Choose the word closest to it in its meaning {synonym}. Pay attention to how the word would be used to, if required:

Aptitude

Options :

1. ☐ Expertise
2. ☐ Power
3. ☒ Inclination
4. ☐ Attraction

Question Number : 94 Question Id : 7368155752 Question Type : MCQ Option Shuffling : Yes Display Question Number : Yes
Single Line Question Option : No Option Orientation : Vertical

Correct : 1 Wrong : 0.25

A key word is given below. Choose the word closest to it in its meaning {synonym}. Pay attention to how the word would be used to, if required:

Legitimate (Adjective)

Options :

1. ☐ Correct
2. ☒ Lawful
3. ☐ Fair

4. ✖ Real

Question Number : 94 Question Id : 7368155752 Question Type : MCQ Option Shuffling : Yes Display Question Number : Yes
Single Line Question Option : No Option Orientation : Vertical

Correct : 1 Wrong : 0.25

A key word is given below. Choose the word closest to it in its meaning {synonym}.
Pay attention to how the word would be used to, if required:

Legitimate (Adjective)

Options :

- 1. ✖ Correct
- 2. ✔ Lawful
- 3. ✖ Fair
- 4. ✖ Real

Question Number : 95 Question Id : 7368155753 Question Type : MCQ Option Shuffling : Yes Display Question Number : Yes
Single Line Question Option : No Option Orientation : Vertical

Correct : 1 Wrong : 0.25

A key word is given below. Choose the word closest to it in its meaning {synonym}. Pay
attention to how the word would be used to, if required:

Praise (Verb)

Options :

- 1. ✖ Flattery
- 2. ✔ Compliment
- 3. ✖ Clapping
- 4. ✖ Admiration

Question Number : 95 Question Id : 7368155753 Question Type : MCQ Option Shuffling : Yes Display Question Number : Yes
Single Line Question Option : No Option Orientation : Vertical

Correct : 1 Wrong : 0.25

A key word is given below. Choose the word closest to it in its meaning {synonym}.
Pay attention to how the word would be used to, if required:

Praise (Verb)

Options :

- 1. ✖ Flattery
- 2. ✔ Compliment
- 3. ✖ Clapping
- 4. ✖ Admiration

Question Number : 96 Question Id : 7368155754 Question Type : MCQ Option Shuffling : Yes Display Question Number : Yes
Single Line Question Option : No Option Orientation : Vertical

Correct : 1 Wrong : 0.25

A key word is given below. Choose the word which indicates the contradictory or opposite meaning {antonym} of the key word:

Dull

Options :

1. ✓ Lively
2. ✗ Merry
3. ✗ Pleased
4. ✗ Optimistic

Question Number : 96 Question Id : 7368155754 Question Type : MCQ Option Shuffling : Yes Display Question Number : Yes
Single Line Question Option : No Option Orientation : Vertical

Correct : 1 Wrong : 0.25

A key word is given below. Choose the word which indicates the contradictory or opposite meaning {antonym} of the key word:

Dull

Options :

1. ✓ Lively
2. ✗ Merry
3. ✗ Pleased
4. ✗ Optimistic

Question Number : 97 Question Id : 7368155755 Question Type : MCQ Option Shuffling : Yes Display Question Number : Yes
Single Line Question Option : No Option Orientation : Vertical

Correct : 1 Wrong : 0.25

A key word is given below. Choose the word which indicates the contradictory or opposite meaning {antonym} of the key word:

Strange

Options :

1. ✗ Usual
2. ✗ Common
3. ✓ Normal
4. ✗ Regular

Question Number : 97 Question Id : 7368155755 Question Type : MCQ Option Shuffling : Yes Display Question Number : Yes
Single Line Question Option : No Option Orientation : Vertical

Correct : 1 Wrong : 0.25

A key word is given below. Choose the word which indicates the contradictory or opposite meaning {antonym} of the key word:

Strange

Options :

1. ✖ Usual
2. ✖ Common
3. ✔ Normal
4. ✖ Regular

Question Number : 98 Question Id : 7368155756 Question Type : MCQ Option Shuffling : Yes Display Question Number : Yes
Single Line Question Option : No Option Orientation : Vertical

Correct : 1 Wrong : 0.25

Given below is a set of four words. One of the four words is spelled wrongly. Choose the word that has been spelled wrongly.

Options :

1. ✔ Parlimentary
2. ✖ Pecuniary
3. ✖ Planetary
4. ✖ Plenary

Question Number : 98 Question Id : 7368155756 Question Type : MCQ Option Shuffling : Yes Display Question Number : Yes
Single Line Question Option : No Option Orientation : Vertical

Correct : 1 Wrong : 0.25

Given below is a set of four words. One of the four words is spelled wrongly. Choose the word that has been spelled wrongly.

Options :

1. ✔ Parlimentary
2. ✖ Pecuniary
3. ✖ Planetary
4. ✖ Plenary

Question Number : 99 Question Id : 7368155757 Question Type : MCQ Option Shuffling : Yes Display Question Number : Yes
Single Line Question Option : No Option Orientation : Vertical

Correct : 1 Wrong : 0.25

Given below is a set of four words. One of the four words is spelled wrongly. Choose the word that has been spelled wrongly.

Options :

1. ✖ Nonviolence
2. ✖ Opulence
3. ✖ Pestilence
4. ✔ Prevailence

Question Number : 99 Question Id : 7368155757 Question Type : MCQ Option Shuffling : Yes Display Question Number : Yes
Single Line Question Option : No Option Orientation : Vertical

Correct : 1 Wrong : 0.25

Given below is a set of four words. One of the four words is spelled wrongly. Choose the word that has been spelled wrongly.

Options :

1. ✖ Nonviolence
2. ✖ Opulence
3. ✖ Pestilence
4. ✔ Prevailence

Question Number : 100 Question Id : 7368155758 Question Type : MCQ Option Shuffling : Yes Display Question Number : Yes
Single Line Question Option : No Option Orientation : Vertical

Correct : 1 Wrong : 0.25

Given below is a set of four words. Choose the word with the correct spelling:

Options :

1. ✖ Irupt
2. ✔ Interrupt
3. ✖ Nanocorrupt
4. ✖ Uncorrupt

Question Number : 100 Question Id : 7368155758 Question Type : MCQ Option Shuffling : Yes Display Question Number : Yes
Single Line Question Option : No Option Orientation : Vertical

Correct : 1 Wrong : 0.25

Given below is a set of four words. Choose the word with the correct spelling:

Options :

1. ✖ Irupt
2. ✔ Interrupt
3. ✖ Nanocorrupt
4. ✖ Uncorrupt

General Intelligence

Section Id :	736815113
Section Number :	3
Section type :	Online
Mandatory or Optional:	Mandatory
Number of Questions:	50
Number of Questions to be attempted:	50
Section Marks:	50
Display Number Panel:	Yes
Group All Questions:	No

Sub-Section Number:	1
Sub-Section Id:	736815171
Question Shuffling Allowed :	Yes

Question Number : 101 Question Id : 7368155759 Question Type : MCQ Option Shuffling : Yes Display Question Number : Yes
Single Line Question Option : No Option Orientation : Vertical

Correct : 1 Wrong : 0.25

Arun teaches only Physics and Mathematics. He doesn't teach the students who want to study Chemistry with Physics and Mathematics. He might have taken such a decision because :

Options :

1. ✖ He is not interested in teaching.
2. ✔ He is not interested or good at teaching Chemistry.
3. ✖ He wants some other faculty to teach Chemistry to his students.
4. ✖ He doesn't want to be known as a Chemistry Teacher.

Question Number : 101 Question Id : 7368155759 Question Type : MCQ Option Shuffling : Yes Display Question Number : Yes
Single Line Question Option : No Option Orientation : Vertical

Correct : 1 Wrong : 0.25

अरुण केवल भौतिकी एवं गणित पढ़ाते हैं। वह उन छात्रों को नहीं पढ़ाते जो भौतिकी एवं गणित के साथ रसायन शास्त्र भी पढ़ना चाहते हैं। उन्होंने यह निर्णय इसलिए लिया होगा क्योंकि:

Options :

1. ✖ उनकी पढ़ाने में रुचि नहीं है।
2. ✔ वे रसायन शास्त्र पढ़ाने में अच्छे नहीं हैं या उनकी रुचि नहीं है।
3. ✖ वे चाहते हैं कि उनके छात्रों को कोई और शिक्षक रसायन शास्त्र पढ़ाये।
4. ✖ वे रसायन शास्त्र के शिक्षक के रूप में प्रसिद्ध होना नहीं चाहते।

Question Number : 102 Question Id : 7368155760 Question Type : MCQ Option Shuffling : Yes Display Question Number : Yes
Single Line Question Option : No Option Orientation : Vertical

Correct : 1 Wrong : 0.25

After completing his higher secondary with science background, he is going to take admission in an Engineering college. He might have taken such a decision because :

Options :

1. ✖ He is good at studies.
2. ✔ He wants to do engineering.
3. ✖ He has no other options left with him.
4. ✖ His parents want him to do engineering.

Question Number : 102 Question Id : 7368155760 Question Type : MCQ Option Shuffling : Yes Display Question Number : Yes
Single Line Question Option : No Option Orientation : Vertical

Correct : 1 Wrong : 0.25

विज्ञान से 12वीं की शिक्षा उत्तीर्ण करने के बाद वह अब एक अभियांत्रिकी महाविद्यालय में दाखिला लेने जा रहा है। उसने यह निर्णय इसलिए लिया होगा क्योंकि:

Options :

1. ✖ वह पढ़ाई में अच्छा है।

2. ✓ वह अभियांत्रिकी करना चाहता है।
3. ✗ उसके पास कोई अन्य विकल्प नहीं है।
4. ✗ उसके माता-पिता उससे अभियांत्रिकी करवाना चाहते हैं।

Question Number : 103 Question Id : 7368155761 Question Type : MCQ Option Shuffling : Yes Display Question Number : Yes
Single Line Question Option : No Option Orientation : Vertical

Correct : 1 Wrong : 0.25

You are a doctor. While treating a person, you came to know that he is a Criminal. What will you do?

Options :

1. ✗ Beat him and lock him in the room.
2. ✓ Treat him well and then inform the police.
3. ✗ Won't do anything and let him go.
4. ✗ Treat him well and let him go.

Question Number : 103 Question Id : 7368155761 Question Type : MCQ Option Shuffling : Yes Display Question Number : Yes
Single Line Question Option : No Option Orientation : Vertical

Correct : 1 Wrong : 0.25

आप एक चिकित्सक हैं। एक व्यक्ति का इलाज करते समय आपको पता चलता है की वह एक अपराधी है। इस स्थिति में आप क्या करेंगे?

Options :

1. ✗ उसे पीटेंगे और एक कमरे में बंद कर देंगे।
2. ✓ उसका अच्छे से इलाज करेंगे और फिर पुलिस को सूचना दे देंगे।
3. ✗ कुछ नहीं करेंगे और उसे जाने देंगे।
4. ✗ उसका अच्छे से इलाज करके उसे जाने देंगे।

Question Number : 104 Question Id : 7368155762 Question Type : MCQ Option Shuffling : Yes Display Question Number : Yes
Single Line Question Option : No Option Orientation : Vertical

Correct : 1 Wrong : 0.25

You have travelled in an auto yesterday night. You lost your bag accidentally in the auto. You went to the police and lodged a complaint. Next morning, the auto driver came asking for you and returned your bag. The bag is as it is. What will you do?

Options :

1. ✗ Beat him up with your friends.
2. ✗ Beat him up and call the police.
3. ✗ Thank him and send him back.
4. ✓ Thank him and call the police so that you can take the complaint back.

Question Number : 104 Question Id : 7368155762 Question Type : MCQ Option Shuffling : Yes Display Question Number : Yes
Single Line Question Option : No Option Orientation : Vertical

Correct : 1 Wrong : 0.25

कल रात आपने एक ऑटो में सवारी की। आप गलती से अपना थैला ऑटो में भूल गए। आपने पुलिस के पास जाकर रिपोर्ट दर्ज करा दी। अगली सुबह, ऑटो चालक आपको पूछते हुए आया, और उसने आपका थैला लौटा दिया। बैग की स्थिति जैसी थी वैसी ही है। अब आप क्या करेंगे?

Options :

1. ✖ दोस्तों के साथ मिलकर उसकी पिटाई कर देंगे।
2. ✖ उसे मारेंगे और पुलिस को बुला लेंगे।
3. ✖ उसका धन्यवाद करके उसे वापस भेज देंगे।
4. ✔ उसका धन्यवाद करेंगे और पुलिस को सूचना देकर, अपनी रिपोर्ट वापस लेंगे।

Question Number : 105 Question Id : 7368155763 Question Type : MCQ Option Shuffling : Yes Display Question Number : Yes
Single Line Question Option : No Option Orientation : Vertical

Correct : 1 Wrong : 0.25

You are not able to come to the office on time for past few days for some valid reasons.
Your manager fired you without even asking for a reason. What will you do?

Options :

1. ✖ Nothing.
2. ✖ Inform the police.
3. ✔ Talk to the manager for once to explain your part.
4. ✖ Never talk to the manager since he fired you.

Question Number : 105 Question Id : 7368155763 Question Type : MCQ Option Shuffling : Yes Display Question Number : Yes
Single Line Question Option : No Option Orientation : Vertical

Correct : 1 Wrong : 0.25

आप कुछ दिनों से किसी वजह से, अपने दफ्तर में समय से नहीं जा पा रहे हैं। आपके मैनेजर ने आपको बिना कारण पूछे नौकरी से निकाल दिया। आप इस स्थिति में क्या करेंगे?

Options :

1. ✖ कुछ भी नहीं।
2. ✖ पुलिस को सूचित करेंगे।
3. ✔ प्रबंधक से एक बार बात करके उन्हें इसका कारण बताएंगे।
4. ✖ क्योंकि प्रबंधक ने आपको नौकरी से निकाला है, इसलिए आप उससे कभी बात नहीं करेंगे।

Question Number : 106 Question Id : 7368155764 Question Type : MCQ Option Shuffling : Yes Display Question Number : Yes
Single Line Question Option : No Option Orientation : Vertical

Correct : 1 Wrong : 0.25

You are returning late in the night. You saw an old woman walking alone in a dark street and shivering. What will you do?

Options :

1. ✖ Ask her whether you can drop her to her destination.
2. ✔ Ask her where she wants to go and if not required, arrange some woolen clothes for her.

3. ✖ Ask her and go away.

4. ✖ Won't ask anything.

Question Number : 106 Question Id : 7368155764 Question Type : MCQ Option Shuffling : Yes Display Question Number : Yes
Single Line Question Option : No Option Orientation : Vertical

Correct : 1 Wrong : 0.25

आप देर रात को घर लौट रहे हैं। आपने एक वृद्ध महिला को सूनसान गली से गुजरते और कांपते हुए देखा। आप इस स्थिति में क्या करेंगे?

Options :

1. ✖ उनसे पूछेंगे की आप उन्हें घर छोड़ सकते हैं की नहीं।

उनसे पूछेंगे की वो कहाँ जाना चाहती हैं, और यदि नहीं, तो उनके लिए कुछ गरम कपड़ों का बंदोबस्त करेंगे।

3. ✖ उनसे पूछकर वहाँ से चले जाएँ।

4. ✖ कुछ नहीं पूछेंगे।

Question Number : 107 Question Id : 7368155765 Question Type : MCQ Option Shuffling : Yes Display Question Number : Yes
Single Line Question Option : No Option Orientation : Vertical

Correct : 1 Wrong : 0.25

The gutters of your locality are not clean. What will you do?

Options :

1. ✖ Clean it by yourself.

2. ✖ Tell the people of the locality to get it cleaned.

3. ✔ Take the people to the concerning authority and tell them about the issue.

4. ✖ Leave it as it is.

Question Number : 107 Question Id : 7368155765 Question Type : MCQ Option Shuffling : Yes Display Question Number : Yes
Single Line Question Option : No Option Orientation : Vertical

Correct : 1 Wrong : 0.25

आपके मोहल्ले की नालियाँ साफ नहीं हैं। आप क्या करेंगे?

Options :

1. ✖ स्वयं साफ करेंगे।

2. ✖ मोहल्ले के लोगों को उसे साफ करने के लिए कहेंगे।

3. ✔ सभी लोगों के साथ अधिकारी के पास जायेंगे और उन्हें इस अवस्था से अवगत कराएँगे।

4. ✖ जैसा है उसी स्थिति में रहने देंगे।

Question Number : 108 Question Id : 7368155766 Question Type : MCQ Option Shuffling : Yes Display Question Number : Yes
Single Line Question Option : No Option Orientation : Vertical

Correct : 1 Wrong : 0.25

Statement: A Novel book has been made compulsory in the schools for classes above 8th standard.

Argument 1: Students are forced to study novels.

Argument 2: Novels are not meant to be studied.

Options :

1. ✖ Argument 1 is strong.
2. ✖ Argument 2 is strong.
3. ✖ Both the Arguments are strong.
4. ✔ Neither of the Arguments are strong.

Question Number : 108 Question Id : 7368155766 Question Type : MCQ Option Shuffling : Yes Display Question Number : Yes
Single Line Question Option : No Option Orientation : Vertical

Correct : 1 Wrong : 0.25

कथन: आठवीं कक्षा के ऊपर की कक्षाओं में एक कथा पुस्तक को आवश्यक कर दिया गया है।

तर्क 1: विद्यार्थियों को कथा पुस्तक पढ़ने के लिए बाध्य किया जा रहा है।

तर्क 2: कथा पुस्तक, पढ़ाई करने के लिए नहीं बनी हैं।

Options :

1. ✖ तर्क 1 ठोस है।
2. ✖ तर्क 2 ठोस है।
3. ✖ दोनों तर्क ठोस हैं।
4. ✔ कोई भी तर्क ठोस नहीं है।

Question Number : 109 Question Id : 7368155767 Question Type : MCQ Option Shuffling : Yes Display Question Number : Yes
Single Line Question Option : No Option Orientation : Vertical

Correct : 1 Wrong : 0.25

Statement: To error, is human.

Argument 1: Humans cannot make errors.

Argument 2: Error is a way to learn more.

Options :

1. ✖ Argument 1 is strong.
2. ✔ Argument 2 is strong.
3. ✖ Both the Arguments are strong.
4. ✖ Neither of the Arguments are strong.

Question Number : 109 Question Id : 7368155767 Question Type : MCQ Option Shuffling : Yes Display Question Number : Yes
Single Line Question Option : No Option Orientation : Vertical

Correct : 1 Wrong : 0.25

कथन: गलतियाँ करना मनुष्य का स्वभाव है।

तर्क 1: मनुष्य गलती नहीं कर सकते हैं।

तर्क 2: गलती करने से हम और अधिक सीख पाते हैं।

Options :

1. ✖ तर्क 1 ठोस है।
2. ✔ तर्क 2 ठोस है।
3. ✖ दोनों तर्क ठोस हैं।
4. ✖ कोई भी तर्क ठोस नहीं है।

Question Number : 110 Question Id : 7368155768 Question Type : MCQ Option Shuffling : Yes Display Question Number : Yes
Single Line Question Option : No Option Orientation : Vertical

Correct : 1 Wrong : 0.25

Statement: The train fares were hiked by the Government in the new budget.

Argument 1: Reducing fares will lead to agitation amongst the society.

Argument 2: Whatever the government do is for the betterment of the society.

Options :

1. ✖ Argument 1 is strong
2. ✖ Argument 2 is strong
3. ✖ Both the Arguments are strong
4. ✔ Neither of the Arguments are strong

Question Number : 110 Question Id : 7368155768 Question Type : MCQ Option Shuffling : Yes Display Question Number : Yes
Single Line Question Option : No Option Orientation : Vertical

Correct : 1 Wrong : 0.25

कथन : नए बजट में सरकार ने रेल किराए में बढ़ोत्तरी की।

तर्क 1: किराया घटने से देश की जनता में रोष पैदा होता है।

तर्क 2: सरकार जो भी कदम उठाती है, वो समाज की उन्नति के लिए ही होता है।

Options :

1. ✖ तर्क 1 ठोस है।
2. ✖ तर्क 2 ठोस है।
3. ✖ दोनों तर्क ठोस हैं।
4. ✔ कोई भी तर्क ठोस नहीं है।

Question Number : 111 Question Id : 7368155769 Question Type : MCQ Option Shuffling : Yes Display Question Number : Yes
Single Line Question Option : No Option Orientation : Vertical

Correct : 1 Wrong : 0.25

Statement: The Police solved the loot case which happened in 2001, 15 years back.

Argument 1: Police is very efficient.

Argument 2: There was lack of evidence which led the case to a 15 years delay.

Options :

1. ✖ Argument 1 is strong.
2. ✔ Argument 2 is strong.
3. ✖ Both the Arguments are strong.
4. ✖ Neither of the Arguments are strong.

Question Number : 111 Question Id : 7368155769 Question Type : MCQ Option Shuffling : Yes Display Question Number : Yes
Single Line Question Option : No Option Orientation : Vertical

Correct : 1 Wrong : 0.25

कथन : पुलिस ने 15 साल पहले 2001 में हुए लूट काण्ड की गुत्थी सुलझा ली।

तर्क 1: पुलिस काफी कार्यक्षम है।

तर्क 2: सबूतों की कमी के कारण, केस 15 सालों तक चला।

Options :

1. ✖ तर्क 1 ठोस है।
2. ✔ तर्क 2 ठोस है।
3. ✖ दोनों तर्क ठोस हैं।
4. ✖ कोई भी तर्क ठोस नहीं है।

Question Number : 112 Question Id : 7368155770 Question Type : MCQ Option Shuffling : Yes Display Question Number : Yes
Single Line Question Option : No Option Orientation : Vertical

Correct : 1 Wrong : 0.25

Statement: There is a mass agitation against the Reservation Policy in the nation.

Argument 1: The Reservation Policy in the nation needs to be reconsider.

Argument 2: Nation's people have nothing to work on.

Options :

1. ✔ Argument 1 is strong.
2. ✖ Argument 2 is strong.
3. ✖ Both the Arguments are strong.
4. ✖ Neither of the Arguments are strong.

Question Number : 112 Question Id : 7368155770 Question Type : MCQ Option Shuffling : Yes Display Question Number : Yes
Single Line Question Option : No Option Orientation : Vertical

Correct : 1 Wrong : 0.25

कथन : वर्तमान की आरक्षण नीति को लेकर देश भर में विरोध हो रहा है।

तर्क 1: देश में आरक्षण नीति पर पुनर्विचार की आवश्यकता है।

तर्क 2: देश के लोगों के पास अब कोई काम नहीं बचा है।

Options :

1. ✓ तर्क 1 ठोस है।
2. ✗ तर्क 2 ठोस है।
3. ✗ दोनों तर्क ठोस हैं।
4. ✗ कोई भी तर्क ठोस नहीं है।

Question Number : 113 Question Id : 7368155771 Question Type : MCQ Option Shuffling : Yes Display Question Number : Yes
Single Line Question Option : No Option Orientation : Vertical

Correct : 1 Wrong : 0.25

Abhishek is the brother of Shivika's sister. The son of Shivika is Abhishek's

Options :

1. ✗ Cousin
2. ✗ Son
3. ✓ Nephew
4. ✗ Niece

Question Number : 113 Question Id : 7368155771 Question Type : MCQ Option Shuffling : Yes Display Question Number : Yes
Single Line Question Option : No Option Orientation : Vertical

Correct : 1 Wrong : 0.25

अभिषेक शिविका की बहन का भाई है। शिविका का बेटा अभिषेक का क्या है?

Options :

1. ✗ चचेरा भाई
2. ✗ बेटा
3. ✓ भांजा
4. ✗ भांजी

Question Number : 114 Question Id : 7368155772 Question Type : MCQ Option Shuffling : Yes Display Question Number : Yes
Single Line Question Option : No Option Orientation : Vertical

Correct : 1 Wrong : 0.25

The daughter of your daughter is _____ of your sister's mother's husband.

Options :

1. ✗ Grandmother
2. ✗ Granddaughter
3. ✓ Great Granddaughter
4. ✗ Great Grandmother

Question Number : 114 Question Id : 7368155772 Question Type : MCQ Option Shuffling : Yes Display Question Number : Yes
Single Line Question Option : No Option Orientation : Vertical

Correct : 1 Wrong : 0.25

आपके बेटे की बेटे, आपकी बहन की माता के पति की क्या हैं?

Options :

1. ✖ दादी
2. ✖ पोती
3. ✔ परपोती
4. ✖ परदादी

Question Number : 115 Question Id : 7368155773 Question Type : MCQ Option Shuffling : Yes Display Question Number : Yes
Single Line Question Option : No Option Orientation : Vertical

Correct : 1 Wrong : 0.25

Pointing towards a photograph, Nimish said, "The father of this person is the brother of husband of my maternal aunt". What is the relation Nimish's mother's father is having with the person in the photograph?

Options :

1. ✖ Son
2. ✔ Grandson
3. ✖ Maternal Uncle
4. ✖ Paternal Uncle

Question Number : 115 Question Id : 7368155773 Question Type : MCQ Option Shuffling : Yes Display Question Number : Yes
Single Line Question Option : No Option Orientation : Vertical

Correct : 1 Wrong : 0.25

एक चित्र की ओर इशारा करते हुए निमिष ने कहा, "इस व्यक्ति के पिता मेरी मामी के पति के भाई हैं" निमिष के माँ के पति का, चित्र में दिखाए गए व्यक्ति से क्या संबंध है?

Options :

1. ✖ बेटा
2. ✔ पोता
3. ✖ मामा
4. ✖ चाचा

Question Number : 116 Question Id : 7368155774 Question Type : MCQ Option Shuffling : Yes Display Question Number : Yes
Single Line Question Option : No Option Orientation : Vertical

Correct : 1 Wrong : 0.25

Chintan is the only son of Ankit's mother's husband's father. How many Paternal Uncles does Ankit have?

Options :

1. ✔ 0
2. ✖ 1
3. ✖ 3
4. ✖ Cannot be predicted

Question Number : 116 Question Id : 7368155774 Question Type : MCQ Option Shuffling : Yes Display Question Number : Yes
Single Line Question Option : No Option Orientation : Vertical

Correct : 1 Wrong : 0.25

चिंतन अंकित की माता के पति के पिता का इकलौता बेटा है। अंकित के कुल कितने चाचा हैं?

Options :

1. ✓ 0
2. ✗ 1
3. ✗ 3
4. ✗ अनुमानित नहीं किया जा सकता

Question Number : 117 Question Id : 7368155775 Question Type : MCQ Option Shuffling : Yes Display Question Number : Yes
Single Line Question Option : No Option Orientation : Vertical

Correct : 1 Wrong : 0.25

Anoop is the brother of the wife of your mother's only son. The mother of Anoop is _____ of your son.

Options :

1. ✗ Mother
2. ✗ Sister
3. ✓ Grandmother
4. ✗ Nothing

Question Number : 117 Question Id : 7368155775 Question Type : MCQ Option Shuffling : Yes Display Question Number : Yes
Single Line Question Option : No Option Orientation : Vertical

Correct : 1 Wrong : 0.25

अनूप आपकी माँ के इकलौते बेटे की पत्नी का भाई है। अनूप की माता आपके बेटे की _____ हैं।

Options :

1. ✗ माता
2. ✗ बहन
3. ✓ नानी
4. ✗ कुछ भी नहीं

Question Number : 118 Question Id : 7368155776 Question Type : MCQ Option Shuffling : Yes Display Question Number : Yes
Single Line Question Option : No Option Orientation : Vertical

Correct : 1 Wrong : 0.25

In the given alternatives, one of the numbers is dissimilar from the other given alternatives. Find the one which is dissimilar.

Options :

1. ✓ 169
2. ✗ 156
3. ✗ 143
4. ✗ 182

Question Number : 118 Question Id : 7368155776 Question Type : MCQ Option Shuffling : Yes Display Question Number : Yes
Single Line Question Option : No Option Orientation : Vertical

Correct : 1 Wrong : 0.25

दिए हुए विकल्पों में, एक संख्या अन्य दिए गये विकल्पों से असमान है। वह संख्या ज्ञात करें जो असमान है।

Options :

1. ✓ 169
2. ✗ 156
3. ✗ 143
4. ✗ 182

Question Number : 119 Question Id : 7368155777 Question Type : MCQ Option Shuffling : Yes Display Question Number : Yes
Single Line Question Option : No Option Orientation : Vertical

Correct : 1 Wrong : 0.25

Find the odd one out from the given alternatives.

Options :

1. ✗ Jack
2. ✗ King
3. ✗ Queen
4. ✓ Ace

Question Number : 119 Question Id : 7368155777 Question Type : MCQ Option Shuffling : Yes Display Question Number : Yes
Single Line Question Option : No Option Orientation : Vertical

Correct : 1 Wrong : 0.25

निम्नलिखित में से विषम को चुनिये।

Options :

1. ✗ गुलाम
2. ✗ बादशाह
3. ✗ बेगम
4. ✓ इक्का

Question Number : 120 Question Id : 7368155778 Question Type : MCQ Option Shuffling : Yes Display Question Number : Yes
Single Line Question Option : No Option Orientation : Vertical

Correct : 1 Wrong : 0.25

Which one of following keywords/phrases differ from the others in the given options?

Options :

1. ✗ MAKE
2. ✗ TAKE
3. ✓ SAKE
4. ✗ CAKE

Question Number : 120 Question Id : 7368155778 Question Type : MCQ Option Shuffling : Yes Display Question Number : Yes
Single Line Question Option : No Option Orientation : Vertical

Correct : 1 Wrong : 0.25

निम्नलिखित में से कौनसा मुख्य शब्द/वाक्यांश दिये गए अन्य विकल्पों में से अलग है?

Options :

1. ✖ MAKE
2. ✖ TAKE
3. ✔ SAKE
4. ✖ CAKE

Question Number : 121 Question Id : 7368155779 Question Type : MCQ Option Shuffling : Yes Display Question Number : Yes
Single Line Question Option : No Option Orientation : Vertical

Correct : 1 Wrong : 0.25

In the given alternatives, one of the numbers is dissimilar from the other given alternatives.
Find the one which is dissimilar.

Options :

1. ✖ 210
2. ✖ 182
3. ✖ 156
4. ✔ 224

Question Number : 121 Question Id : 7368155779 Question Type : MCQ Option Shuffling : Yes Display Question Number : Yes
Single Line Question Option : No Option Orientation : Vertical

Correct : 1 Wrong : 0.25

दिये गए विकल्पों में से, एक संख्या अन्य विकल्पों से असमान है। वह संख्या ज्ञात करें जो असमान है।

Options :

1. ✖ 210
2. ✖ 182
3. ✖ 156
4. ✔ 224

Question Number : 122 Question Id : 7368155780 Question Type : MCQ Option Shuffling : Yes Display Question Number : Yes
Single Line Question Option : No Option Orientation : Vertical

Correct : 1 Wrong : 0.25

Find the odd one out from the given alternatives.

Options :

1. ✖ Virendra Sehwag
2. ✖ Sachin Tendulkar
3. ✖ Ajit Agarkar
4. ✔ Bhuwaneshwar Kumar

Question Number : 122 Question Id : 7368155780 Question Type : MCQ Option Shuffling : Yes Display Question Number : Yes
Single Line Question Option : No Option Orientation : Vertical

Correct : 1 Wrong : 0.25

दिये गए विकल्पों से भिन्न को ज्ञात करें:

Options :

1. ✖ वीरेंद्र सेहवाग

2. ✖ सचिन तेंडुल्कर
3. ✖ अजीत अगरकर
4. ✔ भुवनेश्वर कुमार

Question Number : 123 Question Id : 7368155781 Question Type : MCQ Option Shuffling : Yes Display Question Number : Yes
Single Line Question Option : No Option Orientation : Vertical

Correct : 1 Wrong : 0.25

The age of a Ashish is 4 times that of Rajeev. Five years ago Ashish was 9 times as old as Rajeev was at that time. The present age of Ashish is

Options :

1. ✔ 32 years
2. ✖ 42 years
3. ✖ 44 years
4. ✖ 34 years

Question Number : 123 Question Id : 7368155781 Question Type : MCQ Option Shuffling : Yes Display Question Number : Yes
Single Line Question Option : No Option Orientation : Vertical

Correct : 1 Wrong : 0.25

आशीष की आयु राजीव की आयु के 4 गुना है। पांच साल पहले आशीष की आयु राजीव की उस समय की आयु का 9 गुना थी। आशीष की वर्तमान आयु क्या होगी?

Options :

1. ✔ 32 साल
2. ✖ 42 साल
3. ✖ 44 साल
4. ✖ 34 साल

Question Number : 124 Question Id : 7368155782 Question Type : MCQ Option Shuffling : Yes Display Question Number : Yes
Single Line Question Option : No Option Orientation : Vertical

Correct : 1 Wrong : 0.25

Ajit and Vivek can do a work in 20 and 30 days respectively. In how many days they together will do the same work?

Options :

1. ✖ 3 days
2. ✖ 10 days
3. ✔ 12 days
4. ✖ 43 days

Question Number : 124 Question Id : 7368155782 Question Type : MCQ Option Shuffling : Yes Display Question Number : Yes
Single Line Question Option : No Option Orientation : Vertical

Correct : 1 Wrong : 0.25

अजीत और विवेक एक कार्य को क्रमशः 20 और 30 दिन में पूरा कर लेते हैं। वे एक साथ उस कार्य को कितने दिन में पूरा कर लेंगे ?

Options :

1. ✖ 3 दिन
2. ✖ 10 दिन
3. ✔ 12 दिन
4. ✖ 43 दिन

Question Number : 125 Question Id : 7368155783 Question Type : MCQ Option Shuffling : Yes Display Question Number : Yes
Single Line Question Option : No Option Orientation : Vertical

Correct : 1 Wrong : 0.25

The LCM and HCF of two numbers are 2097 and 27 respectively. If one number is 297, find the other.

Options :

1. ✔ 198
2. ✖ 189
3. ✖ 234
4. ✖ 778

Note: For this question, discrepancy is found in question/answer. Full Marks is being awarded to all candidates.

Question Number : 125 Question Id : 7368155783 Question Type : MCQ Option Shuffling : Yes Display Question Number : Yes
Single Line Question Option : No Option Orientation : Vertical

Correct : 1 Wrong : 0.25

दो संख्याओं के लघुत्तम समापवर्त्य और महत्तम समापवर्तक क्रमशः 2097 और 27 हैं। यदि एक संख्या 297 है, तो दूसरी संख्या को ज्ञात कीजिए।

Options :

1. ✔ 198
2. ✖ 189
3. ✖ 234
4. ✖ 778

Note: For this question, discrepancy is found in question/answer. Full Marks is being awarded to all candidates.

Question Number : 126 Question Id : 7368155784 Question Type : MCQ Option Shuffling : Yes Display Question Number : Yes
Single Line Question Option : No Option Orientation : Vertical

Correct : 1 Wrong : 0.25

The difference between a number and its three-fifth is 12. What is the number?

Options :

1. ✖ 12
2. ✔ 30
3. ✖ 32
4. ✖ 56

Question Number : 126 Question Id : 7368155784 Question Type : MCQ Option Shuffling : Yes Display Question Number : Yes
Single Line Question Option : No Option Orientation : Vertical

Correct : 1 Wrong : 0.25

एक संख्या और उसके $\frac{3}{5}$ वें भाग का अंतर 12 है। वह संख्या क्या है?

Options :

1. ✖ 12
2. ✔ 30
3. ✖ 32
4. ✖ 56

Question Number : 127 Question Id : 7368155785 Question Type : MCQ Option Shuffling : Yes Display Question Number : Yes
Single Line Question Option : No Option Orientation : Vertical

Correct : 1 Wrong : 0.25

If speed of a boat in still water is 6 kmph and speed of the stream is 3 kmph. Then what will be the speed at downstream?

Options :

1. ✖ 5 kmph
2. ✔ 9 kmph
3. ✖ 3 kmph
4. ✖ 18 kmph

Question Number : 127 Question Id : 7368155785 Question Type : MCQ Option Shuffling : Yes Display Question Number : Yes
Single Line Question Option : No Option Orientation : Vertical

Correct : 1 Wrong : 0.25

यदि स्थिर पानी में नाव की गति 6 कि.मी/घंटा है, और बहाव की गति 3 कि.मी/घंटा है, तो अनुप्रवाह में नाव की गति क्या होगी?

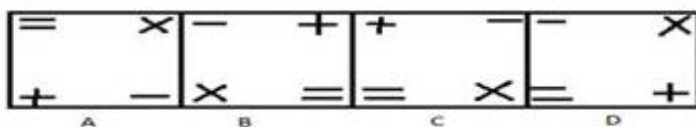
Options :

1. ✖ 5 कि.मी/घंटा
2. ✔ 9 कि.मी/घंटा
3. ✖ 3 की कि.मी/घंटा
4. ✖ 18 कि.मी/घंटा

Question Number : 128 Question Id : 7368155786 Question Type : MCQ Option Shuffling : Yes Display Question Number : Yes
Single Line Question Option : No Option Orientation : Vertical

Correct : 1 Wrong : 0.25

Pick the odd one out from the series



Options :

1. ✖ A
2. ✖ B
3. ✖ C
4. ✔ D

Question Number : 128 Question Id : 7368155786 Question Type : MCQ Option Shuffling : Yes Display Question Number : Yes
Single Line Question Option : No Option Orientation : Vertical

Correct : 1 Wrong : 0.25

दी हुई श्रेणी में से भिन्न को चुनिये :

=	×	-	+	+	-	-	×
+	-	×	=	=	×	=	+
A	B	C	D				

Options :

- 1. ✖ A
- 2. ✖ B
- 3. ✖ C
- 4. ✔ D

Question Number : 129 Question Id : 7368155787 Question Type : MCQ Option Shuffling : Yes Display Question Number : Yes
Single Line Question Option : No Option Orientation : Vertical

Correct : 1 Wrong : 0.25

Pick the odd one out from the series

5	3	8	3	5	6	8	2
2	15	5	24	1	30	6	16
A	B	C	D				

Options :

- 1. ✖ A
- 2. ✖ B
- 3. ✔ C
- 4. ✖ D

Question Number : 129 Question Id : 7368155787 Question Type : MCQ Option Shuffling : Yes Display Question Number : Yes
Single Line Question Option : No Option Orientation : Vertical

Correct : 1 Wrong : 0.25

दी हुई श्रेणी में से भिन्न को चुनिये :

5	3	8	3	5	6	8	2
2	15	5	24	1	30	6	16
A	B	C	D				

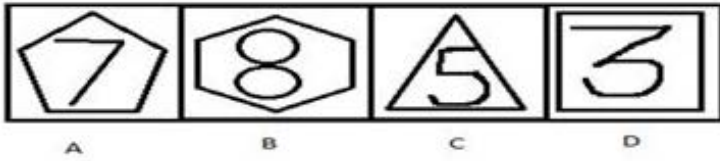
Options :

- 1. ✖ A
- 2. ✖ B
- 3. ✔ C
- 4. ✖ D

Question Number : 130 Question Id : 7368155788 Question Type : MCQ Option Shuffling : Yes Display Question Number : Yes
Single Line Question Option : No Option Orientation : Vertical

Correct : 1 Wrong : 0.25

Pick the odd one out from the series



Options :

1. ✖ A
2. ✖ B
3. ✖ C
4. ✔ D

Question Number : 130 Question Id : 7368155788 Question Type : MCQ Option Shuffling : Yes Display Question Number : Yes
Single Line Question Option : No Option Orientation : Vertical

Correct : 1 Wrong : 0.25

दी हुई श्रेणी में से भिन्न को चुनिये :



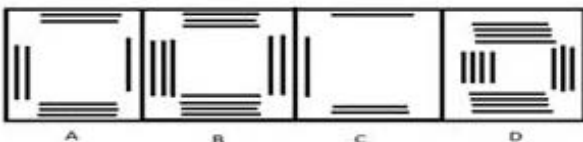
Options :

1. ✖ A
2. ✖ B
3. ✖ C
4. ✔ D

Question Number : 131 Question Id : 7368155789 Question Type : MCQ Option Shuffling : Yes Display Question Number : Yes
Single Line Question Option : No Option Orientation : Vertical

Correct : 1 Wrong : 0.25

Pick the odd one out from the series



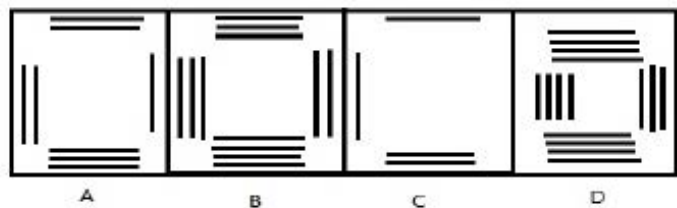
Options :

1. ✖ A
2. ✖ B
3. ✖ C
4. ✔ D

Question Number : 131 Question Id : 7368155789 Question Type : MCQ Option Shuffling : Yes Display Question Number : Yes
Single Line Question Option : No Option Orientation : Vertical

Correct : 1 Wrong : 0.25

दी हुई श्रेणी में से भिन्न को चुनिये :



Options :

1. ✖ A
2. ✖ B
3. ✖ C
4. ✔ D

Question Number : 132 Question Id : 7368155790 Question Type : MCQ Option Shuffling : Yes Display Question Number : Yes
Single Line Question Option : No Option Orientation : Vertical

Correct : 1 Wrong : 0.25

Pick the odd one out from the series



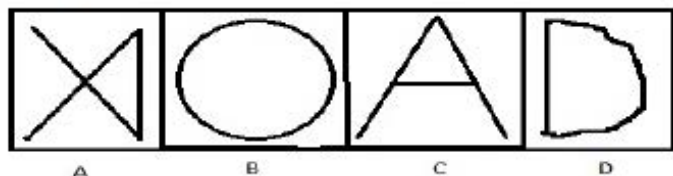
Options :

1. ✖ A
2. ✔ B
3. ✖ C
4. ✖ D

Question Number : 132 Question Id : 7368155790 Question Type : MCQ Option Shuffling : Yes Display Question Number : Yes
Single Line Question Option : No Option Orientation : Vertical

Correct : 1 Wrong : 0.25

दी हुई श्रेणी में से भिन्न को चुनिये :



Options :

1. ✖ A
2. ✔ B
3. ✖ C
4. ✖ D

Question Number : 133 Question Id : 7368155791 Question Type : MCQ Option Shuffling : Yes Display Question Number : Yes
Single Line Question Option : No Option Orientation : Vertical

Correct : 1 Wrong : 0.25

If < denotes >, > denotes <, + denotes -, - denotes x and \$ denotes = then which one of the following is not true?

Options :

1. ✖ $5 - 8 = 20 - 2$
2. ✔ $6 - 4 \times 4 = 2 - 10$
3. ✖ $5 + 8 > 5 - 3$
4. ✖ $8 - 3 < 5 \times 4$

Question Number : 133 Question Id : 7368155791 Question Type : MCQ Option Shuffling : Yes Display Question Number : Yes
Single Line Question Option : No Option Orientation : Vertical

Correct : 1 Wrong : 0.25

यदि '<' का अर्थ '>', '>' का अर्थ '<', '+' का अर्थ '-', '-' का अर्थ 'x' एवं '\$' का अर्थ '=' है, तो निम्नलिखित में से कौनसा सत्य नहीं है?

Options :

1. ✖ $5 - 8 = 20 - 2$
2. ✔ $6 - 4 \times 4 = 2 - 10$
3. ✖ $5 + 8 > 5 - 3$
4. ✖ $8 - 3 < 5 \times 4$

Question Number : 134 Question Id : 7368155792 Question Type : MCQ Option Shuffling : Yes Display Question Number : Yes
Single Line Question Option : No Option Orientation : Vertical

Correct : 1 Wrong : 0.25

If Mango is called onion, onion is called mouse, mouse is called water and water is called machine, then which one of the following will be considered as a vegetable?

Options :

1. ✖ Mango
2. ✖ Onion
3. ✖ Water
4. ✔ Mouse

Question Number : 134 Question Id : 7368155792 Question Type : MCQ Option Shuffling : Yes Display Question Number : Yes
Single Line Question Option : No Option Orientation : Vertical

Correct : 1 Wrong : 0.25

यदि आम को प्याज, प्याज को चूहा, चूहे को पानी, और पानी को मशीन कहते हैं, निम्न में से किसे एक सब्जी का दर्जा दिया जाएगा ?

Options :

1. ✖ आम
2. ✖ प्याज
3. ✖ पानी
4. ✔ चूहा

Question Number : 135 Question Id : 7368155793 Question Type : MCQ Option Shuffling : Yes Display Question Number : Yes
Single Line Question Option : No Option Orientation : Vertical

Correct : 1 Wrong : 0.25

A cube is painted red on all faces is cut into 8 small cubes of equal sizes. How many cubes are painted in one face only?

Options :

- 1. ✖ 1
- 2. ✖ 2
- 3. ✖ 8
- 4. ✔ 0

Question Number : 135 Question Id : 7368155793 Question Type : MCQ Option Shuffling : Yes Display Question Number : Yes
Single Line Question Option : No Option Orientation : Vertical

Correct : 1 Wrong : 0.25

अगर किसी घना को सभी तरफ से लाल रंग लगाकर 8 बराबर घनों में तोड़ा जाए, तो कितने ऐसे घन होंगे, जिनपर सिर्फ एक तरफ से रंग लगा होगा?

Options :

- 1. ✖ 1
- 2. ✖ 2
- 3. ✖ 8
- 4. ✔ 0

Question Number : 136 Question Id : 7368155794 Question Type : MCQ Option Shuffling : Yes Display Question Number : Yes
Single Line Question Option : No Option Orientation : Vertical

Correct : 1 Wrong : 0.25

In a language KITE is written as NLWH then WATER will be written as

Options :

- 1. ✖ QGNRK
- 2. ✔ ZDWHU
- 3. ✖ PMJNO
- 4. ✖ RREDF

Question Number : 136 Question Id : 7368155794 Question Type : MCQ Option Shuffling : Yes Display Question Number : Yes
Single Line Question Option : No Option Orientation : Vertical

Correct : 1 Wrong : 0.25

एक विशेष भाषा में, KITE को NLWH लिखा जाता है, तो WATER को किस प्रकार लिखा जाएगा

Options :

- 1. ✖ QGNRK
- 2. ✔ ZDWHU
- 3. ✖ PMJNO
- 4. ✖ RREDF

Question Number : 137 Question Id : 7368155795 Question Type : MCQ Option Shuffling : Yes Display Question Number : Yes
Single Line Question Option : No Option Orientation : Vertical

Correct : 1 Wrong : 0.25

In a language APPLE is written as ZOOKD then AZIMO will be written as

Options :

1. ✖ POOSE
2. ✔ ZYHLN
3. ✖ KKHLT
4. ✖ RREDF

Question Number : 137 Question Id : 7368155795 Question Type : MCQ Option Shuffling : Yes Display Question Number : Yes
Single Line Question Option : No Option Orientation : Vertical

Correct : 1 Wrong : 0.25

यदि किसी भाषा में APPLE को ZOOKD लिखा जाता है, तो AZIMO को किस प्रकार लिखा जाएगा

Options :

1. ✖ POOSE
2. ✔ ZYHLN
3. ✖ KKHLT
4. ✖ RREDF

Question Number : 138 Question Id : 7368155796 Question Type : MCQ Option Shuffling : Yes Display Question Number : Yes
Single Line Question Option : No Option Orientation : Vertical

Correct : 1 Wrong : 0.25

Find the next term of the series.

28, 222, 628, 1222, ____

Options :

1. ✔ 2028
2. ✖ 2248
3. ✖ 2448
4. ✖ 2228

Question Number : 138 Question Id : 7368155796 Question Type : MCQ Option Shuffling : Yes Display Question Number : Yes
Single Line Question Option : No Option Orientation : Vertical

Correct : 1 Wrong : 0.25

श्रेणी का अगला पद ज्ञात कीजिये

28, 222, 628, 1222, ____

Options :

1. ✔ 2028
2. ✖ 2248
3. ✖ 2448
4. ✖ 2228

Question Number : 139 Question Id : 7368155797 Question Type : MCQ Option Shuffling : Yes Display Question Number : Yes
Single Line Question Option : No Option Orientation : Vertical

Correct : 1 Wrong : 0.25

Find the next term of the series.

6, 9, 12, 18, 18, 27, 24, _____

Options :

- 1. ✖ 21
- 2. ✖ 24
- 3. ✔ 36
- 4. ✖ 30

Question Number : 139 Question Id : 7368155797 Question Type : MCQ Option Shuffling : Yes Display Question Number : Yes
Single Line Question Option : No Option Orientation : Vertical

Correct : 1 Wrong : 0.25

श्रेणी का अगला पद ज्ञात कीजिये

6,9,12,18,18,27,24, _____

Options :

- 1. ✖ 21
- 2. ✖ 24
- 3. ✔ 36
- 4. ✖ 30

Question Number : 140 Question Id : 7368155798 Question Type : MCQ Option Shuffling : Yes Display Question Number : Yes
Single Line Question Option : No Option Orientation : Vertical

Correct : 1 Wrong : 0.25

Find the next term of the series.

5, 4, 31, 60, 129, _____

Options :

- 1. ✖ 201
- 2. ✔ 212
- 3. ✖ 229
- 4. ✖ 167

Question Number : 140 Question Id : 7368155798 Question Type : MCQ Option Shuffling : Yes Display Question Number : Yes
Single Line Question Option : No Option Orientation : Vertical

Correct : 1 Wrong : 0.25

श्रेणी का अगला पद ज्ञात कीजिये

5,4,31,60,129, _____

Options :

- 1. ✖ 201
- 2. ✔ 212
- 3. ✖ 229
- 4. ✖ 167

Question Number : 141 Question Id : 7368155799 Question Type : MCQ Option Shuffling : Yes Display Question Number : Yes
Single Line Question Option : No Option Orientation : Vertical

Correct : 1 Wrong : 0.25

Find the next term of the series.

99, 108, 117, 126, _____

Options :

- 1. ✖ 130
- 2. ✖ 137
- 3. ✔ 135
- 4. ✖ 145

Question Number : 141 Question Id : 7368155799 Question Type : MCQ Option Shuffling : Yes Display Question Number : Yes
Single Line Question Option : No Option Orientation : Vertical

Correct : 1 Wrong : 0.25

श्रेणी का अगला पद ज्ञात कीजिये

99, 108, 117, 126, _____

Options :

- 1. ✖ 130
- 2. ✖ 137
- 3. ✔ 135
- 4. ✖ 145

Question Number : 142 Question Id : 7368155800 Question Type : MCQ Option Shuffling : Yes Display Question Number : Yes
Single Line Question Option : No Option Orientation : Vertical

Correct : 1 Wrong : 0.25

Find the next term of the series.

35, 73, 111, 149, 187, _____

Options :

- 1. ✖ 192
- 2. ✖ 202
- 3. ✖ 222
- 4. ✔ 225

Question Number : 142 Question Id : 7368155800 Question Type : MCQ Option Shuffling : Yes Display Question Number : Yes
Single Line Question Option : No Option Orientation : Vertical

Correct : 1 Wrong : 0.25

श्रेणी का अगला पद ज्ञात कीजिये

35, 73, 111, 149, 187, _____

Options :

- 1. ✖ 192
- 2. ✖ 202
- 3. ✖ 222
- 4. ✔ 225

Question Number : 143 Question Id : 7368155801 Question Type : MCQ Option Shuffling : Yes Display Question Number : Yes
Single Line Question Option : No Option Orientation : Vertical

Correct : 1 Wrong : 0.25

What will be the value of p and q?

$$7p+34q=13$$

$$32p+7q=34$$

Options :

1. ✖ $p=56, q=34$
2. ✖ $p=1.2, q=9.03$
3. ✔ $p=1.02, q=0.171$
4. ✖ $p=23, q=89$

Question Number : 143 Question Id : 7368155801 Question Type : MCQ Option Shuffling : Yes Display Question Number : Yes
Single Line Question Option : No Option Orientation : Vertical

Correct : 1 Wrong : 0.25

p और q का मान ज्ञात कीजिये?

$$7p+34q=13$$

$$32p+7q=34$$

Options :

1. ✖ $p=56, q=34$
2. ✖ $p=1.2, q=9.03$
3. ✔ $p=1.02, q=0.171$
4. ✖ $p=23, q=89$

Question Number : 144 Question Id : 7368155802 Question Type : MCQ Option Shuffling : Yes Display Question Number : Yes
Single Line Question Option : No Option Orientation : Vertical

Correct : 1 Wrong : 0.25

What will be the value of a/b?

$$23a/34b=112/78$$

Options :

1. ✖ 6.34
2. ✔ 2.112
3. ✖ 1.067
4. ✖ 8.99

Question Number : 144 Question Id : 7368155802 Question Type : MCQ Option Shuffling : Yes Display Question Number : Yes
Single Line Question Option : No Option Orientation : Vertical

Correct : 1 Wrong : 0.25

a/b का मान ज्ञात कीजिये?

$$23a/34b=112/78$$

Options :

1. ✖ 6.34
2. ✔ 2.112
3. ✖ 1.067

4. ✖ 8.99

Question Number : 145 Question Id : 7368155803 Question Type : MCQ Option Shuffling : Yes Display Question Number : Yes
Single Line Question Option : No Option Orientation : Vertical

Correct : 1 Wrong : 0.25

If $a=100.2$ and $b=8.1$ then what will be the value of $(a+b)^2$?

Options :

1. ✔ 11728.89

2. ✖ 78.98

3. ✖ 7764.89

4. ✖ 12342.11

Question Number : 145 Question Id : 7368155803 Question Type : MCQ Option Shuffling : Yes Display Question Number : Yes
Single Line Question Option : No Option Orientation : Vertical

Correct : 1 Wrong : 0.25

यदि $a=100.2$ और $b=8.1$ है, तो $(a+b)^2$ का मान क्या होगा?

Options :

1. ✔ 11728.89

2. ✖ 78.98

3. ✖ 7764.89

4. ✖ 12342.11

Question Number : 146 Question Id : 7368155804 Question Type : MCQ Option Shuffling : Yes Display Question Number : Yes
Single Line Question Option : No Option Orientation : Vertical

Correct : 1 Wrong : 0.25

If $(101b)^{1/2}=81.4$, What will be the value of b ?

Options :

1. ✖ 101

2. ✖ 81.4

3. ✖ 6625.96

4. ✔ 65.60

Question Number : 146 Question Id : 7368155804 Question Type : MCQ Option Shuffling : Yes Display Question Number : Yes
Single Line Question Option : No Option Orientation : Vertical

Correct : 1 Wrong : 0.25

यदि $(101b)^{1/2}=81.4$ है, तो b का मान क्या होगा?

Options :

1. ✖ 101

2. ✖ 81.4

3. ✖ 6625.96

4. ✔ 65.60

Question Number : 147 Question Id : 7368155805 Question Type : MCQ Option Shuffling : Yes Display Question Number : Yes
Single Line Question Option : No Option Orientation : Vertical

Correct : 1 Wrong : 0.25

If $a=231.3+4b$ and $b=0.3324+3a$ then find the value of a and b?

Options :

1. ✓ 21.14, 63.11
2. ✗ 23.11, 98.23
3. ✗ 65.22, 12.43
4. ✗ 23.44, 19.08

Question Number : 147 Question Id : 7368155805 Question Type : MCQ Option Shuffling : Yes Display Question Number : Yes
Single Line Question Option : No Option Orientation : Vertical

Correct : 1 Wrong : 0.25

यदि $a=231.3+4b$ और $b=0.3324+3a$ है, तो a और b का मान ज्ञात कीजिये?

Options :

1. ✓ 21.14, 63.11
2. ✗ 23.11, 98.23
3. ✗ 65.22, 12.43
4. ✗ 23.44, 19.08

Question Number : 148 Question Id : 7368155806 Question Type : MCQ Option Shuffling : Yes Display Question Number : Yes
Single Line Question Option : No Option Orientation : Vertical

Correct : 1 Wrong : 0.25

Find the value of x and y?

$$2x + 3y = 65 \text{ and } 9x + 4y = 44$$

Options :

1. ✓ -128/19, 497/19
2. ✗ 19/497, 128/19
3. ✗ 778/19, 786/19
4. ✗ 887/32, 674/12

Question Number : 148 Question Id : 7368155806 Question Type : MCQ Option Shuffling : Yes Display Question Number : Yes
Single Line Question Option : No Option Orientation : Vertical

Correct : 1 Wrong : 0.25

x एवं y का मान ज्ञात कीजिए?

$$2x + 3y = 65 \text{ and } 9x + 4y = 44$$

Options :

1. ✓ -128/19, 497/19
2. ✗ 19/497, 128/19
3. ✗ 778/19, 786/19
4. ✗ 887/32, 674/12

Question Number : 149 Question Id : 7368155807 Question Type : MCQ Option Shuffling : Yes Display Question Number : Yes
Single Line Question Option : No Option Orientation : Vertical

Correct : 1 Wrong : 0.25

Five boys are sitting in a row for a group photograph. Shubham is left of Manav and right to Rishi. Ritesh is sitting right to Manav. Paras is between Manav and Ritesh. Who is sitting in the middle of the photograph?

Options :

1. ✖ Rishi
2. ✖ Shubham
3. ✔ Manav
4. ✖ Ritesh

Question Number : 149 Question Id : 7368155807 Question Type : MCQ Option Shuffling : Yes Display Question Number : Yes
Single Line Question Option : No Option Orientation : Vertical

Correct : 1 Wrong : 0.25

एक सामूहिक फोटो में पांच लड़के एक कतार में बैठे हुए हैं। शुभम मानव की बायें ओर और ऋषि के दायें ओर है। रितेश मानव के दायें ओर बैठा हुआ है, पारस मानव और रितेश के बीच में बैठा हुआ है। फोटो के मध्य में कौन बैठा हुआ है?

Options :

1. ✖ ऋषि
2. ✖ शुभम
3. ✔ मानव
4. ✖ रितेश

Question Number : 150 Question Id : 7368155808 Question Type : MCQ Option Shuffling : Yes Display Question Number : Yes
Single Line Question Option : No Option Orientation : Vertical

Correct : 1 Wrong : 0.25

Find the next term of the series.

360,323,288,255,_____

Options :

1. ✖ 123
2. ✖ 225
3. ✔ 224
4. ✖ 220

Question Number : 150 Question Id : 7368155808 Question Type : MCQ Option Shuffling : Yes Display Question Number : Yes
Single Line Question Option : No Option Orientation : Vertical

Correct : 1 Wrong : 0.25

श्रेणी का अगला पद ज्ञात करें

360,323,288,255,_____

Options :

1. ✖ 123
2. ✖ 225
3. ✔ 224
4. ✖ 220

General Awareness

Section Id :	736815114
Section Number :	4
Section type :	Online
Mandatory or Optional:	Mandatory
Number of Questions:	50
Number of Questions to be attempted:	50
Section Marks:	50
Display Number Panel:	Yes
Group All Questions:	No

Sub-Section Number:	1
Sub-Section Id:	736815172
Question Shuffling Allowed :	Yes

Question Number : 151 Question Id : 7368155809 Question Type : MCQ Option Shuffling : Yes Display Question Number : Yes
Single Line Question Option : No Option Orientation : Vertical

Correct : 1 Wrong : 0.25

Who acts as the ex-officio Chairman of Rajya Sabha?

Options :

- ✘ Home Minister
- ✘ Prime Minister
- ✘ President
- ✔ Vice President

Question Number : 151 Question Id : 7368155809 Question Type : MCQ Option Shuffling : Yes Display Question Number : Yes
Single Line Question Option : No Option Orientation : Vertical

Correct : 1 Wrong : 0.25

राज्य सभा के पदेन सचिव की भूमिका कौन निभाता है?

Options :

- ✘ गृहमंत्री
- ✘ प्रधानमंत्री
- ✘ राष्ट्रपति
- ✔ उप-राष्ट्रपति

Question Number : 152 Question Id : 7368155810 Question Type : MCQ Option Shuffling : Yes Display Question Number : Yes
Single Line Question Option : No Option Orientation : Vertical

Correct : 1 Wrong : 0.25

How many members are nominated by the President of India to Rajya Sabha?

Options :

- ✔ Twelve
- ✘ Twenty

- 3. ✖ Fifty
- 4. ✖ Thirty

Question Number : 152 Question Id : 7368155810 Question Type : MCQ Option Shuffling : Yes Display Question Number : Yes
Single Line Question Option : No Option Orientation : Vertical

Correct : 1 Wrong : 0.25

राज्यसभा में राष्ट्रपति द्वारा कितने सदस्य नियुक्त किए जाते हैं?

Options :

- 1. ✔ बारह
- 2. ✖ बीस
- 3. ✖ पचास
- 4. ✖ तीस

Question Number : 153 Question Id : 7368155811 Question Type : MCQ Option Shuffling : Yes Display Question Number : Yes
Single Line Question Option : No Option Orientation : Vertical

Correct : 1 Wrong : 0.25

What is the minimum age required to become a member of Lok Sabha?

Options :

- 1. ✖ 35 years
- 2. ✖ 40 years
- 3. ✖ 30 years
- 4. ✔ 25 years

Question Number : 153 Question Id : 7368155811 Question Type : MCQ Option Shuffling : Yes Display Question Number : Yes
Single Line Question Option : No Option Orientation : Vertical

Correct : 1 Wrong : 0.25

लोक सभा का सदस्य बनने की न्यूनतम आयु कितनी है?

Options :

- 1. ✖ 35 वर्ष
- 2. ✖ 40 वर्ष
- 3. ✖ 30 वर्ष
- 4. ✔ 25 वर्ष

Question Number : 154 Question Id : 7368155812 Question Type : MCQ Option Shuffling : Yes Display Question Number : Yes
Single Line Question Option : No Option Orientation : Vertical

Correct : 1 Wrong : 0.25

Which article of the Constitution of India confers upon the President the power to grant pardon to convicts?

Options :

- 1. ✔ Article 72
- 2. ✖ Article 82
- 3. ✖ Article 52

4. ✖ Article 42

Question Number : 154 Question Id : 7368155812 Question Type : MCQ Option Shuffling : Yes Display Question Number : Yes
Single Line Question Option : No Option Orientation : Vertical

Correct : 1 Wrong : 0.25

भारतीय संविधान के किस अनुच्छेद के अनुसार - राष्ट्रपति के पास अपराधियों को क्षमादान देने की शक्ति है?

Options :

1. ✔ अनुच्छेद 72
2. ✖ अनुच्छेद 82
3. ✖ अनुच्छेद 52
4. ✖ अनुच्छेद 42

Question Number : 155 Question Id : 7368155813 Question Type : MCQ Option Shuffling : Yes Display Question Number : Yes
Single Line Question Option : No Option Orientation : Vertical

Correct : 1 Wrong : 0.25

Who has the power to impeach the President of India?

Options :

1. ✖ Prime Minister
2. ✔ Parliament
3. ✖ Vice-President
4. ✖ Chief Justice

Question Number : 155 Question Id : 7368155813 Question Type : MCQ Option Shuffling : Yes Display Question Number : Yes
Single Line Question Option : No Option Orientation : Vertical

Correct : 1 Wrong : 0.25

भारत के राष्ट्रपति पर किसके द्वारा महाभियोग चलाया जा सकता है?

Options :

1. ✖ प्रधानमंत्री
2. ✔ संसद
3. ✖ उप-राष्ट्रपति
4. ✖ मुख्य न्यायाधीश

Question Number : 156 Question Id : 7368155814 Question Type : MCQ Option Shuffling : Yes Display Question Number : Yes
Single Line Question Option : No Option Orientation : Vertical

Correct : 1 Wrong : 0.25

Who received the Rajiv Gandhi Khel Ratna Award for the year 2015?

Options :

1. ✔ Sania Mirza
2. ✖ Yuvraj Singh
3. ✖ Rohit Sharma

4. ✖ Saina Nehwal

Question Number : 156 Question Id : 7368155814 Question Type : MCQ Option Shuffling : Yes Display Question Number : Yes
Single Line Question Option : No Option Orientation : Vertical

Correct : 1 Wrong : 0.25

राजीव गांधी खेल रत्न पुरस्कार, वर्ष 2015 के लिए किसे मिला था?

Options :

1. ✔ सानिया मिर्जा
2. ✖ युवराज सिंह
3. ✖ रोहित शर्मा
4. ✖ साइना नेहवाल

Question Number : 157 Question Id : 7368155815 Question Type : MCQ Option Shuffling : Yes Display Question Number : Yes
Single Line Question Option : No Option Orientation : Vertical

Correct : 1 Wrong : 0.25

Who is the winner of Femina Miss India contest held in 2015?

Options :

1. ✖ Smita Bhatt
2. ✔ Aditi Arya
3. ✖ Divya Rao
4. ✖ Tina Yadav

Question Number : 157 Question Id : 7368155815 Question Type : MCQ Option Shuffling : Yes Display Question Number : Yes
Single Line Question Option : No Option Orientation : Vertical

Correct : 1 Wrong : 0.25

वर्ष 2015 में फेमिना मिस इंडिया प्रतिस्पर्धा किसने जीता था?

Options :

1. ✖ स्मिता भट्ट
2. ✔ अदिती आर्य
3. ✖ दिव्या राव
4. ✖ टीना यादव

Question Number : 158 Question Id : 7368155816 Question Type : MCQ Option Shuffling : Yes Display Question Number : Yes
Single Line Question Option : No Option Orientation : Vertical

Correct : 1 Wrong : 0.25

Who won the Jnanpith Award for the year 2015?

Options :

1. ✔ Raghuveer Chaudhari
2. ✖ Ravuri Bharadwaj
3. ✖ C. Narayana Reddy
4. ✖ Bhalchandra Nemade

Question Number : 158 Question Id : 7368155816 Question Type : MCQ Option Shuffling : Yes Display Question Number : Yes
Single Line Question Option : No Option Orientation : Vertical

Correct : 1 Wrong : 0.25

वर्ष 2015 का ज्ञानपीठ पुरस्कार किसने जीता है?

Options :

1. ☒ रघुवीर चौधरी
2. ☐ रवुरी भारद्वाज
3. ☐ सी. नारायण रेड्डी
4. ☐ भालचंद्र नेमाडे

Question Number : 159 Question Id : 7368155817 Question Type : MCQ Option Shuffling : Yes Display Question Number : Yes
Single Line Question Option : No Option Orientation : Vertical

Correct : 1 Wrong : 0.25

Who won the Filmfare best actor in a leading role (male) award for the year 2015?

Options :

1. ☐ Salman Khan
2. ☐ Shah Rukh Khan
3. ☒ Ranveer Singh
4. ☐ Shahid Kapoor

Question Number : 159 Question Id : 7368155817 Question Type : MCQ Option Shuffling : Yes Display Question Number : Yes
Single Line Question Option : No Option Orientation : Vertical

Correct : 1 Wrong : 0.25

वर्ष 2015 में सर्वश्रेष्ठ अभिनेता श्रेणी के लिए फिल्मफेयर पुरस्कार किसने जीता था?

Options :

1. ☐ सलमान खान
2. ☐ शाहरुख खान
3. ☒ रणवीर सिंह
4. ☐ शाहिद कपूर

Question Number : 160 Question Id : 7368155818 Question Type : MCQ Option Shuffling : Yes Display Question Number : Yes
Single Line Question Option : No Option Orientation : Vertical

Correct : 1 Wrong : 0.25

Which is the second highest civilian award in India?

Options :

1. ☒ Padma Vibhushan
2. ☐ Padma Bhushan
3. ☐ Padmashree
4. ☐ Bharat Ratna

Question Number : 160 Question Id : 7368155818 Question Type : MCQ Option Shuffling : Yes Display Question Number : Yes
Single Line Question Option : No Option Orientation : Vertical

Correct : 1 Wrong : 0.25

निम्नलिखित में से कौनसा, भारत में द्वितीय सर्वोच्च नागरिक पुरस्कार है?

Options :

1. ☒ पद्म विभूषण
2. ☐ पद्म भूषण
3. ☐ पद्मश्री
4. ☐ भारत रत्न

Question Number : 161 Question Id : 7368155819 Question Type : MCQ Option Shuffling : Yes Display Question Number : Yes
Single Line Question Option : No Option Orientation : Vertical

Correct : 1 Wrong : 0.25

What is the autobiography of Michael Jackson titled as?

Options :

1. ☐ Guns and Roses
2. ☒ Moonwalk
3. ☐ Cat walk
4. ☐ Dancing Floor

Question Number : 161 Question Id : 7368155819 Question Type : MCQ Option Shuffling : Yes Display Question Number : Yes
Single Line Question Option : No Option Orientation : Vertical

Correct : 1 Wrong : 0.25

माइकल जैक्सन की आत्मकथा का शीर्षक क्या है?

Options :

1. ☐ गन्स एंड रोजेज
2. ☒ मून वॉक
3. ☐ कैट वॉक
4. ☐ डांसिंग फ्लोर

Question Number : 162 Question Id : 7368155820 Question Type : MCQ Option Shuffling : Yes Display Question Number : Yes
Single Line Question Option : No Option Orientation : Vertical

Correct : 1 Wrong : 0.25

Who is the author of the book 'Ignited Minds'?

Options :

1. ☒ A.P.J.Abdul Kalam
2. ☐ Shoba De
3. ☐ Ramachandra Guha
4. ☐ Ashwin Sanghi

Question Number : 162 Question Id : 7368155820 Question Type : MCQ Option Shuffling : Yes Display Question Number : Yes
Single Line Question Option : No Option Orientation : Vertical

Correct : 1 Wrong : 0.25

'इग्नाइटेड माइंड्स' नामक पुस्तक के लेखक कौन हैं?

Options :

1. ☒ ए.पी.जे. अब्दुल कलाम
2. ☐ शोभा डे
3. ☐ रामचन्द्र गुहा
4. ☐ अश्विन सांघी

Question Number : 163 Question Id : 7368155821 Question Type : MCQ Option Shuffling : Yes Display Question Number : Yes
Single Line Question Option : No Option Orientation : Vertical

Correct : 1 Wrong : 0.25

Who wrote the novel '2 States'?

Options :

1. ☐ Shoba De
2. ☒ Chetan Bhagat
3. ☐ Ruskin Bond
4. ☐ Salman Rushdie

Question Number : 163 Question Id : 7368155821 Question Type : MCQ Option Shuffling : Yes Display Question Number : Yes
Single Line Question Option : No Option Orientation : Vertical

Correct : 1 Wrong : 0.25

'टू स्टेट्स' नामक पुस्तक का लेखक कौन है?

Options :

1. ☐ शोभा डे
2. ☒ चेतन भगत
3. ☐ रस्किन बॉन्ड
4. ☐ सलमान रुश्दी

Question Number : 164 Question Id : 7368155822 Question Type : MCQ Option Shuffling : Yes Display Question Number : Yes
Single Line Question Option : No Option Orientation : Vertical

Correct : 1 Wrong : 0.25

Who is the author of the novel 'Guide'?

Options :

1. ☒ R.K.Narayan
2. ☐ Salman Rushdie
3. ☐ Srirangam Srinivasarao
4. ☐ Vikram Seth

Question Number : 164 Question Id : 7368155822 Question Type : MCQ Option Shuffling : Yes Display Question Number : Yes
Single Line Question Option : No Option Orientation : Vertical

Correct : 1 Wrong : 0.25

'गाइड' नामक प्रसिद्ध उपन्यास के लेखक कौन हैं?

Options :

1. ✓ आर. के. नारायण
2. ✗ सलमान रुश्दी
3. ✗ श्रीरंगम श्रीनिवास राव
4. ✗ विक्रम सेठ

Question Number : 165 Question Id : 7368155823 Question Type : MCQ Option Shuffling : Yes Display Question Number : Yes
Single Line Question Option : No Option Orientation : Vertical

Correct : 1 Wrong : 0.25

Who is the author of the novel 'The Golden Gate'?

Options :

1. ✗ Salman Rushdie
2. ✗ Kushwanth Singh
3. ✓ Vikram Seth
4. ✗ Girish Sanghi

Question Number : 165 Question Id : 7368155823 Question Type : MCQ Option Shuffling : Yes Display Question Number : Yes
Single Line Question Option : No Option Orientation : Vertical

Correct : 1 Wrong : 0.25

'गोल्डेन गेट' नामक पुस्तक के लेखक कौन हैं?

Options :

1. ✗ सलमान रुश्दी
2. ✗ खुशवंत सिंह
3. ✓ विक्रम सेठ
4. ✗ गिरीश सांघी

Question Number : 166 Question Id : 7368155824 Question Type : MCQ Option Shuffling : Yes Display Question Number : Yes
Single Line Question Option : No Option Orientation : Vertical

Correct : 1 Wrong : 0.25

From which Indian state did the 'Kuchipudi' dance form originate?

Options :

1. ✓ Andhra Pradesh
2. ✗ Maharashtra
3. ✗ Karnataka
4. ✗ Goa

Question Number : 166 Question Id : 7368155824 Question Type : MCQ Option Shuffling : Yes Display Question Number : Yes
Single Line Question Option : No Option Orientation : Vertical

Correct : 1 Wrong : 0.25

'कुचीपुडी' नृत्य का उद्गम भारत के किस राज्य से हुआ है?

Options :

1. ✓ आंध्र प्रदेश

2. ✖ महाराष्ट्र
3. ✖ कर्नाटक
4. ✖ गोवा

Question Number : 167 Question Id : 7368155825 Question Type : MCQ Option Shuffling : Yes Display Question Number : Yes
Single Line Question Option : No Option Orientation : Vertical

Correct : 1 Wrong : 0.25

‘Konkani’ is the official language of which Indian state?

Options :

1. ✖ Kerala
2. ✔ Goa
3. ✖ Maharashtra
4. ✖ Karnataka

Question Number : 167 Question Id : 7368155825 Question Type : MCQ Option Shuffling : Yes Display Question Number : Yes
Single Line Question Option : No Option Orientation : Vertical

Correct : 1 Wrong : 0.25

निम्नलिखित में से किस भारतीय राज्य में ‘कोंकणी’ आधिकारिक भाषा है?

Options :

1. ✖ केरल
2. ✔ गोवा
3. ✖ महाराष्ट्र
4. ✖ कर्नाटक

Question Number : 168 Question Id : 7368155826 Question Type : MCQ Option Shuffling : Yes Display Question Number : Yes
Single Line Question Option : No Option Orientation : Vertical

Correct : 1 Wrong : 0.25

Where is the ‘Hemis Gompa’ fair organized?

Options :

1. ✔ Ladakh
2. ✖ Mizoram
3. ✖ Arunachal Pradesh
4. ✖ Manipur

Question Number : 168 Question Id : 7368155826 Question Type : MCQ Option Shuffling : Yes Display Question Number : Yes
Single Line Question Option : No Option Orientation : Vertical

Correct : 1 Wrong : 0.25

निम्नलिखित में से किस राज्य में ‘हेमिस गोम्पा’ उत्सव मनाया जाता है?

Options :

1. ✔ लद्दाख
2. ✖ मिज़ोराम
3. ✖ अरुणाचल प्रदेश

4. ✖ मणिपुर

Question Number : 169 Question Id : 7368155827 Question Type : MCQ Option Shuffling : Yes Display Question Number : Yes
Single Line Question Option : No Option Orientation : Vertical

Correct : 1 Wrong : 0.25

The classical dance drama form 'Yakshagana' is popular in which Indian state?

Options :

1. ✖ Manipur
2. ✖ Andhra Pradesh
3. ✖ Goa
4. ✔ Karnataka

Question Number : 169 Question Id : 7368155827 Question Type : MCQ Option Shuffling : Yes Display Question Number : Yes
Single Line Question Option : No Option Orientation : Vertical

Correct : 1 Wrong : 0.25

'यक्षगान' नामक नृत्य रूप, भारत के किस राज्य में प्रसिद्ध है?

Options :

1. ✖ मणिपुर
2. ✖ आंध्र प्रदेश
3. ✖ गोवा
4. ✔ कर्नाटक

Question Number : 170 Question Id : 7368155828 Question Type : MCQ Option Shuffling : Yes Display Question Number : Yes
Single Line Question Option : No Option Orientation : Vertical

Correct : 1 Wrong : 0.25

Where did the traditional dance 'Talgadi' originate?

Options :

1. ✔ Goa
2. ✖ Maharashtra
3. ✖ Karnataka
4. ✖ Uttar Pradesh

Question Number : 170 Question Id : 7368155828 Question Type : MCQ Option Shuffling : Yes Display Question Number : Yes
Single Line Question Option : No Option Orientation : Vertical

Correct : 1 Wrong : 0.25

'तलगड़ी' नामक पारम्परिक भारतीय नृत्य का उद्गम कहां से हुआ है?

Options :

1. ✔ गोवा
2. ✖ महाराष्ट्र
3. ✖ कर्नाटक
4. ✖ उत्तर प्रदेश

Question Number : 171 Question Id : 7368155829 Question Type : MCQ Option Shuffling : Yes Display Question Number : Yes
Single Line Question Option : No Option Orientation : Vertical

Correct : 1 Wrong : 0.25

Who acts as the Chairman of Rajya Sabha?

Options :

1. ✖ President
2. ✖ Prime Minister
3. ✔ Vice-president
4. ✖ Minister of Parliamentary Affairs

Question Number : 171 Question Id : 7368155829 Question Type : MCQ Option Shuffling : Yes Display Question Number : Yes
Single Line Question Option : No Option Orientation : Vertical

Correct : 1 Wrong : 0.25

राज्य सभा के अध्यक्ष की भूमिका कौन निभाता है?

Options :

1. ✖ राष्ट्रपति
2. ✖ प्रधानमंत्री
3. ✔ उप-राष्ट्रपति
4. ✖ संसदीय मामलों के मंत्री

Question Number : 172 Question Id : 7368155830 Question Type : MCQ Option Shuffling : Yes Display Question Number : Yes
Single Line Question Option : No Option Orientation : Vertical

Correct : 1 Wrong : 0.25

Which Union Territory has the High Court of its own?

Options :

1. ✔ Delhi
2. ✖ Pondicherry
3. ✖ Chandigarh
4. ✖ Lakshadweep

Question Number : 172 Question Id : 7368155830 Question Type : MCQ Option Shuffling : Yes Display Question Number : Yes
Single Line Question Option : No Option Orientation : Vertical

Correct : 1 Wrong : 0.25

किस केन्द्र शासित प्रदेश का अपना स्वयं का न्यायालय है?

Options :

1. ✔ दिल्ली
2. ✖ पॉण्डिचेरी
3. ✖ चंडीगढ़
4. ✖ लक्षद्वीप

Question Number : 173 Question Id : 7368155831 Question Type : MCQ Option Shuffling : Yes Display Question Number : Yes
Single Line Question Option : No Option Orientation : Vertical

Correct : 1 Wrong : 0.25

To be eligible for Indian Citizenship, how many years a person needs to stay in India?

Options :

1. ✖ 20 years
2. ✖ 15 years
3. ✔ 10 years
4. ✖ 5 years

Question Number : 173 Question Id : 7368155831 Question Type : MCQ Option Shuffling : Yes Display Question Number : Yes
Single Line Question Option : No Option Orientation : Vertical

Correct : 1 Wrong : 0.25

भारतीय नागरिकता के योग्य बनने के लिए, किसी व्यक्ति को भारत में कितने वर्ष तक रहने की आवश्यकता है?

Options :

1. ✖ 20 वर्ष
2. ✖ 15 वर्ष
3. ✔ 10 वर्ष
4. ✖ 5 वर्ष

Question Number : 174 Question Id : 7368155832 Question Type : MCQ Option Shuffling : Yes Display Question Number : Yes
Single Line Question Option : No Option Orientation : Vertical

Correct : 1 Wrong : 0.25

What is the total number of Lok Sabha constituencies in Uttar Pradesh?

Options :

1. ✔ 80
2. ✖ 40
3. ✖ 25
4. ✖ 35

Question Number : 174 Question Id : 7368155832 Question Type : MCQ Option Shuffling : Yes Display Question Number : Yes
Single Line Question Option : No Option Orientation : Vertical

Correct : 1 Wrong : 0.25

उत्तर प्रदेश में लोकसभा निर्वाचन क्षेत्रों की कुल संख्या कितनी है?

Options :

1. ✔ 80
2. ✖ 40
3. ✖ 25
4. ✖ 35

Question Number : 175 Question Id : 7368155833 Question Type : MCQ Option Shuffling : Yes Display Question Number : Yes
Single Line Question Option : No Option Orientation : Vertical

Correct : 1 Wrong : 0.25

Who among the following has the distinction of being the longest serving speaker of Lok Sabha?

Options :

1. ✖ G. M. C. Balayogi
2. ✔ Bal Ram Jakhar
3. ✖ Neelam Sanjiva Reddy
4. ✖ Gurdial Singh Dhillon

Question Number : 175 Question Id : 7368155833 Question Type : MCQ Option Shuffling : Yes Display Question Number : Yes
Single Line Question Option : No Option Orientation : Vertical

Correct : 1 Wrong : 0.25

लोकसभा के सबसे अधिक समय तक कार्यरत अध्यक्ष कौन रहे हैं?

Options :

1. ✖ जी. एम. सी. बालयोगी
2. ✔ बलराम जाखड़
3. ✖ नीलम संजीव रेड्डी
4. ✖ गुरदयाल सिंह दिल्ली

Question Number : 176 Question Id : 7368155834 Question Type : MCQ Option Shuffling : Yes Display Question Number : Yes
Single Line Question Option : No Option Orientation : Vertical

Correct : 1 Wrong : 0.25

Who is the present Speaker of Lok Sabha?

Options :

1. ✔ Sumitra Mahajan
2. ✖ Meira Kumar
3. ✖ Somnath Chatterjee
4. ✖ Manohar Joshi

Question Number : 176 Question Id : 7368155834 Question Type : MCQ Option Shuffling : Yes Display Question Number : Yes
Single Line Question Option : No Option Orientation : Vertical

Correct : 1 Wrong : 0.25

लोकसभा के वर्तमान अध्यक्ष कौन हैं?

Options :

1. ✔ सुमित्रा महाजन
2. ✖ मीरा कुमार
3. ✖ सोमनाथ चटर्जी
4. ✖ मनोहर जोशी

Question Number : 177 Question Id : 7368155835 Question Type : MCQ Option Shuffling : Yes Display Question Number : Yes
Single Line Question Option : No Option Orientation : Vertical

Correct : 1 Wrong : 0.25

Who is the present Vice-president of India?

Options :

1. ✖ Meira Kumar
2. ✔ Hamid Ansari
3. ✖ Pratibha Patel
4. ✖ I. K. Gujral

Question Number : 177 Question Id : 7368155835 Question Type : MCQ Option Shuffling : Yes Display Question Number : Yes
Single Line Question Option : No Option Orientation : Vertical

Correct : 1 Wrong : 0.25

भारत के वर्तमान उप-राष्ट्रपति कौन हैं?

Options :

1. ✖ मीरा कुमार
2. ✔ हमिद अंसारी
3. ✖ प्रतिभा पटेल
4. ✖ आई. के. गुजराल

Question Number : 178 Question Id : 7368155836 Question Type : MCQ Option Shuffling : Yes Display Question Number : Yes
Single Line Question Option : No Option Orientation : Vertical

Correct : 1 Wrong : 0.25

Who is the present Union minister of Science and Technology?

Options :

1. ✔ Harsha Vardhan
2. ✖ Radha Mohan Singh
3. ✖ Anant Geete
4. ✖ Ravi Shankar Prasad

Question Number : 178 Question Id : 7368155836 Question Type : MCQ Option Shuffling : Yes Display Question Number : Yes
Single Line Question Option : No Option Orientation : Vertical

Correct : 1 Wrong : 0.25

वर्तमान केन्द्रीय विज्ञान और प्रौद्योगिकी मंत्री कौन हैं?

Options :

1. ✔ हर्ष वर्धन
2. ✖ राधा मोहन सिंह
3. ✖ अनंत गीते
4. ✖ रवि शंकर प्रसाद

Question Number : 179 Question Id : 7368155837 Question Type : MCQ Option Shuffling : Yes Display Question Number : Yes
Single Line Question Option : No Option Orientation : Vertical

Correct : 1 Wrong : 0.25

Which one of the following committee was appointed to estimate poverty in India?

Options :

1. ✖ Balwant Rai Committee
2. ✖ Sachar Committee
3. ✖ Swaminathan Committee
4. ✔ Lakdawala Committee

Question Number : 179 Question Id : 7368155837 Question Type : MCQ Option Shuffling : Yes Display Question Number : Yes
Single Line Question Option : No Option Orientation : Vertical

Correct : 1 Wrong : 0.25

निम्नलिखित में किस समिति की नियुक्ति - निर्धनता का आकलन करने के लिए की गई थी?

Options :

1. ✖ बलवंत राय समिति
2. ✖ सचर समिति
3. ✖ स्वामीनाथन समिति
4. ✔ लकड़वाला समिति

Question Number : 180 Question Id : 7368155838 Question Type : MCQ Option Shuffling : Yes Display Question Number : Yes
Single Line Question Option : No Option Orientation : Vertical

Correct : 1 Wrong : 0.25

Who is the present Director of the Central Bureau of Investigation (CBI)?

Options :

1. ✖ Ranjit Sinha
2. ✔ Anil Kumar Sinha
3. ✖ P. C. Sharma
4. ✖ T. N. Mishra

Question Number : 180 Question Id : 7368155838 Question Type : MCQ Option Shuffling : Yes Display Question Number : Yes
Single Line Question Option : No Option Orientation : Vertical

Correct : 1 Wrong : 0.25

केन्द्रीय अन्वेषण ब्यूरो (IBC) के वर्तमान निदेशक कौन हैं?

Options :

1. ✖ रंजीत सिन्हा
2. ✔ अनिल कुमार सिन्हा
3. ✖ पी. सी. शर्मा
4. ✖ टी. एन. मिश्रा

Question Number : 181 Question Id : 7368155839 Question Type : MCQ Option Shuffling : Yes Display Question Number : Yes
Single Line Question Option : No Option Orientation : Vertical

Correct : 1 Wrong : 0.25

What was Narasimham Committee appointed for?

Options :

1. ✖ Tax Reforms

2. ✖ Tehelka Tapes
3. ✖ Population Policy
4. ✔ Banking Sector Reforms

Question Number : 181 Question Id : 7368155839 Question Type : MCQ Option Shuffling : Yes Display Question Number : Yes
Single Line Question Option : No Option Orientation : Vertical

Correct : 1 Wrong : 0.25

'नरसिम्हम समिति' की नियुक्ति किसलिए की गई है?

Options :

1. ✖ कर सुधार
2. ✖ तहलका टेप
3. ✖ जनसंख्या पालिसी
4. ✔ बैंकिंग सुधार

Question Number : 182 Question Id : 7368155840 Question Type : MCQ Option Shuffling : Yes Display Question Number : Yes
Single Line Question Option : No Option Orientation : Vertical

Correct : 1 Wrong : 0.25

Where is the Banker's Training College located in India?

Options :

1. ✔ Mumbai
2. ✖ Chennai
3. ✖ New Delhi
4. ✖ Kolkata

Question Number : 182 Question Id : 7368155840 Question Type : MCQ Option Shuffling : Yes Display Question Number : Yes
Single Line Question Option : No Option Orientation : Vertical

Correct : 1 Wrong : 0.25

बैंकर्स प्रशिक्षण महाविद्यालय - भारत में कहाँ पर स्थित है?

Options :

1. ✔ मुंबई
2. ✖ चेन्नई
3. ✖ नई दिल्ली
4. ✖ कोलकाता

Question Number : 183 Question Id : 7368155841 Question Type : MCQ Option Shuffling : Yes Display Question Number : Yes
Single Line Question Option : No Option Orientation : Vertical

Correct : 1 Wrong : 0.25

In which year was the Reserve Bank of India nationalised?

Options :

1. ✖ 1955
2. ✖ 1945

3. ✖ 1935

4. ✔ 1949

Question Number : 183 Question Id : 7368155841 Question Type : MCQ Option Shuffling : Yes Display Question Number : Yes
Single Line Question Option : No Option Orientation : Vertical

Correct : 1 Wrong : 0.25

भारतीय रिजर्व बैंक का राष्ट्रीयकरण किस वर्ष में किया गया था?

Options :

1. ✖ 1955

2. ✖ 1945

3. ✖ 1935

4. ✔ 1949

Question Number : 184 Question Id : 7368155842 Question Type : MCQ Option Shuffling : Yes Display Question Number : Yes
Single Line Question Option : No Option Orientation : Vertical

Correct : 1 Wrong : 0.25

What was the period of the 4th five year plan?

Options :

1. ✔ 1969 to 1974

2. ✖ 1968 to 1973

3. ✖ 1955 to 1960

4. ✖ 1961 to 1965

Question Number : 184 Question Id : 7368155842 Question Type : MCQ Option Shuffling : Yes Display Question Number : Yes
Single Line Question Option : No Option Orientation : Vertical

Correct : 1 Wrong : 0.25

चौथी पंच वर्षीय योजना की अवधि है:

Options :

1. ✔ 1969 से 1974

2. ✖ 1968 से 1973

3. ✖ 1955 से 1960

4. ✖ 1961 से 1965

Question Number : 185 Question Id : 7368155843 Question Type : MCQ Option Shuffling : Yes Display Question Number : Yes
Single Line Question Option : No Option Orientation : Vertical

Correct : 1 Wrong : 0.25

'Grey Revolution' refers to increased production of

Options :

1. ✖ Coal

2. ✔ Wool

3. ✖ Fruits

4. ✖ Fishes

Question Number : 185 Question Id : 7368155843 Question Type : MCQ Option Shuffling : Yes Display Question Number : Yes
Single Line Question Option : No Option Orientation : Vertical

Correct : 1 Wrong : 0.25

‘ग्रे क्रांति’ किस चीज के उत्पादन में वृद्धि से संबंधित है?

Options :

1. ✖ कोयला
2. ✔ ऊन
3. ✖ फल
4. ✖ मछलियाँ

Question Number : 186 Question Id : 7368155844 Question Type : MCQ Option Shuffling : Yes Display Question Number : Yes
Single Line Question Option : No Option Orientation : Vertical

Correct : 1 Wrong : 0.25

Which continent does not have a desert?

Options :

1. ✔ Europe
2. ✖ Australia
3. ✖ Asia
4. ✖ North America

Question Number : 186 Question Id : 7368155844 Question Type : MCQ Option Shuffling : Yes Display Question Number : Yes
Single Line Question Option : No Option Orientation : Vertical

Correct : 1 Wrong : 0.25

कौन से महाद्वीप में कोई मरुस्थल नहीं है?

Options :

1. ✔ यूरोप
2. ✖ ऑस्ट्रेलिया
3. ✖ एशिया
4. ✖ उत्तर अमेरिका

Question Number : 187 Question Id : 7368155845 Question Type : MCQ Option Shuffling : Yes Display Question Number : Yes
Single Line Question Option : No Option Orientation : Vertical

Correct : 1 Wrong : 0.25

Which one of the following is the longest continuous mountain range in the world?

Options :

1. ✖ The Nilgiris
2. ✖ The Alps
3. ✖ The Himalayas
4. ✔ The Andes

Question Number : 187 Question Id : 7368155845 Question Type : MCQ Option Shuffling : Yes Display Question Number : Yes
Single Line Question Option : No Option Orientation : Vertical

Correct : 1 Wrong : 0.25

निम्नलिखित में से कौन, विश्व की सबसे लम्बी सतत पर्वत शृंखला है?

Options :

1. ✖ नीलगिरी
2. ✖ आल्पस
3. ✖ हिमालय
4. ✔ एंडीज

Question Number : 188 Question Id : 7368155846 Question Type : MCQ Option Shuffling : Yes Display Question Number : Yes
Single Line Question Option : No Option Orientation : Vertical

Correct : 1 Wrong : 0.25

Where is 'Bannerghatta National Park' located?

Options :

1. ✖ Nainital
2. ✔ Bengaluru
3. ✖ Dehradun
4. ✖ Guwahati

Question Number : 188 Question Id : 7368155846 Question Type : MCQ Option Shuffling : Yes Display Question Number : Yes
Single Line Question Option : No Option Orientation : Vertical

Correct : 1 Wrong : 0.25

'बानेरघट्टा राष्ट्रीय पार्क' कहाँ पर स्थित है?

Options :

1. ✖ नैनीताल
2. ✔ बैंगलोर
3. ✖ देहरादून
4. ✖ गुवाहाटी

Question Number : 189 Question Id : 7368155847 Question Type : MCQ Option Shuffling : Yes Display Question Number : Yes
Single Line Question Option : No Option Orientation : Vertical

Correct : 1 Wrong : 0.25

The Gulf of Mannar is along the coast of

Options :

1. ✖ Andhra Pradesh
2. ✖ Maharashtra
3. ✔ Tamil Nadu
4. ✖ Kerala

Question Number : 189 Question Id : 7368155847 Question Type : MCQ Option Shuffling : Yes Display Question Number : Yes
Single Line Question Option : No Option Orientation : Vertical

Correct : 1 Wrong : 0.25

मन्नार की खाड़ी किस तटरेखा के समीप है?

Options :

1. ✖ आंध्र प्रदेश
2. ✖ महाराष्ट्र
3. ✔ तमिल नाडु
4. ✖ केरल

Question Number : 190 Question Id : 7368155848 Question Type : MCQ Option Shuffling : Yes Display Question Number : Yes
Single Line Question Option : No Option Orientation : Vertical

Correct : 1 Wrong : 0.25

With how many states does Madhya Pradesh share its border?

Options :

1. ✖ 7
2. ✖ 4
3. ✖ 3
4. ✔ 5

Question Number : 190 Question Id : 7368155848 Question Type : MCQ Option Shuffling : Yes Display Question Number : Yes
Single Line Question Option : No Option Orientation : Vertical

Correct : 1 Wrong : 0.25

मध्यप्रदेश राज्य की सीमा कितने राज्यों से जुड़ी हुई है?

Options :

1. ✖ 7
2. ✖ 4
3. ✖ 3
4. ✔ 5

Question Number : 191 Question Id : 7368155849 Question Type : MCQ Option Shuffling : Yes Display Question Number : Yes
Single Line Question Option : No Option Orientation : Vertical

Correct : 1 Wrong : 0.25

Which was the first metal used in the Indus valley civilization?

Options :

1. ✖ Aluminum
2. ✖ Platinum
3. ✖ Gold
4. ✔ Copper

Question Number : 191 Question Id : 7368155849 Question Type : MCQ Option Shuffling : Yes Display Question Number : Yes
Single Line Question Option : No Option Orientation : Vertical

Correct : 1 Wrong : 0.25

सिंधू घाटी सभ्यता में प्रयोग की जाने वाली प्रथम धातु कौन सी है?

Options :

1. ✖ अल्युमीनियम
2. ✖ प्लैटिनम

3. ✖ सोना

4. ✔ तांबा

Question Number : 192 Question Id : 7368155850 Question Type : MCQ Option Shuffling : Yes Display Question Number : Yes
Single Line Question Option : No Option Orientation : Vertical

Correct : 1 Wrong : 0.25

The teachings of Guru Nanak is compiled in

Options :

1. ✔ Adigranth

2. ✖ Virupaksha

3. ✖ Zinda Avesta

4. ✖ Thirthankara

Question Number : 192 Question Id : 7368155850 Question Type : MCQ Option Shuffling : Yes Display Question Number : Yes
Single Line Question Option : No Option Orientation : Vertical

Correct : 1 Wrong : 0.25

गुरु नानक की शिक्षाओं को किसमें संकलित किया गया है?

Options :

1. ✔ आदिग्रंथ

2. ✖ विरूपक्ष

3. ✖ जिंदा अवेस्ता

4. ✖ तीर्थाकर

Question Number : 193 Question Id : 7368155851 Question Type : MCQ Option Shuffling : Yes Display Question Number : Yes
Single Line Question Option : No Option Orientation : Vertical

Correct : 1 Wrong : 0.25

Who was mainly responsible for the 1857 revolt?

Options :

1. ✖ Lord Moutbatten

2. ✖ Lord Curzon

3. ✖ General Dior

4. ✔ Lord Dalhousie

Question Number : 193 Question Id : 7368155851 Question Type : MCQ Option Shuffling : Yes Display Question Number : Yes
Single Line Question Option : No Option Orientation : Vertical

Correct : 1 Wrong : 0.25

1857 विद्रोह के लिए मुख्य रूप से कौन जिम्मेदार था?

Options :

1. ✖ लॉर्ड माउंटबेटेन

2. ✖ लॉर्ड कर्जन

3. ✖ जनरल डायर

4. ✓ लार्ड डलहौजी

Question Number : 194 Question Id : 7368155852 Question Type : MCQ Option Shuffling : Yes Display Question Number : Yes
Single Line Question Option : No Option Orientation : Vertical

Correct : 1 Wrong : 0.25

When did the non-cooperation movement start?

Options :

- 1. ✗ 1910
- 2. ✗ 1930
- 3. ✗ 1940
- 4. ✓ 1920

Question Number : 194 Question Id : 7368155852 Question Type : MCQ Option Shuffling : Yes Display Question Number : Yes
Single Line Question Option : No Option Orientation : Vertical

Correct : 1 Wrong : 0.25

असहयोग आन्दोलन का आरम्भ कब हुआ था?

Options :

- 1. ✗ 1910
- 2. ✗ 1930
- 3. ✗ 1940
- 4. ✓ 1920

Question Number : 195 Question Id : 7368155853 Question Type : MCQ Option Shuffling : Yes Display Question Number : Yes
Single Line Question Option : No Option Orientation : Vertical

Correct : 1 Wrong : 0.25

Who founded the Kakatiya Dynasty?

Options :

- 1. ✗ Rajendra Chola
- 2. ✗ Kakati
- 3. ✓ Beta I
- 4. ✗ Ganapati Deva

Question Number : 195 Question Id : 7368155853 Question Type : MCQ Option Shuffling : Yes Display Question Number : Yes
Single Line Question Option : No Option Orientation : Vertical

Correct : 1 Wrong : 0.25

काकतीय वंश के संस्थापक कौन थे?

Options :

- 1. ✗ राजेन्द्र चोला
- 2. ✗ काकाती
- 3. ✓ बेटा I
- 4. ✗ गणपति देवा

Question Number : 196 Question Id : 7368155854 Question Type : MCQ Option Shuffling : Yes Display Question Number : Yes
Single Line Question Option : No Option Orientation : Vertical

Correct : 1 Wrong : 0.25

The legendary lawn tennis player Bjorn Borg is native of?

Options :

1. ✓ Sweden
2. ✗ Spain
3. ✗ France
4. ✗ Serbia

Question Number : 196 Question Id : 7368155854 Question Type : MCQ Option Shuffling : Yes Display Question Number : Yes
Single Line Question Option : No Option Orientation : Vertical

Correct : 1 Wrong : 0.25

लॉन टेनिस के प्रसिद्ध खिलाड़ी ब्योर्न बॉर्ग (Bjorn Borg) मूलरूप से किस देश के हैं?

Options :

1. ✓ स्वीडन
2. ✗ स्पेन
3. ✗ फ्रांस
4. ✗ सर्बिया

Question Number : 197 Question Id : 7368155855 Question Type : MCQ Option Shuffling : Yes Display Question Number : Yes
Single Line Question Option : No Option Orientation : Vertical

Correct : 1 Wrong : 0.25

With which sport is Sultan Azlan Shah Cup associated?

Options :

1. ✗ Football
2. ✓ Hockey
3. ✗ Cricket
4. ✗ Badminton

Question Number : 197 Question Id : 7368155855 Question Type : MCQ Option Shuffling : Yes Display Question Number : Yes
Single Line Question Option : No Option Orientation : Vertical

Correct : 1 Wrong : 0.25

सुल्तान अजलन शाह कप का संबंध किस खेल से है?

Options :

1. ✗ फुटबॉल
2. ✓ हॉकी
3. ✗ क्रिकेट
4. ✗ बैडमिंटन

Question Number : 198 Question Id : 7368155856 Question Type : MCQ Option Shuffling : Yes Display Question Number : Yes
Single Line Question Option : No Option Orientation : Vertical

Correct : 1 Wrong : 0.25

What is the number of players in a basketball team?

Options :

1. ✖ 9
2. ✖ 6
3. ✖ 7
4. ✔ 5

Question Number : 198 Question Id : 7368155856 Question Type : MCQ Option Shuffling : Yes Display Question Number : Yes
Single Line Question Option : No Option Orientation : Vertical

Correct : 1 Wrong : 0.25

बास्केट बॉल दल में कितने खिलाड़ी होते हैं?

Options :

1. ✖ 9
2. ✖ 6
3. ✖ 7
4. ✔ 5

Question Number : 199 Question Id : 7368155857 Question Type : MCQ Option Shuffling : Yes Display Question Number : Yes
Single Line Question Option : No Option Orientation : Vertical

Correct : 1 Wrong : 0.25

With which sport is Irani Trophy associated?

Options :

1. ✖ Badminton
2. ✖ Kabaddi
3. ✖ Hockey
4. ✔ Cricket

Question Number : 199 Question Id : 7368155857 Question Type : MCQ Option Shuffling : Yes Display Question Number : Yes
Single Line Question Option : No Option Orientation : Vertical

Correct : 1 Wrong : 0.25

ईरानी ट्रॉफी किस खेल से संबंधित है?

Options :

1. ✖ बैडमिंटन
2. ✖ कबड्डी
3. ✖ हॉकी
4. ✔ क्रिकेट

Question Number : 200 Question Id : 7368155858 Question Type : MCQ Option Shuffling : Yes Display Question Number : Yes
Single Line Question Option : No Option Orientation : Vertical

Correct : 1 Wrong : 0.25

Where were the 2014 Olympic Winter Games held?

Options :

1. ✖ Athens

2. ✖ Buenos Aires

3. ✔ Sochi

4. ✖ Qatar

Question Number : 200 Question Id : 7368155858 Question Type : MCQ Option Shuffling : Yes Display Question Number : Yes
Single Line Question Option : No Option Orientation : Vertical

Correct : 1 Wrong : 0.25

2014 शीतकालीन ओलंपिक खेलों का आयोजन कहाँ किया गया था?

Options :

1. ✖ एथेंस

2. ✖ ब्यूनस आयर्स

3. ✔ सोची

4. ✖ कतर