

Name :

Roll No. :

Invigilator's Signature :

CS/B.Tech (CSE/IT)/SEM-4/M-401/2010

2010

MATHEMATICS

Time Allotted : 3 Hours

Full Marks : 70

The figures in the margin indicate full marks.

Candidates are required to give their answers in their own words as far as practicable.

GROUP - A

(Multiple Choice Type Questions)

1. Choose the correct alternatives for any ten of the following :

10 × 1 = 10

- i) The generators of the cyclic group $(\mathbb{Z}, +)$ are
- a) 1, -1 b) 0, 1
- c) 0, -1 d) 2, -2.
- ii) The mapping $f: \mathbb{R} \rightarrow \mathbb{R}$ given by $f(x) = |x|$, $x \in \mathbb{R}$ is
- a) Injective b) Surjective
- c) Bijective d) None of these.
- iii) Let S be a finite set of n distinct elements. The number of bijective mapping from S to S is
- a) n^2 b) $n!$
- c) 2^n d) None of these.

CS/B.Tech (CSE/IT)/SEM-4/M-401/2010

- iv) If three Boolean variables x , y and z are defined on Boolean Algebra B , then which one of the following is a fundamental product ?
- a) $xy'z$ b) xy
c) $xy(x+y)$ d) none of these.
- v) If G is binary tree on n vertices, the G has edges
- a) $n(n-1)$ b) $n-1$
c) n d) $\frac{n(n-1)}{2}$
- vi) Solution of the recurrence relation $S_n = 2S_{n-1}$ with $S_0 = 1$ is $S_n =$
- a) 2^n b) 2^{n-1}
c) 2^{n+1} d) none of these.
- vii) A complete graph is
- a) regular b) connected simple
c) circuit d) planar graph.
- viii) On the set $A = \{ 1, 2, 3 \}$, the relation $R = \{ (2, 1), (1, 2), (3, 3) \}$. Then R is
- a) symmetric b) reflexive
c) transitive d) not a relation at all.
- ix) In the additive group Z_6 the order of the element $[4]$ is
- a) 0 b) 2
c) 3 d) 6.

CS/B.Tech (CSE/IT)/SEM-4/M-401/2010

- x) Let G be a group and $a \in G$. If $o(a) = 17$, then $o(a^8)$ is
- a) 17 b) 16
c) 8 d) 5.
- xi) If S and T are two subgroups of a group G , then which of the following is a subgroup?
- a) $S \cup T$ b) $S \cap T$
c) $S - T$ d) $G - S$.
- xii) The dual of a planar graph is dual. It is
- a) True b) False.
- xiii) A binary tree should have at least
- a) one vertex b) two vertices
c) three vertices d) four vertices.
- xiv) A connected graph is Eulerian iff it has no vertex of odd degree. It is
- a) True b) False.
- xv) The number of idempotent elements in Z is
- a) 0 b) 1
c) 2 d) none of these.

GROUP - B

(Short Answer Type Questions)

Answer any *three* of the following. 3 × 5 = 15

2. Let $G = \{ (a, b) : a \neq 0, b \in R \}$ and $*$ be a binary composition defined on G by $(a, b) * (c, d) = (ac, bc + d)$. Show that $(G, *)$ is a non Abelian group.
3. Show that for any two subgroups H and K of a group G , $H \cap K$ is also a subgroup of G .

CS/B.Tech (CSE/IT)/SEM-4/M-401/2010

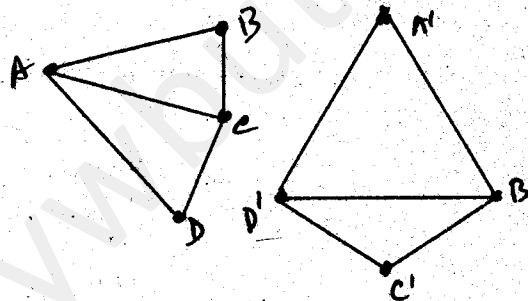
4. Let G be a group, if $a, b \in G$ such that $a^4 = e$, the identity element of G and $ab = ba^2$, prove that $a = e$.
5. Prove that every cyclic group is an Abelian group.
6. Show that the mapping $F : (Z, \bullet) \rightarrow (R, \bullet)$ defined by $f(x) = x^2 \forall x \in Z$ is a monomorphism but not isomorphism.
7. If in a ring R with unity, $(xy)^2 = x^2 y^2 \forall x, y \in R$, then show that R is a commutative.

GROUP - C

(Long Answer Type Questions)

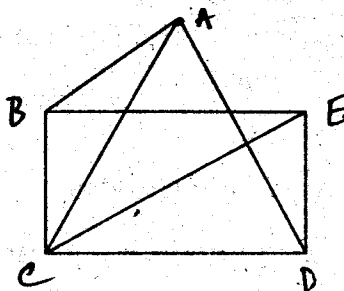
Answer any three of the following. $3 \times 15 = 45$

8. a) Examine whether the following two graphs are isomorphic.



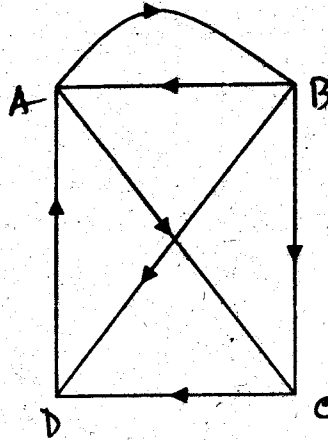
5

- b) Draw the dual of the graph.



5

- c) Determine the adjacency matrix of the following di-graph :



5

9. a) Construct a simple logic circuit which would satisfy the truth table.

x	y	f
1	1	1
0	1	1
1	0	0
0	0	1

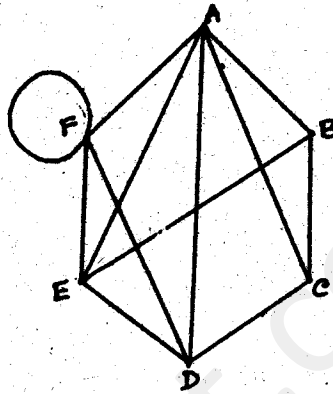
5

- b) Prove that a graph G has a spanning tree if and only if G is connected.

5

CS/B.Tech (CSE/IT)/SEM-4/M-401/2010

- c) Find the minimal spanning tree by Kruskal's Algorithm from the following graph G :



5

10. a) Consider the lattice $L = \{ 1, 2, 3, 4, 6, 12 \}$, the divisors of 12 ordered by divisibility. Find the lower and upper bound of L . Is L a complemented lattice ?

5

- b) For any Boolean Algebra, show that.

$$(xy' + xz') + x' = (x' + y + z)(x' + y + z')(x' + y' + z')$$

5

- c) Using generating function solve the recurrence relation.

$$a_n - 7a_{n-1} + 10a_{n-2} = 0, \text{ for } n > 1 \text{ and } a_0 = 3.$$

$$a_1 = 3.$$

5

11. a) Prove that the number of vertices in a binary tree is always odd. 5

b) Find the truth table of the Boolean function

$$f = z'xy + xy' + y. \quad 5$$

c) Prove that a complete graph with n vertices consist of $\frac{n(n-1)}{2}$ number of edges. 5

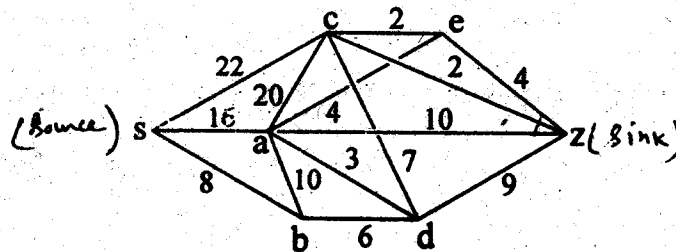
12. a) Prove that the identity elements and the inverse of an element in a group is unique. 5

b) Prove that in a group $(G, *)$, $(a * b)^{-1} = b^{-1} * a^{-1}$. 5

c) Prove that the set of matrices

$H = \left\{ \begin{pmatrix} x & 0 \\ 0 & x \end{pmatrix} : x \in R, x \neq 0 \right\}$ forms a normal subgroup of $GL(2, R)$, the group of all real non-singular 2×2 matrices under multiplication. 5

13. a) Using Ford-Fulkerson's algorithm, find the maximum flow in the following network :



8

CS/B:Tech (CSE/IT)/SEM-4/M-401/2010

b) Using Floyd's algorithm, find the shortest path between

i) w_2 and w_6

ii) w_1 and w_6 .

