

Roll No.....

Total No. of Questions : 09]

[Total No. of Pages : 03

Paper ID [A0604]

(Please fill this Paper ID in OMR Sheet)

B.Tech. (Sem. - 3rd)

SOLID MECHANICS (CE - 207)

Time : 03 Hours

Maximum Marks : 60

Instruction to Candidates:

- 1) Section - A is **Compulsory**.
- 2) Attempt any **Four** questions from Section - B.
- 3) Attempt any **Two** questions from Section - C.

Section - A

Q1)

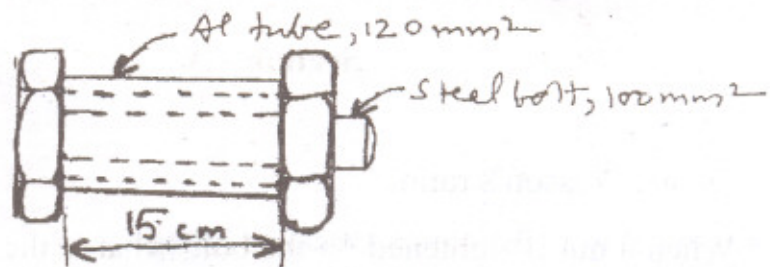
(10 × 2 = 20)

- a) Define Poisson's ratio.
- b) When a nut is tightened on the bolt, what is the nature of stress in the bolt?
- c) What do principal stresses mean?
- d) What is the nature of variation of bending moment due to UDL?
- e) What does neutral axis of a beam mean?
- f) Write the expression for maximum deflection of a simply supported beam of span l carrying a concentrated load W at the centre of the beam.
- g) Two shafts having same length and material are joined in series. If the ratio of their diameters is 2, then what is the ratio of their shear stresses?
- h) Write the torsion formula for circular shafts, explaining each term.
- i) Define resilience.
- j) Differentiate between a column and strut.

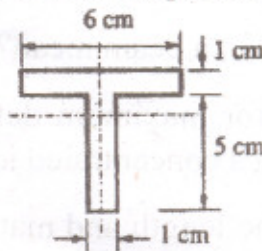
Section - B

(4 × 5 = 20)

- Q2)** Discuss briefly the theories of failure for brittle material.
- Q3)** A solid steel propeller shaft transmits 50 kW of power at 500 rpm without exceeding the shear stress of 80 MPa or twisting through more than 2° in a length of 2 m. Compute the smallest acceptable diameter of the shaft. Use $G = 83 \text{ GPa}$.
- Q4)** An aluminium tube is axially compressed between a nut and a steel bolt (Figure given below). If the tube carries the axial compressive stress of 20 MPa at 100°C, determine the axial stresses in the tube and the bolt at 150°C. Take $E_{\text{al}} = 70 \text{ GPa}$, $\alpha_{\text{al}} = 23.2 \times 10^{-6}/^\circ\text{C}$, $E_{\text{st}} = 200 \text{ GPa}$, $\alpha_{\text{st}} = 11.7 \times 10^{-6}/^\circ\text{C}$.



- Q5)** A beam having the T-section as shown in figure below is subjected to a bending moment of 24 kN-m about the horizontal axis. Find the maximum tensile and compressive bending stresses developed in the beam.



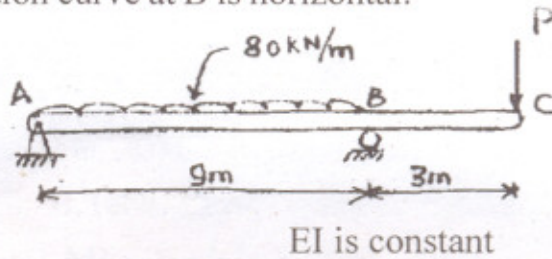
- Q6)** An aluminium tube of length 8 m is used as a column with hinged ends carrying a 1.2 kN axial compressive load. If the outer diameter of the tube is 50 mm, compute the limiting value of the inner diameter that would be safe against buckling. Use $E = 70 \text{ GPa}$ for aluminium.

Section - C

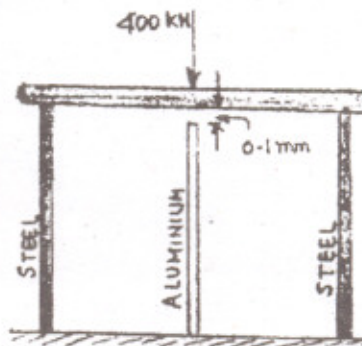
(2 × 10 = 20)

- Q7)** The simply supported beam ABC (Figure given below) carries the uniformly distributed load between its supports and the concentrated load P at end C. Find the value of P for which

- (a) There is no deflection at C.
 (b) The deflection curve at B is horizontal.



- Q8)** Before the 400 kN load is applied, the rigid platform rests on two steel bars, each of cross-sectional area 1200 mm^2 , as shown in figure below. The cross-sectional area of the aluminium bar is 2400 mm^2 . Compute the stress in the aluminium bar after the 400 kN load is applied. Use $E = 200 \text{ GPa}$ for steel and $E = 70 \text{ GPa}$ for aluminium. Neglect the weight of the platform.



- Q9)** Draw the axial force; shear force and bending moment diagrams for the beam ABCD shown in figure below. Clearly indicate the values at important points. $AB = BC = CD = 2 \text{ m}$.

