

SESSION - 1



Graduate Aptitude Test in Engineering

Notations :

- Options shown in green color and with ✓ icon are correct.
- Options shown in red color and with ✗ icon are incorrect.

Question Paper Name: CS: COMPUTER SCIENCE AND INFORMATION TECHNOLOGY 7th Feb Shift1
Number of Questions: 65
Total Marks: 100.0

Wrong answer for MCQ will result in negative marks, (-1/3) for 1 mark Questions and (-2/3) for 2 marks Questions.

General Aptitude

Number of Questions: 10
Section Marks: 15.0

Q.1 to Q.5 carry 1 mark each & Q.6 to Q.10 carry 2 marks each.

Question Number : 1 Question Type : MCQ

Didn't you buy _____ when you went shopping?

- (A) any paper (B) much paper (C) no paper (D) a few paper

Options :

- ✓ A
- ✗ B
- ✗ C
- ✗ D

Question Number : 2 Question Type : MCQ

Which of the following options is the closest in meaning to the sentence below?

She enjoyed herself immensely at the party.

- (A) She had a terrible time at the party
(B) She had a horrible time at the party
(C) She had a terrific time at the party
(D) She had a terrifying time at the party

Options :

- ✗ A
- ✗ B
- ✓ C
- ✗ D



www.questionpaperz.in
Unfold Every Question

Question Number : 3 Question Type : MCQ

Which one of the following combinations is incorrect?

- (A) Acquiescence - Submission
- (B) Wheedle - Roundabout
- (C) Flippancy - Lightness
- (D) Profligate - Extravagant

Options :

- 1. ✘ A
- 2. ✔ B
- 3. ✘ C
- 4. ✘ D

Question Number : 4 Question Type : MCQ

Based on the given statements, select the most appropriate option to solve the given question.

If two floors in a certain building are 9 feet apart, how many steps are there in a set of stairs that extends from the first floor to the second floor of the building?

Statements:

- (I) Each step is $\frac{3}{4}$ foot high.
- (II) Each step is 1 foot wide.

- (A) Statement I alone is sufficient, but statement II alone is not sufficient.
- (B) Statement II alone is sufficient, but statement I alone is not sufficient.
- (C) Both statements together are sufficient, but neither statement alone is sufficient.
- (D) Statement I and II together are not sufficient.

Options :

- 1. ✔ A
- 2. ✘ B
- 3. ✘ C
- 4. ✘ D

Question Number : 5 Question Type : MCQ

Given Set A = {2, 3, 4, 5} and Set B = {11, 12, 13, 14, 15}, two numbers are randomly selected, one from each set. What is the probability that the sum of the two numbers equals 16?

- (A) 0.20
- (B) 0.25
- (C) 0.30
- (D) 0.33

Options :

- 1. ✔ A
- 2. ✘ B
- 3. ✘ C
- 4. ✘ D

Question Number : 6 Question Type : MCQ



Select the alternative meaning of the underlined part of the sentence.

The chain snatchers took to their heels when the police party arrived.

- (A) took shelter in a thick jungle
- (B) open indiscriminate fire
- (C) took to flight
- (D) unconditionally surrendered

Options :

- 1. ✘ A
- 2. ✘ B
- 3. ✔ C
- 4. ✘ D

Question Number : 7 Question Type : MCQ

The given statement is followed by some courses of action. Assuming the statement to be true, decide the correct option.

Statement:

There has been a significant drop in the water level in the lakes supplying water to the city.

Course of action:

- (I) The water supply authority should impose a partial cut in supply to tackle the situation.
- (II) The government should appeal to all the residents through mass media for minimal use of water.
- (III) The government should ban the water supply in lower areas.

- (A) Statements I and II follow.
- (B) Statements I and III follow.
- (C) Statements II and III follow.
- (D) All statements follow.

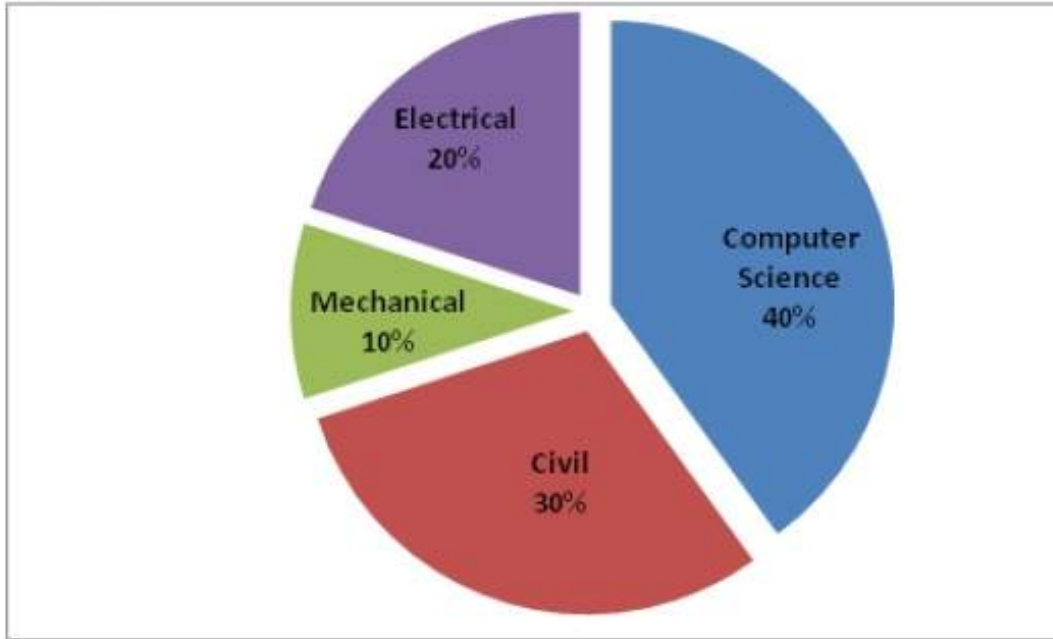
Options :

- 1. ✔ A
- 2. ✘ B
- 3. ✘ C
- 4. ✘ D

Question Number : 8 Question Type : NAT



The pie chart below has the breakup of the number of students from different departments in an engineering college for the year 2012. The proportion of male to female students in each department is 5:4. There are 40 males in Electrical Engineering. What is the difference between the numbers of female students in the Civil department and the female students in the Mechanical department?



Correct Answer:

32

Question Number : 9 Question Type : MCQ

The probabilities that a student passes in Mathematics, Physics and Chemistry are m , p , and c respectively. Of these subjects, the student has 75% chance of passing in at least one, a 50% chance of passing in at least two and a 40% chance of passing in exactly two. Following relations are drawn in m , p , c :

- (I) $p + m + c = 27/20$
- (II) $p + m + c = 13/20$
- (III) $(p) \times (m) \times (c) = 1/10$

- (A) Only relation I is true.
- (B) Only relation II is true.
- (C) Relations II and III are true.
- (D) Relations I and III are true.

Options :

- 1. ✘ A
- 2. ✘ B
- 3. ✘ C
- 4. ✔ D

Question Number : 10 Question Type : MCQ



The number of students in a class who have answered correctly, wrongly, or not attempted each question in an exam, are listed in the table below. The marks for each question are also listed. There is no negative or partial marking.

Q No.	Marks	Answered Correctly	Answered Wrongly	Not Attempted
1	2	21	17	6
2	3	15	27	2
3	1	11	29	4
4	2	23	18	3
5	5	31	12	1

What is the average of the marks obtained by the class in the examination?

- (A) 2.290 (B) 2.970 (C) 6.795 (D) 8.795

Options :

1. ✘ A
2. ✘ B
3. ✔ C
4. ✘ D

Computer Science and Information Technology

Number of Questions: 55
Section Marks: 85.0

Q.11 to Q.35 carry 1 mark each & Q.36 to Q.65 carry 2 marks each.

Question Number : 11 Question Type : MCQ

If $g(x) = 1 - x$ and $h(x) = \frac{x}{x-1}$, then $\frac{g(h(x))}{h(g(x))}$ is:

- (A) $\frac{h(x)}{g(x)}$ (B) $\frac{-1}{x}$ (C) $\frac{g(x)}{h(x)}$ (D) $\frac{x}{(1-x)^2}$

Options :

1. ✔ A
2. ✘ B
3. ✘ C
4. ✘ D

Question Number : 12 Question Type : MCQ

$\lim_{x \rightarrow \infty} x^{1/x}$ is

- (A) ∞ (B) 0 (C) 1



Options :

1. ✘ A

2. ✘ B
3. ✔ C
4. ✘ D

Question Number : 13 Question Type : MCQ

Match the following:

- | | |
|---|---------------------------|
| (P) Prim's algorithm for minimum spanning tree | (i) Backtracking |
| (Q) Floyd-Warshall algorithm for all pairs shortest paths | (ii) Greedy method |
| (R) Mergesort | (iii) Dynamic programming |
| (S) Hamiltonian circuit | (iv) Divide and conquer |

- | | |
|----------------------------|----------------------------|
| (A) P-iii, Q-ii, R-iv, S-i | (B) P-i, Q-ii, R-iv, S-iii |
| (C) P-ii, Q-iii, R-iv, S-i | (D) P-ii, Q-i, R-iii, S-iv |

Options :

1. ✘ A
2. ✘ B
3. ✔ C
4. ✘ D

Question Number : 14 Question Type : MCQ

Which one of the following is the recurrence equation for the worst case time complexity of the Quicksort algorithm for sorting n (≥ 2) numbers? In the recurrence equations given in the options below, c is a constant.

- (A) $T(n) = 2T(n/2) + cn$
(B) $T(n) = T(n-1) + T(1) + cn$
(C) $T(n) = 2T(n-1) + cn$
(D) $T(n) = T(n/2) + cn$

Options :

1. ✘ A
2. ✔ B
3. ✘ C
4. ✘ D

Question Number : 15 Question Type : MCQ

The height of a tree is the length of the longest root-to-leaf path in it. The maximum and minimum number of nodes in a binary tree of height 5 are

- | | |
|----------------------------|----------------------------|
| (A) 63 and 6, respectively | (B) 64 and 5, respectively |
| (C) 32 and 6, respectively | (D) 31 and 5, respectively |

Options :

1. ✔ A
2. ✘ B
3. ✘ C
4. ✘ D

Question Number : 16 Question Type : MCQ

Match the following:

- (P) Condition coverage
- (Q) Equivalence class partitioning
- (R) Volume testing
- (S) Alpha testing

- (i) Black-box testing
- (ii) System testing
- (iii) White-box testing
- (iv) Performance testing

- (A) P-ii, Q-iii, R-i, S-iv
- (C) P-iii, Q-i, R-iv, S-ii

- (B) P-iii, Q-iv, R-ii, S-i
- (D) P-iii, Q-i, R-ii, S-iv

Options :

- 1. ✘ A
- 2. ✘ B
- 3. ✔ C
- 4. ✘ D

Question Number : 17 Question Type : MCQ

Which of the following is/are correct inorder traversal sequence(s) of binary search tree(s)?

- I. 3, 5, 7, 8, 15, 19, 25
- II. 5, 8, 9, 12, 10, 15, 25
- III. 2, 7, 10, 8, 14, 16, 20
- IV. 4, 6, 7, 9 18, 20, 25

- (A) I and IV only
- (B) II and III only
- (C) II and IV only
- (D) II only

Options :

- 1. ✔ A
- 2. ✘ B
- 3. ✘ C
- 4. ✘ D

Question Number : 18 Question Type : MCQ

Which one of the following is TRUE at any valid state in shift-reduce parsing?

- (A) Viable prefixes appear only at the bottom of the stack and not inside
- (B) Viable prefixes appear only at the top of the stack and not inside
- (C) The stack contains only a set of viable prefixes
- (D) The stack never contains viable prefixes

Options :

- 1. ✘ A
- 2. ✘ B
- 3. ✔ C
- 4. ✘ D

Question Number : 19 Question Type : MCQ



Which one of the following is NOT equivalent to $p \leftrightarrow q$?

(A) $(\neg p \vee q) \wedge (p \vee \neg q)$

(B) $(\neg p \vee q) \wedge (q \rightarrow p)$

(C) $(\neg p \wedge q) \vee (p \wedge \neg q)$

(D) $(\neg p \wedge \neg q) \vee (p \wedge q)$

Options :

1. ✘ A

2. ✘ B

3. ✔ C

4. ✘ D

Question Number : 20 Question Type : MCQ

For a set A , the power set of A is denoted by 2^A . If $A = \{5, \{6\}, \{7\}\}$, which of the following options are TRUE?

I. $\emptyset \in 2^A$

II. $\emptyset \subseteq 2^A$

III. $\{5, \{6\}\} \in 2^A$

IV. $\{5, \{6\}\} \subseteq 2^A$

(A) I and III only

(B) II and III only

(C) I, II and III only

(D) I, II and IV only

Options :

1. ✘ A

2. ✘ B

3. ✔ C

4. ✘ D

Question Number : 21 Question Type : MCQ

Consider a 4-bit Johnson counter with an initial value of 0000. The counting sequence of this counter is

(A) 0, 1, 3, 7, 15, 14, 12, 8, 0

(B) 0, 1, 3, 5, 7, 9, 11, 13, 15, 0

(C) 0, 2, 4, 6, 8, 10, 12, 14, 0

(D) 0, 8, 12, 14, 15, 7, 3, 1, 0

Options :

1. ✘ A

2. ✘ B

3. ✘ C

4. ✔ D

Question Number : 22 Question Type : MCQ

For computers based on three-address instruction formats, each address field can be used to specify which of the following:

(S1) A memory operand

(S2) A processor register

(S3) An implied accumulator register

(A) Either S1 or S2

(B) Either S2 or S3

(C) Only S2 and S3

(D) All of S1, S2 and S3



Options :

1. ✓ A
2. ✗ B
3. ✗ C
4. ✗ D

Question Number : 23 Question Type : MCQ

Suppose two hosts use a TCP connection to transfer a large file. Which of the following statements is/are FALSE with respect to the TCP connection?

- I. If the sequence number of a segment is m , then the sequence number of the subsequent segment is always $m+1$.
- II. If the estimated round trip time at any given point of time is t sec, the value of the retransmission timeout is always set to greater than or equal to t sec.
- III. The size of the advertised window never changes during the course of the TCP connection.
- IV. The number of unacknowledged bytes at the sender is always less than or equal to the advertised window.

- (A) III only (B) I and III only (C) I and IV only (D) II and IV only

Options :

1. ✗ A
2. ✓ B
3. ✗ C
4. ✗ D

Question Number : 24 Question Type : MCQ

Suppose that everyone in a group of N people wants to communicate secretly with the $N-1$ others using symmetric key cryptographic system. The communication between any two persons should not be decodable by the others in the group. The number of keys required in the system as a whole to satisfy the confidentiality requirement is

- (A) $2N$ (B) $N(N-1)$ (C) $N(N-1)/2$ (D) $(N-1)^2$

Options :

1. ✗ A
2. ✗ B
3. ✓ C
4. ✗ D

Question Number : 25 Question Type : MCQ

Which of the following statements is/are FALSE?

- I. XML overcomes the limitations in HTML to support a structured way of organizing content.
- II. XML specification is not case sensitive while HTML specification is case sensitive.
- III. XML supports user defined tags while HTML uses pre-defined tags.
- IV. XML tags need not be closed while HTML tags must be closed.

- (A) II only (B) I only (C) II and IV only (D) III and IV only

Options :

1. ✗ A

2. ✘ B
3. ✔ C
4. ✘ D

Question Number : 26 Question Type : MCQ

Which one of the following fields of an IP header is NOT modified by a typical IP router?

- (A) Checksum (B) Source address
(C) Time to Live (TTL) (D) Length

Options :

1. ✘ A
2. ✔ B
3. ✘ C
4. ✘ D

Question Number : 27 Question Type : MCQ

In one of the pairs of protocols given below, both the protocols can use multiple TCP connections between the same client and the server. Which one is that?

- (A) HTTP, FTP (B) HTTP, TELNET (C) FTP, SMTP (D) HTTP, SMTP

Options :

1. ✔ A
2. ✘ B
3. ✘ C
4. ✘ D

Question Number : 28 Question Type : MCQ

For any two languages L_1 and L_2 such that L_1 is context-free and L_2 is recursively enumerable but not recursive, which of the following is/are necessarily true?

- I. \bar{L}_1 (complement of L_1) is recursive
- II. \bar{L}_2 (complement of L_2) is recursive
- III. \bar{L}_1 is context-free
- IV. $\bar{L}_1 \cup L_2$ is recursively enumerable

- (A) I only (B) III only (C) III and IV only (D) I and IV only

Options :

1. ✘ A
2. ✘ B
3. ✘ C
4. ✔ D

Question Number : 29 Question Type : NAT

Consider a system with byte-addressable memory, 32-bit logical addresses, 4 kilobyte page size and page table entries of 4 bytes each. The size of the page table in the system in megabytes is _____.



www.questionpaperz.in

Unfold Every Question

Correct Answer :

4

Question Number : 30 Question Type : NAT

The following two functions P1 and P2 that share a variable B with an initial value of 2 execute concurrently.

```
P1 ( ) {
    C = B - 1;
    B = 2 * C;
}

P2 ( ) {
    D = 2 * B;
    B = D - 1;
}
```

The number of distinct values that B can possibly take after the execution is _____.

Correct Answer :

3

Question Number : 31 Question Type : MCQ

SELECT operation in SQL is equivalent to

- (A) the selection operation in relational algebra
- (B) the selection operation in relational algebra, except that SELECT in SQL retains duplicates
- (C) the projection operation in relational algebra
- (D) the projection operation in relational algebra, except that SELECT in SQL retains duplicates

Options :

- 1. ✘ A
- 2. ✘ B
- 3. ✘ C
- 4. ✔ D

Question Number : 32 Question Type : MCQ

A file is organized so that the ordering of data records is the same as or close to the ordering of data entries in some index. Then that index is called

- (A) Dense
- (B) Sparse
- (C) Clustered
- (D) Unclustered

Options :

- 1. ✘ A
- 2. ✘ B
- 3. ✔ C
- 4. ✘ D



www.questionpaperz.in
Unfold Every Question

Question Number : 33 Question Type : NAT

In the LU decomposition of the matrix $\begin{bmatrix} 2 & 2 \\ 4 & 9 \end{bmatrix}$, if the diagonal elements of U are both 1, then the lower diagonal entry l_{22} of L is _____.

Correct Answer :

5

Question Number : 34 Question Type : NAT

The output of the following C program is _____.

```
void f1(int a, int b) {
    int c;
    c=a; a=b; b=c;
}
void f2(int *a, int *b) {
    int c;
    c=*a; *a=*b; *b=c;
}
int main(){
    int a=4, b=5, c=6;
    f1(a,b);
    f2(&b, &c);
    printf("%d",c-a-b);
}
```

Correct Answer :

-5

Question Number : 35 Question Type : MCQ

What are the worst-case complexities of insertion and deletion of a key in a binary search tree?

- (A) $\theta(\log n)$ for both insertion and deletion
- (B) $\theta(n)$ for both insertion and deletion
- (C) $\theta(n)$ for insertion and $\theta(\log n)$ for deletion
- (D) $\theta(\log n)$ for insertion and $\theta(n)$ for deletion

Options :

- 1. ✘ A
- 2. ✔ B
- 3. ✘ C
- 4. ✘ D

Question Number : 36 Question Type : NAT

Suppose that the stop-and-wait protocol is used on a link with a bit rate of 64 kilobits per second and 20 milliseconds propagation delay. Assume that the transmission time for the acknowledgement and the processing time at nodes are negligible. Then the minimum frame size in bytes to achieve a link utilization of at least 50% is _____.

Correct Answer :

160

Question Number : 37 Question Type : MCQ

Consider a max heap, represented by the array: 40, 30, 20, 10, 15, 16, 17, 8, 4.

Array Index	1	2	3	4	5	6	7	8	9
Value	40	30	20	10	15	16	17	8	4

Now consider that a value 35 is inserted into this heap. After insertion, the new heap is

(A) 40, 30, 20, 10, 15, 16, 17, 8, 4, 35

(B) 40, 35, 20, 10, 30, 16, 17, 8, 4, 15

(C) 40, 30, 20, 10, 35, 16, 17, 8, 4, 15

(D) 40, 35, 20, 10, 15, 16, 17, 8, 4, 30

Options :

- ✘ A
- ✔ B
- ✘ C
- ✘ D

Question Number : 38 Question Type : NAT

Consider the following C program segment.

```
while(first <= last)
{
    if (array[middle] < search)
        first = middle + 1;
    else if (array[middle] == search)
        found = TRUE;
    else last = middle - 1;
    middle = (first + last)/2;
}
if (first > last) notPresent = TRUE;
```

The cyclomatic complexity of the program segment is _____.



www.questionpaperz.in
Unfold Every Question

Correct Answer :

Question Number : 39 Question Type : NAT

Consider a LAN with four nodes S_1, S_2, S_3 and S_4 . Time is divided into fixed-size slots, and a node can begin its transmission only at the beginning of a slot. A collision is said to have occurred if more than one node transmit in the same slot. The probabilities of generation of a frame in a time slot by S_1, S_2, S_3 and S_4 are 0.1, 0.2, 0.3 and 0.4, respectively. The probability of sending a frame in the first slot without any collision by any of these four stations is _____.

Correct Answer :

0.40 to 0.46

Question Number : 40 Question Type : MCQ

The binary operator \neq is defined by the following truth table.

p	q	$p \neq q$
0	0	0
0	1	1
1	0	1
1	1	0

Which one of the following is true about the binary operator \neq ?

(A) Both commutative and associative

(B) Commutative but not associative

(C) Not commutative but associative

(D) Neither commutative nor associative

Options :

1. ✓ A

2. ✗ B

3. ✗ C

4. ✗ D

Question Number : 41 Question Type : NAT

$$\sum_{x=1}^{99} \frac{1}{x(x+1)} = \underline{\hspace{2cm}}$$

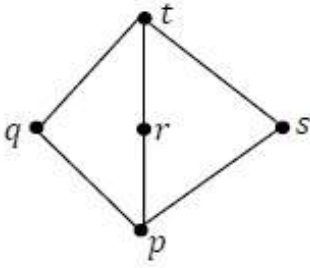
Correct Answer :

0.99

Question Number : 42 Question Type : MCQ



Suppose $\mathcal{L} = \{p, q, r, s, t\}$ is a lattice represented by the following Hasse diagram:



For any $x, y \in \mathcal{L}$, not necessarily distinct, $x \vee y$ and $x \wedge y$ are join and meet of x, y , respectively. Let $\mathcal{L}^3 = \{(x, y, z) : x, y, z \in \mathcal{L}\}$ be the set of all ordered triplets of the elements of \mathcal{L} . Let p_r be the probability that an element $(x, y, z) \in \mathcal{L}^3$ chosen equiprobably satisfies $x \vee (y \wedge z) = (x \vee y) \wedge (x \vee z)$. Then

- (A) $p_r = 0$
- (B) $p_r = 1$
- (C) $0 < p_r \leq \frac{1}{5}$
- (D) $\frac{1}{5} < p_r < 1$

Options :

- 1. ✘ A
- 2. ✘ B
- 3. ✘ C
- 4. ✔ D

Question Number : 43 Question Type : MCQ

Consider the operations

$$f(X, Y, Z) = X'YZ + XY' + Y'Z' \text{ and } g(X, Y, Z) = X'YZ + X'YZ' + XY.$$

Which one of the following is correct?

- (A) Both $\{f\}$ and $\{g\}$ are functionally complete
- (B) Only $\{f\}$ is functionally complete
- (C) Only $\{g\}$ is functionally complete
- (D) Neither $\{f\}$ nor $\{g\}$ is functionally complete

Options :

- 1. ✘ A
- 2. ✔ B
- 3. ✘ C
- 4. ✘ D

Question Number : 44 Question Type : NAT

Let G be a connected planar graph with 10 vertices. If the number of edges on each face is three, then the number of edges in G is _____.

Correct Answer :

24

Question Number : 45 Question Type : MCQ

Let a_n represent the number of bit strings of length n containing two consecutive 1s. What is the recurrence relation for a_n ?

(A) $a_{n-2} + a_{n-1} + 2^{n-2}$

(B) $a_{n-2} + 2a_{n-1} + 2^{n-2}$

(C) $2a_{n-2} + a_{n-1} + 2^{n-2}$

(D) $2a_{n-2} + 2a_{n-1} + 2^{n-2}$

Options :

1. ✓ A

2. ✗ B

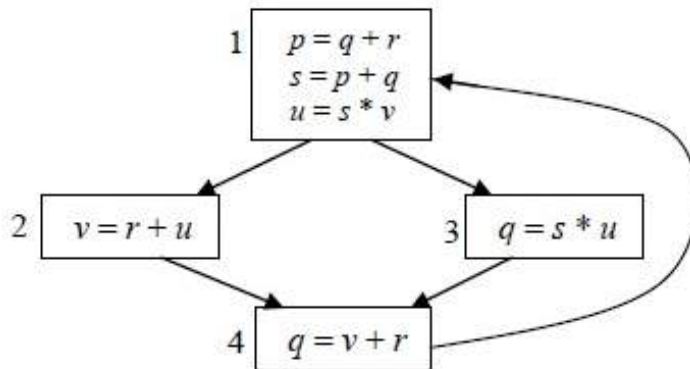
3. ✗ C

4. ✗ D

Question Number : 46 Question Type : MCQ

A variable x is said to be live at a statement S_i in a program if the following three conditions hold simultaneously:

- i. There exists a statement S_j that uses x
- ii. There is a path from S_i to S_j in the flow graph corresponding to the program
- iii. The path has no intervening assignment to x including at S_i and S_j



The variables which are live both at the statement in basic block 2 and at the statement in basic block 3 of the above control flow graph are

(A) p, s, u

(B) r, s, u

(C) r, u

(D) q, v

Options :

1. ✗ A

2. ✗ B

3. ✓ C

4. ✗ D

Question Number : 47 Question Type : NAT



The least number of temporary variables required to create a three-address code in static single assignment form for the expression $q + r / 3 + s - t * 5 + u * v / w$ is _____.

Correct Answer :

8

Question Number : 48 Question Type : NAT

Consider an Entity-Relationship (ER) model in which entity sets E_1 and E_2 are connected by an $m : n$ relationship R_{12} . E_1 and E_3 are connected by a $1 : n$ (1 on the side of E_1 and n on the side of E_3) relationship R_{13} .

E_1 has two single-valued attributes a_{11} and a_{12} of which a_{11} is the key attribute. E_2 has two single-valued attributes a_{21} and a_{22} of which a_{21} is the key attribute. E_3 has two single-valued attributes a_{31} and a_{32} of which a_{31} is the key attribute. The relationships do not have any attributes.

If a relational model is derived from the above ER model, then the minimum number of relations that would be generated if all the relations are in 3NF is _____.

Correct Answer :

4

Question Number : 49 Question Type : NAT



Consider the DFAs M and N given above. The number of states in a minimal DFA that accepts the language $L(M) \cap L(N)$ is _____.

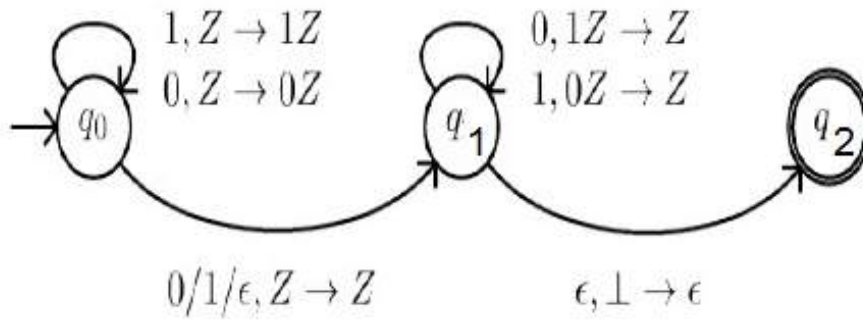
Correct Answer :

1

Question Number : 50 Question Type : MCQ



Consider the NPDA $\langle Q = \{q_0, q_1, q_2\}, \Sigma = \{0,1\}, \Gamma = \{0,1,\perp\}, \delta, q_0, \perp, F = \{q_2\}\rangle$, where (as per usual convention) Q is the set of states, Σ is the input alphabet, Γ is the stack alphabet, δ is the state transition function, q_0 is the initial state, \perp is the initial stack symbol, and F is the set of accepting states. The state transition is as follows:



Which one of the following sequences must follow the string 101100 so that the overall string is accepted by the automaton?

- (A) 10110 (B) 10010 (C) 01010 (D) 01001

Options :

1. ✘ A
2. ✔ B
3. ✘ C
4. ✘ D

Question Number : 51 Question Type : MCQ

Let $G = (V, E)$ be a simple undirected graph, and s be a particular vertex in it called the source. For $x \in V$, let $d(x)$ denote the shortest distance in G from s to x . A breadth first search (BFS) is performed starting at s . Let T be the resultant BFS tree. If (u, v) is an edge of G that is not in T , then which one of the following CANNOT be the value of $d(u) - d(v)$?

- (A) -1 (B) 0 (C) 1 (D) 2

Options :

1. ✘ A
2. ✘ B
3. ✘ C
4. ✔ D

Question Number : 52 Question Type : NAT

Consider a uniprocessor system executing three tasks T_1 , T_2 and T_3 , each of which is composed of an infinite sequence of jobs (or instances) which arrive periodically at intervals of 3, 7 and 20 milliseconds, respectively. The priority of each task is the inverse of its period, and the available tasks are scheduled in order of priority, with the highest priority task scheduled first. Each instance of T_1 , T_2 and T_3 requires an execution time of 1, 2 and 4 milliseconds, respectively. Given that all tasks initially arrive at the beginning of the 1st millisecond and task preemptions are allowed, the first instance of T_3 completes its execution at the end of _____ milliseconds.

Correct Answer :

12

Question Number : 53 Question Type : MCQ

A positive edge-triggered D flip-flop is connected to a positive edge-triggered JK flip-flop as follows. The Q output of the D flip-flop is connected to both the J and K inputs of the JK flip-flop, while the Q output of the JK flip-flop is connected to the input of the D flip-flop. Initially, the output of the D flip-flop is set to logic one and the output of the JK flip-flop is cleared. Which one of the following is the bit sequence (including the initial state) generated at the Q output of the JK flip-flop when the flip-flops are connected to a free-running common clock? Assume that $J = K = 1$ is the toggle mode and $J = K = 0$ is the state-holding mode of the JK flip-flop. Both the flip-flops have non-zero propagation delays.

(A) 0110110...

(B) 0100100...

(C) 011101110...

(D) 011001100...

Options :

1. ✓ A

2. ✗ B

3. ✗ C

4. ✗ D

Question Number : 54 Question Type : NAT

Consider a disk pack with a seek time of 4 milliseconds and rotational speed of 10000 rotations per minute (RPM). It has 600 sectors per track and each sector can store 512 bytes of data. Consider a file stored in the disk. The file contains 2000 sectors. Assume that every sector access necessitates a seek, and the average rotational latency for accessing each sector is half of the time for one complete rotation. The total time (in milliseconds) needed to read the entire file is _____.

Correct Answer:

14020

Question Number : 55 Question Type : NAT



Consider a non-pipelined processor with a clock rate of 2.5 gigahertz and average cycles per instruction of four. The same processor is upgraded to a pipelined processor with five stages; but due to the internal pipeline delay, the clock speed is reduced to 2 gigahertz. Assume that there are no stalls in the pipeline. The speed up achieved in this pipelined processor is _____.

Correct Answer :

3.2

Question Number : 56 Question Type : NAT

Suppose the following disk request sequence (track numbers) for a disk with 100 tracks is given: 45, 20, 90, 10, 50, 60, 80, 25, 70. Assume that the initial position of the R/W head is on track 50. The additional distance that will be traversed by the R/W head when the Shortest Seek Time First (SSTF) algorithm is used compared to the SCAN (Elevator) algorithm (assuming that SCAN algorithm moves towards 100 when it starts execution) is _____ tracks.

Correct Answer :

10

Question Number : 57 Question Type : MCQ

Consider a main memory with five page frames and the following sequence of page references: 3, 8, 2, 3, 9, 1, 6, 3, 8, 9, 3, 6, 2, 1, 3. Which one of the following is true with respect to page replacement policies First In First Out (FIFO) and Least Recently Used (LRU)?

- (A) Both incur the same number of page faults
- (B) FIFO incurs 2 more page faults than LRU
- (C) LRU incurs 2 more page faults than FIFO
- (D) FIFO incurs 1 more page faults than LRU

Options :

- 1. ✓ A
- 2. ✗ B
- 3. ✗ C
- 4. ✗ D

Question Number : 58 Question Type : NAT

$$\int_{1/\pi}^{2/\pi} \frac{\cos(1/x)}{x^2} dx = \underline{\hspace{2cm}}$$



www.questionpaperz.in
Unfold Every Question

Correct Answer:

Question Number : 59 Question Type : MCQ

Consider the following 2×2 matrix A where two elements are unknown and are marked by a and b . The eigenvalues of this matrix are -1 and 7 . What are the values of a and b ?

$$A = \begin{pmatrix} 1 & 4 \\ b & a \end{pmatrix}.$$

- (A) $a = 6, b = 4$
- (B) $a = 4, b = 6$
- (C) $a = 3, b = 5$
- (D) $a = 5, b = 3$

Options :

- 1. ✘ A
- 2. ✘ B
- 3. ✘ C
- 4. ✔ D

Question Number : 60 Question Type : MCQ

An algorithm performs $(\log N)^{1/2}$ find operations, N insert operations, $(\log N)^{1/2}$ delete operations, and $(\log N)^{1/2}$ decrease-key operations on a set of data items with keys drawn from a linearly ordered set. For a delete operation, a pointer is provided to the record that must be deleted. For the decrease-key operation, a pointer is provided to the record that has its key decreased. Which one of the following data structures is the most suited for the algorithm to use, if the goal is to achieve the best total asymptotic complexity considering all the operations?

- (A) Unsorted array
- (B) Min-heap
- (C) Sorted array
- (D) Sorted doubly linked list

Options :

- 1. ✔ A
- 2. ✘ B
- 3. ✘ C
- 4. ✘ D

Question Number : 61 Question Type : NAT

Consider the following relations:

Student	
Roll No	Student Name
1	Raj
2	Rohit
3	Raj

Performance		
Roll No	Course	Marks
1	Math	80
1	English	70
2	Math	75
3	English	80
2	Physics	65
3	Math	80

Consider the following SQL query.

```
SELECT S.Student_Name, sum(P.Marks)
FROM Student S, Performance P
WHERE S.Roll_No = P.Roll_No
GROUP BY S.Student_Name
```

The number of rows that will be returned by the SQL query is _____.

Correct Answer :

2

Question Number : 62 Question Type : MCQ

What is the output of the following C code? Assume that the address of x is 2000 (in decimal) and an integer requires four bytes of memory.

```
int main () {
    unsigned int x[4][3] =
        {{1,2,3},{4,5,6},{7,8,9},{10,11,12}};
    printf("%u, %u, %u", x+3, *(x+3), *(x+2)+3);
}
```

(A) 2036, 2036, 2036 (B) 2012, 4, 2204 (C) 2036, 10, 10 (D) 2012, 4, 6

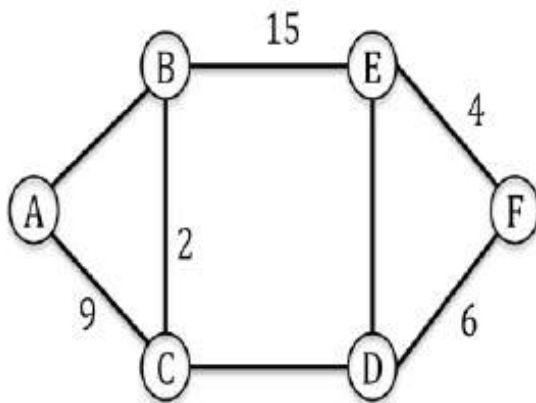
Options :

- ✓ A
- ✗ B
- ✗ C
- ✗ D

Question Number : 63 Question Type : NAT



The graph shown below has 8 edges with distinct integer edge weights. The minimum spanning tree (MST) is of weight 36 and contains the edges: $\{(A, C), (B, C), (B, E), (E, F), (D, F)\}$. The edge weights of only those edges which are in the MST are given in the figure shown below. The minimum possible sum of weights of all 8 edges of this graph is _____.



Correct Answer :

69

Question Number : 64 Question Type : MCQ

Consider the following C function.

```
int fun1(int n){
    int i, j, k, p, q=0;
    for (i=1; i<n; ++i) {
        p=0;
        for (j=n; j>1; j=j/2)
            ++p;
        for (k=1; k<p; k=k*2)
            ++q;
    }
    return q;
}
```

Which one of the following most closely approximates the return value of the function fun1?

- (A) n^3 (B) $n(\log n)^2$ (C) $n \log n$ (D) $n \log(\log n)$

Options :

1. ✘ A
2. ✘ B
3. ✘ C
4. ✔ D

Question Number : 65 Question Type : MCQ



Consider the following pseudo code, where x and y are positive integers.

```
begin
  q := 0
  r := x
  while r ≥ y do
    begin
      r := r - y
      q := q + 1
    end
  end
end
```

The post condition that needs to be satisfied after the program terminates is

(A) $\{r = qx + y \wedge r < y\}$

(B) $\{x = qy + r \wedge r < y\}$

(C) $\{y = qx + r \wedge 0 < r < y\}$

(D) $\{q + 1 < r - y \wedge y > 0\}$

Options :

1. ✘ A

2. ✔ B

3. ✘ C

4. ✘ D



SESSION - 2



www.questionpaperz.in
Unfold Every Question

Graduate Aptitude Test in Engineering

Notations :

- Options shown in green color and with ✓ icon are correct.
- Options shown in red color and with ✗ icon are incorrect.

Question Paper Name: CS: COMPUTER SCIENCE AND INFORMATION TECHNOLOGY 7th Feb Shift2
Number of Questions: 65
Total Marks: 100.0

Wrong answer for MCQ will result in negative marks, (-1/3) for 1 mark Questions and (-2/3) for 2 marks Questions.

General Aptitude

Number of Questions: 10
Section Marks: 15.0

Q.1 to Q.5 carry 1 mark each & Q.6 to Q.10 carry 2 marks each.

Question Number : 1 Question Type : MCQ

We _____ our friend's birthday and we _____ how to make it up to him.

- (A) completely forgot --- don't just know
- (B) forgot completely --- don't just know
- (C) completely forgot --- just don't know
- (D) forgot completely --- just don't know

Options :

- ✗ A
- ✗ B
- ✓ C
- ✗ D

Question Number : 2 Question Type : MCQ

Choose the statement where underlined word is used correctly.

- (A) The industrialist had a personnel jet.
- (B) I write my experience in my personnel diary.
- (C) All personnel are being given the day off.
- (D) Being religious is a personnel aspect.

Options :

- ✗ A
- ✗ B
- ✓ C
- ✗ D

Question Number : 3 Question Type : MCQ

A generic term that includes various items of clothing such as a skirt, a pair of trousers and a shirt is

- (A) fabric (B) textile (C) fibre (D) apparel

Options :

1. ✘ A
2. ✘ B
3. ✘ C
4. ✔ D

Question Number : 4 Question Type : MCQ

Based on the given statements, select the most appropriate option to solve the given question.

What will be the total weight of 10 poles each of same weight?

Statements:

- (I) One fourth of the weight of a pole is 5 Kg.
(II) The total weight of these poles is 160 kg more than the total weight of two poles.

- (A) Statement I alone is not sufficient.
(B) Statement II alone is not sufficient.
(C) Either I or II alone is sufficient.
(D) Both statements I and II together are not sufficient.

Options :

1. ✘ A
2. ✘ B
3. ✔ C
4. ✘ D

Question Number : 5 Question Type : MCQ

Consider a function $f(x) = 1 - |x|$ on $-1 \leq x \leq 1$. The value of x at which the function attains a maximum, and the maximum value of the function are:

- (A) 0, -1 (B) -1, 0 (C) 0, 1 (D) -1, 2

Options :

1. ✘ A
2. ✘ B
3. ✔ C
4. ✘ D

Question Number : 6 Question Type : MCQ

Out of the following four sentences, select the most suitable sentence with respect to grammar and usage:

- (A) Since the report lacked needed information, it was of no use to them.
(B) The report was useless to them because there were no needed information in it.
(C) Since the report did not contain the needed information, it was not real useful to them.
(D) Since the report lacked needed information, it would not had been useful to them.

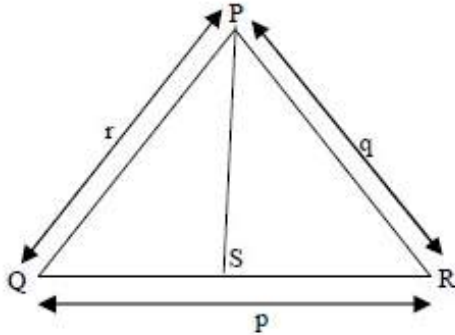
Options :



1. ✓ A
2. ✗ B
3. ✗ C
4. ✗ D

Question Number : 7 Question Type : MCQ

In a triangle PQR, PS is the angle bisector of $\angle QPR$ and $\angle QPS = 60^\circ$. What is the length of PS?



- (A) $\frac{(q+r)}{qr}$
- (B) $\frac{qr}{(q+r)}$
- (C) $\sqrt{(q^2 + r^2)}$
- (D) $\frac{(q+r)^2}{qr}$

Options :

1. ✗ A
2. ✓ B
3. ✗ C
4. ✗ D

Question Number : 8 Question Type : NAT

If p, q, r, s are distinct integers such that:

$$f(p, q, r, s) = \max(p, q, r, s)$$

$$g(p, q, r, s) = \min(p, q, r, s)$$

$$h(p, q, r, s) = \text{remainder of } (p \times q) / (r \times s) \text{ if } (p \times q) > (r \times s) \text{ or remainder of } (r \times s) / (p \times q) \text{ if } (r \times s) > (p \times q)$$

$$\text{Also a function } fgh(p, q, r, s) = f(p, q, r, s) \times g(p, q, r, s) \times h(p, q, r, s)$$

Also the same operations are valid with two variable functions of the form f(p, q).

What is the value of fg(h(2,5,7,3), 4,6,8)?

Correct Answer :

8

Question Number : 9 Question Type : MCQ



If the list of letters, P, R, S, T, U is an arithmetic sequence, which of the following are also in arithmetic sequence?

- I. $2P, 2R, 2S, 2T, 2U$
- II. $P-3, R-3, S-3, T-3, U-3$
- III. P^2, R^2, S^2, T^2, U^2

- (A) I only
- (B) I and II
- (C) II and III
- (D) I and III

Options :

- 1. ✘ A
- 2. ✔ B
- 3. ✘ C
- 4. ✘ D

Question Number : 10 Question Type : MCQ

Four branches of a company are located at M, N, O, and P. M is north of N at a distance of 4 km; P is south of O at a distance of 2 km; N is southeast of O by 1 km. What is the distance between M and P in km?

- (A) 5.34
- (B) 6.74
- (C) 28.5
- (D) 45.49

Options :

- 1. ✔ A
- 2. ✘ B
- 3. ✘ C
- 4. ✘ D

Computer Science and Information Technology

Number of Questions: 55
Section Marks: 85.0

Q.11 to Q.35 carry 1 mark each & Q.36 to Q.65 carry 2 marks each.

Question Number : 11 Question Type : MCQ

Consider the following two statements.

- S1: If a candidate is known to be corrupt, then he will not be elected
- S2: If a candidate is kind, he will be elected

Which one of the following statements follows from S1 and S2 as per sound inference rules of logic?

- (A) If a person is known to be corrupt, he is kind
- (B) If a person is not known to be corrupt, he is not kind
- (C) If a person is kind, he is not known to be corrupt
- (D) If a person is not kind, he is not known to be corrupt



Options :

1. ✘ A
2. ✘ B
3. ✔ C
4. ✘ D

Question Number : 12 Question Type : NAT

The cardinality of the power set of $\{ 0, 1, 2, \dots, 10 \}$ is _____.

Correct Answer:

2048

Question Number : 13 Question Type : MCQ

Let R be the relation on the set of positive integers such that aRb if and only if a and b are distinct and have a common divisor other than 1. Which one of the following statements about R is true?

- (A) R is symmetric and reflexive but not transitive
- (B) R is reflexive but not symmetric and not transitive
- (C) R is transitive but not reflexive and not symmetric
- (D) R is symmetric but not reflexive and not transitive

Options :

1. ✘ A
2. ✘ B
3. ✘ C
4. ✔ D

Question Number : 14 Question Type : NAT

The number of divisors of 2100 is _____.

Correct Answer :

36

Question Number : 15 Question Type : NAT

The larger of the two eigenvalues of the matrix $\begin{bmatrix} 4 & 5 \\ 2 & 1 \end{bmatrix}$ is _____.



Correct Answer :

6

Question Number : 16 Question Type : MCQ

An unordered list contains n distinct elements. The number of comparisons to find an element in this list that is neither maximum nor minimum is

- (A) $\Theta(n \log n)$ (B) $\Theta(n)$ (C) $\Theta(\log n)$ (D) $\Theta(1)$

Options :

1. ✘ A

2. ✘ B

3. ✘ C

4. ✔ D

Question Number : 17 Question Type : NAT

The minimum number of JK flip-flops required to construct a synchronous counter with the count sequence $(0,0,1,1,2,2,3,3,0,0,\dots)$ is _____.

Correct Answer:

3

Question Number : 18 Question Type : NAT

Assume that for a certain processor, a read request takes 50 nanoseconds on a cache miss and 5 nanoseconds on a cache hit. Suppose while running a program, it was observed that 80% of the processor's read requests result in a cache hit. The average read access time in nanoseconds is _____.

Correct Answer :

14

Question Number : 19 Question Type : NAT

A computer system implements a 40-bit virtual address, page size of 8 kilobytes, and a 128-entry translation look-aside buffer (TLB) organized into 32 sets each having four ways. Assume that the TLB tag does not store any process id. The minimum length of the TLB tag in bits is _____.

Correct Answer:

22

Question Number : 20 Question Type : MCQ

Consider the following statements.

- I. The complement of every Turing decidable language is Turing decidable
- II. There exists some language which is in NP but is not Turing decidable
- III. If L is a language in NP, L is Turing decidable

Which of the above statements is/are true?

- (A) Only II (B) Only III (C) Only I and II (D) Only I and III

Options :

- 1. ✘ A
- 2. ✘ B
- 3. ✘ C
- 4. ✔ D

Question Number : 21 Question Type : MCQ

Consider the following function written in the C programming language.

```
void foo(char *a){
    if ( *a && *a != ' ' ){
        foo(a+1);
        putchar(*a);
    }
}
```

The output of the above function on input "ABCD EFGH" is

- (A) ABCD EFGH (B) ABCD (C) HGFE DCBA (D) DCBA

Options :

- 1. ✘ A
- 2. ✘ B
- 3. ✘ C
- 4. ✔ D

Question Number : 22 Question Type : MCQ

Consider a complete binary tree where the left and the right subtrees of the root are max-heaps. The lower bound for the number of operations to convert the tree to a heap is

- (A) $\Omega(\log n)$ (B) $\Omega(n)$ (C) $\Omega(n \log n)$ (D) $\Omega(n^2)$

Options :

- 1. ✔ A
- 2. ✘ B
- 3. ✘ C
- 4. ✘ D



Question Number : 23 Question Type : NAT

A binary tree T has 20 leaves. The number of nodes in T having two children is _____.

Correct Answer :

19

Question Number : 24 Question Type : NAT

Consider the following C function.

```
int fun(int n){
    int x=1,k;
    if (n==1) return x;
    for (k=1; k<n; ++k)
        x = x + fun(k) * fun(n-k);
    return x;
}
```

The return value of fun (5) is _____.

Correct Answer :

51

Question Number : 25 Question Type : MCQ

A software requirements specification (SRS) document should avoid discussing which one of the following?

- (A) User interface issues
- (B) Non-functional requirements
- (C) Design specification
- (D) Interfaces with third party software

Options :

- 1. ✘ A
- 2. ✘ B
- 3. ✔ C
- 4. ✘ D

Question Number : 26 Question Type : MCQ



Consider two decision problems Q_1, Q_2 such that Q_1 reduces in polynomial time to 3-SAT and 3-SAT reduces in polynomial time to Q_2 . Then which one of the following is consistent with the above statement?

- (A) Q_1 is in NP, Q_2 is NP hard.
- (B) Q_2 is in NP, Q_1 is NP hard.
- (C) Both Q_1 and Q_2 are in NP .
- (D) Both Q_1 and Q_2 are NP hard.

Options :

- 1. ✓ A
- 2. ✗ B
- 3. ✗ C
- 4. ✗ D

Question Number : 27 Question Type : MCQ

Match the following:

- | | |
|--------------------------|-------------------------|
| P. Lexical analysis | 1. Graph coloring |
| Q. Parsing | 2. DFA minimization |
| R. Register allocation | 3. Post-order traversal |
| S. Expression evaluation | 4. Production tree |

- (A) P-2, Q-3, R-1, S-4
- (B) P-2, Q-1, R-4, S-3
- (C) P-2, Q-4, R-1, S-3
- (D) P-2, Q-3, R-4, S-1

Options :

- 1. ✗ A
- 2. ✗ B
- 3. ✓ C
- 4. ✗ D

Question Number : 28 Question Type : MCQ

In the context of abstract-syntax-tree (AST) and control-flow-graph (CFG), which one of the following is TRUE?

- (A) In both AST and CFG, let node N_2 be the successor of node N_1 . In the input program, the code corresponding to N_2 is present after the code corresponding to N_1
- (B) For any input program, neither AST nor CFG will contain a cycle
- (C) The maximum number of successors of a node in an AST and a CFG depends on the input program
- (D) Each node in AST and CFG corresponds to at most one statement in the input program

Options :

- 1. ✗ A
- 2. ✗ B
- 3. ✓ C
- 4. ✗ D

Question Number : 29 Question Type : MCQ

Consider the basic COCOMO model where E is the effort applied in person-months, D is the development time in chronological months, $KLOC$ is the estimated number of delivered lines of code (in thousands) and a_b, b_b, c_b, d_b have their usual meanings. The basic COCOMO equations are of the form

- (A) $E = a_b(KLOC) \exp(b_b), D = c_b(E) \exp(d_b)$
- (B) $D = a_b(KLOC) \exp(b_b), E = c_b(D) \exp(d_b)$
- (C) $E = a_b \exp(b_b), D = c_b(KLOC) \exp(d_b)$
- (D) $E = a_b \exp(d_b), D = c_b(KLOC) \exp(b_b)$

Options :

- 1. ✓ A
- 2. ✗ B
- 3. ✗ C
- 4. ✗ D

Question Number : 30 Question Type : MCQ

A system has 6 identical resources and N processes competing for them. Each process can request at most 2 resources. Which one of the following values of N could lead to a deadlock?

- (A) 1
- (B) 2
- (C) 3
- (D) 4

Options :

- 1. ✗ A
- 2. ✗ B
- 3. ✗ C
- 4. ✓ D

Question Number : 31 Question Type : MCQ

Consider the following transaction involving two bank accounts x and y .

```
read(x); x := x - 50; write(x); read(y); y:= y + 50; write(y)
```

The constraint that the sum of the accounts x and y should remain constant is that of

- (A) Atomicity
- (B) Consistency
- (C) Isolation
- (D) Durability

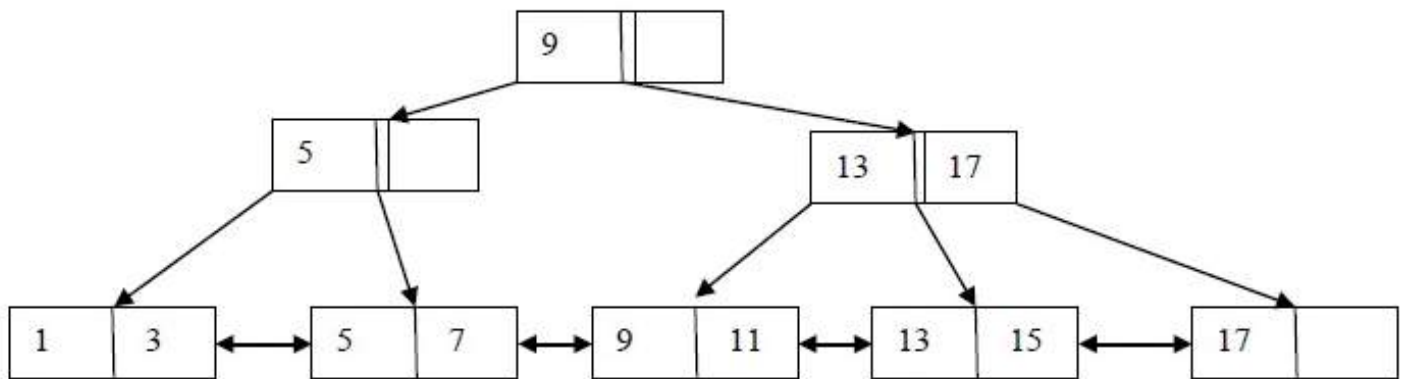
Options :

- 1. ✗ A
- 2. ✓ B
- 3. ✗ C
- 4. ✗ D

Question Number : 32 Question Type : NAT



With reference to the B+ tree index of order 1 shown below, the minimum number of nodes (including the Root node) that must be fetched in order to satisfy the following query: "Get all records with a search key greater than or equal to 7 and less than 15" is _____.



Correct Answer :

5

Question Number : 33 Question Type : MCQ

Identify the correct order in which a server process must invoke the function calls accept, bind, listen, and recv according to UNIX socket API.

- (A) listen, accept, bind, recv (B) bind, listen, accept, recv
 (C) bind, accept, listen, recv (D) accept, listen, bind, recv

Options :

1. ✘ A
 2. ✔ B
 3. ✘ C
 4. ✘ D

Question Number : 34 Question Type : NAT

A link has a transmission speed of 10^6 bits/sec. It uses data packets of size 1000 bytes each. Assume that the acknowledgment has negligible transmission delay, and that its propagation delay is the same as the data propagation delay. Also assume that the processing delays at nodes are negligible. The efficiency of the stop-and-wait protocol in this setup is exactly 25%. The value of the one-way propagation delay (in milliseconds) is _____.

Correct Answer :

12

Question Number : 35 Question Type : MCQ



Which one of the following statements is NOT correct about HTTP cookies?

- (A) A cookie is a piece of code that has the potential to compromise the security of an Internet user
- (B) A cookie gains entry to the user's work area through an HTTP header
- (C) A cookie has an expiry date and time
- (D) Cookies can be used to track the browsing pattern of a user at a particular site

Options :

- 1. ✓ A
- 2. ✗ B
- 3. ✗ C
- 4. ✗ D

Question Number : 36 Question Type : MCQ

Consider the following routing table at an IP router:

Network No.	Net Mask	Next Hop
128.96.170.0	255.255.254.0	Interface 0
128.96.168.0	255.255.254.0	Interface 1
128.96.166.0	255.255.254.0	R2
128.96.164.0	255.255.252.0	R3
0.0.0.0	Default	R4

For each IP address in Group I identify the correct choice of the next hop from Group II using the entries from the routing table above.

Group I

- i) 128.96.171.92
- ii) 128.96.167.151
- iii) 128.96.163.151
- iv) 128.96.165.121

Group II

- a) Interface 0
- b) Interface 1
- c) R2
- d) R3
- e) R4

- (A) i-a, ii-c, iii-e, iv-d
- (C) i-b, ii-c, iii-d, iv-e

- (B) i-a, ii-d, iii-b, iv-e
- (D) i-b, ii-c, iii-e, iv-d

Options :

- 1. ✓ A
- 2. ✗ B
- 3. ✗ C
- 4. ✗ D

Question Number : 37 Question Type : MCQ



Host A sends a UDP datagram containing 8880 bytes of user data to host B over an Ethernet LAN. Ethernet frames may carry data up to 1500 bytes (i.e. MTU=1500 bytes). Size of UDP header is 8 bytes and size of IP header is 20 bytes. There is no option field in IP header. How many total number of IP fragments will be transmitted and what will be the contents of offset field in the last fragment?

- (A) 6 and 925
- (B) 6 and 7400
- (C) 7 and 1110
- (D) 7 and 8880

Options :

- 1. ✘ A
- 2. ✘ B
- 3. ✔ C
- 4. ✘ D

Question Number : 38 Question Type : MCQ

Assume that the bandwidth for a TCP connection is 1048560 bits /sec. Let α be the value of RTT in milliseconds (rounded off to the nearest integer) after which the TCP window scale option is needed. Let β be the maximum possible window size with window scale option. Then the values of α and β are

- (A) 63 milliseconds, 65535×2^{14}
- (B) 63 milliseconds, 65535×2^{16}
- (C) 500 milliseconds, 65535×2^{14}
- (D) 500 milliseconds, 65535×2^{16}

Options :

- 1. ✘ A
- 2. ✘ B
- 3. ✔ C
- 4. ✘ D

Question Number : 39 Question Type : MCQ

Consider a simple checkpointing protocol and the following set of operations in the log.

(start, T4); (write, T4, y, 2, 3); (start, T1); (commit, T4); (write, T1, z, 5, 7);
(checkpoint);
(start, T2); (write, T2, x, 1, 9); (commit, T2); (start, T3); (write, T3, z, 7, 2);

If a crash happens now and the system tries to recover using both undo and redo operations, what are the contents of the undo list and the redo list?

- (A) Undo: T3, T1; Redo: T2
- (B) Undo: T3, T1; Redo: T2, T4
- (C) Undo: none; Redo: T2, T4, T3, T1
- (D) Undo: T3, T1, T4; Redo: T2

Options :

- 1. ✔ A
- 2. ✘ B
- 3. ✘ C

4. ✘ D

Question Number : 40 Question Type : MCQ

Consider two relations $R_1(A,B)$ with the tuples $(1,5)$, $(3,7)$ and $R_2(A,C) = (1,7)$, $(4,9)$. Assume that $R(A,B,C)$ is the full natural outer join of R_1 and R_2 . Consider the following tuples of the form (A,B,C) : $a = (1,5,null)$, $b = (1,null,7)$, $c = (3, null, 9)$, $d = (4,7,null)$, $e = (1,5,7)$, $f = (3,7,null)$, $g = (4,null,9)$. Which one of the following statements is correct?

- (A) R contains a, b, e, f, g but not c, d .
- (B) R contains all of a, b, c, d, e, f, g .
- (C) R contains e, f, g but not a, b .
- (D) R contains e but not f, g .

Options :

- 1. ✘ A
- 2. ✘ B
- 3. ✔ C
- 4. ✘ D

Question Number : 41 Question Type : MCQ

Consider six memory partitions of sizes 200 KB, 400 KB, 600 KB, 500 KB, 300 KB and 250 KB, where KB refers to kilobyte. These partitions need to be allotted to four processes of sizes 357 KB, 210 KB, 468 KB and 491 KB in that order. If the best fit algorithm is used, which partitions are NOT allotted to any process?

- (A) 200 KB and 300 KB
- (B) 200 KB and 250 KB
- (C) 250 KB and 300 KB
- (D) 300 KB and 400 KB

Options :

- 1. ✔ A
- 2. ✘ B
- 3. ✘ C
- 4. ✘ D

Question Number : 42 Question Type : NAT

Consider a typical disk that rotates at 15000 rotations per minute (RPM) and has a transfer rate of 50×10^6 bytes/sec. If the average seek time of the disk is twice the average rotational delay and the controller's transfer time is 10 times the disk transfer time, the average time (in milliseconds) to read or write a 512-byte sector of the disk is _____.

Correct Answer :

6.1 to 6.2

Question Number : 43 Question Type : NAT

A computer system implements 8 kilobyte pages and a 32-bit physical address space. Each page table entry contains a valid bit, a dirty bit, three permission bits, and the translation. If the maximum size of the page table of a process is 24 megabytes, the length of the virtual address supported by the system is _____ bits.

Correct Answer :

36

Question Number : 44 Question Type : MCQ

Consider the intermediate code given below.

- (1) $i = 1$
- (2) $j = 1$
- (3) $t1 = 5 * i$
- (4) $t2 = t1 + j$
- (5) $t3 = 4 * t2$
- (6) $t4 = t3$
- (7) $a[t4] = -1$
- (8) $j = j + 1$
- (9) if $j \leq 5$ goto (3)
- (10) $i = i + 1$
- (11) if $i < 5$ goto (2)

The number of nodes and edges in the control-flow-graph constructed for the above code, respectively, are

(A) 5 and 7

(B) 6 and 7

(C) 5 and 5

(D) 7 and 8

Options :

1. ✘ A

2. ✔ B

3. ✘ C

4. ✘ D

Question Number : 45 Question Type : NAT

The number of states in the minimal deterministic finite automaton corresponding to the regular expression $(0 + 1)^*(10)$ is _____.

Correct Answer :

3

Question Number : 46 Question Type : MCQ



www.questionpaperz.in
Unfold Every Question

Which of the following languages is/are regular?

$L_1: \{wxw^R \mid w, x \in \{a, b\}^* \text{ and } |w|, |x| > 0\}$, w^R is the reverse of string w

$L_2: \{a^n b^m \mid m \neq n \text{ and } m, n \geq 0\}$

$L_3: \{a^p b^q c^r \mid p, q, r \geq 0\}$

- (A) L_1 and L_3 only (B) L_2 only (C) L_2 and L_3 only (D) L_3 only

Options :

1. A
2. B
3. C
4. D

Question Number : 47 Question Type : MCQ

Given below are some algorithms, and some algorithm design paradigms.

- | | |
|--|-------------------------|
| 1. Dijkstra's Shortest Path | i. Divide and Conquer |
| 2. Floyd-Warshall algorithm to compute all pairs shortest path | ii. Dynamic Programming |
| 3. Binary search on a sorted array | iii. Greedy design |
| 4. Backtracking search on a graph | iv. Depth-first search |
| | v. Breadth-first search |

Match the above algorithms on the left to the corresponding design paradigm they follow.

- (A) 1-i, 2-iii, 3-i, 4-v.
(B) 1-iii, 2-iii, 3-i, 4-v.
(C) 1-iii, 2-ii, 3-i, 4-iv.
(D) 1-iii, 2-ii, 3-i, 4-v.

Options :

1. A
2. B
3. C
4. D

Question Number : 48 Question Type : NAT

A Young tableau is a 2D array of integers increasing from left to right and from top to bottom. Any unfilled entries are marked with ∞ , and hence there cannot be any entry to the right of, or below a ∞ . The following Young tableau consists of unique entries.

1	2	5	14
3	4	6	23
10	12	18	25
31	∞	∞	∞

When an element is removed from a Young tableau, other elements should be moved into its place so that the resulting table is still a Young tableau (unfilled entries may be filled in with a ∞). The minimum number of entries (other than 1) to be shifted, to remove 1 from the given Young tableau is _____.

Correct Answer :

5

Question Number : 49 Question Type : MCQ



Suppose you are provided with the following function declaration in the C programming language.

```
int partition(int a[], int n);
```

The function treats the first element of $a[]$ as a pivot, and rearranges the array so that all elements less than or equal to the pivot is in the left part of the array, and all elements greater than the pivot is in the right part. In addition, it moves the pivot so that the pivot is the last element of the left part. The return value is the number of elements in the left part.

The following partially given function in the C programming language is used to find the k^{th} smallest element in an array $a[]$ of size n using the partition function. We assume $k \leq n$.

```
int kth_smallest(int a[], int n, int k)
{
    int left_end = partition(a,n);

    if ( left_end+1 == k ){
        return a[left_end];
    }

    if ( left_end+1 > k ){
        return kth_smallest( _____ );
    } else {
        return kth_smallest( _____ );
    }
}
```

The missing argument lists are respectively

- (A) $(a, \text{left_end}, k)$ and $(a+\text{left_end}+1, n-\text{left_end}-1, k-\text{left_end}-1)$
- (B) $(a, \text{left_end}, k)$ and $(a, n-\text{left_end}-1, k-\text{left_end}-1)$
- (C) $(a+\text{left_end}+1, n-\text{left_end}-1, k-\text{left_end}-1)$ and $(a, \text{left_end}, k)$
- (D) $(a, n-\text{left_end}-1, k-\text{left_end}-1)$ and $(a, \text{left_end}, k)$

Options :

- 1. ✓ A
- 2. ✗ B
- 3. ✗ C
- 4. ✗ D

Question Number : 50 Question Type : MCQ

Which one of the following hash functions on integers will distribute keys most uniformly over 10 buckets numbered 0 to 9 for i ranging from 0 to 2020?

- (A) $h(i) = i^2 \bmod 10$
- (B) $h(i) = i^3 \bmod 10$
- (C) $h(i) = (11 * i^2) \bmod 10$
- (D) $h(i) = (12 * i) \bmod 10$

Options :

- 1. ✗ A
- 2. ✓ B



3. ✖ C

4. ✖ D

Question Number : 51 Question Type : MCQ

The secant method is used to find the root of an equation $f(x) = 0$. It is started from two distinct estimates x_a and x_b for the root. It is an iterative procedure involving linear interpolation to a root. The iteration stops if $f(x_b)$ is very small and then x_b is the solution. The procedure is given below. Observe that there is an expression which is missing and is marked by ?. Which is the suitable expression that is to be put in place of ? so that it follows all steps of the secant method?

Secant

```
Initialize:  $x_a, x_b, \epsilon, N$  //  $\epsilon$  = convergence indicator
// N = maximum no. of iterations

 $f_b = f(x_b)$ 
 $i = 0$ 
while ( $i < N$  and  $|f_b| > \epsilon$ ) do
     $i = i + 1$  // update counter
     $x_t = ?$  // missing expression for
// intermediate value

     $x_a = x_b$  // reset  $x_a$ 
     $x_b = x_t$  // reset  $x_b$ 
     $f_b = f(x_b)$  // function value at new  $x_b$ 
end while
if  $|f_b| > \epsilon$  then // loop is terminated with  $i=N$ 
    write "Non-convergence"
else
    write "return  $x_b$ "
end if
```

(A) $x_b - (f_b - f(x_a)) f_b / (x_b - x_a)$

(B) $x_a - (f_a - f(x_a)) f_a / (x_b - x_a)$

(C) $x_b - (x_b - x_a) f_b / (f_b - f(x_a))$

(D) $x_a - (x_b - x_a) f_a / (f_b - f(x_a))$

Options :

1. ✖ A

2. ✖ B

3. ✔ C

4. ✖ D

Question Number : 52 Question Type : NAT



Consider the C program below.

```
#include <stdio.h>
int *A, stkTop;

int stkFunc(int opcode, int val)
{
    static int size=0, stkTop=0;

    switch (opcode) {
        case -1: size = val; break;
        case 0: if (stkTop < size) A[stkTop++] = val; break;
        default: if (stkTop) return A[--stkTop];
    }
    return -1;
}

int main()
{
    int B[20]; A = B; stkTop = -1;

    stkFunc (-1, 10);
    stkFunc ( 0, 5);
    stkFunc ( 0, 10);
    printf ("%d\n", stkFunc(1, 0) + stkFunc(1, 0));
}
```

The value printed by the above program is _____.

Correct Answer :

15

Question Number : 53 Question Type : NAT



Consider the sequence of machine instructions given below:

MUL	R5, R0, R1
DIV	R6, R2, R3
ADD	R7, R5, R6
SUB	R8, R7, R4

In the above sequence, R0 to R8 are general purpose registers. In the instructions shown, the first register stores the result of the operation performed on the second and the third registers. This sequence of instructions is to be executed in a pipelined instruction processor with the following 4 stages: (1) Instruction Fetch and Decode (IF), (2) Operand Fetch (OF), (3) Perform Operation (PO) and (4) Write back the result (WB). The IF, OF and WB stages take 1 clock cycle each for any instruction. The PO stage takes 1 clock cycle for ADD or SUB instruction, 3 clock cycles for MUL instruction and 5 clock cycles for DIV instruction. The pipelined processor uses operand forwarding from the PO stage to the OF stage. The number of clock cycles taken for the execution of the above sequence of instructions is _____.

Correct Answer :

13

Question Number : 54 Question Type : MCQ

Consider a processor with byte-addressable memory. Assume that all registers, including Program Counter (PC) and Program Status Word (PSW), are of size 2 bytes. A stack in the main memory is implemented from memory location $(0100)_{16}$ and it grows upward. The stack pointer (SP) points to the top element of the stack. The current value of SP is $(016E)_{16}$. The CALL instruction is of two words, the first word is the op-code and the second word is the starting address of the subroutine (one word = 2 bytes). The CALL instruction is implemented as follows:

- Store the current value of PC in the stack
- Store the value of PSW register in the stack
- Load the starting address of the subroutine in PC

The content of PC just before the fetch of a CALL instruction is $(5FA0)_{16}$. After execution of the CALL instruction, the value of the stack pointer is

- (A) $(016A)_{16}$ (B) $(016C)_{16}$ (C) $(0170)_{16}$ (D) $(0172)_{16}$

Options :

1. ✘ A
2. ✘ B
3. ✘ C
4. ✔ D

Question Number : 55 Question Type : NAT



The number of min-terms after minimizing the following Boolean expression is _____.

$$[D' + AB' + A'C + AC'D + A'C'D]'$$

Correct Answer :

1

Question Number : 56 Question Type : MCQ

Let $f(x) = x^{-(1/3)}$ and A denote the area of the region bounded by $f(x)$ and the X-axis, when x varies from -1 to 1 . Which of the following statements is/are TRUE?

- I) f is continuous in $[-1, 1]$
- II) f is not bounded in $[-1, 1]$
- III) A is nonzero and finite

(A) II only

(B) III only

(C) II and III only

(D) I, II and III

Options :

- 1. ✘ A
- 2. ✘ B
- 3. ✔ C
- 4. ✘ D

Question Number : 57 Question Type : NAT

Perform the following operations on the matrix $\begin{bmatrix} 3 & 4 & 45 \\ 7 & 9 & 105 \\ 13 & 2 & 195 \end{bmatrix}$.

- (i) Add the third row to the second row
- (ii) Subtract the third column from the first column.

The determinant of the resultant matrix is _____.

Correct Answer :

0

Question Number : 58 Question Type : NAT

The number of onto functions (surjective functions) from set $X = \{1, 2, 3, 4\}$ to set $Y = \{a, b, c\}$ is _____.



Correct Answer :

36

Question Number : 59 Question Type : NAT

Let X and Y denote the sets containing 2 and 20 distinct objects respectively and F denote the set of all possible functions defined from X to Y . Let f be randomly chosen from F . The probability of f being one-to-one is _____.

Correct Answer :

0.95

Question Number : 60 Question Type : MCQ

Consider the alphabet $\Sigma = \{0, 1\}$, the null/empty string λ and the sets of strings X_0 , X_1 , and X_2 generated by the corresponding non-terminals of a regular grammar. X_0 , X_1 , and X_2 are related as follows.

$$X_0 = 1 X_1$$

$$X_1 = 0 X_1 + 1 X_2$$

$$X_2 = 0 X_1 + \{\lambda\}$$

Which one of the following choices precisely represents the strings in X_0 ?

(A) $10(0^* + (10)^*)1$

(B) $10(0^* + (10)^*)^*1$

(C) $1(0 + 10)^*1$

(D) $10(0 + 10)^*1 + 110(0 + 10)^*1$

Options :

1. ✘ A

2. ✘ B

3. ✔ C

4. ✘ D

Question Number : 61 Question Type : MCQ

A graph is self-complementary if it is isomorphic to its complement. For all self-complementary graphs on n vertices, n is

(A) A multiple of 4

(B) Even

(C) Odd

(D) Congruent to 0 mod 4, or, 1 mod 4.

Options :

1. ✘ A



2. ✘ B
3. ✘ C
4. ✔ D

Question Number : 62 Question Type : MCQ

In a connected graph, a bridge is an edge whose removal disconnects a graph. Which one of the following statements is true?

- (A) A tree has no bridges
- (B) A bridge cannot be part of a simple cycle
- (C) Every edge of a clique with size ≥ 3 is a bridge (A clique is any complete subgraph of a graph)
- (D) A graph with bridges cannot have a cycle

Options :

1. ✘ A
2. ✔ B
3. ✘ C
4. ✘ D

Question Number : 63 Question Type : MCQ

Which one of the following well formed formulae is a tautology?

- (A) $\forall x \exists y R(x, y) \leftrightarrow \exists y \forall x R(x, y)$
- (B) $(\forall x [\exists y R(x, y) \rightarrow S(x, y)]) \rightarrow \forall x \exists y S(x, y)$
- (C) $[\forall x \exists y (P(x, y) \rightarrow R(x, y))] \leftrightarrow [\forall x \exists y (\neg P(x, y) \vee R(x, y))]$
- (D) $\forall x \forall y P(x, y) \rightarrow \forall x \forall y P(y, x)$

Options :

1. ✘ A
2. ✘ B
3. ✔ C
4. ✘ D

Question Number : 64 Question Type : MCQ

Which one of the following assertions concerning code inspection and code walkthrough is true?

- (A) Code inspection is carried out once the code has been unit tested
- (B) Code inspection and code walkthrough are synonyms
- (C) Adherence to coding standards is checked during code inspection
- (D) Code walkthrough is usually carried out by an independent test team

Options :

1. ✘ A
2. ✘ B
3. ✔ C
4. ✘ D



www.questionpaperz.in
Unfold Every Question

Question Number : 65 Question Type : NAT

A half adder is implemented with XOR and AND gates. A full adder is implemented with two half adders and one OR gate. The propagation delay of an XOR gate is twice that of an AND/OR gate. The propagation delay of an AND/OR gate is 1.2 microseconds. A 4-bit ripple-carry binary adder is implemented by using four full adders. The total propagation time of this 4-bit binary adder in microseconds is _____.

Correct Answer:

19.2



SESSION - 3

Graduate Aptitude Test in Engineering

Notations :

- Options shown in green color and with ✓ icon are correct.
- Options shown in red color and with ✗ icon are incorrect.

Question Paper Name: CS: COMPUTER SCIENCE AND INFORMATION TECHNOLOGY 8th Feb Shift1
Number of Questions: 65
Total Marks: 100.0

Wrong answer for MCQ will result in negative marks, (-1/3) for 1 mark Questions and (-2/3) for 2 marks Questions.

General Aptitude

Number of Questions: 10
Section Marks: 15.0

Q.1 to Q.5 carry 1 mark each & Q.6 to Q.10 carry 2 marks each.

Question Number : 1 Question Type : MCQ

Extreme focus on syllabus and studying for tests has become such a dominant concern of Indian students that they close their minds to anything _____ to the requirements of the exam.

- (A) related (B) extraneous (C) outside (D) useful

Options :

- ✗ A
- ✓ B
- ✗ C
- ✗ D

Question Number : 2 Question Type : MCQ

Select the pair that best expresses a relationship similar to that expressed in the pair:

Children : Pediatrician

- (A) Adult : Orthopaedist (B) Females : Gynaecologist
(C) Kidney : Nephrologist (D) Skin : Dermatologist

Options :

- ✗ A
- ✓ B
- ✗ C
- ✗ D

Question Number : 3 Question Type : MCQ



The Tamil version of _____ John Abraham-starrer *Madras Cafe* _____ cleared by the Censor Board with no cuts last week, but the film's distributors _____ no takers among the exhibitors for a release in Tamil Nadu _____ this Friday.

- (A) Mr., was, found, on
(B) a, was, found, at
(C) the, was, found, on
(D) a, being, find at

Options :

1. ✘ A
2. ✘ B
3. ✔ C
4. ✘ D

Question Number : 4 Question Type : MCQ

If ROAD is written as URDG, then SWAN should be written as:

- (A) VXDQ
(B) VZDQ
(C) VZDP
(D) UXDQ

Options :

1. ✘ A
2. ✔ B
3. ✘ C
4. ✘ D

Question Number : 5 Question Type : MCQ

A function $f(x)$ is linear and has a value of 29 at $x = -2$ and 39 at $x = 3$. Find its value at $x = 5$.

- (A) 59
(B) 45
(C) 43
(D) 35

Options :

1. ✘ A
2. ✘ B
3. ✔ C
4. ✘ D

Question Number : 6 Question Type : MCQ

Alexander turned his attention towards India, since he had conquered Persia.

Which one of the statements below is logically valid and can be inferred from the above sentence?

- (A) Alexander would not have turned his attention towards India had he not conquered Persia.
(B) Alexander was not ready to rest on his laurels, and wanted to march to India.
(C) Alexander was completely in control of his army and could command it to move towards India.
(D) Since Alexander's kingdom extended to Indian borders after the conquest of Persia, he was keen to move further.

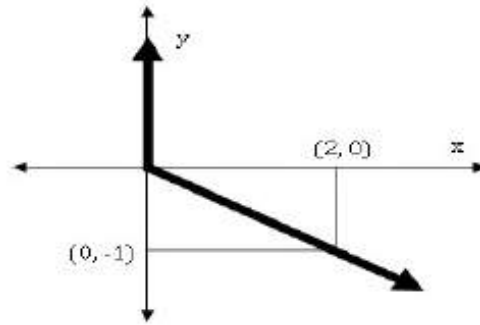
Options :

Correct Answer:

2006

Question Number : 9 Question Type : MCQ

Choose the most appropriate equation for the function drawn as a thick line, in the plot below.



(A) $x = y - |y|$

(B) $x = -(y - |y|)$

(C) $x = y + |y|$

(D) $x = -(y + |y|)$

Options :

1. ✘ A
2. ✔ B
3. ✘ C
4. ✘ D

Question Number : 10 Question Type : MCQ

The head of a newly formed government desires to appoint five of the six selected members P, Q, R, S, T, and U to portfolios of Home, Power, Defense, Telecom, and Finance. U does not want any portfolio if S gets one of the five. R wants either Home or Finance or no portfolio. Q says that if S gets either Power or Telecom, then she must get the other one. T insists on a portfolio if P gets one.

Which is the valid distribution of portfolios?

- (A) P-Home, Q-Power, R-Defense, S-Telecom, T-Finance
- (B) R-Home, S-Power, P-Defense, Q-Telecom, T-Finance
- (C) P-Home, Q-Power, T-Defense, S-Telecom, U-Finance
- (D) Q-Home, U-Power, T-Defense, R-Telecom, P-Finance

Options :

1. ✘ A
2. ✔ B
3. ✘ C
4. ✘ D

Computer Science and Information Technology

Number of Questions:

55

Section Marks:

85.

www.questionpaperz.in

Unfold Every Question

Q.11 to Q.35 carry 1 mark each & Q.36 to Q.65 carry 2 marks each.

Question Number : 11 Question Type : MCQ

Consider the following C program segment.

```
#include <stdio.h>

int main()
{
    char s1[7] = "1234", *p;
    p = s1 + 2;
    *p = '\0';
    printf("%s", s1);
}
```

What will be printed by the program?

- (A) 12 (B) 120400 (C) 1204 (D) 1034

Options :

1. ✘ A
2. ✘ B
3. ✔ C
4. ✘ D

Question Number : 12 Question Type : MCQ

Suppose U is the power set of the set $S = \{1,2,3,4,5,6\}$. For any $T \in U$, let $|T|$ denote the number of elements in T and T' denote the complement of T . For any $T, R \in U$, let $T \setminus R$ be the set of all elements in T which are not in R . Which one of the following is true?

- (A) $\forall X \in U (|X| = |X'|)$
(B) $\exists X \in U \exists Y \in U (|X| = 5, |Y| = 5 \text{ and } X \cap Y = \emptyset)$
(C) $\forall X \in U \forall Y \in U (|X| = 2, |Y| = 3 \text{ and } X \setminus Y = \emptyset)$
(D) $\forall X \in U \forall Y \in U (X \setminus Y = Y' \setminus X')$

Options :

1. ✘ A
2. ✘ B
3. ✘ C
4. ✔ D

Question Number : 13 Question Type : MCQ

Consider the relation $X(P, Q, R, S, T, U)$ with the following set of functional dependencies

$$F = \left\{ \begin{array}{l} \{P, R\} \rightarrow \{S, T\}, \\ \{P, S, U\} \rightarrow \{Q, R\} \end{array} \right\}$$

Which of the following is the trivial functional dependency in F^+ , where F^+ is closure of F ?

- (A) $\{P, R\} \rightarrow \{S, T\}$ (B) $\{P, R\} \rightarrow \{R, T\}$ (C) $\{P, S\} \rightarrow \{Q, R\}$

Options :

1. ✘ A



2. ✘ B
3. ✔ C
4. ✘ D

Question Number : 14 Question Type : MCQ

The maximum number of processes that can be in *Ready* state for a computer system with n CPUs is

- (A) n (B) n^2 (C) 2^n (D) Independent of n

Options :

1. ✘ A
2. ✘ B
3. ✘ C
4. ✔ D

Question Number : 15 Question Type : MCQ

Among simple LR (SLR) , canonical LR, and look-ahead LR (LALR), which of the following pairs identify the method that is very easy to implement and the method that is the most powerful , in that order?

- (A) SLR, LALR
(B) Canonical LR, LALR
(C) SLR, canonical LR
(D) LALR, canonical LR

Options :

1. ✘ A
2. ✘ B
3. ✔ C
4. ✘ D

Question Number : 16 Question Type : MCQ

Let # be a binary operator defined as

$$X \# Y = X' + Y' \text{ where } X \text{ and } Y \text{ are Boolean variables.}$$

Consider the following two statements.

- (S1) $(P \# Q) \# R = P \# (Q \# R)$
(S2) $Q \# R = R \# Q$

Which of the following is/are true for the Boolean variables P , Q and R ?

- (A) Only S1 is true
(B) Only S2 is true
(C) Both S1 and S2 are true
(D) Neither S1 nor S2 are true

Options :

1. ✘ A



2. ✓ B
3. ✗ C
4. ✗ D

Question Number : 17 Question Type : NAT

Consider a software project with the following information domain characteristics for calculation of function point metric.

Number of external inputs (I) = 30
Number of external outputs (O) = 60
Number of external inquiries (E) = 23
Number of files (F) = 08
Number of external interfaces (N) = 02

It is given that the complexity weighting factors for I, O, E, F and N are 4, 5, 4, 10 and 7, respectively. It is also given that, out of fourteen value adjustment factors that influence the development effort, four factors are not applicable, each of the other four factors have value 3, and each of the remaining factors have value 4. The computed value of function point metric is _____.

Correct Answer:

612 to 613

Question Number : 18 Question Type : MCQ

In a web server, ten WebPages are stored with the URLs of the form `http://www.yourname.com/var.html`; where, *var* is a different number from 1 to 10 for each Webpage. Suppose, the client stores the Webpage with *var* = 1 (say W1) in local machine, edits and then tests. Rest of the WebPages remains on the web server. W1 contains several relative URLs of the form "*var.html*" referring to the other WebPages. Which one of the following statements needs to be added in W1, so that all the relative URLs in W1 refer to the appropriate WebPages on the web server?

- (A) `<a href: "http://www.yourname.com/", href: "...var.html">`
- (B) `<base href: "http://www.yourname.com/">`
- (C) `<a href: "http://www.yourname.com/">`
- (D) `<base href: "http://www.yourname.com/", range:"...var.html">`

Options :

1. ✗ A
2. ✓ B
3. ✗ C
4. ✗ D

Question Number : 19 Question Type : MCQ



Consider the following statements.

- I. TCP connections are full duplex
- II. TCP has no option for selective acknowledgement
- III. TCP connections are message streams

- (A) Only I is correct
- (B) Only I and III are correct
- (C) Only II and III are correct
- (D) All of I, II and III are correct

Options :

- 1. ✓ A
- 2. ✗ B
- 3. ✗ C
- 4. ✗ D

Question Number : 20 Question Type : MCQ

Consider the equality $\sum_{i=0}^n i^3 = X$ and the following choices for X

- I. $\Theta(n^4)$
- II. $\Theta(n^5)$
- III. $O(n^5)$
- IV. $\Omega(n^3)$

The equality above remains correct if X is replaced by

- (A) Only I
- (B) Only II
- (C) I or III or IV but not II
- (D) II or III or IV but not I

Options :

- 1. ✗ A
- 2. ✗ B
- 3. ✓ C
- 4. ✗ D

Question Number : 21 Question Type : NAT

Consider a binary tree T that has 200 leaf nodes. Then, the number of nodes in T that have exactly two children are _____.

Correct Answer :

199

Question Number : 22 Question Type : NAT



Given a hash table T with 25 slots that stores 2000 elements, the load factor α for T is _____.

Correct Answer :

80

Question Number : 23 Question Type : MCQ

In the given matrix $\begin{bmatrix} 1 & -1 & 2 \\ 0 & 1 & 0 \\ 1 & 2 & 1 \end{bmatrix}$, one of the eigenvalues is 1. The eigenvectors corresponding to the eigenvalue 1 are

(A) $\{\alpha(4,2,1) | \alpha \neq 0, \alpha \in \mathbb{R}\}$

(B) $\{\alpha(-4,2,1) | \alpha \neq 0, \alpha \in \mathbb{R}\}$

(C) $\{\alpha(\sqrt{2}, 0, 1) | \alpha \neq 0, \alpha \in \mathbb{R}\}$

(D) $\{\alpha(-\sqrt{2}, 0, 1) | \alpha \neq 0, \alpha \in \mathbb{R}\}$

Options :

- ✘ A
- ✔ B
- ✘ C
- ✘ D

Question Number : 24 Question Type : MCQ

The value of $\lim_{x \rightarrow \infty} (1 + x^2)^{e^{-x}}$ is

- (A) 0 (B) $\frac{1}{2}$ (C) 1 (D) ∞

Options :

- ✘ A
- ✘ B
- ✔ C
- ✘ D

Question Number : 25 Question Type : NAT

The number of 4 digit numbers having their digits in non-decreasing order (from left to right) constructed by using the digits belonging to the set $\{1, 2, 3\}$ is _____.

Correct Answer :

15

Question Number : 26 Question Type : MCQ

In a room there are only two types of people, namely Type 1 and Type 2. Type 1 people always tell the truth and Type 2 people always lie. You give a fair coin to a person in that room, without knowing which type he is from and tell him to toss it and hide the result from you till you ask for it. Upon asking, the person replies the following

“The result of the toss is head if and only if I am telling the truth.”

Which of the following options is correct?

- (A) The result is head
- (B) The result is tail
- (C) If the person is of Type 2, then the result is tail
- (D) If the person is of Type 1, then the result is tail

Options :

- 1. ✓ A
- 2. ✗ B
- 3. ✗ C
- 4. ✗ D

Question Number : 27 Question Type : MCQ

While inserting the elements 71, 65, 84, 69, 67, 83 in an empty binary search tree (BST) in the sequence shown, the element in the lowest level is

- (A) 65
- (B) 67
- (C) 69
- (D) 83

Options :

- 1. ✗ A
- 2. ✓ B
- 3. ✗ C
- 4. ✗ D

Question Number : 28 Question Type : MCQ

The result evaluating the postfix expression $10\ 5\ +\ 60\ 6\ /\ * 8\ -$ is

- (A) 284
- (B) 213
- (C) 142
- (D) 71

Options :

- 1. ✗ A
- 2. ✗ B
- 3. ✓ C
- 4. ✗ D

Question Number : 29 Question Type : MCQ



Consider the following relation

Cinema(theater, address, capacity)

Which of the following options will be needed at the end of the SQL query

```
SELECT P1.address  
FROM Cinema P1
```

such that it always finds the addresses of theaters with maximum capacity?

- (A) WHERE P1.capacity >= All (select P2.capacity from Cinema P2)
- (B) WHERE P1.capacity >= Any (select P2.capacity from Cinema P2)
- (C) WHERE P1.capacity > All (select max(P2.capacity) from Cinema P2)
- (D) WHERE P1.capacity > Any (select max(P2.capacity) from Cinema P2)

Options :

- 1. ✓ A
- 2. ✗ B
- 3. ✗ C
- 4. ✗ D

Question Number : 30 Question Type : MCQ

Consider the following array of elements.

{89, 19, 50, 17, 12, 15, 2, 5, 7, 11, 6, 9, 100}

The minimum number of interchanges needed to convert it into a max-heap is

- (A) 4 (B) 5 (C) 2 (D) 3

Options :

- 1. ✗ A
- 2. ✗ B
- 3. ✗ C
- 4. ✓ D

Question Number : 31 Question Type : MCQ



Two processes X and Y need to access a critical section. Consider the following synchronization construct used by both the processes

<u>Process X</u>	<u>Process Y</u>
<pre> /* other code for process X */ while(true) { varP = true; while(varQ == true) { /* Critical Section */ varP = false; } } /* other code for process X */ </pre>	<pre> /* other code for process Y */ while(true) { varQ = true; while(varP == true) { /* Critical Section */ varQ = false; } } /* other code for process Y */ </pre>

Here, $varP$ and $varQ$ are shared variables and both are initialized to false. Which one of the following statements is true?

- (A) The proposed solution prevents deadlock but fails to guarantee mutual exclusion
- (B) The proposed solution guarantees mutual exclusion but fails to prevent deadlock
- (C) The proposed solution guarantees mutual exclusion and prevents deadlock
- (D) The proposed solution fails to prevent deadlock and fails to guarantee mutual exclusion

Options :

- 1. ✓ A
- 2. ✗ B
- 3. ✗ C
- 4. ✗ D

Question Number : 32 Question Type : MCQ

Let L be the language represented by the regular expression $\Sigma^*0011\Sigma^*$ where $\Sigma = \{0, 1\}$. What is the minimum number of states in a DFA that recognizes \bar{L} (complement of L)?

- (A) 4
- (B) 5
- (C) 6
- (D) 8

Options :

- 1. ✗ A
- 2. ✓ B
- 3. ✗ C
- 4. ✗ D

Question Number : 33 Question Type : NAT

Consider a software program that is artificially seeded with 100 faults. While testing this program, 159 faults are detected, out of which 75 faults are from those artificially seeded faults. Assuming that both real and seeded faults are of same nature and have same distribution, the estimated number of undetected real faults is _____.

Correct Answer :

28

Question Number : 34 Question Type : MCQ

Consider a machine with a byte addressable main memory of 2^{20} bytes, block size of 16 bytes and a direct mapped cache having 2^{12} cache lines. Let the addresses of two consecutive bytes in main memory be $(E201F)_{16}$ and $(E2020)_{16}$. What are the tag and cache line address (in hex) for main memory address $(E201F)_{16}$?

(A) E, 201

(B) F, 201

(C) E, E20

(D) 2, 01F

Options :

1. ✓ A

2. ✗ B

3. ✗ C

4. ✗ D

Question Number : 35 Question Type : MCQ

Consider a CSMA/CD network that transmits data at a rate of 100 Mbps (10^8 bits per second) over a 1 km (kilometer) cable with no repeaters. If the minimum frame size required for this network is 1250 bytes, what is the signal speed (km/sec) in the cable?

(A) 8000

(B) 10000

(C) 16000

(D) 20000

Options :

1. ✗ A

2. ✗ B

3. ✗ C

4. ✓ D

Question Number : 36 Question Type : NAT

The velocity v (in kilometer/minute) of a motorbike which starts from rest, is given at fixed intervals of time t (in minutes) as follows:

t	2	4	6	8	10	12	14	16	18	20
v	10	18	25	29	32	20	11	5	2	0

The approximate distance (in kilometers) rounded to two places of decimals covered in 20 minutes using Simpson's $1/3^{\text{rd}}$ rule is _____.

Correct Answer :

308 to 310

Question Number : 37 Question Type : MCQ

Assume that a mergesort algorithm in the worst case takes 30 seconds for an input of size 64. Which of the following most closely approximates the maximum input size of a problem that can be solved in 6 minutes?

- (A) 256 (B) 512 (C) 1024 (D) 2048

Options :

1. ✘ A
2. ✔ B
3. ✘ C
4. ✘ D

Question Number : 38 Question Type : MCQ

Consider the following recursive C function.

```
void get(int n)
{
    if (n<1) return;
    get(n-1);
    get(n-3);
    printf("%d", n);
}
```

If get (6) function is being called in main () then how many times will the get () function be invoked before returning to the main () ?

- (A) 15 (B) 25 (C) 35 (D) 45

Options :

1. ✘ A
2. ✔ B
3. ✘ C
4. ✘ D

Question Number : 39 Question Type : NAT

Consider a B+ tree in which the search key is 12 bytes long, block size is 1024 bytes, record pointer is 10 bytes long and block pointer is 8 bytes long. The maximum number of keys that can be accommodated in each non-leaf node of the tree is _____.

Correct Answer :

50

Question Number : 40 Question Type : MCQ



Given the function $F = P' + QR$, where F is a function in three Boolean variables P, Q and R and $P' = !P$, consider the following statements.

- (S1) $F = \sum(4, 5, 6)$
- (S2) $F = \sum(0, 1, 2, 3, 7)$
- (S3) $F = \prod(4, 5, 6)$
- (S4) $F = \prod(0, 1, 2, 3, 7)$

Which of the following is true?

- (A) (S1)- False, (S2)- True, (S3)- True, (S4)- False
- (B) (S1)- True, (S2)- False, (S3)- False, (S4)- True
- (C) (S1)- False, (S2)- False, (S3)- True, (S4)- True
- (D) (S1)- True, (S2)- True, (S3)- False, (S4)- False

Options :

- 1. ✓ A
- 2. ✗ B
- 3. ✗ C
- 4. ✗ D

Question Number : 41 Question Type : MCQ

Language L_1 is polynomial time reducible to language L_2 . Language L_3 is polynomial time reducible to L_2 , which in turn is polynomial time reducible to language L_4 . Which of the following is/are true?

- I. if $L_4 \in P$, then $L_2 \in P$
- II. if $L_1 \in P$ or $L_3 \in P$, then $L_2 \in P$
- III. $L_1 \in P$, if and only if $L_3 \in P$
- IV. if $L_4 \in P$, then $L_1 \in P$ and $L_3 \in P$

- (A) II only
- (B) III only
- (C) I and IV only
- (D) I only

Options :

- 1. ✗ A
- 2. ✗ B
- 3. ✓ C
- 4. ✗ D

Question Number : 42 Question Type : NAT



Consider the following C program.

```
#include<stdio.h>
int f1(void);
int f2(void);
int f3(void);
int x = 10;

int main( )
{
    int x = 1;
    x += f1( ) + f2( ) + f3( ) + f2( );
    printf("%d", x);
    return 0;
}

int f1() { int x = 25; x++; return x;}
int f2() { static int x = 50; x++; return x;}
int f3() { x *= 10; return x};
```

The output of the program is _____.

Correct Answer :

230

Question Number : 43 Question Type : NAT

Consider the following C program.

```
#include<stdio.h>
int main( )
{
    static int a[ ] = {10, 20, 30, 40, 50};
    static int *p[ ] = {a, a+3, a+4, a+1, a+2};
    int **ptr = p;
    ptr++;
    printf("%d%d", ptr-p, **ptr);
}
```

The output of the program is _____.

Correct Answer :

140

Question Number : 44 Question Type : MCQ

Which of the following languages are context-free?

$$L_1 = \{a^m b^n a^n b^m \mid m, n \geq 1\}$$

$$L_2 = \{a^m b^n a^m b^n \mid m, n \geq 1\}$$

$$L_3 = \{a^m b^n \mid m = 2n + 1\}$$

- (A) L_1 and L_2 only (B) L_1 and L_3 only (C) L_2 and L_3 only (D) L_3 only

Options :

1. ✘ A
2. ✔ B
3. ✘ C
4. ✘ D

Question Number : 45 Question Type : MCQ

Consider the following policies for preventing deadlock in a system with mutually exclusive resources.

- I. Processes should acquire all their resources at the beginning of execution. If any resource is not available, all resources acquired so far are released
- II. The resources are numbered uniquely, and processes are allowed to request for resources only in increasing resource numbers
- III. The resources are numbered uniquely, and processes are allowed to request for resources only in decreasing resource numbers
- IV. The resources are numbered uniquely. A process is allowed to request only for a resource with resource number larger than its currently held resources

Which of the above policies can be used for preventing deadlock?

- (A) Any one of I and III but not II or IV
(B) Any one of I, III, and IV but not II
(C) Any one of II and III but not I or IV
(D) Any one of I, II, III, and IV

Options :

1. ✘ A
2. ✘ B
3. ✘ C
4. ✔ D

Question Number : 46 Question Type : NAT

In the network 200.10.11.144/27, the fourth octet (in decimal) of the last IP address of the network which can be assigned to a host is _____.

Correct Answer:

158



www.questionpaperz.in
Unfold Every Question

Question Number : 47 Question Type : NAT

Consider a network connecting two systems located 8000 kilometers apart. The bandwidth of the network is 500×10^6 bits per second. The propagation speed of the media is 4×10^6 meters per second. It is needed to design a Go-Back- N sliding window protocol for this network. The average packet size is 10^7 bits. The network is to be used to its full capacity. Assume that processing delays at nodes are negligible. Then, the minimum size in bits of the sequence number field has to be _____.

Correct Answer:

8

Question Number : 48 Question Type : NAT

Consider the following reservation table for a pipeline having three stages S_1, S_2 and S_3 .

		Time \rightarrow				
		1	2	3	4	5
S_1	X					X
S_2		X		X		
S_3			X			

The minimum average latency (MAL) is _____.

Correct Answer :

3

Question Number : 49 Question Type : MCQ



Consider the following code sequence having five instructions I_1 to I_5 . Each of these instructions has the following format.

OP Ri, Rj, Rk

where operation OP is performed on contents of registers Rj and Rk and the result is stored in register Ri.

I_1 : ADD R1, R2, R3

I_2 : MUL R7, R1, R3

I_3 : SUB R4, R1, R5

I_4 : ADD R3, R2, R4

I_5 : MUL R7, R8, R9

Consider the following three statements.

S1: There is an anti-dependence between instructions I_2 and I_5

S2: There is an anti-dependence between instructions I_2 and I_4

S3: Within an instruction pipeline an anti-dependence always creates one or more stalls

Which one of above statements is/are correct?

- (A) Only S1 is true
- (B) Only S2 is true
- (C) Only S1 and S3 are true
- (D) Only S2 and S3 are true

Options :

- 1. ✘ A
- 2. ✔ B
- 3. ✘ C
- 4. ✘ D

Question Number : 50 Question Type : MCQ



Consider the following two C code segments. Y and X are one and two dimensional arrays of size n and $n \times n$ respectively, where $2 \leq n \leq 10$. Assume that in both code segments, elements of Y are initialized to 0 and each element $X[i][j]$ of array X is initialized to $i+j$. Further assume that when stored in main memory all elements of X are in same main memory page frame.

Code segment 1:

```
//initialize elements of Y to 0
//initialize elements X[i][j] of X to i+j

for(i = 0; i < n; i++)
    Y[i] += X[0][i];
```

Code Segment 2:

```
//initialize elements of Y to 0
//initialize elements X[i][j] of X to i+j

for(i = 0; i < n; i++)
    Y[i] += X[i][0];
```

Which of the following statements is/are correct?

- S1: Final contents of array Y will be same in both code segments
- S2: Elements of array X accessed inside the for loop shown in code segment 1 are contiguous in main memory
- S3: Elements of array X accessed inside the for loop shown in code segment 2 are contiguous in main memory

- (A) Only S2 is correct
- (B) Only S3 is correct
- (C) Only S1 and S2 are correct
- (D) Only S1 and S3 are correct

Options :

- 1. ✘ A
- 2. ✘ B
- 3. ✔ C
- 4. ✘ D

Question Number : 51 Question Type : MCQ



Consider the following partial Schedule S involving two transactions $T1$ and $T2$. Only the *read* and the *write* operations have been shown. The *read* operation on data item P is denoted by $read(P)$ and the *write* operation on data item P is denoted by $write(P)$.

Time instance	Transaction-id	
	$T1$	$T2$
1	$read(A)$	
2	$write(A)$	
3		$read(C)$
4		$write(C)$
5		$read(B)$
6		$write(B)$
7		$read(A)$
8		$commit$
9	$read(B)$	

Schedule S

Suppose that the transaction $T1$ fails immediately after time instance 9. Which one of the following statements is correct?

- (A) $T2$ must be aborted and then both $T1$ and $T2$ must be re-started to ensure transaction atomicity
- (B) Schedule S is non-recoverable and cannot ensure transaction atomicity
- (C) Only $T2$ must be aborted and then re-started to ensure transaction atomicity
- (D) Schedule S is recoverable and can ensure atomicity and nothing else needs to be done

Options :

- 1. ✘ A
- 2. ✔ B
- 3. ✘ C
- 4. ✘ D

Question Number : 52 Question Type : MCQ

If the following system has non-trivial solution,

$$px + qy + rz = 0$$

$$qx + ry + pz = 0$$

$$rx + py + qz = 0,$$

then which one of the following options is TRUE?

- (A) $p - q + r = 0$ or $p = q = -r$
- (B) $p + q - r = 0$ or $p = -q = r$
- (C) $p + q + r = 0$ or $p = q = r$
- (D) $p - q + r = 0$ or $p = -q = -r$

Options :

- 1. ✘ A
- 2. ✘ B
- 3. ✔ C
- 4. ✘ D



Question Number : 53 Question Type : NAT

Consider the following C program:

```
#include<stdio.h>
int main( )
{
    int i, j, k = 0;
    j = 2 * 3 / 4 + 2.0 / 5 + 8 / 5;
    k -= --j;
    for(i = 0; i < 5; i++)
    {
        switch(i + k)
        {
            case 1:
            case 2: printf("\n%d", i+k);
            case 3: printf("\n%d", i+k);
            default: printf("\n%d", i+k);
        }
    }
    return 0;
}
```

The number of times printf statement is executed is _____.

Correct Answer:

10

Question Number : 54 Question Type : MCQ

If for non-zero x , $af(x) + bf\left(\frac{1}{x}\right) = \frac{1}{x} - 25$ where $a \neq b$ then $\int_1^2 f(x)dx$ is

- (A) $\frac{1}{a^2 - b^2} \left[a(\ln 2 - 25) + \frac{47b}{2} \right]$
- (B) $\frac{1}{a^2 - b^2} \left[a(2 \ln 2 - 25) - \frac{47b}{2} \right]$
- (C) $\frac{1}{a^2 - b^2} \left[a(2 \ln 2 - 25) + \frac{47b}{2} \right]$
- (D) $\frac{1}{a^2 - b^2} \left[a(\ln 2 - 25) - \frac{47b}{2} \right]$

Options :

1. ✓ A
2. ✗ B
3. ✗ C
4. ✗ D



Question Number : 55 Question Type : NAT

Let G be a connected undirected graph of 100 vertices and 300 edges. The weight of a minimum spanning tree of G is 500. When the weight of each edge of G is increased by five, the weight of a minimum spanning tree becomes _____.

Correct Answer :

995

Question Number : 56 Question Type : NAT

Two hosts are connected via a packet switch with 10^7 bits per second links. Each link has a propagation delay of 20 microseconds. The switch begins forwarding a packet 35 microseconds after it receives the same. If 10000 bits of data are to be transmitted between the two hosts using a packet size of 5000 bits, the time elapsed between the transmission of the first bit of data and the reception of the last bit of the data in microseconds is _____.

Correct Answer :

1575

Question Number : 57 Question Type : MCQ

For the processes listed in the following table, which of the following scheduling schemes will give the lowest average turnaround time?

Process	Arrival Time	Processing Time
A	0	3
B	1	6
C	4	4
D	6	2

- (A) First Come First Serve
- (B) Non-preemptive Shortest Job First
- (C) Shortest Remaining Time
- (D) Round Robin with Quantum value two

Options :

- 1. ✘ A
- 2. ✘ B
- 3. ✔ C
- 4. ✘ D

Question Number : 58 Question Type : MCQ



Consider three software items: Program-X, Control Flow Diagram of Program-Y and Control Flow Diagram of Program-Z as shown below

<p>Program-X:</p> <pre> sumcal(int maxint, int value) { int result=0, i=0; if (value <0) { value = -value; } while((i<value) AND (result <= maxint)) { i=i+1; result = result + 1; } if(result <= maxint) { printf(result); } else { printf("large"); } printf("end of program"); } </pre>	<p>Control Flow Diagram of Program-Y:</p>
<p>Control Flow Diagram of Program-Z:</p> <div style="display: flex; flex-direction: column; align-items: center; gap: 20px;"> <div style="border: 1px solid black; padding: 5px; text-align: center;">Control Flow Diagram of Program-X</div> <div style="font-size: 2em;">↓</div> <div style="border: 1px solid black; padding: 5px; text-align: center;">Control Flow Diagram of Program-Y</div> </div>	

The values of McCabe's Cyclomatic complexity of Program-X, Program-Y, and Program-Z respectively are

- (A) 4, 4, 7 (B) 3, 4, 7 (C) 4, 4, 8 (D) 4, 3, 8

Options :

1. ✓ A
2. ✗ B
3. ✗ C
4. ✗ D

Question Number : 59 Question Type : NAT

Consider the equation $(43)_x = (y3)_8$ where x and y are integers and $x > 4$, $y > 3$. The number of solutions is _____

Correct Answer :

5

Question Number : 60 Question Type : MCQ

Let R be a relation on the set of ordered pairs of positive integers such that $((p,q),(r,s)) \in R$ if and only if $p-s = q-r$. Which one of the following is true about R ?

- (A) Both reflexive and symmetric
(C) Not reflexive but symmetric

- (B) Reflexive but not symmetric
(D) Neither reflexive nor symmetric

Options :

1. ✘ A
2. ✘ B
3. ✔ C
4. ✘ D

Question Number : 61 Question Type : NAT

Suppose X_i for $i = 1,2,3$ are independent and identically distributed random variables whose probability mass functions are $\Pr[X_i = 0] = \Pr[X_i = 1] = 1/2$ for $i = 1,2,3$. Define another random variable $Y = X_1X_2 \oplus X_3$, where \oplus denotes XOR. Then

$$\Pr[Y = 0 | X_3 = 0] = \underline{\hspace{2cm}}.$$

Correct Answer :

0.75

Question Number : 62 Question Type : NAT

The total number of prime implicants of the function $f(w, x, y, z) = \sum(0, 2, 4, 5, 6, 10)$ is _____.

Correct Answer:

3

Question Number : 63 Question Type : NAT



Suppose $c = \langle c[0], \dots, c[k-1] \rangle$ is an array of length k , where all the entries are from the set $\{0, 1\}$. For any positive integers a and n , consider the following pseudocode.

```
DOSOMETHING( $c, a, n$ )
 $z \leftarrow 1$ 
for  $i \leftarrow 0$  to  $k-1$ 
    do  $z \leftarrow z^2 \bmod n$ 
    if  $c[i] = 1$ 
        then  $z \leftarrow (z \times a) \bmod n$ 
return  $z$ 
```

If $k = 4$, $c = \langle 1, 0, 1, 1 \rangle$, $a = 2$ and $n = 8$, then the output of $\text{DOSOMETHING}(c, a, n)$ is _____.

Correct Answer :

0

Question Number : 64 Question Type : MCQ

Let $f(n) = n$ and $g(n) = n^{(1+\sin n)}$, where n is a positive integer. Which of the following statements is/are correct?

- I. $f(n) = O(g(n))$
- II. $f(n) = \Omega(g(n))$

- (A) Only I
- (B) Only II
- (C) Both I and II
- (D) Neither I nor II

Options :

- 1. ✘ A
- 2. ✘ B
- 3. ✘ C
- 4. ✔ D

Question Number : 65 Question Type : MCQ



Consider the following grammar G

$$\begin{aligned} S &\rightarrow F \mid H \\ F &\rightarrow p \mid c \\ H &\rightarrow d \mid c \end{aligned}$$

where $S, F,$ and H are non-terminal symbols, $p, d,$ and c are terminal symbols. Which of the following statement(s) is/are correct?

S1. LL(1) can parse all strings that are generated using grammar G

S2. LR(1) can parse all strings that are generated using grammar G

(A) Only S1

(B) Only S2

(C) Both S1 and S2

(D) Neither S1 nor S2

Options :

1. ✘ A

2. ✘ B

3. ✘ C

4. ✔ D

