

GEOGRAPHY - ECONOMICS

Time : 2 Hrs.)

Question Paper : March 2009

(Max. Marks : 40)

Note : Please see to Question Paper March 2008.

Q. 1 : (A) Rewrite the statements by choosing the correct alternatives from the brackets. (3)

- (1) Forests are resources. (natural, economic, man-made, cultural)
- (2) The fertile land is used for ... occupation. (animal rearing mining, hunting, agriculture)
- (3) In Uttar Pradesh is famous for footwear industry. (Lakhanpur, Kanpur, Saharanpur, Achalpur)

(B) Match the following. (3)

Column 'A'	Column 'B'
(i) Sundri	(i) Jersey
(ii) Cow	(ii) Boat
(iii) Pastureland	(iii) Surti
	(iv) Animal rearing

Q. 2 : (A) Give geographical reasons for the following (any two). (4)

- (1) Large projects are multi-purpose projects.
- (2) Conservation of minerals is necessary.
- (3) Oil-refinery industries are located near coastal parts of India.

(B) Write short notes on (any two). (4)

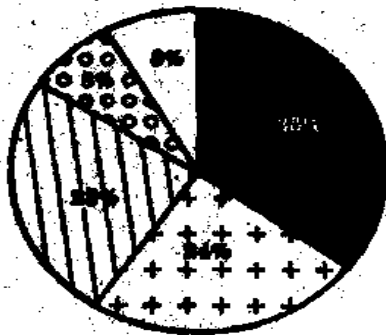
- (1) Project operation flood
- (2) Land degradation
- (3) Communications.

Q. 3 : Draw a simple bar graph with the help of statistical data : (2)






India-Sugar Production

Year	Production (in lakh tonnes)
1980-81	50
1990-91	120
2002-03	190
2003-04	170
2004-05	140

(B) Observe the figure and answer the questions given below (any two). (2)



Index :

-  Factories
-  Residential
-  Farming
-  Commercial
-  Other

- (1) Which sector makes use of the highest percentage of electricity?
- (2) How much percent of electricity is used for farming?
- (3) Which two sectors make use of 8% of electricity?
- (4) How much more percent of electricity is used by the factories than the farms?

(C) Show the following in an outline map of India supplied to you and name them. Give index (any two). (2)

- (1) The union territory having the highest density of population.
- (2) State having the highest production of rubber.
- (3) Iron ore producing area in Jharkhand.
- (4) Mumbai-Kolkata airway route.

Q. 4 : Answer the following in detail (any two). (2)

- (1) What are the features of Indian Agriculture?
- (2) Give information about depletion of plants and animals.
- (3) In the outline map of India show one of the leading states in cotton textile industry and give information about cotton textile industry.

Q. 5 : Fill in the blanks choosing the correct alternative from those given in the brackets. (2)

- (1) The Government of India introduced the New Economic Policy in (1977, 1984, 1991)
- (2) It was expected that WTO regime would create ... of free trade. (atmosphere, environment, air)

Q. 6 : Answer the following questions in one-two sentences each (any three). (6)

- (1) What is meant by economic development?
- (2) Write two main causes of inflation.
- (3) Which classes are the choosers during inflation?
- (4) Who is a consumer?
- (5) What is the basic objective of Public Distribution System?

Q. 7 : Answer the following questions in five-six sentences (any one). (4)

- (1) Explain any four adverse effects of inflation on the productive activities.
- (2) What are the duties of the consumer?