

Venn Diagrams -Exercise3 (page 1) verbal reasoning

DETAILS CATEGORY: EXERCISE 3 PUBLISHED ON 25 DECEMBER 2012 WRITTEN BY ADMIN HITS: 32



Directions to Solve: This Exercise Contain Dice verbal reasoning question and answer. Each of these questions given below contains three elements. These elements may or may not have some inter linkage. Each group of elements may fit into one of these diagrams at (A), (B), (C), (D) and/or (E). You have to indicate the group of elements which correctly fits into the diagrams. You can check answer by clicking on check your answer.

You can download these exercises by clicking on the download button which is present at the right side.

1. Which of the following diagrams indicates the best relation between Profit, Dividend and Bonus ?



Answer & Explanation

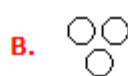
Answer: Option B

Explanation:

Bonus and Dividend are different from each other. But both these are parts of profit.

View Answer & Explanation

2. Which of the following diagrams indicates the best relation between Bulb, Lamp and Light ?



Answer & Explanation

Answer: Option C

Explanation:

Bulb and Lamp are different from each other but light is obtained from both.

 [View Answer & Explanation](#)

3. Which of the following diagrams indicates the best relation between dogs, pet animals and animals ?



 **Answer & Explanation**

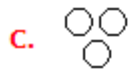
Answer: Option C

Explanation:

Some dogs are pet animals but dogs and pet both are animals.

 [View Answer & Explanation](#)

4. Which of the following diagrams indicates the best relation between Mercury, Zinc and Metal ?



 **Answer & Explanation**

Answer: Option B

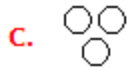
Explanation:

Mercury and Zinc both are different from one another but belong to metal.

 [View Answer & Explanation](#)

5.

Which of the following diagrams indicates the best relation between Ass, Pet and Horse ?



 **Answer & Explanation**

Answer: Option **D**

Explanation:

Ass and Horse are different from each other but both are pet.

 **View Answer & Explanation**

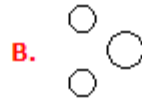
www.JoinExam.in

Venn Diagrams - Exercise 3 (page 2) verbal reasoning

DETAILS CATEGORY: EXERCISE 3 PUBLISHED ON 25 DECEMBER 2012 WRITTEN BY ADMIN HITS: 38

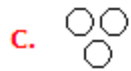


6. Which of the following diagrams indicates the best relation between Hockey, Football and Cricket ?



[View Answer & Explanation](#)

7. Which of the following diagrams indicates the best relation between Football, Player and Field ?



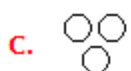
[View Answer & Explanation](#)

8. Which of the following diagrams indicates the best relation between Hospital, Nurse and Patient?



[View Answer & Explanation](#)

9. Which of the following diagrams indicates the best relation between Gold, Metal and Zinc ?



 [View Answer & Explanation](#)

10. Which of the following diagrams indicates the best relation between Boys, Girls and Students ?



 [View Answer & Explanation](#)

www.JoinExam.in