

Question Paper Preview

Notations :

- Options shown in green color and with ✓ icon are correct.
- Options shown in red color and with ✗ icon are incorrect.

Question Paper Name: Upper Division Clerks Shift 3
Subject Name: UPPER DIVISION CLERK UDC
Creation Date: 2016-03-18 16:11:50
Duration: 120
Total Marks: 200
Display Marks: Yes

Upper Division Clerks Shift 1

Group Number : 1
Group Id : 73681526
Group Maximum Duration : 0
Group Minimum Duration : 120
Revisit allowed for view? : No
Revisit allowed for edit? : No
Break time: 0
Mandatory Break time: No
Group Marks: 200

Numerical Ability

Section Id : 73681599
Section Number : 1
Section type : Online
Mandatory or Optional: Mandatory
Number of Questions: 50
Number of Questions to be attempted: 50
Section Marks: 50
Display Number Panel: Yes
Group All Questions: No

Sub-Section Number: 1
Sub-Section Id: 736815149
Question Shuffling Allowed : Yes

Question Number : 1 Question Id : 7368155051 Question Type : MCQ Option Shuffling : Yes Display Question Number : Yes
Single Line Question Option : No Option Orientation : Vertical

Correct : 1 Wrong : 0.25

Convert 52 into a binary number.

Options :

- ✗ 110000

2. ✓ 110100
3. ✗ 101010
4. ✗ 100001

Question Number : 1 Question Id : 7368155051 Question Type : MCQ Option Shuffling : Yes Display Question Number : Yes
Single Line Question Option : No Option Orientation : Vertical

Correct : 1 Wrong : 0.25

52 को बाइनरी संख्या में परिवर्तित करें।

Options :

1. ✗ 110000
2. ✓ 110100
3. ✗ 101010
4. ✗ 100001

Question Number : 2 Question Id : 7368155052 Question Type : MCQ Option Shuffling : Yes Display Question Number : Yes
Single Line Question Option : No Option Orientation : Vertical

Correct : 1 Wrong : 0.25

The number of prime factors in $(15)^{23} \times (4)^{15} \times (6)^{14}$ is :

Options :

1. ✗ 52
2. ✗ 85
3. ✗ 96
4. ✓ 104

Question Number : 2 Question Id : 7368155052 Question Type : MCQ Option Shuffling : Yes Display Question Number : Yes
Single Line Question Option : No Option Orientation : Vertical

Correct : 1 Wrong : 0.25

$(15)^{23} \times (4)^{15} \times (6)^{14}$ में अभाज्य कारकों की संख्या है:

Options :

1. ✗ 52
2. ✗ 85
3. ✗ 96
4. ✓ 104

Question Number : 3 Question Id : 7368155053 Question Type : MCQ Option Shuffling : Yes Display Question Number : Yes
Single Line Question Option : No Option Orientation : Vertical

Correct : 1 Wrong : 0.25

What least value must be assigned to * so that the number 105^*684 is divisible by 9?

Options :

1. ✗ 5
2. ✓ 3
3. ✗ 7
4. ✗ 1

Question Number : 3 Question Id : 7368155053 Question Type : MCQ Option Shuffling : Yes Display Question Number : Yes
Single Line Question Option : No Option Orientation : Vertical

Correct : 1 Wrong : 0.25

कौन सा कम से कम मूल्य * के लिए दिया जाना चाहिए, ताकि संख्या 105×684 , 9 से विभाज्य हो?

Options :

1. ✘ 5
2. ✔ 3
3. ✘ 7
4. ✘ 1

Question Number : 4 Question Id : 7368155054 Question Type : MCQ Option Shuffling : Yes Display Question Number : Yes
Single Line Question Option : No Option Orientation : Vertical

Correct : 1 Wrong : 0.25

Compute: $123 \times 99999 + 123$.

Options :

1. ✘ 13299999
2. ✘ 13200000
3. ✔ 12300000
4. ✘ 12399999

Question Number : 4 Question Id : 7368155054 Question Type : MCQ Option Shuffling : Yes Display Question Number : Yes
Single Line Question Option : No Option Orientation : Vertical

Correct : 1 Wrong : 0.25

गणना करें: $123 \times 99999 + 123$

Options :

1. ✘ 13299999
2. ✘ 13200000
3. ✔ 12300000
4. ✘ 12399999

Question Number : 5 Question Id : 7368155055 Question Type : MCQ Option Shuffling : Yes Display Question Number : Yes
Single Line Question Option : No Option Orientation : Vertical

Correct : 1 Wrong : 0.25

Find the units digit in $(265)^{505} + (211)^{505}$

Options :

1. ✘ 7
2. ✔ 6
3. ✘ 5
4. ✘ 3

Question Number : 5 Question Id : 7368155055 Question Type : MCQ Option Shuffling : Yes Display Question Number : Yes
Single Line Question Option : No Option Orientation : Vertical

Correct : 1 Wrong : 0.25

$(265)^{505} + (211)^{505}$ में इकाई का अंक ज्ञात करें।

Options :

1. ✘ 7
2. ✔ 6
3. ✘ 5
4. ✘ 3

Question Number : 6 Question Id : 7368155056 Question Type : MCQ Option Shuffling : Yes Display Question Number : Yes
Single Line Question Option : No Option Orientation : Vertical

Correct : 1 Wrong : 0.25

Compute: $231 \times 625 + 625$.

Options :

1. ✘ 146000
2. ✔ 145000
3. ✘ 514000
4. ✘ 541000

Question Number : 6 Question Id : 7368155056 Question Type : MCQ Option Shuffling : Yes Display Question Number : Yes
Single Line Question Option : No Option Orientation : Vertical

Correct : 1 Wrong : 0.25

गणना करें: $231 \times 625 + 625$

Options :

1. ✘ 146000
2. ✔ 145000
3. ✘ 514000
4. ✘ 541000

Question Number : 7 Question Id : 7368155057 Question Type : MCQ Option Shuffling : Yes Display Question Number : Yes
Single Line Question Option : No Option Orientation : Vertical

Correct : 1 Wrong : 0.25

Bikram studies for $7\frac{1}{2}$ hours daily. He devotes $1\frac{1}{3}$ hours of his time for

Mathematics. How much time does he devote for other subjects?

Options :

1. ✔ $6\frac{1}{6}$ hrs
2. ✘ $2\frac{7}{5}$ hrs
3. ✘ $2\frac{1}{4}$ hrs
4. ✘ $3\frac{7}{8}$ hrs

Question Number : 7 Question Id : 7368155057 Question Type : MCQ Option Shuffling : Yes Display Question Number : Yes
Single Line Question Option : No Option Orientation : Vertical

Correct : 1 Wrong : 0.25

बिक्रम प्रतिदिन $7\frac{1}{2}$ घंटे तक अध्ययन करता है। वह अपने समय के $1\frac{1}{3}$ घंटे गणित को देता है। वह अन्य विषयों को कितना समय देता है?

Options :

1. ✓ $6\frac{1}{6}$ घंटे

2. ✗ $2\frac{7}{5}$ घंटे

3. ✗ $2\frac{1}{4}$ घंटे

4. ✗ $3\frac{7}{8}$ घंटे

Question Number : 8 Question Id : 7368155058 Question Type : MCQ Option Shuffling : Yes Display Question Number : Yes
Single Line Question Option : No Option Orientation : Vertical

Correct : 1 Wrong : 0.25

Rekha and Ragini together bought a water bottle that contained $3\frac{1}{2}$ litres of water. Rekha consumed $\frac{3}{8}$ of the water. Remaining water was consumed by Ragini. What fraction of the total quantity of water did Ragini drink?

Options :

1. ✗ $1\frac{2}{3}$ litres

2. ✗ $1\frac{1}{3}$ litres

3. ✓ $2\frac{3}{16}$ litres

4. ✗ $1\frac{1}{4}$ litres

Question Number : 8 Question Id : 7368155058 Question Type : MCQ Option Shuffling : Yes Display Question Number : Yes
Single Line Question Option : No Option Orientation : Vertical

Correct : 1 Wrong : 0.25

रेखा और रागिनी ने साथ मिलकर पानी की एक बोतल खरीदी, जिसमें $3\frac{1}{2}$ लीटर पानी था। इसमें से रेखा ने $\frac{3}{8}$ पानी पिया। बाकी का पानी रागिनी ने पिया। रागिनी ने कुल कितने लीटर पानी पिया?

Options :

1. ✗ $1\frac{2}{3}$ लीटर

2. ✗ $1\frac{1}{3}$ लीटर

3. ✓ $2\frac{3}{16}$ लीटर

4. ✘ $1\frac{1}{4}$ लीटर

Question Number : 9 Question Id : 7368155059 Question Type : MCQ Option Shuffling : Yes Display Question Number : Yes
Single Line Question Option : No Option Orientation : Vertical

Correct : 1 Wrong : 0.25

Amulya, Bhavani, Chandrika and Deepika finished coloring a picture in $\frac{3}{4}$ hour, $\frac{2}{3}$ hour, $\frac{1}{2}$ hour and $\frac{2}{5}$ hour respectively. Who among the following finished their coloring first?

Options :

1. ✘ Chandrika
2. ✔ Deepika
3. ✘ Amulya
4. ✘ Bhavani

Question Number : 9 Question Id : 7368155059 Question Type : MCQ Option Shuffling : Yes Display Question Number : Yes
Single Line Question Option : No Option Orientation : Vertical

Correct : 1 Wrong : 0.25

अमूल्य, भवानी, चन्द्रिका और दीपिका ने क्रमशः $\frac{3}{4}$ घंटे, $\frac{2}{3}$ घंटे, $\frac{1}{2}$ घंटे और $\frac{2}{5}$ घंटे में तस्वीर में रंग भरने के कार्य को समाप्त किया। निम्नलिखित में से किसने पहले रंग भरने का कार्य समाप्त किया?

Options :

1. ✘ चन्द्रिका
2. ✔ दीपिका
3. ✘ अमूल्य
4. ✘ भवानी

Question Number : 10 Question Id : 7368155060 Question Type : MCQ Option Shuffling : Yes Display Question Number : Yes
Single Line Question Option : No Option Orientation : Vertical

Correct : 1 Wrong : 0.25

Which among the following is the largest?

$\frac{9}{2}$, $\frac{17}{4}$, $\frac{13}{3}$, $\frac{7}{5}$

Options :

1. ✔ $\frac{9}{2}$
2. ✘ $\frac{13}{3}$
3. ✘ $\frac{7}{5}$
4. ✘ $\frac{17}{4}$

Question Number : 10 Question Id : 7368155060 Question Type : MCQ Option Shuffling : Yes Display Question Number : Yes
Single Line Question Option : No Option Orientation : Vertical

Correct : 1 Wrong : 0.25

निम्नलिखित में से कौन सा सबसे बड़ा है?

$$\frac{9}{2}, \frac{17}{4}, \frac{13}{3}, \frac{7}{5}$$

Options :

1. $\frac{9}{2}$

2. $\frac{13}{3}$

3. $\frac{7}{5}$

4. $\frac{17}{4}$

Question Number : 11 Question Id : 7368155061 Question Type : MCQ Option Shuffling : Yes Display Question Number : Yes
Single Line Question Option : No Option Orientation : Vertical

Correct : 1 Wrong : 0.25

The difference of two numbers is 9 and one-fifth of their sum is 9. Find the smallest number.

Options :

1. 18

2. 45

3. 28

4. 15

Question Number : 11 Question Id : 7368155061 Question Type : MCQ Option Shuffling : Yes Display Question Number : Yes
Single Line Question Option : No Option Orientation : Vertical

Correct : 1 Wrong : 0.25

दो अंकों का अंतर 9 और उनके योग का $\frac{1}{5}$ हिस्सा 9 है। सबसे छोटी संख्या का ज्ञात करें।

Options :

1. 18

2. 45

3. 28

4. 15

Question Number : 12 Question Id : 7368155062 Question Type : MCQ Option Shuffling : Yes Display Question Number : Yes
Single Line Question Option : No Option Orientation : Vertical

Correct : 1 Wrong : 0.25

The difference between a number and its one-fifth is 20. What is the number?

Options :

1. 50

2. 25

3. ✖ 35

4. ✖ 45

Question Number : 12 Question Id : 7368155062 Question Type : MCQ Option Shuffling : Yes Display Question Number : Yes
Single Line Question Option : No Option Orientation : Vertical

Correct : 1 Wrong : 0.25

एक संख्या और उसके $1/5$ के बीच का अंतर 20 है। यह संख्या क्या है?

Options :

1. ✖ 50

2. ✔ 25

3. ✖ 35

4. ✖ 45

Question Number : 13 Question Id : 7368155063 Question Type : MCQ Option Shuffling : Yes Display Question Number : Yes
Single Line Question Option : No Option Orientation : Vertical

Correct : 1 Wrong : 0.25

Find the value of $(-2)^5 \times (2)^{-5} \times (2)^5$

Options :

1. ✖ 25

2. ✖ 32

3. ✔ -32

4. ✖ -18

Question Number : 13 Question Id : 7368155063 Question Type : MCQ Option Shuffling : Yes Display Question Number : Yes
Single Line Question Option : No Option Orientation : Vertical

Correct : 1 Wrong : 0.25

$(-2)^5 \times (2)^{-5} \times (2)^5$ का मान ज्ञात करें।

Options :

1. ✖ 25

2. ✖ 32

3. ✔ -32

4. ✖ -18

Question Number : 14 Question Id : 7368155064 Question Type : MCQ Option Shuffling : Yes Display Question Number : Yes
Single Line Question Option : No Option Orientation : Vertical

Correct : 1 Wrong : 0.25

If $4X67-24Y6=1911$, then which of the following should come in place of X?

Options :

1. ✖ 6

2. ✖ 7

3. ✖ 5

4. ✔ 3

Question Number : 14 Question Id : 7368155064 Question Type : MCQ Option Shuffling : Yes Display Question Number : Yes
Single Line Question Option : No Option Orientation : Vertical

Correct : 1 Wrong : 0.25

$4X67-24Y6 = 1911$ है, तो निम्नलिखित में से X के स्थान पर क्या आना चाहिए?

Options :

1. ✘ 6
2. ✘ 7
3. ✘ 5
4. ✔ 3

Question Number : 15 Question Id : 7368155065 Question Type : MCQ Option Shuffling : Yes Display Question Number : Yes
Single Line Question Option : No Option Orientation : Vertical

Correct : 1 Wrong : 0.25

Solve : $\frac{(419+213)^2 + (419-213)^2}{419 \times 419 + 213 \times 213}$

Options :

1. ✘ 215
2. ✔ 2
3. ✘ 645
4. ✘ 1569

Question Number : 15 Question Id : 7368155065 Question Type : MCQ Option Shuffling : Yes Display Question Number : Yes
Single Line Question Option : No Option Orientation : Vertical

Correct : 1 Wrong : 0.25

हल करें : $\frac{(419+213)^2 + (419-213)^2}{419 \times 419 + 213 \times 213}$

Options :

1. ✘ 215
2. ✔ 2
3. ✘ 645
4. ✘ 1569

Question Number : 16 Question Id : 7368155066 Question Type : MCQ Option Shuffling : Yes Display Question Number : Yes
Single Line Question Option : No Option Orientation : Vertical

Correct : 1 Wrong : 0.25

The present salary of Raman is Rs 5300. This will be increased by 13% in the next year.
What will be the increased salary of Raman?

Options :

1. ✔ Rs 5989
2. ✘ Rs 5850
3. ✘ Rs 5870
4. ✘ Rs 5890

Question Number : 16 Question Id : 7368155066 Question Type : MCQ Option Shuffling : Yes Display Question Number : Yes
Single Line Question Option : No Option Orientation : Vertical

Correct : 1 Wrong : 0.25

रमन का वर्तमान वेतन रु. 5300 है। अगले वर्ष इसमें 13% की वृद्धि होगी। वृद्धि के बाद रमन का बढ़ा हुआ वेतन कितना होगा?

Options :

1. ✓ रु. 5989
2. ✗ रु. 5850
3. ✗ रु. 5870
4. ✗ रु. 5890

Question Number : 17 Question Id : 7368155067 Question Type : MCQ Option Shuffling : Yes Display Question Number : Yes
Single Line Question Option : No Option Orientation : Vertical

Correct : 1 Wrong : 0.25

In an examination, 96% of the candidates passed and 400 failed. How many candidates appeared for the examination?

Options :

1. ✓ 10000
2. ✗ 14000
3. ✗ 12000
4. ✗ 12500

Question Number : 17 Question Id : 7368155067 Question Type : MCQ Option Shuffling : Yes Display Question Number : Yes
Single Line Question Option : No Option Orientation : Vertical

Correct : 1 Wrong : 0.25

एक परीक्षा में 96% परीक्षार्थी उत्तीर्ण हुए और 400 अनुत्तीर्ण हुए। परीक्षा में कितने परीक्षार्थी बैठे थे?

Options :

1. ✓ 10000
2. ✗ 14000
3. ✗ 12000
4. ✗ 12500

Question Number : 18 Question Id : 7368155068 Question Type : MCQ Option Shuffling : Yes Display Question Number : Yes
Single Line Question Option : No Option Orientation : Vertical

Correct : 1 Wrong : 0.25

What percent of $1\frac{1}{2}$ day is 48 minutes?

Options :

1. ✗ 55%
2. ✗ 3.33%
3. ✓ 2.22%
4. ✗ 2.5%

Question Number : 18 Question Id : 7368155068 Question Type : MCQ Option Shuffling : Yes Display Question Number : Yes
Single Line Question Option : No Option Orientation : Vertical

Correct : 1 Wrong : 0.25

1½ दिन का कितना प्रतिशत 48 मिनट होता है?

Options :

1. ✘ 55%
2. ✘ 3.33%
3. ✔ 2.22%
4. ✘ 2.5%

Question Number : 19 Question Id : 7368155069 Question Type : MCQ Option Shuffling : Yes Display Question Number : Yes
Single Line Question Option : No Option Orientation : Vertical

Correct : 1 Wrong : 0.25

Express 80 paise: 4 rupees in its simplest form.

Options :

1. ✘ 1 : 8
2. ✔ 1 : 5
3. ✘ 4 : 5
4. ✘ 5 : 4

Question Number : 19 Question Id : 7368155069 Question Type : MCQ Option Shuffling : Yes Display Question Number : Yes
Single Line Question Option : No Option Orientation : Vertical

Correct : 1 Wrong : 0.25

80 पैसे : 4 रुपए को इसके सरलतम रूप में दर्शाएँ।

Options :

1. ✘ 1:8
2. ✔ 1:5
3. ✘ 4:5
4. ✘ 5:4

Question Number : 20 Question Id : 7368155070 Question Type : MCQ Option Shuffling : Yes Display Question Number : Yes
Single Line Question Option : No Option Orientation : Vertical

Correct : 1 Wrong : 0.25

Two numbers are in ratio 7 : 6. If 3 is subtracted from each, the ratio becomes 6 : 5. Find the largest number.

Options :

1. ✘ 26
2. ✔ 21
3. ✘ 24
4. ✘ 20

Question Number : 20 Question Id : 7368155070 Question Type : MCQ Option Shuffling : Yes Display Question Number : Yes
Single Line Question Option : No Option Orientation : Vertical

Correct : 1 Wrong : 0.25

दो अंक 7:6 के अनुपात में हैं। यदि प्रत्येक में से 3 घटाया जाता है, तो अनुपात 6:5 हो जाता है। सबसे बड़ी संख्या का पता लगाएं।

Options :

1. ✘ 26
2. ✔ 21
3. ✘ 24
4. ✘ 20

Question Number : 21 Question Id : 7368155071 Question Type : MCQ Option Shuffling : Yes Display Question Number : Yes Single Line Question Option : No Option Orientation : Vertical

Correct : 1 Wrong : 0.25

A bag contains 50paise, 25paise and 10paise coins in the ratio 7:5:2 amounting to Rs 198/-. Find the number of 10paise coins.

Options :

1. ✘ 163
2. ✘ 175
3. ✘ 150
4. ✔ 80

Question Number : 21 Question Id : 7368155071 Question Type : MCQ Option Shuffling : Yes Display Question Number : Yes Single Line Question Option : No Option Orientation : Vertical

Correct : 1 Wrong : 0.25

एक थैले में 50 पैसे, 25 पैसे और 10 पैसे के सिक्के 7:5:2 के अनुपात में हैं जिनका कुल मान रु. 198/- है। 10 पैसे के सिक्कों की संख्या ज्ञात करें।

Options :

1. ✘ 163
2. ✘ 175
3. ✘ 150
4. ✔ 80

Question Number : 22 Question Id : 7368155072 Question Type : MCQ Option Shuffling : Yes Display Question Number : Yes Single Line Question Option : No Option Orientation : Vertical

Correct : 1 Wrong : 0.25

Find the average of 501,235,510,261,213.

Options :

1. ✘ 450
2. ✘ 1225
3. ✔ 344
4. ✘ 244

Question Number : 22 Question Id : 7368155072 Question Type : MCQ Option Shuffling : Yes Display Question Number : Yes
Single Line Question Option : No Option Orientation : Vertical

Correct : 1 Wrong : 0.25

501,235,510,261,213 का औसत कितना होगा?

Options :

1. ✘ 450
2. ✘ 1225
3. ✔ 344
4. ✘ 244

Question Number : 23 Question Id : 7368155073 Question Type : MCQ Option Shuffling : Yes Display Question Number : Yes
Single Line Question Option : No Option Orientation : Vertical

Correct : 1 Wrong : 0.25

The average of 15 quantities is 8. The average of 9 of them is 6. What is the average of remaining quantities?

Options :

1. ✔ 11
2. ✘ 15
3. ✘ 42
4. ✘ 30

Question Number : 23 Question Id : 7368155073 Question Type : MCQ Option Shuffling : Yes Display Question Number : Yes
Single Line Question Option : No Option Orientation : Vertical

Correct : 1 Wrong : 0.25

15 राशियों का औसत 8 है। उनमें से 9 राशियों का औसत 6 है, तो शेष राशियों का औसत कितना होगा?

Options :

1. ✔ 11
2. ✘ 15
3. ✘ 42
4. ✘ 30

Question Number : 24 Question Id : 7368155074 Question Type : MCQ Option Shuffling : Yes Display Question Number : Yes
Single Line Question Option : No Option Orientation : Vertical

Correct : 1 Wrong : 0.25

The average monthly income of X and Y is Rs 8000. The average monthly income of Y and Z is Rs 7000 and the average monthly income of X and Z is Rs 5000. The monthly income of R is?

Options :

1. ✔ Rs 4500
2. ✘ Rs 4000
3. ✘ Rs 3125
4. ✘ Rs 4800

Note: For this question, discrepancy is found in question/answer. Full Marks is being awarded to all candidates.

Question Number : 24 Question Id : 7368155074 Question Type : MCQ Option Shuffling : Yes Display Question Number : Yes
Single Line Question Option : No Option Orientation : Vertical

Correct : 1 Wrong : 0.25

X और Y की औसत मासिक आय रु. 8000 है। Y और Z की औसत मासिक आय रु. 7000 और X और Z की औसत मासिक आय रु. 5000 है। Z की मासिक आय कितनी है?

Options :

1. ✓ रु. 4500
2. ✗ रु. 4000
3. ✗ रु. 3125
4. ✗ रु. 4800

Note: For this question, discrepancy is found in question/answer. Full Marks is being awarded to all candidates.

Question Number : 25 Question Id : 7368155075 Question Type : MCQ Option Shuffling : Yes Display Question Number : Yes
Single Line Question Option : No Option Orientation : Vertical

Correct : 1 Wrong : 0.25

Find the amount at simple interest on Rs 2480 for 2 years 9 months at 5% per annum.

Options :

1. ✗ Rs 3500
2. ✓ Rs 2821
3. ✗ Rs 3800
4. ✗ Rs 3900

Question Number : 25 Question Id : 7368155075 Question Type : MCQ Option Shuffling : Yes Display Question Number : Yes
Single Line Question Option : No Option Orientation : Vertical

Correct : 1 Wrong : 0.25

5% प्रति वर्ष साधारण ब्याज की दर से 2 वर्ष 9 महीने में रु. 2480 की राशि कितनी हो जाएगी?

Options :

1. ✗ रु. 3500
2. ✓ रु. 2821
3. ✗ रु. 3800
4. ✗ रु. 3900

Question Number : 26 Question Id : 7368155076 Question Type : MCQ Option Shuffling : Yes Display Question Number : Yes
Single Line Question Option : No Option Orientation : Vertical

Correct : 1 Wrong : 0.25

Simple interest on a certain sum is $\frac{9}{25}$ of the sum. Find the time, if both time and rate percent are numerically equal.

Options :

1. ✗ $1 \frac{1}{2}$ years

- 2. ✘ $1 \frac{1}{15}$ years
- 3. ✘ 2 years
- 4. ✔ 6 years

Question Number : 26 Question Id : 7368155076 Question Type : MCQ Option Shuffling : Yes Display Question Number : Yes
Single Line Question Option : No Option Orientation : Vertical
Correct : 1 Wrong : 0.25

एक निश्चित राशि पर साधारण ब्याज उस राशि का $\frac{9}{25}$ है। यदि अवधि और दर प्रतिशत दोनों संख्यानुसार एक समान हैं, तो अवधि ज्ञात करें।

- Options :
- 1. ✘ $1 \frac{1}{2}$ वर्ष
 - 2. ✘ $1 \frac{1}{15}$ वर्ष
 - 3. ✘ 2 वर्ष
 - 4. ✔ 6 वर्ष

Question Number : 27 Question Id : 7368155077 Question Type : MCQ Option Shuffling : Yes Display Question Number : Yes
Single Line Question Option : No Option Orientation : Vertical
Correct : 1 Wrong : 0.25

Simple interest for a sum of Rs 3500 for 2 years is Rs 40 more than the simple interest for Rs.3000 for the same duration. Find the rate of interest.

- Options :
- 1. ✘ 2%
 - 2. ✘ 5%
 - 3. ✔ 4%
 - 4. ✘ 3%

Question Number : 27 Question Id : 7368155077 Question Type : MCQ Option Shuffling : Yes Display Question Number : Yes
Single Line Question Option : No Option Orientation : Vertical
Correct : 1 Wrong : 0.25

2 वर्ष के लिए रु. 3500 की राशि पर प्राप्त साधारण ब्याज इसी अवधि के लिए रु. 3000 पर प्राप्त साधारण ब्याज से रु. 40 ज्यादा है। ब्याज की दर ज्ञात करें।

- Options :
- 1. ✘ 2%
 - 2. ✘ 5%
 - 3. ✔ 4%
 - 4. ✘ 3%

Question Number : 28 Question Id : 7368155078 Question Type : MCQ Option Shuffling : Yes Display Question Number : Yes
Single Line Question Option : No Option Orientation : Vertical
Correct : 1 Wrong : 0.25

An article costing Rs 1450 has been sold for Rs 1682. The percentage of profit was?

Options :

1. ✓ 16%
2. ✗ 25%
3. ✗ 11%
4. ✗ 20%

Question Number : 28 Question Id : 7368155078 Question Type : MCQ Option Shuffling : Yes Display Question Number : Yes
Single Line Question Option : No Option Orientation : Vertical

Correct : 1 Wrong : 0.25

रु. 1450 की लागत वाली एक वस्तु को रु. 1682 में बेचा गया, तो कितने प्रतिशत लाभ हुआ?

Options :

1. ✓ 16%
2. ✗ 25%
3. ✗ 11%
4. ✗ 20%

Question Number : 29 Question Id : 7368155079 Question Type : MCQ Option Shuffling : Yes Display Question Number : Yes
Single Line Question Option : No Option Orientation : Vertical

Correct : 1 Wrong : 0.25

Surekha sells an article for Rs 3600. She loses 70% in the bargain. What was the price at which she bought it?

Options :

1. ✓ Rs 12000
2. ✗ Rs 13000
3. ✗ Rs 14000
4. ✗ Rs 10000

Question Number : 29 Question Id : 7368155079 Question Type : MCQ Option Shuffling : Yes Display Question Number : Yes
Single Line Question Option : No Option Orientation : Vertical

Correct : 1 Wrong : 0.25

सुरेखा एक वस्तु को रु. 3600 में बेचती है। इस सौदे में उसे 70% हानि हुई। उसने यह वस्तु कितने में खरीदी थी?

Options :

1. ✓ रु. 12000
2. ✗ रु. 13000
3. ✗ रु. 14000
4. ✗ रु. 10000

Question Number : 30 Question Id : 7368155080 Question Type : MCQ Option Shuffling : Yes Display Question Number : Yes
Single Line Question Option : No Option Orientation : Vertical

Correct : 1 Wrong : 0.25

Lavanya bought an article for Rs 4736. Due to some defects in it, she had to pay Rs 264 to the mechanic for its repair. Then, she sold it for Rs 4600. Find her loss percent.

Options :

1. ✘ 5.5%
2. ✘ 8.5%
3. ✘ 5%
4. ✔ 8%

Question Number : 30 Question Id : 7368155080 Question Type : MCQ Option Shuffling : Yes Display Question Number : Yes
Single Line Question Option : No Option Orientation : Vertical

Correct : 1 Wrong : 0.25

लावण्या ने एक वस्तु को रु. 4736 में खरीदी है। उसमें किसी दोष के कारण, उसने इसकी मरम्मत के लिए मैकेनिक को रु. 264 दिए। फिर उसने उसे रु. 4600 में बेच दिया। उसे कितना प्रतिशत नुकसान हुआ?

Options :

1. ✘ 5.5%
2. ✘ 8.5%
3. ✘ 5%
4. ✔ 8%

Question Number : 31 Question Id : 7368155081 Question Type : MCQ Option Shuffling : Yes Display Question Number : Yes
Single Line Question Option : No Option Orientation : Vertical

Correct : 1 Wrong : 0.25

An item is sold at Rs 430 by allowing a discount of 14% on its marked price. The marked price of an item is

Options :

1. ✘ Rs 550
2. ✔ Rs 500
3. ✘ Rs 600
4. ✘ Rs 650

Question Number : 31 Question Id : 7368155081 Question Type : MCQ Option Shuffling : Yes Display Question Number : Yes
Single Line Question Option : No Option Orientation : Vertical

Correct : 1 Wrong : 0.25

एक वस्तु को उसकी अंकित कीमत पर 14% की छूट देकर रु. 430 में बेचा गया। वस्तु की अंकित कीमत कितनी है?

Options :

1. ✘ रु. 550
2. ✔ रु. 500
3. ✘ रु. 600

4. ✖ ₹. 650

Question Number : 32 Question Id : 7368155082 Question Type : MCQ Option Shuffling : Yes Display Question Number : Yes
Single Line Question Option : No Option Orientation : Vertical

Correct : 1 Wrong : 0.25

What is a single discount equivalent to a discount series of 10% and 11%?

Options :

1. ✔ 19.9%
2. ✖ 23.44%
3. ✖ 25.5%
4. ✖ 26.4%

Question Number : 32 Question Id : 7368155082 Question Type : MCQ Option Shuffling : Yes Display Question Number : Yes
Single Line Question Option : No Option Orientation : Vertical

Correct : 1 Wrong : 0.25

10% और 11% की छूट श्रृंखला के समान एकल छूट क्या है?

Options :

1. ✔ 19.9%
2. ✖ 23.44%
3. ✖ 25.5%
4. ✖ 26.4%

Question Number : 33 Question Id : 7368155083 Question Type : MCQ Option Shuffling : Yes Display Question Number : Yes
Single Line Question Option : No Option Orientation : Vertical

Correct : 1 Wrong : 0.25

The marked price of a bicycle is Rs 3450. A shopkeeper allows a discount of 15% and gets a profit of 15%. Find the cost price of the bicycle.

Options :

1. ✖ Rs 2850
2. ✖ Rs 1900
3. ✖ Rs 2900
4. ✔ Rs 2550

Question Number : 33 Question Id : 7368155083 Question Type : MCQ Option Shuffling : Yes Display Question Number : Yes
Single Line Question Option : No Option Orientation : Vertical

Correct : 1 Wrong : 0.25

एक साइकिल की अंकित कीमत रु. 3450 है। एक दुकानदार इस पर 15% की छूट देता है, तो उसे 15% लाभ मिलता है। साइकिल की लागत कीमत ज्ञात करें।

Options :

1. ✖ रु. 2850
2. ✖ रु. 1900
3. ✖ रु. 2900
4. ✔ रु. 2550

Question Number : 34 Question Id : 7368155084 Question Type : MCQ Option Shuffling : Yes Display Question Number : Yes
Single Line Question Option : No Option Orientation : Vertical

Correct : 1 Wrong : 0.25

Study the following table carefully and answer the question that follows.

RURAL AND URBAN POPULATION

CENSUS YEAR	POPULATION(MILLION)	
	RURAL	URBAN
1951	299	62
1961	360	79
1971	439	109
1981	524	159
1991	629	218
2001	743	286
2011	834	377

In which year the urban population is high?

Options :

- ✘ 1991
- ✔ 2011
- ✘ 2001
- ✘ 1981

Question Number : 34 Question Id : 7368155084 Question Type : MCQ Option Shuffling : Yes Display Question Number : Yes
Single Line Question Option : No Option Orientation : Vertical

Correct : 1 Wrong : 0.25

नीचे दी गई तालिका का ध्यान से अध्ययन करें और निम्नलिखित सवाल का जवाब दें।

ग्रामीण और शहरी जनसंख्या

जनगणना वर्ष	जनसंख्या (मिलियन)	
	ग्रामीण	शहरी
1951	299	62
1961	360	79
1971	439	109
1981	524	159
1991	629	218
2001	743	286
2011	834	377

किस वर्ष में शहरी आबादी अधिक है?

Options :

- ✘ 1991

2. ✓ 2011
3. ✗ 2001
4. ✗ 1981

Question Number : 35 Question Id : 7368155085 Question Type : MCQ Option Shuffling : Yes Display Question Number : Yes
Single Line Question Option : No Option Orientation : Vertical

Correct : 1 Wrong : 0.25

Study the following table carefully and answer the question that follows.

RURAL AND URBAN POPULATION

CENSUS YEAR	POPULATION(MILLION)	
	RURAL	URBAN
1951	299	62
1961	360	79
1971	439	109
1981	524	159
1991	629	218
2001	743	286
2011	834	377

In which year the rural population is low?

Options :

1. ✗ 1961
2. ✗ 1981
3. ✗ 2011
4. ✓ 1951

Question Number : 35 Question Id : 7368155085 Question Type : MCQ Option Shuffling : Yes Display Question Number : Yes
Single Line Question Option : No Option Orientation : Vertical

Correct : 1 Wrong : 0.25

नीचे दी गई तालिका का ध्यान से अध्ययन करें और निम्नलिखित सवाल का जवाब दें।

ग्रामीण और शहरी जनसंख्या

जनगणना वर्ष	जनसंख्या (मिलियन)	
	ग्रामीण	शहरी
1951	299	62
1961	360	79
1971	439	109
1981	524	159
1991	629	218
2001	743	286
2011	834	377

किस वर्ष में ग्रामीण आबादी कम है?

Options :

- ✘ 1961
- ✘ 1981
- ✘ 2011
- ✔ 1951

Question Number : 36 Question Id : 7368155086 Question Type : MCQ Option Shuffling : Yes Display Question Number : Yes Single Line Question Option : No Option Orientation : Vertical

Correct : 1 Wrong : 0.25

Study the following table carefully and answer the question that follows.

RURAL AND URBAN POPULATION

CENSUS YEAR	POPULATION(MILLION)	
	RURAL	URBAN
1951	299	62
1961	360	79
1971	439	109
1981	524	159
1991	629	218
2001	743	286
2011	834	377

In which year the rural population is 524million?

Options :

- ✘ 1991
- ✔ 1981
- ✘ 1971

4. ✘ 1951

Question Number : 36 Question Id : 7368155086 Question Type : MCQ Option Shuffling : Yes Display Question Number : Yes
Single Line Question Option : No Option Orientation : Vertical

Correct : 1 Wrong : 0.25

नीचे दी गई तालिका का ध्यान से अध्ययन करें और निम्नलिखित सवाल का जवाब दें।

ग्रामीण और शहरी जनसंख्या

जनगणना वर्ष	जनसंख्या (मिलियन)	
	ग्रामीण	शहरी
1951	299	62
1961	360	79
1971	439	109
1981	524	159
1991	629	218
2001	743	286
2011	834	377

किस वर्ष में ग्रामीण आबादी 524 मिलियन है?

Options :

1. ✘ 1991
2. ✔ 1981
3. ✘ 1971
4. ✘ 1951

Question Number : 37 Question Id : 7368155087 Question Type : MCQ Option Shuffling : Yes Display Question Number : Yes
Single Line Question Option : No Option Orientation : Vertical

Correct : 1 Wrong : 0.25

Study the following table carefully and answer the question that follows.

RURAL AND URBAN POPULATION

CENSUS YEAR	POPULATION(MILLION)	
	RURAL	URBAN
1951	299	62
1961	360	79
1971	439	109
1981	524	159
1991	629	218
2001	743	286
2011	834	377

In which year the urban population is 218million?

Options :

1. ✘ 1981
2. ✘ 1951
3. ✔ 1991
4. ✘ 2001

Question Number : 37 Question Id : 7368155087 Question Type : MCQ Option Shuffling : Yes Display Question Number : Yes
Single Line Question Option : No Option Orientation : Vertical

Correct : 1 Wrong : 0.25

नीचे दी गई तालिका का ध्यान से अध्ययन करें और निम्नलिखित सवाल का जवाब दें।
ग्रामीण और शहरी जनसंख्या

जनगणना वर्ष	जनसंख्या (मिलियन)	
	ग्रामीण	शहरी
1951	299	62
1961	360	79
1971	439	109
1981	524	159
1991	629	218
2001	743	286
2011	834	377

किस वर्ष में शहरी आबादी 218 मिलियन है?

Options :

1. ✘ 1981
2. ✘ 1951
3. ✔ 1991
4. ✘ 2001

Question Number : 38 Question Id : 7368155088 Question Type : MCQ Option Shuffling : Yes Display Question Number : Yes
Single Line Question Option : No Option Orientation : Vertical

Correct : 1 Wrong : 0.25

Study the following table carefully and answer the question that follows.

RURAL AND URBAN POPULATION

CENSUS YEAR	POPULATION(MILLION)	
	RURAL	URBAN
1951	299	62
1961	360	79
1971	439	109
1981	524	159
1991	629	218
2001	743	286
2011	834	377

In which year the rural population is 360 million?

Options :

1. ✓ 1961
2. ✗ 1951
3. ✗ 2011
4. ✗ 2001

Question Number : 38 Question Id : 7368155088 Question Type : MCQ Option Shuffling : Yes Display Question Number : Yes Single Line Question Option : No Option Orientation : Vertical

Correct : 1 Wrong : 0.25

नीचे दी गई तालिका का ध्यान से अध्ययन करें और निम्नलिखित सवाल का जवाब दें।

ग्रामीण और शहरी जनसंख्या

जनगणना वर्ष	जनसंख्या (मिलियन)	
	ग्रामीण	शहरी
1951	299	62
1961	360	79
1971	439	109
1981	524	159
1991	629	218
2001	743	286
2011	834	377

किस वर्ष में ग्रामीण आबादी 360 मिलियन है?

Options :

1. ✓ 1961
2. ✗ 1951
3. ✗ 2011

4. ✖ 2001

Question Number : 39 Question Id : 7368155089 Question Type : MCQ Option Shuffling : Yes Display Question Number : Yes
Single Line Question Option : No Option Orientation : Vertical

Correct : 1 Wrong : 0.25

The area of a square field is $\frac{3}{4}$ hectare. Find the length of its diagonal in metres.

Options :

1. ✖ 50 mts
2. ✔ $50\sqrt{6}$ mts
3. ✖ 40 mts
4. ✖ 25 mts

Question Number : 39 Question Id : 7368155089 Question Type : MCQ Option Shuffling : Yes Display Question Number : Yes
Single Line Question Option : No Option Orientation : Vertical

Correct : 1 Wrong : 0.25

एक वर्गाकार खेत का क्षेत्रफल $\frac{3}{4}$ हेक्टेयर है। इसके विकर्ण की लंबाई कितने मीटर है?

Options :

1. ✖ 50 मीटर
2. ✔ $50\sqrt{6}$ मीटर
3. ✖ 40 मीटर
4. ✖ 25 मीटर

Question Number : 40 Question Id : 7368155090 Question Type : MCQ Option Shuffling : Yes Display Question Number : Yes
Single Line Question Option : No Option Orientation : Vertical

Correct : 1 Wrong : 0.25

The area of an equilateral triangle is $8\sqrt{3}cm^2$. Find the length of its side.

Options :

1. ✖ $4\sqrt{3} cm$
2. ✖ 4.5 cm
3. ✔ $4\sqrt{2} cm$
4. ✖ 4.25 cm

Question Number : 40 Question Id : 7368155090 Question Type : MCQ Option Shuffling : Yes Display Question Number : Yes
Single Line Question Option : No Option Orientation : Vertical

Correct : 1 Wrong : 0.25

एक समभुज त्रिकोण का क्षेत्रफल $8\sqrt{3}$ वर्ग से.मी. है। इसकी भुजा की लंबाई कितनी होगी?

Options :

1. ✖ $4\sqrt{3}$ वर्ग से.मी.
2. ✖ 4.5 वर्ग से.मी.
3. ✔ $4\sqrt{2}$ वर्ग से.मी.

4. ✘ 4.25 वर्ग से.मी.

Question Number : 41 Question Id : 7368155091 Question Type : MCQ Option Shuffling : Yes Display Question Number : Yes
Single Line Question Option : No Option Orientation : Vertical

Correct : 1 Wrong : 0.25

The diameter of the wheel of a cycle is 42cm. How many revolutions will it make to travel 6.6km?

Options :

1. ✘ 4000
2. ✔ 5000
3. ✘ 6500
4. ✘ 4500

Question Number : 41 Question Id : 7368155091 Question Type : MCQ Option Shuffling : Yes Display Question Number : Yes
Single Line Question Option : No Option Orientation : Vertical

Correct : 1 Wrong : 0.25

एक साइकिल के पहिया का व्यास 42 से.मी. है। कितने चक्र में यह 6.6 कि.मी. की दूरी तय करेगी?

Options :

1. ✘ 4000
2. ✔ 5000
3. ✘ 6500
4. ✘ 4500

Question Number : 42 Question Id : 7368155092 Question Type : MCQ Option Shuffling : Yes Display Question Number : Yes
Single Line Question Option : No Option Orientation : Vertical

Correct : 1 Wrong : 0.25

A car travels 550 km in 12 hours and another 450 km in 8 hours. Find the average speed of the car.

Options :

1. ✔ 50 km/h
2. ✘ 52 km/h
3. ✘ 47 km/h
4. ✘ 48 km/h

Question Number : 42 Question Id : 7368155092 Question Type : MCQ Option Shuffling : Yes Display Question Number : Yes
Single Line Question Option : No Option Orientation : Vertical

Correct : 1 Wrong : 0.25

एक कार 12 घंटे में 550 कि.मी. तय करती है और आगे 8 घंटे में 450 कि.मी. तय करती है। कार की औसत गति क्या है?

Options :

1. ✔ 50 कि.मी./घंटे
2. ✘ 52 कि.मी./घंटे

3. ✘ 47 कि.मी./घंटे

4. ✘ 48 कि.मी./घंटे

Question Number : 43 Question Id : 7368155093 Question Type : MCQ Option Shuffling : Yes Display Question Number : Yes
Single Line Question Option : No Option Orientation : Vertical

Correct : 1 Wrong : 0.25

A vehicle travels at 70 km/h. How many meters will it travel in 12 minutes?

Options :

1. ✘ 20050 mts

2. ✘ 19500 mts

3. ✔ 14000 mts

4. ✘ 17050 mts

Question Number : 43 Question Id : 7368155093 Question Type : MCQ Option Shuffling : Yes Display Question Number : Yes
Single Line Question Option : No Option Orientation : Vertical

Correct : 1 Wrong : 0.25

एक वाहन 70 कि.मी./घंटा की गति दौड़ता है। यह 12 मिनट में कितने मीटर की दूरी तय करेगा?

Options :

1. ✘ 20050 मीटर

2. ✘ 19500 मीटर

3. ✔ 14000 मीटर

4. ✘ 17050 मीटर

Question Number : 44 Question Id : 7368155094 Question Type : MCQ Option Shuffling : Yes Display Question Number : Yes
Single Line Question Option : No Option Orientation : Vertical

Correct : 1 Wrong : 0.25

Archana can cover a certain distance in 1 hr 45 min by covering two-third of the distance at 4 kmph and the rest at 5 kmph. Find the total distance.

Options :

1. ✘ 6.2 km

2. ✘ 7.2 km

3. ✘ 6.5 km

4. ✔ 7.5 km

Question Number : 44 Question Id : 7368155094 Question Type : MCQ Option Shuffling : Yes Display Question Number : Yes
Single Line Question Option : No Option Orientation : Vertical

Correct : 1 Wrong : 0.25

अर्चना एक निश्चित दूरी को 1 घंटे 45 मिनट में तय करती है, इसमें से दो-तिहाई 4 कि.मी./घंटा की गति से और शेष 5 कि.मी./घंटा की गति से तय करती है। कुल दूरी ज्ञात करें।

Options :

1. ✘ 6.2 कि.मी.
2. ✘ 7.2 कि.मी.
3. ✘ 6.5 कि.मी.
4. ✔ 7.5 कि.मी.

Question Number : 45 Question Id : 7368155095 Question Type : MCQ Option Shuffling : Yes Display Question Number : Yes
Single Line Question Option : No Option Orientation : Vertical

Correct : 1 Wrong : 0.25

Roja takes 45minutes to reach school from home. Ravi takes 30minutes to cover the same distance. Find the ratio of time taken by Roja to the time taken by Ravi.

Options :

1. ✘ 3:5
2. ✔ 3:2
3. ✘ 2:3
4. ✘ 1:3

Question Number : 45 Question Id : 7368155095 Question Type : MCQ Option Shuffling : Yes Display Question Number : Yes
Single Line Question Option : No Option Orientation : Vertical

Correct : 1 Wrong : 0.25

रोजा घर से स्कूल तक पहुंचने के लिए 45 मिनट लेती है। रवि इसी दूरी को तय करने के लिए 30 मिनट लेता है। रोजा और रवि द्वारा लिये गए समय का अनुपात ज्ञात करें।

Options :

1. ✘ 3:5
2. ✔ 3:2
3. ✘ 2:3
4. ✘ 1:3

Question Number : 46 Question Id : 7368155096 Question Type : MCQ Option Shuffling : Yes Display Question Number : Yes
Single Line Question Option : No Option Orientation : Vertical

Correct : 1 Wrong : 0.25

Stella works in office for 5hours 30minutes and Koyal works for 4hours in her office. Find the ratio of their working hours.

Options :

1. ✔ 11:8
2. ✘ 11:4
3. ✘ 8:5
4. ✘ 6:11

Question Number : 46 Question Id : 7368155096 Question Type : MCQ Option Shuffling : Yes Display Question Number : Yes
Single Line Question Option : No Option Orientation : Vertical

Correct : 1 Wrong : 0.25

स्टेला कार्यालय में 5 घंटे 30 मिनट और कोयल अपने कार्यालय में 4 घंटे काम करती है।
उनके काम के घंटे का अनुपात ज्ञात करें।

Options :

1. ✓ 11:8
2. ✗ 11:4
3. ✗ 8:5
4. ✗ 6:11

Question Number : 47 Question Id : 7368155097 Question Type : MCQ Option Shuffling : Yes Display Question Number : Yes
Single Line Question Option : No Option Orientation : Vertical

Correct : 1 Wrong : 0.25

The ratio of times taken by A and B to finish a piece of work is 2:3. If A completes the work in 12 days, then find the time taken by B to complete the work.

Options :

1. ✗ 25 days
2. ✗ 45 days
3. ✓ 18 days
4. ✗ 15 days

Question Number : 47 Question Id : 7368155097 Question Type : MCQ Option Shuffling : Yes Display Question Number : Yes
Single Line Question Option : No Option Orientation : Vertical

Correct : 1 Wrong : 0.25

एक काम को पूरा करने के लिए A और B द्वारा लिये गए दिनों का अनुपात 2:3 है।
यदि A इस काम को 12 दिनों में पूरा करता है, तो B इस काम को कितने दिनों में पूरा करेगा?

Options :

1. ✗ 25 दिन
2. ✗ 45 दिन
3. ✓ 18 दिन
4. ✗ 15 दिन

Question Number : 48 Question Id : 7368155098 Question Type : MCQ Option Shuffling : Yes Display Question Number : Yes
Single Line Question Option : No Option Orientation : Vertical

Correct : 1 Wrong : 0.25

Krishna can do a work in 4 days and Sujatha is 25% more expert than Krishna to complete the same work, then find the total time taken to complete the work by Sujatha.

Options :

1. ✗ $5\frac{1}{2}$ days
2. ✓ $3\frac{1}{5}$ days

3. ✘ $4\frac{1}{5}$ days

4. ✘ 6 days

Question Number : 48 Question Id : 7368155098 Question Type : MCQ Option Shuffling : Yes Display Question Number : Yes
Single Line Question Option : No Option Orientation : Vertical

Correct : 1 Wrong : 0.25

कृष्णा एक काम को 4 दिनों में पूरा कर सकती हैं और सुजाता उसी काम को कृष्णा की तुलना में 25% ज्यादा दक्षता से पूरा कर सकती हैं। तो सुजाता को इस काम को पूरा करने में कुल कितने दिन लगेंगे?

Options :

1. ✘ $5\frac{1}{2}$ दिन

2. ✔ $3\frac{1}{5}$ दिन

3. ✘ $4\frac{1}{5}$ दिन

4. ✘ 6 दिन

Question Number : 49 Question Id : 7368155099 Question Type : MCQ Option Shuffling : Yes Display Question Number : Yes
Single Line Question Option : No Option Orientation : Vertical

Correct : 1 Wrong : 0.25

If A can do a piece of work in 2days, B can do the same in 6days and C can do the same work in 7days, then working together, how many days will they take to complete the work?

Options :

1. ✔ $1\frac{4}{17}$ days

2. ✘ 9days

3. ✘ $2\frac{1}{2}$ days

4. ✘ 24days

Question Number : 49 Question Id : 7368155099 Question Type : MCQ Option Shuffling : Yes Display Question Number : Yes
Single Line Question Option : No Option Orientation : Vertical

Correct : 1 Wrong : 0.25

यदि A, 2 दिनों में एक काम को पूरा कर सकता है, B उसी काम को 6 दिनों में और C, 7 दिनों में पूरा कर सकता है, तो उन्हें एकसाथ मिलकर इसी काम को पूरा करने में कितने दिन लगेंगे?

Options :

1. ✔ $1\frac{4}{17}$ दिन

2. ✘ 9 दिन

3. ✘ $2\frac{1}{2}$ दिन

4. ✘ 24 दिन

Question Number : 50 Question Id : 7368155100 Question Type : MCQ Option Shuffling : Yes Display Question Number : Yes
Single Line Question Option : No Option Orientation : Vertical

Correct : 1 Wrong : 0.25

15 men can complete a work in 15 days. 5 days after they started working, 20 more men joined them. How many days will they now take to complete the remaining work?

Options :

1. ✘ $6\frac{2}{3}$ days

2. ✔ $4\frac{2}{7}$ days

3. ✘ $7\frac{2}{3}$ days

4. ✘ $8\frac{1}{4}$ days

Question Number : 50 Question Id : 7368155100 Question Type : MCQ Option Shuffling : Yes Display Question Number : Yes
Single Line Question Option : No Option Orientation : Vertical

Correct : 1 Wrong : 0.25

15 पुरुष 15 दिनों में एक काम को पूरा कर सकते हैं। उनके द्वारा काम शुरू करने के 5 दिन बाद, 20 और पुरुष उनमें शामिल हो गए। अब शेष काम को पूरा करने के लिए उन्हें कितने दिन लगेंगे?

Options :

1. ✘ $6\frac{2}{3}$ दिन

2. ✔ $4\frac{2}{7}$ दिन

3. ✘ $7\frac{2}{3}$ दिन

4. ✘ $8\frac{1}{4}$ दिन

English Language

Section Id :	736815100
Section Number :	2
Section type :	Online
Mandatory or Optional:	Mandatory
Number of Questions:	32
Number of Questions to be attempted:	32
Section Marks:	50
Display Number Panel:	Yes
Group All Questions:	No

Sub-Section Number: 1
Sub-Section Id: 736815150
Question Shuffling Allowed : No

Question Id : 7368155101 Question Type : COMPREHENSION Sub Question Shuffling Allowed : No Group Comprehension Questions : No

Question Numbers : (51 to 60)

Question Label : Comprehension

Read the passage given below and answer the questions given under it:

Scientists are on the hunt to solve the mystery behind man's best friend. There are many theories, and no clear answers, on exactly where dogs came from, and the details of their domestication remain uncertain. A new effort by scientists aims to collect all existing data on ancestral dogs, including studying museum specimens, burial sites, and DNA samples. Archaeological evidence suggests that human interactions with dogs date to at least 14,000 years ago. But DNA evidence suggests that wolves and dogs diverged far earlier—maybe as far back as 135,000 years. A possible explanation for the difference is that earlier dogs would have strongly resembled wolves, which would make them difficult to distinguish in the archaeological record. Our nomadic ancestors would not have needed to breed dogs for specific purposes until when they founded permanent, agriculture-based settlements. Determining the geographic origin of dogs is equally challenging. Multiple areas have been theorized, including Central Asia, Siberia, and East Africa. But this is made all the more difficult by the fact that dogs and wolves frequently breed, which reintroduces wolf genes back into a given population. It's possible that multiple dog populations arose separately in different areas. Other studies point to a single origin. Given all the conflicting information, it's no wonder that the origin story is so hard to pin down. Take, for example, the popular view of domestication: that early human beings adopted wolf pups and then systematically bred them to be docile and obedient. But we now know that taming wolves is next to impossible. So the earliest dogs—or some form of the wolf—must have been, in part, willing to cooperate with early humans. And if this is true, who domesticated whom?

Sub questions

Question Number : 51 Question Id : 7368155102 Question Type : MCQ Option Shuffling : Yes Display Question Number : Yes Single Line Question Option : No Option Orientation : Vertical

Correct : 1 Wrong : 0.25

An appropriate title for the passage is {Keep the last sentence in view}

Options :

1. ✓ Did Wolves became Dogs to be Our Friends?
2. ✗ DNA and Archaeology Differs – Just a Matter of 100,000 Years
3. ✗ When did Dogs become Our Friends [Forget the 'best']?
4. ✗ Unclear origin and Ambiguous Domestication of Dogs

Question Number : 52 Question Id : 7368155103 Question Type : MCQ Option Shuffling : Yes Display Question Number : Yes Single Line Question Option : No Option Orientation : Vertical

Correct : 1 Wrong : 0.25

The passage:

Options :

1. ✗ describes and discusses dog-related issues in very clear terms with definitive evidence
2. ✗ dodges discussing dog-related issues by not offering any definitive stances

3. ✘ indicates the difficulties that surround describing and discussing dog-related issues
4. ✔ captures the confusion that conflicting information about dogs' origin engenders

Question Number : 53 Question Id : 7368155104 Question Type : MCQ Option Shuffling : Yes Display Question Number : Yes
Single Line Question Option : No Option Orientation : Vertical

Correct : 1 Wrong : 0.25

The writer mentions, "data on ancestral dogs, including studying museum specimens, burial sites, and DNA samples", but the passage fails to go back to one of the data-providers. It is

Options :

1. ✘ burial sites
2. ✘ DNA sample
3. ✔ museum pieces
4. ✘ ancestral dogs

Question Number : 54 Question Id : 7368155105 Question Type : MCQ Option Shuffling : Yes Display Question Number : Yes
Single Line Question Option : No Option Orientation : Vertical

Correct : 1 Wrong : 0.25

'Scientists are on the hunt' are looking for

Options :

1. ✘ burial sites of dogs
2. ✘ museum specimens of dogs
3. ✔ physical evidence from dogs for DNA tests
4. ✘ ancestral dogs

Question Number : 55 Question Id : 7368155106 Question Type : MCQ Option Shuffling : Yes Display Question Number : Yes
Single Line Question Option : No Option Orientation : Vertical

Correct : 1 Wrong : 0.25

The writer mentions that 'wolves and dogs diverged'. Converge, note, is the antonym of 'diverge'. The convergence will relate to

Options :

1. ✘ origin of dogs
2. ✘ domestication of dogs
3. ✔ DNA of dogs and wolves
4. ✘ becoming friends with humans

Question Number : 56 Question Id : 7368155107 Question Type : MCQ Option Shuffling : Yes Display Question Number : Yes
Single Line Question Option : No Option Orientation : Vertical

Correct : 1 Wrong : 0.25

The 'origin' the passage deals with refers to

Options :

1. ✘ dogs' genetic origin
2. ✘ dogs' geographical origin
3. ✔ both genetic and geographical origins

4. ✘ dogs' domestic origin

Question Number : 57 Question Id : 7368155108 Question Type : MCQ Option Shuffling : Yes Display Question Number : Yes
Single Line Question Option : No Option Orientation : Vertical

Correct : 1 Wrong : 0.25

The strong resemblance between dogs and wolves

Options :

1. ✘ opened the door on DNA-related research
2. ✘ created problems for the archaeologists
3. ✘ confused the records maintained by archaeologists
4. ✔ provided the thesis that dogs might have evolved from wolves

Question Number : 58 Question Id : 7368155109 Question Type : MCQ Option Shuffling : Yes Display Question Number : Yes
Single Line Question Option : No Option Orientation : Vertical

Correct : 1 Wrong : 0.25

In 'Multiple areas have been theorized...', theorized means

Options :

1. ✘ imagined
2. ✘ posited
3. ✔ hypothesized
4. ✘ speculated

Question Number : 59 Question Id : 7368155110 Question Type : MCQ Option Shuffling : Yes Display Question Number : Yes
Single Line Question Option : No Option Orientation : Vertical

Correct : 1 Wrong : 0.25

In 'reintroduces wolf genes back into a given population.....', population refers to the

Options :

1. ✘ people
2. ✘ sample
3. ✘ wolf-packs
4. ✔ dog-packs

Question Number : 60 Question Id : 7368155111 Question Type : MCQ Option Shuffling : Yes Display Question Number : Yes
Single Line Question Option : No Option Orientation : Vertical

Correct : 1 Wrong : 0.25

The closest synonym of 'domesticated' in the light of the discussion in the passage is

Options :

1. ✘ housebroken
2. ✔ tamed
3. ✘ civilized
4. ✘ accustomed

Question Id : 7368155101 Question Type : COMPREHENSION Sub Question Shuffling Allowed : No Group Comprehension
Questions : No

Question Numbers : (51 to 60)

Question Label : Comprehension

Read the passage given below and answer the questions given under it:

Scientists are on the hunt to solve the mystery behind man's best friend. There are many theories, and no clear answers, on exactly where dogs came from, and the details of their domestication remain uncertain. A new effort by scientists aims to collect all existing data on ancestral dogs, including studying museum specimens, burial sites, and DNA samples.

Archaeological evidence suggests that human interactions with dogs date to at least 14,000 years ago. But DNA evidence suggests that wolves and dogs diverged far earlier—maybe as far back as 135,000 years. A possible explanation for the difference is that earlier dogs would have strongly resembled wolves, which would make them difficult to distinguish in the archaeological record. Our nomadic ancestors would not have needed to breed dogs for specific purposes until when they founded permanent, agriculture-based settlements.

Determining the geographic origin of dogs is equally challenging. Multiple areas have been theorized, including Central Asia, Siberia, and East Africa. But this is made all the more difficult by the fact that dogs and wolves frequently breed, which reintroduces wolf genes back into a given population. It's possible that multiple dog populations arose separately in different areas. Other studies point to a single origin.

Given all the conflicting information, it's no wonder that the origin story is so hard to pin down. Take, for example, the popular view of domestication: that early human beings adopted wolf pups and then systematically bred them to be docile and obedient. But we now know that taming wolves is next to impossible. So the earliest dogs—or some form of the wolf—must have been, in part, willing to cooperate with early humans. And if this is true, who domesticated whom?

Sub questions

Question Number : 51 Question Id : 7368155102 Question Type : MCQ Option Shuffling : Yes Display Question Number : Yes
Single Line Question Option : No Option Orientation : Vertical

Correct : 1 Wrong : 0.25

An appropriate title for the passage is {Keep the last sentence in view}

Options :

1. ✓ Did Wolves became Dogs to be Our Friends?
2. ✗ DNA and Archaeology Differs - Just a Matter of 100,000 Years
3. ✗ When did Dogs become Our Friends [Forget the 'best']?
4. ✗ Unclear origin and Ambiguous Domestication of Dogs

Question Number : 52 Question Id : 7368155103 Question Type : MCQ Option Shuffling : Yes Display Question Number : Yes
Single Line Question Option : No Option Orientation : Vertical

Correct : 1 Wrong : 0.25

The passage

Options :

describes and discusses dog-related issues in very clear terms with

1. ✗ definitive evidence
2. ✗ dodges discussing dog-related issues by not offering any definitive stances
3. ✗ indicates the difficulties that surround describing and discussing dog-related issues
4. ✓ captures the confusion that conflicting information about dogs' origin engenders

Question Number : 53 Question Id : 7368155104 Question Type : MCQ Option Shuffling : Yes Display Question Number : Yes
Single Line Question Option : No Option Orientation : Vertical

Correct : 1 Wrong : 0.25

The writer mentions, "data on ancestral dogs, including studying museum specimens, burial sites, and DNA samples", but the passage fails to go back to one of the data-providers. It is

Options :

1. ✗ burial sites
2. ✗ DNA sample
3. ✓ museum pieces
4. ✗ ancestral dogs

Question Number : 54 Question Id : 7368155105 Question Type : MCQ Option Shuffling : Yes Display Question Number : Yes
Single Line Question Option : No Option Orientation : Vertical

Correct : 1 Wrong : 0.25

'Scientists are on the hunt' are looking for

Options :

1. ✗ burial sites of dogs
2. ✗ museum specimens of dogs

3. ✓ physical evidence from dogs for DNA tests

4. ✗ ancestral dogs

Question Number : 55 Question Id : 7368155106 Question Type : MCQ Option Shuffling : Yes Display Question Number : Yes
Single Line Question Option : No Option Orientation : Vertical

Correct : 1 Wrong : 0.25

The writer mentions that 'wolves and dogs diverged'. Converge, note, is the antonym of 'diverge'. The convergence will relate to

Options :

1. ✗ origin of dogs

2. ✗ domestication of dogs

3. ✓ DNA of dogs and wolves

4. ✗ becoming friends with humans

Question Number : 56 Question Id : 7368155107 Question Type : MCQ Option Shuffling : Yes Display Question Number : Yes
Single Line Question Option : No Option Orientation : Vertical

Correct : 1 Wrong : 0.25

The 'origin' the passage deals with refers to

Options :

1. ✗ dogs' genetic origin

2. ✗ dogs' geographical origin

3. ✓ both genetic and geographical origins

4. ✗ dogs' domestic origin

Question Number : 57 Question Id : 7368155108 Question Type : MCQ Option Shuffling : Yes Display Question Number : Yes
Single Line Question Option : No Option Orientation : Vertical

Correct : 1 Wrong : 0.25

The strong resemblance between dogs and wolves

Options :

1. ✗ opened the door on DNA-related research

2. ✗ created problems for the archaeologists

3. ✗ confused the records maintained by archaeologists

4. ✓ provided the thesis that dogs might have evolved from wolves

Question Number : 58 Question Id : 7368155109 Question Type : MCQ Option Shuffling : Yes Display Question Number : Yes
Single Line Question Option : No Option Orientation : Vertical

Correct : 1 Wrong : 0.25

In 'Multiple areas have been theorized,...', theorized means

Options :

1. ✗ imagined

2. ✗ posited

3. ✓ hypothesized

4. ✘ speculated

Question Number : 59 Question Id : 7368155110 Question Type : MCQ Option Shuffling : Yes Display Question Number : Yes
Single Line Question Option : No Option Orientation : Vertical

Correct : 1 Wrong : 0.25

In 'reintroduces wolf genes back into a given population.....', population refers to the

Options :

1. ✘ people

2. ✘ sample

3. ✘ wolf-packs

4. ✔ dog-packs

Question Number : 60 Question Id : 7368155111 Question Type : MCQ Option Shuffling : Yes Display Question Number : Yes
Single Line Question Option : No Option Orientation : Vertical

Correct : 1 Wrong : 0.25

The closest synonym of 'domesticated' in the light of the discussion in the passage is

Options :

1. ✘ housebroken

2. ✔ tamed

3. ✘ civilized

4. ✘ accustomed

Sub-Section Number: 2
Sub-Section Id: 736815151
Question Shuffling Allowed : No

Question Id : 7368155112 Question Type : COMPREHENSION Sub Question Shuffling Allowed : No Group Comprehension Questions : No

Question Numbers : (61 to 70)

Question Label : Comprehension

Given below is a passage with ten blanks, numbered from 11 to 20. Fill in the blanks by choosing the correct option given against the corresponding Question number;

Before Christianity, there was no practice known as 'witchcraft'. The word probably came from a Celtic word for wise, 'wicce'. Many of these can be traced to the ancient Celts and Gauls, who were familiar with _____ (11) in their daily lives. Their traditions and magic have _____ (12) to with devil-worship. By coincidence and the _____ (13) of belief, their magic worked, and was used _____ (14) day. Priests were the most prominent magic _____ (15), and many people came to them for help with decisions, love and healing. Divinations were done _____ (16) there was a major decision to be made, and the results of a _____ (17) were said to be what the result of a _____ (18) might be. Healers were a valuable resource, and the priests usually took on the role as _____ (19) as well. They combined magic with natural _____ (20) techniques that would drive away the evil that had started the illness. There were also spells and rituals done to help the general community.

Sub questions

Question Number : 61 Question Id : 7368155113 Question Type : MCQ Option Shuffling : Yes Display Question Number : Yes
Single Line Question Option : No Option Orientation : Vertical

Correct : 1 Wrong : 0.25

Fill in the blanks by choosing the correct option given against the corresponding Question number;

Options :

1. ✓ magic
2. ✗ mystery
3. ✗ music
4. ✗ 'mantras'

Question Number : 62 Question Id : 7368155114 Question Type : MCQ Option Shuffling : Yes Display Question Number : Yes
Single Line Question Option : No Option Orientation : Vertical

Correct : 1 Wrong : 0.25

Fill in the blanks by choosing the correct option given against the corresponding Question number;

Options :

1. ✗ something
2. ✗ everything
3. ✓ nothing
4. ✗ all

Question Number : 63 Question Id : 7368155115 Question Type : MCQ Option Shuffling : Yes Display Question Number : Yes
Single Line Question Option : No Option Orientation : Vertical

Correct : 1 Wrong : 0.25

Fill in the blanks by choosing the correct option given against the corresponding Question number;

Options :

1. ✗ chance
2. ✓ power
3. ✗ magic

4. ✘ music

Question Number : 64 Question Id : 7368155116 Question Type : MCQ Option Shuffling : Yes Display Question Number : Yes
Single Line Question Option : No Option Orientation : Vertical

Correct : 1 Wrong : 0.25

Fill in the blanks by choosing the correct option given against the corresponding Question number;

Options :

1. ✘ some

2. ✘ any

3. ✔ every

4. ✘ each

Question Number : 65 Question Id : 7368155117 Question Type : MCQ Option Shuffling : Yes Display Question Number : Yes
Single Line Question Option : No Option Orientation : Vertical

Correct : 1 Wrong : 0.25

Fill in the blanks by choosing the correct option given against the corresponding Question number;

Options :

1. ✔ workers

2. ✘ labourers

3. ✘ engineers

4. ✘ brokers

Question Number : 66 Question Id : 7368155118 Question Type : MCQ Option Shuffling : Yes Display Question Number : Yes
Single Line Question Option : No Option Orientation : Vertical

Correct : 1 Wrong : 0.25

Fill in the blanks by choosing the correct option given against the corresponding Question number;

Options :

1. ✘ when

2. ✘ every-time

3. ✔ anytime

4. ✘ rarely

Question Number : 67 Question Id : 7368155119 Question Type : MCQ Option Shuffling : Yes Display Question Number : Yes
Single Line Question Option : No Option Orientation : Vertical

Correct : 1 Wrong : 0.25

Fill in the blanks by choosing the correct option given against the corresponding Question number;

Options :

1. ✔ reading

2. ✘ writing

3. ✘ speaking

4. ✘ listening

Question Number : 68 Question Id : 7368155120 Question Type : MCQ Option Shuffling : Yes Display Question Number : Yes
Single Line Question Option : No Option Orientation : Vertical

Correct : 1 Wrong : 0.25

Fill in the blanks by choosing the correct option given against the corresponding Question number;

Options :

1. ✘ problem
2. ✘ occasion
3. ✔ situation
4. ✘ event

Question Number : 69 Question Id : 7368155121 Question Type : MCQ Option Shuffling : Yes Display Question Number : Yes Single Line Question Option : No Option Orientation : Vertical

Correct : 1 Wrong : 0.25

Fill in the blanks by choosing the correct option given against the corresponding Question number;

Options :

1. ✘ doctor
2. ✔ healer
3. ✘ witch
4. ✘ patient

Question Number : 70 Question Id : 7368155122 Question Type : MCQ Option Shuffling : Yes Display Question Number : Yes Single Line Question Option : No Option Orientation : Vertical

Correct : 1 Wrong : 0.25

Fill in the blanks by choosing the correct option given against the corresponding Question number;

Options :

1. ✘ magic-weaving
2. ✔ healing
3. ✘ praying
4. ✘ doctoring

Question Id : 7368155112 Question Type : COMPREHENSION Sub Question Shuffling Allowed : No Group Comprehension Questions : No

Question Numbers : (61 to 70)

Question Label : Comprehension

Given below is a passage with ten blanks, numbered from 11 to 20. Fill in the blanks by choosing the correct option given against the corresponding Question number;

Before Christianity, there was no practice known as 'witchcraft'. The word probably came from a Celtic word for wise, 'wicce'. Many of these can be traced to the ancient Celts and Gauls, who were familiar with _____ (11) in their daily lives. Their traditions and magic have _____ (12) to with devil-worship. By coincidence and the _____ (13) of belief, their magic worked, and was used _____ (14) day. Priests were the most prominent magic _____ (15), and many people came to them for help with decisions, love and healing. Divinations were done _____ (16) there was a major decision to be made, and the results of a _____ (17) were said to be what the result of a _____ (18) might be. Healers were a valuable resource, and the priests usually took on the role as _____ (19) as well. They combined magic with natural _____ (20) techniques that would drive away the evil that had started the illness. There were also spells and rituals done to help the general community.

Sub questions

Question Number : 61 Question Id : 7368155113 Question Type : MCQ Option Shuffling : Yes Display Question Number : Yes
Single Line Question Option : No Option Orientation : Vertical

Correct : 1 Wrong : 0.25

Fill in the blanks by choosing the correct option given against the corresponding Question number;

Options :

1. ✓ magic
2. ✗ mystery
3. ✗ music
4. ✗ 'mantras'

Question Number : 62 Question Id : 7368155114 Question Type : MCQ Option Shuffling : Yes Display Question Number : Yes
Single Line Question Option : No Option Orientation : Vertical

Correct : 1 Wrong : 0.25

Fill in the blanks by choosing the correct option given against the corresponding Question number;

Options :

1. ✗ something
2. ✗ everything
3. ✓ nothing
4. ✗ all

Question Number : 63 Question Id : 7368155115 Question Type : MCQ Option Shuffling : Yes Display Question Number : Yes
Single Line Question Option : No Option Orientation : Vertical

Correct : 1 Wrong : 0.25

Fill in the blanks by choosing the correct option given against the corresponding Question number;

Options :

1. ✗ chance
2. ✓ power

3. ✘ magic

4. ✘ music

Question Number : 64 Question Id : 7368155116 Question Type : MCQ Option Shuffling : Yes Display Question Number : Yes
Single Line Question Option : No Option Orientation : Vertical

Correct : 1 Wrong : 0.25

Fill in the blanks by choosing the correct option given against the corresponding Question number;

Options :

1. ✘ some

2. ✘ any

3. ✔ every

4. ✘ each

Question Number : 65 Question Id : 7368155117 Question Type : MCQ Option Shuffling : Yes Display Question Number : Yes
Single Line Question Option : No Option Orientation : Vertical

Correct : 1 Wrong : 0.25

Fill in the blanks by choosing the correct option given against the corresponding Question number;

Options :

1. ✔ workers

2. ✘ labourers

3. ✘ engineers

4. ✘ brokers

Question Number : 66 Question Id : 7368155118 Question Type : MCQ Option Shuffling : Yes Display Question Number : Yes
Single Line Question Option : No Option Orientation : Vertical

Correct : 1 Wrong : 0.25

Fill in the blanks by choosing the correct option given against the corresponding Question number;

Options :

1. ✘ when

2. ✘ every-time

3. ✔ anytime

4. ✘ rarely

Question Number : 67 Question Id : 7368155119 Question Type : MCQ Option Shuffling : Yes Display Question Number : Yes
Single Line Question Option : No Option Orientation : Vertical

Correct : 1 Wrong : 0.25

Fill in the blanks by choosing the correct option given against the corresponding Question number;

Options :

1. ✔ reading

2. ✘ writing

3. ✘ speaking

4. ✘ listening

Question Number : 68 Question Id : 7368155120 Question Type : MCQ Option Shuffling : Yes Display Question Number : Yes
Single Line Question Option : No Option Orientation : Vertical

Correct : 1 Wrong : 0.25

Fill in the blanks by choosing the correct option given against the corresponding Question number;

Options :

1. ✘ problem

2. ✘ occasion

3. ✔ situation

4. ✘ event

Question Number : 69 Question Id : 7368155121 Question Type : MCQ Option Shuffling : Yes Display Question Number : Yes
Single Line Question Option : No Option Orientation : Vertical

Correct : 1 Wrong : 0.25

Fill in the blanks by choosing the correct option given against the corresponding Question number;

Options :

1. ✘ doctor

2. ✔ healer

3. ✘ witch

4. ✘ patient

Question Number : 70 Question Id : 7368155122 Question Type : MCQ Option Shuffling : Yes Display Question Number : Yes
Single Line Question Option : No Option Orientation : Vertical

Correct : 1 Wrong : 0.25

Fill in the blanks by choosing the correct option given against the corresponding Question number;

Options :

1. ✘ magic-weaving

2. ✔ healing

3. ✘ praying

4. ✘ doctoring

Sub-Section Number: 3
Sub-Section Id: 736815152
Question Shuffling Allowed : Yes

Question Number : 71 Question Id : 7368155123 Question Type : MCQ Option Shuffling : Yes Display Question Number : Yes
Single Line Question Option : No Option Orientation : Vertical

Correct : 1 Wrong : 0.25

Given below is a set of five sentences, numbered 1 to 5, which are not in a meaningful order. Choose from the options given, the order which will be acceptable and meaningful:

1. He went towards his native village and all fled at his approach, both men and animals.
2. His owner came up and gave him a sound beating for the fright he had caused.
3. Fine clothes may disguise, but silly words will disclose a fool.
4. An Ass once found and put on a Lion's skin which the hunters had left out in the sun to dry.
5. The proud Ass, in his delight, lifted up his voice and brayed, and then everyone knew him.

Options :

1. ✘ 4,5,1,3,2
2. ✘ 4,5,1,2,3
3. ✔ 4,1,5,2,3
4. ✘ 4,1,2,3,5

Question Number : 71 Question Id : 7368155123 Question Type : MCQ Option Shuffling : Yes Display Question Number : Yes
Single Line Question Option : No Option Orientation : Vertical

Correct : 1 Wrong : 0.25

Given below is a set of five sentences, numbered 1 to 5, which are not in a meaningful order. Choose from the options given, the order which will be acceptable and meaningful:

1. He went towards his native village and all fled at his approach, both men and animals.
2. His owner came up and gave him a sound beating for the fright he had caused.
3. Fine clothes may disguise, but silly words will disclose a fool.
4. An Ass once found and put on a Lion's skin which the hunters had left out in the sun to dry.
5. The proud Ass, in his delight, lifted up his voice and brayed, and then everyone knew him.

Options :

1. ✘ 4,5,1,3,2
2. ✘ 4,5,1,2,3
3. ✔ 4,1,5,2,3
4. ✘ 4,1,2,3,5

Correct : 1 Wrong : 0.25

Given below is a set of five sentences, numbered 1 to 5, which are not in a meaningful order. Choose from the options given, the order which will be acceptable and meaningful:

1. Afraid for his life, the servant at once escaped to Samarra on a horse and was sure that there Death will not find him.
2. Death replied that she was astonished to see him in Bagdad as she had an appointment with him that night in Samarra.
3. A merchant in Bagdad sent his servant to market to buy provisions.
4. Soon the merchant met Death at the marketplace and asked her why she had made a threatening gesture to his servant when she saw him that morning.
5. The servant came back and complained that Death had looked at him and made a threatening gesture.

Options :

1. ✘ 5,4,3,2,1,
2. ✘ 1,2,3,4,5
3. ✔ 3,1,5,4,2
4. ✘ 3,5,1,4,2

Correct : 1 Wrong : 0.25

Given below is a set of five sentences, numbered 1 to 5, which are not in a meaningful order. Choose from the options given, the order which will be acceptable and meaningful:

1. Afraid for his life, the servant at once escaped to Samarra on a horse and was sure that there Death will not find him.
2. Death replied that she was astonished to see him in Bagdad as she had an appointment with him that night in Samarra.
3. A merchant in Bagdad sent his servant to market to buy provisions.
4. Soon the merchant met Death at the marketplace and asked her why she had made a threatening gesture to his servant when she saw him that morning.
5. The servant came back and complained that Death had looked at him and made a threatening gesture.

Options :

1. ✘ 5,4,3,2,1,
2. ✘ 1,2,3,4,5

3. ✓ 3,1,5,4,2

4. ✗ 3,5,1,4,2

Question Number : 73 Question Id : 7368155125 Question Type : MCQ Option Shuffling : Yes Display Question Number : Yes
Single Line Question Option : No Option Orientation : Vertical

Correct : 1 Wrong : 0.25

Given below is a set of five sentences, numbered 1 to 5, which are not in a meaningful order. Choose from the options given, the order which will be acceptable and meaningful:

1. They earn less than their middle-class equivalents because of a “class ceiling”.
2. There are now relatively few working-class actors compared to the population of Britain as a whole.
3. Their results paint a disturbing picture of imbalance, and even prejudice, in show business.
4. A report last week reported that a privately educated elite enjoyed a hugely disproportionate presence in British professions.
5. A major academic study released this weekend reveals the British acting industry as “heavily skewed towards the privileged”.

Options :

1. ✗ 5,4,3,2,1

2. ✗ 4,5,3,2,1

3. ✓ 4,3,2,5,1

4. ✗ 1,2,3,4,5

Question Number : 73 Question Id : 7368155125 Question Type : MCQ Option Shuffling : Yes Display Question Number : Yes
Single Line Question Option : No Option Orientation : Vertical

Correct : 1 Wrong : 0.25

Given below is a set of five sentences, numbered 1 to 5, which are not in a meaningful order. Choose from the options given, the order which will be acceptable and meaningful:

1. They earn less than their middle-class equivalents because of a “class ceiling”.
2. There are now relatively few working-class actors compared to the population of Britain as a whole.
3. Their results paint a disturbing picture of imbalance, and even prejudice, in show business.
4. A report last week reported that a privately educated elite enjoyed a hugely disproportionate presence in British professions.
5. A major academic study released this weekend reveals the British acting industry as “heavily skewed towards the privileged”.

Options :

1. ✘ 5,4,3,2,1
2. ✘ 4,5,3,2,1
3. ✔ 4,3,2,5,1
4. ✘ 1,2,3,4,5

Question Number : 74 Question Id : 7368155126 Question Type : MCQ Option Shuffling : Yes Display Question Number : Yes
Single Line Question Option : No Option Orientation : Vertical

Correct : 1 Wrong : 0.25

Given below is a famous one liner, the words of which are given in groups, in a jumbled manner. These words are numbered from 1. Identify the correct sequence of numbers from the options given: {Make sure that the reordered sentence would appeal to the reader}:

if/ it wrong/ too easy/ goes/ you are doing/ homework

1 2 3 4 5 6

Options :

1. ✘ 1,5,6,3,4,2
2. ✘ 1,3,2,4,6,5
3. ✔ 1,6,4,3,5,2
4. ✘ 6,5,4,3,2,1

Question Number : 74 Question Id : 7368155126 Question Type : MCQ Option Shuffling : Yes Display Question Number : Yes
Single Line Question Option : No Option Orientation : Vertical

Correct : 1 Wrong : 0.25

Given below is a famous one liner, the words of which are given in groups, in a jumbled manner. These words are numbered from 1. Identify the correct sequence of numbers from the options given: {Make sure that the reordered sentence would appeal to the reader}:

if/ it wrong/ too easy/ goes/ you are doing/ homework

1 2 3 4 5 6

Options :

1. ✘ 1,5,6,3,4,2
2. ✘ 1,3,2,4,6,5
3. ✔ 1,6,4,3,5,2
4. ✘ 6,5,4,3,2,1

Question Number : 75 Question Id : 7368155127 Question Type : MCQ Option Shuffling : Yes Display Question Number : Yes
Single Line Question Option : No Option Orientation : Vertical

Correct : 1 Wrong : 0.25

Given below is a famous one liner, the words of which are given in groups, in a jumbled manner. These words are numbered from 1. Identify the correct sequence of numbers from the options given: {Make sure that the reordered sentence would appeal to the reader}:

is/ thinking/conclusion/where you got tired of/the part/a
1 2 3 4 5 6

Options :

1. ✓ 6,3,1,5,4,2
2. ✗ 6,1,3,5,4,2
3. ✗ 1,2,3,4,5,6
4. ✗ 6,3,1,5,2,4

Question Number : 75 Question Id : 7368155127 Question Type : MCQ Option Shuffling : Yes Display Question Number : Yes
Single Line Question Option : No Option Orientation : Vertical

Correct : 1 Wrong : 0.25

Given below is a famous one liner, the words of which are given in groups, in a jumbled manner. These words are numbered from 1. Identify the correct sequence of numbers from the options given: {Make sure that the reordered sentence would appeal to the reader}:

is/ thinking/conclusion/where you got tired of/the part/a
1 2 3 4 5 6

Options :

1. ✓ 6,3,1,5,4,2
2. ✗ 6,1,3,5,4,2
3. ✗ 1,2,3,4,5,6
4. ✗ 6,3,1,5,2,4

Question Number : 76 Question Id : 7368155128 Question Type : MCQ Option Shuffling : Yes Display Question Number : Yes
Single Line Question Option : No Option Orientation : Vertical

Correct : 1 Wrong : 0.25

Given below is an ungrammatical sentence and there are four options given which offer 'improved' or corrected versions of this sentence; note that the improvements may range from grammar to usage to native-speaker use. Choose the option which corrects the sentence completely:

These irrational, sudden, wild tantrum of John is the limit, I can say!

Options :

1. ✗ These sudden, wild, irrational tantrums of John are the limit, I could say!
2. ✓ These sudden, wild, irrational tantrums of John are the limit, I must say!
3. ✗ These wild, irrational, sudden tantrums of John be the limit, I must say!

4. ✘ These sudden, wild, irrational tantrum of John are the limit, I must say!

Question Number : 76 Question Id : 7368155128 Question Type : MCQ Option Shuffling : Yes Display Question Number : Yes
Single Line Question Option : No Option Orientation : Vertical

Correct : 1 Wrong : 0.25

Given below is an ungrammatical sentence and there are four options given which offer 'improved' or corrected versions of this sentence; note that the improvements may range from grammar to usage to native-speaker use. Choose the option which corrects the sentence completely:

These irrational, sudden, wild tantrum of John is the limit, I can say!

Options :

1. ✘ These sudden, wild, irrational tantrums of John are the limit, I could say!
2. ✔ These sudden, wild, irrational tantrums of John are the limit, I must say!
3. ✘ These wild, irrational, sudden tantrums of John be the limit, I must say!
4. ✘ These sudden, wild, irrational tantrum of John are the limit, I must say!

Question Number : 77 Question Id : 7368155129 Question Type : MCQ Option Shuffling : Yes Display Question Number : Yes
Single Line Question Option : No Option Orientation : Vertical

Correct : 1 Wrong : 0.25

Given below is an ungrammatical sentence and there are four options given which offer 'improved' or corrected versions of this sentence; note that the improvements may range from grammar to usage to native-speaker use. Choose the option which corrects the sentence completely:

These amounts of problems that are facing us every day daily will not be reduced by even one.

Options :

1. ✔ The number of problems that we are facing us every day will not be reduced by even one.
2. ✘ These amount of problems that are facing us daily will not be reduced by even one.
These number of problems that are facing us every day daily will not be reduced by even
3. ✘ one.
4. ✘ The number of problems that we are facing every day daily will not be reduced by even one.

Question Number : 77 Question Id : 7368155129 Question Type : MCQ Option Shuffling : Yes Display Question Number : Yes
Single Line Question Option : No Option Orientation : Vertical

Correct : 1 Wrong : 0.25

Given below is an ungrammatical sentence and there are four options given which offer 'improved' or corrected versions of this sentence; note that the improvements may range from grammar to usage to native-speaker use. Choose the option which corrects the sentence completely:

These amounts of problems that are facing us every day daily will not be reduced by even one.

Options :

1. ✓ reduced by even one.
2. ✗ These amount of problems that are facing us daily will not be reduced by even one.
3. ✗ These number of problems that are facing us every day daily will not be reduced by even one.
4. ✗ The number of problems that we are facing every day daily will not be reduced by even one.

Question Number : 78 Question Id : 7368155130 Question Type : MCQ Option Shuffling : Yes Display Question Number : Yes
Single Line Question Option : No Option Orientation : Vertical

Correct : 1 Wrong : 0.25

Given below is an ungrammatical sentence and there are four options given which offer 'improved' or corrected versions of this sentence; note that the improvements may range from grammar to usage to native-speaker use. Choose the option which corrects the sentence completely:

“Listen me! These are very slippery steps, so employ them carefully”

Options :

1. ✗ “Listen to me! These are very slippery steps, so use them carefully.”
2. ✓ “Listen to me! These are very slippery steps, so use them carefully.”
3. ✗ “Listen me! These are very slippery steps, so use them carefully.”
4. ✗ “Listen to me! These are very slippery steps, so employ they carefully.”

Question Number : 78 Question Id : 7368155130 Question Type : MCQ Option Shuffling : Yes Display Question Number : Yes
Single Line Question Option : No Option Orientation : Vertical

Correct : 1 Wrong : 0.25

Given below is an ungrammatical sentence and there are four options given which offer 'improved' or corrected versions of this sentence; note that the improvements may range from grammar to usage to native-speaker use. Choose the option which corrects the sentence completely:

"Listen me! These are very slippery steps, so employ them carefully"

Options :

1. ✘ "Listen to me! These are very slippery steps, so use them carefully."
2. ✔ "Listen to me! These are very slippery steps, so use them carefully."
3. ✘ "Listen me! These are very slippery steps, so use them carefully."
4. ✘ "Listen to me! These are very slippery steps, so employ they carefully."

Question Number : 79 Question Id : 7368155131 Question Type : MCQ Option Shuffling : Yes Display Question Number : Yes
Single Line Question Option : No Option Orientation : Vertical

Correct : 1 Wrong : 0.25

Given below is an ungrammatical sentence and there are four options given which offer 'improved' or corrected versions of this sentence; note that the improvements may range from grammar to usage to native-speaker use. Choose the option which corrects the sentence completely:

He can be able to help you with money if he will want to.

Options :

1. ✘ He can to help you with money if he wants to.
2. ✘ He be able to help you with money if he will.
3. ✘ He will be able to help you with money if he will want to.
4. ✔ He can help you with money if he wants to.

Question Number : 79 Question Id : 7368155131 Question Type : MCQ Option Shuffling : Yes Display Question Number : Yes
Single Line Question Option : No Option Orientation : Vertical

Correct : 1 Wrong : 0.25

Given below is an ungrammatical sentence and there are four options given which offer 'improved' or corrected versions of this sentence; note that the improvements may range from grammar to usage to native-speaker use. Choose the option which corrects the sentence completely:

He can be able to help you with money if he will want to.

Options :

1. ✘ He can to help you with money if he wants to.
2. ✘ He be able to help you with money if he will.

3. ✘ He will be able to help you with money if he will want to.

4. ✔ He can help you with money if he wants to.

Question Number : 80 Question Id : 7368155132 Question Type : MCQ Option Shuffling : Yes Display Question Number : Yes
Single Line Question Option : No Option Orientation : Vertical

Correct : 1 Wrong : 0.25

Given below is an ungrammatical sentence and there are four options given which offer 'improved' or corrected versions of this sentence; note that the improvements may range from grammar to usage to native-speaker use. Choose the option which corrects the sentence completely:

It's best not to loose your cool when people shout at you.

Options :

1. ✘ It's good not to lose your cool when people shout at you.

2. ✘ It's better not to loose your cool when people shout at you.

3. ✔ It's better not to lose your cool when people shout at you.

4. ✘ It's the best not to lose your cool when people shout at you.

Question Number : 80 Question Id : 7368155132 Question Type : MCQ Option Shuffling : Yes Display Question Number : Yes
Single Line Question Option : No Option Orientation : Vertical

Correct : 1 Wrong : 0.25

Given below is an ungrammatical sentence and there are four options given which offer 'improved' or corrected versions of this sentence; note that the improvements may range from grammar to usage to native-speaker use. Choose the option which corrects the sentence completely:

It's best not to loose your cool when people shout at you.

Options :

1. ✘ It's good not to lose your cool when people shout at you.

2. ✘ It's better not to loose your cool when people shout at you.

3. ✔ It's better not to lose your cool when people shout at you.

4. ✘ It's the best not to lose your cool when people shout at you.

Question Number : 81 Question Id : 7368155133 Question Type : MCQ Option Shuffling : Yes Display Question Number : Yes
Single Line Question Option : No Option Orientation : Vertical

Correct : 1 Wrong : 0.25

Given below is a sentence which is to be transformed and rewritten as indicated in bracket and there are four options given. Choose the one which 'correctly' transforms the given sentence :

Her chambers had been opened by her guardians and her treasures were looted, when they were caught red-handed by her. {into active voice}

Options :

1. ✓ Her guardians had opened her chambers and looted her treasures, when she caught them red-handed.
2. ✗ Her guardians had opened her chambers and being looted her treasures, when she caught them red-handed.
3. ✗ Her guardians had opened her chambers and her treasures looted, when she caught them red-handed.
4. ✗ Her guardians had opened her chambers and looted her treasures, when they were caught red-handed by her

Question Number : 81 Question Id : 7368155133 Question Type : MCQ Option Shuffling : Yes Display Question Number : Yes
Single Line Question Option : No Option Orientation : Vertical

Correct : 1 Wrong : 0.25

Given below is a sentence which is to be transformed and rewritten as indicated in bracket and there are four options given. Choose the one which 'correctly' transforms the given sentence :

Her chambers had been opened by her guardians and her treasures were looted, when they were caught red-handed by her. {into active voice}

Options :

1. ✓ Her guardians had opened her chambers and looted her treasures, when she caught them red-handed.
2. ✗ Her guardians had opened her chambers and being looted her treasures, when she caught them red-handed.
3. ✗ Her guardians had opened her chambers and her treasures looted, when she caught them red-handed.
4. ✗ Her guardians had opened her chambers and looted her treasures, when they were caught red-handed by her

Question Number : 82 Question Id : 7368155134 Question Type : MCQ Option Shuffling : Yes Display Question Number : Yes
Single Line Question Option : No Option Orientation : Vertical

Correct : 1 Wrong : 0.25

Given below is a sentence which is to be transformed and rewritten as indicated in bracket and there are four options given. Choose the one which 'correctly' transforms the given sentence :

You haven't known him for long{Complete by adding a tag-question}

Options :

1. ✘ You haven't known him for long, haven't you?
2. ✘ You haven't known him for long, do you?
3. ✘ You haven't known him for long, are you?
4. ✔ You haven't known him for long, have you?

Question Number : 82 Question Id : 7368155134 Question Type : MCQ Option Shuffling : Yes Display Question Number : Yes
Single Line Question Option : No Option Orientation : Vertical

Correct : 1 Wrong : 0.25

Given below is a sentence which is to be transformed and rewritten as indicated in bracket and there are four options given. Choose the one which 'correctly' transforms the given sentence :

You haven't known him for long{Complete by adding a tag-question}

Options :

1. ✘ You haven't known him for long, haven't you?
2. ✘ You haven't known him for long, do you?
3. ✘ You haven't known him for long, are you?
4. ✔ You haven't known him for long, have you?

Question Number : 83 Question Id : 7368155135 Question Type : MCQ Option Shuffling : Yes Display Question Number : Yes
Single Line Question Option : No Option Orientation : Vertical

Correct : 1 Wrong : 0.25

Given below is a sentence which is to be transformed and rewritten as indicated in bracket and there are four options given. Choose the one which 'correctly' transforms the given sentence :

**Mary to her young daughter: "Don't go beyond the red line. You might drown."
{into Reported speech – capture the intention; use a neutral tone}**

Options :

1. ✘ Mary told her daughter not to go beyond the red line as she might drown.
Mary warned her daughter not to go beyond the red line as she might drown, if she disobeys her.
2. ✘ Mary cautioned her daughter by telling her not to go beyond the red line and explained to her the consequences of going beyond the line by telling her that she might drown if she disobeys.
3. ✘

4. ✓ Mary explained to her daughter that she might drown if she went beyond the redline.

Question Number : 83 Question Id : 7368155135 Question Type : MCQ Option Shuffling : Yes Display Question Number : Yes
Single Line Question Option : No Option Orientation : Vertical

Correct : 1 Wrong : 0.25

Given below is a sentence which is to be transformed and rewritten as indicated in bracket and there are four options given. Choose the one which 'correctly' transforms the given sentence :

Mary to her young daughter: "Don't go beyond the red line. You might drown." {into Reported speech - capture the intention; use a neutral tone}

Options :

1. ✗ Mary told her daughter not to go beyond the red line as she might drown. Mary warned her daughter not to go beyond the red line as she might
2. ✗ drown, if she disobeys her. Mary cautioned her daughter by telling her not to go beyond the red line and explained to her the consequences of going beyond the line by telling
3. ✗ her that she might drown if she disobeys. Mary explained to her daughter that she might drown if she went beyond
4. ✓ the redline.

Question Number : 84 Question Id : 7368155136 Question Type : MCQ Option Shuffling : Yes Display Question Number : Yes
Single Line Question Option : No Option Orientation : Vertical

Correct : 1 Wrong : 0.25

Read the sentence given below. Pay attention to the words/phrases/segments in *italics*. Choose the appropriate ONE WORD substitutes for the phrases and clauses *italicized*:

The police *set up* the car thief by using a hidden camera.

Options :

1. ✗ The police found the car thief by using a hidden camera,
2. ✓ The police trapped the car thief by using a hidden camera,
3. ✗ The police tempted the car thief by using a hidden camera,
4. ✗ The police lured the car thief by using a hidden camera

Question Number : 84 Question Id : 7368155136 Question Type : MCQ Option Shuffling : Yes Display Question Number : Yes
Single Line Question Option : No Option Orientation : Vertical

Correct : 1 Wrong : 0.25

Read the sentence given below. Pay attention to the words/phrases/segments in *italics*. Choose the appropriate ONE WORD substitutes for the phrases and clauses *italicized*.

The police *set up* the car thief by using a hidden camera.

Options :

1. ✘ The police found the car thief by using a hidden camera,
2. ✔ The police trapped the car thief by using a hidden camera,
3. ✘ The police tempted the car thief by using a hidden camera,
4. ✘ The police lured the car thief by using a hidden camera,

Question Number : 85 Question Id : 7368155137 Question Type : MCQ Option Shuffling : Yes Display Question Number : Yes
Single Line Question Option : No Option Orientation : Vertical

Correct : 1 Wrong : 0.25

Read the sentence given below. Pay attention to the words/phrases/segments in *italics*. Choose the appropriate ONE WORD substitutes for the phrases and clauses *italicized*:

His eyes *gave away* the truth that he would *give in* and drink again.

Options :

1. ✔ His eyes betrayed the truth that he would yield [to the temptation] and drink again.
2. ✘ His eyes revealed the truth that he would surrender and drink again.
3. ✘ His eyes revealed the truth that he would yield [to the temptation] and drink again.
4. ✘ His eyes betrayed the truth that he would surrender and drink again

Question Number : 85 Question Id : 7368155137 Question Type : MCQ Option Shuffling : Yes Display Question Number : Yes
Single Line Question Option : No Option Orientation : Vertical

Correct : 1 Wrong : 0.25

Read the sentence given below. Pay attention to the words/phrases/segments in *italics*. Choose the appropriate ONE WORD substitutes for the phrases and clauses *italicized*.

His eyes *gave away* the truth that he would *give in* and drink again.

Options :

1. ✔ His eyes betrayed the truth that he would yield [to the temptation] and drink again.
2. ✘ His eyes revealed the truth that he would surrender and drink again.
His eyes revealed the truth that he would yield [to the temptation] and
3. ✘ drink again.

4. ✘ His eyes betrayed the truth that he would surrender and drink again

Question Number : 86 Question Id : 7368155138 Question Type : MCQ Option Shuffling : Yes Display Question Number : Yes
Single Line Question Option : No Option Orientation : Vertical

Correct : 1 Wrong : 0.25

Given below is a sentence which divided into four parts labelled a, b, c, and d. One of these parts contains an error. Choose the part that has the error:

There is no / specific hard-and-fast rules/ for keeping money/ in a bank.

A

B

C

D

Options :

1. ✘ A

2. ✔ B

3. ✘ C

4. ✘ D

Question Number : 86 Question Id : 7368155138 Question Type : MCQ Option Shuffling : Yes Display Question Number : Yes
Single Line Question Option : No Option Orientation : Vertical

Correct : 1 Wrong : 0.25

Given below is a sentence which divided into four parts labelled a, b, c, and d. One of these parts contains an error. Choose the part that has the error:

There is no / specific hard-and-fast rules/ for keeping money/ in a bank.

A

B

C

D

Options :

1. ✘ A

2. ✔ B

3. ✘ C

4. ✘ D

Question Number : 87 Question Id : 7368155139 Question Type : MCQ Option Shuffling : Yes Display Question Number : Yes
Single Line Question Option : No Option Orientation : Vertical

Correct : 1 Wrong : 0.25

Given below is a sentence which divided into four parts labelled a, b, c, and d. One of these parts contains an error. Choose the part that has the error:

Have the guests/ ate / their / dinner?

A

B

C

D

Options :

1. ✘ A

2. ✔ B

3. ✘ C

4. ✘ D

Question Number : 87 Question Id : 7368155139 Question Type : MCQ Option Shuffling : Yes Display Question Number : Yes
Single Line Question Option : No Option Orientation : Vertical

Correct : 1 Wrong : 0.25

Given below is a sentence which divided into four parts labelled a, b, c, and d. One of these parts contains an error. Choose the part that has the error:

Have the guests/ ate / their / dinner?

A B C D

Options :

1. ✘ A
2. ✔ B
3. ✘ C
4. ✘ D

Question Number : 88 Question Id : 7368155140 Question Type : MCQ Option Shuffling : Yes Display Question Number : Yes
Single Line Question Option : No Option Orientation : Vertical

Correct : 1 Wrong : 0.25

Given below is a sentence which divided into four parts labelled a, b, c, and d. One of these parts contains an error. Choose the part that has the error:

What is Hecuba/ to I / and I / to Hecuba? {Forget Shakespeare!}

A B C D

Options :

1. ✘ A
2. ✔ B
3. ✘ C
4. ✘ D

Question Number : 88 Question Id : 7368155140 Question Type : MCQ Option Shuffling : Yes Display Question Number : Yes
Single Line Question Option : No Option Orientation : Vertical

Correct : 1 Wrong : 0.25

Given below is a sentence which divided into four parts labelled a, b, c, and d. One of these parts contains an error. Choose the part that has the error:

What is Hecuba/ to I / and I / to Hecuba? {Forget Shakespeare!}

A B C D

Options :

1. ✘ A

2. ✓ B

3. ✗ C

4. ✗ D

Question Number : 89 Question Id : 7368155141 Question Type : MCQ Option Shuffling : Yes Display Question Number : Yes
Single Line Question Option : No Option Orientation : Vertical

Correct : 1 Wrong : 0.25

Fill in the blanks with the correct form of idioms /proverbs by choosing the correct option given.

As a _____ you should always pay for your guest's dinner.

Options :

1. ✗ token of courtesy

2. ✗ part of manner

3. ✗ host of the dinner

4. ✓ rule of thumb

Question Number : 89 Question Id : 7368155141 Question Type : MCQ Option Shuffling : Yes Display Question Number : Yes
Single Line Question Option : No Option Orientation : Vertical

Correct : 1 Wrong : 0.25

Fill in the blanks with the correct form of idioms /proverbs by choosing the correct option given.

As a _____ you should always pay for your guest's dinner.

Options :

1. ✗ token of courtesy

2. ✗ part of manner

3. ✗ host of the dinner

4. ✓ rule of thumb

Question Number : 90 Question Id : 7368155142 Question Type : MCQ Option Shuffling : Yes Display Question Number : Yes
Single Line Question Option : No Option Orientation : Vertical

Correct : 1 Wrong : 0.25

Fill in the blanks with the correct form of idioms /proverbs by choosing the correct option given.

He's learned where the college is but is still _____ with everything else

Options :

1. ✗ elbowing his way

2. ✓ finding his feet

3. ✗ testing with his thumbs

4. ✘ smelling his way around

Question Number : 90 Question Id : 7368155142 Question Type : MCQ Option Shuffling : Yes Display Question Number : Yes
Single Line Question Option : No Option Orientation : Vertical

Correct : 1 Wrong : 0.25

Fill in the blanks with the correct form of idioms /proverbs by choosing the correct option given.

He's learned where the college is but is still _____ with everything else

Options :

1. ✘ elbowing his way
2. ✔ finding his feet
3. ✘ testing with his thumbs
4. ✘ smelling his way around

Question Number : 91 Question Id : 7368155143 Question Type : MCQ Option Shuffling : Yes Display Question Number : Yes
Single Line Question Option : No Option Orientation : Vertical

Correct : 1 Wrong : 0.25

Complete the sentence below by choosing one related pair of words that will fill in the blanks:

Don't _____ the hand that _____ you.

Options :

1. ✘ feed; bite
2. ✔ bite; feed
3. ✘ hold; beat
4. ✘ beat; hold

Question Number : 91 Question Id : 7368155143 Question Type : MCQ Option Shuffling : Yes Display Question Number : Yes
Single Line Question Option : No Option Orientation : Vertical

Correct : 1 Wrong : 0.25

Complete the sentence below by choosing one related pair of words that will fill in the blanks:

Don't _____ the hand that _____ you.

Options :

1. ✘ feed; bite
2. ✔ bite; feed
3. ✘ hold; beat

4. ✘ beat; hold

Question Number : 92 Question Id : 7368155144 Question Type : MCQ Option Shuffling : Yes Display Question Number : Yes
Single Line Question Option : No Option Orientation : Vertical

Correct : 1 Wrong : 0.25

Complete the sentence below by choosing one related pair of words that will fill in the blanks:

A friend to _____ is a friend to _____ .

Options :

1. ✘ anybody; somebody
2. ✘ somebody; everybody
3. ✔ everybody; nobody
4. ✘ everybody; somebody

Question Number : 92 Question Id : 7368155144 Question Type : MCQ Option Shuffling : Yes Display Question Number : Yes
Single Line Question Option : No Option Orientation : Vertical

Correct : 1 Wrong : 0.25

Complete the sentence below by choosing one related pair of words that will fill in the blanks:

A friend to _____ is a friend to _____ .

Options :

1. ✘ anybody; somebody
2. ✘ somebody; everybody
3. ✔ everybody; nobody
4. ✘ everybody; somebody

Question Number : 93 Question Id : 7368155145 Question Type : MCQ Option Shuffling : Yes Display Question Number : Yes
Single Line Question Option : No Option Orientation : Vertical

Correct : 1 Wrong : 0.25

A key word is given below. Choose the word closest to it in its meaning {synonym}. Pay attention to how the word would be used to, if required:

Modern

Options :

1. ✘ Stylish
2. ✘ Existing
3. ✔ Contemporary
4. ✘ Current

Question Number : 93 Question Id : 7368155145 Question Type : MCQ Option Shuffling : Yes Display Question Number : Yes
Single Line Question Option : No Option Orientation : Vertical

Correct : 1 Wrong : 0.25

A key word is given below. Choose the word closest to it in its meaning {synonym}. Pay attention to how the word would be used to, if required:

Modern

Options :

1. ✘ Stylish
2. ✘ Existing
3. ✔ Contemporary
4. ✘ Current

Question Number : 94 Question Id : 7368155146 Question Type : MCQ Option Shuffling : Yes Display Question Number : Yes
Single Line Question Option : No Option Orientation : Vertical

Correct : 1 Wrong : 0.25

A key word is given below. Choose the word closest to it in its meaning {synonym}. Pay attention to how the word would be used to, if required:

Crime

Options :

1. ✘ Mistake
2. ✘ Error
3. ✘ Howler
4. ✔ Offence

Question Number : 94 Question Id : 7368155146 Question Type : MCQ Option Shuffling : Yes Display Question Number : Yes
Single Line Question Option : No Option Orientation : Vertical

Correct : 1 Wrong : 0.25

A key word is given below. Choose the word closest to it in its meaning {synonym}. Pay attention to how the word would be used to, if required:

Crime

Options :

1. ✘ Mistake
2. ✘ Error
3. ✘ Howler
4. ✔ Offence

Question Number : 95 Question Id : 7368155147 Question Type : MCQ Option Shuffling : Yes Display Question Number : Yes
Single Line Question Option : No Option Orientation : Vertical

Correct : 1 Wrong : 0.25

A key word is given below. Choose the word closest to it in its meaning {synonym}. Pay attention to how the word would be used to, if required:

Influence

Options :

1. ✓ Power
2. ✗ Manipulate
3. ✗ Authority
4. ✗ Pressure

Question Number : 95 Question Id : 7368155147 Question Type : MCQ Option Shuffling : Yes Display Question Number : Yes
Single Line Question Option : No Option Orientation : Vertical

Correct : 1 Wrong : 0.25

A key word is given below. Choose the word closest to it in its meaning {synonym}. Pay attention to how the word would be used to, if required:

Influence

Options :

1. ✓ Power
2. ✗ Manipulate
3. ✗ Authority
4. ✗ Pressure

Question Number : 96 Question Id : 7368155148 Question Type : MCQ Option Shuffling : Yes Display Question Number : Yes
Single Line Question Option : No Option Orientation : Vertical

Correct : 1 Wrong : 0.25

A key word is given below. Choose the word which indicates the contradictory or opposite meaning {antonym} of the key word:

Defective

Options :

1. ✓ Functional
2. ✗ Ideal
3. ✗ Effective
4. ✗ Correct

Question Number : 96 Question Id : 7368155148 Question Type : MCQ Option Shuffling : Yes Display Question Number : Yes
Single Line Question Option : No Option Orientation : Vertical

Correct : 1 Wrong : 0.25

A key word is given below. Choose the word which indicates the contradictory or opposite meaning {antonym} of the key word:

Defective

Options :

1. ✓ Functional
2. ✗ Ideal
3. ✗ Effective
4. ✗ Correct

Question Number : 97 Question Id : 7368155149 Question Type : MCQ Option Shuffling : Yes Display Question Number : Yes
Single Line Question Option : No Option Orientation : Vertical

Correct : 1 Wrong : 0.25

A key word is given below. Choose the word which indicates the contradictory or opposite meaning {antonym} of the key word:

Deny

Options :

1. ✓ Accept
2. ✗ Concur
3. ✗ Confirm
4. ✗ Accede

Question Number : 97 Question Id : 7368155149 Question Type : MCQ Option Shuffling : Yes Display Question Number : Yes
Single Line Question Option : No Option Orientation : Vertical

Correct : 1 Wrong : 0.25

A key word is given below. Choose the word which indicates the contradictory or opposite meaning {antonym} of the key word:

Deny

Options :

1. ✓ Accept
2. ✗ Concur
3. ✗ Confirm
4. ✗ Accede

Question Number : 98 Question Id : 7368155150 Question Type : MCQ Option Shuffling : Yes Display Question Number : Yes
Single Line Question Option : No Option Orientation : Vertical

Correct : 1 Wrong : 0.25

Given below is a set of four words. One of the four words is spelled wrongly. Choose the word that has been spelled wrongly.

Options :

1. ✓ alege
2. ✗ college
3. ✗ privilege
4. ✗ sacrilege

Question Number : 98 Question Id : 7368155150 Question Type : MCQ Option Shuffling : Yes Display Question Number : Yes
Single Line Question Option : No Option Orientation : Vertical

Correct : 1 Wrong : 0.25

Given below is a set of four words. One of the four words is spelled wrongly. Choose the word that has been spelled wrongly.

Options :

1. ✓ alege
2. ✗ college
3. ✗ privilege
4. ✗ sacrilege

Question Number : 99 Question Id : 7368155151 Question Type : MCQ Option Shuffling : Yes Display Question Number : Yes
Single Line Question Option : No Option Orientation : Vertical

Correct : 1 Wrong : 0.25

Given below is a set of four words. One of the four words is spelled wrongly. Choose the word that has been spelled wrongly.

Options :

1. ✗ detainee
2. ✗ examinee
3. ✗ nominee
4. ✓ treinee

Question Number : 99 Question Id : 7368155151 Question Type : MCQ Option Shuffling : Yes Display Question Number : Yes
Single Line Question Option : No Option Orientation : Vertical

Correct : 1 Wrong : 0.25

Given below is a set of four words. One of the four words is spelled wrongly. Choose the word that has been spelled wrongly.

Options :

1. ✗ detainee
2. ✗ examinee
3. ✗ nominee
4. ✓ treinee

Question Number : 100 Question Id : 7368155152 Question Type : MCQ Option Shuffling : Yes Display Question Number : Yes
Single Line Question Option : No Option Orientation : Vertical

Correct : 1 Wrong : 0.25

Given below is a set of four words. Choose the word with the correct spelling:

Options :

1. ✗ foureggo
2. ✗ foarefather
3. ✗ fourehand

4. ✓ forehead

Question Number : 100 Question Id : 7368155152 Question Type : MCQ Option Shuffling : Yes Display Question Number : Yes
Single Line Question Option : No Option Orientation : Vertical

Correct : 1 Wrong : 0.25

Given below is a set of four words. Choose the word with the correct spelling:

Options :

1. ✗ foureago
2. ✗ foarefather
3. ✗ fourehand
4. ✓ forehead

General Intelligence

Section Id :	736815101
Section Number :	3
Section type :	Online
Mandatory or Optional:	Mandatory
Number of Questions:	50
Number of Questions to be attempted:	50
Section Marks:	50
Display Number Panel:	Yes
Group All Questions:	No

Sub-Section Number:	1
Sub-Section Id:	736815153
Question Shuffling Allowed :	Yes

Question Number : 101 Question Id : 7368155153 Question Type : MCQ Option Shuffling : Yes Display Question Number : Yes
Single Line Question Option : No Option Orientation : Vertical

Correct : 1 Wrong : 0.25

The elevation angle of a ladder leaning against a wall is 30° and the foot of the ladder is 8.5 meter away from the wall. What will be the length of the ladder?

Options :

1. ✗ 2.88 m
2. ✓ 9.81 m
3. ✗ 6.99 m
4. ✗ 10 m

Question Number : 101 Question Id : 7368155153 Question Type : MCQ Option Shuffling : Yes Display Question Number : Yes
Single Line Question Option : No Option Orientation : Vertical

Correct : 1 Wrong : 0.25

एक सीढ़ी का दीवार से उन्नयन कोण 30° डिग्री है और सीढ़ी का आधार (Base) दीवार से 8.5 मीटर की दूरी पर है। सीढ़ी की लंबाई क्या होगी?

Options :

1. ✘ 2.88 मीटर
2. ✔ 9.81 मीटर
3. ✘ 6.99 मीटर
4. ✘ 10 मीटर

Question Number : 102 Question Id : 7368155154 Question Type : MCQ Option Shuffling : Yes Display Question Number : Yes
Single Line Question Option : No Option Orientation : Vertical

Correct : 1 Wrong : 0.25

What will be the greatest number which will divide 49, 343 and 308?

Options :

1. ✘ 49
2. ✘ 43
3. ✔ 7
4. ✘ 21

Question Number : 102 Question Id : 7368155154 Question Type : MCQ Option Shuffling : Yes Display Question Number : Yes
Single Line Question Option : No Option Orientation : Vertical

Correct : 1 Wrong : 0.25

49,343 और 308 को विभाजित करने वाली सबसे बड़ी संख्या कौन सी है?

Options :

1. ✘ 49
2. ✘ 43
3. ✔ 7
4. ✘ 21

Question Number : 103 Question Id : 7368155155 Question Type : MCQ Option Shuffling : Yes Display Question Number : Yes
Single Line Question Option : No Option Orientation : Vertical

Correct : 1 Wrong : 0.25

If P stands for +, Q stands for -, R stands for X, S stands for > and T stands for =, then which one of the following is true?

Options :

1. ✘ 84 S 12 R 9
2. ✔ 17 R 4 S 14 R 4
3. ✘ 15 P 6 T 12 Q 5
4. ✘ 6 R 5 T 5 R 8

Question Number : 103 Question Id : 7368155155 Question Type : MCQ Option Shuffling : Yes Display Question Number : Yes
Single Line Question Option : No Option Orientation : Vertical

Correct : 1 Wrong : 0.25

यदि P के लिए '+' का प्रयोग होता है, Q के लिए '-' का प्रयोग होता है, R के लिए 'x' का प्रयोग होता है, S के लिए '>' का प्रयोग होता है और T के लिए '=' का प्रयोग होता है, तो निम्नलिखित में से कौन सा सत्य है?

Options :

1. ✘ 84 S 12 R 9
2. ✔ 17 R 4 S 14 R 4
3. ✘ 15 P 6 T 12 Q 5
4. ✘ 6 R 5 T 5 R 8

Question Number : 104 Question Id : 7368155156 Question Type : MCQ Option Shuffling : Yes Display Question Number : Yes Single Line Question Option : No Option Orientation : Vertical

Correct : 1 Wrong : 0.25

If Aeroplane is denoted by Car, Car is denoted by Lollipop, Lollipop is denoted by Sky and Sky is denoted by Rocket then which one of the following is sweet in taste?

Options :

1. ✘ Lollipop
2. ✘ Rocket
3. ✘ Aeroplane
4. ✔ Sky

Question Number : 104 Question Id : 7368155156 Question Type : MCQ Option Shuffling : Yes Display Question Number : Yes Single Line Question Option : No Option Orientation : Vertical

Correct : 1 Wrong : 0.25

यदि विमान को कार, कार को लॉलीपॉप, लॉलीपॉप को आकाश और आकाश को रॉकेट कहा जाता है, तो निम्नलिखित में से कौन सा स्वाद में मीठा होता है?

Options :

1. ✘ लॉलीपॉप
2. ✘ रॉकेट
3. ✘ विमान
4. ✔ आकाश

Question Number : 105 Question Id : 7368155157 Question Type : MCQ Option Shuffling : Yes Display Question Number : Yes Single Line Question Option : No Option Orientation : Vertical

Correct : 1 Wrong : 0.25

If paper is termed as car, car is termed as pipe, pipe is termed as speaker and speaker is termed as copy then which one of the following is used to play songs?

Options :

1. ✘ Speaker
2. ✔ Copy
3. ✘ Pipe

4. ✖ Car

Question Number : 105 Question Id : 7368155157 Question Type : MCQ Option Shuffling : Yes Display Question Number : Yes
Single Line Question Option : No Option Orientation : Vertical

Correct : 1 Wrong : 0.25

यदि कागज को कार, कार को पाइप, पाइप को स्पीकर और स्पीकर को कॉपी कहा जाता है, तो संगीत बजाने के लिए निम्नलिखित में से किसका प्रयोग किया जाता है?

Options :

1. ✖ स्पीकर
2. ✔ कॉपी
3. ✖ पाइप
4. ✖ कार

Question Number : 106 Question Id : 7368155158 Question Type : MCQ Option Shuffling : Yes Display Question Number : Yes
Single Line Question Option : No Option Orientation : Vertical

Correct : 1 Wrong : 0.25

If 4 boys can complete a work in 15 days. How many boys are required to do the same work in 12 days?

Options :

1. ✔ 5 boys
2. ✖ 7 boys
3. ✖ 8 boys
4. ✖ 2 boys

Question Number : 106 Question Id : 7368155158 Question Type : MCQ Option Shuffling : Yes Display Question Number : Yes
Single Line Question Option : No Option Orientation : Vertical

Correct : 1 Wrong : 0.25

4 लड़के 15 दिनों में एक काम को पूरा कर सकते हैं, तो उसी काम को कितने लड़के 12 दिनों में पूरा कर पाएंगे?

Options :

1. ✔ 5 लड़के
2. ✖ 7 लड़के
3. ✖ 8 लड़के
4. ✖ 2 लड़के

Question Number : 107 Question Id : 7368155159 Question Type : MCQ Option Shuffling : Yes Display Question Number : Yes
Single Line Question Option : No Option Orientation : Vertical

Correct : 1 Wrong : 0.25

If speed of a train is 23 kmph, how much time it will take to cover a distance of 184 km?

Options :

1. ✖ 300 minutes

2. ✓ 480 minutes
3. ✗ 700 minutes
4. ✗ 120 minutes

Question Number : 107 Question Id : 7368155159 Question Type : MCQ Option Shuffling : Yes Display Question Number : Yes
Single Line Question Option : No Option Orientation : Vertical

Correct : 1 Wrong : 0.25

यदि एक ट्रेन की गति 23 कि.मी./घंटा है, तो वह 184 कि.मी. की दूरी तय करने के लिए कितना समय लेगी?

Options :

1. ✗ 300 मिनट
2. ✓ 480 मिनट
3. ✗ 700 मिनट
4. ✗ 120 मिनट

Question Number : 108 Question Id : 7368155160 Question Type : MCQ Option Shuffling : Yes Display Question Number : Yes
Single Line Question Option : No Option Orientation : Vertical

Correct : 1 Wrong : 0.25

Compute the following

$$12^2+48^2+64^2-56^2=?$$

Options :

1. ✗ 8709
2. ✓ 3408
3. ✗ 3345
4. ✗ 1234

Question Number : 108 Question Id : 7368155160 Question Type : MCQ Option Shuffling : Yes Display Question Number : Yes
Single Line Question Option : No Option Orientation : Vertical

Correct : 1 Wrong : 0.25

निम्नलिखित की गणना करें:

$$12^2+48^2+64^2-56^2=?$$

Options :

1. ✗ 8709
2. ✓ 3408
3. ✗ 3345
4. ✗ 1234

Question Number : 109 Question Id : 7368155161 Question Type : MCQ Option Shuffling : Yes Display Question Number : Yes
Single Line Question Option : No Option Orientation : Vertical

Correct : 1 Wrong : 0.25

Compute the following

$$456/234+456/345+123/145=?$$

Options :

1. ✘ 78.23
2. ✘ 6.90
3. ✔ 4.118
4. ✘ 5.89

Question Number : 109 Question Id : 7368155161 Question Type : MCQ Option Shuffling : Yes Display Question Number : Yes
Single Line Question Option : No Option Orientation : Vertical

Correct : 1 Wrong : 0.25

निम्नलिखित की गणना करें:

$$456/234+456/345+123/145=?$$

Options :

1. ✘ 78.23
2. ✘ 6.90
3. ✔ 4.118
4. ✘ 5.89

Question Number : 110 Question Id : 7368155162 Question Type : MCQ Option Shuffling : Yes Display Question Number : Yes
Single Line Question Option : No Option Orientation : Vertical

Correct : 1 Wrong : 0.25

If quotient is 8892, divisor is 6678 and remainder is 5 then what will be the dividend?

Options :

1. ✔ 59380781
2. ✘ 44567891
3. ✘ 59380776
4. ✘ 67897653

Question Number : 110 Question Id : 7368155162 Question Type : MCQ Option Shuffling : Yes Display Question Number : Yes
Single Line Question Option : No Option Orientation : Vertical

Correct : 1 Wrong : 0.25

यदि भागफल 8892 है, 6678 भाजक है और शेष 5 है, तो भाज्य क्या होगा?

Options :

1. ✔ 59380781
2. ✘ 44567891
3. ✘ 59380776
4. ✘ 67897653

Question Number : 111 Question Id : 7368155163 Question Type : MCQ Option Shuffling : Yes Display Question Number : Yes
Single Line Question Option : No Option Orientation : Vertical

Correct : 1 Wrong : 0.25

Compute the following

$$1234^2+223^2+2\times 1234\times 223=?$$

Options :

1. ✘ 3453423

2. ✓ 2122849

3. ✗ 1667894

4. ✗ 2322349

Question Number : 111 Question Id : 7368155163 Question Type : MCQ Option Shuffling : Yes Display Question Number : Yes
Single Line Question Option : No Option Orientation : Vertical

Correct : 1 Wrong : 0.25

निम्नलिखित की गणना करें:

$$1234^2 + 223^2 + 2 \times 1234 \times 223 = ?$$

Options :

1. ✗ 3453423

2. ✓ 2122849

3. ✗ 1667894

4. ✗ 2322349

Question Number : 112 Question Id : 7368155164 Question Type : MCQ Option Shuffling : Yes Display Question Number : Yes
Single Line Question Option : No Option Orientation : Vertical

Correct : 1 Wrong : 0.25

Sachin went to cricket classes. He now plays for his state Ranji team as an opening batsman. He might be

Options :

1. ✗ doing good in fielding in the classes

2. ✗ a son of Ranji's bowling selector

3. ✓ playing good as a batsman in cricket classes

4. ✗ a substitute for a batman in the cricket classes

Question Number : 112 Question Id : 7368155164 Question Type : MCQ Option Shuffling : Yes Display Question Number : Yes
Single Line Question Option : No Option Orientation : Vertical

Correct : 1 Wrong : 0.25

सचिन क्रिकेट क्लासेस में जाता है। वह अब एक ओपनिंग बल्लेबाज के रूप में राज्य की रणजी टीम के लिए खेलता है। हो सकता है कि वह :

Options :

1. ✗ क्लासेस में फील्डिंग अच्छी कर रहा हो

2. ✗ रणजी के गेंदबाजी चयनकर्ता का बेटा हो

3. ✓ क्रिकेट क्लासेस में बल्लेबाजी का अच्छा प्रदर्शन कर रहा हो

4. ✗ क्रिकेट क्लासेस में बल्लेबाज के लिए एक विकल्प हो

Question Number : 113 Question Id : 7368155165 Question Type : MCQ Option Shuffling : Yes Display Question Number : Yes
Single Line Question Option : No Option Orientation : Vertical

Correct : 1 Wrong : 0.25

Ravi took admission in a competitive exam preparatory class. He is now studying as well as teaching in the class. Which of the following situations led him to take such a decision

Options :

1. ✘ He wants to teach rather than get selected in any competition
2. ✘ He wants to manage fees for his study
3. ✘ He is financially sound
4. ✔ Teaching will make his concepts strong which will help him in competitions

Question Number : 113 Question Id : 7368155165 Question Type : MCQ Option Shuffling : Yes Display Question Number : Yes Single Line Question Option : No Option Orientation : Vertical

Correct : 1 Wrong : 0.25

रवि ने एक प्रतियोगी परीक्षा की तैयारी के लिए कक्षा में दाखिला लिया। अब वह कक्षा में अच्छी तरह से अध्ययन कर रहा है और अध्यापक के रूप में पढ़ा भी रहा है।

निम्नलिखित स्थितियों में से किस स्थिति ने उसे यह निर्णय लेने के लिए प्रेरित किया?

Options :

1. ✘ वह किसी भी प्रतियोगी परीक्षा में चुने जाने के बजाय पढ़ाने में ज्यादा दिलचस्पी रखता है
2. ✘ वह अपने अध्ययन के लिए फीस की व्यवस्था करना चाहता है
3. ✘ वह आर्थिक रूप से मजबूत है
4. ✔ अध्यापन से उसकी संकल्पना को मजबूती मिलेगी जो उसे प्रतियोगिताओं में मदद करेगी

Question Number : 114 Question Id : 7368155166 Question Type : MCQ Option Shuffling : Yes Display Question Number : Yes Single Line Question Option : No Option Orientation : Vertical

Correct : 1 Wrong : 0.25

The Vice Chancellor introduced the new system of examinations in the University. What might be a possible cause for such a decision

Options :

1. ✘ He is interested in trying new systems for examination
2. ✘ The new system is costlier than the previous one
3. ✔ The new system is much more effective than the previous one
4. ✘ The University needs a change.

Question Number : 114 Question Id : 7368155166 Question Type : MCQ Option Shuffling : Yes Display Question Number : Yes Single Line Question Option : No Option Orientation : Vertical

Correct : 1 Wrong : 0.25

कुलपति ने विश्वविद्यालय में परीक्षाओं की नई प्रणाली की शुरुआत की। इस तरह के निर्णय के लिए संभावित कारण क्या हो सकता है?

Options :

1. ✘ वह परीक्षा की नई प्रणाली में दिलचस्पी लेता है

2. ✘ नई प्रणाली पिछली प्रणाली की तुलना में महंगी है
3. ✔ नई प्रणाली पिछली प्रणाली से ज्यादा प्रभावी है
4. ✘ विश्वविद्यालय को बदलाव की जरूरत है।

Question Number : 115 Question Id : 7368155167 Question Type : MCQ Option Shuffling : Yes Display Question Number : Yes
Single Line Question Option : No Option Orientation : Vertical

Correct : 1 Wrong : 0.25

Rishabh and Ankit are close friends. Two months ago, Ankit borrowed some money from Rishabh without telling him the actual reason. Now Rishabh comes to know that Ankit invested the money in illegal activities and lost it. Ankit now refuses to give money and Rishabh needs it. What would Rishabh do in such a case

Options :

1. ✘ Beat up Ankit
2. ✘ Report the scenario to the police
3. ✔ Talk to Ankit first and then go to the police seeking help
4. ✘ Won't do anything

Question Number : 115 Question Id : 7368155167 Question Type : MCQ Option Shuffling : Yes Display Question Number : Yes
Single Line Question Option : No Option Orientation : Vertical

Correct : 1 Wrong : 0.25

ऋषभ और अंकित करीबी दोस्त हैं। दो महीने पहले, अंकित ने वास्तविक कारण बताए बिना ऋषभ से कुछ रुपये उधार लिए। अब ऋषभ को पता चला की अंकित ने अवैध गतिविधियों में पैसा निवेश किया था और पैसा डूब गया। अब अंकित ने पैसे देने से मना कर दिया, लेकिन ऋषभ को रूपयों की जरूरत है। ऋषभ को इस मामले में क्या करना चाहिए?

Options :

1. ✘ अंकित को मारना चाहिए
2. ✘ इस घटना को पुलिस को सूचित करना चाहिए
3. ✔ पहले अंकित से बात करना चाहिए फिर पुलिस को खबर करनी चाहिए
4. ✘ कुछ भी नहीं करना चाहिए

Question Number : 116 Question Id : 7368155168 Question Type : MCQ Option Shuffling : Yes Display Question Number : Yes
Single Line Question Option : No Option Orientation : Vertical

Correct : 1 Wrong : 0.25

You are a doctor's son. Your father wants you to become a doctor. You have qualified for the MBBS entrance examination but you are not interested in Medical studies. What will you do

Options :

1. ✘ You will try to develop your interest in Medical studies

2. ✓ You will talk to your father on this matter and tell him about your field of interest
3. ✗ You will not say anything as each of your life's decisions have been taken by your father
4. ✗ You will run away from the home and pursue your dreams

Question Number : 116 Question Id : 7368155168 Question Type : MCQ Option Shuffling : Yes Display Question Number : Yes
Single Line Question Option : No Option Orientation : Vertical

Correct : 1 Wrong : 0.25

आप एक डॉक्टर के बेटे हैं। आपके पिता आपको एक डॉक्टर बनाना चाहते हैं। आप एम.बी.बी.एस. प्रवेश परीक्षा पास की है, लेकिन आप मेडिकल की पढ़ाई में दिलचस्पी नहीं रखते। आप क्या करेंगे?

Options :

1. ✗ आप मेडिकल की पढ़ाई में अपनी रुचि विकसित करने की कोशिश करेंगे
2. ✓ आप इस मामले में अपने पिता से बात करेंगे और अपनी दिलचस्पी बताएंगे
3. ✗ आप कुछ भी नहीं करेंगे क्योंकि आपकी जिन्दगी के सारे फैसले आपके पिता ने ही लिए हैं
4. ✗ आप अपने सपनों को पूरा करने के लिए घर छोड़ कर भाग जाएंगे

Question Number : 117 Question Id : 7368155169 Question Type : MCQ Option Shuffling : Yes Display Question Number : Yes
Single Line Question Option : No Option Orientation : Vertical

Correct : 1 Wrong : 0.25

You are a constable. You observe some terrorist activities near your home. What will you do

Options :

1. ✗ Go and Arrest them
2. ✗ Ask for help from your army friend
3. ✓ Tell the scenario to your higher authorities
4. ✗ Let it happen

Question Number : 117 Question Id : 7368155169 Question Type : MCQ Option Shuffling : Yes Display Question Number : Yes
Single Line Question Option : No Option Orientation : Vertical

Correct : 1 Wrong : 0.25

आप एक हवलदार हैं। आपने अपने घर के पास कुछ आतंकवादी गतिविधियों को देखा है। आप क्या करेंगे?

Options :

1. ✗ उन्हें जाकर गिरफ्तार करेंगे
2. ✗ अपने दोस्त से मदद लेंगे जो सेना में है
3. ✓ अपने उच्च अधिकारियों को इस बात के बारे में सूचित करेंगे
4. ✗ जो हो रहा है होने देंगे

Question Number : 118 Question Id : 7368155170 Question Type : MCQ Option Shuffling : Yes Display Question Number : Yes
Single Line Question Option : No Option Orientation : Vertical

Correct : 1 Wrong : 0.25

You have seen a tourist who is capturing photos at a tourist place using a drone camera.
What would you do

Options :

1. ✘ Let him do what he wants
2. ✘ Go and stop him doing this
3. ✔ Tell the scenario to the concerning authorities
4. ✘ Tell him to capture a selfie with you

Question Number : 118 Question Id : 7368155170 Question Type : MCQ Option Shuffling : Yes Display Question Number : Yes
Single Line Question Option : No Option Orientation : Vertical

Correct : 1 Wrong : 0.25

आप ने एक पर्यटक को देखा जो एक ड्रोन कैमरे का इस्तेमाल करके पर्यटन स्थल की तस्वीरें ले रहा है। आप क्या करेंगे?

Options :

1. ✘ जो वह कर रहा है उसे करने देंगे
2. ✘ उसे जाकर रोकेंगे
3. ✔ इस विषय में संबंधित अधिकारियों को बताएँगे
4. ✘ आप उसे अपने साथ एक सेल्फी लेने के लिए कहेंगे

Question Number : 119 Question Id : 7368155171 Question Type : MCQ Option Shuffling : Yes Display Question Number : Yes
Single Line Question Option : No Option Orientation : Vertical

Correct : 1 Wrong : 0.25

Your daughter is a victim of eve teasing. What would you do in such a case

Options :

1. ✘ Your with your sons go and beat the boys who are doing eve teasing
2. ✔ Go to the police with a mob and pressurize them to take a quick action against it
3. ✘ Eve teasing is a trend. Let it happen
4. ✘ Tell your daughter to travel through a different route

Question Number : 119 Question Id : 7368155171 Question Type : MCQ Option Shuffling : Yes Display Question Number : Yes
Single Line Question Option : No Option Orientation : Vertical

Correct : 1 Wrong : 0.25

आपकी बेटी छेड़छाड़ का शिकार हुई है। आप इस तरह के मामले में क्या करेंगे?

Options :

1. ✘ आप अपने बेटे के साथ जाकर छेड़छाड़ करने वाले लडको को मारेंगे
आप बहुत से लोगों के साथ पुलिस के पास जाएंगे और इसके खिलाफ शीघ्र कार्यवाही
2. ✔ करने के लिए उन पर दबाव डालेंगे

3. ✘ छेड़छाड़ चलन में है, इसे होने देंगे

4. ✘ आप आपनी बेटी को दूसरे रास्ते से आनेजाने के लिए कहेंगे

Question Number : 120 Question Id : 7368155172 Question Type : MCQ Option Shuffling : Yes Display Question Number : Yes
Single Line Question Option : No Option Orientation : Vertical

Correct : 1 Wrong : 0.25

Statement: A thing of beauty is a joy for lifetime

Argument 1: Beauty lies in eyes of the person

Argument 2: There is nothing beautiful in the world

Options :

1. ✘ Argument 1 is strong

2. ✘ Argument 2 is strong

3. ✘ Both the Arguments are strong

4. ✔ Neither of the Arguments are strong

Question Number : 120 Question Id : 7368155172 Question Type : MCQ Option Shuffling : Yes Display Question Number : Yes
Single Line Question Option : No Option Orientation : Vertical

Correct : 1 Wrong : 0.25

कथन: सौंदर्य जीवन भर के लिए एक खुशी है

तर्क 1 : सौंदर्य व्यक्ति की आँखों में निहित है

तर्क 2 : दुनिया में कुछ भी सुन्दर नहीं है

Options :

1. ✘ तर्क 1 मजबूत है

2. ✘ तर्क 2 मजबूत है

3. ✘ दोनों तर्क मजबूत हैं

4. ✔ कोई भी तर्क मजबूत नहीं है

Question Number : 121 Question Id : 7368155173 Question Type : MCQ Option Shuffling : Yes Display Question Number : Yes
Single Line Question Option : No Option Orientation : Vertical

Correct : 1 Wrong : 0.25

Statement: The subsidy on the LPG cylinders have been reduced by the government

Argument 1: Reducing subsidies will lead to agitation amongst the society

Argument 2: Whatever the government do is for the betterment of the society

Options :

1. ✘ Argument 1 is strong

2. ✔ Argument 2 is strong

3. ✘ Both the Arguments are strong

4. ✘ Neither of the Arguments are strong

Question Number : 121 Question Id : 7368155173 Question Type : MCQ Option Shuffling : Yes Display Question Number : Yes
Single Line Question Option : No Option Orientation : Vertical

Correct : 1 Wrong : 0.25

कथन: रसोई गैस सिलेंडरों पर सब्सिडी, सरकार द्वारा कम कर दी गई है

तर्क 1 : सब्सिडी कम करने से समाज में रोष की भावना पैदा होगी

तर्क 2 : जो भी सरकार कर रही है, समाज की भलाई के लिए है

Options :

1. ✘ तर्क 1 मजबूत है
2. ✔ तर्क 2 मजबूत है
3. ✘ दोनों तर्क मजबूत हैं
4. ✘ कोई भी तर्क मजबूत नहीं है

Question Number : 122 Question Id : 7368155174 Question Type : MCQ Option Shuffling : Yes Display Question Number : Yes
Single Line Question Option : No Option Orientation : Vertical

Correct : 1 Wrong : 0.25

Statement: The CBI solved the 9 years old Panipat Murder case

Argument 1: CBI is very efficient

Argument 2: There was lack of evidences which led the case to a 9 years delay

Options :

1. ✘ Argument 1 is strong
2. ✔ Argument 2 is strong
3. ✘ Both the Arguments are strong
4. ✘ Neither of the Arguments are strong

Question Number : 122 Question Id : 7368155174 Question Type : MCQ Option Shuffling : Yes Display Question Number : Yes
Single Line Question Option : No Option Orientation : Vertical

Correct : 1 Wrong : 0.25

कथन: सी.बी.आई. ने 9 वर्ष पुराना पानीपत हत्या का मामला सुलझा लिया

तर्क 1 : सी.बी.आई. बहुत ही कुशल है

तर्क 2 : सबूतों की कमी के कारण सी.बी.आई. को 9 वर्ष लग गए

Options :

1. ✘ तर्क 1 मजबूत है
2. ✔ तर्क 2 मजबूत है
3. ✘ दोनों तर्क मजबूत हैं
4. ✘ कोई भी तर्क मजबूत नहीं है

Question Number : 123 Question Id : 7368155175 Question Type : MCQ Option Shuffling : Yes Display Question Number : Yes
Single Line Question Option : No Option Orientation : Vertical

Correct : 1 Wrong : 0.25

Statement: There is a mass agitation against the Reservation Policy in the nation

Argument 1: The Reservation Policy in the nation needs to be altered

Argument 2: Nation's people have nothing to work on.

Options :

1. ✓ Argument 1 is strong
2. ✗ Argument 2 is strong
3. ✗ Both the Arguments are strong
4. ✗ Neither of the Arguments are strong

Question Number : 123 Question Id : 7368155175 Question Type : MCQ Option Shuffling : Yes Display Question Number : Yes
Single Line Question Option : No Option Orientation : Vertical

Correct : 1 Wrong : 0.25

कथन : देश में आरक्षण नीति के खिलाफ एक व्यापक आंदोलन चल रहा है

तर्क 1 : देश में आरक्षण नीति पर परिवर्तन की ज़रूरत है

तर्क 2 : देश के लोगों के पास और कुछ काम नहीं है

Options :

1. ✓ तर्क 1 मजबूत है
2. ✗ तर्क 2 मजबूत है
3. ✗ दोनों तर्क मजबूत हैं
4. ✗ कोई भी तर्क मजबूत नहीं है

Question Number : 124 Question Id : 7368155176 Question Type : MCQ Option Shuffling : Yes Display Question Number : Yes
Single Line Question Option : No Option Orientation : Vertical

Correct : 1 Wrong : 0.25

Statement: The automobile company Eicher visited just 3 colleges for campus placements this year

Argument 1: There is a serious downfall in automobile sector

Argument 2: Eicher is not interested in Indian students

Options :

1. ✓ Argument 1 is strong
2. ✗ Argument 2 is strong
3. ✗ Both the Arguments are strong
4. ✗ Neither of the Arguments are strong

Question Number : 124 Question Id : 7368155176 Question Type : MCQ Option Shuffling : Yes Display Question Number : Yes
Single Line Question Option : No Option Orientation : Vertical

Correct : 1 Wrong : 0.25

कथन : ऑटोमोबाइल कंपनी आयशर ने इस साल कैंपस प्लेसमेंट के लिए सिर्फ 3 कॉलेजों में दौरा किया

तर्क 1 : ऑटोमोबाइल क्षेत्र में एक गंभीर गिरावट आई है

तर्क 2: आयशर को रतीय छात्रों में दिलचस्पी नहीं है

Options :

1. ✓ तर्क 1 मजबूत है
2. ✗ तर्क 2 मजबूत है
3. ✗ दोनों तर्क मजबूत हैं
4. ✗ कोई भी तर्क मजबूत नहीं है

Question Number : 125 Question Id : 7368155177 Question Type : MCQ Option Shuffling : Yes Display Question Number : Yes
Single Line Question Option : No Option Orientation : Vertical

Correct : 1 Wrong : 0.25

Rahil's sister Vibhuti is the sister of Mitul and Vatsalya. Mitul who is the son of Varun is the father of Surabhi. Who is Rahil to Surabhi?

Options :

1. ✗ Maternal Uncle
2. ✗ Brother-in-law
3. ✗ Brother
4. ✓ Paternal Uncle

Question Number : 125 Question Id : 7368155177 Question Type : MCQ Option Shuffling : Yes Display Question Number : Yes
Single Line Question Option : No Option Orientation : Vertical

Correct : 1 Wrong : 0.25

राहिल की बहन विभूति, मितुल और वात्सल्य की बहन है। मितुल, जो कि वरुण का बेटा है, सुरभि का पिता है। राहिल सुरभि का कौन है?

Options :

1. ✗ मामा (Maternal Uncle)
2. ✗ बहनोई (Brother-in-law)
3. ✗ भाई (Brother)
4. ✓ चाचा (Paternal Uncle)

Question Number : 126 Question Id : 7368155178 Question Type : MCQ Option Shuffling : Yes Display Question Number : Yes
Single Line Question Option : No Option Orientation : Vertical

Correct : 1 Wrong : 0.25

Rahul is the the brother of Husband of Himanshu's sister. Who is Rahul's father to Himanshu's sister's daughter

Options :

1. ✘ Father-in-law
2. ✔ Grandfather
3. ✘ Maternal Uncle
4. ✘ Father

Question Number : 126 Question Id : 7368155178 Question Type : MCQ Option Shuffling : Yes Display Question Number : Yes
Single Line Question Option : No Option Orientation : Vertical

Correct : 1 Wrong : 0.25

राहुल हिमांशु की बहन के पति का भाई है। हिमांशु की बहन की बेटी से राहुल के पिता का क्या रिश्ता है?

Options :

1. ✘ ससुर (Father-in-law)
2. ✔ दादा (Grandfather)
3. ✘ मामा (Maternal Uncle)
4. ✘ पिता (Father)

Question Number : 127 Question Id : 7368155179 Question Type : MCQ Option Shuffling : Yes Display Question Number : Yes
Single Line Question Option : No Option Orientation : Vertical

Correct : 1 Wrong : 0.25

Rudraksh is the son of the only daughter of Himanshu's brother. Who is Himanshu to Rudraksh's mother?

Options :

1. ✘ Grandfather
2. ✘ Maternal Uncle
3. ✔ Paternal Uncle
4. ✘ Brother

Question Number : 127 Question Id : 7368155179 Question Type : MCQ Option Shuffling : Yes Display Question Number : Yes
Single Line Question Option : No Option Orientation : Vertical

Correct : 1 Wrong : 0.25

रुद्राक्ष हिमांशु के भाई की एकलौती बेटी का बेटा है। रुद्राक्ष की मां से हिमांशु का क्या रिश्ता है?

Options :

1. ✘ दादा (Grandfather)
2. ✘ मामा (Maternal Uncle)
3. ✔ चाचा (Paternal Uncle)
4. ✘ भाई (Brother)

Question Number : 128 Question Id : 7368155180 Question Type : MCQ Option Shuffling : Yes Display Question Number : Yes
Single Line Question Option : No Option Orientation : Vertical

Correct : 1 Wrong : 0.25

The father of Mukesh is the son of Rajeev's only daughter's mother. Who is Mukesh to Rajeev

Options :

1. ✘ Cannot be determined
2. ✔ Grandson
3. ✘ Son
4. ✘ Father

Question Number : 128 Question Id : 7368155180 Question Type : MCQ Option Shuffling : Yes Display Question Number : Yes Single Line Question Option : No Option Orientation : Vertical

Correct : 1 Wrong : 0.25

मुकेश के पिता, राजीव की इकलौती बेटी की मां के बेटे हैं। राजीव से मुकेश का क्या रिश्ता है?

Options :

1. ✘ निर्धारित नहीं किया जा सकता
2. ✔ पोता (Grandson)
3. ✘ बेटा (Son)
4. ✘ पिता (Father)

Question Number : 129 Question Id : 7368155181 Question Type : MCQ Option Shuffling : Yes Display Question Number : Yes Single Line Question Option : No Option Orientation : Vertical

Correct : 1 Wrong : 0.25

Mahesh's wife Tanya is the daughter-in-law of Rekha's father. Rekha's son is the _____ of Mahesh

Options :

1. ✘ Son
2. ✘ Brother-in-law
3. ✘ Brother
4. ✔ Nephew

Question Number : 129 Question Id : 7368155181 Question Type : MCQ Option Shuffling : Yes Display Question Number : Yes Single Line Question Option : No Option Orientation : Vertical

Correct : 1 Wrong : 0.25

महेश की पत्नी तान्या, रेखा के पिता की बहू है। रेखा का बेटा महेश का _____ है।

Options :

1. ✘ बेटा (Son)
2. ✘ बहनोई (Brother-in-law)
3. ✘ भाई (Brother)
4. ✔ भतीजा (Nephew)

Question Number : 130 Question Id : 7368155182 Question Type : MCQ Option Shuffling : Yes Display Question Number : Yes
Single Line Question Option : No Option Orientation : Vertical

Correct : 1 Wrong : 0.25

In the given alternatives, one of the numbers is dissimilar from the other given alternatives.

Find the one which is dissimilar

Options :

1. ✘ 23
2. ✘ 37
3. ✘ 39
4. ✔ 21

Question Number : 130 Question Id : 7368155182 Question Type : MCQ Option Shuffling : Yes Display Question Number : Yes
Single Line Question Option : No Option Orientation : Vertical

Correct : 1 Wrong : 0.25

दिये गए विकल्पों में से कोई एक संख्या अन्य विकल्पों से भिन्न है, उस भिन्न संख्या
ज्ञात करें :

Options :

1. ✘ 23
2. ✘ 37
3. ✘ 39
4. ✔ 21

Question Number : 131 Question Id : 7368155183 Question Type : MCQ Option Shuffling : Yes Display Question Number : Yes
Single Line Question Option : No Option Orientation : Vertical

Correct : 1 Wrong : 0.25

Find the odd one out from the given alternatives

Options :

1. ✘ USB
2. ✔ Motherboard
3. ✘ Pen Drives
4. ✘ Keyboard

Question Number : 131 Question Id : 7368155183 Question Type : MCQ Option Shuffling : Yes Display Question Number : Yes
Single Line Question Option : No Option Orientation : Vertical

Correct : 1 Wrong : 0.25

दिये गए विकल्पों में से भिन्न ज्ञात करें :

Options :

1. ✘ यूएसबी
2. ✔ मदरबोर्ड
3. ✘ पेन ड्राइव
4. ✘ की-बोर्ड

Question Number : 132 Question Id : 7368155184 Question Type : MCQ Option Shuffling : Yes Display Question Number : Yes
Single Line Question Option : No Option Orientation : Vertical

Correct : 1 Wrong : 0.25

Which one of following keywords/phrases differ from the others in the given options

Options :

1. ✘ MNQ
2. ✘ UVY
3. ✘ PQT
4. ✔ DEG

Question Number : 132 Question Id : 7368155184 Question Type : MCQ Option Shuffling : Yes Display Question Number : Yes
Single Line Question Option : No Option Orientation : Vertical

Correct : 1 Wrong : 0.25

निम्नलिखित मुख्य शब्दों/वाक्यांशों में से कौन सा विकल्प दूसरों से भिन्न है?

Options :

1. ✘ MNQ
2. ✘ UVY
3. ✘ PQT
4. ✔ DEG

Question Number : 133 Question Id : 7368155185 Question Type : MCQ Option Shuffling : Yes Display Question Number : Yes
Single Line Question Option : No Option Orientation : Vertical

Correct : 1 Wrong : 0.25

In the given alternatives, one of the numbers is dissimilar from the other given alternatives.
Find the one which is dissimilar

Options :

1. ✘ 121
2. ✔ 144
3. ✘ 154
4. ✘ 165

Question Number : 133 Question Id : 7368155185 Question Type : MCQ Option Shuffling : Yes Display Question Number : Yes
Single Line Question Option : No Option Orientation : Vertical

Correct : 1 Wrong : 0.25

दिये गए विकल्पों में से कोई एक संख्या अन्य विकल्पों से भिन्न है, वह भिन्न संख्या कौन सी है?

Options :

1. ✘ 121
2. ✔ 144
3. ✘ 154
4. ✘ 165

Question Number : 134 Question Id : 7368155186 Question Type : MCQ Option Shuffling : Yes Display Question Number : Yes
Single Line Question Option : No Option Orientation : Vertical

Correct : 1 Wrong : 0.25

Find the odd one out from the given alternatives

Options :

1. ✘ Smriti Irani
2. ✘ Sushma Swaraj
3. ✔ Shivraj Singh Chouhan
4. ✘ Rajnath Singh

Question Number : 134 Question Id : 7368155186 Question Type : MCQ Option Shuffling : Yes Display Question Number : Yes
Single Line Question Option : No Option Orientation : Vertical

Correct : 1 Wrong : 0.25

दिये गए विकल्पों में से भिन्न ज्ञात करें :

Options :

1. ✘ स्मृति ईरानी
2. ✘ शुष्मा स्वराज
3. ✔ शिवराज सिंह चौहान
4. ✘ राजनाथ सिंह

Question Number : 135 Question Id : 7368155187 Question Type : MCQ Option Shuffling : Yes Display Question Number : Yes
Single Line Question Option : No Option Orientation : Vertical

Correct : 1 Wrong : 0.25

Choose the odd one .

Options :

1. ✘ T
2. ✘ B
3. ✔ E
4. ✘ D

Question Number : 135 Question Id : 7368155187 Question Type : MCQ Option Shuffling : Yes Display Question Number : Yes
Single Line Question Option : No Option Orientation : Vertical

Correct : 1 Wrong : 0.25

निम्नलिखित में से भिन्न का चयन करें :

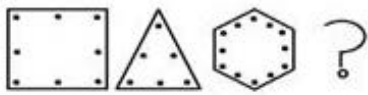
Options :

1. ✘ T
2. ✘ B
3. ✔ E
4. ✘ D

Question Number : 136 Question Id : 7368155188 Question Type : MCQ Option Shuffling : Yes Display Question Number : Yes
Single Line Question Option : No Option Orientation : Vertical

Correct : 1 Wrong : 0.25

What will be the next figure?



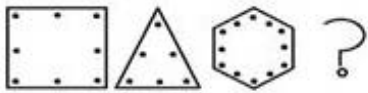
Options :

- 1. ✘
- 2. ✘
- 3. ✘
- 4. ✔

Question Number : 136 Question Id : 7368155188 Question Type : MCQ Option Shuffling : Yes Display Question Number : Yes
Single Line Question Option : No Option Orientation : Vertical

Correct : 1 Wrong : 0.25

अगली आकृति क्या होगी?



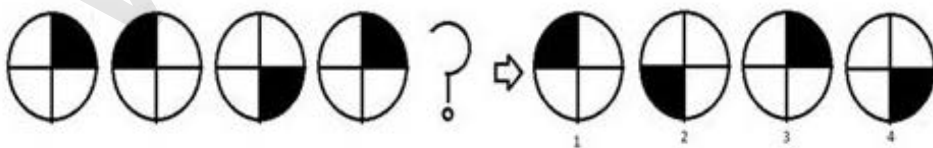
Options :

- 1. ✘
- 2. ✘
- 3. ✘
- 4. ✔

Question Number : 137 Question Id : 7368155189 Question Type : MCQ Option Shuffling : Yes Display Question Number : Yes
Single Line Question Option : No Option Orientation : Vertical

Correct : 1 Wrong : 0.25

Choose the next figure



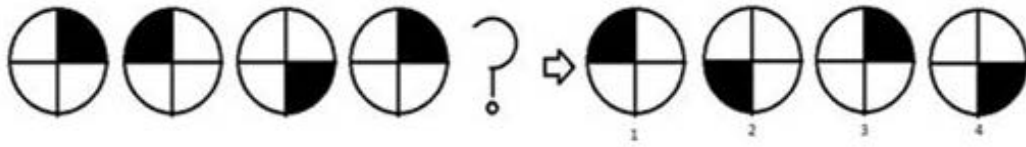
Options :

- 1. ✔ 2
- 2. ✘ 3
- 3. ✘ 1
- 4. ✘ 4

Question Number : 137 Question Id : 7368155189 Question Type : MCQ Option Shuffling : Yes Display Question Number : Yes
Single Line Question Option : No Option Orientation : Vertical

Correct : 1 Wrong : 0.25

अगली आकृति का चयन करे



Options :

1. ✓ 2
2. ✗ 3
3. ✗ 1
4. ✗ 4

Question Number : 138 Question Id : 7368155190 Question Type : MCQ Option Shuffling : Yes Display Question Number : Yes
Single Line Question Option : No Option Orientation : Vertical

Correct : 1 Wrong : 0.25

Choose the next letter of the given series

T N E S ?

Options :

1. ✓ S
2. ✗ T
3. ✗ A
4. ✗ O

Question Number : 138 Question Id : 7368155190 Question Type : MCQ Option Shuffling : Yes Display Question Number : Yes
Single Line Question Option : No Option Orientation : Vertical

Correct : 1 Wrong : 0.25

दी गई श्रंखला का अगला पद ज्ञात कीजिये :

T N E S ?

Options :

1. ✓ S
2. ✗ T
3. ✗ A
4. ✗ O

Question Number : 139 Question Id : 7368155191 Question Type : MCQ Option Shuffling : Yes Display Question Number : Yes
Single Line Question Option : No Option Orientation : Vertical

Correct : 1 Wrong : 0.25

Choose the next letter of the given series

M, T, W, T, F, S, _____

Options :

1. ✘ Q
2. ✔ S
3. ✘ R
4. ✘ B

Question Number : 139 Question Id : 7368155191 Question Type : MCQ Option Shuffling : Yes Display Question Number : Yes
Single Line Question Option : No Option Orientation : Vertical

Correct : 1 Wrong : 0.25

दी गई श्रंखला का अगला पद ज्ञात कीजिये :

M, T, W, T, F, S,

Options :

1. ✘ Q
2. ✔ S
3. ✘ R
4. ✘ B

Question Number : 140 Question Id : 7368155192 Question Type : MCQ Option Shuffling : Yes Display Question Number : Yes
Single Line Question Option : No Option Orientation : Vertical

Correct : 1 Wrong : 0.25

Find the missing term.

6, 35, 31, 60, _____, 85, 81

Options :

1. ✔ 56
2. ✘ 55
3. ✘ 67
4. ✘ 78

Question Number : 140 Question Id : 7368155192 Question Type : MCQ Option Shuffling : Yes Display Question Number : Yes
Single Line Question Option : No Option Orientation : Vertical

Correct : 1 Wrong : 0.25

नहीं दिया गया पद ज्ञात करें :

6, 35, 31, 60,, 85, 81

Options :

1. ✔ 56
2. ✘ 55
3. ✘ 67
4. ✘ 78

Question Number : 141 Question Id : 7368155193 Question Type : MCQ Option Shuffling : Yes Display Question Number : Yes
Single Line Question Option : No Option Orientation : Vertical

Correct : 1 Wrong : 0.25

Find the missing term.

0,5,2,10,4,15,6, _____,8,25

Options :

1. ✘ 13
2. ✘ 11
3. ✔ 20
4. ✘ 21

Question Number : 141 Question Id : 7368155193 Question Type : MCQ Option Shuffling : Yes Display Question Number : Yes
Single Line Question Option : No Option Orientation : Vertical

Correct : 1 Wrong : 0.25

नहीं दिया गया पद ज्ञात करें :

0,5,2,10,4,15,6,.....,8,25

Options :

1. ✘ 13
2. ✘ 11
3. ✔ 20
4. ✘ 21

Question Number : 142 Question Id : 7368155194 Question Type : MCQ Option Shuffling : Yes Display Question Number : Yes
Single Line Question Option : No Option Orientation : Vertical

Correct : 1 Wrong : 0.25

Find the missing term.

0,3,5,28, _____,608403

Options :

1. ✘ 678843
2. ✘ 1124
3. ✘ 56890
4. ✔ 780

Question Number : 142 Question Id : 7368155194 Question Type : MCQ Option Shuffling : Yes Display Question Number : Yes
Single Line Question Option : No Option Orientation : Vertical

Correct : 1 Wrong : 0.25

नहीं दिया गया पद ज्ञात करें :

0,3,5,28,.....,608403

Options :

1. ✘ 678843
2. ✘ 1124
3. ✘ 56890
4. ✔ 780

Question Number : 143 Question Id : 7368155195 Question Type : MCQ Option Shuffling : Yes Display Question Number : Yes
Single Line Question Option : No Option Orientation : Vertical

Correct : 1 Wrong : 0.25

Find the missing term.

530,486,442,402, _____,314

Options :

1. ✘ 400
2. ✔ 358
3. ✘ 341
4. ✘ 350

Question Number : 143 Question Id : 7368155195 Question Type : MCQ Option Shuffling : Yes Display Question Number : Yes
Single Line Question Option : No Option Orientation : Vertical

Correct : 1 Wrong : 0.25

नहीं दिया गया पद ज्ञात करें :

530,486,442,402,.....,314

Options :

1. ✘ 400
2. ✔ 358
3. ✘ 341
4. ✘ 350

Question Number : 144 Question Id : 7368155196 Question Type : MCQ Option Shuffling : Yes Display Question Number : Yes
Single Line Question Option : No Option Orientation : Vertical

Correct : 1 Wrong : 0.25

Five girls are sitting in a row. Seema is right of Rajni and left to Geeta. Aneeta is sitting left to Rajni. Arti is between Rajni and Aneeta. Who is sitting in the middle of the row?

Options :

1. ✘ Geeta
2. ✘ Seema
3. ✔ Rajni
4. ✘ Aneeta

Question Number : 144 Question Id : 7368155196 Question Type : MCQ Option Shuffling : Yes Display Question Number : Yes
Single Line Question Option : No Option Orientation : Vertical

Correct : 1 Wrong : 0.25

पांच लड़कियां एक कतार में बैठी हैं। सीमा रजनी के दायें बैठी है और गीता के बायें बैठी है। अनीता रजनी के बायें बैठी है। आरती, रजनी और अनीता के बीच में बैठी है। कतार के बीच में कौन बैठा है?

Options :

1. ✘ गीता
2. ✘ सीमा

3. ✓ रजनी

4. ✗ अनीता

Question Number : 145 Question Id : 7368155197 Question Type : MCQ Option Shuffling : Yes Display Question Number : Yes
Single Line Question Option : No Option Orientation : Vertical

Correct : 1 Wrong : 0.25

Find the missing term.

2,9,28,65, _____,217

Options :

1. ✗ 121

2. ✗ 163

3. ✗ 200

4. ✓ 126

Question Number : 145 Question Id : 7368155197 Question Type : MCQ Option Shuffling : Yes Display Question Number : Yes
Single Line Question Option : No Option Orientation : Vertical

Correct : 1 Wrong : 0.25

नहीं दिया गया पद ज्ञात करें :

2,9,28,65,.....,217

Options :

1. ✗ 121

2. ✗ 163

3. ✗ 200

4. ✓ 126

Question Number : 146 Question Id : 7368155198 Question Type : MCQ Option Shuffling : Yes Display Question Number : Yes
Single Line Question Option : No Option Orientation : Vertical

Correct : 1 Wrong : 0.25

Find the missing term.

12,60,300,1500, _____

Options :

1. ✓ 7500

2. ✗ 2500

3. ✗ 3500

4. ✗ 6500

Question Number : 146 Question Id : 7368155198 Question Type : MCQ Option Shuffling : Yes Display Question Number : Yes
Single Line Question Option : No Option Orientation : Vertical

Correct : 1 Wrong : 0.25

नहीं दिया गया पद ज्ञात करें :

12,60,300,1500,.....

Options :

1. ✓ 7500

2. ✘ 2500
3. ✘ 3500
4. ✘ 6500

Question Number : 147 Question Id : 7368155199 Question Type : MCQ Option Shuffling : Yes Display Question Number : Yes
Single Line Question Option : No Option Orientation : Vertical

Correct : 1 Wrong : 0.25

Find the missing term.

91,82,73,64, _____,46,37,28,19

Options :

1. ✘ 54
2. ✔ 55
3. ✘ 56
4. ✘ 58

Question Number : 147 Question Id : 7368155199 Question Type : MCQ Option Shuffling : Yes Display Question Number : Yes
Single Line Question Option : No Option Orientation : Vertical

Correct : 1 Wrong : 0.25

नहीं दिया गया पद ज्ञात करें :

91,82,73,64,.....,46,37,28,19

Options :

1. ✘ 54
2. ✔ 55
3. ✘ 56
4. ✘ 58

Question Number : 148 Question Id : 7368155200 Question Type : MCQ Option Shuffling : Yes Display Question Number : Yes
Single Line Question Option : No Option Orientation : Vertical

Correct : 1 Wrong : 0.25

If quotient is 1236, divisor is 6654 and remainder is 11, then what will be the dividend?

Options :

1. ✘ 2345663
2. ✘ 5643387
3. ✔ 8224355
4. ✘ 8875462

Question Number : 148 Question Id : 7368155200 Question Type : MCQ Option Shuffling : Yes Display Question Number : Yes
Single Line Question Option : No Option Orientation : Vertical

Correct : 1 Wrong : 0.25

अगर भागफल 1236 है, भाजक 6654 है और शेष 11, तो भाज्य क्या होगा?

Options :

1. ✘ 2345663
2. ✘ 5643387

3. ✓ 8224355

4. ✗ 8875462

Question Number : 149 Question Id : 7368155201 Question Type : MCQ Option Shuffling : Yes Display Question Number : Yes
Single Line Question Option : No Option Orientation : Vertical

Correct : 1 Wrong : 0.25

Compute the following

$$6678 \times 32 - 56 + 778 / 34 - 674$$

Options :

1. ✓ 212988.8824

2. ✗ 675433.9

3. ✗ 789654

4. ✗ 6536.1123

Question Number : 149 Question Id : 7368155201 Question Type : MCQ Option Shuffling : Yes Display Question Number : Yes
Single Line Question Option : No Option Orientation : Vertical

Correct : 1 Wrong : 0.25

निम्नलिखित की गणना करें :

$$6678 \times 32 - 56 + 778 / 34 - 674$$

Options :

1. ✓ 212988.8824

2. ✗ 675433.9

3. ✗ 789654

4. ✗ 6536.1123

Question Number : 150 Question Id : 7368155202 Question Type : MCQ Option Shuffling : Yes Display Question Number : Yes
Single Line Question Option : No Option Orientation : Vertical

Correct : 1 Wrong : 0.25

Compute the following

$$(1009)^2 + (98)^2$$

Options :

1. ✗ 667095

2. ✗ 786543

3. ✓ 1027685

4. ✗ 9986534

Question Number : 150 Question Id : 7368155202 Question Type : MCQ Option Shuffling : Yes Display Question Number : Yes
Single Line Question Option : No Option Orientation : Vertical

Correct : 1 Wrong : 0.25

निम्नलिखित की गणना करें :

$$(1009)^2 + (98)^2$$

Options :

1. ✗ 667095

2. ✘ 786543
3. ✔ 1027685
4. ✘ 9986534

General Awareness

Section Id :	736815102
Section Number :	4
Section type :	Online
Mandatory or Optional:	Mandatory
Number of Questions:	50
Number of Questions to be attempted:	50
Section Marks:	50
Display Number Panel:	Yes
Group All Questions:	No

Sub-Section Number:	1
Sub-Section Id:	736815154
Question Shuffling Allowed :	Yes

Question Number : 151 Question Id : 7368155203 Question Type : MCQ Option Shuffling : Yes Display Question Number : Yes
Single Line Question Option : No Option Orientation : Vertical

Correct : 1 Wrong : 0.25

'Dandi March' in India is related to one of the following.

Options :

1. ✔ Civil Disobedience Movement
2. ✘ Quit India Movement
3. ✘ Bhoodhan Movement
4. ✘ Non-Cooperation Movement

Question Number : 151 Question Id : 7368155203 Question Type : MCQ Option Shuffling : Yes Display Question Number : Yes
Single Line Question Option : No Option Orientation : Vertical

Correct : 1 Wrong : 0.25

भारत में निम्नलिखित में से किस आन्दोलन का आरम्भ 'दांडी यात्रा' से हुआ था?

Options :

1. ✔ सविनय अवज्ञा आन्दोलन
2. ✘ भारत छोड़ो आन्दोलन
3. ✘ भूदान आन्दोलन
4. ✘ असहयोग आन्दोलन

Question Number : 152 Question Id : 7368155204 Question Type : MCQ Option Shuffling : Yes Display Question Number : Yes
Single Line Question Option : No Option Orientation : Vertical

Correct : 1 Wrong : 0.25

Who suggested the idea of 'Preamble' for Indian Constitution?

Options :

1. ✘ Sardar Patel
2. ✘ M.N.Roy
3. ✔ Jawaharlal Nehru
4. ✘ Mahatma Gandhi

Question Number : 152 Question Id : 7368155204 Question Type : MCQ Option Shuffling : Yes Display Question Number : Yes
Single Line Question Option : No Option Orientation : Vertical

Correct : 1 Wrong : 0.25

भारतीय संविधान की 'प्रस्तावना' के लिए विचार किसने दिया था?

Options :

1. ✘ सरदार पटेल
2. ✘ एम. एन. रॉय
3. ✔ जवाहर लाल नेहरू
4. ✘ महात्मा गांधी

Question Number : 153 Question Id : 7368155205 Question Type : MCQ Option Shuffling : Yes Display Question Number : Yes
Single Line Question Option : No Option Orientation : Vertical

Correct : 1 Wrong : 0.25

Who was the first speaker of Lok Sabha?

Options :

1. ✘ M.A. Ayyangar
2. ✘ Sardar Hukum Singh
3. ✘ Neelam Sanjeeva Reddy
4. ✔ G.V.Mavalankar

Question Number : 153 Question Id : 7368155205 Question Type : MCQ Option Shuffling : Yes Display Question Number : Yes
Single Line Question Option : No Option Orientation : Vertical

Correct : 1 Wrong : 0.25

लोकसभा के प्रथम अध्यक्ष कौन थे?

Options :

1. ✘ एम.ए. अय्यंगार
2. ✘ सरदार हुकुम सिंह
3. ✘ नीलम संजीवा रेड्डी
4. ✔ जी.वि. मावलंकर

Question Number : 154 Question Id : 7368155206 Question Type : MCQ Option Shuffling : Yes Display Question Number : Yes
Single Line Question Option : No Option Orientation : Vertical

Correct : 1 Wrong : 0.25

Who is considered as father of Indian Constitution?

Options :

1. ✘ Jawaharlal Nehru
2. ✘ Mahatma Gandhi
3. ✔ B.R.Ambedkar
4. ✘ M.N.Roy

Question Number : 154 Question Id : 7368155206 Question Type : MCQ Option Shuffling : Yes Display Question Number : Yes
Single Line Question Option : No Option Orientation : Vertical

Correct : 1 Wrong : 0.25

भारतीय संविधान का पिता किसे माना जाता है?

Options :

1. ✘ जवाहर लाल नेहरू
2. ✘ महात्मा गांधी
3. ✔ बी. आर. अम्बेडकर
4. ✘ एम. एन. राय

Question Number : 155 Question Id : 7368155207 Question Type : MCQ Option Shuffling : Yes Display Question Number : Yes
Single Line Question Option : No Option Orientation : Vertical

Correct : 1 Wrong : 0.25

Who was the first woman member of Rajya Sabha?

Options :

1. ✘ Jaya Badhuri
2. ✔ Nargis Dutt
3. ✘ Hema Malini
4. ✘ Madhubala

Question Number : 155 Question Id : 7368155207 Question Type : MCQ Option Shuffling : Yes Display Question Number : Yes
Single Line Question Option : No Option Orientation : Vertical

Correct : 1 Wrong : 0.25

राज्यसभा की प्रथम महिला सदस्य कौन थीं?

Options :

1. ✘ जया भादुड़ी
2. ✔ नरगिस दत्त
3. ✘ हेमा मालिनी
4. ✘ मधुबाला

Question Number : 156 Question Id : 7368155208 Question Type : MCQ Option Shuffling : Yes Display Question Number : Yes
Single Line Question Option : No Option Orientation : Vertical

Correct : 1 Wrong : 0.25

The actor with most nominations for Film fare award in the category of best actor is?

Options :

1. ✓ Amitabh Bachchan
2. ✗ Salman Khan
3. ✗ Dilip Kumar
4. ✗ Sanjay Dutt

Question Number : 156 Question Id : 7368155208 Question Type : MCQ Option Shuffling : Yes Display Question Number : Yes Single Line Question Option : No Option Orientation : Vertical

Correct : 1 Wrong : 0.25

फिल्मफेयर पुरस्कार में सर्वश्रेष्ठ अभिनेता की श्रेणी में सबसे अधिक नामांकन किस अभिनेता का रहा है?

Options :

1. ✓ अमिताभ बच्चन
2. ✗ सलमान खान
3. ✗ दिलीप कुमार
4. ✗ संजय दत्त

Question Number : 157 Question Id : 7368155209 Question Type : MCQ Option Shuffling : Yes Display Question Number : Yes Single Line Question Option : No Option Orientation : Vertical

Correct : 1 Wrong : 0.25

Who is the first Indian to win OSCAR award?

Options :

1. ✗ Satyajit Ray
2. ✓ Bhanu Athaiya
3. ✗ A.R.Rehman
4. ✗ Naseeruddin Shah

Question Number : 157 Question Id : 7368155209 Question Type : MCQ Option Shuffling : Yes Display Question Number : Yes Single Line Question Option : No Option Orientation : Vertical

Correct : 1 Wrong : 0.25

ऑस्कर पुरस्कार जीतने वाला प्रथम भारतीय कौन है?

Options :

1. ✗ सत्यजीत रे
2. ✓ भानू अथैया
3. ✗ ए. आर. रहमान
4. ✗ नसीरुद्दीन शाह

Question Number : 158 Question Id : 7368155210 Question Type : MCQ Option Shuffling : Yes Display Question Number : Yes Single Line Question Option : No Option Orientation : Vertical

Correct : 1 Wrong : 0.25

Which of the following awards is given for best feature film on National Integration?

Options :

1. ✓ Nargis Dutt Award
2. ✗ Grammy Award
3. ✗ Dhronacharya Award
4. ✗ Ashoka Chakra Award

Question Number : 158 Question Id : 7368155210 Question Type : MCQ Option Shuffling : Yes Display Question Number : Yes Single Line Question Option : No Option Orientation : Vertical

Correct : 1 Wrong : 0.25

निम्नलिखित में से कौन सा पुरस्कार, राष्ट्रीय एकीकरण संबंधी सर्वश्रेष्ठ फीचर फिल्म के लिए दिया जाता है?

Options :

1. ✓ नरगिस दत्त पुरस्कार
2. ✗ ग्रैमी पुरस्कार
3. ✗ द्रोणाचार्य पुरस्कार
4. ✗ अशोक चक्र पुरस्कार

Question Number : 159 Question Id : 7368155211 Question Type : MCQ Option Shuffling : Yes Display Question Number : Yes Single Line Question Option : No Option Orientation : Vertical

Correct : 1 Wrong : 0.25

Who is the first sports personality to receive Bharat Ratna Award?

Options :

1. ✗ Sir Donald Bradman
2. ✗ Dhyan Chand
3. ✗ Milka Singh
4. ✓ Sachin Tendulkar

Question Number : 159 Question Id : 7368155211 Question Type : MCQ Option Shuffling : Yes Display Question Number : Yes Single Line Question Option : No Option Orientation : Vertical

Correct : 1 Wrong : 0.25

भारत रत्न प्राप्त करने वाले प्रथम खिलाड़ी कौन हैं?

Options :

1. ✗ सर डोनाल्ड ब्रैडमैन
2. ✗ ध्यानचंद
3. ✗ मिलखा सिंह
4. ✓ सचिन तेन्दुलकर

Question Number : 160 Question Id : 7368155212 Question Type : MCQ Option Shuffling : Yes Display Question Number : Yes
Single Line Question Option : No Option Orientation : Vertical

Correct : 1 Wrong : 0.25

Who is the first Indian woman to win the crown of 'MISS WORLD'?

Options :

1. ✘ Aishwarya Rai
2. ✔ Reita Faria
3. ✘ Sushmita Sen
4. ✘ Diana Hayden

Question Number : 160 Question Id : 7368155212 Question Type : MCQ Option Shuffling : Yes Display Question Number : Yes
Single Line Question Option : No Option Orientation : Vertical

Correct : 1 Wrong : 0.25

'मिस वर्ल्ड' का ताज जीतने वाली प्रथम भारतीय महिला कौन है?

Options :

1. ✘ ऐश्वर्या राय
2. ✔ रीटा फारिया
3. ✘ सुष्मिता सेन
4. ✘ डायना हेडेन

Question Number : 161 Question Id : 7368155213 Question Type : MCQ Option Shuffling : Yes Display Question Number : Yes
Single Line Question Option : No Option Orientation : Vertical

Correct : 1 Wrong : 0.25

Who is the author of the book 'The Road Ahead'?

Options :

1. ✘ Rajest Pilot
2. ✘ A.P.J. Abdul Kalam
3. ✘ Robin Sharma
4. ✔ Bill Gates

Question Number : 161 Question Id : 7368155213 Question Type : MCQ Option Shuffling : Yes Display Question Number : Yes
Single Line Question Option : No Option Orientation : Vertical

Correct : 1 Wrong : 0.25

'दि रोड अहेड' पुस्तक के लेखक कौन हैं?

Options :

1. ✘ राजेश पायलेट
2. ✘ ए.पी.जे. अब्दुल कलाम
3. ✘ रॉबिन शर्मा
4. ✔ बिल गेट्स

Question Number : 162 Question Id : 7368155214 Question Type : MCQ Option Shuffling : Yes Display Question Number : Yes
Single Line Question Option : No Option Orientation : Vertical

Correct : 1 Wrong : 0.25

Who is the author of the book 'Panchatantra'?

Options :

1. ✓ Vishnu Sharma
2. ✗ Tulsidas
3. ✗ Sur das
4. ✗ Meera Bhai

Question Number : 162 Question Id : 7368155214 Question Type : MCQ Option Shuffling : Yes Display Question Number : Yes
Single Line Question Option : No Option Orientation : Vertical

Correct : 1 Wrong : 0.25

'पंचतंत्र' पुस्तक के लेखक कौन हैं?

Options :

1. ✓ विष्णु शर्मा
2. ✗ तुलसीदास
3. ✗ सूरदास
4. ✗ मीरा बाई

Question Number : 163 Question Id : 7368155215 Question Type : MCQ Option Shuffling : Yes Display Question Number : Yes
Single Line Question Option : No Option Orientation : Vertical

Correct : 1 Wrong : 0.25

The famous book 'A Suitable Boy' is written by

Options :

1. ✗ Govindhan Kutty
2. ✗ Khushwanth Singh
3. ✗ R.K.Narayan
4. ✓ Vikram Seth

Question Number : 163 Question Id : 7368155215 Question Type : MCQ Option Shuffling : Yes Display Question Number : Yes
Single Line Question Option : No Option Orientation : Vertical

Correct : 1 Wrong : 0.25

'ए सूटेबल बाँय' नामक प्रसिद्ध पुस्तक के लेखक कौन हैं?

Options :

1. ✗ गोविन्दन कुट्टी
2. ✗ खुशवंत सिंह
3. ✗ आर. के. नारायण

4. ✓ विक्रम सेठ

Question Number : 164 Question Id : 7368155216 Question Type : MCQ Option Shuffling : Yes Display Question Number : Yes
Single Line Question Option : No Option Orientation : Vertical

Correct : 1 Wrong : 0.25

The famous book 'Malgudi Days' was written by

Options :

1. ✓ R.K.Narayan
2. ✗ Vikram Seth
3. ✗ Kushwanth Singh
4. ✗ Mahadevi Varma

Question Number : 164 Question Id : 7368155216 Question Type : MCQ Option Shuffling : Yes Display Question Number : Yes
Single Line Question Option : No Option Orientation : Vertical

Correct : 1 Wrong : 0.25

प्रसिद्ध पुस्तक 'मालगुडी डेज' के लेखक कौन हैं?

Options :

1. ✓ आर. के. नारायण
2. ✗ विक्रम सेठ
3. ✗ खुशवंत सिंह
4. ✗ महादेवी वर्मा

Question Number : 165 Question Id : 7368155217 Question Type : MCQ Option Shuffling : Yes Display Question Number : Yes
Single Line Question Option : No Option Orientation : Vertical

Correct : 1 Wrong : 0.25

Which India poetess is regarded as 'Modern Meera'?

Options :

1. ✗ Sarojini Naidu
2. ✓ Mahadevi Varma
3. ✗ Vijayalaxmi Pandit
4. ✗ Shanta Bai

Question Number : 165 Question Id : 7368155217 Question Type : MCQ Option Shuffling : Yes Display Question Number : Yes
Single Line Question Option : No Option Orientation : Vertical

Correct : 1 Wrong : 0.25

किस भारतीय कवयित्री को 'आधुनिक मीरा' माना जाता है?

Options :

1. ✗ सरोजिनी नायडू
2. ✓ महादेवी वर्मा
3. ✗ विजयलक्ष्मी पंडित

4. ✖ शांता बाई

Question Number : 166 Question Id : 7368155218 Question Type : MCQ Option Shuffling : Yes Display Question Number : Yes
Single Line Question Option : No Option Orientation : Vertical

Correct : 1 Wrong : 0.25

The traditional 'Bharatanatyam' dance is originated from?

Options :

1. ✔ Tamil Nadu
2. ✖ Kerala
3. ✖ Andhra Pradesh
4. ✖ Karnataka

Question Number : 166 Question Id : 7368155218 Question Type : MCQ Option Shuffling : Yes Display Question Number : Yes
Single Line Question Option : No Option Orientation : Vertical

Correct : 1 Wrong : 0.25

पारम्परिक 'भरतनाट्यम' नृत्य का उद्गम कहाँ से हुआ है?

Options :

1. ✔ तमिलनाडु
2. ✖ केरल
3. ✖ आंध्र प्रदेश
4. ✖ कर्नाटक

Question Number : 167 Question Id : 7368155219 Question Type : MCQ Option Shuffling : Yes Display Question Number : Yes
Single Line Question Option : No Option Orientation : Vertical

Correct : 1 Wrong : 0.25

Which one of the traditional Indian dance is originated from Gujarat?

Options :

1. ✖ Kathak
2. ✔ Garba
3. ✖ Bardo Chham
4. ✖ Bihu

Question Number : 167 Question Id : 7368155219 Question Type : MCQ Option Shuffling : Yes Display Question Number : Yes
Single Line Question Option : No Option Orientation : Vertical

Correct : 1 Wrong : 0.25

निम्नलिखित में से किस पारम्परिक भारतीय नृत्य का उद्गम गुजरात में हुआ है?

Options :

1. ✖ कथक
2. ✔ गरबा
3. ✖ बरडो छाम

4. ✘ बिहू

Question Number : 168 Question Id : 7368155220 Question Type : MCQ Option Shuffling : Yes Display Question Number : Yes
Single Line Question Option : No Option Orientation : Vertical

Correct : 1 Wrong : 0.25

On the bank of which of the following river the Karachi city is situated?

Options :

1. ✓ Indus
2. ✘ Ganga
3. ✘ Chenab
4. ✘ Tagris

Question Number : 168 Question Id : 7368155220 Question Type : MCQ Option Shuffling : Yes Display Question Number : Yes
Single Line Question Option : No Option Orientation : Vertical

Correct : 1 Wrong : 0.25

निम्नलिखित में से किस नदी के तट पर कराची शहर स्थित है?

Options :

1. ✓ सिंधु
2. ✘ गंगा
3. ✘ चेनाब
4. ✘ टगरिस

Question Number : 169 Question Id : 7368155221 Question Type : MCQ Option Shuffling : Yes Display Question Number : Yes
Single Line Question Option : No Option Orientation : Vertical

Correct : 1 Wrong : 0.25

Tamil is the major language for the _____ Country.

Options :

1. ✘ Samoa
2. ✘ Thailand
3. ✓ Singapore
4. ✘ Cyprus

Question Number : 169 Question Id : 7368155221 Question Type : MCQ Option Shuffling : Yes Display Question Number : Yes
Single Line Question Option : No Option Orientation : Vertical

Correct : 1 Wrong : 0.25

निम्नलिखित में से किस देश में तमिल प्रमुख भाषा है?

Options :

1. ✘ समोआ
2. ✘ थाईलैंड
3. ✓ सिंगापुर

4. ✖ साइप्रस

Question Number : 170 Question Id : 7368155222 Question Type : MCQ Option Shuffling : Yes Display Question Number : Yes
Single Line Question Option : No Option Orientation : Vertical

Correct : 1 Wrong : 0.25

Who designed the 'Rock Garden' in Chandigarh?

Options :

1. ✔ Nek Chand
2. ✖ Prem Chand
3. ✖ Ravi Verma
4. ✖ George Thomas

Question Number : 170 Question Id : 7368155222 Question Type : MCQ Option Shuffling : Yes Display Question Number : Yes
Single Line Question Option : No Option Orientation : Vertical

Correct : 1 Wrong : 0.25

चंडीगढ़ का 'रॉक गार्डन' किसने डिजाइन किया था?

Options :

1. ✔ नेक चंद
2. ✖ प्रेम चंद
3. ✖ रवि वर्मा
4. ✖ जॉर्ज थॉमस

Question Number : 171 Question Id : 7368155223 Question Type : MCQ Option Shuffling : Yes Display Question Number : Yes
Single Line Question Option : No Option Orientation : Vertical

Correct : 1 Wrong : 0.25

The famous tourist spot 'Rohtang Pass' is located in?

Options :

1. ✖ Surat
2. ✖ Jodhpur
3. ✔ Manali
4. ✖ New Delhi

Question Number : 171 Question Id : 7368155223 Question Type : MCQ Option Shuffling : Yes Display Question Number : Yes
Single Line Question Option : No Option Orientation : Vertical

Correct : 1 Wrong : 0.25

'रोहतांग पास' नामक प्रसिद्ध पर्यटक स्थल कहाँ पर स्थित है?

Options :

1. ✖ सूरत
2. ✖ जोधपुर
3. ✔ मनाली

4. ✖ नई दिल्ली

Question Number : 172 Question Id : 7368155224 Question Type : MCQ Option Shuffling : Yes Display Question Number : Yes
Single Line Question Option : No Option Orientation : Vertical

Correct : 1 Wrong : 0.25

Which one of the following fruit is known as 'Pride Fruit of India'?

Options :

1. ✔ Mango
2. ✖ Water Melon
3. ✖ Apple
4. ✖ Strawberry

Question Number : 172 Question Id : 7368155224 Question Type : MCQ Option Shuffling : Yes Display Question Number : Yes
Single Line Question Option : No Option Orientation : Vertical

Correct : 1 Wrong : 0.25

निम्नलिखित में से कौन सा फल 'भारत का गौरव' कहलाता है?

Options :

1. ✔ आम
2. ✖ तरबूज
3. ✖ सेब
4. ✖ स्ट्रॉबेरी

Question Number : 173 Question Id : 7368155225 Question Type : MCQ Option Shuffling : Yes Display Question Number : Yes
Single Line Question Option : No Option Orientation : Vertical

Correct : 1 Wrong : 0.25

Which one of the following is the world's biggest democracy?

Options :

1. ✖ Russia
2. ✖ Japan
3. ✖ China
4. ✔ India

Question Number : 173 Question Id : 7368155225 Question Type : MCQ Option Shuffling : Yes Display Question Number : Yes
Single Line Question Option : No Option Orientation : Vertical

Correct : 1 Wrong : 0.25

निम्नलिखित में कौन सा देश विश्व का सबसे बड़ा लोकतांत्रिक देश है?

Options :

1. ✖ रूस
2. ✖ जापान
3. ✖ चीन
4. ✔ भारत

Question Number : 174 Question Id : 7368155226 Question Type : MCQ Option Shuffling : Yes Display Question Number : Yes
Single Line Question Option : No Option Orientation : Vertical

Correct : 1 Wrong : 0.25

Which one of the following is the oldest political party in India?

Options :

1. ✘ Communist Party of India (Marxist)
2. ✘ Bahujan Samaj Party
3. ✘ Bharatiya Janata Party
4. ✔ Indian National Congress

Question Number : 174 Question Id : 7368155226 Question Type : MCQ Option Shuffling : Yes Display Question Number : Yes
Single Line Question Option : No Option Orientation : Vertical

Correct : 1 Wrong : 0.25

निम्नलिखित में से कौन सा दल भारत का सबसे पुराना राजनीतिक दल है?

Options :

1. ✘ भारतीय कम्युनिस्ट पार्टी (मार्क्सवादी)
2. ✘ बहुजन समाज पार्टी
3. ✘ भारतीय जनता पार्टी
4. ✔ भारतीय राष्ट्रीय कांग्रेस

Question Number : 175 Question Id : 7368155227 Question Type : MCQ Option Shuffling : Yes Display Question Number : Yes
Single Line Question Option : No Option Orientation : Vertical

Correct : 1 Wrong : 0.25

The present ruling political party in New Delhi is

Options :

1. ✘ Bharatiya Janata Party
2. ✔ Aam Aadmi Party
3. ✘ Indian National Congress
4. ✘ Bahujan Samaj Party

Question Number : 175 Question Id : 7368155227 Question Type : MCQ Option Shuffling : Yes Display Question Number : Yes
Single Line Question Option : No Option Orientation : Vertical

Correct : 1 Wrong : 0.25

नई दिल्ली में सत्ताधारी वर्तमान राजनीतिक दल कौन सा है?

Options :

1. ✘ भारतीय जनता पार्टी
2. ✔ आम आदमी पार्टी
3. ✘ भारतीय राष्ट्रीय कांग्रेस

4. ✖ बहुजन समाज पार्टी

Question Number : 176 Question Id : 7368155228 Question Type : MCQ Option Shuffling : Yes Display Question Number : Yes
Single Line Question Option : No Option Orientation : Vertical

Correct : 1 Wrong : 0.25

Which one of the following is not involved in preparation of Indian National Budget?

Options :

1. ✖ Finance Ministry
2. ✖ Comptroller and Auditor General
3. ✔ Finance Commission
4. ✖ Planning Commission

Question Number : 176 Question Id : 7368155228 Question Type : MCQ Option Shuffling : Yes Display Question Number : Yes
Single Line Question Option : No Option Orientation : Vertical

Correct : 1 Wrong : 0.25

निम्नलिखित में से कौन, भारतीय राष्ट्रीय बजट को तैयार किए जाने में शामिल नहीं होता?

Options :

1. ✖ वित्त मंत्रालय
2. ✖ नियंत्रक एवं महालेखा परीक्षक
3. ✔ वित्त आयोग
4. ✖ योजना आयोग

Question Number : 177 Question Id : 7368155229 Question Type : MCQ Option Shuffling : Yes Display Question Number : Yes
Single Line Question Option : No Option Orientation : Vertical

Correct : 1 Wrong : 0.25

When was the first Economic Census conducted in India?

Options :

1. ✖ 1967
2. ✔ 1977
3. ✖ 1957
4. ✖ 1990

Question Number : 177 Question Id : 7368155229 Question Type : MCQ Option Shuffling : Yes Display Question Number : Yes
Single Line Question Option : No Option Orientation : Vertical

Correct : 1 Wrong : 0.25

भारत में प्रथम आर्थिक जनगणना कब की गई थी?

Options :

1. ✖ 1967
2. ✔ 1977
3. ✖ 1957

4. ✘ 1990

Question Number : 178 Question Id : 7368155230 Question Type : MCQ Option Shuffling : Yes Display Question Number : Yes
Single Line Question Option : No Option Orientation : Vertical

Correct : 1 Wrong : 0.25

On recommendations of which committee NABARD (National Bank of Agriculture and Rural Development) was set up?

Options :

1. ✔ Shivaraman committee
2. ✘ Narasimhan committee
3. ✘ Pranab committee
4. ✘ Bimal Jalan committee

Question Number : 178 Question Id : 7368155230 Question Type : MCQ Option Shuffling : Yes Display Question Number : Yes
Single Line Question Option : No Option Orientation : Vertical

Correct : 1 Wrong : 0.25

किस समिति की सुझाव पर नाबाई (राष्ट्रीय कृषि एवं ग्रामीण विकास बैंक) को स्थापित किया गया?

Options :

1. ✔ शिवरमण समिति
2. ✘ नरसिम्हन समिति
3. ✘ प्रणब समिति
4. ✘ बिमल जालान समिति

Question Number : 179 Question Id : 7368155231 Question Type : MCQ Option Shuffling : Yes Display Question Number : Yes
Single Line Question Option : No Option Orientation : Vertical

Correct : 1 Wrong : 0.25

The old name of Oriental Bank of Commerce is

Options :

1. ✘ Sigmund Bank
2. ✘ Oudh Bank
3. ✘ National Trust Bank
4. ✔ Global Trust Bank

Question Number : 179 Question Id : 7368155231 Question Type : MCQ Option Shuffling : Yes Display Question Number : Yes
Single Line Question Option : No Option Orientation : Vertical

Correct : 1 Wrong : 0.25

ओरिएंटल बैंक ऑफ कॉमर्स का पुराना नाम क्या है?

Options :

1. ✘ सिगमंड बैंक
2. ✘ अवध बैंक

3. ✘ नैशनल ट्रस्ट बैंक

4. ✔ ग्लोबल ट्रस्ट बैंक

Question Number : 180 Question Id : 7368155232 Question Type : MCQ Option Shuffling : Yes Display Question Number : Yes
Single Line Question Option : No Option Orientation : Vertical

Correct : 1 Wrong : 0.25

'Plastic Money' refers to?

Options :

1. ✘ Fixed Deposits

2. ✘ Traveler Cheque

3. ✘ Demand Drafts

4. ✔ Credit cards

Question Number : 180 Question Id : 7368155232 Question Type : MCQ Option Shuffling : Yes Display Question Number : Yes
Single Line Question Option : No Option Orientation : Vertical

Correct : 1 Wrong : 0.25

'प्लास्टिक मनी' किसे कहते हैं?

Options :

1. ✘ सावधि जमा

2. ✘ यात्री चेक

3. ✘ मांग ड्राफ्ट

4. ✔ क्रेडिट कार्ड

Question Number : 181 Question Id : 7368155233 Question Type : MCQ Option Shuffling : Yes Display Question Number : Yes
Single Line Question Option : No Option Orientation : Vertical

Correct : 1 Wrong : 0.25

Vijay Anritraj is associated with which one of the following games?

Options :

1. ✔ Lawn tennis

2. ✘ Cricket

3. ✘ Hockey

4. ✘ Golf

Question Number : 181 Question Id : 7368155233 Question Type : MCQ Option Shuffling : Yes Display Question Number : Yes
Single Line Question Option : No Option Orientation : Vertical

Correct : 1 Wrong : 0.25

विजय अमृतराज का संबंध निम्नलिखित में से किस खेल से है?

Options :

1. ✔ लॉन टेनिस

2. ✘ क्रिकेट

3. ✘ हॉकी

4. ✘ गोल्फ

Question Number : 182 Question Id : 7368155234 Question Type : MCQ Option Shuffling : Yes Display Question Number : Yes
Single Line Question Option : No Option Orientation : Vertical

Correct : 1 Wrong : 0.25

The place where Mahatma Gandhi started his first 'Satyagraha' was?

Options :

1. ✘ New Delhi

2. ✘ Gandhinagar

3. ✔ Champaran

4. ✘ Nasik

Question Number : 182 Question Id : 7368155234 Question Type : MCQ Option Shuffling : Yes Display Question Number : Yes
Single Line Question Option : No Option Orientation : Vertical

Correct : 1 Wrong : 0.25

महात्मा गांधी ने अपने पहले 'सत्याग्रह' का आरम्भ किस स्थान से किया था?

Options :

1. ✘ नई दिल्ली

2. ✘ गांधीनगर

3. ✔ चम्पारण

4. ✘ नासिक

Question Number : 183 Question Id : 7368155235 Question Type : MCQ Option Shuffling : Yes Display Question Number : Yes
Single Line Question Option : No Option Orientation : Vertical

Correct : 1 Wrong : 0.25

Which one of the following countries has never won cricket World Cup?

Options :

1. ✘ Pakistan

2. ✘ Sri Lanka

3. ✘ West Indies

4. ✔ England

Question Number : 183 Question Id : 7368155235 Question Type : MCQ Option Shuffling : Yes Display Question Number : Yes
Single Line Question Option : No Option Orientation : Vertical

Correct : 1 Wrong : 0.25

निम्नलिखित में से किस देश ने क्रिकेट विश्व कप कभी नहीं जीता है?

Options :

1. ✘ पाकिस्तान

2. ✘ श्रीलंका

3. ✘ वेस्ट इंडीज

4. ✔ इंग्लैंड

Question Number : 184 Question Id : 7368155236 Question Type : MCQ Option Shuffling : Yes Display Question Number : Yes
Single Line Question Option : No Option Orientation : Vertical

Correct : 1 Wrong : 0.25

Who was the first Indian woman to climb the Mount Everest?

Options :

1. ✘ Amrita Pathak

2. ✘ Junko Tabei

3. ✔ Bachendri Pal

4. ✘ Malleshwari

Question Number : 184 Question Id : 7368155236 Question Type : MCQ Option Shuffling : Yes Display Question Number : Yes
Single Line Question Option : No Option Orientation : Vertical

Correct : 1 Wrong : 0.25

माउंट एवरेस्ट पर चढ़ने वाली प्रथम भारतीय महिला कौन थी?

Options :

1. ✘ अमृता पाठक

2. ✘ जुंको तबेई

3. ✔ बचेंद्री पाल

4. ✘ मल्लेश्वरी

Question Number : 185 Question Id : 7368155237 Question Type : MCQ Option Shuffling : Yes Display Question Number : Yes
Single Line Question Option : No Option Orientation : Vertical

Correct : 1 Wrong : 0.25

'Gyan Vigyan Vimuktaye' is the motto of?

Options :

1. ✘ National Council of Education Research And Training

2. ✔ University Grants Commission

3. ✘ All India Council for Technical Education

4. ✘ Banaras Hindu university

Question Number : 185 Question Id : 7368155237 Question Type : MCQ Option Shuffling : Yes Display Question Number : Yes
Single Line Question Option : No Option Orientation : Vertical

Correct : 1 Wrong : 0.25

'ज्ञान विज्ञान विमुक्ताये' - किसका आदर्श वाक्य है?

Options :

1. ✘ राष्ट्रीय शिक्षा शोध एवं प्रशिक्षण परिषद

2. ✔ विश्वविद्यालय अनुदान आयोग

3. ✘ अखिल भारतीय तकनीकी शिक्षा परिषद

4. ✘ बनारस हिंदू विश्वविद्यालय

Question Number : 186 Question Id : 7368155238 Question Type : MCQ Option Shuffling : Yes Display Question Number : Yes
Single Line Question Option : No Option Orientation : Vertical

Correct : 1 Wrong : 0.25

_____ finally approved the Five year plans.

Options :

1. ✘ Planning Commission

2. ✘ Finance ministry

3. ✔ National Development Council

4. ✘ Reserve Bank of India

Question Number : 186 Question Id : 7368155238 Question Type : MCQ Option Shuffling : Yes Display Question Number : Yes
Single Line Question Option : No Option Orientation : Vertical

Correct : 1 Wrong : 0.25

पंच वर्षीय योजनाओं का अंतिम अनुमोदन किसके द्वारा किया जाता है?

Options :

1. ✘ योजना आयोग

2. ✘ वित्त मंत्रालय

3. ✔ राष्ट्रीय विकास परिषद

4. ✘ भारतीय रिजर्व बैंक

Question Number : 187 Question Id : 7368155239 Question Type : MCQ Option Shuffling : Yes Display Question Number : Yes
Single Line Question Option : No Option Orientation : Vertical

Correct : 1 Wrong : 0.25

Which one of the following is the first book written by Mahatma Gandhi?

Options :

1. ✘ My Experiments with truth

2. ✔ Hind Swaraj

3. ✘ Do or Die

4. ✘ Economics of Khadi

Question Number : 187 Question Id : 7368155239 Question Type : MCQ Option Shuffling : Yes Display Question Number : Yes
Single Line Question Option : No Option Orientation : Vertical

Correct : 1 Wrong : 0.25

निम्नलिखित में से कौन सी पुस्तक महात्मा गांधी द्वारा लिखी गई प्रथम पुस्तक है?

Options :

1. ✘ सत्य के साथ मेरे प्रयोग (My Experiments with truth)

2. ✓ हिंद स्वराज (Hind Swaraj)
3. ✗ करो या मरो (Do or Die)
4. ✗ खादी का अर्थशास्त्र (Economics of Khadi)

Question Number : 188 Question Id : 7368155240 Question Type : MCQ Option Shuffling : Yes Display Question Number : Yes
Single Line Question Option : No Option Orientation : Vertical

Correct : 1 Wrong : 0.25

Acharya Vinoba Bhave started 'Bhoodan Movement' in?

Options :

1. ✓ Telangana
2. ✗ Maharashtra
3. ✗ Rajasthan
4. ✗ West Bengal

Question Number : 188 Question Id : 7368155240 Question Type : MCQ Option Shuffling : Yes Display Question Number : Yes
Single Line Question Option : No Option Orientation : Vertical

Correct : 1 Wrong : 0.25

आचार्य विनोबा भावे ने 'भूदान आंदोलन' का आरम्भ कहाँ किया था?

Options :

1. ✓ तेलंगना
2. ✗ महाराष्ट्र
3. ✗ राजस्थान
4. ✗ पश्चिम बंगाल

Question Number : 189 Question Id : 7368155241 Question Type : MCQ Option Shuffling : Yes Display Question Number : Yes
Single Line Question Option : No Option Orientation : Vertical

Correct : 1 Wrong : 0.25

The first Foreign Minister of India was

Options :

1. ✗ K.M.Munshi
2. ✗ Charan Singh
3. ✗ Radhakrishnan
4. ✓ Jawaharlal Nehru

Question Number : 189 Question Id : 7368155241 Question Type : MCQ Option Shuffling : Yes Display Question Number : Yes
Single Line Question Option : No Option Orientation : Vertical

Correct : 1 Wrong : 0.25

भारत के प्रथम विदेश मंत्री कौन थे?

Options :

1. ✗ के. एम. मुंशी

2. ✘ चरण सिंह
3. ✘ राधाकृष्णन
4. ✔ जवाहरलाल नेहरू

Question Number : 190 Question Id : 7368155242 Question Type : MCQ Option Shuffling : Yes Display Question Number : Yes
Single Line Question Option : No Option Orientation : Vertical

Correct : 1 Wrong : 0.25

Who among the following is considered as the greatest painters in the history of Indian art?

Options :

1. ✔ Raja Ravi Verma
2. ✘ Sri Krishna Devaraya
3. ✘ Zakir Hussain
4. ✘ Salim Ali

Question Number : 190 Question Id : 7368155242 Question Type : MCQ Option Shuffling : Yes Display Question Number : Yes
Single Line Question Option : No Option Orientation : Vertical

Correct : 1 Wrong : 0.25

भारतीय कला इतिहास में सबसे महान चित्रकार किसे माना जाता है?

Options :

1. ✔ राजा रवि वर्मा
2. ✘ श्री कृष्ण देवराय
3. ✘ जाकिर हुसैन
4. ✘ सलीम अली

Question Number : 191 Question Id : 7368155243 Question Type : MCQ Option Shuffling : Yes Display Question Number : Yes
Single Line Question Option : No Option Orientation : Vertical

Correct : 1 Wrong : 0.25

Dr.B.R.Ambedkar was elected to the constituent assembly from which of the following State?

Options :

1. ✘ Rajasthan
2. ✘ Madhya Pradesh
3. ✔ West Bengal
4. ✘ Uttar Pradesh

Question Number : 191 Question Id : 7368155243 Question Type : MCQ Option Shuffling : Yes Display Question Number : Yes
Single Line Question Option : No Option Orientation : Vertical

Correct : 1 Wrong : 0.25

निम्नलिखित में से डॉ. बी. आर. आंबेडकर को संविधान सभा में किस राज्य से चुना गया था?

Options :

1. ✘ राजस्थान
2. ✘ मध्य प्रदेश
3. ✔ पश्चिम बंगाल
4. ✘ उत्तर प्रदेश

Question Number : 192 Question Id : 7368155244 Question Type : MCQ Option Shuffling : Yes Display Question Number : Yes
Single Line Question Option : No Option Orientation : Vertical

Correct : 1 Wrong : 0.25

Who is the present Chief Minister of Chhattisgarh?

Options :

1. ✔ Raman Singh
2. ✘ Ajit Jogi
3. ✘ Jagjit Singh
4. ✘ Rajesh Pawar

Question Number : 192 Question Id : 7368155244 Question Type : MCQ Option Shuffling : Yes Display Question Number : Yes
Single Line Question Option : No Option Orientation : Vertical

Correct : 1 Wrong : 0.25

छत्तीसगढ़ का वर्तमान मुख्यमंत्री कौन है?

Options :

1. ✔ रमण सिंह
2. ✘ अजित जोगी
3. ✘ जगजीत सिंह
4. ✘ राजेश पवार

Question Number : 193 Question Id : 7368155245 Question Type : MCQ Option Shuffling : Yes Display Question Number : Yes
Single Line Question Option : No Option Orientation : Vertical

Correct : 1 Wrong : 0.25

Which country has the largest cultivated area of cotton in the world?

Options :

1. ✘ Bangkok
2. ✘ India
3. ✔ China
4. ✘ Pakistan

Question Number : 193 Question Id : 7368155245 Question Type : MCQ Option Shuffling : Yes Display Question Number : Yes
Single Line Question Option : No Option Orientation : Vertical

Correct : 1 Wrong : 0.25

विश्व में किस देश में कपास की खेती का सबसे बड़ा क्षेत्र है?

Options :

1. ✘ बैकॉक
2. ✘ भारत
3. ✔ चीन
4. ✘ पाकिस्तान

Question Number : 194 Question Id : 7368155246 Question Type : MCQ Option Shuffling : Yes Display Question Number : Yes
Single Line Question Option : No Option Orientation : Vertical

Correct : 1 Wrong : 0.25

What is the age of retirement of President of India?

Options :

1. ✔ No Limit
2. ✘ 65 years
3. ✘ 70 years
4. ✘ 75 years

Question Number : 194 Question Id : 7368155246 Question Type : MCQ Option Shuffling : Yes Display Question Number : Yes
Single Line Question Option : No Option Orientation : Vertical

Correct : 1 Wrong : 0.25

भारत के राष्ट्रपति की सेवानिवृत्ति उम्र कितनी है?

Options :

1. ✔ कोई सीमा नहीं
2. ✘ 65 वर्ष
3. ✘ 70 वर्ष
4. ✘ 75 वर्ष

Question Number : 195 Question Id : 7368155247 Question Type : MCQ Option Shuffling : Yes Display Question Number : Yes
Single Line Question Option : No Option Orientation : Vertical

Correct : 1 Wrong : 0.25

The headquarters of Life Insurance Corporation of India is in?

Options :

1. ✘ Chennai
2. ✔ Mumbai
3. ✘ Kolkata
4. ✘ Bangalore

Question Number : 195 Question Id : 7368155247 Question Type : MCQ Option Shuffling : Yes Display Question Number : Yes
Single Line Question Option : No Option Orientation : Vertical

Correct : 1 Wrong : 0.25

भारतीय जीवन बीमा निगम का मुख्यालय कहाँ पर है?

Options :

1. ✘ चेन्नई
2. ✔ मुंबई
3. ✘ कोलकाता
4. ✘ बैंगलोर

Question Number : 196 Question Id : 7368155248 Question Type : MCQ Option Shuffling : Yes Display Question Number : Yes
Single Line Question Option : No Option Orientation : Vertical

Correct : 1 Wrong : 0.25

Which Indian State has a separate Constitution?

Options :

1. ✔ Jammu & Kashmir
2. ✘ Shimla
3. ✘ Nagaland
4. ✘ Manipur

Question Number : 196 Question Id : 7368155248 Question Type : MCQ Option Shuffling : Yes Display Question Number : Yes
Single Line Question Option : No Option Orientation : Vertical

Correct : 1 Wrong : 0.25

भारत के किस राज्य का पृथक संविधान है?

Options :

1. ✔ जम्मू एवं कश्मीर
2. ✘ शिमला
3. ✘ नागालैंड
4. ✘ मणिपुर

Question Number : 197 Question Id : 7368155249 Question Type : MCQ Option Shuffling : Yes Display Question Number : Yes
Single Line Question Option : No Option Orientation : Vertical

Correct : 1 Wrong : 0.25

The Dal lake is located in?

Options :

1. ✘ Punjab
2. ✔ Jammu & Kashmir
3. ✘ Bihar
4. ✘ Uttarakhand

Question Number : 197 Question Id : 7368155249 Question Type : MCQ Option Shuffling : Yes Display Question Number : Yes
Single Line Question Option : No Option Orientation : Vertical

Correct : 1 Wrong : 0.25

'डल लेक' कहाँ पर है?

Options :

1. ✘ पंजाब
2. ✔ जम्मू एवं कश्मीर
3. ✘ बिहार
4. ✘ उत्तराखंड

Question Number : 198 Question Id : 7368155250 Question Type : MCQ Option Shuffling : Yes Display Question Number : Yes
Single Line Question Option : No Option Orientation : Vertical

Correct : 1 Wrong : 0.25

Who founded the Mughal Empire?

Options :

1. ✔ Babur
2. ✘ Akbar
3. ✘ Ibrahim Lodi
4. ✘ Quli Qutub Shah

Question Number : 198 Question Id : 7368155250 Question Type : MCQ Option Shuffling : Yes Display Question Number : Yes
Single Line Question Option : No Option Orientation : Vertical

Correct : 1 Wrong : 0.25

मुगल साम्राज्य की स्थापना किसने की थी?

Options :

1. ✔ बाबर
2. ✘ अकबर
3. ✘ इब्राहिम लोधी
4. ✘ कुली कुतुब शाह

Question Number : 199 Question Id : 7368155251 Question Type : MCQ Option Shuffling : Yes Display Question Number : Yes
Single Line Question Option : No Option Orientation : Vertical

Correct : 1 Wrong : 0.25

Who is popularly known as the 'Flying Sikh'?

Options :

1. ✘ Maninder Singh
2. ✘ Charan Singh
3. ✘ Navjot Singh Siddhu
4. ✔ Milka Singh

Question Number : 199 Question Id : 7368155251 Question Type : MCQ Option Shuffling : Yes Display Question Number : Yes
Single Line Question Option : No Option Orientation : Vertical

Correct : 1 Wrong : 0.25

निम्नलिखित में से कौन सा व्यक्ति 'फ्लाइंग सिख' के नाम से प्रसिद्ध हैं?

Options :

1. ✘ मनिंदर सिंह
2. ✘ चरण सिंह
3. ✘ नवजोत सिंह सिद्धू
4. ✔ मिलखा सिंह

Question Number : 200 Question Id : 7368155252 Question Type : MCQ Option Shuffling : Yes Display Question Number : Yes
Single Line Question Option : No Option Orientation : Vertical

Correct : 1 Wrong : 0.25

Who is the present Human Resources Development minister of India?

Options :

1. ✘ Suresh Prabhu
2. ✘ Rajvardhan Singh Rathore
3. ✔ Smriti Irani
4. ✘ Pallam Raju

Question Number : 200 Question Id : 7368155252 Question Type : MCQ Option Shuffling : Yes Display Question Number : Yes
Single Line Question Option : No Option Orientation : Vertical

Correct : 1 Wrong : 0.25

भारत के वर्तमान मानव संसाधन विकास मंत्री कौन हैं?

Options :

1. ✘ सुरेश प्रभु
2. ✘ राज्यवर्धन सिंह राठौड़
3. ✔ स्मृति ईरानी
4. ✘ पल्लम राजू