

IIT-JEE 2004 Mains Questions & Solutions – Chemistry – Version 2

(The questions are based on memory)

Break-up of marks:

Physical	Inorganic	Organic
30	10	20

1. One mole of a liquid (1 bar, 100 ml) is taken in an adiabatic container and the pressure increases steeply to 100 bar. The volume decreases by 1 ml. Find  $\Delta U$  and  $\Delta H$ .

[2]

**Solution**

Since the process is under adiabatic condition,

$$q_p = 0$$

$$\therefore \Delta H = q_p = 0$$

Now,  $\Delta U = \Delta W$  since  $q_p = 0$

$$= -P_{ext} \Delta V$$

$$= -100\text{bar} \times -1\text{ml}$$

$$= 10\text{ J}$$

2. Using VSEPR theory, draw the molecular structures of  $\text{OSF}_4$  and  $\text{XeF}_4$ , indicating the location of lone pair(s) of electrons and hybridization of central atoms.

[2]

**Solution**

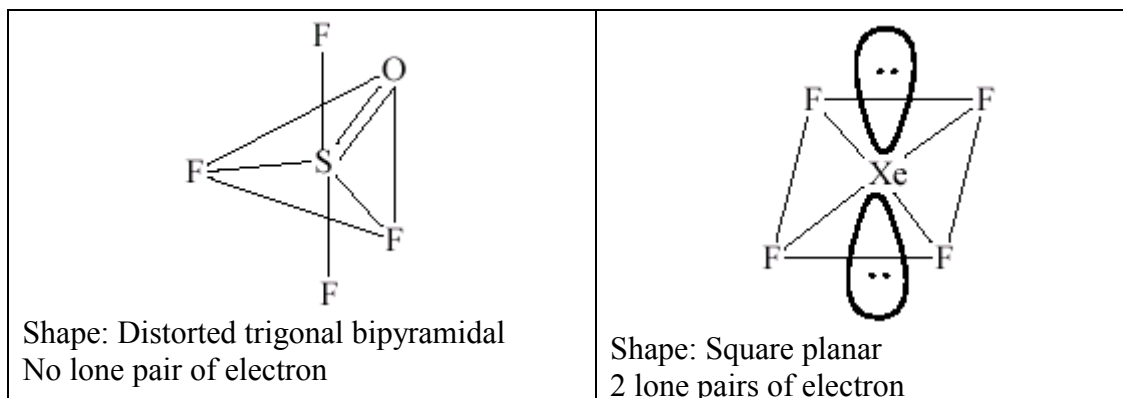
Consider  $\text{OSF}_4$

$$H = \frac{1}{2}(V + M - C + A)$$

$$= \frac{1}{2}(6 + 4) = 5, \text{ i.e. } sp^3d$$

Consider  $\text{XeF}_4$

$$H = \frac{1}{2}(8 + 4) = 6, \text{ i.e. } sp^3d^2$$



3. For the reaction,  $A + B \longrightarrow$  Products, the following initial rates were obtained at various given initial concentrations

S. No.	[A]	[B]	Rate(mol L <sup>-1</sup> sec <sup>-1</sup> )
1.	0.1	0.1	0.05
2.	0.2	0.1	0.10
3.	0.1	0.2	0.05

Write rate law and find the rate constant of the above reaction.

[2]

**Solution**

From the given data it is evident that the reaction is of first order with respect to reactant A and is of zero order with respect to reactant B. Therefore, the rate law of the reaction is

$$rate = k[A]^1[B]^0$$

On putting the value of concentration of reactant A and rate of reaction from set of data first (S. No.-1), we get

$$Rate\ constant,\ k = \frac{0.05}{0.1} = 5 \times 10^{-1}\ s^{-1}$$

4. (i) AB crystallizes in a rock salt structure with A : B = 1 : 1. The shortest distance between A and B is  $y^{1/3}$  nm. The formula mass of AB is 6.023 Y amu where Y is any arbitrary constant. Find the density in kg m<sup>-3</sup>.

(ii) If measured density is 20 kg m<sup>-3</sup>. Identify the type of point defect.

[2]

**Solution**

(i) Edge length of FCC unit cell =  $2 \times$  shortest distance between A and B  
 $= 2 \times Y^{1/3}$

$$\text{Density of the crystal of AB} = \frac{Z \times M}{N_0 \times a^3} = \frac{4 \times (6.023 Y)}{6.023 \times 10^{23} \times (2Y^{1/3} \times 10^{-9})^3}$$

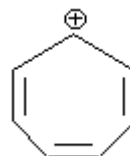
$$= 5 \times 10^3 \text{ g m}^{-3}$$

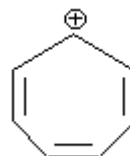
$$= 5 \text{ kg m}^{-3}$$

(ii) There is huge difference in theoretically calculated density and observed density. It is only possible if some foreign species occupies interstitial space i.e. substitution defect.

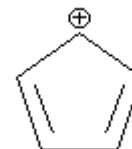
5. 7-bromo-1,3,5-cycloheptatriene exists as an ion whereas 5-bromo-1,3-cyclopentadiene does not form an ion even in the presence of  $\text{Ag}^+$ . Explain [2]

**Solution**

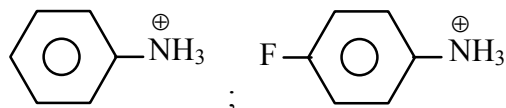


On ionization, 7-bromo-1,3,5-cycloheptatriene gives  which is highly stable due to aromatic character.



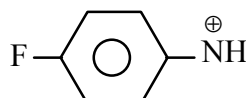
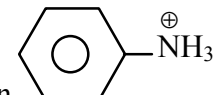
On the other hand, 5-bromo-1,3-cyclopentadiene gives  which involves cyclic resonance of  $4\pi$  electrons making it highly unstable antiaromatic cation.

6. Which one is more acidic? Explain.

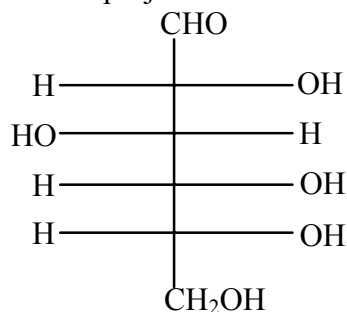


[2]

**Solution**

Due to the presence of electron withdrawing F group in , it is more acidic than  (-I effect).

7. The Fischer projection formula of D–glucose is

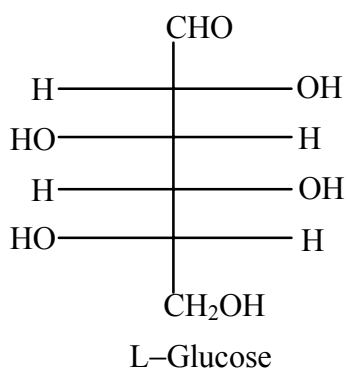


- (i) Give Fischer projection formula of L–glucose.  
(ii) Give the product of reaction of L–glucose with Tollen’s reagent.

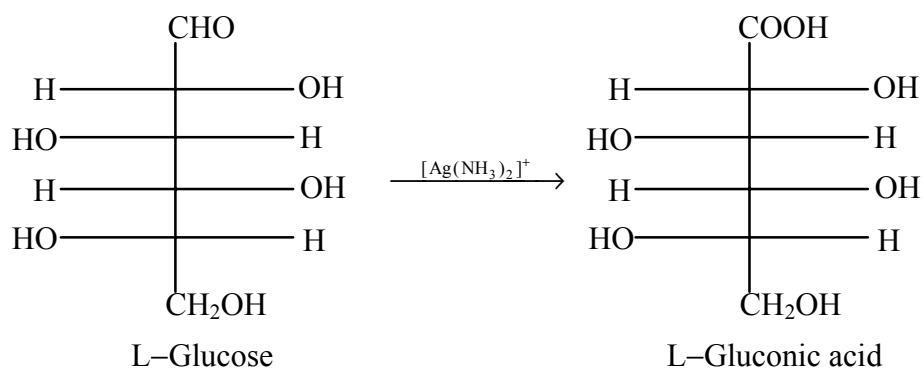
[2]

**Solution**

- (i)



- (ii)



8. Arrange the following in the decreasing order of Bronsted basicity:  
*BaO, Cl<sub>2</sub>O<sub>7</sub>, SO<sub>3</sub>, B<sub>2</sub>O<sub>3</sub>, CO<sub>2</sub>*. Justify in not more than two sentences.

[2]

**Solution**

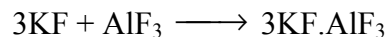
$BaO > B_2O_3 > CO_2 > SO_3 > Cl_2O_7$ .  $HClO_4$  is stronger acid than  $H_2SO_4$  which is stronger than  $H_2CO_3$ .  $B_2O_3$  like water is amphoteric.  $BaO$  is basic.

9.  $AlF_3$  does not dissolve in anhydrous  $HF$  but dissolves in  $KF$ .  
(i) Explain the reason  
(ii) When  $BF_3$  is added to the above solution containing  $KF$ , aluminium trifluoride is precipitated. Give balanced chemical equation.

[2]

**Solution**

(i)  $AlF_3$  does not dissolve in  $HF$  because fluorine of  $HF$  molecule is not available for coordination due to hydrogen bonding, while  $AlF_3$  dissolves in  $KF$  due to formation of double salt  $3KF \cdot AlF_3$ .



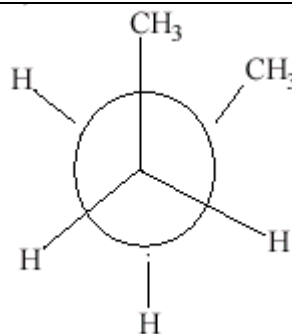
(ii)  $3KF \cdot AlF_3 + 3BF_3 \longrightarrow AlF_3(s) + 3KBF_4$

10. Give the Newmann configuration of the least stable staggered form of n-butane. Due to which of the following strain it is destabilised.  
(i) Torsional strain  
(ii) Van der Waal's strain  
(iii) Combination of the two.

[2]

**Solution**

The reason of instability is Van der Waal's strain. The electrostatic force of repulsion acting between the two methyl groups present in close proximity is responsible for making it the least stable.



11. (i) 1.22 g of benzoic acid is dissolved in (i) 100 g acetone ( $K_b$  for acetone = 1.7) and (ii) 100 g benzene ( $K_b$  for benzene = 2.6). The elevation in boiling points  $\Delta T_b$  is  $0.17^\circ C$  and  $0.13^\circ C$  respectively.  
(a) What are the molecular weights of benzoic acid in both the solutions?  
(b) What do you deduce out of it in terms of structure of benzoic acid?

(ii) 0.1 M HA is titrated against 0.1 M NaOH. Find the pH at the end point.  
 Dissociation constant for the acid HA is  $5 \times 10^{-6}$  and the degree of hydrolysis,  $h \ll 1$

[4]

**Solution**

(i) (a) Let  $M$  and  $M'$  be the molecular weight of benzoic acid ( $C_6H_5COOH$ ) in acetone and benzene respectively.

We know

$$\Delta T_b = k_b \times m$$

$$0.17 = 1.7 \times \frac{1.22 \times 1000}{M \times 100}$$

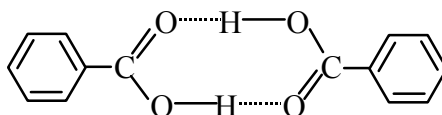
Molecular weight of benzoic acid in acetone,  $M = 122$

$$\text{and } 0.13 = 2.6 \times \frac{1.22 \times 1000}{M' \times 100}$$

Molecular weight of benzoic acid in benzene,  $M' = 244$

The formula weight of benzoic acid =  $(7 \times 12) + (6 \times 1) + (16 \times 2) = 122$

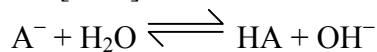
(b) It means that benzoic acid remains as it is in acetone while it dimerises in benzene as



(ii)  $HA + NaOH \longrightarrow NaA + H_2O$

At end point their equal equivalents react together.

$$\therefore [NaA] = 0.05 \text{ M}$$



$$pH = -\log \sqrt{\frac{K_w \cdot K_a}{c}}$$

$$pH = -\log \sqrt{\frac{10^{-14} \times 5 \times 10^{-6}}{0.05}}$$

$$\therefore pH = 9$$

**12.** DMG (Dimethyl glyoxime) is added to alcoholic solution of  $NiCl_2$ . When ammonium hydroxide is slowly added to it a rosy red precipitate of a complex appears.

(i) Give the structure of complex showing hydrogen bonds.

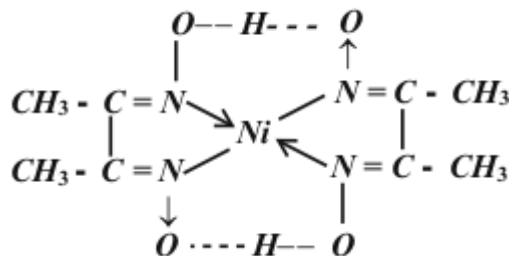
(ii) Give oxidation state and hybridization of central metal ion.

(iii) Identify whether it is paramagnetic or diamagnetic.

[4]

**Solution**

(i)



(ii) The oxidation state of nickel is (II) in complex and its hybridization is  $dsp^2$ .

(iii) This complex is diamagnetic in nature.

- 13.** There are two ores ( $A_1$ ) and ( $A_2$ ) of metal (M). When ore ( $A_1$ ) is calcinated a black solid (S) is obtained along with the liberation of  $CO_2$  and water. The ore ( $A_1$ ) on treatment with HCl and KI gives a precipitate (P) and iodine is liberated. Another ore ( $A_2$ ) on roasting gives a gas (G) and metal (M) is set free. When gas (G) is passed through  $K_2Cr_2O_7$  it turns green. Identify (M), ( $A_1$ ), ( $A_2$ ), (S), (P) and (G).

[4]

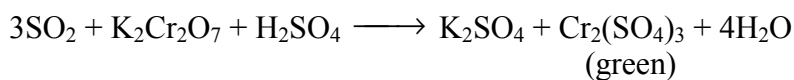
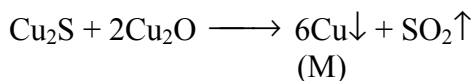
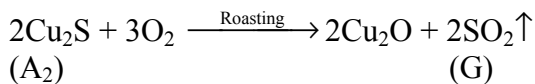
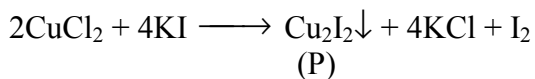

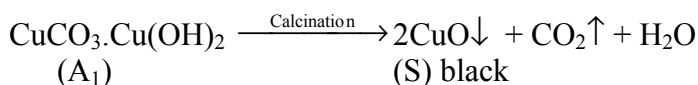
**Solution**

Metal (M) is Cu and its two ores are

( $A_1$ ) is malachite  $CuCO_3 \cdot Cu(OH)_2$

( $A_2$ ) is copper glance  $Cu_2S$ .

Reactions involved are



14. (a) (i)  $\text{N}_2\text{O}_4(\text{g}) \rightleftharpoons 2\text{NO}_2(\text{g})$   
 This reaction is carried out at 298 K and 20 bar. 5 mol each of  $\text{N}_2\text{O}_4$  and  $\text{NO}_2$  are taken initially.  
 Given:  $\Delta G^\circ_{\text{N}_2\text{O}_4} = 100 \text{ kJ mol}^{-1}$ ;  $\Delta G^\circ_{\text{NO}_2} = 50 \text{ kJ mol}^{-1}$   
 Find  $\Delta G$  for reaction at 298 K under given condition.  
 (ii) The reaction proceeds at a initial pressure of 20 bar. Find the direction in which the reaction proceeds to achieve equilibrium.
- (b) For a real gas obeying van der Waal's equation a graph is plotted between  $PV_m$  (y-axis) and  $P$  (x-axis) where  $V_m$  is molar volume. Find y-intercept of the graph.

[4]

**Solution**

- (a) (i) Standard Gibbs free energy change for the reaction,  $\text{N}_2\text{O}_4(\text{g}) \rightleftharpoons 2\text{NO}_2(\text{g})$

$$\Delta G^\circ = \Delta G^\circ_{\text{Product}} - \Delta G^\circ_{\text{Reactant}}$$

$$= 2 \times 50 - 100 = 0$$

$$\Delta G^\circ = -2.303 RT \log K_p = 0$$

$$K_p = 1$$

Initially,

$$P_{\text{N}_2\text{O}_4} = P_{\text{NO}_2} = 10 \text{ bar}$$

$$\frac{(P_{\text{NO}_2})^2}{P_{\text{N}_2\text{O}_4}} = 10$$

$$\text{So, } Q_{P_{\text{Initial}}} = P_{\text{N}_2\text{O}_4}$$

Initial Gibbs free energy of the above reaction,

$$\Delta G = \Delta G^\circ + 2.303 RT \log Q_P$$

$$\Delta G = 0 + 2.303 \times 8.314 \times 298 \log 10$$

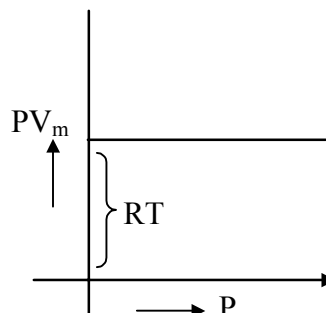
$$= 5.705 \times 10^3 \text{ kJ mol}^{-1}$$

- (ii) Since initial Gibbs free energy change of the reaction is positive, so the reverse reaction will take place
- (b) At the point of intercept  $P = 0$  and at very low pressure van der Waal's equation reduces to ideal gas equation

$$PV = nRT$$

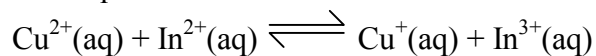
$$PV_m = RT$$

So, y-intercept of the graph =  $RT$





15. Find the equilibrium constant at 298 K for the reaction,



Given that

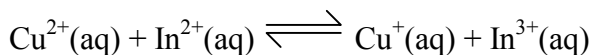
$$E_{\text{Cu}^{2+}|\text{Cu}^+}^{\circ} = 0.15 \text{ V}$$

$$E_{\text{In}^{3+}|\text{In}^+}^{\circ} = -0.42 \text{ V}$$

$$E_{\text{In}^{2+}|\text{In}^+}^{\circ} = -0.40 \text{ V}$$

[4]

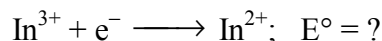
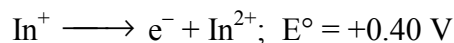
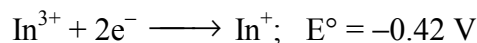
**Solution**



$$E_{\text{cell}}^{\circ} = E_{\text{Cu}^{2+}|\text{Cu}^+}^{\circ} - E_{\text{In}^{3+}|\text{In}^{2+}}^{\circ}$$

$$E_{\text{cell}}^{\circ} = 0.15 - E_{\text{In}^{3+}|\text{In}^{2+}}^{\circ} \quad \dots(\text{i})$$

For  $E_{\text{In}^{3+}|\text{In}^{2+}}^{\circ}$  :



Applying,

$$\Delta G^{\circ} = \Delta G_1^{\circ} + \Delta G_2^{\circ}$$

$$-nFE^{\circ} = -2 F (-0.42) - 1 F (0.40)$$

$$-E^{\circ} = 0.84 - 0.40$$

$$E_{\text{In}^{3+}|\text{In}^{2+}}^{\circ} = -0.44 \text{ V}$$

$$\therefore E_{\text{cell}}^{\circ} = 0.15 + 0.44 = 0.59 \text{ V}$$

$$\therefore E_{\text{cell}}^{\circ} = \frac{2.303 RT}{nF} \log K_c$$

$$\therefore 0.59 = \frac{0.059}{1} \log K_c$$

$$K_c = \text{Antilog } 10$$

$$\therefore K_c = 10^{10}$$

16. Arrange the following compounds in the increasing order of bond length of O–O bond:  $\text{O}_2$ ,  $\text{O}_2[\text{AsF}_6]$ ,  $\text{KO}_2$ . Explain on the basis of ground state electronic configuration of dioxygen in these molecules.

[4]

**Solution**

For O<sub>2</sub>:

$$\sigma 1s^2, \sigma^* 1s^2, \sigma 2s^2, \sigma^* 2s^2, \sigma 2p_z^2 \left[ \begin{array}{l} \pi 2p_x^2 \\ \pi 2p_y^2 \end{array} \right] \left[ \begin{array}{l} \pi^* 2p_x^1 \\ \pi^* 2p_y^1 \end{array} \right]$$

$$\text{Bond order} = \frac{1}{2}(10 - 6) = 2$$

For O<sub>2</sub><sup>+</sup>:

$$\sigma 1s^2, \sigma^* 1s^2, \sigma 2s^2, \sigma^* 2s^2, \sigma 2p_z^2 \left[ \begin{array}{l} \pi 2p_x^2 \\ \pi 2p_y^2 \end{array} \right] \left[ \begin{array}{l} \pi^* 2p_x^1 \\ \pi^* 2p_y^0 \end{array} \right]$$

$$\text{Bond order} = \frac{1}{2}(10 - 5) = 2.5$$

For O<sub>2</sub><sup>-</sup>:

$$\sigma 1s^2, \sigma^* 1s^2, \sigma 2s^2, \sigma^* 2s^2, \sigma 2p_z^2 \left[ \begin{array}{l} \pi 2p_x^2 \\ \pi 2p_y^2 \end{array} \right] \left[ \begin{array}{l} \pi^* 2p_x^{1+1} \\ \pi^* 2p_y^1 \end{array} \right]$$

$$\text{Bond order} = \frac{1}{2}(10 - 7) = 1.5$$

Higher the bond order smaller the bond length.

Hence, O<sub>2</sub>[AsF<sub>6</sub>] < O<sub>2</sub> < KO<sub>2</sub>

17. (i) The wave function of 2s electron is given by

$$\psi_{2s} = \frac{1}{4\sqrt{2\pi}} \left( \frac{1}{a_0} \right)^{3/2} \left( 2 - \frac{r}{a_0} \right) e^{-\frac{r}{a_0}}$$

It has a node at r = r<sub>0</sub>, find relation between r<sub>0</sub> and a<sub>0</sub>.

(ii) Find wavelength for 100 g particle moving with velocity 100 ms<sup>-1</sup>.

(iii) <sup>234</sup><sub>90</sub>Th emits 7 α and 6 β particles. Find the atomic no. and mass no. of the resulting nuclear specie. Also identify it.

[4]

**Solution**

(i) The probability of finding of 2s electron at a point,

$$\Psi_{2s}^2 = \frac{1}{32\pi} \left( \frac{1}{a_0} \right)^3 \left( 2 - \frac{r}{a_0} \right)^2 e^{-\frac{2r}{a_0}}$$

Node is the point at which probability of finding an electron is zero. It means the value of  $\Psi_{2s}^2$  is zero when  $r = r_0$ .

$$\frac{1}{32\pi} \left( \frac{1}{a_0} \right)^3 \left( 2 - \frac{r_0}{a_0} \right)^2 e^{-\frac{2r_0}{a_0}} = 0$$

$$\Rightarrow 2 - \frac{r_0}{a_0} = 0$$

$$\therefore r_0 = 2a_0$$

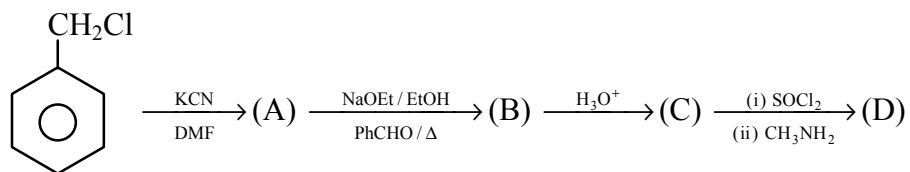
(ii) Applying de-Broglie equation,

$$\lambda = \frac{h}{mv} = \frac{6.626 \times 10^{-34}}{100 \times 10^{-3} \times 100} = 6.626 \times 10^{-35} \text{ m}$$

(iii) On balancing the mass number and charge of the nuclear reaction, we get

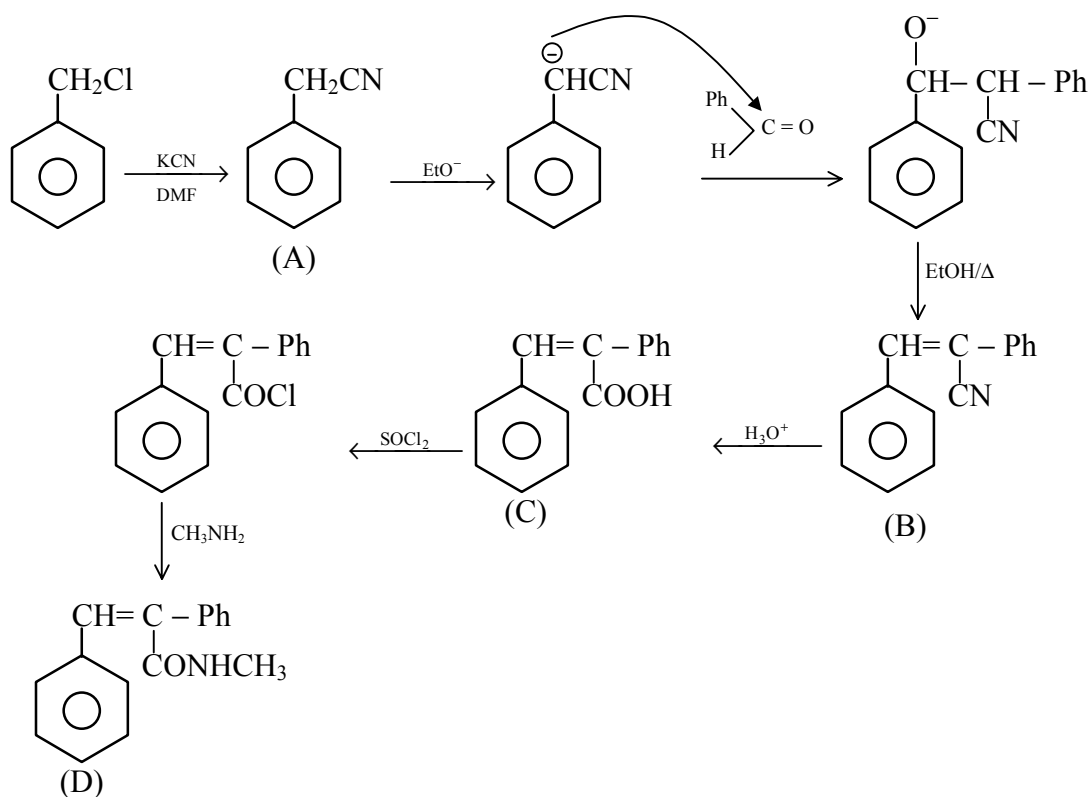


18. Identify the compounds (A), (B), (C) and (D) in given reaction sequence.

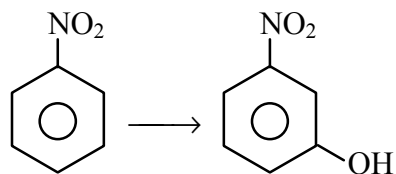


[4]

**Solution**



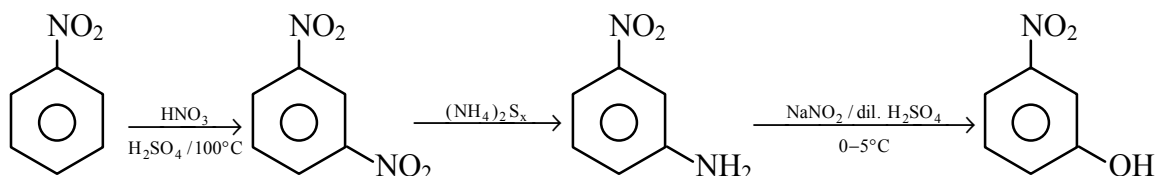
19. Convert



in not more than 4 steps. Clearly show the reagents, reaction condition and intermediates in the above conversion.

[4]

**Solution**

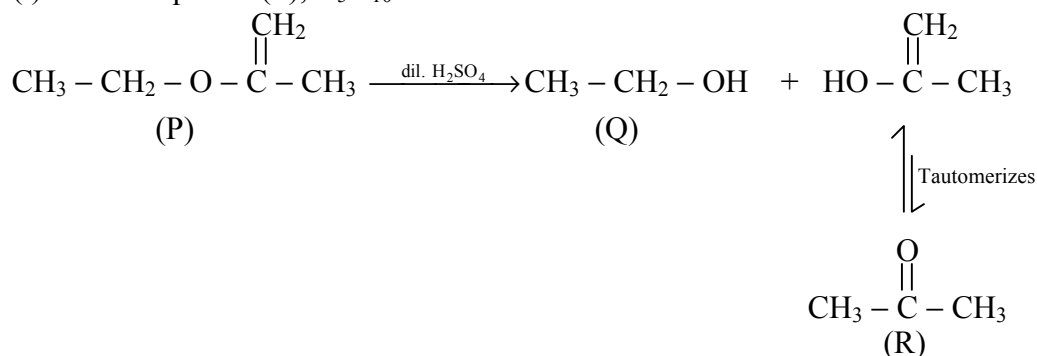


20. An organic compound (P),  $C_5H_{10}O$  reacts with dil.  $H_2SO_4$  to give (Q) and (R). Both (Q) and (R) give positive iodoform test. The reactivity of organic compound (P) is  $10^{15}$  times more than ethylene with respect to dil.  $H_2SO_4$ .
- Identify the compounds (P), (Q) and (R).
  - Give reason for the extraordinary reactivity of compound (P).

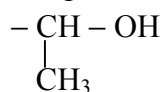
[4]

**Solution**

- (i) The compound (P),  $C_5H_{10}O$  have  $1^\circ$  unsaturation.

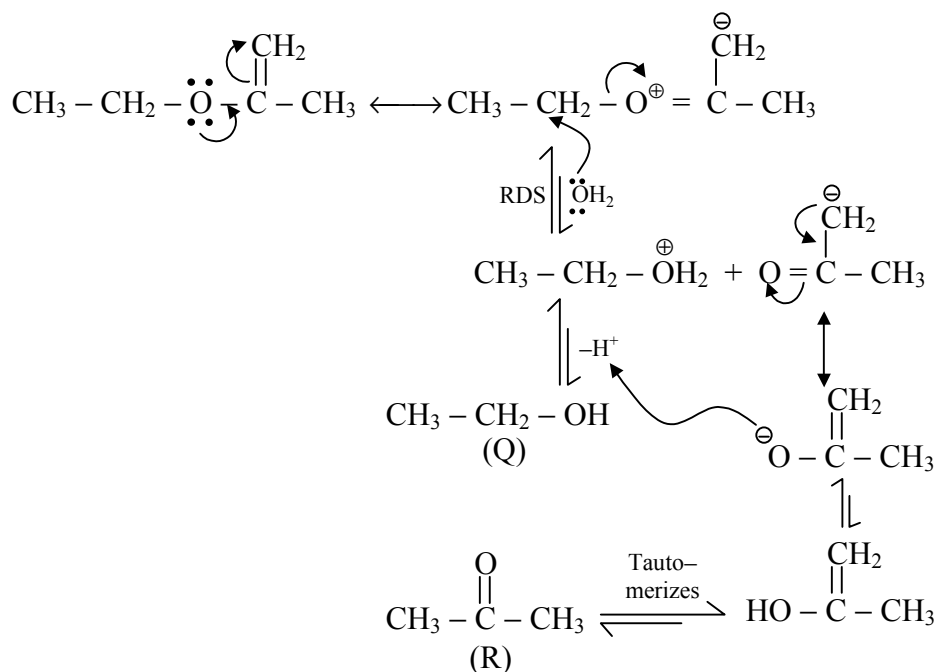


Compound (Q) and (R) both gives the iodoform test since (Q) contain

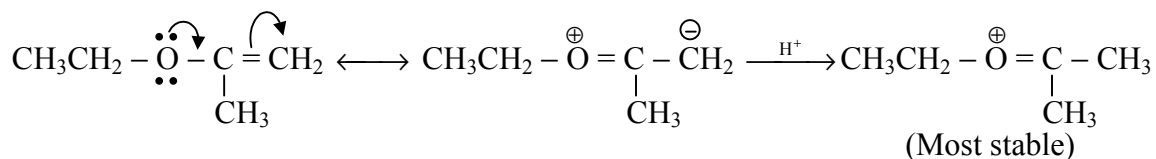


group,

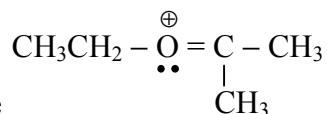
while (R) is methyl ketone having  $\begin{array}{c} -\text{C} - \text{CH}_3 \\ \parallel \\ \text{O} \end{array}$  group.



(ii)



The compound (P) on reaction with dil.  $\text{H}_2\text{SO}_4$  gives most stable cationic



intermediate which is stabilized by completion of octet. Hence its rate of formation is higher while  $\text{CH}_2=\text{CH}_2$  gives  $1^\circ$  carbocation i.e.

$\text{CH}_3-\overset{\oplus}{\text{C}}\text{H}_2$  with dil.  $\text{H}_2\text{SO}_4$ , which is not so greatly stabilized by resonance. Hence  $\text{CH}_2=\text{CH}_2$  is very less reactive than compound (P).