

**Solved Paper**  
**SSC Higher Secondary Level Data Entry**  
**Operator & LDC Exam**  
**Held on—27-11-2010**

**PART-I**

**GENERAL INTELLIGENCE**

**Directions (1-9):** In each of the following questions select the related letter / word / number / figure from the given alternatives.

1. 83 : 25 :: 29 : ?  
(a) 25 (b) 16  
(c) 49 (d) 36
2. VXZ : JLN :: GIK : ?  
(a) QSO (b) QRS  
(c) OQS (d) LMO
3. ABZY : CDXW :: EFVU : ?  
(a) IJRQ (b) KLPO  
(c) MNST (d) GHTS
4. Receptionist : Office :: Hostess : ?  
(a) Crew (b) Host  
(c) Airport (d) Aircraft
5. NUMBER : UNBMRE :: GHOST : ?  
(a) HOGST (b) HOGTS  
(c) HGOTS (d) HGSOT
6. 6 : 35 :: 7 : ?  
(a) 48 (b) 42  
(c) 34 (d) 13

7. Dog : Rabies :: Mosquito : ?  
(a) Plague (b) Death  
(c) Malaria (d) Sting
8. 4 : 24 :: 17 : ?  
(a) 37 (b) 47  
(c) 57 (d) 67
9. Clock : Time :: Thermometer : ?  
(a) Heat (b) Radiation  
(c) Energy (d) Temperature

**Directions (10-18):** In each of the following questions select the one which is different from the other three responses.

10. (a) BGNI (b) CHOJ  
(c) DIPL (d) EIQL
11. (a) 20–36 (b) 30–46  
(c) 50–56 (d) 60–65
12. (a) September (b) April  
(c) November (d) January
13. (a) MKO (b) QSO  
(c) VTX (d) DBF
14. (a) (48, 6) (b) (21, 7)  
(c) (24, 3) (d) (56, 7)

Solved Paper-27-11-2010

15. (a) Carbon (b) Graphite  
(c) Diamond (d) Gold
16. (a) 49 (b) 140  
(c) 112 (d) 97
17. (a) XRMKL (b) XRMIF  
(c) XRNLI (d) XSNLJ
18. (a) Iron (b) Mercury  
(c) Silver (d) Gold
19. Which one set of letters when sequentially placed at the gaps in the given letter series shall complete it?  
a \_ b \_ b \_ a \_ b \_ \_ b a  
(a) b b a a b (b) b b a b b  
(c) a a b a b (d) a a b b a

**Directions (20-24):** A series is given with one term missing. Choose the correct alternative from the given ones that will complete the series.

20. 15, 17, 20, 22, 29, ?, ?  
(a) 31, 38 (b) 36, 38  
(c) 36, 43 (d) 38, 45
21. 6, ?, 15, 27, 51, 99  
(a) 10 (b) 9  
(c) 11 (d) 12
22. 2, 5, 8, 11, 14, ?  
(a) 17 (b) 16  
(c) 15 (d) 18
23. BDF, KMO, TVX, ?  
(a) CEG (b) UVW  
(c) XYZ (d) ACE
24. ZXUQL ?  
(a) F (b) E  
(c) G (d) H

**Directions:** From the given alternatives words, select the word which can be formed using the letters of the given word.

25. EXAMINATION  
(a) EXAMINE (b) NAME  
(c) MINOR (d) GAME
26. Mohini went to movies nine days ago. She goes to the movies only on Thursday. What day of the week is today?  
(a) Saturday (b) Thursday  
(c) Sunday (d) Tuesday
27. The age of a father is twice that of his son's at present age. After 5 years the sum of their ages will be 85. How old are they now?  
(a) 40, 20 (b) 46, 23  
(c) 60, 30 (d) 50, 25
28. Ramesh drives his car 4 km to east, then takes left turn and drives 6 km. He again turns to his left hand side and travels 4 km. How many km is Ramesh away from his starting place?  
(a) 6km (b) 10km  
(c) 4km (d) 14km
29. Ravi's father has a son Rohit who has an aunt Laxmi who has a husband Rao whose father-in-law is Mohan. What is the relation of Mohan to Ravi?  
(a) Nephew (b) Grandfather  
(c) Son (d) Uncle
30. If your 9th person in a square starting from one end and 11th from another end, what is the number of persons in the queue?  
(a) 20 (b) 19  
(c) 21 (d) 18
31. If BEAUTIFUL is written as CDOGHJKMN, how LEAF can be written in that code?  
(a) NDOK (b) KNND  
(c) ODNK (d) DKON
32. If A = 1, CAT = 24, then POLICE = ?  
(a) 57 (b) 60  
(c) 62 (d) 59

33. Five students are sitting in a row. 'T' is on the right of 'Z'. 'M' is on the left of 'Z' but is on the right of 'L'. 'T' is on the left of 'Q'. Who is sitting first from the left?
- (a) Z (b) Q  
(c) T (d) L
34. From the given alternative words, select the word which cannot be formed using the letters of the given word:  
SUPERIORITY
- (a) PURSE (b) PURSUIT  
(c) PRIORITY (d) PURITY
35. Question Missing
- (a) East (b) West  
(c) North (d) South
36. Select the alternative which is related to the given set.  
Given set is: (12, 18, 24)
- (a) (6, 12, 30) (b) (5, 15, 10)  
(c) (10, 16, 18) (d) (8, 12, 16)
37. In a solid cube which is made up of 27 small cubes, two opposite sides are painted red, two painted yellow and the other two painted white. How many cubes have two colours?
- (a) 8 (b) 12  
(c) 16 (d) 24

**Directions (38-40):** In each of the following questions one / two statements are given followed by two conclusions (I) and (II). You have to consider the two statements to be true even if they seem to be at variance from commonly known facts. You have to decide which of the given conclusions, if any, follow from the given statements.

38. **Statements:**

Some books are Magazines.  
Some Magazines are Novels.

**Conclusions:**

- (I) Some books are Novels.  
(II) Some Novels are Magazines.
- (a) Only (I) follows  
(b) Only (II) follows  
(c) Either (I) or (II) follows  
(d) Neither (I) nor (II) follows

39. **Statements:**

"Bats do not lay eggs and therefore, bats are not birds.

**Conclusions**

- (I) All birds lay eggs.  
(II) Only birds lay eggs.
- (a) Only (I) follows  
(b) Only (II) follows  
(c) Both (I) and (II) follows  
(d) Neither (I) nor (II) follows

40. **Statements:**

(I) All students like excursions.  
(II) Some students like Laboratory experiments.

- (a) Only (I) follows  
(b) Only (II) follows  
(c) Conclusion (I) and (II) follows  
(d) Neither (I) nor (II) follows

41. If '+' stands for '÷', '×' stands '+', '-' stands for '×', and '÷' stands for '-', then which of the following statements is correct?

- (a)  $36 \times 6 + 7 \div 2 - 6 = 20$   
(b)  $36 \div 6 + 3 \times 5 - 3 = 45$   
(c)  $36 + 6 - 3 \times 5 \times 3 = 24$   
(d)  $36 - 6 + 3 \times 5 \div 3 = 74$

42. If  $4 - 4 = 17$ ,  $6 - 6 = 37$  and  $2 - 2 = 5$  then what is  $5 - 5 = ?$

- (a) 27 (b) 26  
(c) 19 (d) 20

Solved Paper-27-11-2010

43. In the following equation, select correct combination of mathematical signs to replace \* signs and to balance the equation

$$16 * 4 * * 5 * 9 * 1$$

- (a)  $+\div=\times$       (b)  $\div+=\times$   
 (c)  $\times=+-$       (d)  $+\times=\div$

**Directions (44-45):** Select the missing number from the given responses.

44. 
$$\begin{array}{r} 6 \quad 7 \quad 5 \\ 7 \quad 8 \quad 6 \\ 8 \quad 9 \quad ? \\ \hline 62 \quad 79 \quad 47 \end{array}$$

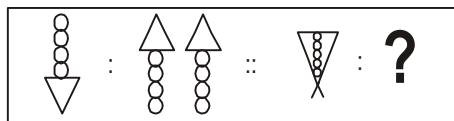
- (a) 4                      (b) 7  
 (c) 8                      (d) 9

45. 
$$\begin{array}{r} 9 \quad 4 \quad 5 \\ 12 \quad 16 \quad 15 \\ 15 \quad 20 \quad 25 \\ 180 \quad 80 \quad ? \end{array}$$

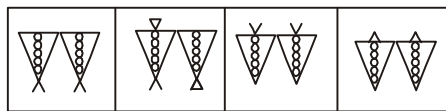
- (a) 125                      (b) 75  
 (c) 20                      (d) 25

**Directions:** Select the related figure from the answer figures.

46. Question Figures



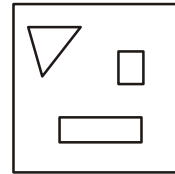
Answer Figures



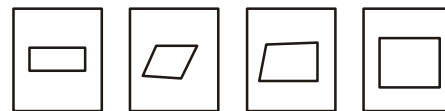
- (a)      (b)      (c)      (d)

47. Among the four answer figures, which figure can be formed from the cut-pieces given below in the question figure?

Question Figure



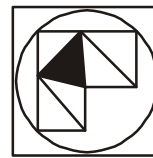
Answer Figures



- (a)      (b)      (c)      (d)

**Directions:** Which answer figure will complete the question figure?

48. Question Figure



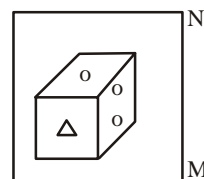
Answer Figures



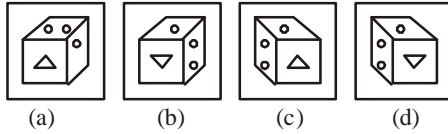
- (a)      (b)      (c)      (d)

49. If a mirror is placed on the line MN, then which of the answer figures is the right image of the given question figure?

Question Figure

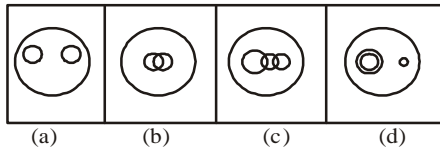


Answer Figures



50. Find out which of the diagrams as given in the alternatives correctly represents the relationship stated in the question.

**Mountains, Forest, Earth**



## ANSWER SHEET

- |         |         |         |         |         |         |         |         |         |         |
|---------|---------|---------|---------|---------|---------|---------|---------|---------|---------|
| 1. (c)  | 2. (c)  | 3. (d)  | 4. (d)  | 5. (c)  | 6. (a)  | 7. (c)  | 8. (a)  | 9. (d)  | 10. (c) |
| 11. (a) | 12. (d) | 13. (b) | 14. (b) | 15. (d) | 16. (a) | 17. (d) | 18. (d) | 19. (d) | 20. (d) |
| 21. (b) | 22. (a) | 23. (a) | 24. (a) | 25. (b) | 26. (a) | 27. (d) | 28. (a) | 29. (b) | 30. (b) |
| 31. (a) | 32. (b) | 33. (d) | 34. (b) | 35. (b) | 36. (d) | 37. (b) | 38. (b) | 39. (a) | 40. (c) |
| 41. (d) | 42. (b) | 43. (b) | 44. (b) | 45. (b) | 46. (c) | 47. (a) | 48. (d) | 49. (c) | 50. (a) |



<http://upscportal.com/civilservices/order-books>

Order Online - [www.upscportal.com](http://www.upscportal.com)

## UPSCPORTAL PUBLICATIONS

### CSAT BOOKS




₹ 150/-  
Code: UP04



₹ 105/-  
Code: UP05




₹ 175/-  
Code: UP07



₹ 150/-  
Code: UP08



₹ 170/-



₹ 390/-


INDIA  
2011

Coming soon  
Code: UP16



### General Studies

*Civil Services (Main)*




₹ 210/-  
Code: UM01



₹ 120/-  
Code: UM02

*Civil Services (Preliminary)*




₹ 110/-  
Code: UP02



₹ 140/-  
Code: UP03

### Other Important Books of Your Interest



₹ 150/-  
Code: UP11



₹ 225/-  
Code: B01



₹ 225/-  
Code: B02



₹ 320/-  
Code: S01



₹ 225/-  
Code: B02



₹ 225/-  
Code: B02

Order Online - [www.upscportal.com](http://www.upscportal.com)

Helpline No. 011-45151781, 27650111



<http://upscportal.com/civilservices/order-books>