

416352

[Q. Booklet Number]



Aakash Institute
Premier Institute in India for Medical Entrance Exams.

Aakash
IIT-JEE

(Divisions of Aakash Educational Services Ltd.)

KOLKATA**WB-JEE - 2009**

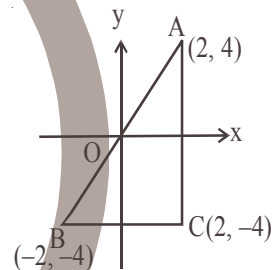
MATHEMATICS
QUESTIONS & ANSWERS

1. If C is the reflecton of A (2, 4) in x-axis and B is the reflection of C in y-axis, then |AB| is
(A) 20 (B) $2\sqrt{5}$ (C) $4\sqrt{5}$ (D) 4

Ans : (C)**Hints :** A \equiv (2, 4); C \equiv (2, -4); B \equiv (-2, -4)

$$|AB| = \sqrt{(2 - (-2))^2 + (4 - (-4))^2} = \sqrt{4^2 + 8^2}$$

$$= \sqrt{16 + 64} = \sqrt{80} = \sqrt{16 \times 5} = 4\sqrt{5}$$



2. The value of $\cos 15^\circ \cos 7\frac{1}{2}^\circ \sin 7\frac{1}{2}^\circ$ is

- (A) $\frac{1}{2}$ (B) $\frac{1}{8}$ (C) $\frac{1}{4}$ (D) $\frac{1}{16}$

Ans : (B)

$$\text{Hints : } \cos 15^\circ \cos 7\frac{1}{2}^\circ \sin 7\frac{1}{2}^\circ = \frac{1}{2} \left(2 \sin 7\frac{1}{2}^\circ \cos 7\frac{1}{2}^\circ \right) (\cos 15^\circ)$$

$$\frac{1}{2} (\sin 15^\circ) (\cos 15^\circ) = \frac{1}{4} (2 \sin 15^\circ \cos 15^\circ) = \frac{1}{4} \times \sin 30^\circ = \frac{1}{8}$$

3. The value of integral $\int_{-1}^1 \frac{|x+2|}{x+2} dx$ is

- (A) 1 (B) 2 (C) 0 (D) -1

Ans : (B)

$$\text{Hints : } I = \int_{-1}^1 \frac{|x+2|}{x+2} dx, \quad x+2=v \Rightarrow dx=dv$$

$$\therefore I = \int_1^3 \frac{|v|}{v} dv = \int_1^3 \frac{v}{v} dv = \int_1^3 1 dv = 2$$

4. The line $y = 2t^2$ intersects the ellipse $\frac{x^2}{9} + \frac{y^2}{4} = 1$ in real points if

- (A) $|t| \leq 1$ (B) $|t| < 1$ (C) $|t| > 1$ (D) $|t| \geq 1$

Ans : (A)

Hints : $\frac{x^2}{9} + \frac{y^2}{4} = 1$; $y = 2t^2$

$$\frac{x^2}{9} + \frac{4t^4}{4} = 1 \Rightarrow \frac{x^2}{9} + t^4 = 1 \Rightarrow x^2 = 9(1 - t^4)$$

$$x^2 \geq 0 \Rightarrow 9(1 - t^4) \geq 0 \Rightarrow t^4 - 1 \leq 0$$

$$\Rightarrow (t^2 - 1)(t^2 + 1) \leq 0$$

$$\Rightarrow t^2 - 1 \leq 0 \quad (\because t^2 + 1 > 0)$$

$$\Rightarrow |t| \leq 1$$

5. General solution of $\sin x + \cos x = \min_{a \in \mathbb{R}} \{1, a^2 - 4a + 6\}$ is

- (A) $\frac{n\pi}{2} + (-1)^n \frac{\pi}{4}$ (B) $2n\pi + (-1)^n \frac{\pi}{4}$ (C) $n\pi + (-1)^{n+1} \frac{\pi}{4}$ (D) $n\pi + (-1)^n \frac{\pi}{4} - \frac{\pi}{4}$

Ans : (D)

Hints : $\sin x + \cos x = \min_{a \in \mathbb{R}} \{1, a^2 - 4a + 6\}$

$$a^2 - 4a + 6 = (a - 2)^2 + 2 \therefore \min_{a \in \mathbb{R}} (a^2 - 4a + 6) = 2$$

$$\therefore \min_{a \in \mathbb{R}} \{1, a^2 - 4a + 6\} = \min\{1, 2\} = 1$$

$$\sin x + \cos x = 1 \Rightarrow \frac{1}{\sqrt{2}} \sin x + \frac{1}{\sqrt{2}} \cos x = \frac{1}{\sqrt{2}}$$

$$\Rightarrow \sin\left(x + \frac{\pi}{4}\right) = \sin \frac{\pi}{4}, \Rightarrow x + \frac{\pi}{4} = n\pi + (-1)^n \cdot \frac{\pi}{4}$$

$$\Rightarrow x = n\pi + (-1)^n \frac{\pi}{4} - \frac{\pi}{4}$$

6. If A and B square matrices of the same order and $AB = 3I$, then A^{-1} is equal to

- (A) 3B (B) $\frac{1}{3}B$ (C) $3B^{-1}$ (D) $\frac{1}{3}B^{-1}$

Ans : (B)

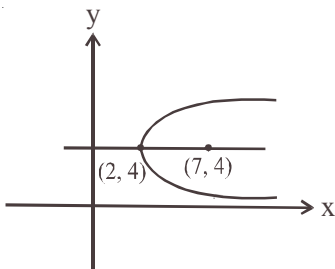
Hints : $AB = 3I, A^{-1} \cdot AB = 3 \cdot A^{-1} \cdot I \Rightarrow B = 3A^{-1} \Rightarrow A^{-1} = \frac{1}{3}B$



7. The co-ordinates of the focus of the parabola described parametrically by $x = 5t^2 + 2$, $y = 10t + 4$ are
 (A) (7, 4) (B) (3, 4) (C) (3, -4) (D) (-7, 4)

Ans : (A)

Hints : $x = 5t^2 + 2$; $y = 10t + 4$, $\left(\frac{y-4}{10}\right)^2 = \left(\frac{x-2}{5}\right)$
 or, $(y-4)^2 = 20(x-2)$



8. For any two sets A and B, $A - (A - B)$ equals
 (A) B (B) $A - B$ (C) $A \cap B$ (D) $A^c \cap B^c$

Ans : (C)

Hints : $A - (A - B) = A - (A \cap B^c) = A \cap (A \cap B^c)^c = A \cap (A^c \cup B) = (A \cap A^c) \cup (A \cap B) = A \cap B$

9. If $a = 2\sqrt{2}$, $b = 6$, $A = 45^\circ$, then
 (A) no triangle is possible (B) one triangle is possible
 (C) two triangle are possible (D) either no triangle or two triangles are possible

Ans : (A)

Hints : $a = 2\sqrt{2}$; $b = 6$; $A = 45^\circ$

$$\frac{a}{\sin A} = \frac{b}{\sin B} \Rightarrow \sin B = \frac{b}{a} \sin A$$

$$\Rightarrow \sin B = \frac{6}{2\sqrt{2}} \sin 45^\circ = \frac{3}{\sqrt{2}} \cdot \frac{1}{\sqrt{2}} = \frac{3}{2} \Rightarrow \text{No triangle is possible since } \sin B > 1$$

10. A Mapping from IN to IN is defined as follows :

$f: \text{IN} \rightarrow \text{IN}$

$f(n) = (n + 5)^2$, $n \in \text{IN}$

(IN is the set of natural numbers). Then

- (A) f is not one-to-one (B) f is onto
 (C) f is both one-to-one and onto (D) f is one-to-one but not onto

Ans : (D)

Hints : $f: \text{IN} \rightarrow \text{IN}$; $f(n) = (n + 5)^2$

$(n_1 + 5)^2 = (n_2 + 5)^2$

$\Rightarrow (n_1 - n_2)(n_1 + n_2 + 10) = 0$

$\Rightarrow n_1 = n_2 \rightarrow \text{one-to-one}$

There does not exist $n \in \text{IN}$ such that $(n + 5)^2 = 1$

Hence f is not onto



11. In a triangle ABC if $\sin A \sin B = \frac{ab}{c^2}$, then the triangle is
 (A) equilateral (B) isosceles (C) right angled (D) obtuse angled
Ans : (C)

Hints : $\sin A \sin B = \frac{ab}{c^2}$

$$\Rightarrow c^2 = \frac{ab}{\sin A \sin B} = \left(\frac{a}{\sin A} \right) \left(\frac{b}{\sin B} \right)$$

$$\Rightarrow c^2 = \left(\frac{c}{\sin C} \right)^2 \Rightarrow \sin^2 C = 1 \Rightarrow \sin C = 1 \Rightarrow C = 90^\circ$$

12. $\int \frac{dx}{\sin x + \sqrt{3} \cos x}$ equals
 (A) $\frac{1}{2} \ln \left| \tan \left(\frac{x}{2} - \frac{\pi}{6} \right) \right| + c$ (B) $\frac{1}{2} \ln \left| \tan \left(\frac{x}{4} - \frac{\pi}{6} \right) \right| + c$ (C) $\frac{1}{2} \ln \left| \tan \left(\frac{x}{2} + \frac{\pi}{6} \right) \right| + c$ (D) $\frac{1}{2} \ln \left| \tan \left(\frac{x}{4} + \frac{\pi}{3} \right) \right| + c$

where c is an arbitrary constant

Ans : (C)

Hints : $\int \frac{dx}{\sin x + \sqrt{3} \cos x} = \int \frac{dx}{2 \left(\frac{1}{2} \sin x + \frac{\sqrt{3}}{2} \cos x \right)} = \frac{1}{2} \int \frac{dx}{\sin \left(x + \frac{\pi}{3} \right)}$

$$= \frac{1}{2} \int \operatorname{cosec} \left(x + \frac{\pi}{3} \right) dx = \frac{1}{2} \log \left| \tan \left(\frac{x}{2} + \frac{\pi}{6} \right) \right| + c$$

$$= \frac{1}{2} \ln \left| \tan \left(\frac{x}{2} + \frac{\pi}{6} \right) \right| + c$$

13. The value of $(1 + \cos \frac{\pi}{6})(1 + \cos \frac{\pi}{3})(1 + \cos \frac{2\pi}{3})(1 + \cos \frac{7\pi}{6})$ is
 (A) $\frac{3}{16}$ (B) $\frac{3}{8}$ (C) $\frac{3}{4}$ (D) $\frac{1}{2}$

Ans : (A)

Hints : $\left(1 + \cos \frac{\pi}{6} \right) \left(1 + \cos \frac{\pi}{3} \right) \left(1 + \cos \frac{2\pi}{3} \right) \left(1 + \cos \frac{7\pi}{6} \right)$

$$= \left(1 + \frac{\sqrt{3}}{2} \right) \left(1 + \frac{1}{2} \right) \left(1 - \frac{1}{2} \right) \left(1 - \frac{\sqrt{3}}{2} \right) = \left(1 - \frac{3}{4} \right) \left(1 - \frac{1}{4} \right) = \frac{1}{4} \times \frac{3}{4} = \frac{3}{16}$$



14. If $P = \frac{1}{2} \sin^2 \theta + \frac{1}{3} \cos^2 \theta$ then

- (A) $\frac{1}{3} \leq P \leq \frac{1}{2}$ (B) $P \geq \frac{1}{2}$ (C) $2 \leq P \leq 3$ (D) $-\frac{\sqrt{13}}{6} \leq P \leq \frac{\sqrt{13}}{6}$

Ans : (A)

Hints : $P = \frac{1}{2} \sin^2 \theta + \frac{1}{3} \cos^2 \theta = \frac{1}{2} \sin^2 \theta + \frac{1}{3} (1 - \sin^2 \theta) = \frac{1}{3} + \frac{1}{6} \sin^2 \theta$

$$0 \leq \sin^2 \theta \leq 1 \Rightarrow \frac{1}{3} \leq \frac{1}{3} + \frac{1}{6} \sin^2 \theta \leq \frac{1}{3} + \frac{1}{6}$$

$$\Rightarrow \frac{1}{3} \leq P \leq \frac{1}{2}$$

15. A positive acute angle is divided into two parts whose tangents are $\frac{1}{2}$ and $\frac{1}{3}$. Then the angle is

- (A) $\frac{\pi}{4}$ (B) $\frac{\pi}{5}$ (C) $\frac{\pi}{3}$ (D) $\frac{\pi}{6}$

Ans : (A)

Hints : Angle $\theta = \tan^{-1} \frac{1}{2} + \tan^{-1} \frac{1}{3} = \tan^{-1} \left(\frac{\frac{1}{2} + \frac{1}{3}}{1 - \frac{1}{2} \cdot \frac{1}{3}} \right)$

$$= \tan^{-1} \left(\frac{5/6}{5/6} \right) = \tan^{-1}(1) = \pi/4$$

16. If $f(x) = f(a-x)$ then $\int_0^a x f(x) dx$ is equal to

- (A) $\int_0^a f(x) dx$ (B) $\frac{a^2}{2} \int_0^a f(x) dx$ (C) $\frac{a}{2} \int_0^a f(x) dx$ (D) $-\frac{a}{2} \int_0^a f(x) dx$

Ans : (C)

Hints : $f(x) = f(a-x)$, $I = \int_0^a x f(x) dx = \int_0^a (a-x) f(a-x) dx$

$$= \int_0^a (a-x) f(x) dx = a \int_0^a f(x) dx - I$$

$$\therefore 2I = a \int_0^a f(x) dx \Rightarrow I = \frac{a}{2} \int_0^a f(x) dx$$



17. The value of $\int_0^{\infty} \frac{dx}{(x^2+4)(x^2+9)}$ is

- (A) $\frac{\pi}{60}$ (B) $\frac{\pi}{20}$ (C) $\frac{\pi}{40}$ (D) $\frac{\pi}{80}$

Ans : (A)

Hints : $\int_0^{\infty} \frac{dx}{(x^2+4)(x^2+9)} = \int_0^{\pi/2} \frac{\sec^2\theta}{(\tan^2\theta+4)(\tan^2\theta+9)} d\theta$ (putting $x = \tan\theta$)

$$= \frac{1}{5} \int_0^{\pi/2} \frac{\{(9 + \tan^2\theta) - (4 + \tan^2\theta)\} \sec^2\theta}{(\tan^2\theta + 4)(\tan^2\theta + 9)} d\theta$$

$$= \frac{1}{5} \left[\int_0^{\pi/2} \frac{\sec^2\theta}{4 + \tan^2\theta} d\theta - \int_0^{\pi/2} \frac{\sec^2\theta}{9 + \tan^2\theta} d\theta \right]$$

$$= \frac{1}{5} \left[\frac{1}{2} \tan^{-1}\left(\frac{\tan\theta}{2}\right) \Big|_0^{\pi/2} - \frac{1}{3} \tan^{-1}\left(\frac{\tan\theta}{3}\right) \Big|_0^{\pi/2} \right]$$

$$= \frac{1}{5} \left[\frac{1}{2} \cdot \frac{\pi}{2} - \frac{1}{3} \cdot \frac{\pi}{2} \right] = \left(\frac{\pi}{2} \right) \left(\frac{1}{5} \right) \left(\frac{1}{2} - \frac{1}{3} \right) = \frac{\pi}{2} \cdot \frac{1}{5} \cdot \frac{1}{6} = \frac{\pi}{60}$$

18. If $I_1 = \int_0^{\pi/4} \sin^2 x dx$ and $I_2 = \int_0^{\pi/4} \cos^2 x dx$, then,

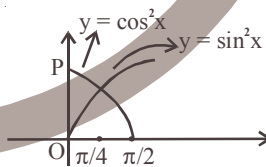
- (A) $I_1 = I_2$ (B) $I_1 < I_2$ (C) $I_1 > I_2$ (D) $I_2 = I_1 + \pi/4$

Ans : (B)

Hints : $I_1 = \int_0^{\pi/4} \sin^2 x dx$; $I_2 = \int_0^{\pi/4} \cos^2 x dx$

In $\left(0, \frac{\pi}{4}\right)$, $\cos^2 x > \sin^2 x \therefore \int_0^{\pi/4} \cos^2 x dx > \int_0^{\pi/4} \sin^2 x dx$

$I_2 > I_1$ i.e. $I_1 < I_2$



19. The second order derivative of a $\sin^3 t$ with respect to a $\cos^3 t$ at $t = \frac{\pi}{4}$ is

- (A) 2 (B) $\frac{1}{12a}$ (C) $\frac{4\sqrt{2}}{3a}$ (D) $\frac{3a}{4\sqrt{2}}$

Ans : (C)

Hints : $y = a \sin^3 t$; $x = a \cos^3 t$

$$\frac{dy}{dt} = 3a \sin^2 t \cos t; \quad \frac{dx}{dt} = -3a \cos^2 t \sin t$$

$$\frac{dy}{dx} = \frac{\frac{dy}{dt}}{\frac{dx}{dt}} = \frac{3a \sin^2 t \cos t}{-3a \cos^2 t \sin t} = -\frac{\sin t}{\cos t} = -\tan t$$



$$\frac{d^2y}{dx^2} = \frac{d}{dx} \left(\frac{dy}{dx} \right) = \frac{d}{dx} (-\tan t) = \frac{d}{dt} (-\tan t) \cdot \frac{dt}{dx}$$

$$= (-\sec^2 t) \frac{1}{-3a \cos^2 t \sin t} = \frac{1}{+3a \cos^4 t \sin t}$$

$$\left. \frac{d^2y}{dx^2} \right|_{t=\pi/4} = \frac{1}{3a \left(\frac{1}{\sqrt{2}} \right)^4 \left(\frac{1}{\sqrt{2}} \right)} = \frac{(\sqrt{2})^5}{3a} = \frac{4\sqrt{2}}{3a}$$

20. The smallest value of $5 \cos \theta + 12$ is
 (A) 5 (B) 12 (C) 7 (D) 17

Ans: (C)

Hints: $5 \cos \theta + 12, -1 \leq \cos \theta \leq 1$

$$\Rightarrow -5 \leq 5 \cos \theta \leq 5$$

$$\therefore 5 \cos \theta + 12 \geq -5 + 12 \Rightarrow 5 \cos \theta + 12 \geq 7$$

21. The general solution of the differential equation $\frac{dy}{dx} = e^{y+x} + e^{y-x}$ is
 (A) $e^{-y} = e^x - e^{-x} + c$ (B) $e^{-y} = e^{-x} - e^x + c$ (C) $e^{-y} = e^x + e^{-x} + c$ (D) $e^y = e^x + e^{-x} + c$
 where c is an arbitrary constant

Ans: (B)

Hints: $e^{-y} dy = (e^x + e^{-x}) dx$ Integrate

$$-e^{-y} = e^x - e^{-x} + c, e^{-y} = e^{-x} - e^x + c$$

22. Product of any r consecutive natural numbers is always divisible by
 (A) $r!$ (B) $(r+4)!$ (C) $(r+1)!$ (D) $(r+2)!$

Ans: (A)

Hints: $(n+1)(n+2) \dots (n+r)$

$$= \frac{(n+r)!}{n!}$$

$$= \frac{(n+r)!}{n! r!} r! = r! \cdot {}^{n+r}C_n$$

23. The integrating factor of the differential equation $x \log x \frac{dy}{dx} + y = 2 \log x$ is given by
 (A) e^x (B) $\log x$ (C) $\log(\log x)$ (D) x

Ans: (B)

Hints: $\frac{dy}{dx} + \frac{1}{x \log x} \cdot y = \frac{2}{x}$

$$\text{If } = e^{\int \frac{1}{x \log x} dx} = e^{\int \frac{1/x}{\log x} dx}$$

$$= e^{\log(\log x)} = \log x$$



24. If $x^2 + y^2 = 1$ then
 (A) $yy'' - (2y')^2 + 1 = 0$ (B) $yy'' + (y')^2 + 1 = 0$ (C) $yy'' - (y')^2 - 1 = 0$ (D) $yy'' + (2y')^2 + 1 = 0$

Ans : (B)

Hints : $2x + 2yy' = 0$

$$x + yy' = 0$$

$$1 + yy'' + (y')^2 = 0$$

25. If $c_0, c_1, c_2, \dots, c_n$ denote the co-efficients in the expansion of $(1+x)^n$ then the value of $c_1 + 2c_2 + 3c_3 + \dots + nc_n$ is
 (A) $n \cdot 2^{n-1}$ (B) $(n+1)2^{n-1}$ (C) $(n+1)2^n$ (D) $(n+2)2^{n-1}$

Ans. (A)

Hints : $(1+x)^n = c_0 + xc_1 + x^2c_2 + \dots + x^nc_n$

$$n(1+x)^{n-1} = c_1 + 2xc_2 + \dots + nx^{n-1}c_n$$

Put $x = 1$

$$n(2)^{n-1} = c_1 + 2c_2 + 3c_3 + \dots + nc_n$$

26. A polygon has 44 diagonals. The number of its sides is
 (A) 10 (B) 11 (C) 12 (D) 13

Ans : (B)

Hints : ${}^nC_2 - n = 44$

$$\frac{n(n-1)}{2} - n = 44$$

$$n\left[\frac{n-1}{2} - 1\right] = 44$$

$$n(n-3) = 88$$

$$n(n-3) = 11 \times 8$$

$$n = 11$$

27. If α, β be the roots of $x^2 - a(x-1) + b = 0$, then the value of $\frac{1}{\alpha^2 - a\alpha} + \frac{1}{\beta^2 - a\beta} + \frac{2}{a+b}$

- (A) $\frac{4}{a+b}$ (B) $\frac{1}{a+b}$ (C) 0 (D) -1

Ans : (C)

Hints : $x^2 - ax = a + 3$ $\alpha\beta = a + b$

$$\alpha + \beta = a$$

$$\alpha^2 - a\alpha = -(a+b)$$

$$\beta^2 - a\alpha = -(a+b)$$

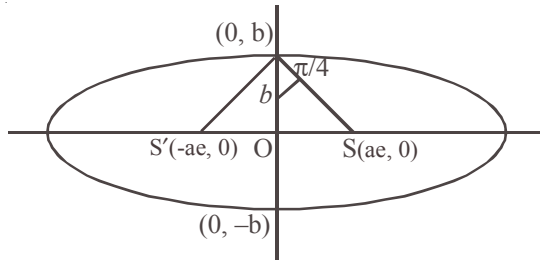
$$-\frac{1}{a+b} - \frac{1}{a+b} + \frac{2}{a+b} = 0$$

28. The angle between the lines joining the foci of an ellipse to one particular extremity of the minor axis is 90° . The eccentricity of the ellipse is

- (A) $\frac{1}{8}$ (B) $\frac{1}{\sqrt{3}}$ (C) $\sqrt{\frac{2}{3}}$ (D) $\sqrt{\frac{1}{2}}$



Ans : (D)
Hints : $\frac{b}{ae} = \tan \frac{\pi}{4}$
 $b = ae \Rightarrow \frac{b}{a} = e$
 $e^2 = 1 - \frac{b^2}{a^2}$
 $e^2 = 1 - e^2$



$$e^2 = \frac{1}{2} \Rightarrow e = \frac{1}{\sqrt{2}}$$

29. The order of the differential equation $\frac{d^2y}{dx^2} = \sqrt{1 - \left(\frac{dy}{dx}\right)^2}$ is
- (A) 3 (B) 2 (C) 1 (D) 4

30. The sum of all real roots of the equation $|x-2|^2 + |x-2| - 2 = 0$
- (A) 7 (B) 4 (C) 1 (D) 5

Ans : (B)
Hints : Put $|x-2| = y$
 $y^2 + y - 2 = 0$
 $(y-1)(y+2) = 0$
 $y = 1$
 $|x-2| = 1$
 $x-2 = \pm 1$
 $x = 2 \pm 1$
 $x = 3, 1$
 Sum = 4

$y = -2$
 (Not possible)

31. If $\int_{-1}^4 f(x) dx = 4$ and $\int_2^4 \{3 - f(x)\} dx = 7$ then the value of $\int_{-1}^2 f(x) dx$
- (A) -2 (B) 3 (C) 4 (D) 5

Ans : (D)
Hints : $\int_{-1}^4 f(x) dx = 4$

$$3(4-2) - \int_2^4 f(x) dx = 7$$

$$\int_2^4 f(x) dx = -1$$

$$\int_{-1}^2 f(x) dx = \int_{-1}^4 f(x) dx - \int_2^4 f(x) dx = 4 - (-1) = 5$$



32. For each $n \in \mathbb{N}$, $2^{3n} - 1$ is divisible by
 (A) 7 (B) 8 (C) 6 (D) 16

where \mathbb{N} is a set of natural numbers

Ans: (A)

Hints: $2^{3n} = (8)^n = (1+7)^n = 1 + {}^nC_1 7 + {}^nC_2 7^2 + \dots + {}^nC_n 7^n$
 $2^{3n} - 1 = 7[{}^nC_1 + {}^nC_2 7 + \dots]$

33. The Rolle's theorem is applicable in the interval $-1 \leq x \leq 1$ for the function
 (A) $f(x) = x$ (B) $f(x) = x^2$ (C) $f(x) = 2x^3 + 3$ (D) $f(x) = |x|$

Ans: (B)

Hints: $f(x) = x^2$ and $f(1) = f(-1)$ for $f(x) = |x|$ but at $x = 0$, $f(x) = |x|$ is not differentiable hence (B) is the correct option.

$$f(1) = 1 = f(-1)$$

34. The distance covered by a particle in t seconds is given by $x = 3 + 8t - 4t^2$. After 1 second velocity will be
 (A) 0 unit/second (B) 3 units/second (C) 4 units/second (D) 7 units/second

Ans: (A)

Hints: $v = \frac{dx}{dt} = 8 - 8t$

$$t = 1, v = 8 - 8 = 0$$

35. If the co-efficients of x^2 and x^3 in the expansion of $(3 + ax)^9$ be same, then the value of 'a' is

- (A) $\frac{3}{7}$ (B) $\frac{7}{3}$ (C) $\frac{7}{9}$ (D) $\frac{9}{7}$

Ans: (D)

Hints: $(3 + ax)^9 = {}^9C_0 3^9 + {}^9C_1 3^8(ax) + {}^9C_2 3^7(ax)^2 + {}^9C_3 3^6(ax)^3 + \dots$
 ${}^9C_2 3^7 a^2 = {}^9C_3 3^6 a^3$

$$\frac{9}{7} = a$$

36. The value of $\left(\frac{1}{\log_3 12} + \frac{1}{\log_4 12} \right)$ is
 (A) 0 (B) $\frac{1}{2}$ (C) 1 (D) 2

Ans: (C)

Hints: $\log_{12} 3 + \log_{12} 4 = \log_{12} 12 = 1$

37. If $x = \log_a bc$, $y = \log_b ca$, $z = \log_c ab$, then the value of $\frac{1}{1+x} + \frac{1}{1+y} + \frac{1}{1+z}$ will be

- (A) $x+y+z$ (B) 1 (C) $ab+bc+ca$ (D) abc

Ans: (B)

Hints: $1+x = \log_a a + \log_a bc = \log_a abc$

$$\frac{1}{1+x} = \log_{abc} a, \text{ Similarly } \frac{1}{1+y} = \log_{abc} b$$

$$\frac{1}{1+z} = \log_{abc} c, \text{ Ans.} = \log_{(abc)} abc = 1$$



38. Using binomial theorem, the value of $(0.999)^3$ correct to 3 decimal places is
 (A) 0.999 (B) 0.998 (C) 0.997 (D) 0.995

Ans : (C)

Hints : ${}^3C_0 - {}^3C_1(.001) + {}^3C_2(.001)^2 - {}^3C_3(.001)^3$
 $= 1 - .003 + 3(.000001) - (.000000001) = 0.997$

39. If the rate of increase of the radius of a circle is 5 cm/.sec., then the rate of increase of its area, when the radius is 20 cm, will be
 (A) 10π (B) 20π (C) 200π (D) 400π

Ans : (C)

Hints : $A = \pi r^2$ $\frac{dr}{dt} = 5$

$\frac{dA}{dt} = 2\pi r \frac{dr}{dt} = 2\pi \cdot 20(5)$
 $= 200\pi$

40. The quadratic equation whose roots are three times the roots of $3ax^2 + 3bx + c = 0$ is
 (A) $ax^2 + 3bx + 3c = 0$ (B) $ax^2 + 3bx + c = 0$ (C) $9ax^2 + 9bx + c = 0$ (D) $ax^2 + bx + 3c = 0$

Ans : (A)

Hints : $3a\alpha^2 + 3b\alpha + c = 0$

$x = 3\alpha \Rightarrow \alpha = \frac{x}{3}$

$3a \frac{x^2}{9} + 3b \cdot \frac{x}{3} + c = 0$

$ax^2 + 3bx + 3c = 0$

41. Angle between $y^2 = x$ and $x^2 = y$ at the origin is

- (A) $2\tan^{-1}\left(\frac{3}{4}\right)$ (B) $\tan^{-1}\left(\frac{4}{3}\right)$ (C) $\frac{\pi}{2}$ (D) $\frac{\pi}{4}$

Ans : (C)

Hins : Angle between axes (since co-ordinate axes are the tangents for the given curve).



42. In triangle ABC, $a = 2$, $b = 3$ and $\sin A = \frac{2}{3}$, then B is equal to
 (A) 30° (B) 60° (C) 90° (D) 120°

Ans : (C)

Hints : $\frac{a}{\sin A} = \frac{b}{\sin B}$

$\sin B = \frac{b}{a} \cdot \sin A = \frac{3}{2} \cdot \frac{2}{3} = 1$

$B = \frac{\pi}{2}$



43. $\int_0^{1000} e^{x-[x]}$ is equal to

- (A) $\frac{e^{1000} - 1}{e - 1}$ (B) $\frac{e^{1000} - 1}{1000}$ (C) $\frac{e - 1}{1000}$ (D) $1000(e - 1)$

Ans: (D)

Hints: $I = 1000 \int_0^1 e^{x-[x]}$

$= 1000 \int_0^1 e^x dx = 1000(e^x)_0^1 = 1000(e - 1)$

Period of function is 1

44. The coefficient of x^n , where n is any positive integer, in the expansion of $(1 + 2x + 3x^2 + \dots \infty)^{1/2}$ is

- (A) 1 (B) $\frac{n+1}{2}$ (C) $2n+1$ (D) $n+1$

Ans: (A)

Hints: $s = 1 + 2x + 3x^2 + \dots \infty$
 $xs = x + 2x^2 + \dots \infty$
 $s(1-x) = 1 + x + x^2 + \dots \infty$

$s = \frac{1}{(1-x)^2}$

$f(x) = \frac{1}{1-x}$, $f(x) = (1-x)^{-1} = 1 + x + x^2 + x^3 + \dots \infty = 1$

45. The circles $x^2 + y^2 - 10x + 16 = 0$ and $x^2 + y^2 = a^2$ intersect at two distinct points if

- (A) $a < 2$ (B) $2 < a < 8$ (C) $a > 8$ (D) $a = 2$

Ans. (B)

Hints: $C_1(5, 0)$ $r_1 = \sqrt{25 - 16} = 3$

$C_2(0, 0)$ $r_2 = a$

$r_1 \& r_2 < C_1C_2 < r_1 + r_2$

$|a - 3| < \sqrt{25} < a + 3$

$|a - 3| < 5 < a + 3$

$-5 < a - 3 < 5$ $2 < a$

$-2 < a < 8$

$2 < a < 8$



46. $\int \frac{\sin^{-1} x}{\sqrt{1-x^2}} dx$ is equal to

- (A) $\log(\sin^{-1} x) + c$ (B) $\frac{1}{2}(\sin^{-1} x)^2 + c$ (C) $\log(\sqrt{1-x^2}) + c$ (D) $\sin(\cos^{-1} x) + c$

where c is an arbitrary constant

Ans : (B)

Hints : $I = \int t dt$

$$\sin^{-1} x = t$$

$$= \frac{1}{2} t^2 + c$$

$$\frac{1}{\sqrt{1-x^2}} dx = dt$$

$$= \frac{1}{2} (\sin^{-1} x)^2 + c$$

47. The number of points on the line $x + y = 4$ which are unit distance apart from the line $2x + 2y = 5$ is

- (A) 0 (B) 1 (C) 2 (D) Infinity

Ans : (A)

Hints : $x + y = 4$

$$x + y = \frac{5}{2}$$

$$PQ = \frac{4 - \frac{5}{2}}{\sqrt{2}} = \frac{3}{2\sqrt{2}} = \frac{3\sqrt{2}}{4}$$

48. Simplest form of $\frac{2}{\sqrt{2 + \sqrt{2 + \sqrt{2 + 2 \cos 4x}}}}$ is

- (A) $\sec \frac{x}{2}$ (B) $\sec x$ (C) $\operatorname{cosec} x$ (D) 1

Ans : (A)

Hints : $\frac{2}{\sqrt{2 + \sqrt{2 + \sqrt{2 + 2 \cos^2 2x}}}} = \frac{2}{\sqrt{2 + \sqrt{2 + 2 \cos 2x}}} = \frac{2}{\sqrt{2 + \sqrt{2 \cdot 2 \cos^2 x}}}$

$$= \frac{2}{\sqrt{2 + 2 \cos x}} = \frac{2}{2 \cos \frac{x}{2}} = \sec \frac{x}{2}$$

49. If $y = \tan^{-1} \sqrt{\frac{1 - \sin x}{1 + \sin x}}$, then the value of $\frac{dy}{dx}$ at $x = \frac{\pi}{6}$ is

- (A) $-\frac{1}{2}$ (B) $\frac{1}{2}$ (C) 1 (D) -1

Ans : (A)



Hints: $y = \tan^{-1} \sqrt{\frac{1 - \cos\left(\frac{\pi}{2} - x\right)}{1 + \cos\left(\frac{\pi}{2} - x\right)}}$

$$= \tan^{-1} \sqrt{\frac{2 \sin^2\left(\frac{\pi - x}{4}\right)}{2 \cos^2\left(\frac{\pi - x}{4}\right)}} = \tan^{-1} \left| \tan\left(\frac{\pi - x}{4}\right) \right| = \left(\frac{\pi - x}{4}\right)$$

$$\frac{dy}{dx} = -\frac{1}{2}$$

50. If three positive real numbers a, b, c are in A.P. and $abc = 4$ then minimum possible value of b is
 (A) $2^{\frac{3}{2}}$ (B) $2^{\frac{2}{3}}$ (C) $2^{\frac{1}{3}}$ (D) $2^{\frac{5}{2}}$

Ans: (B)

Hints: $(b - d) b (b + d) = 4$

$$(b^2 - d^2) b = 4$$

$$b^3 = 4 + d^2 b$$

$$b^3 \geq 4 \Rightarrow b \geq (2)^{\frac{2}{3}}$$

51. If $5 \cos 2\theta + 2 \cos^2 \frac{\theta}{2} + 1 = 0$, when $(0 < \theta < \pi)$, then the values of θ are :

- (A) $\frac{\pi}{3} \pm \pi$ (B) $\frac{\pi}{3}, \cos^{-1}\left(\frac{3}{5}\right)$ (C) $\cos^{-1}\left(\frac{3}{5}\right) \pm \pi$ (D) $\frac{\pi}{3}, \pi - \cos^{-1}\left(\frac{3}{5}\right)$

Ans: (D)

Hints: $5 \cos 2\theta + 1 + \cos \theta + 1 = 0$

$$5(2 \cos^2 \theta - 1) + \cos \theta + 2 = 0$$

$$10 \cos^2 \theta + \cos \theta - 3 = 0$$

$$(5 \cos \theta + 3)(2 \cos \theta - 1) = 0$$

$$\cos \theta = \frac{1}{2}$$

$$\theta = \frac{\pi}{3}$$

$$\begin{aligned} \cos \theta &= -\frac{3}{5} \\ \theta &= \cos^{-1}\left(-\frac{3}{5}\right) \\ &= \pi - \cos^{-1}\left(\frac{3}{5}\right) \end{aligned}$$

52. For any complex number z , the minimum value of $|z| + |z - 1|$ is
 (A) 0 (B) 1 (C) 2 (D) -1

Ans: (B)

Hints: $1 = |z - (z - 1)|$

$$1 \leq |z| + |z - 1|$$



53. For the two circles $x^2 + y^2 = 16$ and $x^2 + y^2 - 2y = 0$ there is / are
 (A) one pair of common tangents (B) only one common tangent
 (C) three common tangents (D) no common tangent

Ans : (D)

Hints : $C_1(0, 0)$ $r_1 = 4$
 $C_2(0, 1)$ $r_2 = \sqrt{0+1} = 1$
 $C_1C_2 = \sqrt{0+1} = 1$
 $r_1 - r_2 = 3$
 $C_1C_2 < r_1 - r_2$

54. If C is a point on the line segment joining A(-3, 4) and B(2, 1) such that $AC = 2BC$, then the coordinate of C is

- (A) $(\frac{1}{3}, 2)$ (B) $(2, \frac{1}{3})$ (C) (2, 7) (D) (7, 2)

Ans : (A)

Hints :



$$C\left(\frac{4-3}{3}, \frac{2+4}{3}\right)$$

$$C\left(\frac{1}{3}, 2\right)$$

55. If a, b, c are real, then both the roots of the equation $(x-b)(x-c) + (x-c)(x-a) + (x-a)(x-b) = 0$ are always
 (A) positive (B) negative (C) real (D) imaginary

Ans : (C)

Hints : $3x^2 - 2x(a+b+c) + ab+bc+ca = 0$

$$\begin{aligned}
 D &= 4(a+b+c)^2 - 4 \cdot 3(ab+bc+ca) \\
 &= 4(a^2+b^2+c^2 - ab - bc - ca) \\
 &= 2[(a-b)^2 + (b-c)^2 + (c-a)^2] \\
 &= [(a-b)^2 + (b-c)^2 + (c-a)^2] \\
 &\geq 0
 \end{aligned}$$

56. The sum of the infinite series $1 + \frac{1}{2!} + \frac{1 \cdot 3}{4!} + \frac{1 \cdot 3 \cdot 5}{6!} + \dots$ is

- (A) e (B) e^2 (C) \sqrt{e} (D) $\frac{1}{e}$

Ans : (C)

Hints : $T_n = \frac{1 \cdot 3 \cdot 5 \dots (2n-1)}{2n}$



$$= \frac{2n}{2n(2.4...2n)}$$

$$= \frac{2n}{2^n n!}$$

$$= \frac{x^n}{n!} \quad \frac{1}{2} = x$$

$$\therefore \frac{x}{1} + \frac{x^2}{2} + \dots = e^x - 1$$

$$\exp = 1 + e^x - 1 = e^x = e^{1/2}$$

57. The point $(-4, 5)$ is the vertex of a square and one of its diagonals is $7x - y + 8 = 0$. The equation of the other diagonal is
 (A) $7x - y + 23 = 0$ (B) $7y + x = 30$ (C) $7y + x = 31$ (D) $x - 7y = 30$

Ans : (C)

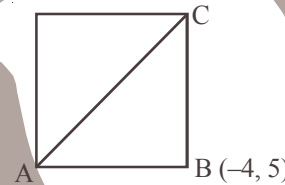
Hints : $x + 7y = k$

$$-4 + 35 = k$$

$$31 = k$$

$$x + 7y - 31 = 0$$

.....(1)



58. The domain of definition of the function $f(x) = \sqrt{1 + \log_e(1-x)}$ is

(A) $-\infty < x \leq 0$

(B) $-\infty < x \leq \frac{e-1}{e}$

(C) $-\infty < x \leq 1$

(D) $x \geq 1 - e$

Ans : (B)

Hints : $1 - x > 0 \Rightarrow x < 1$

$$1 + \log_e(1-x) \geq 0$$

$$\log_e(1-x) \geq -1 \Rightarrow 1-x \geq e^{-1}$$

$$x \leq 1 - \frac{1}{e}$$

$$x \leq \frac{e-1}{e}$$

59. For what value of m , $\frac{a^{m+1} + b^{m+1}}{a^m + b^m}$ is the arithmetic mean of 'a' and 'b'?

(A) 1

(B) 0

(C) 2

(D) None

Ans : (B)

Hints : $\frac{a^{m+1} + b^{m+1}}{a^m + b^m} = \frac{a+b}{2}$

$m = 0$ Satisfy.



60. The value of the limit $\lim_{x \rightarrow 1} \frac{\sin(e^{x-1} - 1)}{\log x}$ is

- (A) 0 (B) e (C) $\frac{1}{e}$ (D) 1

Ans: (D)

Hints: $\lim_{h \rightarrow 0} \frac{\sin(e^h - 1)}{\log(1+h)}$ Put $x = 1+h$

$$\begin{aligned}
 &= \lim_{h \rightarrow 0} \frac{\sin(e^h - 1)}{(e^h - 1)} \cdot \frac{(e^h - 1)}{\log(1+h)} \\
 &= \lim_{h \rightarrow 0} \frac{\sin(e^h - 1)}{(e^h - 1)} \cdot \frac{(e^h - 1)}{h} \cdot \frac{h}{\log(1+h)} \\
 &= 1 \cdot 1 \cdot 1 \\
 &= 1
 \end{aligned}$$

61. Let $f(x) = \frac{\sqrt{x+3}}{x+1}$ then the value of $\lim_{x \rightarrow -3-0} f(x)$ is

- (A) 0 (B) does not exist (C) $\frac{1}{2}$ (D) $-\frac{1}{2}$

Ans: (B)

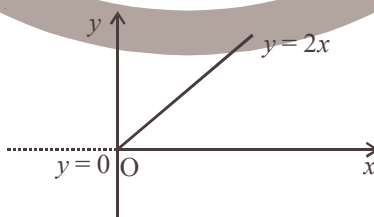
Hints: Because on left hand side of 3 function is not defined.

62. $f(x) = x + |x|$ is continuous for

- (A) $x \in (-\infty, \infty)$ (B) $x \in (-\infty, \infty) - \{0\}$ (C) only $x > 0$ (D) no value of x

Ans: (A)

Hints: $f(x) = \begin{cases} 2x; & x \geq 0 \\ 0; & x < 0 \end{cases}$



63. $\tan\left[\frac{\pi}{4} + \frac{1}{2} \cos^{-1}\left(\frac{a}{b}\right)\right] + \tan\left[\frac{\pi}{4} - \frac{1}{2} \cos^{-1}\left(\frac{a}{b}\right)\right]$ is equal to

- (A) $\frac{2a}{b}$ (B) $\frac{2b}{a}$ (C) $\frac{a}{b}$ (D) $\frac{b}{a}$

Ans: (B)

Hints: Let $\frac{1}{2} \cos^{-1}\left(\frac{a}{b}\right) = \theta$, then $\cos 2\theta = \frac{a}{b}$



$$\tan\left[\frac{\pi}{4} + \frac{1}{2}\cos^{-1}\left(\frac{a}{b}\right)\right] + \tan\left[\frac{\pi}{4} - \frac{1}{2}\cos^{-1}\left(\frac{a}{b}\right)\right]$$

$$= \tan\left(\frac{\pi}{4} + \theta\right) + \tan\left(\frac{\pi}{4} - \theta\right) = 2\left(\frac{1 + \tan^2 \theta}{1 - \tan^2 \theta}\right) = \frac{2}{\cos 2\theta} = \frac{2}{a/b} = \frac{2b}{a}$$

64. If $i = \sqrt{-1}$ and n is a positive integer, then $i^n + i^{n+1} + i^{n+2} + i^{n+3}$ is equal to
 (A) 1 (B) i (C) i^n (D) 0

Ans : (D)

Hints : $i^n(1+i+i^2+i^3) = i^n(1+i-1-i) = 0$

65. $\int \frac{dx}{x(x+1)}$ equals

(A) $\ln\left|\frac{x+1}{x}\right| + c$ (B) $\ln\left|\frac{x}{x+1}\right| + c$ (C) $\ln\left|\frac{x-1}{x}\right| + c$ (D) $\ln\left|\frac{x-1}{x+1}\right| + c$

where c is an arbitrary constant.

Ans : (B)

Hints : $\int \frac{dx}{x(x+1)} = \int \left(\frac{1}{x} - \frac{1}{x+1}\right) dx = \int \frac{dx}{x} - \int \frac{dx}{x+1} = \ln|x| - \ln|x+1| + C = \ln\left|\frac{x}{x+1}\right| + C$

66. If a, b, c are in G.P. ($a > 1, b > 1, c > 1$), then for any real number x (with $x > 0, x \neq 1$), $\log_a x, \log_b x, \log_c x$ are in
 (A) G.P. (B) A.P. (C) H.P. (D) G.P. but not in H.P.

Ans : (C)

Hints : a, b, c are in G.P.

$$\Rightarrow \log_x a, \log_x b, \log_x c \text{ are in A.P.}$$

$$\Rightarrow \frac{1}{\log_x a}, \frac{1}{\log_x b}, \frac{1}{\log_x c} \text{ are in H.P.}$$

$$\Rightarrow \log_a x, \log_b x, \log_c x \text{ are in H.P.}$$

67. A line through the point A (2, 0) which makes an angle of 30° with the positive direction of x -axis is rotated about A in clockwise direction through an angle 15° . Then the equation of the straight line in the new position is

(A) $(2 - \sqrt{3})x + y - 4 + 2\sqrt{3} = 0$ (B) $(2 - \sqrt{3})x - y - 4 + 2\sqrt{3} = 0$
 (C) $(2 - \sqrt{3})x - y + 4 + 2\sqrt{3} = 0$ (D) $(2 - \sqrt{3})x + y + 4 + 2\sqrt{3} = 0$

Ans : (B)

Hints : Equation of line in new position :

$$y - 0 = \tan 15^\circ (x - 2)$$

$$\Rightarrow y = \left(\frac{\sqrt{3}-1}{\sqrt{3}+1}\right)(x-2)$$

$$\Rightarrow y = \frac{(\sqrt{3}-1)^2}{2}(x-2)$$



$$\Rightarrow 2y = (4 - 2\sqrt{3})(x - 2)$$

$$\Rightarrow y = (2 - \sqrt{3})(x - 2)$$

$$\Rightarrow (2 - \sqrt{3})x - y - 4 + 2\sqrt{3} = 0$$

68. The equation $\sqrt{3} \sin x + \cos x = 4$ has
 (A) only one solution (B) two solutions (C) infinitely many solutions (D) no solution

Ans : (D)

Hints : $\sqrt{3} \sin x + \cos x = 2 \sin\left(x + \frac{\pi}{6}\right) \leq 2$. Therefore

$\sqrt{3} \sin x + \cos x = 4$ cannot have a solution

69. The slope at any point of a curve $y = f(x)$ is given by $\frac{dy}{dx} = 3x^2$ and it passes through $(-1, 1)$. The equation of the curve is
 (A) $y = x^3 + 2$ (B) $y = -x^3 - 2$ (C) $y = 3x^3 + 4$ (D) $y = -x^3 + 2$

Ans : (A)

Hints : $\frac{dy}{dx} = 3x^2 \Rightarrow \int dy = \int 3x^2 dx \Rightarrow y = x^3 + C$

Curve passes through $(-1, 1)$. Hence $1 = -1 + C \Rightarrow C = 2$

$\therefore y = x^3 + 2$

70. The modulus of $\frac{1-i}{3+i} + \frac{4i}{5}$ is
 (A) $\sqrt{5}$ unit (B) $\frac{\sqrt{11}}{5}$ unit (C) $\frac{\sqrt{5}}{5}$ unit (D) $\frac{\sqrt{12}}{5}$ unit

Ans : (C)

Hints : $\frac{1-i}{3+i} + \frac{4i}{5} = \frac{5-5i+4i(3+i)}{5(3+i)} = \frac{5-5i+12i-4}{5(3+i)} = \frac{1+7i}{5(3+i)} = \frac{(1+7i)(3-i)}{5(9+1)}$

$$= \frac{3+21i-i+7}{5 \times 10} = \frac{10+20i}{5 \times 10} = \frac{1+2i}{5}$$

\therefore Modulus $= \sqrt{\left(\frac{1}{5}\right)^2 + \left(\frac{2}{5}\right)^2} = \sqrt{\frac{1}{25} + \frac{4}{25}} = \sqrt{\frac{5}{25}} = \frac{\sqrt{5}}{5}$ unit

71. The equation of the tangent to the conic $x^2 - y^2 - 8x + 2y + 11 = 0$ at $(2, 1)$ is
 (A) $x + 2 = 0$ (B) $2x + 1 = 0$ (C) $x + y + 1 = 0$ (D) $x - 2 = 0$

Ans : (D)

Hints : Equation of tangent at (x_1, y_1) is

$$xx_1 - yy_1 - 4(x + x_1) + (y + y_1) + 11 = 0$$

$$x_1 = 2; y_1 = 1$$

\therefore Equation of tangent is

$$2x - y - 4(x + 2) + (y + 1) + 11 = 0$$

or $-2x - 8 + 12 = 0$



or $-2x + 4 = 0$
 or $2x = 4$
 or $x = 2$
 or $x - 2 = 0$

72. A and B are two independent events such that $P(A \cup B') = 0.8$ and $P(A) = 0.3$. The $P(B)$ is

- (A) $\frac{2}{7}$ (B) $\frac{2}{3}$ (C) $\frac{3}{8}$ (D) $\frac{1}{8}$

Ans : (A)

Hints : Let $P(B) = x$

$$P(A \cup B') = P(A) + P(B') - P(A \cap B') = 0.3 + (1 - x) - 0.3(1 - x)$$

or $0.8 = 1 - x + 0.3x$

or $1 - 0.7x = 0.8$

or $0.7x = 0.2$

or $x = \frac{2}{7}$

73. The total number of tangents through the point (3, 5) that can be drawn to the ellipses $3x^2 + 5y^2 = 32$ and $25x^2 + 9y^2 = 450$ is

- (A) 0 (B) 2 (C) 3 (D) 4

Ans : (C)

Hints : (3, 5) lies outside the ellipse $3x^2 + 5y^2 = 32$ and on the ellipse $25x^2 + 9y^2 = 450$. Therefore there will be 2 tangents for the first ellipse and one tangent for the second ellipse.

74. The value of $\lim_{n \rightarrow \infty} \left[\frac{n}{n^2 + 1^2} + \frac{n}{n^2 + 2^2} + \dots + \frac{n}{n^2 + n^2} \right]$ is

- (A) $\frac{\pi}{4}$ (B) $\log 2$ (C) zero (D) 1

Ans : (A)

Hints : $\lim_{n \rightarrow \infty} \left[\frac{n}{n^2 + 1^2} + \frac{n}{n^2 + 2^2} + \dots + \frac{n}{n^2 + n^2} \right]$

$$= \lim_{n \rightarrow \infty} \sum_{r=1}^n \frac{n}{n^2 + r^2} = \lim_{n \rightarrow \infty} \frac{1}{n} \sum_{r=1}^n \frac{1}{1 + \left(\frac{r}{n}\right)^2} = \int_0^1 \frac{dx}{1 + x^2} = \left[\tan^{-1} x \right]_0^1 = \frac{\pi}{4}$$

75. A particle is moving in a straight line. At time t , the distance between the particle from its starting point is given by $x = t - 6t^2 + t^3$. Its acceleration will be zero at

- (A) $t = 1$ unit time (B) $t = 2$ unit time (C) $t = 3$ unit time (D) $t = 4$ unit time

Ans : (B)

Hints : $x = t - 6t^2 + t^3$ $\frac{dx}{dt} = 1 - 12t + 3t^2$

$$\frac{d^2x}{dt^2} = -12 + 6t$$

Acceleration = $\frac{d^2x}{dt^2}$

\therefore Acceleration = 0 $\Rightarrow 6t - 12 = 0 \Rightarrow t = 2$



76. Three numbers are chosen at random from 1 to 20. The probability that they are consecutive is

- (A) $\frac{1}{190}$ (B) $\frac{1}{120}$ (C) $\frac{3}{190}$ (D) $\frac{5}{190}$

Ans : (C)

Hints : Total number of cases ; ${}^{20}C_3 = \frac{20 \times 19 \times 18}{2 \times 3} = 20 \times 19 \times 3 = 1140$

Total number of favourable cases = 18

\therefore Required probability = $\frac{18}{1140} = \frac{3}{190}$

77. The co-ordinates of the foot of the perpendicular from (0, 0) upon the line $x + y = 2$ are

- (A) (2, -1) (B) (-2, 1) (C) (1, 1) (D) (1, 2)

Ans : (C)

Hints : Let P be the foot of the perpendicular. P lies on a line perpendicular to $x + y = 2$.

\therefore Equation of the line on which P lies is of the form : $x - y + k = 0$

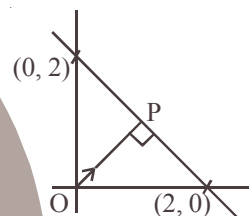
But this line passes through (0, 0).

$\therefore k = 0$

Hence, co-ordinates of P may be obtained by solving $x + y = 2$ and $y = x$

$\therefore x = 1, y = 1$

Hence, $P \equiv (1, 1)$



78. If A is a square matrix then,

- (A) $A + A^T$ is symmetric (B) AA^T is skew - symmetric (C) $A^T + A$ is skew-symmetric (D) $A^T A$ is skew symmetric

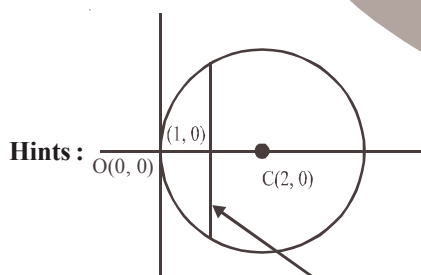
Ans : (A)

Hints : $(A + A^T)^T = A^T + (A^T)^T = A^T + A = A + A^T$

79. The equation of the chord of the circle $x^2 + y^2 - 4x = 0$ whose mid point is (1, 0) is

- (A) $y = 2$ (B) $y = 1$ (C) $x = 2$ (D) $x = 1$

Ans : (D)



Chord with mid-point (1, 0)

Equation : $x = 1$

80. If $A^2 - A + I = 0$, then the inverse of the matrix A is

- (A) $A - I$ (B) $I - A$ (C) $A + I$ (D) A

Ans : (B)

Hints : $A^2 - A + I = 0 \Rightarrow A^2 = A - I \Rightarrow A^2 \cdot A^{-1} = A \cdot A^{-1} - A^{-1} \Rightarrow A = I - A^{-1} \Rightarrow A^{-1} = I - A$



MATHEMATICS

SECTION-II

1. A train moving with constant acceleration takes t seconds to pass a certain fixed point and the front and back end of the train pass the fixed point with velocities u and v respectively. Show that the length of the train is $\frac{1}{2}(u+v)t$.

A. $v = u + at$ $a = \frac{v-u}{t}$

$$v^2 = u^2 + 2aS$$

$$\frac{v^2 - u^2}{2a} = S \Rightarrow S = \frac{(v+u)(v-u)}{2a} = \frac{at(v+u)}{2a} = \frac{u+v}{2}t$$

2. Show that

$$\frac{\sin \theta}{\cos 3\theta} + \frac{\sin 3\theta}{\cos 9\theta} + \frac{\sin 9\theta}{\cos 27\theta} = \frac{1}{2}(\tan 27\theta - \tan \theta)$$

A. $T_1 = \frac{2 \sin \theta}{2 \cos 3\theta} \cdot \frac{\cos \theta}{\cos \theta} = \frac{\sin 2\theta}{2 \cdot \cos 3\theta \cdot \cos \theta}$

$$= \frac{1}{2} \cdot \frac{\sin(3\theta - \theta)}{\cos 3\theta \cdot \cos \theta}$$

$$T_1 = \frac{1}{2}(\tan 3\theta - \tan \theta)$$

$$T_2 = \frac{1}{2}(\tan 9\theta - \tan 3\theta)$$

$$T_3 = \frac{1}{2}(\tan 27\theta - \tan 9\theta)$$

$$T_1 + T_2 + T_3 = \frac{1}{2}(\tan 27\theta - \tan \theta)$$

3. If $x = \sin t$, $y = \sin 2t$, prove that

$$(1-x^2) \frac{d^2y}{dx^2} - x \frac{dy}{dx} + 4y = 0$$

A. $y = \sin(2 \sin^{-1} x)$

$$\frac{dy}{dx} = \cos(2 \sin^{-1} x) \cdot \frac{2}{\sqrt{1-x^2}}$$

$$\sqrt{1-x^2} \frac{dy}{dx} = 2 \cos(2 \sin^{-1} x)$$



$$(1-x^2)\left(\frac{dy}{dx}\right)^2 = 4 \cdot \cos^2(2 \sin^{-1} x) = 4[1 - \sin^2(2 \sin^{-1} x)]$$

$$(1-x^2)\left(\frac{dy}{dx}\right)^2 = 4[1-y^2]$$

Again differentiate

$$(1-x^2)2 \cdot \frac{dy}{dx} \cdot \frac{d^2y}{dx^2} + \left(\frac{dy}{dx}\right)^2 (-2x) = -8y \frac{dy}{dx}$$

Divide by $2 \frac{dy}{dx}$

$$(1-x^2) \frac{d^2y}{dx^2} - x \frac{dy}{dx} + 4y = 0$$

4. Show that, for a positive integer n , the coefficient of x^k ($0 \leq k \leq n$) in the expansion of $1 + (1+x) + (1+x)^2 + \dots + (1+x)^n$ is ${}^{n+1}C_{n-k}$.

A.
$$S = \frac{1 - (1+x)^{n+1}}{1 - (1+x)} = \frac{(1+x)^{n+1} - 1}{x}$$

Coefficient of x^k in $\frac{(1+x)^{n+1} - 1}{x} =$ Coefficient of x^{k+1} in $(1+x)^{n+1} = {}^{n+1}C_{k+1} = {}^{n+1}C_{n-k}$

5. If m, n be integers, then find the value of $\int_{-\pi}^{\pi} (\cos mx - \sin nx)^2 dx$

A.
$$I = \int_{-\pi}^{\pi} (\cos^2 mx + \sin^2 nx - 2 \sin nx \cdot \cos mx) dx$$

$$= \int_{-\pi}^{\pi} \cos^2 mx \cdot dx + \int_{-\pi}^{\pi} \sin^2 nx \cdot dx - 2 \int_{-\pi}^{\pi} \sin nx \cdot \cos mx \cdot dx$$

$$= 2 \int_0^{\pi} \cos^2 mx \cdot dx + 2 \int_0^{\pi} \sin^2 nx \cdot dx - 0 \quad (\text{Odd } \dots)$$

$$= 2 \int_0^{\pi} (1 + \cos 2mx) dx + \int_0^{\pi} (1 - \cos 2nx) dx$$

$$= \pi + \frac{1}{2m} (\sin 2mx)_0^{\pi} + \pi - \frac{1}{2n} (\sin 2nx)_0^{\pi}$$

$$= \pi + \pi + \frac{1}{2m} (0-0) - \frac{1}{2n} (0-0)$$

$$= 2\pi$$



6. Find the angle subtended by the double ordinate of length $2a$ of the parabola $y^2 = ax$ at its vertex.

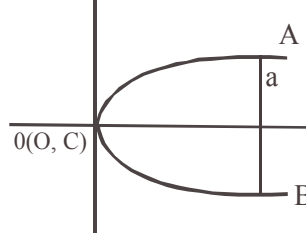
A. $y^2 = ax, a^2 = ax, a = x$ [put $y = a$]

$A(a, a), B(a, -a)$

Slope $OA = \frac{a}{a} = 1$

Slope of $OB = \frac{-a}{a} = -1$

Ans. $= \frac{\pi}{2}$



7. If f is differentiable at $x = a$, find the value of

$$\lim_{x \rightarrow a} \frac{x^2 f(a) - a^2 f(x)}{x - a}$$

A. $\lim_{x \rightarrow a} \frac{x^2 f(a) - a^2 f(x)}{x - a}, \frac{0}{0}$ form by LH

$$= \lim_{x \rightarrow a} \frac{2x f(a) - a^2 f'(x)}{1}$$

$$= 2af(a) - a^2 f'(a)$$

8. Find the values of 'a' for which the expression $x^2 - (3a - 1)x + 2a^2 + 2a - 11$ is always positive.

A. $x^2 - (3a - 1)x + 2a^2 + 2a - 11 > 0$

$D < 0$

$$(3a - 1)^2 - 4(2a^2 + 2a - 11) < 0$$

$$9a^2 - 6a + 1 - 8a^2 - 8a + 44 < 0$$

$$a^2 - 14a + 45 < 0$$

$$(a - 9)(a - 5) < 0$$

$$5 < a < 9$$

9. Find the sum of the first n terms of the series $0.2 + 0.22 + 0.222 + \dots$

A. $S = \frac{2}{9}[0.9 + 0.99 + 0.999 + \dots]$

$$= \frac{2}{9}[(1 - 0.1) + (1 - 0.01) + (1 - 0.001) + \dots]$$

$$= \frac{2}{9}[n - (0.1 + 0.01 + \dots + n \text{ terms})]$$



$$= \frac{2}{9}n - \frac{2(0.1)[1 - (0.1)^n]}{9[1 - (0.1)]}$$

$$\frac{2}{9}n - \frac{2(0.1)}{9(0.9)}[1 - (0.1)^n]$$

$$\frac{2}{9}n - \frac{2}{81} + \frac{2}{81}(0.1)^n$$

10. The equation to the pairs of opposite sides of a parallelogram are $x^2 - 5x + 6 = 0$ and $y^2 - 6y + 5$. Find the equations of its diagonals.

A. $x = 2$ (i)

$x = 3$ (ii)

$y = 1$ (iii)

$y = 5$ (iv)

A(2, 1), B(3, 1), C(3, 5), D(2, 5)

Equation of AC

$$\frac{x-2}{3-2} = \frac{y-1}{5-1}, \quad x-2 = \frac{y-1}{4}$$

$$4x - 8 = y - 1, \quad 4x - y - 7 = 0$$

Equation of BD $\frac{x-3}{2-3} = \frac{y-1}{5-1}$

$$\frac{x-3}{-1} = \frac{y-1}{4}, \quad -4x + 12 = y - 1$$

$$4x + y - 13 = 0$$

