

NID SCORER TEST – 1


PGDPD

Total Sections: Three
Max. Marks: 100

SECTION-I

Q-1 Choose a social problem related to ladies in the Indian society that the local television channel wishes to convey Marks:10


- Task: explain the subject on a banner.
- Task : Add title to your banner
- Task: Write a phrase for your subject banner




Banner space

Banner Phrase: _____

Q-2 Draw two objects which can be used both horizontally and vertically. Like For example a badminton racket is played in horizontal as well as vertical direction. Marks:10




Draw Here (Object-1)

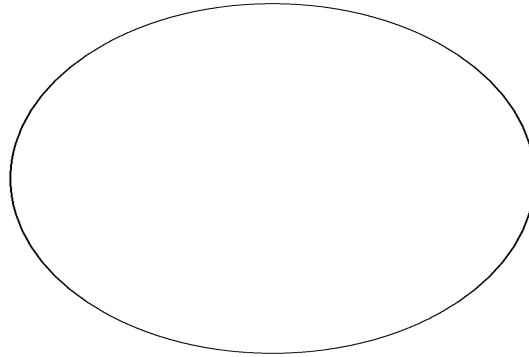


Draw Here (Object-2)

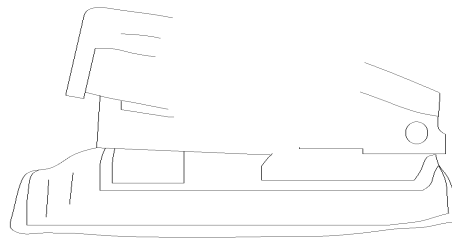
Q-3 Complete the given pattern such that it becomes an attractive table mat for an elliptical glass table in the room.

Marks:5






Q-3 Complete the objects below to produce the real object and render it with black colour only. Marks:10



Object-1



Q-5 Draw a sketch of a lady preparing tea in the kitchen in evening i.e around 5:0' clock

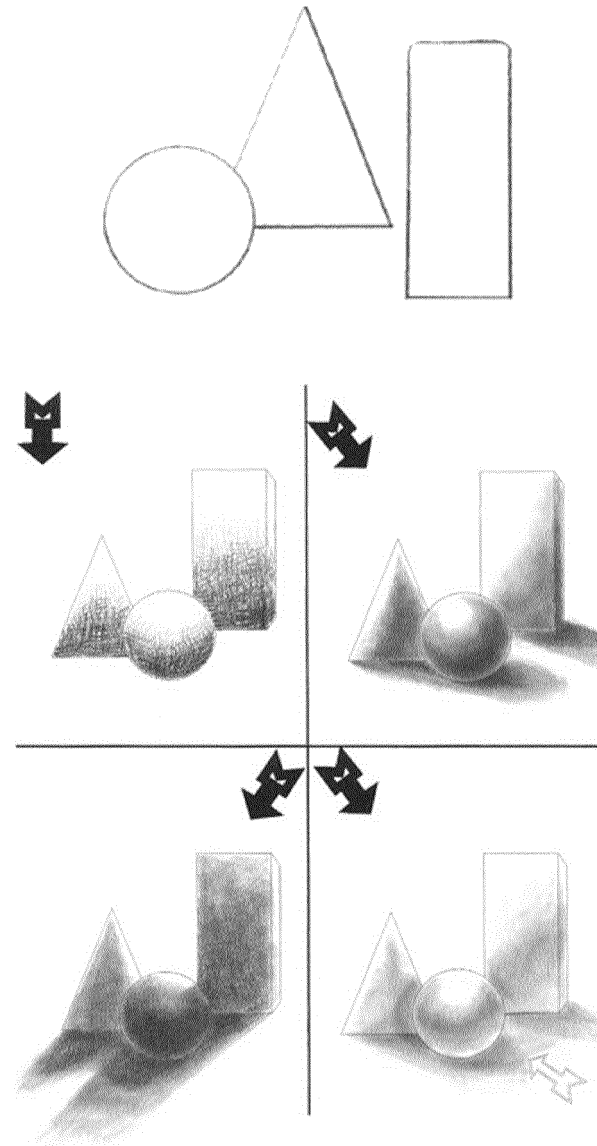
Marks:15



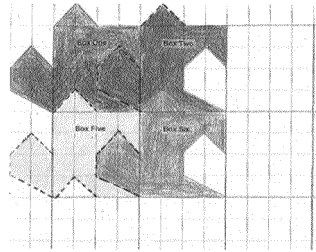
SECTION - II

Q-1 Colour the composition with primary colours; then colour the same picture as per the light falling and shadow being casted by it in four different angles

Marks: 5




Q-2 You are given here two samples of tessellations. One is very simple and the other is complex. Design another one in the space given which should be more attractive than the simple one and less complex to draw than the complex one and colour it. Marks 5



Simple

Draw here




Complex

Q-3 You are given logos on the left Write the name of the object related to the logo in the space and draw that object in the box below, Marks 15








Q-4 Write in 250 words what principles of design does the pictures below follow. After completing the write up give a title to the subject matter.(CHOSE ANY ONE) Marks 10



Q-5 chose ANY ONE theme to be drawn, explain it in five sentences. Draw and colour your composition. Marks 10

- a) Any two limbs of human body
- b) A fruit basket and water jug on the dining Table.
- C) A railway platform in one point perspective



SECTION III

Marks:5

ANSWER ANY FIVE QUESTIONS:-

Q-1 As lightness Vs Darkness, which is the correct colour pair which speaks so:-

- a) Yellow Vs Orange
- b) White Vs Black
- c) Blue Vs Purple
- d) Red Vs Green

Q-2 Three out of the given choices are subtractive primary colours. Identify the additive primary colour.

- a) Cyan
- b) Red
- c) Magenta
- d) Yellow

Q_3 Pure, brilliant colours can be mixed with their complements to create

- a) warm colours
- b) neutral colours
- c) cool colours
- d) analogous colours

Q-4 Additive colour is the colour of:-

- a) Pigment
- b) Light
- c) Objects
- d) rainbows

Q-5 What is a hue?

- a) a neutral colour
- b) the lightness or darkness of a colour
- c) a bright colour
- d) the name of a colour

Q-6 When added the seven colours of rainbow will make?

- a) black
- b) white light
- c) a mess
- d) a double rainbow