

# CEED 2010 Question paper

# Visual Perception and Design Sensitivity

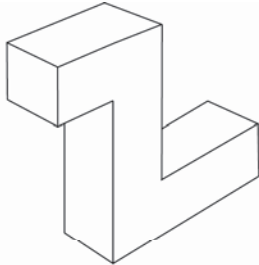
Question 1 (Answer all the questions)

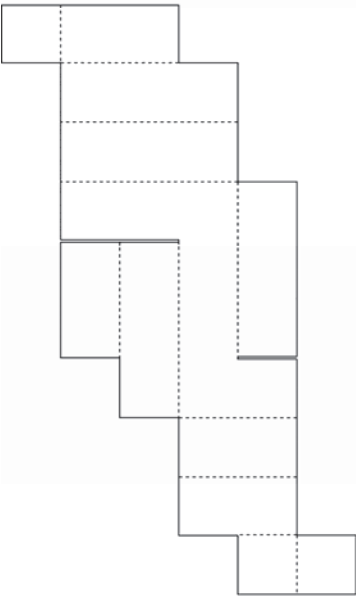
[15 Marks]

1.1

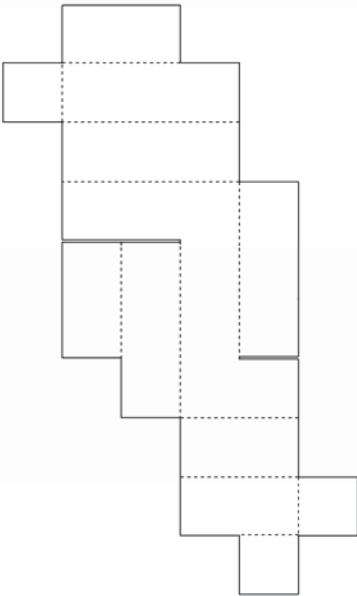
[2 Marks]

The drawing below shows a **closed box made out of cardboard**. Next to it are **three unfolded (developed) views** of the same cardboard box. Two of these options are correct. Select the **wrong** one by marking **X** in the box provided below.

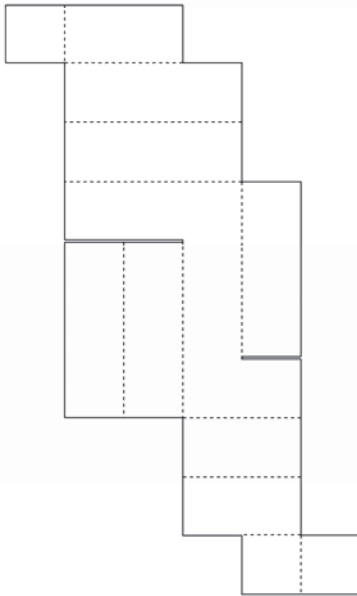




☐



☐








☐

1.2

[1 Mark]

Below are **5 images of Telephones** that were used across different time periods, placed in a random order. Write down the **correct sequence** of the telephones according to the time scale, from **past to present**, in the box provided below.

				
<b>A</b>	<b>B</b>	<b>C</b>	<b>D</b>	<b>E</b>

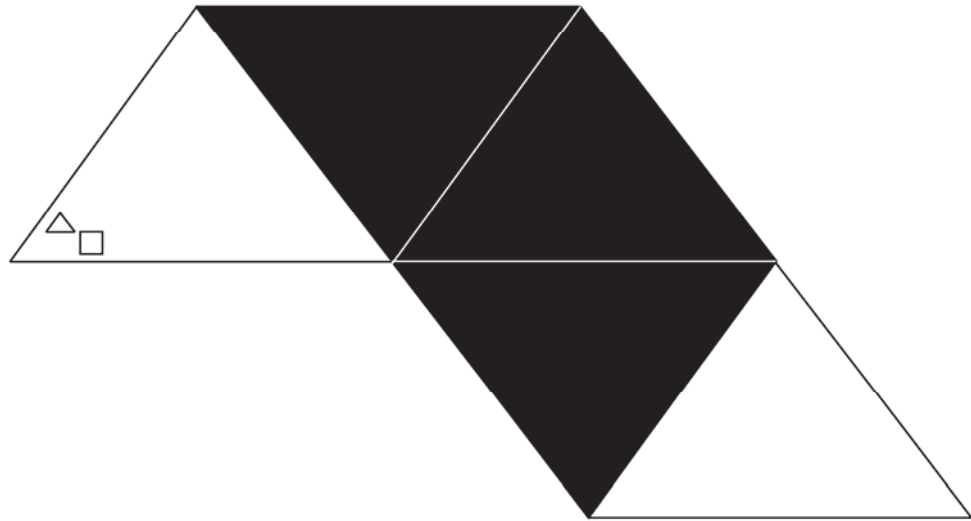
Past > Present

--	--	--	--	--

1.3

[1 Mark]

Below is an image of a **triangle with some pattern** on it. This triangle is mirrored four times as shown below. Draw the **correct position of the pattern** on the last triangle.



1.4

[2 Marks]

Below are images of **different Typefaces** belonging to different families. There are two families comprising of four letters each. **Identify** these letters and write them in the box provided.

A

C

M

H

I

D

B

Z

K

Y

J

N

Q

F

L

P

Family One:

--	--	--	--


Family Two:

--	--	--	--

1.5

[4 Marks]

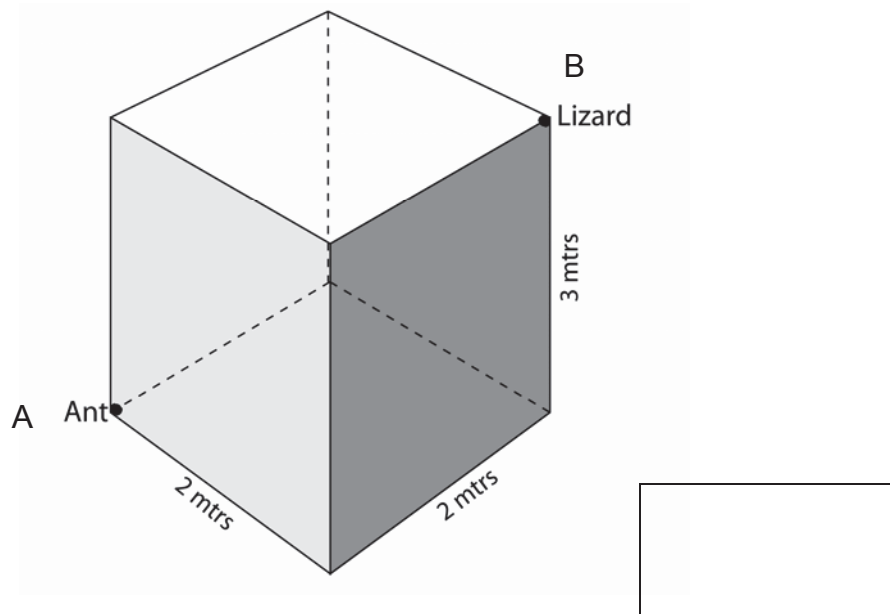
Below is an image of a **pair of Shoes**. Color the shoes to depict the following two expressions – **Angry** on the left shoe and **Friendly** on the right shoe.



1.6

[2 Marks]

Below is schematic diagram of a room 2m long, 2m wide and 3m high. An ant is at position A on the ground and a lizard is at position B on the ceiling. Calculate the **shortest distance** the lizard has to travel to eat the ant. Write the answer in the box provided.

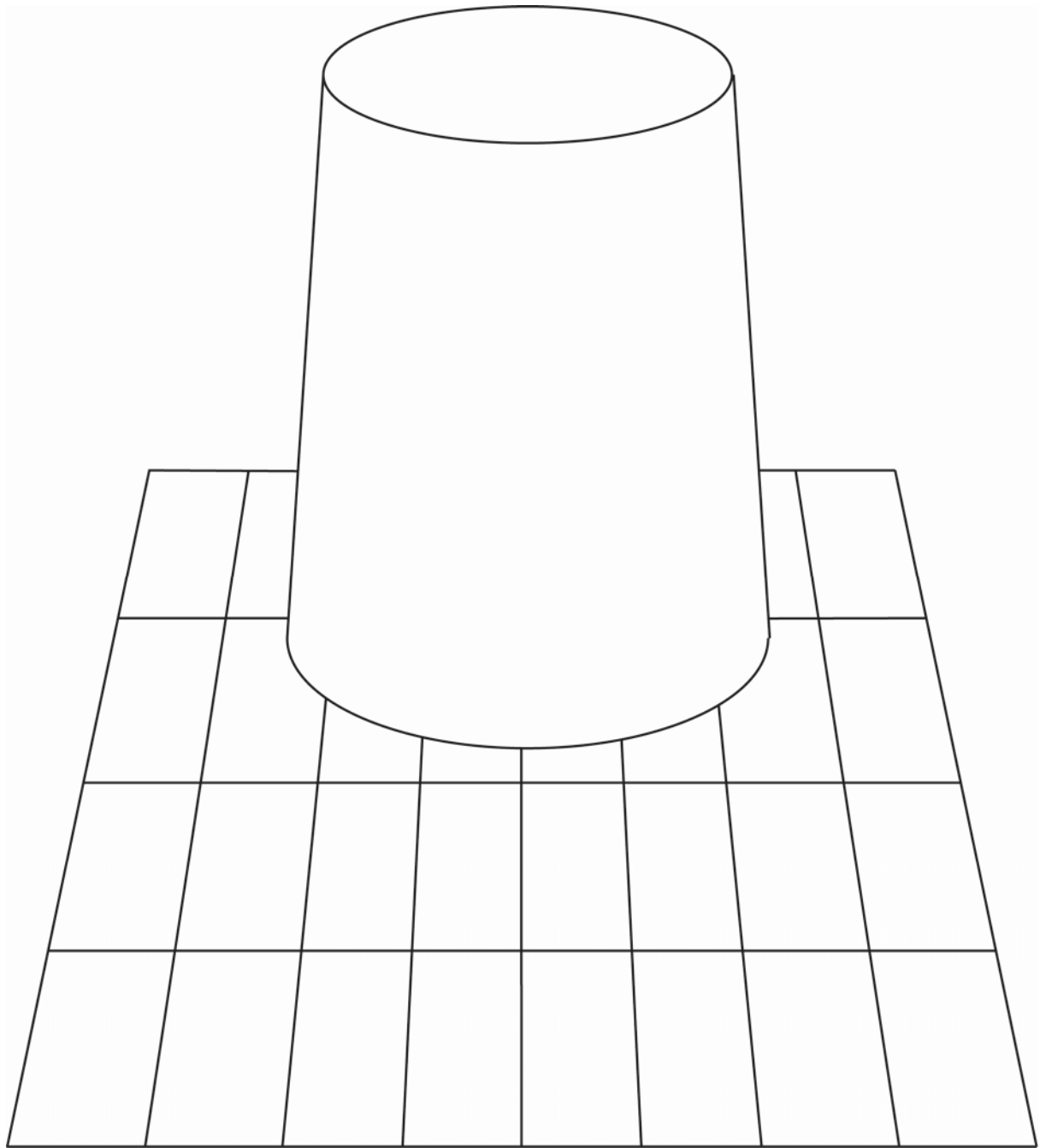


1.7

[3 marks]

Below is an image of a **reflective Steel Tumbler** kept on a table cloth with grid pattern.

**Draw the pattern** as reflected on the steel tumbler in the image provided



## Drawing Abilities and Skills

### Question 2

[20 Marks]

Illustrate in perspective, a composition with a **CUP**, **SAUCER** and a **SPOON** placed on a flat surface. The Cup is made of **Rubber**, the saucer is made of **Glass** and the spoon is made of **Wood**.